



ARMY PUBLIC SCHOOL GWALIOR

CLASS II

SESSION 2019-20

WORKSHEET



Subject: English

Assignment No. : 2

Allotment Date: 1st January

Submission Date: 15th January

Q1. Fill in the blanks with 'and' or 'but'.

(4x1=4)

(i) Gujarat _____ Punjab are both states of India.

(ii) The old man is poor, _____ he is honest.

(iii) The sitar _____ the table are Indian musical instrument.

(iv) The car overturned, _____ no one was hurt.

Q. 2. Rearrange the words and find their opposites.

(4x1=4)

(i) rowng: _____ x _____

(ii) dtyri: _____ x _____

(iii) mtpey: _____ x _____

(iv) yitd: _____ x _____

Q3. Match the following words with their meanings.

(4x1=4)

Column 'A'

Column 'B'

(i) strange

(a) thankful

(ii) grateful

(b) very different from others

(iii) inseparable

(c) try very hard

(iv) struggle

(d) always together

Q4. Complete the adjective chain.

(4x1=4)

(i) good

(ii) yellow

(iii) efficient

(iv) round

Q5. Answer the following questions in one sentence:

(2x1=2)


(i) What have you learnt from the story 'The Ant and the Duck'?

(ii) Name the national days celebrated in India.

Q6. Answer the questions:

(1X2=2)

- (i) What are the colours present in the national flag and what is the colour of the wheel
in the centre?



ARMY PUBLIC SCHOOL GWALIOR

CLASS II

SESSION 2019-20

WORKSHEET



Subject: Hindi

Assignment No. : 2

Allotment Date: 1st January

Submission Date: 15th January

प्र1 सही उत्तर पर (✓) लगाओ. (4)

1. बन्दर कैसा था ?

(अ) शरारती (ब) भोला

2. बन्दर क्या खाना चाहता था ?

(अ) रोटी (ब) फल

3. मीशा के लिए गेंद बल्ला कौन लाया था ?

(अ) पिताजी (ब) माता जी

4. रशीद लकड़ी काटने कहाँ गया था ?

(अ) जंगल (ब) ब्वग

प्र 2 समान अर्थ वाले शब्दो को मिलाओ . (4)

(क)

(ख)

(अ) मित्र

मुबारकबाद

(ब) सहायता

दोस्त

(स) दावत

मदद

(ड) बधाई

पार्टी

प्र 3 दिए गए प्रश्नों के उत्तर दो :

(4)

1. मीशा कितने रन बनाकर आउट हों गया ?

उत्तर

2. बन्दर से सभी क्या कहते थे ?

उत्तर

प्र 4. वाक्य बनाओ :

(4)

1. हरा भरा —

2. दौड़ा-दौड़ा —.....

3. खून —

4. साफ—

प्र 5. कोष्ठक में लिखे शब्दों का सही रूप भर कर वाक्य पूरे करो :

(4)

1. रशीद को रोने की आवाज दी । (सुन)

2. कोई चोट है तो दर्द होता है । (पहुँच)

3. रशीद कुल्हाड़ी चल दिया । (उठ)

4. वह लकड़ियाँ शहर जाता है । (बेंच)



ARMY PUBLIC SCHOOL GWALIOR

CLASS II

SESSION 2019-20

WORKSHEET



Subject: Mathematics

Assignment No. : 2

Allotment Date: 1st January

Submission Date: 15th January

Q.1 Fill in the blanks.

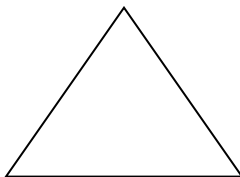
(5×1=5)

1. A circle has _____ visible sides.
2. A cube has _____ faces.
3. A Triangle has _____ sides and _____ corners.
4. All sides of a _____ are equal.
5. Opposite sides of a _____ are equal.


Q.2 Write the names of the following figures.

(5×1=5)


1.



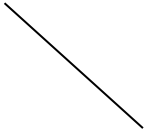
2.




3.



4.



5.



Q.3 Add

(3X1=3)

i)
$$\begin{array}{r} 645 \text{ cm} \\ + 234 \text{ cm} \\ \hline \end{array}$$

ii)
$$\begin{array}{r} 354 \text{ cm} \\ + 280 \text{ cm} \\ \hline \end{array}$$

iii)
$$\begin{array}{r} 67 \text{ m} \\ + 29 \text{ m} \\ \hline \end{array}$$

Q.4 Subtract

(2x1=2)

i)
$$\begin{array}{r} 376 \text{ m} \\ - 216 \text{ m} \\ \hline \end{array}$$

ii)
$$\begin{array}{r} 839 \text{ cm} \\ - 523 \text{ cm} \\ \hline \end{array}$$

Q.5 Word Problems


(2.5×2=5)

1. Kripal sold 5m 12 cm ribbon. Vivek sold 3 m 46 cm ribbon. How much ribbon did they sell?

Sol.

2. Rahim has 28 m long rope. He cut one piece of 14 m. Find the length of the remaining piece?

Sol.



ARMY PUBLIC SCHOOL GWALIOR

CLASS II

SESSION 2019-20

WORKSHEET



Subject: EVS

Assignment No. : 2

Allotment Date: 1st January

Submission Date: 15th January

Q.1 Fill in the blanks with the words given below:

(4×1=4)

(ship, landforms, globe, nest)

(i) Plains, mountains and valleys are _____.

(ii) A _____ is a model of the earth.

(iii) Birds generally live on trees by making their _____.

(iv) A camel is called _____ of the desert.

Q.2 Write True or False:

(4×1=4)

(i) Rose and jasmine are shrubs.

(ii) Earth has a diameter of roughly 13,000km.

(iii) Big and strong plants are called creepers.

(iv) The gas that plants give us is nitrogen.

Q.3 Match the following:

(4×1=4)

Column A

Column B

(i) Deer's baby

shed

(ii) Shelter for cows

fawn

(iii) Homes for cats

puppy

(iv) Dog's baby

basket

Q.4 Tick the correct option:

(4×1=4)

(i) Plants are _____.

a) living things

b) non- living things

(ii) We live on the _____.

a) mars

b) earth

(iii) An insect have _____.

a) Six legs

b) two legs

(iv) Animals do not eat _____.

a) Thorny plants

b) herbs

Q.5 Answer the following questions in one sentence:

(2×1=2)

(i) Name one insect eating plant?

Ans. _____

(ii) What are rodents?

Ans. _____

Q.6 Answer the following question:

(1×2=2)

(i) What would happen if earth didn't have atmosphere?

Ans. _____
