



ARMY PUBLIC SCHOOL GWALIOR
ACADEMIC SESSION 2020-2021
CLASS -IV



WORKSHEET

Subject: English

Assignment No. : 3


Allotment Date : 16 June 2020

S. NO.	QUESTIONS	MARKS	NATURE
1	Which bees make a loud buzzing sound? <hr/>	2	Information
2	What is the reason for a louder buzz?	2	Understanding

3	Mention other sound words present in our surroundings.	2	Interdisciplinary
4	Bees are excellent pollinators. They help in the growth of new seeds. How does pollination occur?	2	Analytical Skill
5	Why are bees compared to postman?	2	Critical Thinking and Problem Solving

6	Why do bees are called as the buzzing godfathers? Write their contribution to Mother Nature.	3	HOT
7	Write meanings : 1. quivering 2. lively 3. pollen ... 4. bumpy	4	Evaluation

8	Imagine that you are a bee and you are describing how you collect pollens from flowers and drop it at other places. Write a short paragraph.	3	Communication Skills



ARMY PUBLIC SCHOOL GWALIOR
CLASS -IV
ACADEMIC SESSION 2020-2021
WORKSHEET



Subject: Hindi

Assignment No. : 3

Allotment Date: 16 June 2020

क्र०	प्रश्न	अंक	प्रश्न का प्रकार
1.	<p>प्र ०१. निम्नलिखित प्रश्नों के सही उत्तर के सामने सही का निशान लगाओ :</p> <p>१ . जीटो ने टीना को जगाया क्योंकि --</p> <p>क. वह टीना से मदद चाहता था। <input type="checkbox"/></p> <p>ख. वह टीना की मदद करना चाहता था। <input type="checkbox"/></p> <p>२ . लोगों को पानी का उपयोग सोच -समझकर करना चाहिए क्योंकि --</p> <p>क. शुद्ध पानी दिनोंदिन कम होता जा रहा है। <input type="checkbox"/></p> <p>ख. पानी के बिना कोई जीवित नहीं रह सकता। <input type="checkbox"/></p> <p>३ . जल में अठखेली कौन करता है ?</p> <p>क. मछली <input type="checkbox"/></p> <p>ख. चिड़िया <input type="checkbox"/></p>	3	बोधार्थक
2.	<p>प्र ०२. निम्न शब्दों के अर्थ लिखो :</p> <p>१ . रुपहली - _____</p> <p>२ . चंचल - _____</p> <p>३ . भोर - _____</p>	3	ज्ञानार्थक
3.	<p>प्र ०३. निम्नलिखित संज्ञा शब्दों से विशेषण बनाओ :</p> <p>१ . ज़हर - _____</p> <p>२ . चमक - _____</p> <p>३ . रंग - _____</p> <p>४ . खर्च - _____</p>	4	रचनाार्थक

4.	<p>प्र ०४. निम्नलिखित शब्दों के सामान अर्थवाले शब्द लिखो :</p> <p>१. पंछी - _____</p> <p>२. जल - _____</p> <p>३. सागर - _____</p> <p>४. चंदा - _____</p>	4	सूचनात्मक
5.	<p>निम्नलिखित प्रश्नों के उत्तर लिखो -</p> <p>प्र ०१ बच्चों क्या - क्या करने को मन करता है ? उ ० १ _____</p> <p>प्र ०२. नदी का पानी ज़हरीला क्यों हो रहा था ? उ ० २. _____</p> <p>प्र ०३ बच्चे कौन -से बंधन तोड़ना चाहते होंगे ? उ ० ३ _____</p>	3	विश्लेषणात्मक
6.	<p>प्र ०६ कविता की पंक्तियाँ पूरी करो --</p> <p>(क) दूर देश रहती हैं परियाँ _____</p> <p>जादू की छड़ लिए हाथ में</p> <p>(ख) आसमान में घूमा करते _____</p> <p>गड़गड़ - गड़गड़ शोर मचाकर</p> <p>(ग) मन करता है _____</p> <p>सूरज - चंदा से बतियाते</p>	3	उच्चस्तरीय चिंतन



ARMY PUBLIC SCHOOL GWALIOR

CLASS -IV

ACADEMIC SESSION 2020-2021

WORKSHEET



Subject: Mathematics_

Assignment No.:

Allotment Date: 16 June 2020

S. NO.	QUESTIONS	MARKS	NATURE
1	Fill in the blanks: (i) The roman numeral 13 is..... (ii) The smallest 4digit number is (iii) The greatest 2 digit number is..... (iv) The sum of 911 + 54 is.....	4x1=4	Understanding
2	Write 'True' or 'False': (i) $98361 > 98754$ () (ii) $6598 - 1544 = 5054$ () (iii) The place value of 6 in 87694 is 600 () (iv) 8312 is rounded off to the nearest thousands as 9000 ()	4x1=4	HOTS
3	Tick the correct answer from the given options: (i) 50000 + 8000 + 600 + 4 is the expanded form of - (a) 50864 (b) 58604 (c) 58064 (ii) The Roman numeral for 26 is	4x1=4	Critical thinking

	<p>(a) VIXX (b) XVI (c) XXVI</p> <p>(iii) $4309 + 1982 + 1543 =$ (a) 7834 (b) 7734 (c) 7534</p> <p>(iv) The smallest 4 digit number using all the digits from (a) 3019 (b) 0139 (c) 1039</p>		
4	<p>Solve the following questions: -</p> <p>(i) Write in column and add: $5369 + 178$</p> <p>(ii) Write in column and subtract: $8356 - 2439$</p> <p>(iii) Write the Hindu Arabic numeral for XXXVI</p> <p>(iv) Write the following in expanded form: 47508</p>	4x1=4	Interdisciplinary
5	<p>Solve the following questions:</p> <p>(i) Rahul had Rs 8515 in his bank account. If he withdrew Rs 3980 for buying a carpet, how much money was left in his account.?</p> <p>(ii) There are 4089 bags of wheat and 1896 bags of sugar in a store. Find the total number of bags in the store. Write the number sentence and solution sentence.</p>	2x2=4	Problem Solving



ARMY PUBLIC SCHOOL, GWALIOR

CLASS – IV

ACADEMIC SESSION 2020-2021

WORKSHEET



Subject: EVS


Assignment No. : 3

Allotment Date: 16 June 2020

S. NO.	QUESTIONS	MARKS	NATURE
1	Fill in the blanks: (i) A----- is important for good health. (ii) ----- nutrients repair damaged parts of the body	2*1=2	Information
2	Write three healthy food habits.	3*1=3	Understanding
3	Write True or False: (i) Boiling can preserve food for a short time. (ii) Only cooked vegetables can be eaten.	2*1=2	Interdisciplinary
4	Define the terms:	2*1=2	Analytical Skill

	<p>(i) Nutrients:</p> <p>(ii) Minerals:</p>								
5	<p>Why does your mother ask you to drink milk daily?</p>	2*1=2	HOT						
6	<p>Match the following</p> <table border="0"> <tr> <td>(i) Milk</td> <td>Fats</td> </tr> <tr> <td>(ii) Rice</td> <td>Proteins</td> </tr> <tr> <td>(iii) Oil</td> <td>Carbohydrates</td> </tr> </table>	(i) Milk	Fats	(ii) Rice	Proteins	(iii) Oil	Carbohydrates	3*1=3	Critical Thinking and Problem Solving
(i) Milk	Fats								
(ii) Rice	Proteins								
(iii) Oil	Carbohydrates								
7	<p>(i) What happens to the food which is over cooked?</p>	2*2= 4	Evaluation						

	(ii) How can we preserve and store food?		
8	(i) Why is water and roughage important for us?	2*1=2	Communication Skills



ARMY PUBLIC SCHOOL GWALIOR
CLASS- IV
ACADEMIC SESSION 2020-2021
WORKSHEET




Subject: Computer

Assignment No. : 3

Allotment Date : 16 June 2020

S. NO.	QUESTIONS	MARKS	NATURE
1	<p>A. <u>Tick the correct answer</u></p> <p>a. Protects the internal electronic components from damage. RAM ALU System unit</p> <p>2..... is known as the brain of computer. Motherboard CPU CD-ROM</p> <p>3. CU and ALU are parts of CPU System unit Motherboard</p> <p>4. Speed of a CPU is measured in MHz GHz Both a. & b.</p>	0.5X4=2	Information
2	<p><u>Fill in the blanks</u></p> <p>1. CPU is also called or</p> <p>2. is a box like case which stands near the monitor.</p> <p>3. The part of CPU directs and coordinates the operations and instructions in the computer.</p> <p>4.is called primary memory.</p>	1X4=4	Understandin g

3	<u>Answer the following questions</u> a. What is motherboard? b. Name the two parts of CPU.	2X2=4	Critical Thinking and Problem Solving
----------	--	--------------	---



ARMY PUBLIC SCHOOL GWALIOR

CLASS -IV

ACADEMIC SESSION 2020-2021

WORKSHEET



Subject: Art & Craft

Assignment No. : 2

Allotment Date: 16 June 2020

S.N	QUESTIONS	MARKS	NATURE
1	Difference Between Primary, Secondary & Tertiary Colours?	2X1=2	Information
2	Write about any three types of pencils?	3X1=3	Information

3	BIRD – Outline with pencil & Colour it	5X1=3	Drawing & Colouring
----------	---	-------	------------------------



ARMY PUBLIC SCHOOL GWALIOR
CLASS - IV
ACADEMIC SESSION 2020-2021
WORKSHEET

SUBJECT: Games

Assignment No : 2

Allotment Date: 16 June 2020

S.N.	QUESTIONS	MARKS
1.	The person has to knock down the piles in how many tries? a) one b) two c) three d) four	1 x 10 = 10
2.	Piles of flat stones contain _____ stones? a) ten b) nine c) eight d) seven	
3.	In order to play this stone game you need a) A ball b) A dice c) A bat d) None of these	
4.	After first team knock the stones over, the second team will get ball and try to hit the player from opposing team a) in head b) in the back c) below their knees d) in the chest	
5.	After knocking down the stones the first team will try to _____ the pile of stone to win a) restack b) kick c) hit d) none of these	

6.	First team has to trace a circle around stones for times with their finger a) one b) two c) three d) four	
7.	The ball in hands of 2 nd team player should not remain for more than a) 10 seconds b) 60 seconds c) 30 seconds d) 45 seconds	
8.	Which of the following is not a name of 7 stone a) sitoliya b) laghori c) pitthu d) rathera	
9.	The stone has to fall outside the circle only if they fall inside the circle, then the defending team gain 1 point ? a) True b) False	
10.	These are 2 team with equal number of players a) True b) False	



ARMY PUBLIC SCHOOL GWALIOR
CLASS -IV
ACADEMIC SESSION 2020-21
WORKSHEET



Subject: Dance

Assignment No.: 2

Allotment Date: 16 June 2020

क्र.	सही विकल्प चुनकर लिखिए।	आबंटित अंक	
1.	ईश्वर से भी सबसे ऊँचा स्थान किसका होता है? (अ) गुरु (ब) शिष्य (स) मानव (द) पिता	(1x2=2)	
2.	कृष्ण भगवान किस पेड़ के नीचे बैठ कर बांसुरी बजाते थे? (अ) पीपल (ब) बरगद (स) नीम (द) कदंब	(1x2=2)	

3.	नृत्य का प्रारंभिक अभ्यास क्या है? (अ) पैर चलाना (ब) कमर चलाना (स) गर्दन (द) आँख	(1x2=2)	
4.	कृष्ण भगवान राधा के साथ कौन सा नृत्य करते थे? (अ) लास्य (ब) तांडव (स) डांडिया (द) नृत्य रास	(1x2=2)	
5.	कृष्ण अपने सखा से मिलने किस नदी किनारे जाते थे? (अ) गंगा (ब) जमुना (स) यमुना (द) कावेरी	(1x2=2)	