



# ARMY PUBLIC SCHOOL GWALIOR



## CLASS- II

### ACADEMIC SESSION 2020-2021

### WORKSHEET

Subject: English

Assignment No. : 4

Allotment Date: 15 July 2020

S. NO.	QUESTIONS	MARKS	NATURE								
1	<p><b>Complete the pairs:</b></p> <p>1. Nephew and .....</p> <p>2. .... and land lady.</p> <p>3. Tiger and .....</p> <p>4. Gander and.....</p>	(4x1=4)	Information								
2	<p><i>Match the common nouns with proper nouns:</i></p> <table><tr><td><i>Common noun</i></td><td><i>proper noun</i></td></tr><tr><td>1. country</td><td>Onam</td></tr><tr><td>2. city</td><td>Japan</td></tr><tr><td>3. festival</td><td>Mumbai</td></tr></table>	<i>Common noun</i>	<i>proper noun</i>	1. country	Onam	2. city	Japan	3. festival	Mumbai	(4x1=4)	Understanding
<i>Common noun</i>	<i>proper noun</i>										
1. country	Onam										
2. city	Japan										
3. festival	Mumbai										

	<p><i>4. toothpaste</i></p> <p style="text-align: center;"><i>Colgate</i></p>		
3	<p><i>Answer the following questions.</i></p> <p><b>(a) Which cake would you like to bake?</b></p> <p>.....</p> <p>.....</p> <p><b>(b). Name the different types of cakes as mentioned in the Lesson</b></p> <p>.....</p> <p>.....</p>	(2x2=4)	Interdisciplinary
4	<p><i>Fill in the blanks with the plurals of the given words:</i></p> <p><b>(a). We have two.....(eye)</b></p> <p><b>(b). I brush my .....(tooth) twice a day.</b></p> <p><b>(c) He sat seven.....(candle).on the cake.</b></p> <p><b>(d) ..... ..(Farmer) have many .....(ox).</b></p>	(4x1=4)	Analytical Skill
5	<p><b>Match the following words with their meanings:</b></p>	(4x1=4)	Critical

	<b>COLUMN A.</b>	<b>COLUMN B</b>	<b>Thinking and Problem Solving</b>
	<b>(a) recipe</b>	<b>acted according to</b>	
	<b>(b) followed</b>	<b>methods on how to prepare</b>	
	<b>dish</b>		
	<b>(c) delicious</b>	<b>sweet smell</b>	
	<b>(d) aroma</b>	<b>tasty</b>	



# ARMY PUBLIC SCHOOL GWALIOR



## CLASS- II

### ACADEMIC SESSION 2020-2021

#### WORKSHEET

Subject: Hindi

Assignment No. : 4

Allotment Date: 15 July 2020

संख्या	प्रश्नउत्तर	अंक	प्रकृति
प्र.1	एक से अनेक ( बहुवचन ) बनाओ । 1 करेला – _____ 2 खीरा _____ 3 झूला _____ 4 सब्जी _____	4	बोधात्मक
प्र.2	निम्न शब्दों के अर्थ लिखो । 1 बगिया _____ 2 सुहावना _____ 3 त्योहार _____ 4 उपहार _____	4	सूचनापरक
प्र.3	दिए गए प्रश्नों के उत्तर दो :  1. बगीचे में क्या क्या लगा था ? उत्तर ..... ..... .....  2. रिमझिम खुश क्यों है? उत्तर ..... .....	4	अंतः विशयात्मक

	.....										
प्र.4	<p>सही शब्द चुनकर वाक्य पूरे करो –</p> <p>1 रिमझिम सुबह से ही चहकती ..... रही है। ( घूम / टहल )</p> <p>2 रिमझिम ने भैया को मिठाई .....। ( खिलाई / पिलाई )</p>	2	गहनसोच और समस्यासमाधान								
प्र.5	<p>1 " अकडू गोलू " कहानी में बैगन का नाम गोलू और टमाटर का नाम लालू क्यों रखा गया ?</p> <p>उत्तर .....</p> <p>.....</p> <p>2" जैसे को तैसा " कहानी से हमें क्या शिक्षा मिली ?</p> <p>उत्तर .....</p> <p>.....</p>	2	उच्चस्तरीय चिंतन								
प्र.6	<p>सामान अर्थ वाले शब्दों को रेखा खींचकर मिलाओ –</p> <table style="width: 100%; border: none;"> <tr> <td style="width: 50%;">इंतजार</td> <td style="width: 50%;">प्रेम</td> </tr> <tr> <td>प्यार</td> <td>अंदर</td> </tr> <tr> <td>उपहार</td> <td>प्रतीक्षा</td> </tr> <tr> <td>भीतर</td> <td>तोहफा</td> </tr> </table>	इंतजार	प्रेम	प्यार	अंदर	उपहार	प्रतीक्षा	भीतर	तोहफा	4	विश्लेषणात्मक
इंतजार	प्रेम										
प्यार	अंदर										
उपहार	प्रतीक्षा										
भीतर	तोहफा										



# ARMY PUBLIC SCHOOL GWALIOR

## CLASS- II

### ACADEMIC SESSION 2020-2021


#### WORKSHEET



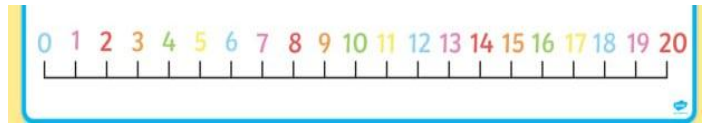
Subject: Mathematics

Assignment No. : 4

Allotment Date: 15 July 2020

S. NO.	QUESTIONS	MARKS	NATURE
1	<p>Fill in the blanks:-</p> <ul style="list-style-type: none"><li>• 2 groups of 3 butterflies= <math>2 \times \underline{\quad}</math></li><li>• 3 groups of 5 flowers = <math>\underline{\quad} \times 5</math></li><li>• <math>4+4+4+4+4 = 5 \times \underline{\quad}</math></li></ul>	$3 \times 1 = 3$	Understanding
2	<p>Use number line to find:</p> <p>(a) <math>6 \times 4 = \underline{\quad}</math></p> 	$2 \times 2 = 4$	HOTS

(b)  $3 \times 6 = \underline{\quad}$



3

Match the correct answer:

(a)  $7+7+7$

$5 \times 6$

(b)  $4+4$

$3 \times 7$

(c)  $6+6+6+6+6$

$2 \times 4$

$3 \times 1 = 3$

Critical  
thinking

4

(a) There are 75 puppies in Mr. Victor's store. He found homes for 39 of them. How many puppies are still in his store?

Sol:

(b) There were 62 fish in the store in the morning. Mr. Victor counted only 39 fish in the evening. How many

$2 \times 2.5 = 5$

Interdisciplinary

	<p><b>were sold out?</b></p> <p><b>Sol:</b></p>		
<b>5.</b>	<p><b>Multiply:</b></p> <p>(a) <math>5 \times 4 = \underline{\hspace{2cm}}</math></p> <p>(b) <math>8 \times 0 = \underline{\hspace{2cm}}</math></p> <p>(c) <math>9 \times 9 = \underline{\hspace{2cm}}</math></p> <p>(d) <math>10 \times 8 = \underline{\hspace{2cm}}</math></p> <p>(e) <math>7 \times 4 = \underline{\hspace{2cm}}</math></p>	$5 \times 1 = 5$	<b>Problem solving</b>





# ARMY PUBLIC SCHOOL GWALIOR

## CLASS- II

### ACADEMIC SESSION 2020-2021

#### WORKSHEET




Subject: EVS

Assignment No. : 4

Allotment Date: 15 July 2020

S. No.	QUESTIONS	MARKS	NATURE
1	<p><b>Fill in the blanks</b></p> <p>(i) We find shopkeepers in a _____ .</p> <p>(ii) We keep our money safe in a _____ .</p> <p>(iii) _____ is place of worship for Hindus.</p> <p>(iii) The _____ maintains law and order in the Neighbourhood.</p>	4	Information
2	<p><b>Write True or False:</b></p> <p>(a) We call 100 for the Police. _____</p> <p>(b) A school helps us to gain knowledge. _____</p>	4	Understanding

	<p>(c) We send letters to hospital _____</p> <p>(d) A green grocer sells vegetable. _____</p>		
3	<p>Draw any two pictures of neighbourhood services.</p>          	4	Interdisciplinary
4	<p>Answer the questions in one sentence</p> <p>(i) Who looks after you in a hospital?</p> <p>Ans. _____</p>	2	Analytical Skill

	<hr/> <p><b>(ii) Which shop sells pencil and erasers?</b></p> <p><b>Ans.</b> _____</p> <hr/> <hr/>		
<b>5</b>	<p><b>Answer the following questions</b></p> <p><b>(i) Where do we go when we need to buy vegetables?</b></p> <p><b>Ans.</b> _____</p> <hr/> <p><b>(ii) What is speed post?</b></p> <p><b>Ans.</b> _____</p> <hr/>	<b>6</b>	<b>HOTS</b>

**(iii) Whom do we call if there is a fire?**

**Ans.** \_\_\_\_\_

\_\_\_\_\_

\_\_\_\_\_.



**ARMY PUBLIC SCHOOL GWALIOR**



**CLASS- II**

**ACADEMIC SESSION 2020-2021**

**WORKSHEET**

Subject: Computer Science

Assignment No. : 3

Allotment Date: 15 July 2020

S. NO	QUESTIONS	MARKS	NATURE
1	<p><b><u>Tick the correct answer</u></b></p> <p>1. Computers are used in ..... for preparing results. Hospitals Banks Schools</p> <p>2. An ..... is used to withdraw money. ATM Mobile None of these</p> <p>3. ....use computers in preparing medical reports. Teachers Doctors Engineers</p> <p>4.....use computers for making design of buildings. Doctors Architects Scientists</p>	4X1=4	Information

2	<p><b><u>Fill in the blanks by unscrambling the word.</u></b></p> <p>1. In school, computer is used for preparing</p> <table border="1" data-bbox="352 208 1056 246"> <tr> <td>E</td> <td>L</td> <td>S</td> <td>R</td> <td>T</td> <td>U</td> </tr> </table> <p>2. Computer is used for booking ticket at</p> <table border="1" data-bbox="325 353 1056 392"> <tr> <td>R</td> <td>R</td> <td>A</td> <td>P</td> <td>T</td> <td>I</td> <td>O</td> </tr> </table> <p>3. You can withdraw money from</p> <table border="1" data-bbox="352 499 957 537"> <tr> <td>N</td> <td>A</td> <td>K</td> <td>B</td> </tr> </table> <p>4. Computer helps a doctor to diagnose</p> <table border="1" data-bbox="325 645 1056 683"> <tr> <td>A</td> <td>S</td> <td>E</td> <td>D</td> <td>S</td> <td>I</td> <td>E</td> </tr> </table>	E	L	S	R	T	U	R	R	A	P	T	I	O	N	A	K	B	A	S	E	D	S	I	E	4X1=4	Analytical Skill
E	L	S	R	T	U																						
R	R	A	P	T	I	O																					
N	A	K	B																								
A	S	E	D	S	I	E																					
2	<p><b><u>Identify the following pictures.</u></b></p> <p>1. _____</p> <div data-bbox="336 1189 943 1715" data-label="Image"> </div>	2X1=2	Understanding																								



# ARMY PUBLIC SCHOOL GWALIOR

## CLASS- II

### ACADEMIC SESSION 2020-2021

#### WORKSHEET





Subject: Art and Craft

Assignment No. : 3

Allotment Date: 15 July 2020

S.N	QUESTIONS	MARKS	NATURE
1	<p>Where is Warli painting found?</p> <p>a. Rajasthan</p> <p>b. Maharashtra</p> <p>c. Tamil Nadu</p>	2X1=2	Information
2	<p>Warli painting predominantly uses a set of _____.</p> <p>a. Geometric shapes (circle, triangle, and a square).</p> <p>b. Colors (Red, Blue, and Green)</p> <p>c. Themes and Scenes from Puranas</p>	2X1=2	Information

3	<p>What kind of paintbrush is used in Warli paintings?</p> <p>a. Nylon brush</p> <p>b. Acrylic brush</p> <p>c. Bamboo stick</p>	2X1=2	Information
4.	<p>Warli artists traditionally use _____ as the backdrop for their paintings.</p> <p>a. Cotton</p> <p>b. Clay and mud surfaces</p> <p>c. Canvas</p>	2X1=2	Information
5.	<p>Choose the picture of Warli art</p> <p>a. </p> <p>b. </p>	2X1=2	Knowledge





**ARMY PUBLIC SCHOOL GWALIOR**  
**CLASS –II**  
**ACADEMIC SESSION 2020-21**  
**WORKSHEET**

**Subject: Physical Education (Sports)**

**Assignment No. : 3**

**Allotment Date: 15 July 2020**

<b>S. No.</b>	<b>Questions</b>	<b>Marks</b>
<b>1</b>	Which of the following are the modes of jumping and hopping:  1. On the spot 2. With movement 3. Both 1 and 2 4. None of these	
<b>2</b>	Which of the following are/ is the group activities while jumping :  1. Jump along a line and run 2. Jump over rope places on ground 3. Both 1 and 2 4. None of these	
<b>3</b>	After on the spot ( both leg) jumping which foot will touch the ground :  1. Right foot 2. Left foot 3. Both foot 4. None of these	
<b>4</b>	What can be the safety measures while jumping :  1. Keep the distance from other players 2. Pushing and pulling 3. Close your eyes while playing 4. All of the above	
<b>5</b>	What are the equipment's used during throwing and catching :  1. Balls 2. Bean bags 3. Rings 4. All of the above	
<b>6</b>	Which of the following can be the safety measure :	

	<ol style="list-style-type: none"><li>1. Lightweight balls</li><li>2. Heavy sacks</li><li>3. Rough play</li><li>4. None of these</li></ol>	
	<b>Yes and No</b>	
<b>7</b>	Can we play throwing and catching at home?  a) Yes b) No	
<b>8</b>	Do we need cones for play jumping and hoping?  a) Yes b) No	
<b>9</b>	Can we play these games jumping and hoping alone?  a) Yes b) No	
<b>10</b>	Do we has to divide teams (throwing and catching) in groups  a) Yes b) No	



# ARMY PUBLIC SCHOOL GWALIOR

## CLASS- II

### ACADEMIC SESSION 2020-2021

#### WORKSHEET



Subject: Dance

Assignment No. : 3

Allotment Date: 15 July 2020

क्र.	सही विकल्प चुनकर लिखिए।	अंक	प्रकृति
1.	विष्णु भगवान के हाथ में क्या है?  (अ) चक्र  (ब) बांसुरी  (स) माला	1×2= 2	बोधात्मक
2.	किस भगवान के शीश से गंगा निकलती है?  (अ) कृष्ण भगवान  (ब) विष्णु भगवान  (स) शंकर भगवान	1×2= 2	सूचनापरक
3.	विद्या की देवी कौन है?  (अ) लक्ष्मी  (ब) सरस्वती  (स) गंगा	1×2= 2	अंतःविषयात्मक
4.	भगवन राम के हाथ में क्या है?	1×2= 2	गहन सोच और

	(अ) धनुष (ब) गदा (स) शंख		समस्या समाधान
5.	कृष्ण भगवान के हाथ में क्या है? (अ) वीणा (ब) गदा (स) चक्र	$1 \times 2 = 2$	उच्चस्तरीय चिंतन