



ARMY PUBLIC SCHOOL GWALIOR

CLASS- I

ACADEMIC SESSION 2020-2021

WORKSHEET



Subject: English

Assignment No. : 3

Allotment Date: 15 July 2020

S.N	QUESTIONS	MARK	NATURE
		S	
1	Fill in the blanks by choosing the correct words from the brackets (i) We use 'he' for a boy or(woman/man). (ii) We use 'it' for a place ,....., (animal/ boy) or thing.	2X1=2	Information
2	Complete the following sentences with He /She /It / They: (i)is my mother. (ii)are my parents. (iii).....is an alligator.	3X1=3	Understanding

<p>7</p>	<p>Answer the following questions :</p> <p>(i) Which is Tia's favourite toy?</p> <hr/> <hr/> <p>(ii) Who's beach ball is very colourful?</p> <hr/> <hr/>	<p>2X1=2</p>	<p>Evaluation</p>
<p>8</p>	<p>Complete the following word chains. Make a new word with the last letter of each word</p> <p>(i) Sharp - pond- -</p> <p>(ii) Dream - men- -</p> <p>(iii) Egg - goat - -</p>	<p>3X1=3</p>	<p>Communication Skills</p>



ARMY PUBLIC SCHOOL GWALIOR



CLASS- I

ACADEMIC SESSION 2020-2021



WORKSHEET

Subject: Hindi

Assignment No. : 3

Allotment Date: 15 July 2020

संख्या	प्रश्नउत्तर	अंक	प्रकृति
प्र.1	<p>सही वाक्यों के सामने सही (✓) व गलत के सामने गलत (×) का निशान लगाएं।</p> <p>क. अमिता का इनाम निकला था। ()</p> <p>ख. बादल धरती पर छा गया। ()</p> <p>ग. डाकिया मोटरसाइकिल पर आया। ()</p> <p>घ. निखिल झटपट पकोड़े लाया। ()</p>	1x4=4	बोधोत्प्रेरक
प्र 2	<p>‘इ’ की मात्रा लगाकर सही शब्द बनाओ।</p> <p>क. ----सतार</p> <p>ख. ----कताब</p> <p>ग. त----कया</p> <p>घ. बा----रश</p>	1x4=4	सूचनापरक
प्र-3	<p>बहार कौन आया था ?</p> <hr/> <hr/> <p>डाकिया क्या लाया था ?</p> <hr/> <hr/>	2x1=2	अंतःविषयात्मक

<p>प्र-4</p>	<p>दिए गए चित्रों के नाम लिखो :-</p> <div style="display: flex; justify-content: space-around; align-items: center;"> <div style="text-align: center;">  <p>-----</p> </div> <div style="text-align: center;">  <p>-----</p> </div> </div>	<p>2x1=2</p>	<p>गहन सोच और समस्या समाधान</p>
<p>प्र-5</p>	<p>अक्षरों के उस मेल को क्या कहते हैं जिसका कोई अर्थ हो ?</p> <hr/>	<p>1x2=2</p>	<p>उच्चस्तरीय चिंतन</p>
<p>प्र-6</p>	<p>क. विशेष ध्वनि अनुस्वार से कोई भी दो शब्द बनाकर लिखो । -----</p> <p>ख. विशेष ध्वनि विसर्ग से कोई भी दो शब्द बनाकर लिखो । -----</p>	<p>2x2=4</p>	<p>विश्लेषणात्मक</p>
<p>प्र-7</p>	<p>क. किसका इनाम निकला था ?</p>	<p>1x2=2</p>	<p>भाषाई कौशल</p>



ARMY PUBLIC SCHOOL GWALIOR



CLASS- I

ACADEMIC SESSION 2020-2021

WORKSHEET

Subject: Mathematics

Assignment No. : 3

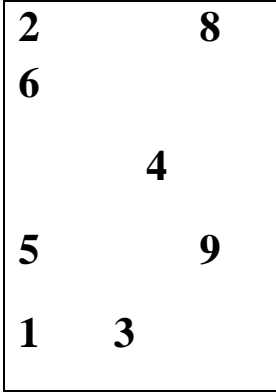
Allotment Date: 15 July 2020

S. NO.	QUESTIONS	MARKS																				
1	Write the number names of the following : (i) 11 = _____ (ii) 15 = _____	2x1=2																				
2	Arrange the numbers from the board in Ascending Order <table border="1" data-bbox="196 1294 472 1630"><tr><td>2</td><td>8</td><td>6</td></tr><tr><td></td><td>7</td><td></td></tr><tr><td>5</td><td></td><td>9</td></tr><tr><td>1</td><td>3</td><td></td></tr></table> <table border="1" data-bbox="196 1742 1066 1854"><tr><td></td><td></td><td></td><td></td><td></td><td></td><td></td><td></td></tr></table>	2	8	6		7		5		9	1	3										2x1=2
2	8	6																				
	7																					
5		9																				
1	3																					

3

Arrange the numbers from the board in descending Order

2x1=2





--	--	--	--	--	--	--	--

4

Add the objects and fill in the space provided .

3X1=3





shutterstock.com • 201425834

shutterstock.com • 201425834

(ii)

+



shutterstock.com • 201425834

.....

5

Count the objects and encircle the correct number :

2X1=2

(i)



7 9 8 10

(ii)



16

14

10

15

6

Fill in the placeholders

2X1=2



(i)

shutterstock.com • 201425834

=




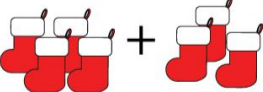



(ii)



=



7	<p>Write the numbers that comes before:</p> <p>(i) _____ 13</p> <p>(ii) _____ 15</p>	2x1=2
8	<p>Add the objects and fill in the space provided and tell.</p> <p>Add the Christmas items.</p> <p>1.  + = _____</p> <p>2.  + = _____</p> <p>3.  + = _____</p> <p>4.  + = _____</p> <p>5.  + = _____</p>	5x1=5



ARMY PUBLIC SCHOOL GWALIOR



CLASS- I

ACADEMIC SESSION 2020-2021

WORKSHEET

Subject: EVS

Assignment No. : 3

Allotment Date: 15 July 2020

S.N	QUESTIONS	MARKS	NATURE
1	Fill in the blanks by choosing the correct options : a) All members of a family have a common (first name / surname) b) Uncle's son is known as.....(brother/ cousin)	2X1=2	Information
2	Name any three parts of a house . a) _____ b) _____ c) _____	3X1=3	Understanding

3	<p>What is the use of a door in the house ?</p> <p>Ans _____.</p> <hr/>	1X2=2	Interdisciplinary
4	<p>Write true (T) or false (F) against the following statements:</p> <p>(i) A roof protects us from traffic. <input type="checkbox"/></p> <p>(ii) We make a house into a home with love. <input type="checkbox"/></p> <p>(iii) We all live in a family . <input type="checkbox"/></p>	3X1=3	Analytical Skill

<p>5</p>	<p>Choose the correct option:</p> <p>(i) Father's grandfather is called _____.</p> <p>a) father <input type="checkbox"/> b) grandfather c) <input type="checkbox"/> nest <input type="checkbox"/></p> <p>(ii) We use a _____ to make food.</p> <p>a) dining room <input type="checkbox"/> b) kitchen <input type="checkbox"/> c) bedroom <input type="checkbox"/></p>	<p>2X1=2</p>	<p>Critical</p> <p>Thinking and</p> <p>Problem</p> <p>Solving</p>
<p>6</p>	<p>Q 1. Write two duties your father performs for the family.</p> <p>Ans</p> <p>Q2. Write two duties you performs for your family.</p> <p>Ans</p>	<p>1X2=2</p>	<p>HOT</p>
	<p>Fill in the blanks:-</p>	<p>3X1=3</p>	<p>Evaluation</p>

<p>7</p>	<p>(a) _____ room is used to entertain our guests.</p> <p>(b) _____ let fresh air into a house .</p> <p>(c) A house has a roof ,walls, _____ and windows.</p>		
<p>8</p>	<p>Write your address properly as per the given format.</p> <p>House No.</p> <p>Colony/ Road / Sector</p> <p>City</p> <p>State</p>	<p>3X1=3</p>	<p>Communication Skills</p>



ARMY PUBLIC SCHOOL GWALIOR



CLASS- I

ACADEMIC SESSION 2020-2021


WORKSHEET

Subject: Computer Science

Assignment No. : 3

Allotment Date: 15 July 2020

S. NO	QUESTIONS	MARKS	NATURE
1	<p><u>Tick the correct answer</u></p> <p>1. A monitor looks like ascreen. CPU Paint Tv</p> <p>2. The buttons on a keyboard are known as..... Keys Cursor Pointer</p> <p>3. A computer mouse has buttons. Four Two Three</p> <p>4. CPU is theof the computer. Brain Heart Liver</p>	4X1=4	Information

2	<p><u>State True or false:</u></p> <ol style="list-style-type: none">1. A monitor is used to see cartoons. ()2. A keyboard has small buttons called keys. ()3. CPU looks like a TV. ()4. A mouse is used to move the mouse pointer on the screen. ()	4X1=4	Analytical Skill
2	<p><u>Identify the following pictures.</u></p> <p>1. _____</p> 	2X1=2	Understanding



ARMY PUBLIC SCHOOL GWALIOR



CLASS- I

ACADEMIC SESSION 2020-2021



WORKSHEET

Subject: Art and Craft

Assignment No. : 3

Allotment Date: 15 July 2020

S.N	QUESTIONS	MARKS	NATURE
1	<p>Where is Warli painting found?</p> <p>a. Rajasthan</p> <p>b. Maharashtra</p> <p>c. Tamil Nadu</p>	2X1=2	Information
2	<p>Warli painting predominantly uses a set of _____.</p> <p>a. Geometric shapes (circle, triangle, and a square).</p> <p>b. Colors (Red, Blue, and Green)</p> <p>c. Themes and Scenes from Puranas</p>	2X1=2	Information

3	<p>What kind of paintbrush is used in Warli paintings?</p> <p>a. Nylon brush</p> <p>b. Acrylic brush</p> <p>c. Bamboo stick</p>	2X1=2	Information
4.	<p>Warli artists traditionally use _____ as the backdrop for their paintings.</p> <p>a. Cotton</p> <p>b. Clay and mud surfaces</p> <p>c. Canvas</p>	2X1=2	Information
5.	<p>Choose the picture of Warli art</p> <p>a. </p> <p>b. </p>	2X1=2	Knowledge



ARMY PUBLIC SCHOOL GWALIOR
CLASS –I
ACADEMIC SESSION 2020-21
WORKSHEET

Subject: Physical Education (Sports)

Assignment No. : 3

Allotment Date: 15 July 2020

S. No.	Questions	Marks
1	Which of the following are the modes of jumping and hopping: 1. On the spot 2. With movement 3. Both 1 and 2 4. None of these	
2	Which of the following are/ is the group activities while jumping : 1. Jump along a line and run 2. Jump over rope places on ground 3. Both 1 and 2 4. None of these	
3	After on the spot (both leg) jumping which foot will touch the ground : 1. Right foot 2. Left foot 3. Both foot 4. None of these	
4	What can be the safety measures while jumping : 1. Keep the distance from other players 2. Pushing and pulling 3. Close your eyes while playing 4. All of the above	
5	What are the equipment's used during throwing and catching : 1. Balls 2. Bean bags 3. Rings 4. All of the above	
6	Which of the following can be the safety measure : 1. Lightweight balls	

	2. Heavy sacks 3. Rough play 4. None of these	
	Yes and No	
7	Can we play throwing and catching at home? a) Yes b) No	
8	Do we need cones for play jumping and hoping? a) Yes b) No	
9	Can we play these games jumping and hoping alone? a) Yes b) No	
10	Do we has to divide teams (throwing and catching) in groups a) Yes b) No	



ARMY PUBLIC SCHOOL GWALIOR

CLASS- I

ACADEMIC SESSION 2020-2021

WORKSHEET



Subject: Dance

Assignment No. : 3

Allotment Date: 15 July 2020

क्र.	सही विकल्प चुनकर लिखिए।	अंक	प्रकृति
1.	विष्णु भगवान के हाथ में क्या है? (अ) चक्र (ब) बांसुरी (स) माला	1×2= 2	बोधात्मक
2.	किस भगवान के शीश से गंगा निकलती है? (अ) कृष्ण भगवान (ब) विष्णु भगवान (स) शंकर भगवान	1×2= 2	सूचनापरक
3.	विद्या की देवी कौन है? (अ) लक्ष्मी (ब) सरस्वती	1×2= 2	अंतःविषयात्मक

	(स) गंगा		
4.	भगवन राम के हाथ में क्या है? (अ) धनुष (ब) गदा (स) शंख	1×2= 2	गहन सोच और समस्या समाधान
5.	कृष्ण भगवान के हाथ में क्या है? (अ) वीणा (ब) गदा (स) चक्र	1×2= 2	उच्चस्तरीय चिंतन