



# ARMY PUBLIC SCHOOL GWALIOR



## CLASS VI

### SESSION 2019-20

#### WORKSHEET

Subject: English

Assignment No. : 4

S. NO.	QUESTIONS	MARKS	NATURE
1	You have lost your library card. Write an application to the librarian of your school to issue you a new card.	4	Information
2	Read the given extracts and answer the questions. Whatif I'm dumb in school? Whatif they've closed the swimming-pool? Whatif I get beat up? Whatif there's poison in my cup? (i) Who is the speaker in the poem? (ii) When do strange questions strike the poet? (iii) What does the expression "Whatif" means?	1x3=3	Understanding
3	Bring out the relevance/significance of the banyan tree in the title of Ruskin Bond's story, "The Banyan Tree."	4	HOT
4	(i) Tick the correct option to complete the sentences. (a) The merchant (set up/ set out) his own trading company. (b) The driver stopped to (fill up/ get up) the fuel tank of the bus. (ii) Read the following sentences and add <u>adverb</u> in the correct place. (a) She should reply back. (soon) (b) Could you close the door? (kindly) (iii) Fill in the blank with <u>abstract noun</u> made from the	2x3=6	Interdisciplinary

	<p>word in the bracket.</p> <p>(a) Our _____ (happy) knew no bonds when India won the match.</p> <p>(b) Geeta's _____ (shy) held her back from participating in the debate.</p>		
<b>5</b>	Imagine you are passing through a desert. Write a paragraph on what you see and hear? (80-100 words)	<b>5</b>	Analytical Skill
<b>6</b>	On your way to school you helped a blind old man to cross the road. Write a diary entry to express your feelings.	<b>4</b>	Critical Thinking and Problem Solving
<b>7</b>	<p>(i) What went wrong when the tortoises, snake and lizards left the forest?</p> <p>(ii) Was the old woman's gift to Vijay Singh eccentric? Why?</p>	<b>2x2=4</b>	Evaluation



## ARMY PUBLIC SCHOOL GWALIOR

### CLASS VI

### SESSION 2019-20

### WORKSHEET




Subject: Hindi

Assignment No. : 4

S. NO.	QUESTIONS	MARKS	NATURE
1	अपने बड़े भाई के विवाह में शामिल होने के लिए मित्र को पत्र लिखिए। पुस्तक विक्रता को पुस्तक मँगवाने के लिए पत्र लिखिए।	4	Information
2	बढ़ती जनसंख्या ने अनेक प्रकार की समस्याओं को जन्म दिया है—रोटी, कपड़ा, मकान की कमी, बेरोज़गारी, निरक्षता, कृषि एवं उद्योगों के उत्पादनों की कमी आदि। हम जितनी अधिक उन्नती करते हैं या विकास करते हैं, जनसंख्या उसके अनुपाद में बढ़ जाती है। बढ़ती जनसंख्या के समक्ष हमारा विकास कम रह जाता है और विकास कार्य दिखाई नहीं देता। बढ़ती जनसंख्या के समक्ष सभी सरकारी प्रयास असफल दिखाई देते हैं। कृषि विकास और औद्योगिक विकास बढ़ती जनसंख्या के सामने नगण्य सिद्ध हो रहे हैं। इन सभी बातों को ध्यान में रखते हुए जनसंख्या वृद्धि के नियंत्रण की अति आवश्यकता है। इसके बिना विकास के लिए किए गए सभी प्रकार के प्रयत्न अधूरे रह जायेंगे। 1. बढ़ती जनसंख्या से किसमें कमी आई है? 2. जनसंख्या बढ़ने से किन चीजों में बढ़ोत्तरी हुई है? 3. हमारा विकास कार्य दिखाई नहीं देता है क्योंकि— 4. बढ़ती जनसंख्या के सामने कौन से प्रयास असफल दिखाई देते हैं? 5. 'नगण्य' शब्द का सही अर्थ क्या है?	5	Understanding
3	बांस के तोड़ने से उनके सामान बनते तक की पूरी प्रक्रिया अपने शब्दों में लिखिए।	5	HOT
4	उचित विराम चिन्हों का प्रयोग कीजिए— 1.शास्त्री जी ने कहा जय जवान जय किसान 2.वह क्या टी.वी. है निम्न मुहावरों का अर्थ लिखिए— 1.पेट में घुसना 2.कोल्हू का बैल निम्न लोकोक्तियों के अर्थ लिखिए— 1.एक पंथ दो काज। 2.काला अक्षर भैंस बराबर।	6	Interdisciplinary
6	निम्नलिखित विषय में से किसी एक पर अनुच्छेद लिखिए— सूर्योदय का दृश्य	4	Critical Thinking and Problem Solving

	मोबाइल का सुख		
7	निम्न प्रश्नों के उत्तर लिखिए:- 1.बॉस की बुनाई मानव के इतिहास में कब आरंभ हुई होगी? 2.केशव ने श्यामा से चिथड़े, टोकरी और दाना-पानी मँगवाकर कार्निस पर क्यों रखे थे? 3.हेलेन की प्रकृति की किन चीज़ों को छूकर और सुनकर पहचान लेती थीं? पाठ के आधार पर इसका उत्तर लिखो।	6	Evaluation



## ARMY PUBLIC SCHOOL GWALIOR

### CLASS VI

### SESSION 2019-20





### WORKSHEET



Subject: Sanskrit

Assignment No. : 4

S. NO.	QUESTIONS	MARKS	NATURE
1	प्रश्न -१निम्नलिखितम् प्रश्नानां उचितेन विकल्पेन उत्तरतम् लिखत - (1) क्रीडा: (2) पठामः (3) नृत्यं (4) गायन (ख) मातुलः चन्द्रः किं न करोति ? (१) स्नेहं (२) घृणा (३) कृपणः (४) क्षमा (ग) तेस्ना नायककुत्र आगच्छं ? (१) नदीम् (२) सरोवरः (३) ताङ्गा (४) समुद्राः (घ) कतिबालकाः स्नानाय आगच्छं ? (१) दशः (२) एकादशः (३) अष्टः (४) पञ्चः	4	Information
2	प्रश्न -२निम्नलिखितपंक्तिनाम अनुवादः कुरुत कुत्र आगच्छति मतुलचन्द्रः ? कुत्र गमिष्यसि मतुलचन्द्रः ? अतिशय विस्तृतनीलाकाशः कथं प्रयास्यति मतुलचन्द्रः ? कुत्र आगच्छति मतुलचन्द्रः ?	2	Understanding
3	प्रश्न -३क्रियापदैः वाक्यानि पूरयत - ( पठसि , धावां , गच्छतः , किङ्गा , लिखामि , पश्यथ ) (क) त्वं _____   (ख) आवाम _____   (ग) यूयं _____   (घ) अहम् _____   (ङ) युवाम _____   (च) वयं _____	3	HOT
4	प्रश्न -४कोष्ठकेषु प्रदत्तशब्देषु समुचितपदचित्वारिक्तस्थानानि पूरयत-- (क) _____ बहवः उत्सवाः भवन्ति   (भारतं / भारते ) (ख) _____ मीनाः वसन्ति   (सरोवरे / सरोवरात् ) (ग) जनाः _____ पुष्पाणि अर्पयन्ति   (मंदिरे / मन्दिरेण ) (घ) छात्राः _____ प्रयोगकुर्वन्ति   (प्रयोगशालायाम् / प्रयोगशालायाः )	4	Interdisciplinary
5	प्रश्न -५शुद्धकथनानां समक्षं (आम) इति अशुद्धकथनानां समक्षं (न) कुरुत - (क) सर्वे वाटिकायाम् अभ्यसन्ति   ( ) (ख) एकः बालकः नद्याममग्नः   ( ) (ग) कृषकः सर्वेभ्यः अन्नमयच्छन्ति   ( ) (घ) श्रमेण धरती सरसा भवति   ( ) (ङ) उद्याने बालिकाः क्रीडन्ति   ( )	5	Analytical Skill

6	<p>प्रश्न -६श्लोकंशानयोजयत -</p> <p>(क) गृहंजीर्णनवर्षासु - तौतुक्षेत्राणिकर्षतः ।  (ख) हेलेनचकुदालेन - याशुष्काकष्टकावृता ।  (ग) पादयोर्नपदत्राणे - सरस्यापूणानिसर्वदा ।  (घ) तयोःश्रमेणक्षेत्राणि - वृष्टिंवरयितुंक्षमं ।  (ङ) धरित्रीसरसाजाता - शरीरेवसनानिनो ।</p>	5	Critical Thinking and Problem Solving
7	<p>प्रश्न -७प्रश्नानांउत्तरानिलिखत -</p> <p>(क) पुष्पोत्सवस्यआयोजनाःकदाभवति ?  (ख) वयंकश्मिनलोकेप्रविशाम ?</p>	2	Evaluation
8	<p>प्रश्न -८चित्राणिद्रष्टवासंख्यांलिखत -</p> <p>(क) </p> <p>(ख) </p> <p>(ग) </p> <p>(घ) </p> <p>(ङ) </p>	5	Communication Skills



# ARMY PUBLIC SCHOOL GWALIOR

## CLASS VI

### SESSION 2019-20

#### WORKSHEET



Subject: Mathematics

Assignment No. -4

S. NO.	QUESTIONS	MARKS	NATURE
1	This is when we want to go below zero on the number line. These are called----- number.	1	Informative
2	Distributivity of multiplication over addition of number is _____.	1	HOT
3	Figures in which all sides and angles are called _____ closed figures.	1	Understanding
4	The method in which first we find the value of one unit and then the value of required number of units is known as-----method..	1	Informative
6	A----- do not have fixed value. i)Numbers ii) Alphabets iii) Constant iv) Variable.	1	Informative

<b>7</b>	Write True or False against each of 16:24::20:30.	<b>1</b>	Analytical skills
<b>8</b>	A _____ is a collection of numbers gathered to give some information.	<b>1</b>	Informative
<b>9</b>	Write $16 + \frac{3}{10} + \frac{5}{1000}$ as a decimal are-  (a)1605 (b)16.305 (c)16.05 (d)16.35	<b>1</b>	Evaluation
<b>10</b>	Represent the following numbers as integers with appropriate signs .  (a) A deposit of rupees two hundred.  (b) 100m. Above sea level.	<b>2</b>	Understanding

<b>11</b>	Draw an angle of $90^\circ$ using by ruler and compass.	<b>2</b>	Understanding
<b>12</b>	Express using decimal-  (a)164 in cm (b) 5kg8g in kg.	<b>2</b>	Analytical skill
<b>13</b>	The length of a rectangle hall is 4 meters less than 3 times the breadth of the hall. What is the length, if the breadth is	<b>2</b>	Critical thinking



	b meters?												
<b>14</b>	Find the ratio of the 30 minutes to 1.5 hours.	<b>2</b>	Evaluation										
<b>15</b>	Can you draw a triangle which has-  (a) exactly one line of symmetry?  (b) No lines of symmetry?	<b>2</b>	Understanding										
<b>16</b>	Construct with ruler and compass ,angles of following  measures-  (a) $60^\circ$ (b) $135^\circ$ _	<b>3</b>	Problem solving										
<b>17</b>	Drawing a bar graph to represent the above information  choosing the scale of your choice.  <table border="1" data-bbox="236 1644 1082 1868"> <tr> <td>Name of fruits</td> <td>Banana</td> <td>Orange</td> <td>Apple</td> <td>Guava</td> </tr> <tr> <td>No. Of students</td> <td>8</td> <td>3</td> <td>5</td> <td>4</td> </tr> </table>	Name of fruits	Banana	Orange	Apple	Guava	No. Of students	8	3	5	4	<b>3</b>	Understanding
Name of fruits	Banana	Orange	Apple	Guava									
No. Of students	8	3	5	4									

<b>18</b>	Cost of 5kg. Of wheat is Rs.30.50.  ( a) What will be the cost of 8kg of wheat?  (b ) What quantity of wheat can be purchased in Rs.61?	<b>3</b>	Critical thinking and problem solving



# ARMY PUBLIC SCHOOL GWALIOR

## CLASS VI

### SESSION 2019-20

#### WORKSHEET



Subject: Science

Assignment No. : 4

S. NO.	QUESTIONS	MARKS	NATURE
Q1	Answer the following questions.  i. What is the term unit?  ii. What are major nutrients?	1x2=2	Information
Q2	i. Name components of food.  ii. What is periodic motion?	2X2=4	Understanding
Q3	i. Write any two activities occur due to condensation.  ii. Why do the glasses become wet, when we breathe out on them?	2x2=4	HOT
Q4	i. What are 3R?  ii. Define the term rainwater harvesting.	2x3=6	Interdisciplinary

	<b>iii. Write any three uses of magnet?</b>		
<b>Q5</b>	<b>i. How will you show that soil contains air?</b>	<b>3x3=9</b>	Analytical Skill
	<b>ii. What did you eat yesterday and check whether your diet was balanced or not?</b>		Critical Thinking and Problem Solving
	<b>iii. List any three activity in which you can save paper.</b>		Evaluation
<b>Q 6.</b>	<b>How will you motivate people to keep their environment clean? Explain it.</b>	<b>5x1=5</b>	Communication Skills



# ARMY PUBLIC SCHOOL GWALIOR

## CLASS VI

### SESSION 2019-20

#### WORKSHEET



Subject: Social Science

Assignment No. : 4

S. NO.	QUESTIONS	MARKS	NATURE
1	Which book is written by Chanakya?	1	Understanding
2	Who is known as the founder of Buddhism?	1	Information
3	The period of rotation is known as.....	1	Information
4	In India, before independence, only a small minority was allowed to .....	1	Information
5	Give an example of young fold mountain.	1	Understanding
6	What do you mean by apartheid?	1	Information

7	Why do fishermen go far into the sea?	1	Understanding
8	.....is the official language of South Africa.	1	Information

<b>9</b>	What is sangam literature and when were they composed?	<b>3</b>	Information
<b>10</b>	How did the knowledge of silk spread far and wide?	<b>3</b>	HOT
<b>11</b>	Describe the three main parallel ranges of the Himalayan mountain.	<b>3</b>	Critical Thinking
<b>12</b>	Who is Patwari? Enumerate his various work.	<b>5</b>	Understanding
<b>13</b>	What is the difference between plains and plateaus?	<b>5</b>	Interdisciplinary
<b>14</b>	On an outline political map of India locate and mark the following:- (a) Vallabhi (b) Tropical rainforest (c) Thanesar	<b>3</b>	Identification and location.



# ARMY PUBLIC SCHOOL GWALIOR



## CLASS VI

### SESSION 2019-20

#### WORKSHEET

Subject: Computer

Assignment No. : 3

S.NO.	QUESTIONS	MARKS	NATURE
1	<p><b>Answer the following questions:</b></p> <p>a) When do we need to change the column width and row height ?</p> <p>b) What is an email? Give some advantages of an email?</p> <p>c) Explain the term Internet.</p>	3X3=9	Information
2	<p>Write the short definition of the following:</p> <p>a) Active cell</p> <p>b) Worksheet</p> <p>c) E-mail address</p>	3 x 2=6	Understanding
3	<p>Fill in the blanks:</p> <p>a) Selected group of cell is called _____ .</p> <p>b) A _____ is a software which helps in finding websites, web pages, etc.</p> <p>c) You can get an email address when you create an _____ .</p> <p>d) _____ is used for centring titles over the data.</p>	4 x 1=4	HOT

<b>4</b>	<p>Write the following statements are True (T) or False (F):</p> <ul style="list-style-type: none"><li>a) Functions are predefined formulas.</li><li>b) You can change the font of the text in excel.</li><li>c) By default Excel aligns text data to the left of the cells</li><li>d) An email should be written in capital letter.</li></ul>	4x1=4	Interdisciplinary
<b>5</b>	<p>Differentiate the following terms.</p> <ul style="list-style-type: none"><li>a) Moving and copying</li></ul>	2x1= 2	Analytical Skill
<b>6</b>	<p>Write the one line/one-word answers of the following questions:</p> <ul style="list-style-type: none"><li>a) Name any two types of functions used in Excel?</li><li>b) How many rows are there in an Excel worksheet.</li><li>c) Name any 1 number format used in Excel.</li><li>d) Name the parts of an e-mail address?</li><li>e) Which button will you click to write an e-mail message.</li></ul>	5x1=5	Critical Thinking and Problem Solving