



ARMY PUBLIC SCHOOL GWALIOR

CLASS IV

SESSION 2019-20

WORKSHEET




Subject: English

Assignment No. : 4

S. NO.	QUESTIONS	MARKS	NATURE
1	<p>Who spoke these lines in the story 'Gulliver in the land of Lilliput'</p> <p>(I) "My arms and legs were tied to pegs fastend nto the ground". ----- .</p> <p>(ii) He let out a screech of excitement, "Hekinah degul".</p> <p>_____</p>	2	Information
2	<p>Use contractions and rewrite the following sentences</p> <p>(i) I do not like butter sandwiches.</p> <p>(ii) Should not you care for your belongings?</p>	2	Understanding
3	<p>What are some of the things you ought to keep in mind when you go on a picnic?</p>	2	Interdisciplinary
4	<p>Spell check these words and make corrections where</p>		Analytical Skill

	<p>required</p> <p>(I) shipreck. _____</p> <p>(ii) antelop. _____</p> <p>(iii) voiage _____</p>	3	
5	What is the meaning of the phrase, 'Strength in Unity'?	3	Critical Thinking and Problem Solving
6	<p>Some of us are very imaginative; we can make our elders believe all our imagine stories. Is that a nice thing to do?</p> <p>Have you ever done something naughty like that? Are you sorry about it?</p>	3	HOT
7	<p>Answer the following questions briefly.</p> <p>(i) What frightens gnomes and pixies?</p> <p>(ii) Why is it important to inform our parents of our whereabouts?</p> <p>(iii) What had the strange creatures done to Gulliver?</p>	6	Evaluation
8	Describe Dr. Gulliver's struggle to reach the shore.	4	Communication Skills



आर्मी पब्लिक स्कूल , ग्वालियर
कार्यपत्रिका
कक्षा -4
विषय- हिन्दी



Subject: Hindi

Assignment No: 4

संख्या	प्रश्न उत्तर	अंक	प्रकृति
प्र.1	सही के सामने सही का (✓) निशान लगाइए। क. कनिंघम ने सन् 1938 में पी.एच.डी की उपाधि प्राप्त की। ख. कनिंघम युद्ध के नाम से डरता था। ग. धूप बादलो के साथ में लुका-छिपी का खेल खेलती है। घ. गोपाल स्कूल के रास्ते में कन्चे खेल रहा था। ङ. मोहित ने इनाम की धनराशि पंचायत को दे दी।	5	बोधात्मक
प्र.2	निम्नलिखित प्रश्नों के उत्तर दो। क. लड़को ने अपनी टोली का क्या नाम रखा ? ख. मोहित ने इनाम की धनराशि किसे दे दी ?..... ग. ग्लेन कनिंघम ने 1936 में कौन सा पदक जीता ? घ. नेहरू जी ने कितने वर्ष जेल में बिताये ?..... ङ. किसिमस धर्म के प्रवर्तक का क्या नाम था ?	5	सूचनापरक
प्र.3	क. यदि धूप सोती रह जायें तो क्या होगा ? ख. ईसा मसीह ने लोगों को क्या उपदेश दिये ?	4	अंतः विषयात्मक
प्र.4	सही योजक शब्द चुनकर वाक्य पूरे करो। (किन्तु , और, इसलिए, बल्कि) क. गोविंद आलसी नहीं कामचोर है । ख. लता ने बेग उठाया सीधे स्टेशन जा पहुँची । ग. मैंने उसे बहुत समझाया उसने मेरी एक ना सुनी ।..... घ. बारीश हो रही है मैं थोड़ी देर से आऊँगा ।.....	4	गहन सोच और समस्या समाधान
प्र.5	यदि गोपाल के दोस्त घर या स्कूल में उसकी शिकायत कर देते तो क्या होता ?	2	उच्चस्तरीय चिंतन
प्र.6	निम्नलिखित शब्दों के दो दो समानार्थी शब्द लिखो। क. पेड़ - ख. बादल - ग. पहाड़ -	3	विश्लेषणात्मक
प्र.7	निम्नलिखित शब्दों के विलोम शब्द लिखो। d- vk''kk [k- n.M	2	भाषायी कौशल



ARMY PUBLIC SCHOOL GWALIOR

CLASS IV

SESSION 2019-2020


WORKSHEET



Subject: Mathematics

Assignment No. : 4

S.NO.	QUESTIONS	MARK	NATURE
		S	
1	Fill in the blanks : (a) 75 paise = _____ of 1 rupees (b) 100 gram = _____ of 1 kg (c) 3600 metres = _____ kg _____ m (d) 34680 gram = _____ kg _____ g (e) The point where two sides of a square meet is called = _____ (f) Number of faces in a cuboid = _____	6x0.5= 3	Information
2	Write true or false: (a) one decimetre is smaller than one centimeter. () (b) 1 hour equal to 3600 seconds . () (c) Distance measure between two cities in metres. .() (d) 1kg potato can be weighed by using four 200g and two 100g weights. () (e) Four 25-paise coins make a rupee. () (f) 1 litre equal to 100 millilitre. ()	6x0.5= 3	Critical Thinking
3	Choose the correct answer-		

4	<p>(i) possible length of pencil is - (a) 5m (b) 15cm (c) 15mm (d) 1km</p> <p>(ii) The weight of your school bag can be - (a) 15 g (b) 1500 g (c) 150 g (d) 15 g</p> <p>(iii) Estimate cost of 1litre milk is— (a) Rs 500 (b) 50p (c) Rs 50 (d) Rs 5</p> <p>(iv) The height of banyan tree can be (a) 14mm (b) 14m (c) 14cm (d) 14km</p> <p>(v) Fraction which is not equivalent to $\frac{2}{5}$ (a) $\frac{6}{15}$ (b) $\frac{10}{25}$ (c) $\frac{12}{30}$ (d) $\frac{15}{35}$</p> <p>(vi) The side of a square field is 10m . Then it's perimeter is (a) 30cm (b) 40cm (c) 50cm (d) 20cm</p> <p>Do as directed</p> <p>(i) Draw a circle of diameter 5cm.</p> <p>(ii) Figure (a) </p> <p>Divide the given figure(a) into 6 equal parts and colour $\frac{2}{6}$ of its fraction .</p>	<p>6x0.5= 3</p> <p>2x1=2</p>	<p>Analytical skills</p> <p>Understanding</p>
5	<p>Solve the following questions :</p> <p>(a) You have only one 5 litre and one 2litre</p>		

jar.

How will you measure by using these


(i) 1litre oil? (ii) 30 litre oil?

Solve:

(i)

(ii)

(b) A and B each have their own pizza of the same size. They each had two slices. Using the picture of their pizzas below, who ate more of their pizza? Explain how you know?



(c) Convert the following :

(i) 4m into decimeters

(ii) 8m into centimetres

(iii) 42km into metres

3x3=9

HOTS

6	Solve the word problem (a) Suman bought a book for Rs 90.00 , a pen for Rs 25.25 and water colours for Rs 145.60. She gave one 500 rupees note to the bookseller. What did the book seller return to her? (b) Sahil bought 35kg 850g apples and sold $\frac{1}{5}$ of them. How much apples are left with her? Solve=	2x2.5= 5	Problem solving
----------	---	-------------------------------	------------------------



ARMY PUBLIC SCHOOL, GWALIOR

CLASS- IV

SESSION 2019-20

WORKSHEET



Subject: EVS

Assignment No: 4

S. NO.	QUESTIONS	MARKS	NATURE
1	Fill in the blanks: (i) The highest mountains in Himalayas are always covered in -----. (ii) The Hawa Mahal was the summer palace of -----.	2	Information
2	Write True or False: (i) Early man lived like animals in the jungle. [] (ii) The Americans introduced the railways in India. []	2	Understanding
3	Give answer to the following questions (i) What kind of engines do trains have nowadays? _____	2	Interdisciplinary

	<p>(ii) What is mass communication? Name some popular means of mass communication-which one does you, think is the best?</p> <hr/> <hr/>	3	Analytical Skill
	<p>(iii) What would happen if there were no mountains to stop the monsoon winds from leaving India? Discuss.</p> <hr/> <hr/>	3	HOTS
	<p>(iv) How can we take care of our monuments?</p> <hr/> <hr/>	3	Critical Thinking and Problem Solving
	<p>(v) Write the uses of fire in our life?</p> <hr/> <hr/> <p>(vi) What is the difference between evaporation and condensation?</p> <hr/> <hr/>	3 3	Evaluation

4	Mobile phones have become an essential part of our lives. Why? <hr/> <hr/> <hr/> <hr/> <hr/> <hr/> <hr/>	4	Communicati on Skills
----------	---	----------	--------------------------



ARMY PUBLIC SCHOOL GWALIOR

CLASS- IV

SESSION 2019-20

WORKSHEET



Subject: Computer

Assignment No. : 3

S.NO.	QUESTIONS	MARKS	NATURE
1	Answer the following questions: a) What is Screensaver? b) Define Powerpoint. c) What is insertion point.	3 x 3=9	Information
2	Write the short definition of the following: a) MS- Word b) Uses of Internet c) Web page	3 x 2=6	Understanding
3	Fill in the blanks: a) _____ is the shortcut command to make the text bold b) _____ is the shortcut command to copy the text. c) _____ is the area where you type the text of your document. d) You can communicate o Internet through _____	4 x 1=4	HOT
4	Write the Full forms of the following: a) INTERNET b) URL c) WWW	4x1=4	Interdisciplinary

	d) ARPA		
5	Differentiate the following terms. a) Copying and Moving text	2x1= 2	Analytical Skill