



ARMY PUBLIC SCHOOL GWALIOR
CLASS -III
SESSION 2020-2021
WORKSHEET-2(SELF ASSESSMENT TEST)



Subject: English

Allotment Date: 07/5/2020

M.M:20

Note:-Please submit Worksheet-1 and Worksheet-2(Self-Assessment Test) in hard copy to your subject teacher when the school is reopened.

S. No.	Questions	Marks	Nature
1.	<u>Vocabulary</u> Write the meanings of the following words- 1. frightened - 2. inauspicious - 3. dejected - 4. pasture - 5. tantrum -	5x1=5	Information
2.	<u>Complete the spellings -</u> 1. a --- t ---- c k 2. i n c - d --- n t 3. s h --- p ---- e r ---- 4. g --- l--- o --- s 5. d --- n --- e	5x1=5	Problem solving
3.	<u>Write 'True' or 'False' -</u> 1. Akbar sets the hawker free. _____ 2. The villagers came to help him the third time. _____	4x1/2=2	Understanding

	3. The villagers killed the wolf . _____ 4. Many shepherd boys went with him. _____		
4.	Answer the following questions : 1. What proclamation did the hawker make? ----- ----- ----- ----- 2. What did the shepherd boy plan to do? How? ----- ----- ----- ----- 3. Why do you think Akbar set the hawker free ? ----- ----- ----- ----- 4. Why didn't the villagers come to help the shepherd boy the third time? ----- ----- ----- -----	4x2=8	HOT



ARMY PUBLIC SCHOOL GWALIOR
CLASS -III
SESSION 2020-2021
WORKSHEET-2(SELF ASSESSMENT TEST)



Subject: Hindi

Allotment Date: 07/5/2020

M.M:20

Note:-Please submit Worksheet-1 and Worksheet-2(Self-Assessment Test) in hard copy to your subject teacher when the school is reopened.

संख्या	प्रश्न	अंक	प्रकृति
प्र.१	<p>प्र. १ उचित शब्द से खाली स्थान भरो —</p> <p>(गुलमेहँदी , आम , तृतीय , खेल , फोटो)</p> <p>क) आकाश ने ————— प्रतियोगिता में अपना नाम लिखवाया ।</p> <p>ख) वर्षा ऋतु में ————— का फूल सुंदरता बिखेरता है ।</p> <p>ग) आकाश की इच्छा थी उसकी ————— स्कूल पत्रिका में छपी ।</p> <p>घ) हवा के झोंकों से ————— टप —टप गिरता है ।</p> <p>घ) आकाश दौड़ में ————— नंबर पर आया ।</p>	5	बोधोत्प्रेरक

<p>प्र.२</p>	<p>प्र .२ — वस्तुनिष्ठ प्रश्न —</p> <p>क) आकाश को क्या करना अच्छा लगता था ? पढ़ना — . खेलना —कूदना — गाना —</p> <p>ख) वर्षा ऋतु में किनका बहाव दुगना हो जाता है ? झरनों का — तालाब का — नदियों का —</p> <p>ग) स्कूल में भीड़ क्यों थी ? खेल प्रतियोगिता थी — दूसरे स्कूल के बच्चे आए थे — बच्चों के माता पिता आए थे —</p> <p>घ) बरसात का मौसम किस मौसम के बाद आता है ? पतझड़ — ग्रीष्म ऋतु — शरद ऋतु —</p> <p>ड) वर्षा ऋतु में कैसी हवा चलती है ? गरम लू — आँधी — शीतल पुरवाई —</p>	<p>5</p>	<p>अंतः विशयात्मक</p>
<p>प्र.३</p>	<p>निम्न शब्दों के अर्थ लिखो —</p> <p>क) जड़</p> <p>ख) वेग</p> <p>ग) आनाकानी</p> <p>घ) विजेता</p> <p>इ) प्रतियोगिता</p>	<p>5</p>	<p>भाषायी कौशल</p>

प्र.४	<p>निम्न प्रश्नों के उत्तर दीजिए —</p> <p>(क) सवेरे — सवेरे माँ की आवाज सुनकर आकाश क्या करता था ?</p> <hr/> <hr/> <hr/> <p>(ख) आकाश ने दौड़ में अपना नाम क्यों लिखवाया ?</p> <hr/> <hr/> <hr/> <p>(ग) बरसात का मौसम आने पर चारों ओर क्या दिखता है ?</p> <hr/> <hr/> <hr/> <p>(घ) दौड़ में असद के जीत जाने का क्या कारण था ?</p> <hr/> <hr/> <hr/> <p>(ङ) वर्षा ऋतु में आसमान कैसा दिखता है ?</p> <hr/> <hr/> <hr/> <hr/>	5	विश्लेषणात्मक विधि
-------	--	---	--------------------

--	--	--	--



ARMY PUBLIC SCHOOL GWALIOR
CLASS -III
SESSION 2020-2021
WORKSHEET-2(SELF ASSESSMENT TEST)

Subject: Mathematics

Allotment Date: 07/5/2020

M.M:20

Note:-Please submit Worksheet-1 and Worksheet-2(Self-Assessment Test) in hard copy to your subject teacher when the school is reopened.

S. NO.	QUESTIONS	MARKS	NATURE								
1	<p>Fill in the blanks:</p> <p>(I) Fill the following number in placeholders :</p> <p>6666 -</p> <table border="1" style="margin-left: auto; margin-right: auto;"><thead><tr><th>Th</th><th>H</th><th>T</th><th>O</th></tr></thead><tbody><tr><td> </td><td> </td><td> </td><td> </td></tr></tbody></table>	Th	H	T	O					5*1=5	Understanding
Th	H	T	O								
	<p>(II) The short form of $3000 + 400 + 70 + 5 =$ _____</p> <p>(III) 50 more than 140 _____</p> <p>(IV) We read 9877 as _____</p> <p>(V) The greatest 4 digits number is _____</p>										

2	<p>Write 'True' or 'False':</p> <p>(I) 1 hundred = 100 tens ()</p> <p>(II) 7686 is the predecessor of 7685. ()</p> <p>(III) Place value of 0 is always zero. ()</p> <p>(IV) 100 is the smallest 2 digit number . ()</p>	4*1=4	HOTS
3	<p>Tick the correct answer from the given options:</p> <p>(I) 9000+900+90+9 is the expanded form of - (a) 9000 (b) 9999 (c) 99</p> <p>(II) Which is greater? (a) 600 (b) 819 (c) 457</p> <p>(III) The sum of 2612 + 2061 is - (a) 4673 (b) 4670 (c) 4637</p> <p>(IV) The number three thousand two hundred is - (a) 0023 (b) 320 (c) 3200</p>	5*1=5	Critical thinking

(a) Write the number name of the following number:

3367 -

(b) Add the following:

Th H T O

7 6 1 4

4 0 8 2

+ 4 0 1

(c) Write the following number by using the digits in reverse

order :


4 0 2 6 - _____

(d) Write whether the following numbers are arranged in

ascending or descending order :

56 566, 5660, 7637, 7673, 7773

.....



ARMY PUBLIC SCHOOL GWALIOR
CLASS -III
SESSION 2020-2021
WORKSHEET-2(SELF ASSESSMENT TEST)



Subject: EVS

Allotment Date: 07/5/2020

M.M:20

Note:-Please submit Worksheet-1 and Worksheet-2(Self-Assessment Test) in hard copy to your subject teacher when the school is reopened.

S.NO.	QUESTIONS	MARK	NATURE
		S	
1.	<p>Answer the following questions:</p> <p>a) What is Braille Script?</p> <p>b) How do various sense organs work?</p> <p>c) In what ways do you help your parents at home?</p>	3 x 2 =6	Information
2.	Fill in the blanks with the help of given words. (cousins, Twins, skin, taste buds, Braille script)	5x 1=5	Understanding

	<p>(a) We can feel with our -----.</p> <p>(b) The children of uncle and aunts are called -----.</p> <p>(c) There are many ----- on our tongue.</p> <p>(d) ----- has raised dots in a set pattern.</p> <p>(e) ----- have many habits and interests in common.</p>						
3	<p>State whether the following statements are 'True' or 'False' :</p> <p>(a) People who cannot talk or hear use sign language to communicate. -----</p> <p>(b) A nuclear family is a large family.-----</p> <p>(c) Members of a family resemble each other. -----</p> <p>(d) We can taste with our nose. -----</p>	4x1=4	Knowledge				
4	<p>Match the following-</p> <table style="width: 100%; border: none;"> <tr> <td style="text-align: center; width: 50%;">A</td> <td style="text-align: center; width: 50%;">B</td> </tr> <tr> <td>(a) Sudha Chandra</td> <td>large family</td> </tr> </table>	A	B	(a) Sudha Chandra	large family	5 × 1 = 5	Interdisciplinary & Critical thinking
A	B						
(a) Sudha Chandra	large family						

	(b) skin	five		
	(c) walking aids	a famous Bharatnatyam dancer		
	(d) joint family	largest external organ		
	(e) sense organs	wheel chair, crutches		



ARMY PUBLIC SCHOOL GWALIOR
CLASS -III
SESSION 2020-2021
WORKSHEET-2(SELF ASSESSMENT TEST)

Subject: Computer


Allotment Date: 07/5/2020


M.M:10

Note:-Please submit Worksheet-1 and Worksheet-2(Self-Assessment Test) in hard copy to your subject teacher when the school is reopened.

S. NO.	QUESTIONS	MARKS	NATURE
1	Fill in the blanks 1. A set of instructions is known as a) Software b) Hardware c) None of these 2. Physical components of a computer that can be touched are a) Software b) Hardware	4	Understanding

	<p>c) Both</p> <p>3. Windows is an example of</p> <p>a) Software</p> <p>b) Hardware</p> <p>c) Both</p> <p>4. A computer is a</p> <p>a) Software</p> <p>b) Machine</p> <p>c) Book</p>		
3	<p>Answer the following questions</p> <p>a. What is a Computer?</p> <p>b. On which principle does a computer work?</p>	2	<p>Critical Thinking and Problem Solving</p>

4	<p>Name the following hardware devices shown in the below picture:-</p> 	4	Information



ARMY PUBLIC SCHOOL GWALIOR
CLASS -III
SESSION 2020-2021
WORKSHEET-2(SELF ASSESSMENT TEST)

Subject: Art & Craft

Allotment Date: 07/5/2020

M.M:10

Note:-Please submit Worksheet-1 and Worksheet-2(Self-Assessment Test) in hard copy to your subject teacher when the school is reopened.

S.N	QUESTIONS	MARKS	NATURE
1	What is Secondary, Warm & Cool colours with example?	5x1=5	Information

2	BUTTERFLY - Draw & Colour (Sketch book)	5X1=5	Drawing & Colouring skill
---	--	-------	---------------------------------



ARMY PUBLIC SCHOOL GWALIOR
CLASS -III
SESSION 2020-2021
WORKSHEET-2(SELF ASSESSMENT TEST)

Subject: Games

Allotment Date: 07/5/2020

M.M:10

Note:-Please submit Worksheet-1 and Worksheet-2(Self-Assessment Test) in hard copy to your subject teacher when the school is reopened.

S.NO.	QUESTIONS	MARKS
1.	How many players are there in each side of cricket team? a) 6 b) 10 c) 11 d) 8	10X1=10
2.	Who is the captain of Indian cricket team? a) M.S. Dhoni b) Virat Kohli c) Rohit Sharma d) Sachin Tendulkar	
3.	What is the colour of cricket ball in T 20 cricket format? a) Red b) Pink c) White d) Orange	
4.	Which country has national game as cricket? a) India b) Australia c) England d) West Indies	

5.	When India won first Cricket world cup? a) 1983 b) 1979 c) 1985 d) 1990	
6.	Sardar Singh is associated with which game? a) Hockey b) Cricket c) Football d) Kabbadi	
7.	Who is known as the Flying Sikh of India? a) Usain Bolt b) Milkha Singh c) Sandeep Singh d) Navjot Singh	
8.	Who won the First T 20 world cup? a) Sri Lanka b) USA c) India d) England	
9.	How many stump are used in cricket match? a) 3 b) 6 c) 7 d) 9	
10.	How many players are there in each side of Hockey team? a) 11 b) 10 c) 7 d) 8	



ARMY PUBLIC SCHOOL GWALIOR
CLASS -III
SESSION 2020-2021
WORKSHEET-2(SELF ASSESSMENT TEST)

Subject: Dance

Allotment Date: 07/5/2020

M.M:10

Note:-Please submit Worksheet-1 and Worksheet-2(Self-Assessment Test) in hard copy to your subject teacher when the school is reopened.

क्र.	सही विकल्प चुनकर लिखिए।	आबंटित अंक
1.	भंगड़ा कहाँ का नृत्य है? (अ) गोवा (□) उड़ीसा (□) केरल (□) पंजाब	(1x2=2)
2.	गुजरात में सबसे मशहूर नृत्य कौन सा है ? (अ) कत्थक	(1x2=2)

	(ब) डांडिया (स) वेस्टर्न (द) गिद्धा	
3.	कृष्ण कौन सा नृत्य करते थे? (अ) रास नृत्य (ब) तांडव नृत्य (स) लास्य (द) झूमर	(1x2=2)
4.	कृष्ण ने गेंद कहाँ फेंकी थी? (अ) जंगल (ब) जमुना (स) आसमान (द) धरती	(1x2=2)
5.	कृष्ण किसके साथ <input type="checkbox"/> <input type="checkbox"/> <input type="checkbox"/> खेलते थे?	(1x2=2)

	(अ) सखा	
	(ब) गोपी	
	(स) गाय	
	(द) नंदबाबा	