



ARMY PUBLIC SCHOOL GWALIOR

CLASS IV

SESSION 2019-20

WORKSHEET



Subject: English

Assignment No. : 3


Allotment Date: 1st February

Submission Date: 15 February

S. NO.	QUESTIONS	MARKS	NATURE
1	Complete the following sentences. (i) Of all the tiny people, and you'll really (ii) To leave their tidy and to clear away the mess.	2	Information
2	Write the kind of sentence against each of the following- (i) Don't disturb me (ii) Oh! I have hurt myself.	2	Understanding
3	How can we keep our surroundings clean ? Write two ways.	2	Interdisciplinary

<p>4</p>	<p>Find out words from the chapter that mean the same as-</p> <p>(i) Cause damage to - _____</p> <p>(ii) Storyteller - _____</p> <p>(iii) Someone who lacks courage – _____</p>	<p>3</p>	<p>Analytical Skill</p>
<p>5</p>	<p>Why it is important to inform our parents of our whereabouts?</p>	<p>3</p>	<p>Critical Thinking and Problem Solving</p>
<p>6</p>	<p>If all the rubbish is properly disposed off , what are the things you are likely to see?</p>	<p>3</p>	<p>HOT</p>
<p>7</p>	<p>Answer the following questions briefly.</p> <p>(i) Who are the people we can confide in?</p> <p>(ii) Where does a linnnet like to sing?</p>	<p>6</p>	<p>Evaluation</p>

	(iii) What will you not see if you throw things around you on a picnic?		
8	Explain the phrase "Strength in Unity" in your own words (word limit 30 to 40 words)	4	Communication Skills



आर्मी पब्लिक स्कूल , ग्वालियर
कार्यपत्रिका
कक्षा -4
विषय- हिन्दी



Subject: Hindi

Assignment No. : 3

Allotment Date: 1st February

Submission Date: 15 February

संख्या	प्रश्न उत्तर	अंक	प्रकृति
प्र.1	सही योजक शब्द चुनकर वाक्य पूरे करो –(ताकि, और ,किन्तु,इसलिए, बल्कि,) क.मैंने उसे बहुत समझाया —————उसने मेरी एक न सुनी । ख. लता ने बैग उठाया —————सीधे स्टेशन जा पहुँची । ग. वह और तेज चलने लगा —————अधेरा होने से पहले ही पहुँच जाए ।। घ. गोविंद आलसी नहीं —————कामचोर है । ङ. बारिश हो रही है—————मैं थोड़ी देर से आऊँगा ।	5	बोधार्थक
प्र.2	वाक्यों में सही स्थान पर उचित विराम चिन्ह लगाइए – क –अजय सिंह ने मेहनत इमानदारी और बुद्धिमानी से खूब नाम कमाया ख–क्या तुम मेरे साथ चलोगी ग –वाह क्या बात कहीं है घ– मरीज चिल्ला रहा था मुझे जाने दो ङ –माँ ने कहा चलो खाना खा लो	5	सूचनापरक
प्र.3	क. बच्चों की आजाद टोली को सरकार की ओर से पुरस्कृत क्यों किया गया ? ख गोपाल के साथी कैसे थे ?	4	अंतः विषयात्मक
प्र.4	भिन्न अर्थ वाले शब्द पर घेरा लगाओ – क. पानी – नीर , जल , सागर , वारि ख. पेड़ – तरु , विटप , पर्वत , वृक्ष ग. फूल – पुष्प , विश्व , सुमन , कुसुम घ. आँख – निशा , नेत्र ,लोचन ,नयन	4	गठन सोच और समस्या समाधान
प्र.5	यदि गोपाल के दोस्त गोपाल को टोली में शामिल न करते तो क्या होता ?	2	उच्चस्तरीय चिंतन
प्र.6	मिलान करिए। राजा गगन आकाश सूर्य सूरज नृप	3	विश्लेषणात्मक
प्र.7	क्रिया पद रेखांकित करो – क –हरि केला खाता है । ख –केशव पत्र लिखता है ।	2	भाषायी कौशल




ARMY PUBLIC SCHOOL GWALIOR

CLASS IV

SESSION 2019-2020

WORKSHEET



Subject: Maths

Assignment No. : 3

Allotment Date: 1st February

Submission Date: 15th February

S.NO	QUESTIONS	MARKS	NATURE
1	Complete the pattern- (a) 2 ,4, 8, 16,____,____, (b) 1, 4, 9, 16, 25,____,____ (c) 3, 6, 9, 3, 6, 9, ____, ____, ____ (d) 30, 40, 50, 60, ____, ____ (e) 2, 22, 32, 42, ____, ____ (f) 1, 1, 2, 3, 5, 8, ____,____	6x0.5= 3	Understanding
2	Write true or false: (a) A simple closed curve does not cross itself. () (b) A bar graph is not equal throughout. () (c) The line which divides a symmetrical figure is called line of symmetry. () (d) A triangle has 4 sides.() (e) The point where two sides of a triangle meet is called vertex () (f) A line has no end point.()	6x0.5= 3	Critical Thinking
3	Choose the correct answer- (i)The number of lines of symmetry in a triangle is-		

<p>4</p>	<p>(a) 4 (b) 3 (c) 2 (d) 5</p> <p>(ii) In a sequence 5, 15, 25, 35.....thenext number will be-</p> <p>(a) 50 (b) 35 (c) 45 (d) 55</p> <p>(iii) The number of faces in a cube is –</p> <p>(a) 4 (b) 6 (c) 3 (d) 5</p> <p>(iv) Which number comes next in the pattern?</p> <p>9, 7 , 8 , 6, 7 _____</p> <p>(a) 4 (b) 5 (c) 8 (d) 6</p> <p>(v) If the diameter of a circle is 20cm, its radius will be –</p> <p>(a) 20 cm (b) 10 cm (c)15 cm (d) 25 cm</p> <p>(vi) Which number comes next in the pattern-</p> <p>123, 234,345,456,_____</p> <p>(a) 789 (b) 567 (c) 678 (d) 890</p> <p>Observe the pattern and complete it-</p> <p>(I) (a) $1+2=3$ (b) $1+2+3=6$ (c) $1+2+3+4=10$ (d) $1+2+3+4+5=$_____ (e) $1+2+3+4+5+6=$_____</p> <p>(II) (a) $2+4+6+=12$ (b) $4+6+8+=18$ (c) $6+8+10=24$ (d) $8+10+12=$_____ (e) $10+12+14=$____</p>	<p>$6 \times 0.5 =$</p> <p>3</p> <p>$2 \times 2.5 =$</p> <p>5</p>	<p>HOTS</p> <p>Understanding</p>
<p>5</p>	<p>Do as directed-</p> <p>(a) Find the perimeter of the triangle whose sides are given- 12cm,12cm,12cm</p> <p>Solve:</p> <p>(b) Find the perimeter of the square having sides – 25cm</p> <p>Solve:</p>	<p>$3 \times 2 = 6$</p>	<p>Interdisciplinary</p>

(c) Find the digit sum of the following-





- (i) 2839 (ii) 27380

Solve:

6

Solve the word problem

(a) The below graph shows how many oranges were sold in 3 weeks

Week	Oranges
Week 1	
Week 2	
Week 3	
Each  orange stands for 20 oranges	

Answer the following questions:

Q1. How many oranges were sold during the third Week?

Ans.

Q2. In which Week the oranges sold were maximum?

Ans.

(b) The graph shows favourite Pizza Toppings with 6 different toppings. Answer the following questions:

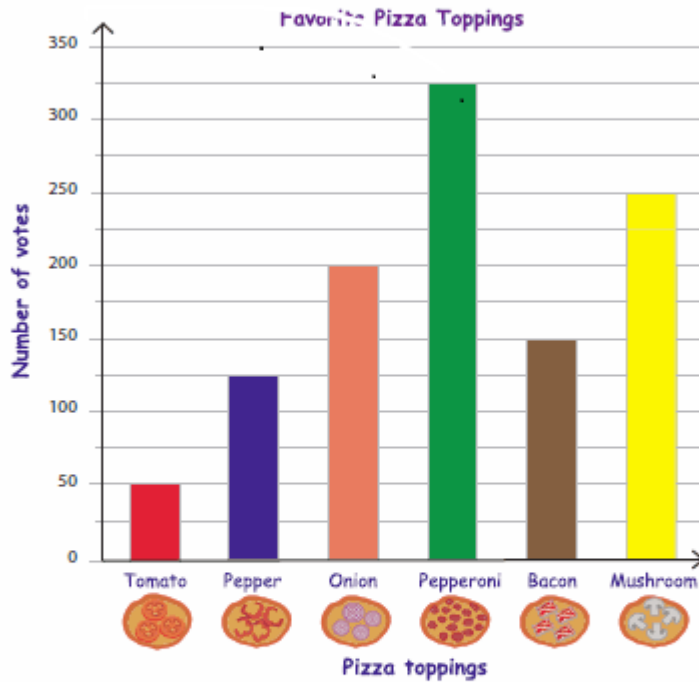
2.5x2=

5

**Problem
solving**

Bar Graph - Pizza Toppings

Good Time Pizz'a Makers are best in making pizzas with six different toppings. They took a survey about customers' favorite toppings and recorded the results in a bar graph. Use the bar graph to answer the questions.



- 1) Which is the most popular topping? _____
- 2) How many customers have chosen either tomato or pepper toppings? _____
- 3) If 75 more customers prefer bacon, which one will top the chart, bacon or onion? _____
- 4) Which topping has 250 votes? _____
- 5) List the toppings in order from most popular to least popular.



ARMY PUBLIC SCHOOL, GWALIOR

CLASS- IV

SESSION 2019-20

WORKSHEET



Subject: EVS

Assignment No : 3

Allotment Date: 1st February

Submission Date: 15 February

S. NO.	QUESTIONS	MARKS	NATURE
1	Fill in the blanks: (i) The telephone was invented by_____. (ii) _____ is the highest stone tower in India.	2	Information
2	Write True or False: (i) Fire is produced when two pieces of corks are rubbed together. (ii) Print media is an example of mass media.	2	Understanding
3	Give answer to the following questions (i) Which is the second highest dome of the world and where is it situated ? _____	2	Interdisciplinary

	<p>(ii) In what ways did the life of early man changed after the discovery of fire ?</p> <hr/> <hr/>	3	Analytical Skill
	<p>(iii) Why is it necessary to preserve our heritage ?</p> <hr/> <hr/>	3	HOT
	<p>(iv) Why is fire important in man's life ?</p> <hr/> <hr/> <hr/>	3	Critical Thinking and Problem Solving
	<p>(v) What do you understand by UNESCO Heritage site ?</p> <hr/> <hr/> <p>(vi) In what ways does radio and television help us ?</p> <hr/> <hr/>	3	Evaluation

4	How does the monuments show rich culture of a country ? <hr/> <hr/> <hr/> <hr/> <hr/> <hr/>	4	Communication Skills
----------	--	----------	----------------------




ARMY PUBLIC SCHOOL GWALIOR

CLASS IV

SESSION 2019-2020

WORKSHEET



Subject: Computer

Assignment No : 2

Allotment Date: 1st February

Submission Date: 15 February

S.NO.	QUESTIONS	MARKS	NATURE
1	<p>Answer the following questions:</p> <p>a) What is Internet? b) Define Powerpoint. c) What How many types of alignment are available in word? Name them.</p>	3 x 3=9	Information
2	<p>Write the short definition of the following:</p> <p>a) Web browser b) Uses of Internet c) Web page</p>	3 x 2=6	Understanding
3	<p>Fill in the blanks:</p> <p>a) One page of a presentation is called a _____ b) _____ is the shortcut command to copy the text. c) _____ is a presentation program from Microsoft. d) You can communicate o Internet through _____</p>	4 x 1=4	HOT

4	Write the Full forms of the following: a) ISP b) URL c) WWW d) ARPA	4x1=4	Interdisciplinary
5	Differentiate the following terms. a) Copying and Moving text	2x1= 2	Analytical Skill