



ARMY PUBLIC SCHOOL GWALIOR

CLASS- II

SESSION 2019-20

WORKSHEET



Subject: English

Assignment No. : 3


Allotment Date: 1st February

Submission Date: 15 February

S. NO.	QUESTIONS	MARKS	NATURE										
1	<p>Match the following words with their meanings:</p> <table><tr><td>words</td><td>meanings</td></tr><tr><td>(i) prancing</td><td>(a) a state of awed admiration</td></tr><tr><td>(ii) gleam</td><td>(b) a small river</td></tr><tr><td>(iii) wonderment</td><td>(c) high steps</td></tr><tr><td>(iv) stream</td><td>(d) shine brightly</td></tr></table>	words	meanings	(i) prancing	(a) a state of awed admiration	(ii) gleam	(b) a small river	(iii) wonderment	(c) high steps	(iv) stream	(d) shine brightly	(.5x4=2)	Information
words	meanings												
(i) prancing	(a) a state of awed admiration												
(ii) gleam	(b) a small river												
(iii) wonderment	(c) high steps												
(iv) stream	(d) shine brightly												
2	<p>Underline the position words in these sentences:</p> <p>(i) The cat slept on the mat.</p> <p>(ii) The horse jumped over the fence.</p>	2	Understanding										
3	<p>Write the different stages of making cloth ?</p>	2	Interdisciplinary										

	<p>.....</p> <p>.....</p> <p>.....</p>		
4	<p>Fill in the blanks with correct doing words:</p> <p>(i) Imy teeth daily. (sweep\brush)</p> <p>(ii) A chemistmedicines. (sells\washes)</p>	2	<p>Analytical</p> <p>Skill</p>
5	<p>Fill in the blanks with the given options:</p> <p>(i)have got a pet dog. (I/ me)</p> <p>(ii) This is Riyaz.I play with..... (it/ him)</p> <p>(iii) This is my new bicycle. Will you ride it..... ?(it/ him)</p>	3	<p>Critical</p> <p>Thinking and</p> <p>Problem</p> <p>Solving</p>
6	<p>Why do you think the fairy did not keep anything she bought?</p> <p>_____</p> <p>_____</p> <p>_____</p>	3	HOTS
7	<p>Answer the following questions briefly:</p>		Evaluation

	<p>(i) What did Luke find one morning?</p> <p>_____</p> <p>_____</p> <p>(ii) Where did Ria's new dress got stuck?</p> <p>_____</p> <p>_____</p>	2	
8	<p>Write few sentences about your best friend;</p> <p>(i) _____ - _____</p> <p>(ii) _____</p> <p>(iii) _____</p> <p>(iv) _____</p>	4	Communicati on Skills



आर्मी पब्लिक स्कूल , ग्वालियर
कार्यपत्रिका
कक्षा-2
विषय -हिन्दी



Subject: Hindi


Assignment No. : 3

Allotment Date: 1st February

Submission Date: 15th February

संख्या	प्रश्न.उत्तर	अंक	प्रकृति
प्र.1	सही उत्तर पर सही का निशान लगाओ 1. चिड़िया कैसे गीत सुनती है ? (अ) मीठे (ब) कड़वे (स) रसीले 2. चिड़िया के पंख कैसे हैं ? (अ) कठोर (ब) कोमल (स) छोटे-छोटे 3. तेनालीराम ने कौआ की गिनती के लिए कितना समय माँगा ? (अ) दो दिन (ब) दो सप्ताह (स) तीन दिन 4. कृष्णदेवराय ने तेनालीराम को उपहार में क्या दिया ? (अ) हीरों का हार (ब) हीरे की अँगूठी (स) मोतियों की माला	4	बोधोत्प्रेरक
प्र.2	रिक्त स्थान भरें : 1. चिड़िया दाना _____ है। 2. चिड़िया _____ का जीवन जीती है। 3. पांडवों की माता का नाम _____ था। 4. राजा राज्य का _____ करना चाहते थे।	4	सूचनापरक
प्र.3	दिए गए प्रश्नों के उत्तर दो : 1. राक्षस के मरने की खबर का गाँववालों पर क्या असर हुआ ? उत्तर 2. वसंत ऋतु का हम पर क्या असर होता है ? उत्तर	2	अंतः विषयात्मक

प्र.4	<p>इन्हें क्या कहते हैं ?</p> <p>1 जिस आसन पर राजा बैठता है.....</p> <p>2 जो बहुत समझदार होता है.....</p>	2	गहन सोच और समस्या समाधान		
प्र.5	किन्हीं दो ऋतुओं के बारे में दो दो वाक्य लिखिए?	2	उच्चस्तरीय चिंतन		
प्र.6	<p>समान अर्थ वाले शब्दों को मिलाओ .</p> <table style="width: 100%; border: none;"> <tr> <td style="width: 50%; vertical-align: top;"> <p>(क)</p> <p>क) सभा</p> <p>ख) जवाब</p> <p>ग) रिश्तेदार</p> <p>घ) मतलब</p> </td> <td style="width: 50%; vertical-align: top;"> <p>(ख)</p> <p>उत्तर</p> <p>दरबार</p> <p>अर्थ</p> <p>संबंधी</p> </td> </tr> </table>	<p>(क)</p> <p>क) सभा</p> <p>ख) जवाब</p> <p>ग) रिश्तेदार</p> <p>घ) मतलब</p>	<p>(ख)</p> <p>उत्तर</p> <p>दरबार</p> <p>अर्थ</p> <p>संबंधी</p>	4	विश्लेषणात्मक
<p>(क)</p> <p>क) सभा</p> <p>ख) जवाब</p> <p>ग) रिश्तेदार</p> <p>घ) मतलब</p>	<p>(ख)</p> <p>उत्तर</p> <p>दरबार</p> <p>अर्थ</p> <p>संबंधी</p>				
प्र.7	<p>सही करके लिखो</p> <p>1. राजा पांडु के पांच बेटा थे।</p> <p>.....</p> <p>2. गाँववाले राक्षस से बहुत परेशान था।</p> <p>.....</p> <p>3. राक्षस को बड़ा गुस्सा आई।</p> <p>.....</p> <p>4. दोनों में जमकर लड़ाई शुरू हो गया ।</p> <p>.....</p>	2	भाषायी कौशल		



ARMY PUBLIC SCHOOL GWALIOR

CLASS II

SESSION 2019-20

WORKSHEET



Subject: Maths

Assignment No. : 3

Allotment Date: 1st February

Submission Date: 15th February

S. NO.	QUESTIONS	MARKS	NATURE
1	<p>Fill in the blanks</p> <p>(a) 1 litre = _____ millilitre</p> <p>(b) 1 kilogram = _____ grams</p> <p>(c) 25cm + 75cm= _____ cm.</p> <p>(d) 1 Litre = _____ ml + 700 ml</p>	(4)	Understanding
2	<p>Write true or false:</p> <p>(a) Length of a pen can be measured in cm. (.)</p> <p>(b) Unit for measuring liquids is meter. (.)</p> <p>(c) Short form for kilogram is kg. (.)</p>	(4)	HOTS

	(d) 1m = 1000 cm. (.)		
3.	<p>Tick the correct options:</p> <p>(a) weight of papaya</p> <p>(i) 5 gram (ii) 750 gram</p> <p>(b) Cloth needed to make a shirt</p> <p>(i) 20 cm (ii) 3 m</p> <p>(c) Amount of water in a glass</p> <p>(i)250ml (ii) 25 L</p> <p>(d) Weight of a book</p> <p>(i) 4 Kg. (ii)400 g</p>	(4)	Critical thinking
4	<p>Do as directed :-</p> <p>(a) Subtract:</p> <p>1)120mL from 250 mL</p> <p>2)401 g from 525g</p>	(4)	Interdisciplinary

	<p>(b) Add:</p> <p>1) 325g and 250g</p> <p>2) 328mL and 250 ml</p>		
5	<p>Solve the following question:-</p> <p>1. A goat gives 7 liters milk. Another goat gives 6 litres milk. How much milk do they give altogether?</p> <p>2. A man bought 3 kg 250 g rice. He used 2 kg 500 g from it. How much rice is left ?</p>	(4)	Interdisciplinary



ARMY PUBLIC SCHOOL, GWALIOR

CLASS- II

SESSION 2019-20

WORKSHEET



Subject: EVS


Assignment No: 3

Allotment Date: 1st February

Submission Date: 15 February

S. NO.	QUESTIONS	MARKS	NATURE
1	<p>Fill in the blanks:</p> <p>(i) In our solar system the-----is the largest object.</p> <p>(ii) Spring is also known as-----season.</p> <p>(iii) We see many colorful flowers in the garden in the----- season.</p> <p>(iv) Sundial helps us to know the-----.</p> <p>(v) The Earth's permanent satellite is-----.</p>	5	Information
2	<p>Write True or False:</p> <p>(i) The sun is the closest star to the earth. <input type="checkbox"/></p> <p>(ii) The moon has its own light. <input type="checkbox"/></p> <p>(iii) The rainbow has six colors. <input type="checkbox"/></p> <p>(iv) In winter season, we see fog. <input type="checkbox"/></p>	5	Understandin g

	(v) We carry an umbrella in the rainy season. <input type="checkbox"/>										
3	<p>Give answer to the following questions</p> <p>(i) What do you usually do in winter?</p> <p>_____</p> <p>_____</p>	2	Interdisciplina ry								
	<p>(ii) What does the earth revolve?</p> <p>_____</p> <p>_____</p>	2	Analytical Skill								
	<p>(iii) What do you usually wear when it's raining?</p> <p>_____</p> <p>_____</p>	3	HOT								
4	<p>Match the following</p> <table style="width: 100%; border: none;"> <tr> <td style="text-align: center;">A</td> <td style="text-align: center;">B</td> </tr> <tr> <td>(i) January</td> <td>Summer</td> </tr> <tr> <td>(ii) March</td> <td>Winter</td> </tr> <tr> <td>(iii) May</td> <td>Spring</td> </tr> </table>	A	B	(i) January	Summer	(ii) March	Winter	(iii) May	Spring	3	Critical Thinking
A	B										
(i) January	Summer										
(ii) March	Winter										
(iii) May	Spring										



ARMY PUBLIC SCHOOL GWALIOR

CLASS- II

SESSION 2019-20

WORKSHEET



Subject: Computer

Assignment No. : 2

Allotment Date: 1st February

Submission Date: 15 February

S.NO.	QUESTIONS	MARKS	NATURE
1	<p>Answer the following questions:</p> <p>a) What is the use of polygon tool?</p> <hr/> <p>a) What is notepad?</p> <hr/> <hr/> <p>b) What is the use of a calculator?</p> <hr/> <hr/> <p>c) What are storage device?</p> <hr/> <hr/> <p>d) Name different storage devices used with computer?</p> <hr/> <hr/>	5 x 1=5	Information

2	<p>Write 'T' for True and 'F' for False statements.</p> <p>a) Text tool is used to delete a drawing. <input type="checkbox"/></p> <p>b) Curve tool is used to draw straight lines <input type="checkbox"/></p> <p>c) You can type your name in notepad. <input type="checkbox"/></p> <p>d) Notepad is used to draw pictures with a mouse. <input type="checkbox"/></p> <p>e) You cannot type text in paint program. <input type="checkbox"/></p>	5 x 1=5	Understanding
3	<p>Fill in the blanks:</p> <p>a) _____ is a circular shaped disc.</p> <p>b) A _____ is also called Flash Drive.</p> <p>c) Calculator is used to do _____</p> <p>d) _____ program is used to type in the computer.</p> <p>e) _____ is fixed inside the CPU.</p>	5x 1=5	HOT
4	<p>Write the Full forms of the following:</p> <p>a) DVD _____</p> <p>b) PD _____</p> <p>c) CD _____</p> <p>d) HD _____</p> <p>e) FD _____</p>	5x1=5	Interdisciplinary

