



ARMY PUBLIC SCHOOL GWALIOR
CLASS - II
ACADEMIC SESSION 2023-24
WORKSHEET (SELF –ASSESSMENT)



Subject: English

Assignment No. : 2

Allotment Date: 20 July 2023

S. NO.	QUESTIONS	MARKS	NATURE
1.	Write the meaning of the following words: (i) Happy - _____ (ii) Sick - _____ (iii) Boast - _____ (iv) Praise - _____ (v) Vet - _____	5x1=5	Information
2.	Complete the spellings: (i) S _ _ r _ _ _ t (ii) p _ _ _ _ t (iii) P _ _ _ a _ _ _ s _ _ _ (iv) L _ _ _ _ v _ _ _ _ ly (v) E _ _ _ _ jo _ _ _ _	5x0.5=2.5	Literacy skills
3.	Read the following sentences carefully. Identify that underlined word is proper noun(P) or common noun(C). (i). <u>Reena</u> wore a pretty dress. <input type="checkbox"/> (ii) My <u>uncle</u> is a dentist. <input type="checkbox"/> (iii) The <u>girls</u> are busy. <input type="checkbox"/> (iv) <u>India</u> is a beautiful Country. <input type="checkbox"/> (v) Sanya lives in <u>Udaipur</u> . <input type="checkbox"/>	5x0.5=2.5	Problem Solving

<p>4.</p>	<p>Answer the following questions.</p> <p>(i)What has happened to the dog?</p> <hr/> <hr/> <hr/> <p>(ii) What is the purpose of the” HELP CLUB”?</p> <hr/> <hr/> <hr/> <hr/>	<p>2x2=4</p>	<p>Understanding</p>
<p>5.</p>	<p>Kapil and Varun went to the park . There they saw a boy plucking flowers for fun .What should they do?(Choose any one option).</p> <hr/> <p>I-Push the boy and scare him.()</p> <hr/> <p>II-.Tell the boy it is wrong to pluck the flower for fun.()</p> <hr/> <p>III-Shout at the boy and threaten him.()</p> <hr/>	<p>1x1=1</p>	<p>HOTS</p>
<p>6.</p>	<p>Fill in the blanks with demonstrative pronoun.</p> <p>(i) -----are my candies . (FAR)</p> <p>(ii) -----is a beautiful aquarium . (NEAR)</p> <p>(iii) -----flags are colourful.(NEAR)</p> <p>(iv)-----is my bat,(NEAR)</p> <p>(v)-----is a beautiful castle.(FAR)</p>	<p>5x1=5</p>	<p>Inquiry</p>



ARMY PUBLIC SCHOOL GWALIOR
CLASS - II
ACADEMIC SESSION 2023-24
WORKSHEET (SELF -ASSESSMENT)




Subject: Hindi

Assignment No. : 2

Allotment Date: 20 July 2023

संख्या		अंक	प्रकृति
प्र - 1	<p>वाक्यपूरेकरो-</p> <p>१. नमकबहुत-----दाममेंबिकरहाथा।</p> <p>२. बोझकमहोजानेसेगटरू-----हुआ।</p> <p>३. -----तोबोझसेझुकाजारहाहूँ।</p> <p>४. गटरूरास्ते ----- सोचताजारहाथा।</p>	4x1=4	बोधात्मक
प्र -2	<p>एककेअनेकलिखिए।</p> <p>१. पेंसिल -</p> <p>२. झूला -</p> <p>३. किताब</p> <p>४. बच्चा.....</p>	4x0.5=2	सूचनापरक
प्र-3	<p>शब्दों को सही क्रम में लिखकर वाक्य दोबारा लिखो ।</p> <p>१. है बाहर मौसम सुहाना कितना ।</p> <p>.....</p> <p>.....</p> <p>२. मनु खेलेंगे और अब साँवरी साथ हमारे</p> <p>.....</p> <p>.....</p> <p>३. है कोई साथ नहीं खेलता हमारे ।</p> <p>.....</p> <p>.....</p>	3x 1=3	गहन सोच और समस्या समाधान

<p>प्र-4</p>	<p>निम्न शब्दों के अर्थ लिखो ।</p> <p>१. अचानक- -----</p> <p>२. मोची- -----</p> <p>३. रद्दी- -----</p> <p>४. तीखी- -----</p>	<p>0.5x4=2</p>	<p>भाषाई कौशल</p>
<p>प्र-5</p>	<p>नीचे दिए गए प्रश्नों के उत्तर लिखो ।</p> <p>१. पानी में जाकर रुई भारी क्यों होगई ?</p> <p>.....</p> <p>.....</p> <p>.....</p> <p>.....</p> <p>२. व्यापारी ने बाजार से नमक क्यों खरीदा?</p> <p>.....</p> <p>.....</p> <p>.....</p> <p>.....</p> <p>३. खिलौने क्यों उड़ा सथे?</p> <p>.....</p> <p>.....</p> <p>.....</p> <p>.....</p>	<p>3x2=6</p>	<p>विश्लेशणात्म क</p>
<p>प्र-6</p>	<p>निम्न लिखित चित्र के आधार पर दिए गए शब्दों से वाक्य बनाओ।</p>  <p>१. झूला-</p> <p>.....</p> <p>.....</p>	<p>3x1=3</p>	<p>उच्चस्तरीय चिंतन</p>

	<p>2. पेड़ -</p> <p>3. दुकान-</p>		
--	---	--	--



ARMY PUBLIC SCHOOL GWALIOR
CLASS - II
ACADEMIC SESSION 2023-24
WORKSHEET (SELF –ASSESSMENT)



Subject: Mathematics
Allotment Date: 20 July 2023

Assignment No. : 2

S. NO.	QUESTIONS	MARKS	NATURE
		20	
1	Fill in the blanks:- 1. is a sign of addition. 2. When we add zero to any number, the sum is the number 3. Write the number after 865	4x1=4	Understanding
2	State true or false (a) (-) is the sign of subtraction. We call it minus. () b) The position of A in BALLOON is third. () c) When we subtract 0 from any number ,the difference is the number itself. () d) $76-76=0$ ()	4x1=4	HOTS
3	Tick the correct answer- i) a) Tick the terms which means subtraction- a).Total b) Minus c) add ii) Add- $300 + 300 =$ a) 300 b) 60 c)500	2x1=2	Critical thinking

4	<p>Solve the following questions-</p> <p>a) Which is smallest 3 digit number? Ans - _____</p> <p>b) Write the face value of 5 in 578. Ans-_____</p> <p>c)Write in ascending order- 684, 293, 393, 182, Ans – _____</p> <p>d) Write in expanded form-</p> <p>2 5 4 = _____ + _____ + _____</p> <p>7 6 9 = _____ + _____ + _____</p> <p>e) Encircle the biggest number and cross the smallest number:</p> <p>i) 136 543 334 454 844</p> <p>ii) 453 784 392 194 649</p>	5X1=5	Interdisciplinary
5.	<p>Solve the following questions- (Word problems)</p> <p>(a)1. Pratibha read 64 pages of a novel on Saturday and 35 pages on Sunday. How many pages in all did she read in these 2 days? Solution-</p> <p>2.In a grocery shop, there are 224 bags of wheat floor and 317 bags of rice.How many bags are there in the shop? Solution -</p>	2x2.5=5	(Problem solving)



ARMY PUBLIC SCHOOL GWALIOR
CLASS - II
ACADEMIC SESSION 2023-24
WORKSHEET (SELF -ASSESSMENT)



Subject: EVS


Assignment No. : 2

Allotment Date: 20 July 2023

S.NO.	QUESTIONS	MARKS	NATURE
		20	
1.	Choose the correct option. 1. It gives us wool. a. Horse b. Sheep c. Buffalo	1X1=1	Information
2.	Fill in the blanks. 1. Only _____ generations live together in a nuclear family. 2. _____ is a natural fibre.	1X2=2	Understanding
3.	Why our sense organs are called windows to the world? _____ _____	2X1=2	HOTS
4.	Define the following terms. i. Body building food-	2X2=4	Interdisciplinary

	<hr/> <hr/> <hr/> <p>ii. Hand looms-</p> <hr/> <hr/> <hr/>		
5.	<p>i. What is the difference between a nuclear and a joint family?</p> <hr/> <hr/> <hr/> <hr/>	3X2=6	Analytical skill
	<p>i. What are uniforms?</p> <hr/> <hr/> <hr/> <hr/>		Evaluation
6.	<p>List any three things that you do to help your family.</p> <hr/> <hr/> <hr/>	5X1=5	Comprehension

	<hr/> <hr/> <hr/> <hr/> <hr/> <hr/> <hr/> <hr/>		
--	---	--	--



ARMY PUBLIC SCHOOL GWALIOR
CLASS - II
ACADEMIC SESSION 2023-24
WORKSHEET (SELF –ASSESSMENT)




Subject: G.K

Assignment No. : 2

Allotment Date: 20 July 2023

S No.	QUESTIONS	MARKS	NATURE
1.	Fill in the blanks : (Heart, Amritsar, Litti Chokha, Owllet) (i). The baby of Owl is called _____. (ii). _____ is the famous dish of Bihar. (iii). Golden Temple is located in _____. (iv). _____ is an internal body part.	4x0.5=2	Understanding
2.	Tick the correct answer: (i). What is the capital of Pakistan? (a). Washington DC () (b). Islamabad () (c).Paris () (ii). This is a huge stone structure, located in Egypt. (a). Pyramid of Giza() (b). Tower Bridge () (c). Opera House ()	2x1=2	Critical thinking
3	Match the following- Column 'A' (i). Punjab (ii). Festival of Colours (iii). Gujarat (iv). Medicines Column 'B' (a). Chemist shop (b). Fafda jalebi (c). Holi (d). Sarson ka Saag	4x0.5=2	Thinking skill

4	Mark the following statements as true or false : (i). Rhinoceros is fond of eating fish and honey. () (ii). Cow baby is called cub. () (iii). Idli Sambhar is the famous dish of Tamil Nadu. () (iv). The Venus is the third planet from the sun. ()	4x0.5=2	Observation
5	Write any 2 precautions one should take to prevent spread of corona virus – Ans. _____ _____	2X1 =2	Interdisciplinary



ARMY PUBLIC SCHOOL GWALIOR
CLASS - II
ACADEMIC SESSION 2023-24
WORKSHEET (SELF –ASSESSMENT)



Subject: Computer

Allotment Date: 20 July 2023

Assignment No. : 2

S.NO.	QUESTIONS	MARKS	NATURE
1	<p>Tick the correct answer</p> <p>(i) A computer is a _____ device.</p> <p>a) Manual b) natural c) electronic</p> <p>(ii) In office, computer helps in _____ documents.</p> <p>a) Playing b) Drawing c) Printing</p> <p>(iii) Keyboard is an example of _____ device.</p> <p>a) input b) output c) storage</p> <p>(iv) _____ is the main storage device in a computer.</p> <p>a) Hard disk b) DVD c) pen drive</p>	0.5x4=2	Information
2	<p>Fill in the blanks-</p> <p>(i) _____ Computers are used in schools.</p> <p>(ii) _____ can be used by touching the screen with a finger.</p> <p>(iii) _____ is used to type words.</p> <p>(iv) A CD-ROM is _____ in shape.</p> <p>(v) At railway station, computer is used in booking _____.</p> <p>(vi) _____ is a portable data storage device.</p>	0.5x6=3	Understanding

3	Write True or False against the statements:- (i) Input devices are used to enter instruction. (ii) The output we get on a paper is called soft copy. (iii) Laptop is very big in size. (iv) Computers can be used to make drawings. (v) The brain of the computer is Monitor. (vi) Keyboard is used to store data permanently.	$0.5 \times 6 = 3$	Interdisciplinary
4	Answer in one word - (i) Write any two use of computer? (ii) How are computers used in entertainment? (iii) Write one use of computers in bank? (iv) Name any two input device?	$0.5 \times 4 = 2$	Critical Thinking and Problem Solving




ARMY PUBLIC SCHOOL GWALIOR
CLASS - II
ACADEMIC SESSION 2023-24
WORKSHEET (SELF -ASSESSMENT)



Subject: Art and Work Education
Allotment Date: 20 July 2023

Assignment No. : 2

S. NO.	QUESTIONS	MARKS	NATURE
		10	
1.	Draw the zig-zag line.	2	Creative
2.	Draw the Dashes line.	2	Creative
3.	Draw the Loops line.	2	Creative
4.	Draw the Hills line.	2	Creative
5.	Draw the clouds line.	2	Creative



ARMY PUBLIC SCHOOL GWALIOR
CLASS - II
ACADEMIC SESSION 2023-24
WORKSHEET (SELF -ASSESSMENT)




Subject: Health and Physical Education
Allotment Date: 20 July 2023

Assignment No. : 2

S.NO.	QUESTIONS	MARKS 10	NATURE
TRUE OR FALSE			
1.	Jumping helps to strengthens your lower body. (True/False)	1	Information
2	Running and jumping are outdoor activities. (True/False)	1	Information
3	Running on roads and on floor can be dangerous. (True/False)	1	Information
4	You should always land on your toes while jumping (True/False)	1	Information
MCQ'S			

5	<p>Running and jumping focuses on _____?</p> <p>A) Head</p> <p>B) Hands</p> <p>C) Lower Body</p> <p>D) None of the above</p>	1	Understanding
6	<p>Running regularly helps to make you _____?</p> <p>A) Healthy</p> <p>B) Lazy</p> <p>C) Fatty</p> <p>D) None of these</p>	1	Understanding
Write the answer of the following.			
7	<p>What do you mean by Jumping?</p> <p>Ans-</p>	2	Information
8	<p>Name two types of jumps.</p> <p>Ans-</p>	2	Information



ARMY PUBLIC SCHOOL GWALIOR
CLASS - II
ACADEMIC SESSION 2023-24
WORKSHEET (SELF –ASSESSMENT)



Subject: Music and Dance

Assignment No. : 2

Allotment Date: 20 July 2023

S.NO.	QUESTIONS	MARKS	NATURE
		10	
1	How many types of Asyukt Hast Mudras are there? a) 20 b) 28	1	Information
2	How many types of Hast Mudras are there? a) 4 b) 2	1	Understanding
3	How many matras are there in teentaal? a) 27 b) 16	1	Critical thinking
4	Which is the basic taal of kathak ? a). Kahrwa taal b). Teentall	1	Understanding
5	For whom Bhoomi Pranam is done ? a). Sky b). Earth	1	Critical thinking
6	How many Swara's are there in music? a). 7 b) 6	1	Information
7	Which Swar is on second place? a). Re b). Ga	1	Understanding
8	Complete the line of song: Itni Shakti Humein dena _____. a). Data b). Mata	1	Critical thinking
9	Complete the line of song: _____ka vishwas kamjor ho na. a) Man b) Tan	1	Information
10	Complete the line of song: Hum chalein _____ raste pe Humse. a). Nek b). Ek	1	Understanding