




**ARMY PUBLIC SCHOOL GWALIOR**  
**CLASS - IV**  
**ACADEMIC SESSION 2023-24**  
**WORKSHEET (SELF –ASSESSMENT)**

Subject: English

Assignment No. : 2

Allotment Date: 20 July 2023

S. No.	QUESTIONS	MARKS	NATURE
1	<p>Look at the picture and write four sentences with the help of the given hints.</p> <p>[Hints: Garden, Digging, Spade, Father, Mother, Boy, House]</p> 	4 Marks	Information
2	<p>Tick the correct answer</p> <p><b>1 What did the boy want to keep himself Warm?</b></p> <p>a) A boat                      b) A house c) A blanket                  d) A heater</p> <p><b>2 The official language of Goa is</b></p> <p>a) Hindi                        b) Tamil c) Konkani                    d) Punjabi</p>	2 Marks	Understanding
3	<p><b>Answer the following question-</b></p> <p>1. Mention any two important reasons that led Elias to poverty.</p>	3 Marks	HOT

	<p>2. What is being described in the first stanza of the poem? (Where Go the Boats?)</p> <p>3. What did the family buy before returning to the hotel?</p>		
4	<p><b>Grammar:</b> <b>Fill in the blanks as directed-</b></p> <p>a) The _____ is lying on the table. (Use Common noun)</p> <p>b) _____ phone is ringing. (Use Article)</p> <p>c) _____ is the best policy. (Use Abstract noun)</p>	3 Marks	Interdisciplinary
5	<p><b>Rewrite the following sentences as directed-</b></p> <p>a) The <b>wizard</b> cast a spell. (Change the gender of the highlighted word)</p> <p>b) The <b>chef</b> made a <b>pastry</b>. (Change the highlighted noun to its plural)</p> <p>c) The dog is licking <b>mine</b> paws. (Write the correct pronoun of the highlighted word)</p>	3 Marks	Analytical Skill
6	<p><b>Do as directed-</b></p> <p>The boy cut off the branches to build a house. <input type="checkbox"/> (State True or False)</p> <p>2.The river would flow for a _____ or more. (Fill up the blank-)</p>	2 Marks	Critical Thinking and Problem Solving
7	<p><b>Answer the following questions in one word-</b></p> <p>a) Who helped the little boy? _____</p> <p>b) What did the poet see a- floating on the river water? _____</p> <p>c) Who came to meet Muhammad Shah? _____</p>	3 Marks	Evaluation



**ARMY PUBLIC SCHOOL GWALIOR**  
**CLASS - IV**  
**ACADEMIC SESSION 2023-24**  
**WORKSHEET (SELF –ASSESSMENT)**



Subject: Hindi

Assignment No. : 2

Allotment Date: 20 July 2023

सं ख्या	प्रश्न	अंक	प्रकृति
प्र 1.	<p>दिए गए गद्यांश को पढ़कर उसके नीचे लिखे प्रश्नों के उत्तर लिखो-</p> <p>पुस्तकालय का अर्थ है पुस्तकें रखने का कक्ष। हर स्कूल और कॉलेज में पुस्तकालय होता है। पुस्तकालय में न केवल किताबें होती हैं, बल्कि अखबार, पत्र-पत्रिकाएँ, चार्ट आदि भी होते हैं। लोग पुस्तकालय में बैठकर मन-पसंद किताबें, अखबार और पत्र-पत्रिकाएँ पढ़ते हैं। हमारे स्कूल में एक बड़ा पुस्तकालय है। उसमें हिंदी अंग्रेजी, संस्कृत आदि भाषाओं की हजारों पुस्तकें, शब्दकोष, मानचित्र आदि हैं। बीच में एक बड़ी मेज़ है। हम वहीं बैठकर किताबें और पत्र-पत्रिकाएँ पढ़ते हैं। बुधवार को हमारी पुस्तकालय की कक्षा होती है। हमारे अध्यापक भी हमारे साथ आते हैं। हमें तस्वीरों वाली कहानी की किताबें पढ़ने में मजा आता है।</p> <p>प्र.1 पुस्तकालय में क्या-क्या चीजें होती हैं?</p> <p>-----</p> <p>प्र.2 बच्चे कहाँ बैठकर पढ़ते हैं?</p> <p>-----</p> <p>प्र.3 बच्चों को कैसी पुस्तकें पढ़ने में मजा आता है?</p> <p>-----</p>	3x1=3	बोधात्मक

प्र2	<p>इन शब्दों का वर्ण -विच्छेद करो –</p> <p>1 कुशाग्र _____</p> <p>2. चट्टानों _____</p> <p>3. पेड़ _____</p>	3x1=3	ज्ञानात्मक
प्र 3	<p>निम्नलिखित शब्दों के अर्थ लिखो –</p> <p>1. अध्यापक _____</p> <p>2. अभिलाषा _____</p> <p>3. श्रोता _____</p> <p>4. प्रकृति _____</p>	4x1=4	रचनात्मक
प्र 4	<p>सही क्रिया लिखकर वाक्य पूरे करो -</p> <p>क ) बत्तख पानी में -----</p> <p>ख ) बगीचे में रंग -बिरंगे फूल _____</p> <p>ग ) पक्षी आकाश में -----</p> <p>घ ) प्रकृति के सुंदर रंग -----</p>	4x1=4	सूचनात्मक
प्र 5	<p>(अ) निम्नलिखित प्रश्नों के उत्तर दो –</p> <p>(i) ) स्वामी विवेकानंद का जन्म कब और कहां हुआ?  .....  .....</p> <p>(ii) बच्चे कैसे लोगों की मदद करना चाहते हैं ?  .....  .....</p> <p>(iii) चिमटे का दाम सुनकर हामिद का दिल क्यों बैठ गया?  .....  .....</p> <p>(iv) संज्ञा किसे कहते हैं एवं इसके कितने प्रकार होते हैं?</p>	4x1=4	विश्लेषणात्मक

	..... ..... .....		
प्र 6	मूल्यपरक प्रश्न - प्रकृति को सुंदर बनाए रखने के लिए आप क्या-क्या कर सकते हैं ?  .....  .....  .....	2	उच्चस्तरीय चिंतन



**ARMY PUBLIC SCHOOL GWALIOR**  
**CLASS - IV**  
**ACADEMIC SESSION 2023-24**  
**WORKSHEET (SELF –ASSESSMENT)**



Subject: Mathematics

Assignment No. : 2

Allotment Date: 20 July 2023

S.NO.	QUESTIONS	MARKS	NATURE
1.	<p><b>Fill in the blanks:</b></p> <p>(i) Write the value of LXXII _____</p> <p>(ii) The difference between 856207 – 442510 _____</p> <p>(iii) _____ - 2567 = 3767</p> <p>(iv) 7567 + 3462 = _____</p> <p>(v) 25 / V = _____</p>	5×1=5	Understanding
2.	<p>(i) _____ is the greatest 6-digit number</p> <p>(ii) _____ has no symbol in Roman numerals</p> <p>(iii) 1100 round of to nearest thousand _____</p> <p>(iv) 100 less than 1000 is _____</p> <p>(v) LXV _____ XCV (&lt;,&gt; , =)</p>	5×1=5	Remembered
3	<p><b>Do as directed:</b></p> <p>(i) Add:</p> <p>a. 2681 + 5742 =</p> <p>b. 54621 + 8721 =</p> <p>(ii) Complete the following using addition properties</p> <p>a. 5555 + 43462 + 26461 = _____ + 5555 + 26461</p>	5×2=10	Critical thinking

	<p>b. <math>25601 + 0 = \underline{\hspace{2cm}}</math></p> <p>(iii) Write in ascending order:</p> <p>(a) 5250, 7826, 7946, 5540, 6958</p> <p>(b) 6250, 8142, 4576, 5743, 8875</p> <p>(iv) Convert into words:</p> <p>(a) 54782</p> <p>(b) 100561</p> <p>(v) Convert into numbers and subtract them and write the answer into words:</p> <p>(a) One lakh twenty-two thousand two hundred twenty-two and fifty thousand six.</p>		
<p><b>4.</b></p>	<p><b>Solve the following questions:</b></p> <p>(i) A village has 3200 mans, 3000 women and 4150 children. Find the total population of a village.</p> <p>(ii) A man has Rs 8550 with him. He buys a sofa set cost Rs 3510, a television of Rs 2200, how money is left with him.</p>	<p><b>2×2=4</b></p>	<p>Problem</p> <p>Solving</p>



**ARMY PUBLIC SCHOOL GWALIOR**  
**CLASS - IV**  
**ACADEMIC SESSION 2023-24**  
**WORKSHEET (SELF –ASSESSMENT)**

Subject: EVS

Assignment No. : 2

Allotment Date: 20 July 2023

S.NO	QUESTIONS	MARKS	NATURE
Q1	Choose the correct option. i). It is a master organ of our body. a. Stomach b Kidney c. Heart ii). Which people use sign language? a. Blind b. Deaf c. Lamé	2x0.5=1	Information
Q2	State whether following questions are 'True' or 'False'. i). Nose help us to sense different tastes. ii). Skeleton system provides shape and support to the body.	2X1=2	Understanding
Q3	Why are sense organs important for us? _____ _____ _____ _____ _____	1X2=2	HOT
Q4	i). Describe the process of respiration _____	2x2=4	Interdisciplinary



	<hr/> <hr/> <hr/> <p>ii) What is team spirit? Why is it important?</p> <hr/> <hr/> <hr/>		
<b>Q5</b>	<p>i). Write any two difference between a good touch and bad touch.</p> <hr/> <hr/> <hr/> <hr/> <hr/>	<b>3x2=6</b>	Analytical Skill
	<p>ii). Circle the odd word.</p> <p>a. Chess, Ludo, Carrom, volleyball</p> <p>b. Eyes, Nose, Skin, Lungs</p> <p>iii). How is our government helping special children?</p> <hr/> <hr/>		Evaluation

	<hr/> —		
<b>Q 6.</b>	<p>i. Write one function of small intestine?</p> <hr/> <p>ii. Why we should not hear loud music/sound?</p> <hr/> — <p>iii. Write one step how we can take care of our tongue.</p> <hr/> — <p>iv. What does indoor game mean?</p> <hr/> — <p>v. Name two neighbouring countries of India?</p> <hr/> —	<b>5x1=5</b>	Comprehension




**ARMY PUBLIC SCHOOL GWALIOR**  
**CLASS - IV**  
**ACADEMIC SESSION 2023-24**  
**WORKSHEET (SELF –ASSESSMENT)**



Subject: G.K

Assignment No. : 2

Allotment Date: 20 July 2023

S.NO	QUESTIONS	MARKS	SKILLS
1.	<p><b>Answer the following one-word questions:</b></p> <p>(a) Name any two people who took part in the Rebellion of 1857. _ Ans. _____</p> <p>(b) Name the official residence of the President of India. Ans. _____</p> <p>(c) Who was the third ruler of the Tuluva Dynasty that ruled the Vijayanagara Empire of southern India? Ans. _____</p> <p>(d) Which city of Bihar can safely be called India's best gift to the global art scene? Ans. _____</p> <p>(e) Which city creates and sells stone-embedded lac bangles in the narrow lanes of the walled city? Ans. _____</p>	5	Informative and general awareness
2.	<p><b>Identify the following pictures.</b></p> 	5	Identification and general awareness

(a) \_\_\_\_\_



(b) \_\_\_\_\_




(c) \_\_\_\_\_



(d) \_\_\_\_\_



(e) \_\_\_\_\_



**ARMY PUBLIC SCHOOL GWALIOR**  
**CLASS - IV**  
**ACADEMIC SESSION 2023-24**  
**WORKSHEET (SELF –ASSESSMENT)**

**Subject: Computer**

**Assignment No. : 2**

**Allotment Date: 20 July 2023**

S.NO.	QUESTIONS	MARKS-10	NATURE
1	Choose and write the correct option (MCQ):-  1. The operating system developed by Microsoft Corporation is _____ a) Windows b) Ubuntu c) Mac OS  2. The final screen of Windows is known as _____. a) Taskbar b) Pointer c) Desktop  3. Windows 10 resizes the tiles in _____ sizes. a) Four b) Five c) Six  4. _____ option can add an app permanently on the Start menu. a) Pin to Start b) Pin to Taskbar c) Pin to Desktop  5. _____ screen prevents others from accessing your computer. a) Desktop b) Lock c) Dark	1/2x5=2 ½	Information

2	Fill in the blanks- <ol style="list-style-type: none"> <li>1. Windows _____ screen appears after entering the password.</li> <li>2. We can customize the _____ menu according to the way we want.</li> <li>3. _____ or the Task View is used to switch between the running apps.</li> <li>4. We can lock our computer to ensure its _____</li> <li>5. _____ option displays multiple copies of the same image in tiles format.</li> </ol>	1/2x5=2 ½	Understanding
3.	Write 'T' for True and 'F' for False statements. <ol style="list-style-type: none"> <li>1. Booting is the process of starting and restarting a computer.</li> <li>2. Tiles are organized into groups with titles at the top.</li> <li>3. We can pin the app to the Start menu, which we use frequently.</li> <li>4. We cannot switch between the running apps.</li> <li>5. We cannot change the background of the desktop.</li> </ol>	1/2x4=2	Understanding
4.	<b>Answer the following questions:-</b> <ol style="list-style-type: none"> <li>1. What are the features of Windows 10?</li> <li>2. Name the ways to switch between different running apps.</li> <li>3. Name the different ways to set positioning of wallpaper on desktop.</li> </ol>	1x3=3	Evaluation



**ARMY PUBLIC SCHOOL GWALIOR**  
**CLASS - IV**  
**ACADEMIC SESSION 2023-24**  
**WORKSHEET (SELF –ASSESSMENT)**

**Subject: Dance and Music**  
**Allotment Date: 20 July 2023**

**Assignment No. : 2**

S.NO.	QUESTIONS	MARKS 10	NATURE
1	In Kathak, which term refers to single beats or steps? a) Ekgun b) Chaugun	(1)	Information
2	What does the term "Dogun" signify in Kathak? a) Double beats or steps b) Triple beats or steps	(1)	Understanding
3	Which term in Kathak refers to a rhythm with four beats or steps? a) Ekgun b) Chaugun	(1)	Critical thinking
4	Which term represents a combination of fast footwork in Kathak? a) Ekgun b) Chaugun	(1)	Understanding
5	Which term is used to describe a combination of three beats or steps in Kathak? a) Ekgun b) Chaugun	(1)	Critical thinking
6	How many main swaras are there in music ? A) 8 B) 7	(1)	
7	What is the first swar in music ? A) Sa B) Re	(1)	Creative thinking  Information

<b>8</b>	Who invented sangeet ? A) Lord shiva B) Godess saraswati	(1)	Understanding
<b>9</b>	How many singers are in Duet ? A) 5 B) 2	(1)	
<b>10</b>	What type of song shows pride in our country? A) Folk B) Patriotic	(1)	Information






**ARMY PUBLIC SCHOOL GWALIOR**  
**CLASS - IV**  
**ACADEMIC SESSION 2023-24**  
**WORKSHEET (SELF –ASSESSMENT)**

Subject: Art and Work Education  
Allotment Date: 20 July 2023

Assignment No. : 2

S.NO	QUESTIONS	MARKS	SKILLS/ COMPETENCIES
1.	What is the shape with four equal sides?  a) Rectangle  b) <b>Square</b> c) Triangle	1	Creativity
2.	Which of these is a basic shape?  a) Cube b) <b>Circle</b> c) Sphere	1	Creativity
3.	A cube is a _____.  a) One dimensional shape b) Two dimensional Shape c) <b>Three dimensional Shape</b>	1	Creativity
4.	What is the shape of a football?  a) Cube b) <b>Sphere</b> c) Cuboid	1	Creativity
5.	What is the shape of a birthday cap?  a) <b>Cone</b> b) Square c) Circle	1	Creativity
6.	How many right angles does a rectangle have?  a) 1	1	Creativity

	<p>b) 2</p> <p>c) 4</p> <p>d) 5</p>		
7.	<p>A triangle is a 2D figure:</p> <p>a) true</p> <p>b) false</p>	1	Creativity
8.	<p>Which of these is a three dimensional shape?</p> <p>a) Rectangle</p> <p>b) cone</p> <p>c) square</p>	1	Creativity
9.	<p>Is Cuboid is a 3D form of rectangle?</p> <p>a) True</p> <p>b) False</p>	1	Creativity
10.	<p>What shape is this?</p>  <p>a) Triangle</p> <p>b) Oval</p> <p>c) Rectangle</p> <p>d) Circle</p>	1	Creativity



**ARMY PUBLIC SCHOOL GWALIOR**  
**CLASS - IV**  
**ACADEMIC SESSION 2023-24**  
**WORKSHEET (SELF –ASSESSMENT)**

Subject: Health and Physical Education

Assignment No. : 2

Allotment Date: 20 July 2023

S.NO	QUESTIONS	MARKS	SKILLS/COMPETENCIES
1.	<p><b>Tick The Correct Answer</b></p> <p>Q-1- Time duration of Kabaddi match ?</p> <p>a.60 Minutes</p> <p>b.50 Minutes</p> <p>c.40 Minutes</p> <p>d.30 Minutes</p> <p>Q-2 Kabaddi originated in which country?</p> <p>a.India</p> <p>b.Pakistan</p> <p>c.France</p> <p>d.Bhutan</p> <p>Q-3- Full form of PKL is?</p> <p>a.Pro kabaddi league</p> <p>b.Professional kabaddi league</p> <p>c.Pacific kabaddi league</p> <p>d.Point kabaddi league</p> <p>Q-4- How many players play in Kabaddi match?</p> <p>a.12</p> <p>b.10</p> <p>c.08</p> <p>d.07</p>	4	

<p><b>2</b></p>	<p><b><u>Fill in the blanks</u></b></p> <p>Q-5 Pro kabaddi league started in_____.(2015,2014)</p> <p>Q-6 There are_____ halves in Kabaddi(1,2)</p> <p>Q-7- Kabaddi originated in _____ (India,france)</p>	<p><b>3</b></p>	
<p><b>3</b></p>	<p><b><u>True False</u></b></p> <p>Q-8- Players play during the match of kabaddi?  <b>A.</b> True  <b>B.</b> False</p> <p>Q-09- Bangladesh is the current world champion of kabaddi?  <b>d)</b> True  <b>e)</b> False</p> <p>Q-10 Kabaddi is a body contact game.?  <b>A.</b> True  <b>B.</b> False</p>	<p><b>3</b></p>	