



ARMY PUBLIC SCHOOL GWALIOR
CLASS - V
ACADEMIC SESSION 2023-24
WORKSHEET (SELF –ASSESSMENT)

Subject: English

Assignment No. : 2

Allotment Date: 20 July 2023

S. NO.	QUESTIONS	MARKS	NATURE
1.	<p>Read the following paragraph and answer the following questions:</p> <p>When reading a paragraph in English, it is important to first identify the main idea. The main idea is usually stated in the opening sentence, which is known as the "Topic Sentence". The rest of the paragraph will typically provide supporting details. These can include facts, statistics, personal stories, or examples.</p> <p>(i) Fill in the blank: The rest of the paragraph will.....provide supporting details.</p> <p>(ii) Write the opposite word of "closing" from the above paragraph.</p> <p>.....</p> <p>(iii) What do you mean by "Topic sentence"?</p> <p>.....</p> <p>.....</p> <p>.....</p>	3	Reading skills / Understanding
2.	<p>Make sentences using following words:</p> <p>(i) whitewash</p> <p>.....</p> <p>(ii) soldier</p> <p>.....</p>	2	Critical thinking

3.	<p>Fill in the blanks using the given options:</p> <p>(unruffled, back-bedroom, delighted)</p> <p>(i) The poet in the poem “The Good Play” made boats with.....chairs.</p> <p>(ii) Aunt Polly was.....as the wall was painted spotlessly white.</p> <p>(iii) Nehru told his daughter Indira to be strong and.....</p>	3	Understanding and Analytical skills
4.	<p>Answer the following question:</p> <p>(i) What message do you get from the chapter “A letter from a Father to his Daughter”?</p> <hr/> <hr/> <hr/> <hr/> <hr/>	2	HOTS
5.	<p>Answer the following questions:</p> <p>Q1. Do you think Woloda was really proud as his younger brother thought?</p> <p>.....</p> <p>.....</p> <p>.....</p> <p>.....</p> <p>.....</p> <p>Q2. How could the great leaders of India during its freedom movement inspire one and all to come out of their shells and become India’s soldiers?</p>	2	HOTS

.....

.....

.....

.....

6. **Fill in the blanks with the hints given in the bracket:**


(i) I purchased precious.....ear rings. (Fill a suitable material noun)

(ii) My brother is..... than any other boy of his class. (Fill the suitable degree of Adjective of the word “clever”).

(iii)Pacific Ocean deeper than the Indian Ocean. (Fill the suitable Article).

(iv)many oranges are there in the basket? (Fill in with suitable Interrogative Pronoun).

7. **Observe the following picture and write eight sentences about it.**



4 **Communication skills**

--	--	--	--



ARMY PUBLIC SCHOOL GWALIOR
CLASS- V
ACADEMIC SESSION 2023-24
WORKSHEET (SELF-ASSESSMENT)


Subject: Hindi

Assignment No. : 2

Allotment Date: 20 July 2023

S. No.	Questions	Marks	Nature
1.	निम्नलिखित शब्दों के विपरीतार्थक शब्द लिखो- (i) जीवन - (ii) सुखी - (iii) अन्याय -	3x1= 3	बोधात्मक
2.	निम्नलिखित शब्दों के अर्थ लिखो - (i) मर्यादा - (ii) समुदाय- (iii) शुचि - (iv) तनाव	4x1=4	ज्ञानात्मक
3.	निम्नलिखिए शब्दों का एक- एक उदाहरण दीजिये- (i) जातिवाचक संज्ञा - (ii) व्यक्तिवाचक संज्ञा - (iii) भाववाचक संज्ञा -	3x1=3	रचनात्मक
4.	दिए गए शब्दों के समानार्थक शब्द लिखिए- (i) धरती - (ii) आँख - (iii) शिष्य - (iv) अन्न	4x1=4	सूचनात्मक
5.	निम्नलिखित शब्दों के दो-दो उचित उदाहरण दीजिये-	2x2=4	विश्लेषणात्मक

	(i) संयुक्त व्यंजन - (ii) आगत व्यंजन -		
6.	हमारे आसपास बहुत से जरूरतमंद तथा निर्बल लोग होते हैं। आप उनकी मदद कैसे करेंगे?	2x1=2	उच्चस्तरीयचिंतन



ARMY PUBLIC SCHOOL GWALIOR
CLASS -V
ACADEMIC SESSION 2023-24
WORKSHEET (SELF –ASSESSMENT)

Subject: Mathematics

Assignment No. : 2

Allotment Date: 20 July 2023

S. NO.	QUESTIONS	MARKS	NATURE
1	Fill in the blanks: (i) 27 ___ XX (> = <) (ii) 100 million = _____ crores	2x1=2	Understanding
2	Write 'True' or 'False': (i) $101 \times 0 = 101$ (T/F) (ii) C stands for 1000 (T/F)	2x1=2	Interpretation
3	Tick the correct answer from the given options: (i) Add: 2080706 + 3887765 (a) 6868471 (b) 5968471 (c) 5868471 (d) 7868471 (ii) The greatest numeral in the given set is: (a) XXXV (b) XXIX (c) XLIV (d) LX (iii) How many times 40 is 1600 (a) 30 (b) 40 (c) 10 (d) 20 (iii) The place value of 5 in 76520619 is _____ (a) 5000	5x1=5	Critical thinking

	<p>(b) 50000 (c) 500000 (d) 500</p> <p>(iv) The difference of place value of 8 in 48785635</p> <p>(a) 792000 (b) 808000 (c) 7920000 (d) 8080000</p> <p>(v) $432570 - 87391 = \underline{\hspace{2cm}}$</p> <p>(a) 345169 (b) 445189 (c) 345179 (d) 245159</p>		
4	<p>Solve the following questions: -</p> <p>Solve the following:</p> <p>(i) Multiply 285 by 89</p> <p>(ii) Write the number name for: Four crore twenty lakh eight hundred five</p> <p>(iii) Write the number according to both Indian and International system of numeration: 35773901</p> <p>(iv) Convert the following numbers to Roman numerals: (a) 701 (b) 1570</p> <p>(v) Subtract and write the number sentence: $9575248 - 4944726$</p>	5x1=5	Interdisciplinary
5	<p>Solve the following questions:</p> <p>(i) Arrange the following in descending order: 8775923, 978919, 3023785, 423610</p> <p>(ii) Arrange the given Roman numerals in ascending order: VII, II, XIV, X</p> <p>(iii) The population of a country in 1990 was 906450600 and next year it is increased by 9889700. What was the population of that country in the year of 1991?</p>	2x3 =6	Problem Solving



ARMY PUBLIC SCHOOL GWALIOR
CLASS -V
ACADEMIC SESSION 2023-24
WORKSHEET (SELF –ASSESSMENT)



Subject: Environmental studies

Assignment no. : 2

Allotment Date: 20 July 2023

S. NO.	QUESTIONS	MARKS	NATURE
Q1	Choose the correct option. I. It is an individual game. a. Football b Hockey c. Swimming II. Our body temperature is? a. 98.4 F b. 37 ⁰ C c. Both a and b	2x0.5=1	Information
Q2	Choose the correct option. 1. Compensation is given by----- a. government b. contractor	2X1=2	Understanding

	<p>c. neighbour</p> <p>2. It is essential for playing sports.</p> <p>a. Cheating</p> <p>b. Team spirit</p> <p>c. Both a and b</p>		
Q3	<p>Which job will you take up when you will grow up?</p> <p>Why?</p> <hr/> <hr/>	1X2=2	HOT
Q4	<p>i. How can we help special people?</p> <hr/> <hr/> <p>ii. Why do we blow on hot soup to cool?</p> <hr/> <hr/>	2x2=4	Interdisciplinary
Q5	<p>i. Write any two differences between Blue collar and White collar job.</p> <hr/> <hr/>	3x2=6	Analytical Skill
	<p>ii. Circle the odd word.</p> <p>a. Lungs, Stomach, Windpipe, Nose</p> <p>b. Lawyer, Sweeper, Maid, Washerman</p> <p>iii. Why does demolition take place in cities?</p> <hr/>		Evaluation

	<hr/> <hr/>		
Q 6.	<p>i. Why do we blow on our spectacles before cleaning them?</p> <p>ii. Name the largest and the smallest continent.</p> <p>iii. Name any two neighbouring countries.</p> <p>iv. Which positive impact of migration you will like?</p> <p>v. What is Martial Art?</p> <hr/> <hr/> <hr/> <hr/>	5x1=5	Comprehension



ARMY PUBLIC SCHOOL GWALIOR
CLASS -V




ACADEMIC SESSION 2023-24
WORKSHEET (SELF –ASSESSMENT)

Subject: General knowledge

Assignment no. : 2

Allotment Date: 20 July 2023

S. NO.	QUESTIONS	MARKS	NATURE
1.	<p>Fill in the blanks.</p> <p>a) The _____ industry is involved with the extraction of precious minerals from beneath the earth's surface. Jharkhand and some southern states are the leading states in this industry.</p> <p>b) _____ Monastery in Arunachal Pradesh is the largest in India.</p> <p>c) At the age of 33, she bravely led an army rebellion against the British policy of "Doctrine of Lapse", in 1824. She lost her life during the resistance _____.</p> <p>d) Originated in Odisha, this style of painting is done on cloth. The pictures are based on Hindu mythology _____.</p> <p>e) The _____ industry in India is the second biggest agro-based industry. Uttar Pradesh has the largest number of this industry.</p>	5x1=5	Informative and general awareness
2	<p>Identify the dresses/freedom fighters in the following pictures.</p> <p>a. _____</p>  <p>b. _____</p>	5x1=5	Identification and general awareness



c. _____




d. _____



e. _____





ARMY PUBLIC SCHOOL GWALIOR
CLASS - V
ACADEMIC SESSION 2023-24
WORKSHEET (SELF –ASSESSMENT)

Subject: Computer

Assignment No. : 2

Allotment Date: 20 July 2023

S.NO.	QUESTIONS	MARKS-10	NATURE
1	Choose and write the correct option (MCQ):- 1. The document we create is called a _____ a) Folder b) File c) Text 2. A group of files stored under a common name is called a _____ a) File b) Cupboard c) Folder 3. Selected files appear _____ on our screen. a) Highlighted b) Flashing c) Colorful 4. Changing the name of a file / folder is called_____. a) Renaming b) Copying c) Moving 5. Deleted file goes into _____ a) Music folder b) Recycle bin c) Desktop	1/2x5=2 ½	Information
2	Fill in the blanks- 1. A computer represents files and folders with _____. 2. A folder inside another folder is called _____.	1/2x2=1	Understanding
3.	Write 'T' for True and 'F' for False statements. 1. A file is a collection of data and information. 2. A file and a folder are represented with the same icon. 3. Copying a file removes it from its original location. 4. File Explorer is used to view and organize files and folders.	1/2x5=2 ½	Understanding

	5. A file can have any number of folders in it.		
4.	Answer the following questions:- <ol style="list-style-type: none">1. Write the names of main folders in Windows 10.2. What is the role of File Explorer in Windows 10?3. How do we rename a file/folder?4. What is the use of Recycle Bin?	1x4=4	Evaluation





ARMY PUBLIC SCHOOL GWALIOR
CLASS -V







ACADEMIC SESSION 2023-24
WORKSHEET (SELF –ASSESSMENT)

Subject: Art & Work Education
Allotment Date: 20 July 2023

Assignment no. : 2

S.NO	QUESTIONS	MARKS	SKILLS
1.	<p>How many types of Lines in Art are there?</p> <p>a) Two b) Four c) Five d) one</p>	1	Creativity
2.	<p>_____ lines convey action and excitement.</p> <p>a) curved lines b) slanted lines c) horizontal lines d) zigzag lines</p>	1	Creativity
3.	<p>What type of line is this?</p>  <p>a) curved lines b) slanted lines c) horizontal lines d) vertical lines</p>	1	Creativity
4.	<p>A _____ is one of the seven elements of art.</p> <p>a) Line b) Perspective c) Shading d) Painting</p>	1	Creativity
5.	<p>What type of line is this?</p>  <p>a) Zigzag line b) curved lines c) slanted lines d) horizontal lines</p>	1	Creativity
6.	<p>Zigzag lines are a series of diagonal lines joined at ends.</p> <p>a) True b) False</p>	1	Creativity

7.	<p>Vertical lines are lines that move left and right.</p> <p>a) True b) False</p>	1	Creativity
8.	<p>Curved lines can be simply wavy or _____.</p> <p>a) Straight b) Spiral c) Slant d) Square</p>	1	Creativity
9.	<p>Diagonal lines are straight lines that _____ in any direction except horizontal or vertical.</p> <p>a) Straight b) Spiral c) Slant d) Zigzag</p>	1	Creativity
10.	<p>Which among these is the picture of Zigzag line?</p> <p>A</p>  <p>B</p>  <p>C</p> 	1	Creativity



ARMY PUBLIC SCHOOL GWALIOR
CLASS -V
ACADEMIC SESSION 2023-24
WORKSHEET (SELF –ASSESSMENT)




Subject: Health and Physical education
Allotment Date: 20 July 2023

Assignment No. : 2

S.NO	QUESTIONS	MARKS	SKILLS/ COMPETENCIES
1.	<p>Tick The Correct Answer</p> <p>Q-1. Time duration of Kabaddi match? a.60 Minutes b.50 Minutes c.40 Minutes d.30 Minutes</p> <p>Q-2. Kabaddi originated in which country? a.India b.Pakistan c.France d.Bhutan</p> <p>Q-3. Full form of PKL is? a.Pro kabaddi league b.Professional kabaddi league c.Pacific kabaddi league d.Point kabaddi league</p> <p>Q-4. How many players play in Kabaddi match? a.12 b.10 c.08 d.07</p>	4	Informative
2	<p><u>Fill in the blanks</u></p> <p>Q-5. Pro kabaddi league started in _____. (2014, 2015)</p>	3	Interdisciplinary

	<p>Q-6. There are_____ halves in Kabaddi(1,2)</p> <p>Q-7. Kabaddi originated in _____ (India,france)</p>		
3	<p><u>True False</u></p> <p>Q-8. Players play during the match of kabaddi? i. True ii. False</p> <p>Q-9. Bangladesh is the current world champion of kabaddi? i. True ii.False</p> <p>Q-10. Kabaddi is a body contact game? i. True ii. False</p>	3	Understanding



ARMY PUBLIC SCHOOL GWALIOR
CLASS -V
ACADEMIC SESSION 2023-24
WORKSHEET (SELF –ASSESSMENT)



Subject: Dance and Music (Vocal and Instrumental)

Assignment No. : 2

Allotment Date: 20 July 2023

S.NO.	QUESTIONS	MARKS	NATURE
1	Which term in Indian classical dance refers to a rhythmic pattern consisting of three repetitions? A) Tihai b) Kathak	1	Information
2	Tihai is commonly used in which style of Indian classical dance? a) Kathak b) Bharatanatyam	1	Understanding
3	What is the purpose of using Tihai in dance? a) To create intricate footwork patterns b) To showcase the dancer's improvisational skills	1	Critical thinking
4	How many times is a Tihai typically repeated? a) Once b) Twice c) Three times	1	Understanding
5	Which of the following is true about Tihai? a) It is a slow and graceful movement sequence. b) It is a composition that involves rapid footwork and hand gestures.	1	Critical thinking
6	What type of song shows pride in our country? a) Folk song b) Patriotic song	1	

7	A song sung when doing actions is called a ? A) Folk song B) Action song	1	Creative thinking
8	Which is a wind Instrument ? A) Sitar B) Flute	1	
9	What is the fourth swar in alankar ? A) Ga B) Ma	1	
10	Which is our national song ? A) Vande mataram B) Jana gana mana	1	