



ARMY PUBLIC SCHOOL GWALIOR
CLASS - I
ACADEMIC SESSION 2023-24
WORKSHEET (SELF -ASSESSMENT)


Subject: English

Assignment No. : 3

Allotment Date: 25 August 2023

S.NO	QUESTIONS	MARKS	SKILLS
1.	<p>Fill in the blanks with the correct words from the given help box:</p> <p>(healthy, break, good)</p> <p>a. We must eat _____ food.</p> <p>b. Junk food is not _____ for our health.</p> <p>c. It was _____ time at school.</p>	3×1=3	UNDERSTANDING
2.	<p>Circle the describing words (Adjectives).</p> <p>a. A small cat.</p> <p>b. We have a black car.</p> <p>c. A heavy bag.</p> <p>d. A beautiful flower.</p> <p>e. A colourful painting.</p> <p>f. She has a blue pen.</p>	6×1=6	Decision making
3.	<p>Write down the plurals for the given words:</p> <p>a. Bottle -</p> <p>b. Potato-</p> <p>c. Coin-</p> <p>d. Bicycle-</p> <p>e. Book-</p> <p>f. Doll-</p>	6 x 0.5 =3	Problem solving

4.	Answer the following questions Q1:Name any two healthy foods. Ans _____ Q2:Why should we eat fruits and vegetables? Ans _____ Q3:What food items did Rita bring? Ans _____ Q4.At what age was the poet just alive in the poem “When I Was One” Ans _____	4x2=8	Critical thinking
-----------	--	-------	-------------------











ARMY PUBLIC SCHOOL GWALIOR
CLASS - I
ACADEMIC SESSION 2023-24
WORKSHEET (SELF -ASSESSMENT)


















Subject: Hindi

Assignment No. : 3

Allotment Date: 25 August 2023

संख्या	प्रश्न/उत्तर	अंक	प्रकृति
प्र.1	<p>चित्र को सही नाम से जोड़ो</p> <p>तरबूज</p> <p>झूला</p> <p>कबूतर</p> <p>सूरज</p>	   	4x1=4 बोधात्मक
प्र.2	<p>रु या रू लिखकर नाम पूरे करो</p>  <p>अम.....द</p>  <p>..... माल</p>  <p>..... पया</p>  <p>..... ई</p>	4x1=4	गहन सोच

<p>प्र-3</p>	<p>नीचे दिए गए चित्रों के नाम लिखकर अनुच्छेद पूरा करो।</p> <p>एक  था। घर की  पर  के पेड़ की छाया थी। राम छाया में बैठकर  पढ़ता था। एक बार एक  राम के ऊपर गिरा। राम के  खराब हो गए। राम  पर जाकर नहाया। फिर  छा गए। पानी बरसा। राम ने बारिश में एक  रख दिया। टब भर गया।  </p>	<p>4</p>	<p>समस्या समाधान</p>
<p>प्र-4</p>	<p>निम्नलिखित प्रश्नों के उत्तर दीजिए</p> <p>प्रश्न .कबूतर क्या-क्या खाता है ?</p> <p>उत्तर .</p> <p>प्रश्न .तरबूज का फल किस मौसम में अधिक पाया जाता है ?</p> <p>उत्तर .</p>	<p>2 x1=2</p>	<p>सूचनापरक उच्चस्तरीय चिंतन</p>
<p>प्र-5</p>	<p>नीचे दिए गए चित्रों के नाम लिखकर वाक्य पूरे करो</p> <p> का गाना सुन ।</p>	<p>4 x.5=2</p>	<p>विश्लेषणात्मक</p>

	 का खेल देख ।  भाग गई ।  उठा कर ला ।		
प्र-6	निम्नलिखित प्रश्नों के उत्तर दीजिए - प्रश्न . माली काका क्या-क्या लाए ? उत्तर . प्रश्न . खरबूजा कैसा था ? उत्तर . प्रश्न . नई चुनरी किसने बनाई ? उत्तर . प्रश्न . गुटरू भीतर कैसे आया ? उत्तर .	4x1=4	भाषाई कौशल



ARMY PUBLIC SCHOOL GWALIOR
CLASS - I
ACADEMIC SESSION 2023-24
WORKSHEET (SELF -ASSESSMENT)

Subject: Mathematics

Assignment No. : 3

Allotment Date: 25 August 2023

S.N	QUESTIONS	MARKS	SKILLS
Q.1	Write the number names 52 - 75 - 30 - 66 - 100 -	1 x 5 = 5	Cognitive Skills
Q.2	Arrange in ascending order 80, 43, 28, 34 65, 81, 36, 29 92, 54, 75, 33	1 x 3 = 3	Sequencing

Q.3	Arrange in descending order : 88, 27, 100, 45 59, 68, 83, 25 98, 73, 44, 37	1 x 3 = 3	Sequencing				
Q.4	Add the following <table style="width: 100%; border: none;"> <tr> <td style="text-align: center; width: 50%;"> $\begin{array}{r} 53 \\ + 26 \\ \hline \square \end{array}$ </td> <td style="text-align: center; width: 50%;"> $\begin{array}{r} 43 \\ + 50 \\ \hline \square \end{array}$ </td> </tr> <tr> <td style="text-align: center; width: 50%;"> $\begin{array}{r} 25 \\ + 16 \\ \hline \square \end{array}$ </td> <td style="text-align: center; width: 50%;"> $\begin{array}{r} 22 \\ + 28 \\ \hline \square \end{array}$ </td> </tr> </table>	$\begin{array}{r} 53 \\ + 26 \\ \hline \square \end{array}$	$\begin{array}{r} 43 \\ + 50 \\ \hline \square \end{array}$	$\begin{array}{r} 25 \\ + 16 \\ \hline \square \end{array}$	$\begin{array}{r} 22 \\ + 28 \\ \hline \square \end{array}$	1 x 4 = 4	Problem solving
$\begin{array}{r} 53 \\ + 26 \\ \hline \square \end{array}$	$\begin{array}{r} 43 \\ + 50 \\ \hline \square \end{array}$						
$\begin{array}{r} 25 \\ + 16 \\ \hline \square \end{array}$	$\begin{array}{r} 22 \\ + 28 \\ \hline \square \end{array}$						
Q.5	Tick (\checkmark) the smallest number and cross (x) the biggest number in each row 1. 98, 42, 63, 29, 84 2. 76, 100, 38, 55, 91	1 x 2 = 2	Cognitive				
Q.6	Word Problem 1. In a class there are 31 boys and 17 girls. How many children are there in a class?	1 x 3 = 3	Language, Thinking				





ARMY PUBLIC SCHOOL GWALIOR
CLASS - I
ACADEMIC SESSION 2023-24
WORKSHEET (SELF -ASSESSMENT)

Subject: EVS

Assignment No. : 3

Allotment Date: 25 August 2023

S.NO	QUESTION	MARKS	SKILLS
1.	<p>Fill in the blanks using the help box given below:</p> <p>(protect, villages, food, milk, three, warm, sheep)</p> <p>a. We need _____ and water to live. b. Most of us eat _____ meals a day. c. Food made from milk are called _____ products. d. Clothes _____ us from heat, cold and rain. e. Woollen clothes keep us _____. f. We get wool from _____.</p>	6×1=6	Decision making
2.	<p>Name any two for each of the following:</p> <p>a. Junk food</p> <p>b. Milk products</p> <p>c. Dry fruits</p> <p>d. Clothes used in winter season.....</p>	4×1=4	Thinking skills

<p>3.</p> <p>1.</p> <p>2.</p>	<p>Write P for plant products and A for animal products:</p>  <p style="text-align: center;"><i>Fruits</i></p> <p style="text-align: center;">_____</p>  <p style="text-align: center;"><i>Honey</i></p> <p style="text-align: center;">_____</p>	<p>2×1=2</p>	<p>Observation skills</p>
<p>4.</p>	<p>Answer the following questions</p> <p>Q1: Name three food items which we get from animals. Ans _____.</p> <p>Q2: Why do we need food? Ans _____.</p> <p>Q3. What are uniforms? Name some people who wear a uniform. Ans _____.</p>	<p>3×2=6</p>	<p>Thinking skills</p>
<p>6.</p>	<p>HOTS (Higher Order Thinking Skills)</p> <p>Q1: Why we should not eat too many sweets and chocolates?</p>	<p>2×1=2</p>	<p>Critical thinking</p>








ARMY PUBLIC SCHOOL GWALIOR
CLASS - I
ACADEMIC SESSION 2023-24
WORKSHEET (SELF –ASSESSMENT)

Subject: G.K

Assignment No. : 3

Allotment Date: 25 August 2023

S.N	QUESTIONS	MARKS	SKILLS
Q.1	Answer in one word using the help box given below (Virat Kohli, China, Sushi , bagheera, United States) 1. Which is the traditional dish of Japan? 2. Statue of Liberty is in which country ? 3. The Great wall is situated in which country ? 4. Name any one sports star. 5. Who is the cartoon partner of Mowgli?	1 x 5 = 5	Thinking, Analytical
Q.2	Match the following  Boxing  Doraemon  Donald Duck  Badminton  Mickey Mouse	1 x 5 = 5	Cognitive



ARMY PUBLIC SCHOOL GWALIOR
CLASS - I
ACADEMIC SESSION 2023-24
WORKSHEET (SELF -ASSESSMENT)

Subject: Computer

Assignment No. : 3

Allotment Date: 25 August 2023

S.NO.	QUESTIONS	MARKS	NATURE
1	<p>Tick the correct answer</p> <p>(i) Function keys are located on the _____ row of the keyboard.</p> <p>a) Lower b) Middle c) Topmost d) none</p> <p>(ii) A mouse is a _____ device.</p> <p>a) Holding b) Pointing c) Typing d) None</p> <p>(iii) There are _____ Alphabet keys on the keyboard.</p> <p>a) 12 b) 20 c) 26 d) 54</p> <p>(iv) Pressing the right mouse button once is called</p>	4 x 0.5=5	Information

	<p>_____.</p> <p>a) Left-click</p> <p>b) Right-click</p> <p>c) Dragging</p> <p>d) Single-click</p>		
2	<p>Fill in the blanks-</p> <p>a) Pressing the left mouse button once is called _____.</p> <p>b) _____ is located between the left and right mouse buttons.</p> <p>c) Enter key is also called _____ key.</p> <p>d) _____ is used to erase the letters or numbers to the left of the cursor.</p>	4x0.5=2	Understanding
3	<p>Write True or False against the statements:-</p> <p>a) Alphabet keys are used to type words.</p> <p>b) We cannot drag pictures using a mouse.</p> <p>c) Computers cannot be used for playing games.</p> <p>d) Spacebar is the shortest key on the keyboard.</p>	4x0.5=2	Interdisciplinary
4	<p>Answer the following questions</p> <p>a) How many Arrow keys are there on the keyboard?</p> <p>b) Name the longest key on the keyboard?</p> <p>c) Name the key which is used to erase the letters to the right side of the cursor ?</p> <p>d) How many Number keys are there on the keyboard?</p>	4x0.5=2	Critical Thinking and Problem Solving



ARMY PUBLIC SCHOOL GWALIOR
CLASS - I
ACADEMIC SESSION 2023-24
WORKSHEET (SELF –ASSESSMENT)



Subject: Art and Work Education
Allotment Date: 25 August 2023

Assignment No. : 3

S. NO.	QUESTIONS	MARKS	NATURE
1.	Which shape has three sides and three angles? (a) Square (b) circle (c) rectangle (d) triangle	2	Understanding
2.	Which shape has no straight sides or angles? (a) Square (b) Circle (c) Rectangle (d) Triangle	2	Observation
3.	What is the name of the shape which has five sides? (a) Triangle (b) Octagon (c) Pentagon (d) Hexagon	2	Understanding
4.	Which shape has no side or angle ? (a) Square (b) Circle (c) Rectangle (d) Triangle	2	Problem solving
5.	Which shape has four equal sides and four right angles? (a) Square (b) Rectangle (c) Circle (d) Triangle	2	Understanding



ARMY PUBLIC SCHOOL GWALIOR
CLASS - I
ACADEMIC SESSION 2023-24
WORKSHEET (SELF -ASSESSMENT)

Subject: Health and Physical Education
Allotment Date: 25 August 2023

Assignment No. : 3

S.N	QUESTIONS	MARKS	SKILLS/ COMPETENCIES
1.	True / False		
	Jumping is a motor skill. (True/False)	1	INFORMATION
2	Jumping makes your legs strong.(True/False)	1	INFORMATION
3	There are two types of jumping. (True/False)	1	INFORMATION
4	Running is allowed in the classroom & corridors.(True/False)	1	INFORMATION

5	We can practice jumping_____? A) On Ground B) Inside Classroom C) In the corridor D) None of the above	1	INTERDISCIPLINARY
6	We can jump through_____? A) Cones B) Hula hoops C) Roads D) Both A & B	1	INFORMATION
	Write the answer of the following.		
7	Is jumping helpful to make your legs strong ?	2	UNDERSTANDING
8	Do you enjoy while performing various jumping activities?	2	UNDERSTANDING



ARMY PUBLIC SCHOOL GWALIOR
CLASS - I
ACADEMIC SESSION 2023-24
WORKSHEET (SELF –ASSESSMENT)



Subject: Dance and Music
Allotment Date: 25 August 2023

Assignment No. : 3

S. NO.	QUESTIONS	MARKS	NATURE
1	How many matras are there in teen taal? a.16 b.14	(1)	Knowledge
2	On which counting we will leave as a Khali in teen taal ? a. 10 b. 9	(1)	Critical Thinking
3	Which is the basic taal of Kathak ? a. Dadra Taal b. Teen Taal	(1)	Knowledge
4	How many sections are there in teen taal? a.6 b.4	(1)	Understanding
5	How many "taali" are there in Teen Taal ? a. 5 b. 3	(1)	Knowledge

6	Who wrote National Anthem? a. Rabindranath Tagore b. Jawaharlal Nehru	(1)	Knowledge
7.	Complete the line Jana gana mana ? a. Adhinaayak jaya hey b. Gaya hey	(1)	Critical Thinking
8.	Complete the line Vindhya Himachal ? a. Yamuna Godavari b. Yamuna Ganga	(1)	Knowledge
9	Complete the line Door agyan ke ho? a. Andhere b. Roshni	(1)	Critical Thinking
10.	Har Se bachte rahe hum ? a. Burai b. Bhalai	(1)	Understanding