



ARMY PUBLIC SCHOOL GWALIOR
CLASS - III
ACADEMIC SESSION 2023-24
REVISION WORKSHEET (SELF –ASSESSMENT)



Subject: English

Assignment No. : 4

Allotment Date: 12 September 2023

S. NO.	QUESTIONS	MARKS	NATURE
1.	<p>A. Read the following poem carefully and answer by selecting the correct options given below:</p> <p>The First Day of School I've got a brand-new lunchbox. My shoes are shiny clean. I've got a cool, new book bag And a pencil box that's green. But I don't know my teacher, Or where my desk will be. I don't know if I'll like the kids, Or if they'll play with me. I peep inside my classroom. I stand there for a while. My teacher's tall and kind of loud, But has a great big smile. And, best of all, she's got my Favorite book upon the shelf! I kiss my mother at the door And walk in by myself.</p> <p>1) The child's shoes are..... a) dirty b) clean c) comfortable d) fancy</p> <p>2) The child has got a pencil box which is..... a) red b) green c) yellow d) pink</p> <p>3) Find the opposite of the word 'short' from the poem. Ans.....</p> <p>4) What did the child like about the teacher? Ans.....</p> <p>5)came to drop the child at the school. a) Father b) Grandmother c) Teacher d) mother</p> <p>6) How did you feel on the first day of your school?</p>	14X0.5=7	Reading

Ans.....
.....
.....
.....

7) What was the best thing that the child found in the class?

Ans.....
.....
.....
.....

B. Read the following passage carefully and answer the questions given below based on the passage:

Dogs are one of the most popular pets in the world. They are known to be loyal and protective of their owners. Dogs come in different shapes, sizes and breeds. Some breeds, such as poodles and golden retrievers, are known to be smart and easy to train. Other breeds, such as bulldogs and pugs, are known for being cute and playful.

Dogs are also used for various purposes. Some dogs help blind or disabled people. These dogs are called service dogs. Other dogs help catch criminals or find missing persons. These dogs are called police dogs or search and rescue dogs. Dogs are also used to herd sheep and cattle on farms.

Q.1 Fill in the blank:

_____ is one of the most popular pets in the world.

- a) Dogs
- b) Cats
- c) Fish
- d) Birds

Q.2 State whether True or False:

- a) Dogs are independent and aloof. _____
- b) Dogs are loyal and protective of their owners. _____


Q.3 Choose the correct option:

Some common breeds of dogs known for being easy to train are _____.

- a) Poodles and Golden Retrievers
- b) Bulldogs and Pugs
- c) Rottweilers and Dobermans

	<p>d) German Shepherds and Boxers</p> <p>Q.4 What are some common purposes for which dogs are used?</p> <p>a) Service dogs and police dogs</p> <p>b) Search and rescue dogs and therapy dogs</p> <p>c) Guard dogs and hunting dogs</p> <p>d) All of the above</p> <p>Q.5 Match the following:</p> <p>a) Service dogs (i) help blind or disabled people</p> <p>b) Police dogs (ii) help to catch criminals</p> <p>Q.6 Find and write the opposite of given words from the passage:</p> <p>(a) hard- _____</p> <p>(b) loose- _____</p> <p>Q.7 Give a suitable title to the poem.</p> <p>_____.</p>		
2.	<p>A. Make sentences on the following words:</p> <p>(a) emperor</p> <p>(b) upside</p> <p>(c) astronaut</p> <p>B. State whether the following statements are 'True' or 'False':</p> <p>(a). Student is a collective noun.</p> <p>(b) Gender used to denote female/girls are known as feminine gender</p> <p>(c) The emperor admired Chang's flower.</p> <p>(d) The poet's family does not love him.</p>	7x1 = 7	Critical Thinking

<p>3.</p>	<p>Fill in the blanks by choosing the correct options Given below: (acute, white stars, water , traveller, Wilbur Wright, parents and brother, flower)</p> <p>(a) Strangely the seed did not</p> <p>(b) The first motor-powered aeroplane was flown by</p> <p>(c) The poet could see in the sky.</p> <p>(d) Sadiq explained that the level had gone down.</p> <p>(e) In summer, we face Shortage of water in many places.</p> <p>(f) The wanted to go across the water.</p> <p>(g) When Bina cut the cake, she missed her</p>	<p>7X1 = 7</p>	<p>Understanding and analytical skill</p>
<p>4.</p>	<p>Answer the following questions:</p> <p>(a) What is one of the biggest dangers that our planet is facing? Suggest two ways in which you would save water.</p> <p>.....</p> <p>.....</p> <p>.....</p> <p>.....</p> <p>.....</p> <p>.....</p> <p>.....</p> <p>.....</p> <p>.....</p> <p>.....</p> <p>(b) Write a paragraph on Discipline.</p> <p>.....</p> <p>.....</p> <p>.....</p> <p>.....</p> <p>.....</p> <p>.....</p> <p>.....</p> <p>.....</p> <p>.....</p>	<p>3X2=6</p>	<p>HOTS</p>

<p>5.</p>	<p>Match the column 'A' with column 'B' by finding the meanings of the given words:</p> <table border="0" style="width: 100%;"> <tr> <td style="width: 50%; vertical-align: top;"> <p>A</p> <p>(a) tended to</p> <p>(b) glider</p> <p>(c) wood</p> <p>(d) grin</p> </td> <td style="width: 50%; vertical-align: top;"> <p>B</p> <p>(i) curved</p> <p>(ii) severe</p> <p>(iii) looked after</p> <p>(iv) forest</p> </td> </tr> </table>	<p>A</p> <p>(a) tended to</p> <p>(b) glider</p> <p>(c) wood</p> <p>(d) grin</p>	<p>B</p> <p>(i) curved</p> <p>(ii) severe</p> <p>(iii) looked after</p> <p>(iv) forest</p>	<p>4X1=4</p>	<p>Evaluation</p>
<p>A</p> <p>(a) tended to</p> <p>(b) glider</p> <p>(c) wood</p> <p>(d) grin</p>	<p>B</p> <p>(i) curved</p> <p>(ii) severe</p> <p>(iii) looked after</p> <p>(iv) forest</p>				
<p>6.</p>	<p>Answer the following questions based on Grammar Trove:</p> <p>(a) Arjun likes to play _____ (fill common noun)</p> <p>(b) I bought _____ apple. (a/an)</p> <p>(c) Paste all the _____. (photo)</p> <p>(d) She is _____ (prince/princess) of Whales</p> <p>(e) The _____ (ship) deck was well lit. (fill possessive noun)</p> <p>(f) I saw a _____ of lions. (fill collective noun)</p> <p>(g) Mother made _____ for us. (use compound word)</p> <p>(h) _____ are going to the park. (we/us)</p> <p>(i) There is an _____ room upstairs. (fill adjective)</p>	<p>9X1=9</p>	<p>Interdisciplinary</p>		
<p>7.</p>	<p>Write a picture composition taking help from the help box.</p> <div style="text-align: center;">  </div> <div style="background-color: yellow; padding: 5px; margin-top: 10px;"> <p>Helping words: Library, many children, bookcases, favourite books, choosing books, good habit, reading in peace, having fun.</p> </div>	<p>4X1=4</p>	<p>Communication</p> <p>skills</p>		



ARMY PUBLIC SCHOOL GWALIOR
CLASS - III
ACADEMIC SESSION 2023-24
REVISION WORKSHEET (SELF -ASSESSMENT)



Subject: Hindi

Assignment No. : 4

Allotment Date: 12 September 2023

S. NO.	QUESTIONS	MARKS	NATURE
1	<p>निम्नलिखित गद्यांश को ध्यानपूर्वक पढ़कर दिए गए प्रश्नों के उत्तर दें -</p> <p>नदी के किनारे एक पेड़ पर एक बन्दर रहता थी। उसी पेड़ पर एक चिड़िया अपना घोंसला बना कर रहती थी। एक बार बहुत जोर से आँधी आई और बारिश होने लगी। बन्दर बारिश में भीग गया और थर- थर काँपने लगा। जबकि चिड़िया अपने घोंसले में आराम से बैठी रही। वह बारिश से बिलकुल भी नहीं भीगी। बारिश बंद होने पर जब चिड़िया बाहर आई तो उसने देखा की बन्दर थर -थर काँप रहा है। उसने बन्दर से कहा-"भैया, आप अपना घर क्यों नहीं बना लेते? चिड़िया की बात सुनकर बन्दर तिलमिलाने लगा । उसने सोचा-"यह छोटी सी चिड़िया यह मुझे उपदेश दे रही है। यह अपने आपको बहुत चतुर समझती है। अच्छा अभी इसको मजा चखता हूँ। यह कहकर उसने चिड़िया का घोंसला तहस नहस कर दिया। चिड़िया ची ची करती हुई उड़ गयी। वह समझ गई की मूर्ख को सीख देना अपने लिए मुसीबत मोल लेना है। चिड़िया ने दूसरे पेड़ पर अपना घोंसला बना लिया। परिश्रम करने वाले कभी दुखी नहीं होते।</p> <p>निम्नलिखित प्रश्नों के उत्तर दें -</p> <p>(i) सही (✓) या गलत (x) का निशान लगाएँ -</p> <p>(क) बारिश होने पर चिड़िया भीग गई।</p> <p>(ख) चिड़िया की बात सुनकर बन्दर को खुशी हुई।</p> <p>(ii) खाली स्थान भरो -</p> <p>(क) बन्दर ने चिड़िया का घोंसला _____ कर दिया।</p> <p>(ख) चिड़िया की बात सुनकर बन्दर _____ लगा।</p> <p>(iii) विलोम शब्द लिखो-</p> <p>(क) अंदर</p> <p>(iv) निम्नलिखित प्रश्नों के उत्तर एक वाक्य में लिखें -</p> <p>(क) इस कहानी से हमें क्या शिक्षा मिलती है?</p> <p>.....</p>	(4)	अतःविषयात्मक

.....
(ख) नदी के किनारे पेड़ पर कौन-कौन रहते थे?

.....

.....

(ग) वर्षा आने पर क्या हुआ?

.....

.....

(ख) निम्नलिखित पद्यांश को ध्यानपूर्वक पढ़कर दिए गए प्रश्नों के उत्तर दें - (3)

मन करता है सूरज बनकर
आसमान में दौड़ लगाऊँ ।

मन करता है चंदा बनकर
सब तारों पर अकड़ दिखाऊँ।

मन करता है बाबा बनकर
घर में सब पर धौंस जमाऊँ।

मन करता है पापा बनकर
मैं भी अपनी मंच बढ़ाऊँ।

मन करता है तितली बनकर
दूर दूर तक उड़ता जाऊँ।

(i) समान तुक वाले शब्द लिखो-

(क) बढ़ाऊँ (ख) दौड़

(ii) निम्नलिखित प्रश्नों के उत्तर एक वाक्य में लिखें-

(क) उपरोक्त पद्यांश का उचित शीर्षक लिखिए ?

.....

(ख) बच्चा तितली बनकर क्या करना चाहता है ?

.....

<p>2</p>	<p>(क) विद्यालय छोड़ने का प्रमाण पत्र प्राप्त करने के लिए अपने प्रधानाचार्य को प्रार्थना पत्र लिखें। सेवा में _____ आर्मी पब्लिक स्कूल, ग्वालियर ग्वालियर दिनांक - _____ विषय - विद्यालय छोड़ने का प्रमाण पत्र प्राप्त करने हेतु। महोदय नम्र निवेदन है कि मेरे पिताजी का स्थानान्तरण (ट्रांसफर) _____ से जम्मू हो गया है। इसलिए मुझे अपने _____ के साथ जम्मू जाना होगा। कृपया मुझे _____ विद्यालय छोड़ने का _____ करें ताकि मैं वहाँ जाकर अपनी पढ़ाई _____ सकूँ। मैं आपका अति आभारी _____। _____ आपका आज्ञाकारी शिष्य _____</p>	<p>1x3=3</p>	<p>रचनात्मक</p>
	<p>(ख) 'वर्षा का आनंद' विषय पर अनुच्छेद लिखें (100 शब्दों में) </p>	<p>(1x3=3)</p>	

.....
.....
(ग) दिए गए चित्र को देखकर पाँच (५) वाक्य लिखें ।

(3x1=3)



.....
.....
.....
.....
.....
.....
.....
.....
.....

(2)

(क) सही वाक्य पर सही या गलत वाक्य पर गलत का निशान लगाइए ।(2)

- 1 मौखिक भाषा का एक रूप है। _____
- 2 भाषा के लिखित रूप को लिपि कहते हैं । _____
- 3 केरल में तमिल भाषा बोली जाती है। _____
- 4 भाषा के दो रूप है। _____

(ख) (i) अकबर ने ऐलान किया ।

(ii) कछुआ बहुत धीरे चलता है।

(iii) राज हँस रहा है।

(iv) पुस्तकें पढ़ना अच्छी आदत होती है।

(ग) दिए गए शब्दों से वर्णों को अलग-अलग करके लिखें -(1)

1. बालक 2. पुस्तक

(घ) उचित सर्वनाम चुनकर लिखें।(1)

(क) _____ कहाँ जा रहे हो ?

(i) मैं (ii) तुम (iii) हम

(ख) जो शब्द सर्वनाम है _____ उन () पर सही का निशान लगाएँ-

(i) वह (ii) कपड़े (iii) मुश्किल

(ग) ऐसे शब्द जिनका प्रयोग संज्ञा के स्थान पर किया जाता है , वे _____ कहलाते हैं।

(i) विशेषण (ii) क्रिया

(iii) सर्वनाम

(3)

(i) वाक्यों में आए विशेषण शब्द चुनकर लिखिए-(2)

(क) मेरे पास एक लाल रंग की साड़ी है।

(ख) दादाजी के पास एक गोल घड़ी है।

(ग) छोटा हाथी धीरे धीरे चलता है।

(घ) रंगबिरंगी तितलियाँ आसमान में उड़ रही हैं।

(ii) शब्दों के उचित विलोम से मिलान कीजिए-(2)

(क) अँधेरा | खुशबू

(ख) सुख | सफ़ेद

(ग) बदबू | दुःख

(घ) काला | उजाला

(iii) शब्दों के उचित वचन से मिलान कीजिए- (2)

(क) गमला | पत्ते

(ख) रोटी | झूले

(ग) ये गुड़ियाँ में उसे ही दूंगा जो इनमें से सबसे अच्छी गुड़िया चुनकर बताएगा।

.....

.....

(ii) अनुस्वार (ँ) और अनुनासिक(ँ) वाले दो-दो शब्द लिखिए -(1)

(i) (ँ) _____, _____

(ii) (ँ) _____, _____

(iii) निम्नलिखित शब्दों के लिंग बदलिए -(1)

(क) माता

(ख) अध्यापक

(iv) वर्तनी शुद्ध करके शब्दों को दोबारा लिखिए-(1)

(क) शेरनि (ख) खुन

(v) निम्नलिखित कविता की पंक्तियाँ पूरी कीजिए -(1)

_____ छोटा लगता है पर

इसमें _____ बन जाता है।

(6) (अ) निम्नलिखित प्रश्नों के उत्तर दो -(2)

(i) शेरनी का गुस्सा कैसे शांत हुआ?

.....

.....

.....

.....

.....

(ii) खून को लाल रंग कौन देता है?

.....

.....

.....

.....

.....

(iii) दूसरी गुड़िया किन लोगों के जैसी थी?

.....

.....

.....

(iv) पल और युग में क्या अंतर है ?

.....

.....

.....

.....

.....

(ब) मूल्यपरक प्रश्न -(1)


(i) रूपा जैसे साहसी बच्चों से आपको क्या प्रेरणा मिलती है?

.....

.....

.....

	<p>.....</p> <p>(ii) पशु -पक्षियों के साथ कैसा व्यवहार करना चाहिए ?</p> <p>.....</p> <p>.....</p>		
--	---	--	--



ARMY PUBLIC SCHOOL GWALIOR
CLASS - III
ACADEMIC SESSION 2023-24
REVISION WORKSHEET (SELF –ASSESSMENT)



Subject: Mathematics

Assignment No. : 4

Allotment Date: 12 September 2023

S. NO.	QUESTIONS	MARKS	NATURE												
1.	<p>Fill in the blanks:</p> <p>(i) $111 \times 1 \times \dots = \dots \times 111$</p> <p>(ii) The number of 3s in 27 is</p> <p>(iii) $100 \div 1 = \dots$</p> <p>(iv) $9 \times 8 \dots 8 \times 8 (>, <, =)$</p> <p>(v) III + VI = (Write in Roman Numerals)</p>	5x1=5	Problem Solving												
2.	<p>Write whether the following statements are 'True' or 'False':</p> <p>(i) 5699 is one less than 5698.</p> <p>(ii) $15 \times 16 \times 500 = 6 \times 500 \times 15$</p> <p>(iii) The face value of 5 in 4589 is 500.</p> <p>(iv) The short form of 4 hundreds + 3 tens + 2 ones is 432.</p> <p>(v) Double of 50 is 150.</p>	5x1=5													
3.	<p>Match the column A with column B:</p> <table style="width: 100%; border: none;"> <tr> <td style="width: 50%; text-align: center;">A</td> <td style="width: 50%; text-align: center;">B</td> </tr> <tr> <td>(i) The predecessor of 2576</td> <td>(a) 0</td> </tr> <tr> <td>(ii) $0 \div 100$</td> <td>(b) $1000+000+70+8$</td> </tr> <tr> <td>(iii) 100×52</td> <td>(c) III</td> </tr> <tr> <td>(iv) The expanded form of 1078</td> <td>(d) 2575</td> </tr> <tr> <td>(v) Half of VI</td> <td>(e) 5200</td> </tr> </table>	A	B	(i) The predecessor of 2576	(a) 0	(ii) $0 \div 100$	(b) $1000+000+70+8$	(iii) 100×52	(c) III	(iv) The expanded form of 1078	(d) 2575	(v) Half of VI	(e) 5200	5x0.5=2.5	
A	B														
(i) The predecessor of 2576	(a) 0														
(ii) $0 \div 100$	(b) $1000+000+70+8$														
(iii) 100×52	(c) III														
(iv) The expanded form of 1078	(d) 2575														
(v) Half of VI	(e) 5200														
4.	<p>Multiple Choice Questions:</p> <p>(i) $7000 - 0 = ?$ (a) 6000 (b) $5000 + 2000$ (c) 0</p> <p>(ii) The product of place value of 2 in 1235 and 2 is (a) 400 (b) 4000 (c) 40</p> <p>(iii) A jug of water can fill 5 glasses. The number of jugs needed to fill 30 glasses is</p>	3x0.5=1.5													

(a) 4

(b) 6

(c) 7

5.

Do as directed:

5x1=5

(i) Arrange the following numbers in descending order:
800,963,299,441

(ii) If $345 + 542 = 887$, Find:
 $3450 + 5420 = \dots\dots\dots$

(iii) Fill in the blanks using subtraction –

Th	H	T	O
7	8	9	5
--
1	4	9	0

(iv) Which one is greater- $15 + 15 + 15 + 15$ or 15×7

(i) Estimate the sum by rounding off each number to the nearest tens.
 $45 + 78$

OR

(i) Estimate the sum by rounding off each number to the nearest hundreds.
 $245 + 778$

5x2=10

6.

Do as directed:

(i) Find the difference:

$$2395 - 1144$$

(ii) Find the value –

$$7000 - 3587 + 500$$

(iii) Break up the following numbers and find the sum.

$$36 + 41$$

OR

Write the following in figures and then add.

Nine thousand five hundred fifty and one thousand seven hundred four.

(iv) Multiply the following:

$$35 \times 15$$

(v) Divide and check your answer:

$$707 \div 7$$

<p>7.</p>	<p>Frame a word problem for the following facts:</p> <p>(i) $50 - 30 = 20$</p> <p>.....</p> <p>.....</p> <p>.....</p> <p>.....</p> <p>.....</p> <p>.....</p> <p>(ii) $56 \div 7 = 8$</p> <p>.....</p> <p>.....</p> <p>.....</p> <p>.....</p> <p>.....</p> <p>.....</p>	<p>$2 \times 2 = 4$</p>	<p>Understanding</p>
<p>8.</p>	<p>(i) Find the product by using the lattice multiplication method:</p> <p style="text-align: center;">72×45</p>	<p>$2 \times 1 = 2$</p>	<p>Critical thinking</p>

	<p style="text-align: center;">OR</p> <p>Find the difference and check your answer by addition. 2026 – 1215</p>		
9.	<p>Solve the following word problems.</p> <p>(i) Out of 6000 students in a school, 2568 are boys. How many girls are there?</p> <p>(ii) In a library, 824 books are equally placed on 8 racks. How many books are there on each rack?</p>	2x2.5=5	HOTS

OR

- (i) Estimate the difference by rounding off each number to the nearest hundreds :
 $687 - 253$




ARMY PUBLIC SCHOOL GWALIOR
CLASS - III
ACADEMIC SESSION 2023-24
REVISION WORKSHEET (SELF –ASSESSMENT)



Subject: EVS

Assignment No. : 4

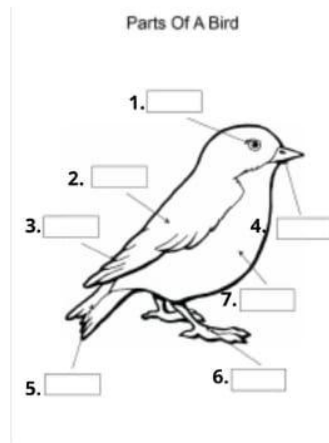
Allotment Date: 12 September 2023

S. NO.	QUESTIONS	MARKS	NATURE
1.	<p><u>Read and choose the correct option:</u></p> <p>(a) They crawl on the ground..... (i) fish (ii) reptiles (iii) ambhibians (iv) mammals</p> <p>(b) Answer in one word: (i) The plant eating animal is.....</p> <p>(c) Pick and encircle the odd one out Doctor Teacher Engineer Post office</p> <p>(d) Fill in the blanks: leaf has medicinal value. (i) Watermelon (ii) Neem (iii) Mango (iv) Banana</p> <p>(e) Give the full form of LPG.</p>	5x1=5	Understanding
2.	<p>(a) Identify the following images:</p> <p>(i)</p> <div style="text-align: center;"></div> <p>.....</p> <p>(ii)</p>	2x5=10	Observation



.....

(b) Colour and label the following diagram:



3.

Match the following:

- | | |
|------------------------------|------------------|
| (a) bougainvillea | (i) height |
| (b) hereditary trait | (ii) willow |
| (c) have no parents | (iii) is a shrub |
| (d) used to make cricket bat | (iv) orphan |
| (e) creeper | (v) pumpkin |

5x1=5

HOT

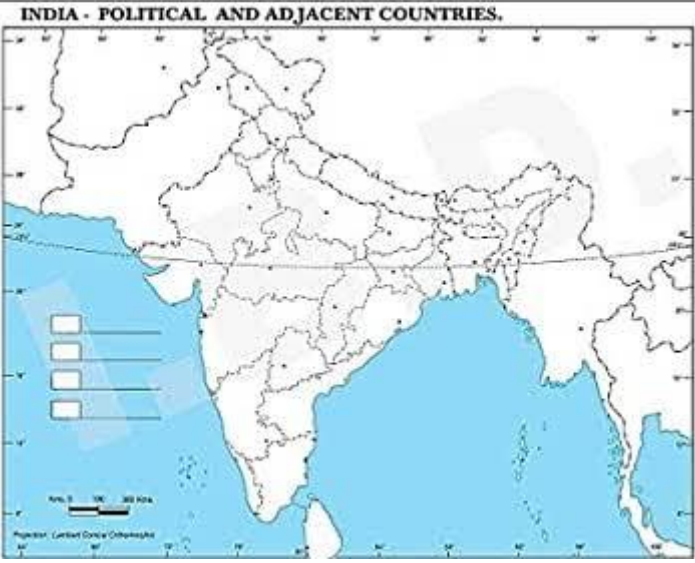
4.

A. State whether the following statements are 'True' or 'False':

- (a) There are five oceans in the world. _____
- (b) Shrubs have branched stems. _____
- (c) Desert plants are also called thorny plants. _____
- (d) Our body is made up of 70% of water. _____
- (e) The on the kind of food carnivores eat is grass. _____

3x4=12

Problem Solving

	<p>B. Answer in short:</p> <p>(a) How does birds look beautiful?</p> <hr/> <p>(b) What does people of South India use as plates?</p> <hr/> <p>(c) Where does terrestrial animals live?</p> <hr/> <p>(a) What does the shape of the beak depend on?</p> <hr/> <p>C. Write any four ways to save water in your words in detail.</p> <hr/> <hr/> <hr/> <hr/>		
5.	<p>Locate the following in the given World map.</p> <p>(a) Indian Ocean (b) Andaman & Nicobar Island (c) Arabian Sea (d) Bay of Bengal (e) China (f) Afghanistan (g) Nepal (h) Sri Lanka</p> 	8x1=8	Critical thinking



ARMY PUBLIC SCHOOL GWALIOR
CLASS - III
ACADEMIC SESSION 2023-24
REVISION WORKSHEET (SELF –ASSESSMENT)



Subject: Computer

Assignment No. : 4

Allotment Date: 12 September 2023

S.NO.	QUESTIONS	MARKS	NATURE
1.	<p>Tick the correct answer.</p> <p>(i) The bar at the bottom of the desktop is known as _____.</p> <p>a) Scroll bar b) Title bar c) Taskbar d) none</p> <p>(ii) _____ is the example of word processor. a) MS paint b) MS word c) Windows 10 d) None</p> <p>(iii) _____ is the physical components attached to a computer. a) Software b) Hardware c) Malware d) Operating system</p> <p>iv) We can erase a shape with _____ tool. a) Eraser b) Remover c) Select d) Filter</p>	4x0.5=2	Information
2.	<p>Fill in the blanks-</p> <p>a) _____ screen appears after switching on the computer.</p> <p>b) Word file is saved with _____ extensions.</p> <p>c) _____ option is used to add 3D text in paint 3D.</p> <p>d) A computer _____ the data as per</p>	4x0.5=2	Understanding

	requirement or instructions.		
3.	<p>Write True or False against the statements:-</p> <p>a) The search box is present on the right corner of the desktop. ()</p> <p>b) Formatting means making any changes to the document. ()</p> <p>c) 3Dshapes are also known as flat shapes. ()</p> <p>d) Hard disk is also known as the brain of a computer. ()</p>	4x0.5=2	Interdisciplinary
4.	<p>Answer the following questions</p> <p>(i)What is the use of search box? Ans. _____ _____ _____ _____</p> <p>(ii) What is the use of paint 3D software? Ans. _____ _____ _____ _____</p> <p>(iii) Write any four characteristics of computer? Ans. _____ _____ _____ _____</p> <p>(iv)What is the use of saving a document? Ans. _____ _____ _____ _____</p>	4x1=4	Critical Thinking and Problem Solving



ARMY PUBLIC SCHOOL GWALIOR
CLASS - III
ACADEMIC SESSION 2023-24
REVISION WORKSHEET (SELF –ASSESSMENT)






Subject: G.K

Assignment No. : 4

Allotment Date: 12 September 2023

S. NO.	QUESTIONS	MARKS	NATURE										
1.	<p>Fill in the blanks by choosing the correct options given below: (plastic,Vallam Kali, Nile, Vrikshasana)</p> <p>(i) is one of the oldest forms of traditional sport as well as a martial art.</p> <p>(ii) We should not use bags for shopping.</p> <p>(iii) improves balance and concentration.</p> <p>(iv) The is the longest river in the world.</p>	2x1=2	Information										
2.	<p>Match the column 'A' with column'B':</p> <table style="width: 100%; border: none;"><tr><td style="text-align: center;">A</td><td style="text-align: center;">B</td></tr><tr><td>(i) Birds</td><td>(a) Brazilia</td></tr><tr><td>(ii) Mango</td><td>(b) a great hockey player</td></tr><tr><td>(iii) Brazil</td><td>(c) national fruit of India</td></tr><tr><td>(iv) Major Dhyan Chand</td><td>(d) swallow their food</td></tr></table>	A	B	(i) Birds	(a) Brazilia	(ii) Mango	(b) a great hockey player	(iii) Brazil	(c) national fruit of India	(iv) Major Dhyan Chand	(d) swallow their food	2x1=2	Thinking Skill
A	B												
(i) Birds	(a) Brazilia												
(ii) Mango	(b) a great hockey player												
(iii) Brazil	(c) national fruit of India												
(iv) Major Dhyan Chand	(d) swallow their food												
3.	<p>State whether the following statements are'True'or False':</p> <p>(i) The proverb 'All that glitters is not gold' means All that looks attractive cannot be so useful. ()</p> <p>(ii) Tulsi have properties to cure fever,cough,cold and headache. ()</p> <p>(iii) Lobster changes its colour when it senses danger. ()</p> <p>(iv) Heart pumps blood to all parts of the body. ()</p>	2x1=2	HOTS										

<p>4.</p>	<p>Answer the following questions in one word:</p> <p>(i) Name any one musical instrument that has string.</p> <p>.....</p> <p>.....</p> <p>(ii) How many states are there in India?</p> <p>.....</p> <p>.....</p> <p>(iii) Name the second prime minister of India.</p> <p>.....</p> <p>.....</p> <p>(iv) Name the largest continent of India.</p> <p>.....</p> <p>.....</p>	<p>4x0.5=2</p>	<p>Understanding</p>
<p>5.</p>	<p>Identify the following:</p> <p></p> <p>(i)</p> <p></p> <p>(ii)</p> <p></p> <p>(iii)</p>	<p>4x0.5=2</p>	<p>Critical Thinking</p>



(iv)

.....