

ARMY PUBLIC SCHOOL GWALIOR
CLASS - V
ACADEMIC SESSION 2023-24
REVISION WORKSHEET (SELF –ASSESSMENT)

Subject: English

Assignment No. : 4

Allotment Date: 12 September 2023

S. NO.	QUESTIONS	MARKS	NATURE
	SECTION A (READING)	4 marks	Reading and understanding
Q1.	<p>Read the following paragraph and answer the questions given below:</p> <p>There was a tiny squirrel. It was climbing a high mountain. A foolish tortoise was following her. There was a hard shell on his back. Suddenly a strong wind began to blow. The squirrel ran fast. The tortoise could not run fast so he was sad.</p> <p>Now on the basis of above paragraph, answer the following questions:</p> <p>1. Choose the correct option for the following questions:</p> <p>i) Who was climbing a high mountain?</p> <p>a) tortoise b) squirrel c) Both (i) and (ii)</p> <p>2. Fill in the blanks:</p> <p>i). A foolish tortoise was following the _____.</p> <p>3. Find the opposites word of 'soft' from the above passage:</p> <p>4. Answer the following questions in one word:</p> <p>i) Tortoise has something hard on his back- _____</p> <p>5. Make a sentence with the word 'blow'.</p> <p>Read the following lines of the poem:</p> <p>Trees are the kindest things I know They do not harm, they simply grow And spread a shade for sleepy cows, And gather birds among their boughs.</p>	3.5	

Now, the basis of the above lines of the poem, answer the following questions:

1. Choose the correct option for the following questions:

- (i) Who do not harm in this poem?
(a) trees (b) cows (c) birds

2. From the above line of the poem, find out the rhyming words of:

- (i) know
(ii) boughs

Q2.

3. State the following statements as True or False:

- (i) Trees spread a shade for sleepy cows. []


4. Answer the following question in one word:

- (i) What are the 'kindest things' in the above stanza?

SECTION-B (WRITING)

Q3

Look at the following pictures and frame a story based on it in 100 word.



4 marks

Critical and creative thinking, Imagination and constructive skills

Q4

Write an application to the Principal requesting him for a leave to visit your village to attend uncle's marriage.

3.5 marks

SECTION – C (GRAMMAR)

<p>Q5</p>	<p>Choose the correct option for the following questions:</p> <p>(i) Identify the verb in the following sentence – 'Raj is playing football.' (a) Raj (b) playing (c) football</p> <p>(ii) 'She is a fair and beautiful girl'. The word 'fair and beautiful' is an example of- (a) Adverb (b) Adjective (c) Noun</p> <p>(iii) 'I was standing at the door'. Here, the Preposition 'in' used is the Preposition of..... (a) time (b) place (c) direction</p> <p>(iv) The sentences that ask questions are.....sentences. (a) Declarative (b) Interrogative (c) Exclamatory</p> <p>(v) Article 'a' is used for – (a) vowels (b) consonants (c) specific or known things.</p> <p>(vi) An example of Proper Noun is- (a) Delhi (b) eraser (c) girl</p> <p>(vii) An Adverb is a word that adds to the meaning of a- (a) noun (b) pronoun (c) verb</p>	<p>3.5marks</p>	<p>Understanding , analytical skill, Interdisciplinary</p>
<p>Q6</p>	<p>Fill in the blanks as directed:</p> <p>(i) Fill the appropriate demonstrative pronoun from the words given in the bracket: are the shoes I want. (That / This / Those)</p> <p>(ii) Fill the appropriate collective noun from the words given in the bracket: My brother has a fine of old stamps.(gallary / collection / bunch)</p>	<p>1.5marks</p>	
<p>Q7</p>	<p>(iii) Fill the appropriate Preposition from the words given in the bracket: Roy got.....the car. (into / through / above)</p> <p>State the following statements as True or False:</p>		

Q8	<p>(i) Sentences that ask questions are called exclamatory sentences. []</p> <p>(ii) He hurt himself while playing. []</p> <p>(iii) An elephant is an land animal. []</p>	1.5 marks	
Q9	<p>Answer the following questions in one word:</p> <p>(i) Form a Compound word with 'foot'.</p> <p>(ii) The comparative degree of the adjective 'cunning' is.....</p> <p>(iii) Write any one example of Preposition of Time.</p>	1.5marks	
Q10	<p>Rewrite the following sentences as directed:</p> <p>(i) Rewrite the following sentence by adding a suitable predicate: Audience</p> <p>(ii) Rewrite the following sentences by adding a suitable Adjective to the highlighted word:</p> <p>(a) Shan has a car.</p> <p>(b) I love mangoes.</p>	1.5marks 1marks	
	<p>Make sentences using the following verbs.</p> <p>a) fly</p> <p>b) grows</p>		
Q11	<p style="text-align: center;">SECTION – D (LITERATURE)</p> <p>Choose the correct option for the following questions:</p> <p>(i) Ramdas was- (a) the Sachiv (b) the Mantri (c) the poet</p> <p>(ii) The rhyming word for 'never' will be- (a) near (b) ever (c) cease</p> <p>Frame sentences using the following words :</p> <p>(i) infectious</p> <p>(ii) silence</p> <p>Answer the following questions in one word :</p>	2marks	Evaluation, Understanding, Critical thinking
Q12		2marks	
Q13		2marks	

<p>Q14</p> <p>Q15</p> <p>Q16</p> <p>Q17</p>	<p>(i) Who stayed with Minal's family for a few days? (ii) What was the name of Leo's elder brother?</p> <p>Imagine you recently visited the Gwalior Fort on a school trip. Write a diary entry of about 50 words sharing your experiences of the trip.</p> <p>Answer the following questions with reference to the context:</p> <p>(i) 'Well, I have heard from the butterflies and birds that bring messages from different places that the situation is bad. Many trees have been cut down to make buildings and other structures.'</p> <p>Answer the following questions on the basis of above lines (Any 2)- (a) Who brings messages from different places? (b) Why many trees have been cut down?</p> <p>Answer the following questions in short :</p> <p>(i) How is the world peace at night, in the poem "Don't be Afraid of the Dark"? (ii) Why did the rain turn acidic? (iii) What clever idea came to Tom's mind?</p> <p>Answer the following questions in detail :</p> <p>(i) Who do you think is braver, Shivaji or Jijabai?</p>	<p>2marks</p> <p>2marks</p> <p>2.5marks</p> <p>2marks</p>	
---	--	---	--




ARMY PUBLIC SCHOOL GWALIOR
CLASS - V
ACADEMIC SESSION 2023-24
REVISION WORKSHEET (SELF –ASSESSMENT)

Subject: Hindi

Assignment No. : 4


Allotment Date: 12 September 2023

क्र.सं.	प्रश्न	अंक
1.	<p>दिए गए गद्यांश के आधार पर पूछे गए प्रश्नों के उत्तर दीजिए-</p> <p>कुछ पुस्तकालय सार्वजनिक होते हैं जो सबके लिए होते हैं। इनके खुले और बंद होने का समय निश्चित होता है। इनमें हर तरह की पुस्तक होती हैं। इसके सदस्य बनकर पुस्तक घर पर भी ले जा सकते हैं। ये पुस्तकालय बहुत उपयोगी होते हैं। इनसे निर्धन विद्यार्थी भी लाभ उठाते हैं। वे महँगी पुस्तकें नहीं खरीद पाते। वे यहाँ बैठकर उन्हें पढ़ सकते हैं और कुछ समय के लिए पुस्तकों को घर भी ले जा सकते हैं।</p> <p>(क) रिक्त स्थानों की पूर्ति कीजिए-</p> <p>(i) ये पुस्तकालय बहुत होते हैं।</p> <p>(ii) वे बैठकर उन्हें पढ़ सकते हैं।</p> <p>(ख) निम्नलिखित प्रश्नों के उत्तर एक या दो वाक्यों में दीजिए-</p> <p>(i) पुस्तकालय का सदस्य बनने से क्या लाभ है?</p> <p>(ii) महँगी पुस्तकें कौन नहीं खरीद पाते हैं?</p> <p>(ग) निम्नलिखित प्रश्नों के उत्तर एक शब्द में दीजिए-</p> <p>(i) यह गद्यांश किसके बारे में है?</p> <p>(ii) पुस्तकालय से कौन लाभ उठाता है?</p>	<p>1x2=2</p> <p>1x2=2</p> <p>1x2=2</p>
2.	<p>चित्रकथा लेखन</p> <p>नीचे दिए गए चित्र के आधार पर एक छोटी-सी कहानी लिखिए।</p>	2



3.	पत्र-लेखन गृहकार्य अधूरा रह जाने पर विषय-अध्यापक/अध्यापिका से क्षमा माँगते हुए एक पत्र लिखिए।	2
4.	कल्पना-लेखन किसी महान व्यक्ति के बारे में वे सारी बातें लिखिए जो आपको प्रेरणा प्रदान करती हैं।	2
5.	कोष्ठक में लिखे शब्दों से भाववाचक संज्ञा बनाकर खाली स्थान में लिखिए- (i) रमन की बहुत अच्छी है। (लिखना) (ii) प्रयास करने पर जरूर मिलती है। (सफल)	1x2=2
6.	निम्नलिखित शब्दों का लिंग बदलिए- (i) सेठ _____ (ii) पुत्र _____	1x2=2
7.	निम्नलिखित रेखांकित शब्दों के वचन बदलकर वाक्य को दोबारा लिखिए- (i) मैंने बाजार से पुस्तक खरीदी। (ii) बंदर ने केला खाया।	1x2=2
8.	दिए गए सर्वनाम शब्दों का वाक्यों में प्रयोग कीजिए- (क) आप (ख) यह	1x2=2
9.	निम्नलिखित शब्दों के दो-दो पर्यायवाची शब्द लिखिए- (i) घर _____, _____ (ii) आँख _____, _____	1x2=2
10.	निम्नलिखित शब्दों के दो-दो अनेकार्थी शब्द लिखिए- (i) पत्र _____, _____ (ii) फल _____, _____	1x2=2
11.	निम्नलिखित समरूपी भिन्नार्थक शब्दों के अर्थ लिखिए- (i) आकार _____ (ii) आकर _____	1x2=2

12.	निम्नलिखित वाक्यांशों के लिए एक शब्द लिखिए- (i) जो अन्न उगाता है _____ (ii) जिसमें बल न हो _____	1×2=2
13.	नीचे दी गई पंक्तियाँ पूरी कीजिए- निज आन-बान, मर्यादा का प्रभु _____।	1
14.	निम्नलिखित शब्दों के अर्थ लिखिए- (i) आयोजन= _____ (ii) कौशल= _____	1×2=2
15.	निम्नलिखित पंक्तियों का भावार्थ स्पष्ट कीजिए- दैव! मेरे भाग्य में है क्या बदा में बचूँगी या मिलूँगी धूल में।	1
16.	निम्नलिखित प्रश्नों को पढ़कर सही या गलत का चिह्न लगाइए- (क) शहनाई को फूँक से बजाया जाता है। () (ख) अब्राहम लिंकन को रूस का राष्ट्रपति चुना गया। () (ग) क्रिकेट के खेल में एक टीम में 15 खिलाड़ी होते हैं। ()	1×3=3
17.	निम्नलिखित वाक्यों की वर्तनी शुद्ध कर पुनः लिखें- (क) बादशाह ने युवक का वेतन पंद्रह रुपए तय किया। (ख) युवक को हिशाब में एक पेसा कम लगा।	2×1=2
18.	निम्नलिखित प्रश्नों के उत्तर दीजिए- (i) बादशाह ने अपने मंत्री से क्या कहा? (ii) उद्योग मेलों से हमें क्या जानकारी मिलती है? (iii) अब्राहम को उसकी लगन का क्या फल मिला?	1×3=3



ARMY PUBLIC SCHOOL GWALIOR
CLASS - V
ACADEMIC SESSION 2023-24
REVISION WORKSHEET (SELF –ASSESSMENT)


Subject: Mathematics

Assignment No. : 4

Allotment Date: 12 September 2023

S. NO.	QUESTIONS	MARKS	NATURE
1	Fill in the blanks. a) $98704 + \underline{\hspace{2cm}} = 9241 + 98704$ b) $7.583 \times \underline{\hspace{2cm}} = 758.3$ c) Sum of the smallest prime number and the smallest odd composite number is $\underline{\hspace{2cm}}$. d) The difference between the largest factor and the smallest factor of 64 is $\underline{\hspace{2cm}}$.	4X1=4	
2	State 'True' or 'False' for following statements. a) Dividend = Divisor x Quotient (T/F) b) The greatest 5 digit number is 1000 c) The product of a number and 0 is always 0. (T/F) d) When denominators are same , they are called unlike fractions (T/F)	4X1=4	
3	Tick the correct answer from the given options: (i) $455799 + 1 = \underline{\hspace{2cm}}$. a) 456000 b) 455800 b) 455900 d) None of these (ii) $5 \times 2 \times 3 \times 3$ is the prime factorization of $\underline{\hspace{2cm}}$. a) 30 b) 120 c) 90 d) 150 (iii) $4972 \div 4 = \underline{\hspace{2cm}}$. a) 1243 b) 2243 c) 1234 d) None of these (iv) Which number is a composite? (a) 91 (b) 19 (c) 71 (d) 41	4X1=4	
4	Match the following columns: (a) Eight tenths (i) factor of 32 (b) $7 + \frac{3}{5}$ (ii) 99	4X1=4	

	(c) 8 (d) XCIX	(iii) 0.8 (iv) 38/5		
5	<p>Solve the following questions: -</p> <p>(a) Jar A has 22.62 liters of water and Jar B has 10.65 liters of water. Which jar is having more water in it?</p> <p>(b) What are the 5th and 7th multiples of 15? OR Write the Roman numeral of 752.</p> <p>(c) Write down the smallest and greatest 2-digit prime number.</p> <p>(d) Multiply $8 \times 4\frac{1}{2}$ OR Find the difference between the place value and the face value of 8 in 358692.</p>		5X1=5	
6	<p>Solve the following questions: -</p> <p>(a) Convert $\frac{3}{5}$ into decimal form.</p> <p>(b) Add 74.507, 53.006 and 0.897. OR Find the prime factorization of 80.</p> <p>(c) There are 400 workers in a factory. If $\frac{1}{4}$ workers have Car, $\frac{2}{5}$ of workers have motorbike and rest workers have bicycle. How many workers have bicycle?</p> <p>(d) Find two equivalent fractions of $\frac{2}{5}$.</p> <p>(e) Find the HCF of 24, 36, and 48. OR The LCM of 20 and 32 is 160, find the HCF?</p>		5X2=10	
7	<p>Solve the following questions: -</p> <p>(a) There are 7000 students in a school. If $\frac{3}{5}$ students like sports, then how many students do not like sports? OR Three bells ring at intervals of 5, 10, 15 minutes respectively. If they all ring at 8:00 AM, then at what time will they next ring together?</p> <p>(b) Find the smallest number which is exactly divisible by 24, 40 and 48</p> <p>(c) The sum of two numbers is 7895402. If the smallest number is the largest 5-digit number, find the other number. OR 54296 students of school will have to go for a picnic. If 44 students can sit in a bus, how many buses will be needed?</p>		3X3=9	



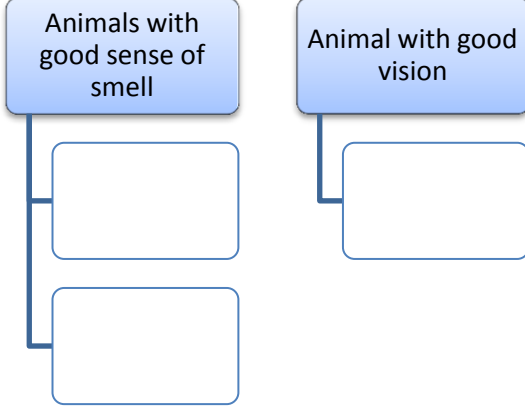
ARMY PUBLIC SCHOOL GWALIOR
CLASS - V
ACADEMIC SESSION 2023-24
REVISION WORKSHEET (SELF –ASSESSMENT)

Subject: EVS

Assignment No. : 4

Allotment Date: 12 September 2023

S. NO.	QUESTIONS	MARKS	NATURE						
Q1	<p>Choose the correct option.</p> <p>i). Rearing of honeybees for honey is called _____. a. Apiculture b. Pisciculture c. Sericulture</p> <p>ii). Jim Corbett National Park is located in _____. a. Uttar Pradesh b. Madhya Pradesh c. Uttarakhand</p> <p>iii). Van Mahotsav is celebrated in this month. a. May b. June c. July</p> <p>iv). Which of the following plants reproduce via seeds? a. Coconut b. Rose c. Sweet potato</p> <p>v). It causes due to deficiency of vitamin C a. Beriberi b. Rickets c. Scurvy</p>	5x1=5							
Q2	<p>Match the following options:</p> <table><tr><td>i). Few seeds</td><td>a. Kerela</td></tr><tr><td>ii). Garo</td><td>b. Apple</td></tr><tr><td>iii). Kalaripayattu</td><td>c. Meghalaya</td></tr></table>	i). Few seeds	a. Kerela	ii). Garo	b. Apple	iii). Kalaripayattu	c. Meghalaya	3X1=3	
i). Few seeds	a. Kerela								
ii). Garo	b. Apple								
iii). Kalaripayattu	c. Meghalaya								
Q3	<p>Fill in the blanks:</p> <p>i). Famine and drought are the example of _____ calamities. ii). Any job done to earn money is called an _____. iii).Elephants are poached for their _____. iv). Bishnois belong to the state of _____.</p>	5X1=5							

	v). Food is churned with digestive juices in _____.		
Q4	State whether the following statements are 'True' or 'False'. i). Night blindness is caused due to the deficiency of Vitamin C. _____ ii). Chipko Movement started in the state of Maharashtra. _____	2x1=2	
Q5	Complete this flowchart. 	1x1=1	
Q 6.	Circle the odd word. i). Butter, Ghee, Cream, Oil ii). Beri-Beri, Scurvy, Rickets, Goitre	2x1=2	
Q 7.	Identify whether the following statements are true or false and correct the false statement. i). Seed coat provides food to the embryo. ii). Pashmina is not very expensive type of wool. iii). Polar bear hibernates in the winter season.	3x1=3	
Q 8.	Define the following terms: i). Tribals ii). Germination of seeds iii). Dignity of labour	3x2=6	
Q 9.	Answer the following in one word: i). Which animal have eyes on either side of head. _____ ii). Name the seed dispersed by explosion. _____	2x1=2	
Q 10.	Give example of the following: i). Indoor game _____ ii). Medicinal tree _____	2x1=2	
Q 11.	Answer the following questions in short: i). What is balance diet? ii). Explain respiration.	2x2=4	
Q 12.	Answer the following questions in long: i). List the various factors which influence our likes and dislikes.	2x2=4	

	ii). What is ankush? Who use it and for what?		
Q 13.	Answer the following questions based on atlas: i). Name two neighbouring seas/oceans of India? ii). Which ocean lies in the north of Russia?	2x0.5=1	



ARMY PUBLIC SCHOOL GWALIOR
CLASS - V
ACADEMIC SESSION 2023-24
REVISION WORKSHEET (SELF –ASSESSMENT)



Subject: G.K

Assignment No. : 4

Allotment Date: 12 September 2023

S. NO.	QUESTIONS	MARKS	NATURE
1.	<p>Fill in the blanks.</p> <p>i). The _____ industry in India is the second biggest agro-based industry. Uttar Pradesh has the largest number of this industry.</p> <p>ii). _____ style of painting originated in Mithila Region of Bihar. In this style, geometrical patterns are used to depict common rituals such as birth, marriage, festivals, etc.</p> <p>iii). Located in Mexico, this natural wonder was formed in 1952 due to a volcanic eruption. _____</p> <p>State whether the statements are true or false:</p> <p>i). Loss of sense of taste is a symptom of coronavirus disease. _____</p> <p>ii). A group of Jaguar is called Army. _____</p>	<p>3x1=3</p> <p>2x1=2</p>	<p>Informative and general awareness</p>
2	<p>Answer the following questions in one word:</p> <p>i). A group of gorillas is called - _____</p> <p>ii). Largest country that entirely falls in Europe. _____</p> <p>iii). Invention of electric light bulb done by - _____</p> <p>Identify the dresses/freedom fighters in the following pictures.</p>	<p>3x1=3</p> <p>2x1=2</p>	<p>Identification and general awareness</p>



a. _____



b. _____



ARMY PUBLIC SCHOOL GWALIOR
CLASS - V
ACADEMIC SESSION 2023-24
REVISION WORKSHEET (SELF –ASSESSMENT)

Subject: Computer

Assignment No. : 4

Allotment Date: 12 September 2023

S.NO	QUESTIONS	MARKS	NATURE
1.	<p>Tick the correct answer:</p> <ol style="list-style-type: none">The document we create is called a _____<ol style="list-style-type: none">FolderFileText_____ refers to the intersection of a row and a column in the table.<ol style="list-style-type: none">RecordCellLabelThe second generation computers used _____<ol style="list-style-type: none">TransistorsVacuum tubeICThe _____ generation computers are based on Artificial Intelligence.<ol style="list-style-type: none">FirstThirdFifthDeleted file goes into _____<ol style="list-style-type: none">Music folderRecycle binDesktop	0.5X5=2.5	Information
2.	<p>Write 'T' for True and 'F' for False statements.</p> <ol style="list-style-type: none">We cannot apply transition in Normal view.Word is a popular word processing program.The third generation of computers used vacuum tubes.A file is a collection of data and information.A file can have any number of folders in it.	0.5X5=2.5	Interdisciplin ary

3.	Fill in the blanks. 1. _____ theme is a built-in design for creating a presentation. 2. To start Mail Merge, click on _____ tab. 3. Abacus was invented by the _____. 4. A computer represents files and folders with _____.	0.5X4=2	Analytical Skill
4.	Answer the following :- (i) What is the use of Slide Show? (ii) What is the use of Format Painter? (iii) Name the five key features that Charles Babbage used in Analytical Engine.	1X3=3	Analytical Skill