

ARMY PUBLIC SCHOOL GWALIOR
CLASS - V
ACADEMIC SESSION 2024-25
REVISION WORKSHEET (SELF –ASSESSMENT)

Subject: English

Assignment No. : 2

Allotment Date: 27 July 2024

S. No.	QUESTIONS	MARKS	NATURE
1	<p style="text-align: center;">Section -A Reading</p> <p>Read the passage carefully and answer the following questions.</p> <p>The Curious Monkey</p> <p>Once upon a time in a dense jungle, there lived a curious monkey named Max. Max loved to explore every nook and cranny of the jungle. One sunny morning, Max decided to venture deeper into the jungle than ever before. As he swung from tree to tree, he noticed a strange, glowing object lying on the ground. Max's curiosity got the better of him, and he hurried down to investigate.</p> <p>To his surprise, it was a shiny golden key. Max picked it up and wondered what it could open. Determined to find out, he started looking around for something that the key might unlock. After a while, he stumbled upon a large, ancient chest hidden behind some thick bushes. Max's heart raced with excitement as he inserted the key into the lock. With a click, the chest opened to reveal a treasure trove of sparkling jewels and gold coins.</p> <p>Max couldn't believe his eyes. He realized that his curiosity had led him to an incredible discovery. From that day on, Max continued to explore the jungle, always eager to uncover its hidden secrets.</p> <hr/> <p>Choose the correct option.</p> <ol style="list-style-type: none">What did Max find in the jungle?<ul style="list-style-type: none">a) A magic wandb) A golden keyc) A hidden mapd) A silver coinWhat did the golden key unlock?<ul style="list-style-type: none">a) A hidden doorb) A treasure chestc) A secret cave <p>Answer the following questions in one sentence.</p> <ol style="list-style-type: none">Why did Max venture deeper into jungle?	4 Marks	Information

	2. What did Max find inside the chest?		
2	<p style="text-align: center;">Section -B Writing</p> <p>Write eight to ten sentences on 'How I spent my summer vacation'.</p>	4 Marks	Communication Skills
3	<p style="text-align: center;">Section – C Grammar</p> <p>Do as directed:</p> <p>(i) The naughty boy pulled a _____ of grass and made a mess of the lawn. (Use collective noun)</p> <p>(ii) Where is Kartik? I haven't seen _____ in several days. (Use pronoun)</p> <p>(iii) Cats are _____ (cunning) than lions. (Use comparative degree of adjectives)</p>	3 Marks	Analytical Skills
4	<p>Rewrite the sentences correctly by deleting, changing or inserting suitable articles.</p> <p>(i) I have book that I want to read.</p> <p>(ii) They visited Eiffel Tower last summer.</p>	2Marks	Interdisciplinary
5	<p style="text-align: center;">Section – D Literature</p> <p>Answer the following questions in one word.</p> <p>(i) Who takes rest when the day is done? (Poem – Don't be afraid of the dark)</p> <p>(ii) Why was there a look of pity on Ben's face?</p>	2 Marks	Evaluation
6	<p>Answer the following questions in one sentence.</p> <p>(i) Which gesture did Woloda inherit from his father?</p> <p>(ii) Why was Aunt Polly delighted?</p> <p>(iii) Mention two important things that you come to know about what the poet loved as a child.</p>	3 Marks	Critical Thinking
7	<p>Answer any one of the following questions.</p> <p>(i) Suppose your mother is busy preparing lunch for you. She tells you to clean your room. You are watching your favourite</p>	2 Marks	HOT

	movie on TV and don't want to miss it. What will you do? OR What are the main qualities of great leaders, according to Nehru?		
--	---	--	--



ARMY PUBLIC SCHOOL GWALIOR
CLASS - V
ACADEMIC SESSION 2024-25
REVISION WORKSHEET (SELF –ASSESSMENT)




Subject: Hindi

Allotment Date: 27 July 2024

Assignment No. : 2

क्रमसं.	प्रश्न	अंक
1.	<p>प्र 1. निम्नलिखित गद्यांश को ध्यानपूर्वक पढ़ें तथा दिए गए प्रश्नों के उत्तर दें -</p> <p>एक तपती दोपहर, सुमन और उसके दोस्तों ने पास के जंगल घूमने का फैसला किया। उन्होंने अपने साथ खाने के लिए कुछ नाश्ता रखा , अपनी लंबी पैदल यात्रा के लिए जूते पहने, और अपने साहसिक कार्य पर निकल पड़े। जैसे ही उन्होंने जंगल में प्रवेश किया, ऊंचे पेड़ों और पक्षियों की मधुर चहचहाहट ने उनका स्वागत किया। उन्होंने एक संकरी पगडंडी पर जाने का निर्णय लिया जो उन्हें जंगल में और अंदर ले गई। सुमन ने रास्ते में खिले हुए रंग-बिरंगे जंगली फूलों को देखा। अचानक उन्हें सरसराहट की आवाज सुनाई दी। उन्होंने पीछे मुड़कर देखा तो झाड़ियों के बीच से एक हिरण शालीनता से उछल रहा था। उत्साह से, उन सबने अपनी खोज जारी रखी और एक ठंडे पानी के झरने के पास आ गए। उन्होंने अपने पैरों को ठंडे पानी में डुबोया और एक-दूसरे पर चंचलता से छींटे मारे। कुछ देर आराम करने के बाद, वे अपने वन भ्रमण की साहसिक यादों को संजोते हुए और अपने ऊपर गर्व महसूस करते हुए घर वापस आ गए।</p> <p>(क) रिक्तस्थानों की पूर्ति करें -</p> <ol style="list-style-type: none"> 1. एक तपती दोपहर, सुमन और उसके दोस्तों ने पास के _____ घूमने का फैसला किया । 2. सुमन ने रास्ते में खिले _____ देखा। <p>(ख) निम्नलिखित प्रश्नों के उत्तर एक या दो वाक्य में दें -</p> <ol style="list-style-type: none"> 1. सुमन ने जंगल में प्रवेश करते ही क्या सुना? 1. झाड़ियों के पीछे कौन उछल रहा था? 	<p>बोधात्मक</p> <p>(1x2=2)</p> <p>(1x2=2)</p>
2.	बीमार होने पर प्रधानाचार्य को दो दिन के अवकाश के लिए प्रार्थना पत्र लिखिए।	<p>(2x1=2)</p> <p>अन्तः विषयात्मक</p>
3.	“विद्यालय में मेरा पहला दिन” विषय पर अनुच्छेद लिखें ।	<p>(2x1=2)</p> <p>ज्ञानात्मक</p>
4.	निम्नलिखित प्रश्नों के उत्तर एक शब्द में दें -	(1x2=2)

	<p>1. भाषा को कौन व्यवस्थित करता है ?</p> <p>2. लिपि किसे कहते हैं ?</p>	<p>विश्लेषणात्मक</p>
5.	<p>सही उत्तर चुनकर (✓) लगायें -</p> <p>1. वर्णों के समूह को ----- कहते हैं - वर्णमाला [] व्यंजन [] स्वर []</p>	<p>(1x1=1)</p> <p>सूचनात्मक</p>
6.	<p>संज्ञा की परिभाषा व उनके भेदों नाम लिखें ।</p>	<p>(1x3=3)</p> <p>पारस्परिक संबंध</p>
7.	<p>निम्नलिखित शब्दों के अर्थ लिखें-</p> <p>1. भिक्षा 2. ईर्ष्या</p>	<p>(0.5x1=1)</p> <p>रचनात्मक</p>
8.	<p>निम्नलिखित शब्दों का प्रयोग कर वाक्य बनाएं -</p> <p>1. प्रेम 2. बलिदान</p>	<p>(0.5x1=1)</p> <p>समझदारी</p>
9.	<p>निम्नलिखित पंक्तियों का आशय (अर्थ) स्पष्ट करें - निज आन -बान मर्यादा का , प्रभु ध्यान रहे , अभिमान रहे।</p>	<p>(1x1=1)</p> <p>विचारात्मक</p>
10.	<p>निम्नलिखित वाक्य की वर्तनी शुद्ध कर पुनः लिखें -</p> <p>1. संटूर को लकड़ी की छोटी छदों से बनाया जाता है</p>	<p>(1x1=1)</p> <p>महत्वपूर्ण सोच</p>
11.	<p>निम्नलिखित प्रश्नों के उत्तर दें -</p> <p>1. शहनाई का आकार कैसा होता है ? 2. सुप्रिया की बात सुनकर धनी सेठों ने क्या किया ?</p>	<p>(1x2=2)</p> <p>उच्चस्तरीय चिंतन</p>



ARMY PUBLIC SCHOOL GWALIOR
CLASS - V
ACADEMIC SESSION 2024-25
REVISION WORKSHEET (SELF –ASSESSMENT)

Subject: Mathematics

Assignment No. : 2

Allotment Date: 27 July 2024

S. NO.	QUESTIONS	MARKS	NATURE
1	<p>Fill in the blanks:</p> <p>(a) The product of a number and 0 is always _____.</p> <p>(b) 100 millions is equal to _____.</p>	2×1 = 2	Observation
2	<p>Write whether the following statements are 'True' or 'False':</p> <p>(a) IX is bigger than X. (_____)</p> <p>(b) The product of place values of 4 in 2458 and 74550 is 1600000. (_____)</p>	2×1 = 2	Mental Ability
3	<p>Match column A with column B:</p> <p>(a) $793001 + 25270 = 818271$ Property</p> <p>(i) Associative</p>	2×1 = 2	Decision Making

	(b) $1480 + (2659 + 321) = (1480 + 2659) + 321$ (ii) Commutative Property		
4	<p>Multiple Choice Questions:</p> <p>(a) The greatest 7-digit number formed by using the digits 4,7,3,0,2,8,1 is</p> <p>(i) 8743210 (ii) 8742013 (iii) 1023478 (iv) 8874320</p> <p>(b) How many times 60 is 3600?</p> <p>(i) 30 (ii) 60 (iii) 120 (iv) 180</p>	2×1 = 2	Understanding
5	<p>Do as directed:</p> <p>(a) Add the following: $254134 + 6624511 + 32121352$</p> <p>(b) Find the product and write the number sentence: 385462×18</p> <p>(c) Round off 4582 to the nearest hundreds.</p>	3×2 =6	Problem-Solving
6	<p>Read the word problems and solve them:</p> <p>(a) A carton contains 450 soap cakes. If there are 1585 cartons in a godown, find the number of soap cakes in the godown?</p> <p>(b) What number should be added to the sum of 5672672 and 3821426 to get 10000000 ?</p>	2×3 =6	Critical Thinking





ARMY PUBLIC SCHOOL GWALIOR
CLASS - V
ACADEMIC SESSION 2024-25
REVISION WORKSHEET (SELF –ASSESSMENT)


Subject: EVS

Assignment No. : 2

Allotment Date: 27 July 2024

S.NO	QUESTIONS	MARKS	NATURE		
Q1.	<p>Choose the correct option.</p> <p>i). Which of the following is the man-made calamity? a. Earthquake b. Flood c. War</p> <p>ii). Our body temperature is _____ a. 98.4 F b. 37⁰ C c. Both a and b</p> <p>iii) Compensation is given by----- a. government b. contractor c. neighbour</p> <p>iv) _____ is essential for playing sports. a. Cheating b. Team spirit c. Both a and b</p>	5x0.5=2.5	Informative Understanding		
Q2.	<p>Match the following.</p> <table style="width: 100%; border: none;"> <tr> <td style="width: 50%; vertical-align: top;"> <p>Column A</p> <p>i)Thang Ta ii) Kalaripayattu arts iii) Karate</p> </td> <td style="width: 50%; vertical-align: top;"> <p>Column B</p> <p>a) Kerala b) Martial c) Manipur</p> </td> </tr> </table>	<p>Column A</p> <p>i)Thang Ta ii) Kalaripayattu arts iii) Karate</p>	<p>Column B</p> <p>a) Kerala b) Martial c) Manipur</p>	3x0.5=1.5 m	Understanding
<p>Column A</p> <p>i)Thang Ta ii) Kalaripayattu arts iii) Karate</p>	<p>Column B</p> <p>a) Kerala b) Martial c) Manipur</p>				
Q3.	<p>Fill in the blanks:</p> <p>i) Earlier _____ were confined to their homes. ii) Special people needs our _____ care and love. iii) _____ is essential for playing sports. iv) Sabarmati Ashram is in _____.</p> <p>_____</p> <p>_____</p>	4X0.5=2	Understanding		
Q4.	<p>State whether the given statements are True or False. Correct the False statement.</p> <p>i) We should breathe through mouth. ii) June 20th is celebrated as World Yoga Day. iii) We learn many values and skills from our parents.</p> <p>_____</p> <p>_____</p>	3x0.5=1.5	Interdisciplinarily		

Q5.	Circle the odd word. a. Lungs, Stomach, Windpipe, Nose b. Lawyer, Sweeper, Maid, Cleaner	2x0.5=1	Analytical Skill
Q6.	Identify the given picture and write its name.i)  i)  ii)	2x0.5=1	Identification
Q7.	Define- i) Martial Art ii) immigration	2x0.5=1	Vocabulary
Q8.	Complete the given flow chart. Sense organ $\xrightarrow[\text{Nerves}]{\text{Sensory}}$ <input type="text"/> $\xrightarrow[\text{Nerves}]{\text{Motor}}$ <input type="text"/>	1x1=1	Analytical
Q9.	Answer the following questions in one word. i) Who is the first woman Prime Minister of India? ii) What do doctors use to check the heart beat of patients?	2x0.5=1	Evaluation
Q10.	Short Answer Questions. i) Why does demolition take place in cities? ii) Write two differences between Indoor Games and Outdoor Games?	2x1=2	Critical Thinking
Q11.	Long Answer Question. i) List some government initiatives to improve the life of weaker sections.	1x1.5=1.5	Evaluation
Q12.	Draw neat and labelled diagram of Human Respiratory System.	1x2=2	Creative
Q13.	Atlas - MCQ's Choose the correct option. 1. Which is the largest continent? a) Africa b) Asia c) North America 2. Which planet is known as Blue Planet? a) Mercury b) Saturn c) Earth	2x0.5=1	Knowledge and understanding
Q14.	Locate the following on the political map of India. a) Himachal Pradesh b) River Yamuna	2x0.5=1	Knowledge and understanding








ARMY PUBLIC SCHOOL GWALIOR
CLASS - V
ACADEMIC SESSION 2024-25
REVISION WORKSHEET (SELF –ASSESSMENT)


Subject: Art and Work Education
Allotment Date: 27 July 2024

Assignment No. : 2

S. NO.	QUESTIONS	MARKS	NATURE
--------	-----------	-------	--------

1.	<p>How many types of Lines in Art are there?</p> <p>a) Two b) Four c) Five d) one</p>	1	Creativity
2.	<p>_____ lines convey action and excitement.</p> <p>a) curved lines b) slanted lines c) horizontal lines d) zigzag lines</p>	1	Creativity
3.	<p>What type of line is this?</p>  <p>a) curved lines b) slanted lines c) horizontal lines d) vertical lines</p>	1	Creativity
4.	<p>A _____ is one of the seven elements of art.</p> <p>(a) Line (b) Perspective (c) Shading (d) Painting</p>	1	Creativity
5.	<p>What type of line is this?</p>  <p>a) Zigzag line b) Curved lines c) Slanted lines d) Horizontal lines</p>	1	Creativity
6.	<p>Zigzag lines are a series of diagonal lines joined at ends.</p> <p>a) True b) False</p>	1	Creativity

7.	Vertical lines are lines that move left and right. a) True b) False	1	Creativity
8.	Curved lines can be simply wavy or _____. a) Straight b) Spiral c) Slant d) Square	1	Creativity
9.	Diagonal lines are straight lines that _____ in any direction except horizontal or vertical. a) Straight b) Spiral c) Slant d) Zigzag	1	Creativity
10.	Which among these is the picture of Zigzag line? A  B  C 	1	Creativity



ARMY PUBLIC SCHOOL GWALIOR
CLASS - V
ACADEMIC SESSION 2024-25
REVISION WORKSHEET (SELF –ASSESSMENT)


Subject: Health and Physical Education
Allotment Date: 27 July 2024

Assignment No. : 2

S.N	QUESTIONS	MARKS	SKILLS/COMPETENCIES
1	Shorts answer question 1.what was chess originally called in india ? a) box game b) chaturanga c) 8x8 grid d) box chess	1	INFORMATION

2	<p>2. name the most popular tag game in india.</p> <p>a) chain chain</p> <p>b) ice water</p> <p>c) pakadam pakdai</p> <p>d) kho kho</p>	1	INFORMATION
3	<p>3. played with seven stones is called?</p> <p>a)7 wonder</p> <p>b) 7 square</p> <p>c) Sitholia</p> <p>d) 7 chance</p>	1	INFORMATION
4	<p>4. a game with seven members in each team is called?</p> <p>a) kho kho</p> <p>b) football</p> <p>c) cricket</p> <p>d) realy 100 m</p>	1	INFORMATION
5	<p>FILL IN THE BLANKS: -</p> <p>1. The _____ is a small oval shaped piece of wood.</p> <p>a) Lattoo</p> <p>b) Plastic ball</p> <p>c) Kancha</p> <p>d) Hand ball</p>	1	INFORMATION

6	<p>2. There are _____ player in each team of kho kho</p> <p>a) 7 b) 4 c) 8 d) 9</p>	1	INTERDISCIPLINARY
7	<p>3. Jumping games good for student_____.</p> <p>A) Health B) Ground C) Cone D) Dress</p>	1	INTERDISCIPLINARY
8	<p>1) We can play indigenous games indoor as well as outdoor. (True/False)</p>	1	INTERDISCIPLINARY
9	<p>9. we play games to be healthy and strong. (True/ False)</p>	1	UNDERSTANDING
10	<p>10.Junk food is good for health. (True/False)</p>	1	UNDERSTANDING



ARMY PUBLIC SCHOOL GWALIOR
CLASS - V
ACADEMIC SESSION 2024-25
REVISION WORKSHEET (SELF –ASSESSMENT)

Subject: Computer

Assignment No. : 2

Allotment Date: 27 July 2024

S.NO.	QUESTIONS	MARKS-10	NATURE
1	Choose and write the correct option (MCQ):- 1. The document we create is called a _____ a) Folder b) File c) Text 2. A group of files stored under a common name is called a _____ a) File b) Cupboard c) Folder 3. Selected files appear _____ on our screen. a) Highlighted b) Flashing c) Colorful 4. Changing the name of a file / folder is called_____. a) Renaming b) Copying c) Moving 5. Deleted file goes into _____ a) Music folder b) Recycle bin c) Desktop	1/2x5=2 ½	Information
2	Fill in the blanks- 1. A computer represents files and folders with _____. 2. A folder inside another folder is called _____.	1/2x2=1	Understanding
3.	Write 'T' for True and 'F' for False statements. 1. A file is a collection of data and information. 2. A file and a folder are represented with the same icon. 3. Copying a file removes it from its original location. 4. File Explorer is used to view and organize files and folders.	1/2x5=2 ½	Understanding

	5. A file can have any number of folders in it.		
4.	Answer the following questions:- <ol style="list-style-type: none">1. Write the names of main folders in Windows 10.2. What is the role of File Explorer in Windows 10?3. How do we rename a file/folder?4. What is the use of Recycle Bin?	1x4=4	Evaluation



**ARMY PUBLIC SCHOOL GWALIOR
CLASS - V**

**ACADEMIC SESSION 2024-25
REVISION WORKSHEET (SELF –ASSESSMENT)**

**Subject: Music and Dance
Allotment Date: 27 July 2024**

Assignment No. : 2

S. NO.	QUESTIONS	MARKS	NATURE
1	How many matras are there in teentaal ? a) 16 b) 10	1	Informative
2	How many vibhagas are there in teentaal ? a) 4 b) 3	1	Informative
3	What is the sign of khali ? a)x b)0	1	Informative
4	Before a dance performance _____ is done. a) Pranam b) Aasheervaad dena	1	Informative
5	Is Bhumi Pranam done in classical dance? a) Yes b) No	1	Informative
6.	Tu pyar ka sagar , _____ daya ka tu hai ? a) sagar b) pyar	1	Informative

7.	Gehrai mile _____ ki , unchai mile _____ ki a) asman , sagar b) sagar , asman	1	Informative
8.	What do you mean by prayer ? a) worship b) request	1	Informative
9,	So high , you can't get _____ it a) under b) over	1	Informative
10.	So wide you can't get _____ it ? a) around b) over	1	Informative

