




ARMY PUBLIC SCHOOL GWALIOR
CLASS - IV
ACADEMIC SESSION 2024-25
REVISION WORKSHEET (SELF –ASSESSMENT)

Subject: English

Assignment No. : 2

Allotment Date: 27 July 2024

S. No.	QUESTIONS	MARKS	NATURE
1	<p style="text-align: center;"><u>Section- Creative Writing</u></p> <p>Look at the picture and write four sentences with the help of the given hints.</p> <p>[Hints: park, trees, boys, girls, painting, building]</p> 	4 Marks	Information
2	<p style="text-align: center;"><u>Section- Grammar</u></p> <p>Fill in the blanks as directed-</p> <p>i) The _____ of sailors were ready to see the match. (Use Collective noun)</p> <p>ii) Sri Lanka is _____ island. (Use Article)</p> <p>iii) Always speak the _____. (Use Abstract noun)</p>	3 Marks	Interdisciplinary
3	<p>Rewrite the following sentences as directed-</p> <p>i) The goose flew over the lake. (Change the gender of the highlighted word)</p> <p>ii) The chef made a pastry. (Change the highlighted noun to its plural)</p> <p>iii) That books belongs to Neena. (Write the correct pronoun of the highlighted word)</p>	3 Marks	Analytical Skill
	<u>Section- Literature</u>	2 Marks	Understanding

4	<p>Tick the correct answer</p> <p>1 Who were good friends?</p> <p>a) A tree and a boy b) A tree and a bird c) A boy and a dog</p> <p>2 While playing on the beach, Sharat built a</p> <p>a) hut b) castle c) ship</p>		
5	<p>Answer the following questions-</p> <p>1. What kind of life did Elias lead when he became wealthy /.</p> <p>2. What is being described in the first stanza of the poem? (Where Go the Boats?)</p> <p>3. Name any two traditional dishes of Goa?</p>	3 Marks	HOT
6	<p>Do as directed-</p> <p>1. The boy cut off the branches to build a house. <input type="checkbox"/> (State True or False)</p> <p>2. The river is dark brown and the sand is _____ (Fill up the blank-)</p>	2 Marks	Critical Thinking and Problem Solving
7	<p>Answer the following questions in one word-</p> <p>i) What did the boy want to keep himself warm? _____</p> <p>ii) Who would bring the poet's boats ashore? _____</p> <p>iii) Who came to meet Muhammad Shah? _____</p>	3 Marks	Evaluation



ARMY PUBLIC SCHOOL GWALIOR
CLASS - IV
ACADEMIC SESSION 2024-25
REVISION WORKSHEET (SELF –ASSESSMENT)

Subject: Hindi


Assignment No. : 2

Allotment Date: 27 July 2024

संख्या	प्रश्न	अंक	प्रकृति
प्र 1.	<p>दिए गए गद्यांश को पढ़कर उसके नीचे लिखे प्रश्नों के उत्तर लिखो-</p> <p>नदी जीवन का एक महत्वपूर्ण हिस्सा है। यह न केवल पीने का पानी देती है, बल्कि खेती और उद्योग के लिए भी पानी की आपूर्ति करती है। कई स्थानों पर नदियों का पानी बिजली बनाने के लिए भी उपयोग किया जाता है। नदी के किनारे बसे शहर और गाँव अपनी संस्कृति और परंपराओं के लिए भी नदियों पर निर्भर हैं। लेकिन, बढ़ते प्रदूषण और अंधाधुंध उपयोग के कारण नदियों का पानी दूषित हो रहा है। हमें नदियों की स्वच्छता और सुरक्षा के लिए उचित कदम उठाने चाहिए।</p> <p>1. नदी का क्या महत्व है?</p> <p>-----</p> <p>2. रिक्तस्थान की पूर्ति करें -</p> <p>(क) कई स्थानों पर नदियों का पानी..... बनाने के लिए भी उपयोग किया जाता है।</p> <p>(ख) हमें नदियों की..... के लिए उचित कदम उठाने चाहिए।</p>	3x1=3	बोधोत्तर
प्र2.	<p>अपने मामा की शादी में जाने हेतु कक्षाध्यापिका को तीन दिनों के अवकाश के लिए प्रार्थना पत्र लिखें </p>	3x1=3	ज्ञानोत्तर

प्र 3	“वर्षा ऋतु की उपयोगिता” पर अनुच्छेद लिखें	4x1=4	रचनात्मक
प्र 4	<p>(क) उचित शब्द लिखकर खालीस्थान भरें -</p> <p>1. ओड़िशा में बोली जाने वाली भाषा..... है </p> <p>2. पत्र लिखना.....भाषा का उदाहरण है </p> <p>(ख) निम्नलिखित शब्दों के वर्ण विच्छेद करें -</p> <p>a) ट्रेन</p> <p>b) खिलौना</p>	4x1=4	सूचनात्मक
प्र 5	<p>(क) निम्नलिखित शब्दों की परिभाषा लिखें -</p> <p>1. संज्ञा</p> <p>.....</p>	4x1=4	विश्लेषणात्मक

	<p>.....</p> <p>2. सर्वनाम.....</p> <p>.....</p> <p>(ख) निम्नलिखित शब्दों के अर्थ लिखें -</p> <p>1. सुषमा -</p> <p>2. कुशाग्र -</p>		
प्र 6	<p>निम्नलिखित पंक्तियों के सन्दर्भ में दिए गए प्रश्नों के उत्तर दें -</p> <p>चारों ओर लताएं छाईं, वृक्ष झूमनेवाले उंचे-उंचे पर्वत हैं आकाश चूमनेवाले चिड़ियों के सुमधुर कलरव से गूँज उठी है धरती छाई रहती है ऐसी सुषमा प्रकृति सदा ही हँसती </p> <p>1. चारों ओर क्या छाई रहती हैं?</p> <p>.....</p> <p>.....</p> <p>2. पंक्तियों में आये कोई दो तुकबंदी वाले शब्द लिखें </p> <p>.....</p> <p>.....</p>	2x1=2	उच्चस्तरीयचिंतन



ARMY PUBLIC SCHOOL GWALIOR
CLASS - IV
ACADEMIC SESSION 2024-25
REVISION WORKSHEET (SELF –ASSESSMENT)

Subject: Mathematics

Assignment No. : 2

Allotment Date: 27 July 2024

S. NO.	QUESTIONS	MARKS	NATURE						
1.	Fill in the blanks: (i) $5000 + 400 + \underline{\hspace{2cm}} = 5406$ (ii) $XCIV + II = \underline{\hspace{2cm}}$	2x1=2	Understanding						
2.	Write 'True' or 'False': (i) Smallest 4-digit numbers formed with 2, 6, 3, 1 is 1326. _____ (ii) In 90665 face value of 0 is 0. _____	2x1=2	HOTS						
3.	Match the column: <table style="width: 100%; border: none;"><tr><td style="text-align: center;">A</td><td style="text-align: center;">B</td></tr><tr><td>(i) Smallest 5-digit number</td><td>1000</td></tr><tr><td>(ii) M</td><td>10000</td></tr></table>	A	B	(i) Smallest 5-digit number	1000	(ii) M	10000	2x1=2	Remembering
A	B								
(i) Smallest 5-digit number	1000								
(ii) M	10000								
4.	Tick the correct answer from the given options: (i) Value of LIX in Hindu-arabic is: a) 69 b) 79 c) 29 d) 59 (ii) 100 less than 5000 will be: a) 4800 b) 4900 c) 3900 d) 5100	2x1=2	Critical Thinking						

5.	<p>Solve the following questions:</p> <p>(i) What number should be added to 5134 to get 7999? _____</p> <p>(ii) $562328 + 7154 =$ _____</p> <p>(iii) $721601 - 542419 =$ _____</p>	$3 \times 2 = 6$	Interdisciplinary																								
6.	<p>Solve the following questions:</p> <p>(i) Find the missing digit.</p> <table border="1" data-bbox="331 705 778 857"> <thead> <tr> <th></th> <th>Tth</th> <th>Th</th> <th>H</th> <th>T</th> <th>O</th> </tr> </thead> <tbody> <tr> <td></td> <td>5</td> <td></td> <td>6</td> <td>1</td> <td></td> </tr> <tr> <td>-</td> <td>4</td> <td>2</td> <td>7</td> <td></td> <td>9</td> </tr> <tr> <td></td> <td></td> <td>3</td> <td>8</td> <td>5</td> <td>4</td> </tr> </tbody> </table> <p>(ii) There are 1226 boys and 1082 girls in a college. Estimate the total number of students in the college, by rounding off to the nearest hundreds.</p>		Tth	Th	H	T	O		5		6	1		-	4	2	7		9			3	8	5	4	$2 \times 3 = 6$	Problem Solving
	Tth	Th	H	T	O																						
	5		6	1																							
-	4	2	7		9																						
		3	8	5	4																						



ARMY PUBLIC SCHOOL GWALIOR
CLASS - IV
ACADEMIC SESSION 2024-25
REVISION WORKSHEET (SELF –ASSESSMENT)

Subject: EVS

Assignment No. : 2

Allotment Date: 27 July 2024

S. NO.	QUESTIONS	MARKS	NATURE										
1.	<p style="text-align: center;">SECTION A</p> <p>I. Choose the correct option.</p> <p>Mammals suckle their babies on their _____.</p> <p>(a) Food (b) Milk (c) Water (d) None of these</p> <p>Rules should be followed by all the _____.</p> <p>(a) Players (b) Audience (c) Referee (d) Children</p> <p>_____ is the sense organ of feel.</p> <p>(a) Eyes (b) Ears (c) Nose (d) Skin</p> <p>It is not a body waste.</p> <p>(a) Sweat (b) Urine (c) Oxygen (d) Carbon dioxide</p> <p>II. Match the following columns A and B and rewrite them in answer sheet.</p> <table style="width: 100%;"><thead><tr><th style="text-align: center;">A</th><th style="text-align: center;">B</th></tr></thead><tbody><tr><td>(i) Circulatory system</td><td>(a) golf</td></tr><tr><td>(ii) Tiger Woods game</td><td>(b) indoor</td></tr><tr><td>(iii) pigment present in skin and veins</td><td>(c) arteries</td></tr><tr><td>(iv) Sudoku</td><td>(d) melanin</td></tr></tbody></table>	A	B	(i) Circulatory system	(a) golf	(ii) Tiger Woods game	(b) indoor	(iii) pigment present in skin and veins	(c) arteries	(iv) Sudoku	(d) melanin	<p>(4x0.5= 2)</p> <p>(4X0.5=2)</p> <p>(4X0.5=2)</p>	<p style="text-align: center;">OBSERVATION AND UNDERSTANDING</p>
A	B												
(i) Circulatory system	(a) golf												
(ii) Tiger Woods game	(b) indoor												
(iii) pigment present in skin and veins	(c) arteries												
(iv) Sudoku	(d) melanin												
	<p>III. Fill in the blanks.</p> <p>(i) We have _____ sense organs.</p>												

	<p>(ii) Animals which give birth to their young ones are called _____.</p> <p>(iii) Similar cells are grouped together to form a _____.</p> <p>(iv) _____ cannot be played during bad weather.</p> <p>IV. Rewrite the following sentences on your answer sheet and state, whether 'True' Or 'False'.</p> <p>(i) Bad touch makes us feels safe and comfortable. ()</p> <p>(ii) Indoor games are played within the four walls of the room. ()</p> <p>(iii) Our mother's parents and siblings are our maternal parents. ()</p> <p>(iv) The adult skeleton is made up of 209 bones. ()</p> <p>V. State your answer in one word.</p> <p>(i) Name any super achiever in this world who is differently- abled. _____</p> <p>(ii) The organ that pumps blood. _____</p> <p>(iii) Name one noble cause to provide a loving home and support to a orphan children. _____</p> <p>VI. Choose the odd one out.</p> <p>(a) Puppet show (b) Magic show (c) Fun fair (d) Cricket</p>	<p>(4X0.5=2)</p> <p>(3x0.5=1.5)</p> <p>(1x1=1)</p>	
2.	<p style="text-align: center;">SECTION B</p> <p>VII. Draw a well labeled diagram of "Tongue with its taste areas".</p> <p>VIII. Make a poster of Joint Family Tree.</p>	<p>(1x1.5=1.5)</p> <p>(1x1=1)</p>	IDENTIFICATION
3.	<p style="text-align: center;">SECTION C</p> <p>IX. Answer the following question in short.</p> <p>(i) Write the importance of recreation in our life.</p> <p>X. Answer the following questions in long.</p> <p>(i) List some values that children should learn from their family.</p>	<p>(1x2=2)</p> <p>(1x3=3)</p>	EVALUATION

4.

SECTION D

ATLAS

**XI. Answer the following questions from Atlas.
Choose the correct answer from the given option and (2x.5=1)
write the answer on your answer sheet.**

(i) The stars are _____.

- (a) Meteoroid (b) Comet (c) Heavenly body
(d) None of these

(ii) _____ is known as blue planet.


- (a) Mars (b) Earth (c) Venus
(d) Uranus

XII. Locate the following in the political map of India.

(2x.5=1)

(i) Bay of Bengal

(ii) China






ARMY PUBLIC SCHOOL GWALIOR
CLASS - IV
ACADEMIC SESSION 2024-25
REVISION WORKSHEET (SELF –ASSESSMENT)

Subject: G.K

Assignment No. : 2

Allotment Date: 27 July 2024

S.NO	QUESTIONS	MARKS	NATURE
1.	<p>Fill in the blanks.</p> <p>a) _____ is a large ape known for its intelligence and social behavior.</p> <p>b) _____ is the leader of a honey bee colony.</p> <p>c) _____ is a spice grows underground. It is also added in tea to get relief from cold.</p> <p>d) The 'Manihar' community of _____ city creates and sells stone-embedded lac bangles in the narrow lanes of the walled city.</p> <p>e) _____ was the freedom fighter and popularly known as Punjab Kesari.</p>	5x1=5	Informative and general awareness
2.	<p>Identify the following pictures.</p> <p> shutterstock.com · 2333694449</p> <p>a) _____</p> <p></p> <p>b) _____</p> <p></p>	5x1=5	Identification and general awareness


c) _____



d) _____



e) _____



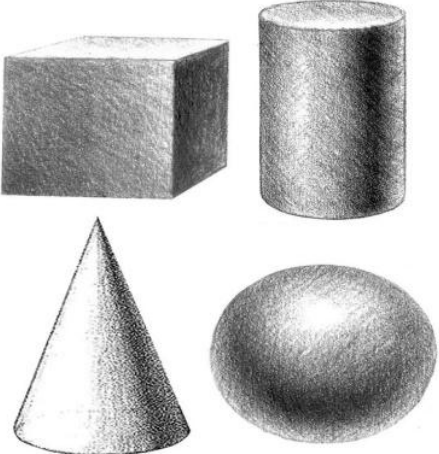
ARMY PUBLIC SCHOOL GWALIOR
CLASS - IV
ACADEMIC SESSION 2024-25
REVISION WORKSHEET (SELF –ASSESSMENT)


Subject: Art and Work Education

Assignment No. : 2

Allotment Date: 27 July 2024

S.NO.	QUESTIONS	MARKS	NATURE
1.	What is the shape with four equal sides? a) Rectangle b) Square c) Triangle	1	Creativity
2.	Which of these is a basic shape? a) Cube b) Circle c) Sphere	1	Creativity
3.	A cube is a _____. a) One dimensional shape b) Two dimensional Shape c) Three dimensional Shape	1	Creativity
4.	What is the shape of a football? c) Cube d) Sphere e) Cuboid	1	Creativity
5.	What is the shape of a birthday cap? a) Cone b) Square c) Circle	1	Creativity
6.	How many right angles does a rectangle have? a) 1 b) 2 c) 4 d) 5	1	Creativity
7.	A triangle is a 2D figure: a) True b) False	1	Creativity

8.	Which of these is a three dimensional shape? a) Rectangle b) Cone c) Square	1	Creativity
9.	Is Cuboid is a 3D form of rectangle? a) True b) False	1	Creativity
10.	What shapes are this?  a) 2D b) 4D c) 3D d) Circle	1	Creativity



ARMY PUBLIC SCHOOL GWALIOR
CLASS - IV
ACADEMIC SESSION 2024-25
REVISION WORKSHEET (SELF –ASSESSMENT)



Subject: Health and Physical Education
Allotment Date: 27 July 2024

Assignment No. : 2

S.N	QUESTIONS	MARKS	SKILLS/COMPETENCIES
1	Shorts answer question 1.what was chess originally called in india ? a) box game b) chaturanga c) 8x8 grid d) box chess	1	INFORMATION
2	2. name the most popular tag game in india. a) chain chain b) ice water c) pakadam pakdai d) kho kho	1	INFORMATION

3	<p>3. played with seven stones is called?</p> <p>a)7 wonder</p> <p>b) 7 square</p> <p>c) Sitholia</p> <p>d) 7 chance</p>	1	INFORMATION
4	<p>4. a game with seven members in each team is called?</p> <p>a) kho kho</p> <p>b) football</p> <p>c) cricket</p> <p>d) realy 100 m</p>	1	INFORMATION
5	<p>FILL IN THE BLANKS: -</p> <p>1. The _____ is a small oval shaped piece of wood.</p> <p>a) Lattoo</p> <p>b) Plastic ball</p> <p>c) Kancha</p> <p>d) Hand ball</p>	1	INFORMATION

6	<p>2. There are _____ player in each team of kho kho</p> <p>a) 7</p> <p>b) 4</p> <p>c) 8</p> <p>d) 9</p>	1	INTERDISCIPLINARY
7	<p>3. Jumping games good for student_____.</p> <p>A) Health</p> <p>B) Ground</p> <p>C) Cone</p> <p>D) Dress</p>	1	INTERDISCIPLINARY
8	<p>1) We can play indigenous games indoor as well as outdoor. (True/False)</p>	1	INTERDISCIPLINARY
9	<p>9. we play games to be healthy and strong.</p> <p>(True/ False)</p>	1	UNDERSTANDING

10	10.Junk food is good for health. (True/False)	1	UNDERSTANDING
-----------	---	---	---------------



**ARMY PUBLIC SCHOOL GWALIOR
CLASS - IV**



**ACADEMIC SESSION 2024-25
REVISION WORKSHEET (SELF –ASSESSMENT)**

Subject: Music and Dance

Assignment No. : 2

Allotment Date: 27 July 2024

S. NO.	QUESTIONS	MARKS	NATURE
1	How many matras are there in teentaal ? a) 16 b) 10	1	Informative
2	How many vibhagas are there in teentaal ? a) 4 b) 3	1	Informative
3	What is the sign of khali ? a) × b) 0	1	Informative
4	Before a dance performance _____ is done. a) Pranam b) Aasheervaad dena	1	Informative
5	Is Bhumi Pranam done in classical dance? a) Yes b) No	1	Informative
6.	Tu pyar ka sagar , _____ daya ka tu hai ? a) sagar b) pyar	1	Informative
7.	Gehrai mile _____ ki , unchai mile _____ ki a) asman , sagar b) sagar , asman	1	Informative
8.	What do you mean by prayer ? a) worship b) request	1	Informative
9,	So high , you can't get _____ it a) under b) over	1	Informative

10.	So wide you can't get ____ it ? a) around b) over	1	Informative
-----	---	---	-------------



ARMY PUBLIC SCHOOL GWALIOR
CLASS - IV
ACADEMIC SESSION 2024-25
REVISION WORKSHEET (SELF –ASSESSMENT)

Subject: Computer

Assignment No. : 2

Allotment Date: 27 July 2024

S.NO.	QUESTIONS	MARKS-10	NATURE
1	Choose and write the correct option (MCQ):- 1. The operating system developed by Microsoft Corporation is _____ a) Windows b) Ubuntu c) Mac OS 2. The final screen of Windows is known as _____. a) Taskbar b) Pointer c) Desktop 3. Windows 10 resizes the tiles in _____ sizes. a) Four b) Five c) Six 4. _____ option can add an app permanently on the Start menu. a) Pin to Start b) Pin to Taskbar c) Pin to Desktop 5. _____ screen prevents others from accessing your computer. a) Desktop b) Lock c) Dark	1/2x5=2 ½	Information
2	Fill in the blanks- 1. Windows _____ screen appears after entering the password. 2. We can customize the _____ menu according to the way we want. 3. _____ or the Task View is used to switch between the running apps. 4. We can lock our computer to ensure its _____. 5. _____ option displays multiple copies of the same image in tiles format.	1/2x5=2 ½	Understanding

3.	Write 'T' for True and 'F' for False statements. <ol style="list-style-type: none">1. Booting is the process of starting and restarting a computer.2. Tiles are organized into groups with titles at the top.3. We can pin the app to the Start menu, which we use frequently.4. We cannot switch between the running apps.5. We cannot change the background of the desktop.	1/2x4=2	Understanding
4.	Answer the following questions:- <ol style="list-style-type: none">1. What are the features of Windows 10?2. Name the ways to switch between different running apps.3. Name the different ways to set positioning of wallpaper on desktop.	1x3=3	Evaluation