

ARMY PUBLIC SCHOOL GWALIOR
CLASS - II
ACADEMIC SESSION 2024-25
REVISION WORKSHEET (SELF –ASSESSMENT)



Subject: English
Allotment Date: 27 July 2024

Assignment No. : 2

S. NO.	QUESTIONS	MARKS 20	SECTION
1.	<p>Read the passage carefully and answer the following questions.</p> <p>This is the story of a little girl named Mini. She goes to her grandmother's orchard one day. There are many fruit trees in the orchard. She sees five mango trees in the orchard. There are six litchi trees also. There are ten jamun trees too. Three guava trees also grow there.</p> <p>Mini is very happy. Grandmother plucks a big mango and gives her. She loves it.</p> <p>Q1. Write the correct answer for the following questions.</p> <p>a) What is the name of the girl in the story? Ans _____</p> <p>b) How many litchi trees are there in the orchard? Ans _____</p> <p>c) Which of the fruit does the grandmother pluck for Mini ? Ans _____</p>	1x3=3	Reading skill
2.	<p>Q2. Complete the paragraph on 'My Mother' by using the appropriate words:</p> <p>a). My mother's name is Mrs. _____.</p> <p>b). She is a _____.</p> <p>c). She is very _____ and _____.</p>	1x3=3	Writing skill
3.	<p>Q4. Make sentences with the words given below.</p> <p>a).family- _____ _____</p> <p>b) cake- _____ _____</p>	1x2=2	Writing skill

4.	<p>Q3. Fill in the blanks with the correct words given in the brackets:</p> <p>a) There is only one _____ in the class. (chair/chairs)</p> <p>b) I saw rabbits hiding behind _____. (bush / bushes)</p>	1x2=2	Grammar
5.	<p>Q5. Replace the underlined words with correct pronoun and rewrite the sentences:</p> <p>a). <u>The children</u> are playing in the park. _____</p> <p>b). <u>Reena</u> is my cousin. _____</p>	1x2=2	Grammar
6.	<p>Q6. Answer the following questions in one word:</p> <p>a). What are the naming words called? _____</p> <p>b). Which type of noun is 'milk'? (Countable/ Uncountable) _____</p>	1x2=2	Grammar
7.	<p>Q7. Answer the following questions:</p> <p>a). What has happened to the dog? Ans _____ _____ _____</p> <p>b). Who does Dad quietly work for? Ans _____ _____ _____</p>	1x2=2	Literature

8.	Q8. Fill in the blanks: a). Anju gives a _____ to her mom. b). _____ takes the injured dog to the vet.	1x2=2	Literature
9.	Q9. Write True or False for the given statements. a) Father never looked for praises. () b) Mother picks Tia and Tarun from school. ()	1x2=2	Literature







ARMY PUBLIC SCHOOL GWALIOR
CLASS - II
ACADEMIC SESSION 2024-25
REVISION WORKSHEET (SELF -ASSESSMENT)




Subject: Hindi

Allotment Date: 27 July 2024

Assignment No. : 2

संख्या	प्रश्न	अंक	प्रश्न के प्रकार
1.	<p>निम्न चित्रों को देखकर उनके नाम के शुरु के वर्ण पर गोला लगाइए-</p> <p>(i)  -----</p> <p>(ii)  -----</p> <p>(iii)  -----</p> <p>(iv)  -----</p>	1x4=4	रचनात्मक
2.	<p>निम्नलिखित शब्दों के अर्थ लिखें -</p> <p>(i) जान-बूझकर - -----</p> <p>(ii) धरती - -----</p> <p>(iii) उपाय - -----</p>	1x3=3	भाषा बोध
3.	<p>निम्नलिखित वाक्यों के लिए सही (√) या गलत (x) का निशान लगाइए-</p> <p>(i) साँवरी और मनु कम्प्यूटर पर ही खेलते हैं। ()</p> <p>(ii) सूरज निकलने पर चिड़ियाँ गीत गाती हैं। ()</p> <p>(iii) इब्नबतूता फलों की दुकान में खड़े रह गए। ()</p> <p>(iv) रुई पानी भरने से भारी हो गई। ()</p>	1x4=4	सूचनात्मक

4.	<p>"मेरा परिचय" अनुच्छेद के आधार पर नीचे दिए गए वाक्यों में खाली स्थान भरिए-</p> <p>क) मेरा नाम ----- है ।</p> <p>ख) मैं कक्षा ----- में पढ़ता/पढ़ती हूँ ।</p> <p>ग) मेरे विद्यालय का नाम ----- ----- है ।</p> <p>घ) मैं ----- साल का/की हूँ ।</p>	1x4=4	अभिव्यक्ति
5	<p>निम्नलिखित प्रश्नों के उत्तर लिखिए -</p> <p>(i) पका आम देखकर मीठू ने क्या सोचा? ----- -----</p> <p>(ii) व्यापारी के पास कौनसा जानवर था ? ----- -----</p> <p>(iii) सूरज निकलने पर सब क्या करते हैं? ----- -----</p>	1x3=3	विश्लेषणात्मक
6.	<p>मेहनत करना क्यों अच्छा होता है ? ----- ----- ----- -----</p>	1x2=2	मूल्यपरक प्रश्न



ARMY PUBLIC SCHOOL GWALIOR
CLASS - II
ACADEMIC SESSION 2024-25
REVISION WORKSHEET (SELF –ASSESSMENT)

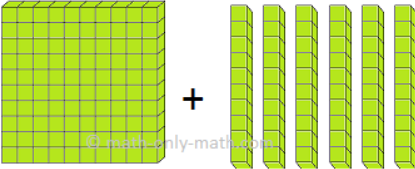
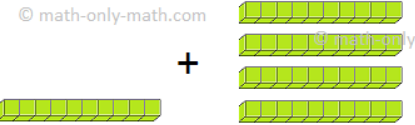



Subject: Mathematics
Allotment Date: 27 July 2024

Assignment No. : 2

S. NO.	QUESTIONS	MARKS	NATURE
1	Fill in the blanks :- (i) _____ is a sign of subtraction. (ii) When a number is subtracted from itself, we get _____. (iii) Write the number after 745 _____. (iv) When we add zero to any number, the sum is the number itself. _____	1 x4= 4	Problem solving
2	Choose the correct option: (i) Difference between 50 and 5 is _____. (a) 35 (b) 42 (c) 45 (d) 40 (ii) When we subtract 0 from 25, the answer is _____. (a) 0 (b) 20 (c) 25 (d) 30	1x2=2	Information

<p>3</p>	<p>Solve the following questions:-</p> <p>(i) Which is smallest 3 digit number? Ans - _____</p> <p>(ii) Write in ascending order - 684, 293, 393, 182 Ans - _____</p> <p>(iii) Write the face value of 7 in 738. Ans - _____</p> <p>(iv) Continue the pattern with odd number. Ans - 41, ____, ____, 47, ____, ____, ____, ____</p> <p>(v) Write in expanded form. 769 = _____ + _____ + _____ 524 = _____ + _____ + _____</p>	<p>1x5=5</p>	<p>Understanding</p>
<p>4</p>	<p>i. A boy bought 134 gold fishes and 220 black fishes for a aquarium. How many total fishes did the boy bought for the aquarium? Solution -</p> <p>ii. Pratibha read 64 pages of a novel on Saturday and 35 pages on Sunday. How many pages in all did she read in these two days? Solution -</p> <p>iii. Arrange in column and add;- 249 and 635</p>	<p>1x4=4</p>	<p>Critical thinking</p>

	<p>Solution -</p> <p>iv. Encircle the biggest number and cross the smallest number:</p> <p>a) 273 345 234 432 732</p>																											
<p>5</p>	<p>Solve :-</p> <p>(i) Find the difference-</p> <p>79 - 23</p> <p>Solution -</p> <p>(ii) Subtract-</p> <table style="margin-left: 40px;"> <tr> <td>T</td><td>O</td><td></td><td>T</td><td>O</td> </tr> <tr> <td>9</td><td>4</td><td></td><td>7</td><td>5</td> </tr> <tr> <td>- 6</td><td>4</td><td></td><td>- 3</td><td>4</td> </tr> <tr> <td>_____</td><td></td><td></td><td>_____</td><td></td> </tr> <tr> <td>_____</td><td></td><td></td><td>_____</td><td></td> </tr> </table>	T	O		T	O	9	4		7	5	- 6	4		- 3	4	_____			_____		_____			_____		<p>3x1=3</p>	<p>Interdisciplinary</p>
T	O		T	O																								
9	4		7	5																								
- 6	4		- 3	4																								
_____			_____																									
_____			_____																									
<p>6</p>	<p>Count and write the digits and add:-</p> <p>(iii)  + = _____</p> <p>(iv)  + = _____</p>	<p>1x2=2</p>	<p>HOTS</p>																									



ARMY PUBLIC SCHOOL GWALIOR
CLASS - II
ACADEMIC SESSION 2024-25
REVISION WORKSHEET (SELF –ASSESSMENT)

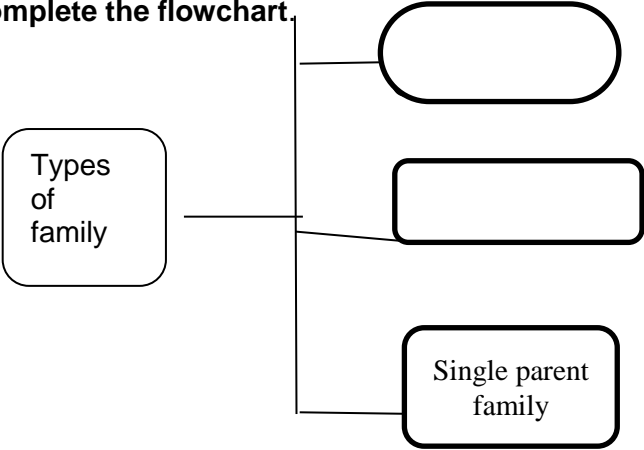


Subject: EVS


Assignment No. : 2

Allotment Date: 27 July 2024

S.NO.	QUESTIONS	MARKS 20	NATURE												
1.	<p>Tick the correct answer:</p> <p>1. _____ helps to digest food. a) Stomach b) Lungs c) Heart</p> <p>2. _____ is not a natural fibre. a) Cotton b) Wool c) Rayon</p> <p>3. _____ cleans out wastes from our body. a) Water b) Juices c) Milk</p> <p>4. _____ is the combo meal eaten in place of breakfast and lunch. a) Supper b) Brunch c) snacks</p>	1X4=4	Understanding												
2.	<p>Fill in the blanks:</p> <p>a) We use _____ in rainy season. b) A _____ family has grandparents. c) I carry my school _____ card in school daily.</p>	1x3=3	Analytical skill												
3.	<p>State whether the following statements are 'True/False'.</p> <p>a) We should not drink two glasses of milk daily. () b) Too many sweets keeps us fit and strong. ()</p>	1x2=2	Problem solving												
4.	<p>Match the following questions.</p> <table style="width: 100%; border: none;"> <tr> <td style="width: 50%;">Column- A</td> <td style="width: 50%;">Column- B</td> </tr> <tr> <td>a) Salad</td> <td>About himself /</td> </tr> <tr> <td>herself</td> <td></td> </tr> <tr> <td>b) Paternal uncle</td> <td>Vegetarian</td> </tr> <tr> <td>c) Myself</td> <td>Jumping</td> </tr> <tr> <td>d) Legs</td> <td>Uncle</td> </tr> </table>	Column- A	Column- B	a) Salad	About himself /	herself		b) Paternal uncle	Vegetarian	c) Myself	Jumping	d) Legs	Uncle	0.5x4=2	Analytical skill
Column- A	Column- B														
a) Salad	About himself /														
herself															
b) Paternal uncle	Vegetarian														
c) Myself	Jumping														
d) Legs	Uncle														
5.	<p>Give two examples of each of the following:</p> <p>a) Woollen things - _____ _____</p> <p>b) Energy giving food - _____ _____</p>	1X4=4	Information												

6.	<p>Define the following terms:</p> <p>a) Vegetarian</p> <hr/> <hr/> <hr/> <p>b) Powerloom</p> <hr/> <hr/> <hr/>	1x2=2	Observation
7.	<p>Complete the flowchart.</p>  <pre> graph LR A[Types of family] --- B[] A --- C[] A --- D[Single parent family] </pre>	1x1= 1	Understanding
8.	<p>Why do we use things made up of waterproof material in rainy season?</p> <hr/> <hr/> <hr/> <hr/> <hr/>	1x1=1	HOTS
9.	<p>What do you mean by roughage?</p> <hr/>	1x1=1	Thinking and Writing Skills

	<hr/> <hr/> <hr/> <hr/>		
--	-------------------------	--	--



ARMY PUBLIC SCHOOL GWALIOR
CLASS - II
ACADEMIC SESSION 2024-25
REVISION WORKSHEET (SELF –ASSESSMENT)



Subject: Computer

Assignment No. : 2

Allotment Date: 27 July 2024

S.NO.	QUESTIONS	MARKS	NATURE
1.	<p>Tick the correct answer.</p> <p>(i) . A _____ is used to play games on a computer. a) scanner b) printer c) joystick</p> <p>(ii) . _____ is the main storage device in a computer. a) Hard disk b) DVD c) Pen drive</p> <p>(iii) Keyboard is an example of _____ device. a) Input b) Output c) Storage</p> <p>(iv) A _____ is used to give out on a paper. a) Printer b) speaker c) Scanner</p>	0.5x4=2	Information
2.	<p>Fill in the blanks-</p> <p>a) _____ is used to type words.</p> <p>b) _____ is a portable data storage device.</p> <p>c) A CD- ROM is _____ in shape..</p> <p>d) _____ is an input device.</p>	0.5x4=2	Understanding

3.	<p>Write 'T' for True or 'F' for False against the statements:-</p> <p>a) Input devices are used to enter instructions.</p> <p>b) A mouse is also known as pointing device</p> <p>c) A microphone is an output device.</p> <p>d) The output we get on a paper is called soft copy.</p>	0.5x4=2	Interdisciplinary
4.	<p>Answer in one word / sentence.</p> <p>a) What are computer devices? Ans. _____ _____ _____</p> <p>b) Name any one input and one output device. Ans. _____ _____ _____</p> <p>c) What is the use of storage devices? Ans. _____ _____ _____</p> <p>d) At home, you saw your brother playing a computer game with a joystick. Tell him, what kind of computer device it is. Ans. _____ _____ _____</p>	1x4=4	Critical Thinking and Problem Solving



**ARMY PUBLIC SCHOOL GWALIOR
CLASS - II**




**ACADEMIC SESSION 2024-25
REVISION WORKSHEET (SELF -ASSESSMENT)**

Subject: Art and Work Education

Assignment No. : 2

Allotment Date: 27 July 2024

S.NO	QUESTIONS	MARKS	SKILLS
1.	What is the shape of an art?	2	Creativity
2	What are the 3 basic types of shapes?	2	Creativity
3.	List some Geometric Shapes.	2	Creativity
4.	What are the basic solid shapes?	2	Creativity
5.	What are the 'Two Dimensional Shapes'?	2	Creativity



**ARMY PUBLIC SCHOOL GWALIOR
CLASS - II**



**ACADEMIC SESSION 2024-25
REVISION WORKSHEET (SELF –ASSESSMENT)**


Subject: Health and Physical Education

Assignment No. : 2

Allotment Date: 27 July 2024

S.NO.	QUESTIONS	MARKS	NATURE
		10	
TRUE OR FALSE			
1.	Jumping helps to strengthens your lower body. (True/False)	1	Information
2	Running and jumping are outdoor activities. (True/False)	1	Information
3	Running on roads and on floor can be dangerous. (True/False)	1	Information
4	You should always land on your toes while jumping (True/False)	1	Information
MCQ'S			

5	<p>Running and jumping focuses on _____.</p> <p>A) Head B) Hands C) Lower Body D) None of the above</p>	1	Understanding
6	<p>Running regularly helps to make you _____.</p> <p>A) Healthy B) Lazy C) Fatty D) None of these</p>	1	Understanding
Answer the following questions.			
7	<p>What do you mean by Jumping?</p> <p>Ans-</p>	2	Information
8	<p>Name two types of jumps.</p> <p>Ans-</p> <p>.</p>	2	Information



ARMY PUBLIC SCHOOL GWALIOR
CLASS - II
ACADEMIC SESSION 2024-25
REVISION WORKSHEET (SELF –ASSESSMENT)



Subject: Music and Dance
Allotment Date: 27 July 2024

Assignment No. : 2

S. NO.	QUESTIONS	MARKS	NATURE
1	From which state Kathak comes? a) Tamilnadu b) Uttar Pradesh	1	Information
2	Which is the basic taal of Kathak? a) Dadra Taal b) Teen Taal	1	Critical Thinking
3	Who is the father of Kathak ? a)PT Birju Maharaj b)PT Janki Prasad	1	Understanding
4	How many gharanas of Kathak ? a)6 b)4	1	Information

5	What is the another name of Teentaal? a)Tritaal b)Chautaal	1	Critical thinking
6	How many kamal Awar are there? a)4 b)2	1	Information
7	SaSa; ReRe - --- Mama, PaPa a)GaGa b)Dha dha	1	Information
8	Dil Ku darwaza _____ hua hamare dil me a)khula b)aa0 Prabhu	1	Critical thinking

9	How many total swaras are there in music? a)10 b)12	1	Understanding
10	How many komal swaras are there? a)5 b)4	1	Understanding