


ARMY PUBLIC SCHOOL GWALIOR
CLASS - I
ACADEMIC SESSION 2024-25
REVISION WORKSHEET (SELF –ASSESSMENT)

Subject: English
Allotment Date: 27 July 2024

Assignment No. : 2

S.N	QUESTIONS	MARKS	SKILLS/COMPETENCIES
A.1	<p>Read the following passage and answer the question given below.</p> <p style="text-align: center;">School Carnival</p> <p>Rico's class went to the school carnival today. It was a lot of fun. Rico won two prizes. He won a blue balloon and a toy car. First , he played few games with his friends .Then, he got popcorn and lemonade with his friends finally he got to watch a magic show.</p> <p>A.1 Tick (√) the correct option :</p> <p>(i) Rico's class went to the school</p> <p>a. Picnic b. Carnival c. Excursion</p> <p>(ii) He won a balloon.</p> <p>a. blue b. red c. green</p> <p>(iii) What Rico got to eat ?</p> <p>a. pastry b. sandwich c. popcorn</p> <p>(iv) Finally he got to watch show.</p> <p>a. magic b. puppet c. comic</p> <p>(v) Rico played games with his</p> <p>a. teachers b. classmates c. friends</p>	5X1=5	Language and Communication, Cognitive

<p>A.2</p>	<p>Answer in one word :</p> <p>Q.1 Where did Rico go ? Ans</p> <p>Q.2 How many prizes Rico win ? Ans</p> <p>Q.3 What Prizes Rico win ? Ans</p> <p>Q.4 Finally, Rico watched which show ? Ans</p> <p>Q.5 Where would you like to go for a picnic ? Ans</p> <p>Observe the picture given below and answer the questions followed :</p> <p>Observe the picture given below answer the questions given below:</p> <p>Park</p> 	<p>5 X 1 = 5</p>	<p>Literacy Skills</p>
<p>B.1</p>	<p>From the given help box fill in the blanks given below (playing , painting, reading, football, swing)</p> <p>(i) One girl is making a</p> <p>(ii) The children are</p> <p>(iii) One boy is abook.</p> <p>(iv) Two boys are playing with a</p> <p>(v) One girl is on the</p>	<p>5X1=5</p>	<p>Language and Communication, Thinking Skills</p>
<p>B.2</p>			

	<p>Answer the following in one sentence</p> <p>Q.i It is the picture of which place ? Ans.</p> <p>Q.ii How many trees are there in the picture ? Ans.</p> <p>Q.iii Who is painting a picture ? Ans.....</p> <p>Q.iv How many boys are playing football ? Ans.....</p> <p>Q.v Where is s boy reading book ? Ans.....</p>	5X1=5	Critical thinking
--	---	-------	-------------------



ARMY PUBLIC SCHOOL GWALIOR
CLASS - I

ACADEMIC SESSION 2024-25
REVISION WORKSHEET (SELF –ASSESSMENT)






Subject: Hindi

Allotment Date: 27 July 2024

Assignment No. : 2

संख्या	प्रश्न / उत्तर	अंक	प्रकृति
प्र.1	<p>निम्नलिखित गद्यांश को ध्यानपूर्वक पढ़ें।</p> <p>सीताटीवीदेखरहीहै।मदनगानासुनरहाहै।सबलोगपीपलकेनीचेबैठे हैं। ठंडी हवा चल रही है।</p> <p>सीतादिल्ली सेआई है। आज सब लोग आगरा ताजमहल देखने गए थे।</p> <p>रानीचावलपकारहीहै। रानी नेगुलाबीरंगकीसाड़ी पहनी है।दादीकहानीसुनारहीहै।</p> <p>दादा जी अखबार पढ़ रहे हैं।</p> <p>प्रश्न 1.उपरोक्त गद्यांश के आधार पर निम्नलिखित प्रश्नों के उत्तर दीजिए।</p> <p>ब) खाली स्थान भरो:</p> <p>क) मेरे घर में मेरे साथ मेरा ----- रहता है। (पूरा परिवार / दोस्त)</p> <p>ख) कछुआ चिड़िया के घोंसले को देखकर बहुत ----- है। (रोता / हँसता)</p> <p>स) मिलान करें।</p>	3 M	गहनसोच

	 <p>ख) सुनना</p>  <p>ग) पढ़ना</p>  <p>घ) लिखना</p>		
प्र.4	<p>एक के लिए अनेक लिखो :</p> <p>क) ताला</p> <p>ख) बकरी</p> <p>ग) केला</p> <p>घ) मछली</p>	4M	भाषाई कौशल
प्र.5	<p>. निम्नलिखित प्रश्नों का एक शब्द में उत्तर दीजिए।</p> <p>क) दादी क्या लाई ?</p> <p>उ०)</p> <p>ख) दावत खाने कौन-कौन आया ?</p>	5M	गहनसोच

30) -----

ग) वाणी क्या पढ़ रही थी?

उत्तर- -----

घ) वाणी कौन थी?

उत्तर- -----

न) दावत खाने कौन-कौन आया?

उत्तर- -----



ARMY PUBLIC SCHOOL GWALIOR
CLASS - I



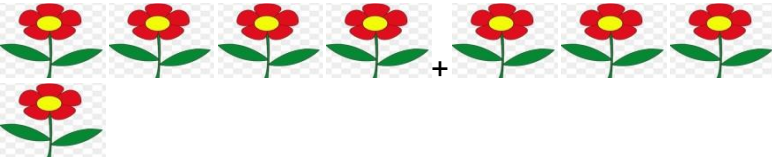


ACADEMIC SESSION 2024-25
REVISION WORKSHEET (SELF –ASSESSMENT)

Subject: Mathematics

Assignment No. : 2

Allotment Date: 27 July 2024

S.N	QUESTIONS	MARKS	NATURE
1	$7+3 = \underline{\quad}$ $10-9 = \underline{\quad}$	2X1=2	Information
2	Arrange the numbers in ascending order 9, 5, 8, 7, 10 Arrange the numbers in descending order 7, 3, 2, 4, 6	2X1=2	Understanding
3	Do solve the following:  $4 - 2 = \underline{\quad}$  $\underline{\quad} - 3 = \underline{\quad}$  $4 + 4 = \underline{\quad}$	3X1=3	Interdisciplinary

4	<p>Write what comes before? <input type="text"/> 10</p> <p>Write what comes after? 14 <input type="text"/></p> <p>What comes in between 6 <input type="text"/> 8</p>	3X1=3	Analytical Skill
5	<p>Subtract the following by drawing strokes :-</p> $\begin{array}{r} \square \\ \square \\ \hline \square \\ \square \\ \hline \end{array}$ $\begin{array}{r} \square \\ \square \\ \hline \square \\ \square \\ \hline \end{array}$	2X1=2	Critical Thinking and Problem Solving
6	<p>Answer the following questions:-</p> <p>How many doors and windows are there in your house? Count and write the total number of them altogether.</p> <p>Doors___ + Windows___ _____ _____</p>	2X1=2	HOT
7	<p>a) Circle (o) the biggest number and cross (x) the smallest number.</p> <p>i) 10, 12, 5, 7, 9 ii) 7, 5, 15, 1, 3</p> <p>b) 'MONDAY'</p> <p>i) The second alphabet is _____ ii) The fifth alphabet is _____</p>	4X1=4	Evaluation

8

Solve the following word problems:-

You have 6 pencils. Mina gave you 2 more. How many pencils do you have?

$$\begin{array}{r} \square \\ + \square \\ \hline \hline \end{array}$$

There were 8 balloons. 4 balloons burst. How many balloons are left?

$$\begin{array}{r} \square \\ - \square \\ \hline \hline \end{array}$$

2x1=2

Communication

Skills
and Problem
Solving







ARMY PUBLIC SCHOOL GWALIOR
CLASS - I
ACADEMIC SESSION 2024-25
REVISION WORKSHEET (SELF –ASSESSMENT)

Subject: EVS

Assignment No. : 2

Allotment Date: 27 July 2024

S.N	QUESTIONS	MARKS	NATURE
1	<p>Tick (√) the correct option.</p> <p>(i) We must change our _____ after every 15 days.</p> <p>a. Food b. Tooth Brush c. Soap</p> <p>(ii) We should not eat _____.</p> <p>a. Fruits b. Salads c. Junk Food</p> <p>(iii) I have _____ eyes.</p> <p>a. One b. Two c. Three</p> <p>(iv) We eat this meal in the morning.</p> <p>a. Breakfast b. Lunch c. Dinner</p> <p>(v) It is the largest sense organ of our body.</p> <p>a. skin b. nose c. ears</p>	5X1=5	Information
2	<p>(i) Identify the pictures and write their names:-</p> <div style="display: flex; justify-content: space-around; align-items: center;"><div style="border: 1px solid black; padding: 5px;"></div><div style="border: 1px solid black; padding: 5px;"></div><div style="border: 1px solid black; padding: 5px;"></div><div style="border: 1px solid black; padding: 5px;"></div></div> <p>(i) _____ (ii) _____ (iii) _____ (iv) _____</p>	4X1=4	Aesthetic, Analytical

3	Name the following: 1. One animal product 2. One physical exercise 3. One milk product	3X1=3	Interdisciplinary
4	Circle the odd one out: 1. apple mango tomato orange 2. eyes nose tongue hands 3. mother father uncle brother	3X1=3	Critical Thinking and Problem Solving
5	Answer in one word: 1. Write the name of your best friend. Ans _____ 2. Write the name of your favourite fruit. Ans _____ 3. Write the name of your school. Ans _____ 4. Name one activity where we use both our hands and legs. Ans _____ 5. Which is the top most part of the human body. Ans _____	5X1=5	HOTS



ARMY PUBLIC SCHOOL GWALIOR
CLASS - I
ACADEMIC SESSION 2024-25
REVISION WORKSHEET (SELF –ASSESSMENT)

Subject: G.K

Assignment No. : 2

Allotment Date: 27 July 2024

S.N	QUESTIONS	MARKS	NATURE
1	<p>Fill in the blanks from the given help box:</p> <p>(Diwali, Lohri, Drum, Refrigerator, Christmas)</p> <p>1. is a machine used for keeping food cold.</p> <p>2. is called a festival of light.</p> <p>3. is a musical instrument.</p> <p>4. is celebrated to mark the birthday of Jesus Christ</p> <p>5. festival is celebrated in Punjab.</p>	5X.1=5	Information
2	<p>Q.IV Answer the questions in one word:</p> <p>(Two, England, Guitar Pongal, United States)</p> <p>Q.1 People of Tamil Nadu celebrate which festival ? Ans.</p> <p>Q.2 Where is the Statue of Liberty situated in ? Ans.</p> <p>Q.3 Where is the Big Ben clock tower situated in ? Ans.....</p> <p>Q.4 How many wheels are on a bicycle? Ans.....</p> <p>Q.5 What musical instrument has strings and makes sounds when you strum or pluck it ? Ans.....</p>	5X1=5	Interdisciplinary

<p>3</p>	<p>Match the columns:</p> <table style="width: 100%; border: none;"> <tr> <td style="width: 50%; vertical-align: top;"> <ul style="list-style-type: none"> 1. Bicycle 2. China 3. Musical instrument 4. Kerala 5. Ice cream </td> <td style="width: 50%; vertical-align: top;"> <ul style="list-style-type: none"> Piano Onam Paddle Great Wall Refrigerator </td> </tr> </table>	<ul style="list-style-type: none"> 1. Bicycle 2. China 3. Musical instrument 4. Kerala 5. Ice cream 	<ul style="list-style-type: none"> Piano Onam Paddle Great Wall Refrigerator 	<p>5X1=5</p>	<p>Cognitive</p>
<ul style="list-style-type: none"> 1. Bicycle 2. China 3. Musical instrument 4. Kerala 5. Ice cream 	<ul style="list-style-type: none"> Piano Onam Paddle Great Wall Refrigerator 				
<p>4</p>	<p>Write (T) for true and (F) for false:</p> <ul style="list-style-type: none"> 1. The Leaning Tower of Pisa is slightly leaning towards one side . (.....) 2. A mixer Juicer is an electric oven that heats and cooks food.. (.....) 3. Bihu is the harvest festival of Assam. (.....) 4. The Eiffel Tower of France is made up of iron. (.....) 5. The traditional dress of Punjab for women is saree (.....) 	<p>5X1=5</p>	<p>Thinking Skills</p>		



ARMY PUBLIC SCHOOL GWALIOR
CLASS - I
ACADEMIC SESSION 2024-25
REVISION WORKSHEET (SELF –ASSESSMENT)


Subject: Computer

Assignment No. : 2

Allotment Date: 27 July 2024

S.NO.	QUESTIONS	MARKS	NATURE
1	<p>Tick the correct answer</p> <p>(i) _____ is a smart machine.</p> <p>a) Computer b) Bicycle c) human</p> <p>(ii) _____ is used to type words.</p> <p>a) Mouse b) Keyboard c) CPU</p> <p>(iii) We can listen to _____ on a computer.</p> <p>a) songs b) sums c) colors</p> <p>(iv) A computer mouse has _____ buttons.</p> <p>a) two b) three c) four</p>	0.5X4=2	Information
2	<p>Fill in the blanks-</p> <div style="border: 1px solid black; padding: 5px; width: fit-content; margin: 10px auto;">Joystick, Speakers, keys, Computer, unit, Keyboard</div> <p>(i) Keyboard has many buttons called as _____.</p> <p>(ii) With the help of _____ we can play</p>	0.5X6=3	Understanding

	<p>games.</p> <p>(iii) We can listen to songs with the help of _____.</p> <p>(iv) _____ is used for searching on the internet.</p> <p>(v) CPU stands for central processing _____.</p> <p>(vi) We can type words with the help of _____.</p>		
3	<p>Write True or False against the statements:-</p> <p>(i) Nature has created man made things.</p> <p>(ii) A computer cannot do many things.</p> <p>(iii) A computer has three main parts.</p> <p>(iv) We can play games on a computer.</p> <p>(v) A computer can help us in chatting.</p> <p>(vi) The CPU has many buttons called keys.</p>	0.5X6=3	Interdisciplinary
4	<p>Answer in one word -</p> <p>(i) Name any two man- made things.</p> <p>(ii) Which part is known as the brain of the computer?</p> <p>(iii) We can type our names using which device?</p> <p>(iv) Write any one use of computer?</p>	0.5X4=2	Critical Thinking and Problem Solving



**ARMY PUBLIC SCHOOL GWALIOR
CLASS - I**



**ACADEMIC SESSION 2024-25
REVISION WORKSHEET (SELF –ASSESSMENT)**

Subject: Art and Craft

Assignment No. : 2

Allotment Date: 27 July 2024

S. NO.	QUESTIONS	MARKS	NATURE
1.	What is the shape of an art?	2	Creative
2.	What are the 3 basic types of shapes?	2	Creative
3.	List some Geometric Shapes.	2	Creative

4.	The basic solid shapes?	2	Creative
5.	What Are Two Dimensional Shapes?	2	Creative



**ARMY PUBLIC SCHOOL GWALIOR
CLASS - I**

**ACADEMIC SESSION 2024-25
REVISION WORKSHEET (SELF –ASSESSMENT)**

**Subject: Health and Physical Education
Allotment Date: 27 July 2024**

Assignment No. : 2

S.N	QUESTIONS	MARKS	SKILLS/COMPETENCIES
TRUE OR FALSE			
1.	Running is an outdoor activity. (True/False)	1	INFORMATION
2	Jumping should be performed on ground.. (True/False)	1	INFORMATION
3	Jumping is risky on the floor. (True/False)	1	INFORMATION

4	Running is allowed in the classroom. (True/False)	1	INFORMATION
---	--	---	-------------

MCQ

5	We can practice jumping_____? A) On Ground B) Inside Classroom C) In the corridor D) None of the above	1	INTERDISCIPLINARY
---	--	---	-------------------

6	Running should be perform in_____? A) Running Shoes B) Casual Shoes C) Slippers D) All of these	1	INFORMATION
---	---	---	-------------

Write the answer of the following

7	Do you like running and jumping ?	2	UNDERSTANDING
8	What do you like more indoor games or outdoor games?	2	UNDERSTANDING



**ARMY PUBLIC SCHOOL GWALIOR
CLASS - I**



**ACADEMIC SESSION 2024-25
REVISION WORKSHEET (SELF –ASSESSMENT)**

**Subject: Dance and Music
Allotment Date: 27 July 2024**

Assignment No. : 2

S. NO.	QUESTIONS	MARKS	NATURE
1	How many folk dance of Punjab? a) 5 b) 2	1	Information
2	Which dance perform by girls in Punjab? a) Giddha b) Bhangra	1	critical Thinking
3	Which dance perform by girls and boys both in Punjab? a)Bhangra b)Giddha	1	Understanding

4	<p>“Sarso Da Saag” is famous in _____ state.</p> <p>a) Punjab</p> <p>b) Gujrat</p>	1	Information
5	<p>Which one is the example of Asumyukta Hasta Mudra ?</p> <p>a) Pranam Hasta</p> <p>b) Tri-Pataka Hasta</p>	1	Critical thinking
6	<p>How many notes in there music</p> <p>a) 5</p> <p>b) 7</p>	1	Information
7	<p>lakdi Ki kathi _____ pe ghoda</p> <p>a) dhum</p> <p>b) kathi</p>	1	Information

8	Sa Re _____ Ma, Pa, dha, a)ga b)Ni	1	Critical thinking
9	Tu _____ ka sagar, sagar daya Ka tu hai a)Payaar b)Tere	1	Understanding
10	Nani _____ Morni Ko mor le gaye a)Teri b)baki	1	Understanding