



**ARMY PUBLIC SCHOOL GWALIOR**  
**CLASS - IX**  
**ACADEMIC SESSION 2024-25**  
**WORKSHEET (SELF –ASSESSMENT)**

Subject: English

Assignment No. : 3

Allotment Date: 31 August 2024

S.NO	QUESTIONS	MARKS	NATURE
01	What do the following phrases mean to you? A. Humid Shadows B. Starry Spheres C. A thousand dreamy fancies into being start.	6	information
02	What is the main message of the lake isle of Innisfree?	4	Understanding
03	What is the single major memory that comes to the poet's mind? Who are the 'darling dreamers' he refers to?	5	HOTS
04	During his childhood, Einstein did not show any trace of becoming a genius one day. How?	5	HOTS
05	Which qualities and values of the doctor saved his life?	5	Analytical Skills
06	How does Yeats propose to live there?	5	Critical Thinking and Problem Solving
07	Read the following sentences and change them into reported speech : A. Mimi said, "I have been writing this letter." B. I said, " Sam's driving the car." C. My uncle said, " I am cooking lunch." D. My brother said, " I had already eaten." E. " When I met her, she was singing."	10	Evaluation



**ARMY PUBLIC SCHOOL GWALIOR**  
**CLASS - IX**  
**ACADEMIC SESSION 2024-25**  
**WORKSHEET (SELF –ASSESSMENT)**




Subject: Hindi

Assignment No. : 3

Allotment Date: 31 August 2024

S. NO.	QUESTIONS	MARKS	NATURE
1	अपने पिता जी को पत्र लिखकर सूचित कीजिए कि वार्षिक परीक्षा के लिए आपकी तैयारी कैसी है।	5	Information
2	बाढ़ आने से कई गाँव जलमग्न हो गए हैं। दो मित्र उनकी सहायता के लिए जाना चाहते हैं। उनके बीच हुए संवाद का लेखन 50 से 60 शब्दों में कीजिए।	6	Communication Skills
3	नीचे दिए गए शब्दों में उचित स्थान पर अनुनासिक का प्रयोग करके शब्दों को पुनः लिखिए- आसू, कहा (ख (नीचे दिए गए शब्दों में उचित स्थान पर अनुस्वार का प्रयोग करते हुए शब्दों का मानक रूप लिखिए – चदन, सबध निम्नलिखित शब्दों के प्रत्यय लिखिए। कथाकार - छुटपन - वास्तविक- निम्नलिखित शब्दों के उपसर्ग लिखिए। अत्याचार निस्संकोच	2 2 3 3	Understanding

	प्रतिक्षण		
4	देश को वैज्ञानिक दृष्टि और चिंतन प्रदान करने में सर चंद्रशेखर वेंकट रामन् के महत्त्वपूर्ण योगदान पर प्रकाश डालिए।	5	Analytical Skill
5	निम्नलिखित में से किसी एक विषय पर 80 - 100 शब्दों में अनुच्छेद लिखिए।  ऋतुराज-वसंत  अथवा  मेरी प्रिय पुस्तक	5	Critical Thinking and Problem Solving
6	निम्नलिखित प्रश्नों के उत्तर दीजिए-  1. वाद्ययंत्रों की ध्वनियों के अध्ययन के द्वारा रामन् क्या करना चाहते थे?  2. कौन-सा आघात अप्रत्याशित था और उसका लेखक पर क्या प्रभाव पड़ा?  3. लेखक अतिथि को कैसी विदाई देना चाहता था?	9	Evaluation



**ARMY PUBLIC SCHOOL GWALIOR**  
**CLASS - IX**  
**ACADEMIC SESSION 2024-25**  
**WORKSHEET (SELF –ASSESSMENT)**

Subject: Mathematics



Assignment No. : 3

Allotment Date: 31 August 2024

S.NO.	QUESTIONS	MARKS	NATURE
1	The graph of $x = a$ is a straight line parallel to the :- (a) X-axis (b) y-axis (c) line $y=x$ (d) line $x+y=0$	1	Understanding
2	The graph of linear equation is always a :- (a) Curve (b) Straight line (c) Both (a) and (b) (d) None of the above	1	Application
3	Express $5x = -8y$ in form of $ax+by+c=0$ (a) $5x-8y+0=0$ (b) $5x+8y+0=0$ (c) $8x-5y+0=0$ (d) $8x+5y+0=0$	1	Understanding
4	The equation $x(x+2)-x^2+y(y-3)-y^2=0$ (a) Linear eqn in 2 variable (b) Quadratic equation (c) Linear eqn in 1 variable (d) Linear eqn in 3 variable	1	Interdisciplinary
5	The graph $y=b$ is a straight line parallel to the:- (a) X axis (b) y-axis (c) line $y=x$ (d) line $x+y=0$	1	AnalyticalSkill
6	Euclid divided his famous treatise “ The elements” into how many chapters? (a) 11 (b) 12 (c) 13 (d) 14	1	CriticalThinki ngand ProblemSolving

7	How many dimensions does a surface have:- (a) 1 (b) 2 (c) 3 (d) 4	1	Analytical Thinking
8	<b>ASSERTION (A)</b> :- $x+y = 6$ is the equation of a line passing through the origin. <b>REASON (R)</b> :- $y=mx$ is the equation of a line passing through the origin.  (a) Both (A) and (R) are true and (R) is correct explanation of (A) (b) Both (A) and (R) are true and (R) is not the correct explanation of (A) (c) (A) is true but (R) is false. (d) (A) is true but (R) is false.	1	Understanding
9	To solve the equation $a-20=15$ , we use Euclid's ..... axiom. (a) First (b) Second (c) Third (d) Fourth	1	Interdisciplinary

10	It is known that $p+q=6$ and $p=r$ . Show that $r+q=6$	2	Interdisciplinary
11.	Find the value of a,b,c from the following equation: $-5y=10x-7$	2	Application
12	The cost of a pen is three times the cost of a pencil. Write a linear equation in two variables to represent this statement.	2	Evaluation



**ARMY PUBLIC SCHOOL GWALIOR**  
**CLASS - IX**  
**ACADEMIC SESSION 2024-25**  
**WORKSHEET (SELF –ASSESSMENT)**

**Subject: Science**

**Assignment No. : 3**

**Allotment Date: 31 August 2024**

S. NO.	QUESTIONS	MARKS	NATURE
1	Q1. On what factors does inertia of a body depend? Q2. Give one example of a solution in which liquid is a solute as well as the solvent. Q3. Are plants and animals made up of same tissue?	1 1 1	Information
2	Q4. What is meristematic tissue? Where it is located? Write its function. Q5. A body starts from rest and rolls down a hill with a constant acceleration. If it travels 400m in 20s Calculate the force acting on the body if its mass is 10Kg. Q6. What is the difference between a pure substance and a mixture. Give one example in each case.	3 3 3	Understanding
3	Q7. Though the forces of action and reaction are opposite and equal, yet the acceleration produced them may not be equal. Why? Q8. Give two reasons to support that ammonia is a compound and not a mixture.	3 3	HOT
4	Q9. What is permanent tissue? Observe an old tree and find out meristematic and permanent tissue. Q10. Walking becomes difficult when the ground is covered with snow or sand. Why?	3 3	Interdisciplinary
5	Q11. What is brownian movement? Write some examples in which brownian movement is observed. Q12. List the points of difference between homogeneous and heterogeneous mixtures.	3 3	Analytical Skill
6	Q12. State Newton's three laws of motion and derive the formula for force.	5	Critical Thinking and Problem Solving
7	Q13. Explain components and functions of xylem and phloem.	5	Evaluation



**ARMY PUBLIC SCHOOL GWALIOR**  
**CLASS - IX**  
**ACADEMIC SESSION 2024-25**  
**WORKSHEET (SELF –ASSESSMENT)**

**Subject: Social Science**

**Assignment No. : 3**

**Allotment Date: 31 August 2024**

S. NO.	QUESTIONS	MARKS	NATURE
1.	<p>(i) Why was Nelson Mandela sentenced to life imprisonment in 1964?</p> <p>(a) He provoked the people to attack the whites.</p> <p>(b) He spread communal feelings among the people.</p> <p>(c) He dared to oppose apartheid regime</p> <p>(d) He was responsible for the attack on a theatre meant for the whites</p> <p>(ii) What was apartheid?</p> <p>(a) Gender discrimination</p> <p>(b) Facial discrimination</p> <p>(c) Caste discrimination</p>	<p>1</p> <p>1</p>	Information

(d) Racial discrimination

(iii) When did the Constitution of India come into effect?

(a) 26th November 1950

(b) 26th November 1949

(c) 20th November 1951

(d) 26th January 1950

(iv) Who among the following was not a member of the Constituent Assembly?

(a) Rajendra Prasad

(b) B.R.Ambedkar

(c) H.C.Mukherjee

(d) Mahatma Gandhi

(v) What does the term 'Socialist' mean?

(a) Wealth should be shared only by the rich.

(b) Wealth is generated socially and should be shared equally by the

**1**

**1**



society.

(c) Wealth should be shared only by the poor.

(d) Wealth is generated socially and should not be shared by any

one.

(vi) How can a large population be turned into a productive asset?

**1**

(a) By investment in human capital

(b) By stopping migration

(c) By increasing employment opportunities

(d) By developing rural areas

(vii) What does 'investment in human capital' mean ?

**1**

(a) Giving proper education to all

(b) Giving proper medical care to all

(c) Giving training to those who are interested in some skill

(d) All of the above

(viii) What was the literacy rate in the year 1951 ?

**1**

(a) 50%

(c) 30%

(b) 25%

(d) 18%

	<p>(ix) How did countries like Japan become rich / developed ?</p> <p>(a) By extracting from the natural resources</p> <p>(b) By investing on people in the field of education and health</p> <p>(c) By controlling population</p> <p>(d) By raising the standard of the people</p> <p>(x) Seasonal and disguised unemployment is associated with which regions ?</p> <p>(a) Rural regions</p> <p>(b) Urban regions</p> <p>(c) Both rural and urban regions</p> <p>(d) None of these</p>	<p><b>1</b></p> <p><b>1</b></p>	
<p><b>2.</b></p>	<p>(a) Write difference between seasonal and disguised unemployment</p> <p>(b) What was called the Constituent Assembly?</p>	<p><b>3</b></p> <p><b>3</b></p>	<p>Understanding</p>

<p><b>3.</b></p>	<p>(a) Give an example to prove that population is an asset for the economy rather than a liability.</p> <p style="text-align: center;">Or</p> <p>(b) Give reasons why we should accept the Constitution made by the Constituent Assembly more than fifty years ago?</p>	<p><b>3</b></p>	<p>HOT</p>
<p><b>4.</b></p>	<p>(a) Why investment in the field of education, health and skill training is important for the overall growth of a country?</p> <p>(b) Why do you mean by Constitutional amendments? How are they important for the development of a country?</p>	<p><b>3</b></p> <p><b>3</b></p>	<p>Interdisciplinary</p>
<p><b>5.</b></p>	<p>(a) Can you suggest some measures in the education system to mitigate the problem of educated unemployment ?</p> <p style="text-align: center;">or</p> <p>(b) How was the apartheid system oppressive for the blacks?</p>	<p><b>5</b></p>	<p>Analytical Skill</p>

<b>6.</b>	<p>(a) Suggest some ways to solve the problem of unemployment.</p> <p style="text-align: center;">or</p> <p>(b) Under which circumstances was the Indian Constitution drawn up? Explain.</p>	<b>5</b>	Critical Thinking and Problem Solving
<b>7.</b>	<p>(a) Why is the health of a person given so much importance? What has the government done in this direction ? What are its results ?</p> <p style="text-align: center;">or</p> <p>(b) What were the points that the blacks and whites agreed upon while making a Constitution for South Africa?</p>	<b>5</b>	Evaluation



**ARMY PUBLIC SCHOOL GWALIOR**  
**CLASS - IX**  
**ACADEMIC SESSION 2024-25**  
**WORKSHEET (SELF –ASSESSMENT)**



Subject: Computer

Assignment No. : 3

Allotment Date: 31 August 2024

S.NO.	QUESTIONS	MARKS(10)	NATURE
1	<p>Choose and write the correct option (MCQ):-</p> <p>(i) This property specifies that a value must be entered in the field:</p> <p>a. Required b. Default c. Validation rule d. Validation Text</p> <p>(ii) Which tab do you need to click to create a form?</p> <p>a. Home b. Create c. External data d. Database tools</p> <p>(iii) The maximum number of characters in a field is set using this property</p> <p><b>a. Required</b> b. Input Mask c. Field size d. Default Value</p> <p>(iv) Where are the previous, first, next and last record button located?</p> <p>a. Title Bar b. Create Tab c. Navigation Bar d. Show Table window</p>	0.5x4=2	Information
2	<p>Fill in the blanks-</p> <p>(a) When you run the Query, only those records, which match the _____ mentioned, will be displayed.</p> <p>(b) A _____ is the name assigned to a column of data in a table.</p> <p>(c) When you point at a field that has a validation rule</p>	0.5x4=2	Understanding

	<p>the _____ is displayed.</p> <p>(d) Fields in a table have some specific properties called _____ associated with them.</p> <p>(e) To generate a basic report, click on the _____ tab and click on the- button.</p>		
<b>3</b>	<p>Write short notes on following-</p> <p>(i) Record</p> <p>(ii) Field</p> <p>(iii) Data Validation</p> <p>(iv) Query</p>	$\frac{1}{2} \times 4 = 2$	<p>Critical</p> <p>Thinking</p>
<b>4</b>	<p>Answer the following questions -</p> <ol style="list-style-type: none"> <li>1. What is the difference between a Query and the Report?</li> <li>2. While creating a query, how do you specify the condition for which you want the records to be displayed?</li> <li>3. Once a report has been generated, how can you make it attractive?</li> <li>4. What is the 'Validation Rule'?</li> </ol>	$4 \times 1 = 4$	HOT



**ARMY PUBLIC SCHOOL GWALIOR**  
**CLASS - IX**  
**ACADEMIC SESSION 2024-25**  
**WORKSHEET (SELF –ASSESSMENT)**

**Subject: Dance**

**Assignment No. : 3**

**Allotment Date: 31 August 2024**

S. NO.	QUESTIONS	MARKS	NATURE
1	<b>Which musical instrument is commonly used during a "Ganesh Vandana" performance in Kathak?</b>  A) Tabla B) Harmonium C) sitar D) Flute	1	Informative
2	<b>What is "Ganesh Vandana" in Kathak nritya?</b>  A) Dhyaan ka ek roop B) Bhagavaan Ganesh ka aahvaan C) Ek pratispardhee nrty shailee D) Ek prakaar ka phutvark	1	Informative
3	<b>Which god is praised in Ganesh Vandana ?</b>  A) Brahma B) Vishnu C) Mahesh D) Ganesh	1	Informative
4	<b>In which classical dance Ganesh Vandana is not performed</b>  A) Kathak B) Bharatanatyam C) Odissi D) Kathakali	1	Informative
5	<b>Which type of dance is Ganesh Vandana ?</b>  A) Tandav B) Lasya	1	Informative

	<p>C) Nritya</p> <p>D) Sringer</p>		
6.	<p><b>Which emotion is expressed in Ganesh Vandana?</b></p> <p>A) Veer Ras</p> <p>B) Shringar Ras</p> <p>C) Shant Ras</p> <p>D) Bhakti Ras</p>	1	Informative
7.	<p><b>In Kathak dance _____ is worshipped first</b></p> <p>A) Ganapati</p> <p>B) Devi</p> <p>C) Gandharv</p> <p>D) Natya</p>	1	Informative
8.	<p><b>In which rhythm is Ganesh Vandana performed?</b></p> <p>A) TeenTaal</p> <p>B) Dhamar</p> <p>C) sawari</p> <p>D) Rudra Taal</p>	1	Informative
9.	<p><b>What is the main purpose of Ganesh Vandana in Kathak dance?</b></p> <p>A) Ganesh ki stuti</p> <p>B) Ganesh ki aarti</p> <p>C) Ganesh ki Vandana</p> <p>D) Ganesh ka Abhishek</p>	1	Informative
1	<p><b>Draw the picture of Ganesh.</b></p> <div style="display: flex; justify-content: space-around; margin-top: 20px;"> <div style="border: 1px solid black; width: 150px; height: 150px; margin: 5px;"></div> <div style="border: 1px solid black; width: 150px; height: 150px; margin: 5px;"></div> <div style="border: 1px solid black; width: 150px; height: 150px; margin: 5px;"></div> </div>	1	Informative



--	--	--	--



**ARMY PUBLIC SCHOOL GWALIOR**  
**CLASS - IX**  
**ACADEMIC SESSION 2024-25**  
**WORKSHEET (SELF –ASSESSMENT)**



**Subject: Music (Vocal and Instrumental)**

**Assignment No. : 3**

**Allotment Date: 31 August 2024**

S. NO.	QUESTIONS	MARKS	NATURE
1	What type of song is "Aye Mere Watan Ke Logo"? a) Patriotic b) Bhajan	1	Informative
2	Aye meri zameen afsos nahi jo tere liye ___dard sahe ? a) sau b) har	1	Informative
3	What is Congo skin made of ? a) of leather b) of plastic	1	Informative
4	What metal is Congo made of ? a) of wood b) of iron	1	Informative
5	How many parts of congo are there? a) Three b) Two	1	Informative
6.	How many counting are there in Rupak Taal? a) 7 b) 15	1	Informative
7.	How many division are there in Rupak taal? a) 3 b) 10	1	Informative

<b>8.</b>	How many tali are there in Rupak taal? a) 2 b) 4	1	Informative
<b>9,</b>	How many khali are there in Rupak taal? a) 1 b) 5	1	Informative
<b>10.</b>	Rupak taal is played with which type music ? a) classical & Light music b)with both	1	Informative




**ARMY PUBLIC SCHOOL GWALIOR**  
**CLASS - IX**  
**ACADEMIC SESSION 2024-25**  
**WORKSHEET (SELF –ASSESSMENT)**

**Subject: Work Education**

**Assignment No. : 3**

**Allotment Date: 31 August 2024**

S. NO.	QUESTIONS	MARKS	NATURE
1	A _____ is a drawing or painting that focuses on still objects. A. Emotive B. Still life C. Perspective D. Diagrammatic	1 mark	Creative Skills
2	Who invented still life? A. Leonardo da Vinci B. Michelangelo C. Jacopo de'Barbari D. Vincent Van Gogh	1 mark	Creative Skills
3	Another name of hatching techniques is _____ hatching. A. Parallel B. Cross C. Scribbling D. Stippling	1 mark	Creative Skills
4	_____ is built up by applying dots in different densities. A.Parallel B.Cross C.Scribbling D.Stippling	1 mark	Creative Skills
5	Objects that are not the main focus of an image. The image or	1 mark	Creative Skills

	<p>design in the back are called_____.</p> <p>A. Positive Space</p> <p>B. Negative Space</p> <p>C. Contrast</p> <p>D. Grid System</p>		
6.	<p>The way the viewer sees an image. It can be above, below, or at eye-level is called _____.</p> <p>A. Contrast</p> <p>B. Grid System</p> <p>C. Point of View</p> <p>D. Value</p>	1 mark	Creative Skills
7	<p>When one object passes in front of another object to create layering is called _____.</p> <p>A. Shape-</p> <p>B. Overlapping</p> <p>C. Texture-</p> <p>D. Composition-</p>	1 mark	Creative Skills
8	<p>_____ is the arrangement of objects, images, or colours placed in a way to create motion.</p> <p>A. Movement-</p> <p>B. Positive Space</p> <p>C. Negative Space</p> <p>D. Texture-</p>	1 mark	Creative Skills
9	 <p>Picture shown above is of which technique?</p> <p>A. Scribbling</p> <p>B. Contour Hatching</p> <p>C. Stippling</p> <p>D. Scribbling</p>	1 mark	Creative Skills
10		1 mark	Creative Skills



Picture shown above is of which technique?

- A. **Contour Hatching**
- B. **Stippling**
- C. **Cross Hatching**
- D. **Scribbling**



**ARMY PUBLIC SCHOOL GWALIOR**  
**CLASS - IX**  
**ACADEMIC SESSION 2024-25**  
**WORKSHEET (SELF –ASSESSMENT)**

**Subject: Physical Education**


**Assignment No. : 3**

**Allotment Date: 31 August 2024**

S.NO	MULTIPLE CHOICE QUESTIONS(QUESTION 1 TO 4)	MARKS:- 1X10=10	SKILLS
1.	<b>What was the original name of _volleyball?</b> A. Lacrosse B. _Volley Ball C. _Mintonette D. Spyball	1	Initiative
2.	When was volleyball created? A. 2004 B. 1912 C. 1895 D. 1991	1	Problem-solving
3.	Who created volleyball? A. John A. Belstrad B. William G. Morgan C. Elijah C. Campwood D. Willam Jones	1	Thinking
4.	What is the player who specializes in defence called? A. Libero B. Freestyle C. Blocker D. Service man	1	Problem-solving
5.	<b>Fill in the blanks ( question 5 to 7)</b> _____ <b>Way do the teams rotate in volleyball</b> <b>(Clockwise,Counter-Clockwise)</b>	1	Self-regulation
6.	_____Player position serves in volleyball.  (Middle Back,Right Back)	1	Thinking
7.	_____Times a team can hit a ball without passing it over the net.  (4, 3)	1	Initiative
8.	<b>True &amp; False (question 8 to 10 )</b> As the players rotate for a new serve opportunity, they will rotate in a counter clockwise manner..	1	Initiative

9.	The team will rotate each time they win the serve.	1	Self-regulation
10.	The served ball must clear the net without touching it. Failure to clear the net will result in a side out..	1	Thinking





**ARMY PUBLIC SCHOOL GWALIOR**  
**CLASS - IX**  
**ACADEMIC SESSION 2024-25**  
**WORKSHEET (SELF –ASSESSMENT)**

**Subject: Employability Skills**  
**Allotment Date: 31 August 2024**

**Assignment No. : 3**

S. No.	QUESTIONS	MARKS	NATURE
1	<b>What is the purpose of communication?</b> (a) Inform (tell someone about something) (b) Influence (get someone to do something you want) (c) Share thoughts, ideas, feelings (d) All of the above	1	Analytical Skill
2	<b>Which of the following methods are used to receive information from the sender through a letter?</b> (a) Listening (b) Speaking (c) Reading (d) Writing	1	Analytical Skill
3	<b>Which of the following is not a self – management skill?</b> (a) Problem solving (b) Bargaining (c) Understanding self(d)Confidence building	1	Interdisciplinary
4	<b>Which of the following is a quality of a self- confident person?</b> (a) Patient (b) Compassionate (c) Committed (d) Passionate	1	Understanding
5	<b>What can you do to get rid of negative thoughts or feelings?</b> (a) Meditate to calm down and feel positive (b) Ignore them and move on life (c) Act based on the negative thoughts or feelings. (d) Talk to a friend and share all your negative feelings.	1	Analytical Skill
6	<b>What is short -range wireless communication technology called?</b> (a) Wi - Fi (b) Internet (c) Bluetooth (d) PS	1	Understanding
7	<b>What does GPS stand for?</b> (a) Global Positioning System (b) Global Payment System	1	Information

	(c) Global Program System (d) Global Pointing System																							
<b>8</b>	<b>Business is a (an) _____ activity.</b> (a) Social (b) economic (c) hazardous (d) selling	1	Critical Thinking																					
<b>9</b>	<b>What is the aim of entrepreneurship?</b> (a) Earn a profit (b) Solve customers' need innovatively (c) Both of the above (d) None of the above	1	Interdisciplinary																					
<b>10</b>	<b>How can we conserve our health and environment?</b> (a) Grow organic crops (b) Use natural fertilisers (c) Manage waste water (d) Use more air conditioning	1	Information																					
<b>11</b>	<b>Write the purpose of Shortcut Keys in MS Word</b> <b>(Answer any 5)</b>	5x1 =5	Understanding																					
	<table border="1"> <thead> <tr> <th>S.No.</th> <th>SHORTCUT KEYS</th> <th>Purpose</th> </tr> </thead> <tbody> <tr> <td>1</td> <td>CTRL+ z</td> <td></td> </tr> <tr> <td>2</td> <td>CTRL+y</td> <td></td> </tr> <tr> <td>3</td> <td>CTRL+p</td> <td></td> </tr> <tr> <td>4</td> <td>CTRL+x</td> <td></td> </tr> <tr> <td>5</td> <td>CTRL+ s</td> <td></td> </tr> <tr> <td>6</td> <td>CTRL+ c</td> <td></td> </tr> </tbody> </table>	S.No.	SHORTCUT KEYS	Purpose	1	CTRL+ z		2	CTRL+y		3	CTRL+p		4	CTRL+x		5	CTRL+ s		6	CTRL+ c			
S.No.	SHORTCUT KEYS	Purpose																						
1	CTRL+ z																							
2	CTRL+y																							
3	CTRL+p																							
4	CTRL+x																							
5	CTRL+ s																							
6	CTRL+ c																							
<b>12</b>	<b>Answer the following questions in about 20-30 words.</b> 1. Write down the seven factors affecting perspectives in communication. 2. What are the factors that affect self- confidence? 3. List the steps to search for information using a web browser. 4. List any two characteristics of wage employment. 5. What are the 3 types of business activities? Explain with examples.	5x2= 10	Critical Thinking and Problem Solving																					

