



ARMY PUBLIC SCHOOL GWALIOR
CLASS - VI
ACADEMIC SESSION 2024-25
WORKSHEET (SELF –ASSESSMENT)

Subject: English

Assignment No. : 3

Allotment Date: 31 August 2024

S.NO.	QUESTIONS	MARKS	NATURE
1	Why did the other governors grow jealous of the shepherd?	4 Marks	Informative and Understanding
2	Fill in the blanks with the correct form of the verbs given in bracket: (i) How many books you have.....(study) so far? (ii) The movie ended so late, so he(sleep). (iii) She has.....(be) ill for a week.	3 Marks	Understanding
3	Describe a recent quarrel that you have had with your brother, sister or friend. How did it start? What did you quarrel about? Did it end?	4 Marks	HOT
4	Why is it important to be thoughtful and caring towards our family like Taro?	3 Marks	Interdisciplinary
5	Which qualities of shepherd made him liked by all and rewarded by the king, in spite of being an uneducated person?	3 Marks	Analytical Skill
6	Fill in the blanks with the words given in bracket: (heard, grazing, chasing, arrived) Once, there was a boy who became bored when he watched over the village sheep on the hillside. To entertain himself, he sang out, "Wolf! Wolf! The wolf is the sheep!" When the villagers the cry, they came running up the hill to drive the wolf away. But, when they....., they saw no wolf. The boy was amused when seeing their angry faces.	4 Marks	Critical Thinking and Problem Solving
7	Answer the following questions in about 20-30 words. (a) Why did the Emperor reward Taro? (b) Why was everyone delighted to see the iron chest on the camel's back? (c) Why did the waterfall give Taro sake and others water?	3x2 = 6 Marks	Evaluation
8	When did quarrel finally end? What lesson you learn from the poem "The Quarrel"?	3 Marks	Communication Skills



ARMY PUBLIC SCHOOL GWALIOR
CLASS - VI
ACADEMIC SESSION 2024-25
WORKSHEET (SELF -ASSESSMENT)

Subject: Hindi

Assignment No. : 3

Allotment Date: 31 August 2024

क्रमसंख्या	प्रश्न	अंक	प्रकृति
1	कहानी के अनुसार मंगल ग्रह पर कभी आम जन-जीवन था। वह सब नष्ट कैसे हो गया? इसे लिखो-	5	INFORMATIVE
2	'सागर ने रस्ता छोड़ा, परबत ने सीस झुकाया'-साहिर ने ऐसा क्यों कहा है? लिखो।	1x4=4	UNDERSTANDING
3	अनेक शब्दों के लिए एक शब्द लिखो। (i) जिसका जन्म पहले हुआ हो _____ (ii) जिसका मूल्य न हो _____ (iii) जो अर्थशास्त्र का विद्वान् हो _____ (iv) कम अक्लवाला _____ (v) जो परीक्षा में पास हो _____	5	HOT
4	प्रश्न - निम्नलिखित शब्दों के समरूपी भिन्नार्थक रूप लिखे - 1. अनल, अनिल _____ - _____ 2. अलि, अली _____ 3. अंबा, अंबु _____ 4. परिणाम, परिमाण _____, _____ 5. अपकार, उपकार _____	5	INTERDISCIPLINARY
5.	कहानी में अंतरिक्ष यान को किसने भेजा था और क्यों?	5	CRITICAL THINKING AND PROBLEM SOLVING
6	निम्नलिखित प्रश्नों के उत्तर दीजिए - 1. गीत में सीने और बाँहों को फ़ौलादी क्यों कहा गया है? 2. छोटू का परिवार कहाँ रहता था? 3. छोटू को सुरंग में जाने की इजाज़त क्यों नहीं थी? पाठ के आधार पर लिखो।	3x2=6	EVALUATION




ARMY PUBLIC SCHOOL GWALIOR
CLASS VI
ACADEMIC SESSION 2024-25
WORKSHEET (SELF-ASSESSMENT)




Subject-Mathematics

Assignment No.-3

Allotment Date: 31 August 2024

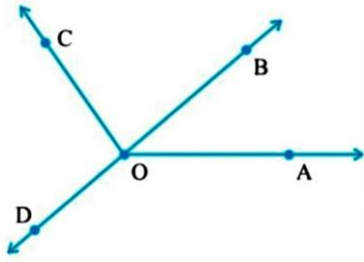
S.NO.	QUESTIONS	MARKS	NATURE
1	A Line segment has- (A) One fixed point (B) Two fixed points (C) No end points (D) None of these	1	Understanding
2	How many lines can pass through a two given points- (A) infinite (B) Two lines (C) one line (D) No line	1	Critical Thinking
3	Identify this curve?  (A) open (B) closed (C) complex (D) none	1	Informative

4	 <p>What fraction of a clockwise revolution does the hour hand of a clock turn through, when it goes from 3 to 9</p> <p>(A) $\frac{1}{4}$ (B) $\frac{1}{2}$ (C) $\frac{3}{4}$ (D) 1</p>	1	Analytical
5	<p>What part of a revolution have you turned through if you stand facing south and turn clockwise to face east?</p> <p>(A) North (B) East (C) South (D) West</p>	1	Understanding
6	<p>What is the measure of a straight angle?</p> <p>(A) 90 (B) 180 (C) 60 (D) 360</p>	1	Informative

7	<p>All sides are equal in a triangle called-</p> <p>(A) Scalene (B) Isosceles (C) Equilateral (D) Right angle triangle</p>	1	Analytical
8	<p>Name the type of triangle $\triangle XYZ$ with $m \angle Y = 90^\circ$ and $XY = YZ$</p> <p>a) Scalene triangle b) Equilateral triangle c) Right angle triangle d) Isosceles triangle</p>	1	Critical Thinking

9	How many sides in a pentagon? a) 4 b)6 c)5 d)none	1	Informative
10	Fill in the blanks with acute, obtuse, right or straight: (a) An angle whose measure is less than that of a right angle is_____ (b) An angle whose measure is greater than that of a right angle is _____.	2	Understanding
11	Where will the hour hand of a clock stop if it starts (a) from 6 and turns through 1 right angle? (b) from 8 and turns through 2 right angles?	2	Critical Thinking
12	Give two real life examples of rays?	2	Understanding
13	Draw three other situations of one-fourth, half and three-fourth revolution on a clock.	3	Problem Solving
14	Give reasons for the following: (a) A square can be thought of as a special rectangle. (b) A rectangle can be thought of as a special parallelogram. (c) Squares, rectangles, parallelograms are all quadrilaterals	3	Critical Thinking

15	1)List four situations where the angles made are right angles. 2) Find four situations where obtuse angles are made.	4	Case Study
16	Measure and classify each angle:	5	Problem Solving



Angle	Measure	Type
$\angle AOB$		
$\angle AOC$		
$\angle BOC$		
$\angle DOC$		
$\angle DOA$		
$\angle DOB$		



ARMY PUBLIC SCHOOL GWALIOR
CLASS - VI
ACADEMIC SESSION 2024-25
WORKSHEET (SELF –ASSESSMENT)



Subject: Science
Allotment Date: 31 August 2024

Assignment No.: 3

S. No.	Questions	MARKS	NATURE
1.	Answer the following questions: a) What are creepers? b) Name the parts of the pistil which traps the pollen grains.	1x2=2	INFORMATIVE
2.	a) Why does a white flower twig kept in ink- water turn colourful? b) Differentiate between reticulate venation and parallel venation.	2x2= 4	UNDERSTANDING
3.	Why are the leaves of cactus modified into spines?	4x1=4	HOT
4.	Explain the structure of a typical flower.	3x1= 3	INTERDISCIPLINARY
5.	a) Explain the important functions of a root? b) Define transpiration. How it helps the plant?	3x2=6	ANALYTICAL SKILL
6.	The leaf is called the food factory of the plant? Why.	3x1=3	CRITICAL THINKING
7.	Explain an activity to test the presence of starch in a leaf.	4x1=4	PROBLEM SOLVING
8.	Explain that sunlight is essential for photosynthesis.	4x1= 4	COMMUNICATION SKILLS



ARMY PUBLIC SCHOOL, GWALIOR
CLASS- VI
ACADEMIC SESSION 2024-2025
WORKSHEET (SELF –ASSESSMENT)



Subject: Social Science


Assignment No.03

Allotment Date: 31 August 24

S. NO.	QUESTIONS	MARKS	NATURE
1	Write the name of four vedas.	2m	Informative
2	How many levels of the government are there in India? Name them.	3m	Understanding
3	Define Rotation and Revolution.	3m	Interdisciplinary
4	Multiple Choice Questions- 1. Christmas is celebrated in summer in- (a) Japan (b) India (c) Australia (d) Canada 2. In which archaeological site 'The Great Bath' was found- (a) Lothal (b) Mohenjodaro (c) Harappa (d) Dholavira 3. Direct rays of the sun fall on the equator on- (a) 21 March (b) 21 June (c) 22 December (d) 25 May	3m	Informative
5	Match the following- 1. Megalith (i) Sacrifice 2. Leap year (ii) Government 3. Democratic (iii) Stone Boulder 4. Yajna (iv) 366 days	4x1=4m	Analytical Skill
6	Answer the following questions in about 20-30 words. 1.What do you understand by the Government? 2.What is Citadel?	2x2=4m	Communication skills

7	Answer the following questions- 1.What is the latitudinal value of the 'Tropic of Cancer'? 2.Name the two essential features of a democratic government? 3. Name the four groups into which later vedic society was divided?	3x2=6m	Evaluation
8	Explain the drainage system of Harappan cities?	5m	Critical Thinking and Problem Solving

	<p>iv) बाला: ----- खेलन्ति (हस्त)</p> <p>v) सः ----- लिखति (कलम)</p>		
5.	<p>शुद्धशब्दरूपाणि चित्वा लिखत।</p> <p>(क) देवान् , देविन् , देवान्</p> <p>(ख) रामसु , रामषु , रामेषु</p> <p>(ग) फलाः , फलानि , फलान्</p> <p>(घ) वृक्षा , वृक्षानि , वृक्षाणि</p> <p>(ङ) पत्राः , पत्रान् , पत्राणि</p>	1*5=5	Critical thinking
6.	<p>उचितपदप्रयोगेण रिक्तस्थानानि पूर्यत-</p> <p>(क) धनिकः धनं ददाति। (निर्धनम्, निर्धनाय)</p> <p>(ख) बालः विद्यालयं गच्छति। (पठनाय, पठनेन)</p> <p>(ग) सज्जनाः जीवन्ति। (परोपकारम्, परोपकाराय)</p> <p>(घ) प्रधानाचार्यः पारितोषिकं यच्छति। (छात्राणाम्, छात्रेभ्यः)</p> <p>(ङ) नमः। (शिक्षकाय, शिक्षकम्)</p>	5.	Memory skill



ARMY PUBLIC SCHOOL GWALIOR

CLASS -VI

ACADEMIC SESSION 2024-25

WORKSHEET (SELF –ASSESSMENT)



Subject: Art & Work Education

Assignment No. 3

Allotment Date: 31 August 24

S.NO	QUESTIONS	MARKS	SKILLS
1.	How many types of shading in drawing are there? a) Two b) Four c) Five d) One	1	Creativity
2.	Shading is often used to create the illusion of _____. a) Width b) Hight c) Depth d) Length	1	Creativity
3.	What can make an object three-dimensional? a) Sketching b) Drawing c) Shading d) Painting	1	Creativity
4.	In hatching technique a series of _____ lines are used. a) Curved lines b) Parallel straight lines c) Zigzag lines d) Dotted lines	1	Creativity

5.	<p>Cross hatching is a type of which technique?</p> <p>a) Drawing</p> <p>b) Shading</p> <p>c) Painting</p> <p>d) Sculpture</p>	1	Creativity
6.	<p>Artists draw parallel lines in Cross hatching technique.</p> <p>a) True</p> <p>b) False</p>	1	Creativity
7.	<p>The scribbling is a drawing technique.</p> <p>a) True</p> <p>b) False</p>	1	Creativity
8.	<p>Stippling is the creation of a _____ simulating varying degrees of solidity or shading by using small dots.</p> <p>a) Sketch</p> <p>b) Pattern</p> <p>c) Texture</p> <p>d) Painting</p>	1	Creativity
9.	<p>Artists use layers of shading to achieve light, medium and _____ tones.</p> <p>a) Spiral</p> <p>b) Dark</p> <p>c) Zigzag</p> <p>d) Texture</p>	1	Creativity

10.

Which among these is the picture of Scribbling?


1

Creativity

A




B



C





ARMY PUBLIC SCHOOL GWALIOR

CLASS -VI

ACADEMIC SESSION 2024-25

WORKSHEET (SELF –ASSESSMENT)



Subject: Yoga

Assignment No. 3

Allotment Date: 31 August 24

QUESTIONS	MARKS	SKILLS
<p>Fill in the blanks</p> <p>1. Pranayama involves the control of _____.</p> <p>2. Trataka, a practice of Dharana, involves gazing at a _____.</p> <p>3. _____ is a state of deep meditation where the individual experiences a sense of oneness with the universe.</p>	3X1=3	INFORMATIVE
<p>True and False:</p> <p>1. Santosha means non-violence.</p> <p>2. Adhi Mukha Svanasana is also known as the Cobra Pose.</p> <p>3. Guided meditation is an example of Samadhi.</p>	3X1=3	CRITICAL THINKING
<p>MCQs:</p> <p>1. What does the word "yoga" mean?</p> <p>a) Exercise b) Meditation c) Union d) Balance</p> <p>2. How many limbs are there in Ashtanga Yoga?</p> <p>a) 4 b) 6</p>	4X1=4	ANALYTICAL THINKING

- c) 8
- d) 10


3. Which of the following is a Yama?

- a) Saucha
- b) Santosha
- c) Tapas
- d) Satya

4. What is the primary focus of Pranayama?

- a) Postures
- b) Breathing exercises
- c) Meditation
- d) Ethical guidelines

<p>c) 8 d) 10</p> <p>3. Which of the following is a Yama?</p> <p>a) Saucha b) Santosha c) Tapas d) Satya</p> <p>4. What is the primary focus of Pranayama?</p> <p>a) Postures b) Breathing exercises c) Meditation d) Ethical guidelines</p>		
--	--	--



ARMY PUBLIC SCHOOL GWALIOR

CLASS -VI

ACADEMIC SESSION 2024-25

WORKSHEET (SELF –ASSESSMENT)




Subject: Karate

Assignment No. 3

Allotment Date: 31 August 24

S. NO	QUESTIONS	Marks 10
1	What is the meaning of Kumite? a) Fight b) Leg Fight c) Pre – decided techniques of offense and defense d) None of these	1
2	Which Japanese word is used at the time of wish in Kata? a) Os b) Ous c) Osu d) Oos	1
3	What is the Japanese name of middle block? a) Jodan age uke b) Chudan sota uke c) Gaidan barai uke d) None of these	1
4	Which stance is used for attention position? a) Zenkotsudachi b) Heikodachi c) Soto heikodachi d) Sanchin dachi	1
5	Which position is used at kicking time? a) Hidari heikodachi b) Migi heikodachi c) Hidari and migi heikodachi d) None of these	1
6	How many basic punches? a) 10 b) 20	1

	<p>c) 3 d) 4</p>	
7	<p>In heikodachi dachi legs should be</p> <p>a) Parallel to your shoulder b) Inside the shoulder c) Outside the shoulder d) None of these</p>	1
8	<p>How many basic blocks?</p> <p>a) 1 b) 2 c) 3 d) 4</p>	1
9	<p>Which punch is used for face block?</p> <p>a) Jodan agae uke b) Chudan tsuki c) Gaidan uke d) Nidan tsuki</p>	1
10	<p>What is the starting position of kicking?</p> <p>a) Heikondachi b) heikadachi c) Zenkotsudachi d) None of these</p>	1



ARMY PUBLIC SCHOOL GWALIOR
CLASS – VI
ACADEMIC SESSION 2024- 25
WORKSHEET (SELF –ASSESSMENT)


Subject: Music

Assignment No.: 3

Allotment Date: 31 August 24

S. NO.	QUESTIONS	MARKS	NATURE
1	Bharat humko _____ se pyara hai a. jaan b. praan	1	Knowledge
2	What do you mean by patriotism? a. Devotion towards country b. Devotion towards religion	1	Informative
3	Ae duniya ke logon unchi awaz karo _____ a. Gao khushi ke geet b. Ibadat karo	1	Knowledge
4	Janam bhumi pe _____ a. Jaan lutate hai b. Haske jaate hai	1	Creativity
5	Prabhu ji inpe tum apni _____ karo a. Kirpa b. pyaar	1	Learning
6	Who wrote National Anthem? a. Rabindranath Tagore b. Jawaharlal Nehru	1	Knowledge

7.	Complete the line Jana gana mana? a. Adhinaayak jaya hey b. Gaya hey	1	Learning
8.	Complete the line Vindhya Himachal? a. Yamuna Godavari b. Yamuna Ganga	1	Learning
9	Complete the line Door agyan ke ho? a. Andhere b. Roshni	1	Creativity
10.	Har Se bachte rahe hum? a. Burai b. Bhalai	1	Creativity



ARMY PUBLIC SCHOOL GWALIOR
CLASS - VI
ACADEMIC SESSION 2024-25
WORKSHEET (SELF –ASSESSMENT)



Subject: Health And Physical Education

Assignment No.: 3

Allotment Date: 31 August 24

S.NO	QUESTIONS	MARKS	SKILLS/COMPETENCIES
1.	<p>Tick The Correct Answer</p> <p>Q-1- What is the length of football ground?</p> <p>a.100 to 120M</p> <p>b.35 to 55 M</p> <p>c.90 to 120M</p> <p>d.100 to 110M</p> <p>Q-2 Who won the 2024 football olympic gold medal?</p> <p>a.Brazil</p> <p>b.Spain</p> <p>c.France</p> <p>d.Argentina</p> <p>Q-3- What colour cards do referee don't carry in a football match?</p> <p>a.Blue and orange</p> <p>b.Yellow and blue</p> <p>c.Red and yellow</p> <p>d.Green and blue</p> <p>Q-4- What is the time duration of football match?</p> <p>a.80 minutes</p>	4	Informative

	<p>b.90 minutes</p> <p>c.70 minutes</p> <p>d.95 minutes</p>		
2	<p><u>Fill in the blanks</u></p> <p>Q-5- Football world cup 2022 organising by _____ (Qatar,france)</p> <p>Q-6 Penalty area is _____ far away from the touch line. (18yard,20 yard)</p> <p>Q-7 _____ won the most football world cup title. (Argentina, Brazil)</p>	3	Understanding
3	<p><u>True False</u></p> <p>Q-8- 11 players from each team allowed to play at a time?</p> <p>A. True</p> <p>B. False</p> <p>Q-9 Argentina won their world cup title in 2022?</p> <p>A. True</p> <p>B. False</p> <p>Q-10- Marcelo plays for Brazil?</p> <p>A. True</p> <p>B. False</p>	3	Knowledge



ARMY PUBLIC SCHOOL GWALIOR
ACADEMIC SESSION 2024-25
CLASS – VI
WORKSHEET (SELF –ASSESSMENT)



Subject: Dance

Assignment No.: 3

Allotment Date: 31 August 2024

S. NO.	QUESTIONS	MARKS	NATURE
1.	How many types of Hasta Mudra in Kathak? a) 5 b) 2	1	Informative
2.	How many types of Asumyukta Hasta Mudra? a) 28 b) 26	1	Informative
3.	what is the use of Pataka Hasta in kathak dance? a) To give blessing b) To give money	1	Informative
4.	What is the meaning of Bhoomi Pranam? a) Take permissions from earth before start dancing b) Give thanks to earth end of dancing	1	Informative
5.	Which one is the example of Asumyukta Hasta Mudra? a) Pranam Hasta b) Tri-Pataka Hast	1	Informative
6.	What is the timing of the bhoomi pranam? a) 1 Minute b) 15 second	1	Informative

7.	What happens first at the beginning? The dance is it bowing to the ground or it a prayer a) Bhoomi Pranam b) Vandana	1	Informative
8.	What are the bole of ganesh vandana? a) Vakratunda Mahakarya b) Guru Brahma	1	Informative
9	What are the one mudras? a) Kapit Mudra b) Anjali Mudra	1	Informative
10	Which mudras has three fingers? a) Gyan Mudra b) Shloka Mudras	1	Informative



ARMY PUBLIC SCHOOL GWALIOR
ACADEMIC SESSION 2024-25
CLASS – VI
WORKSHEET (SELF –ASSESSMENT)



Subject: Computer

Assignment No. : 3

Allotment Date: 31 August 2024

S. NO.	QUESTIONS	MARKS	NATURE
1	<p>Tick the correct answer:</p> <p>i) The collection of rows and columns is called.....</p> <p>a. workbook b. worksheet c. document.</p> <p>ii) The number of columns in a single worksheet is.....:</p> <p>a. 16384 b. 16385 c. 16358</p> <p>iii) We can also select a cell in a worksheet using thekeys.</p> <p>a. Ctrl b. Alt c. Arrow</p> <p>iv) We can make a worksheet look more attractive and legible by.....</p> <p>a. editing b. formatting c. correcting</p> <p>v) The formatting is used to format the data according to specified condition.</p>	1x5=5	Critical Thinking
2	<p>Write 'T' for True and 'F' for False statements.</p> <p>i) We cannot save worksheet data as a PDF and HTML file.</p> <p>ii) Cells may contain four types of data.</p> <p>iii) We can change the font of numbers in excel.</p>	1x3=3	Understanding
3	<p>Fill in the blanks.</p> <p>i) By using feature, one can revert the last changes.</p> <p>ii) _____ can be added to the cells for separating the data from surrounding cells.</p>	1x2=2	Informative