



**ARMY PUBLIC SCHOOL GWALIOR**  
**CLASS - II**  
**ACADEMIC SESSION 2024-25**  
**WORKSHEET (SELF –ASSESSMENT)**



**Subject: English**  
**Allotment Date: 31 August 2024**

**Assignment No. : 3**

S. NO.	QUESTIONS	MARKS 20	NATURE
1.	<p><b>Choose the correct pronoun for the underlined words in the below sentences.</b></p> <p>1. <u>The train</u> has stopped. a) He.      b) She.      c) It      d) They</p> <p>2. <u>The dog</u> ran behind the car. a) He.      b)It      c) We      d) They</p> <p>3. <u>Sita</u>, <u>Renu</u> and <u>Priya</u> are friends. a)He.      b) It      c) We      d) They</p>	3x1=3	Information
2.	<p><b>Read the riddles given below and write down the answers.</b></p> <p>a) You use me when you read. I have many pages. What am I? I am a _____.</p> <p>b) I give you shade. I give you fruits to eat. Who am I ? I am a _____.</p> <p>c) She teaches you in school. She loves you. Who is she ? She is a _____.</p>	3x1=3	Information
3.	<p><b>Answer the following questions.</b></p> <p><b>Q1. Who loves to play in the shade of mango tree?</b> Ans _____ _____ _____</p> <p><b>Q2. Who will take care of lambkin ?</b> Ans. _____ _____</p>	2x2=4	Understanding

4.	<p><b>Circle and write the correct demonstrative pronoun.</b></p> <p>1) _____(This/That) train over there is big. (far)</p> <p>2) _____(This/That) train over here is old. (near)</p> <p>3) _____(This/That) apple is good. (far)</p> <p>4) _____ (These/ Those) flags are colourful. (near)</p> <p>5) _____(These/Those) are my favourite boots. (far)</p>	5×1=5	Problem solving
5.	<p><b>Fill in the missing letters.</b></p> <p>(i) l__mbk__n      (ii) se__d        (iii) d__ct__r      (iv) te__ch__r</p>	4×0.5= 2	Literary skills
6.	<p><b>Write the meaning of the following words.</b></p> <p>(i) fetch - _____</p> <p>(ii) bold - _____</p> <p>(iii) fleece - _____</p> <p>(iv) wrap - _____</p> <p>(v) lambkin - _____</p> <p>(vi) shelter - _____</p>	6×0.5=3	Understanding



**ARMY PUBLIC SCHOOL GWALIOR**  
**CLASS - II**  
**ACADEMIC SESSION 2024-25**  
**WORKSHEET (SELF -ASSESSMENT)**




Subject: Hindi

Assignment No. : 3

Allotment Date: 31 August 2024

संख्या	प्रश्न	अंक	प्रश्न के प्रकार
1.	एक शब्द के लिए अनेक शब्द लिखें - (i) बच्चा- (ii) झूला- (iii) किताब -	3x1=3	भाषा बोध
2.	निम्नलिखित शब्दों के अर्थ लिखें - (i) इच्छाशक्ति - (ii) अनुमति - (iii) स्वस्थ -	3x1=3	ज्ञानात्मक
3.	का,की या के लिख कर खाली जगह भरो- (i) बिजली _____ खम्भा (ii) पायल _____ भाई (iii) पायल _____ हिम्मत (iv) पायल _____ माता-पिता	4x1=4	रचनात्मक
4.	निम्नलिखित शब्दों के उल्टे अर्थ वाले शब्द लिखें - (i) दूर - (ii) आगे - (iii) ऊपर - (iv) नया -	4x1=4	सूचनापरक
5	निम्नलिखित प्रश्नों के उत्तर लिखिए - (i) पढाई के साथ-साथ पायल की और किसमें रुचि थी?? _____ _____	2x2=4	विश्लेषणात्मक

	<p>(ii) सभी शिक्षक और मित्र पायल किस बात की प्रशंसा कर रहे हैं?</p> <hr/> <hr/> <hr/> <hr/>		
6.	<p>हम प्रतियोगिता में भाग क्यों लेते हैं?</p> <hr/> <hr/> <hr/> <hr/>	2x1=2	उच्चस्तरीय चिंतन



**ARMY PUBLIC SCHOOL GWALIOR**  
**CLASS - II**  
**ACADEMIC SESSION 2024-25**  
**WORKSHEET (SELF –ASSESSMENT)**



**Subject: Mathematics**  
**Allotment Date: 31 August 2024**

**Assignment No. : 3**

S. NO.	QUESTIONS	MARKS	NATURE
1	<p><b>Fill in the blanks :-</b></p> <p>(i) _____ is a sign of subtraction.</p> <p>(ii) When a number is subtracted from itself, we get _____.</p> <p>(iii) <math>16 - 0 =</math> _____.</p> <p>(iv) <math>20 - 20 =</math> _____.</p>	4x1= 4	Understanding
2	<p><b>Choose the correct option:</b></p> <p>(i) Difference between 50 and 5 is _____.</p> <p>(a) 35 (b) 42 (c) 45 (d) 40</p> <p>(ii) When we subtract 0 from 25, the answer is _____</p> <p>(a) 0 (b) 20 (c) 25 (d) 30</p>	2x1=2	Information
3	<p>Solve the following word problems.</p> <p>(i). There are 35 boys and 25 girls in a class. How many more boys than girls are there in the class?</p> <p>Solution-</p> <p>(ii) A bookseller had 342 books. He sold 185 of them. How many books are left with him?</p> <p>Solution -</p>	3x2=6	Critical thinking

(iii) A transport company has 200 trucks. If 123 trucks are new, how many trucks are old?

Solution -

4

Do as directed.

(i) Find the difference-

$$79 - 23$$

Solution -

(ii) Subtract-

$$\begin{array}{r} \text{a.} \quad \text{T} \quad \text{O} \\ \quad 8 \quad 4 \\ - \quad 6 \quad 4 \\ \hline \\ \hline \end{array}$$

$$\begin{array}{r} \text{b.} \quad \text{T} \quad \text{O} \\ \quad 7 \quad 5 \\ - \quad 3 \quad 8 \\ \hline \\ \hline \end{array}$$

(iii) Subtract 221 from 477.

Solution –

4x1=4

Interdisciplinary

<p><b>5</b></p>	<p>Find the difference and check it using addition.</p> <p>(i). T O                      Check-</p> $\begin{array}{r} 9 \quad 4 \\ - \quad 6 \quad 8 \\ \hline \\ \hline \end{array}$ <p>(ii). T O                      Check-</p> $\begin{array}{r} 6 \quad 5 \\ - \quad 4 \quad 2 \\ \hline \\ \hline \end{array}$	<p><b>2x2=4</b></p>	<p><b>HOTS</b></p>
-----------------	--	---------------------	--------------------



**ARMY PUBLIC SCHOOL GWALIOR**  
**CLASS - II**  
**ACADEMIC SESSION 2024-25**  
**WORKSHEET (SELF –ASSESSMENT)**







Subject: EVS

Assignment No. : 3

Allotment Date: 31 August 2024

S.NO.	QUESTIONS	MARKS 20	NATURE
1.	<b>Tick the correct answer:</b>  1. A tent is made of _____. a) Bricks                      b) Canvas                      c) Straw  2. An _____ draws the map of a house. a) Architect                      b) Mason                      c) Painter  3. Big cities have tall buildings called _____. a) kutcha house                      b) Flat                      c) Skyscrapers  4. _____ floats in water. a) Tent                      b) Houseboat                      c) Igloo	4x1=4	Understanding
2.	<b>Fill in the blanks:</b> a) People who live in Igloo are called _____.  b) A _____ fits water pipes, taps and sanitary fittings.	2x1=2	Analytical skill
3.	<b>State whether the following statements are 'True/False'.</b> a) Kutcha houses are strong and durable. ( ) b) House built in high mountain regions have sloping roofs. ( )	2x1=2	Problem solving
4.	<b>Match the following questions.</b> Column- A                      Column- B a) Kutcha house                      Cement b) Carpenter                      Mud c) Tent                      Temporary house d) Pucca house                      Paints the doors & house	4x0.5=2	Analytical skill
5.	<b>Name the room in which you will find the following:</b>  a) Double bed _____  b) Gas cylinder _____  c) Shower _____  d) Dining table _____	4x1=4	Information
6.	<b>Define the following terms:</b> a) Attic-	2x1=2	Understanding



	<hr/> <hr/> <hr/> <hr/> <hr/> <p>b) Skyscraper-</p> <hr/> <hr/> <hr/> <hr/>		
7.	<p><b>Identify the type of house.</b></p> <div style="display: flex; justify-content: space-around; align-items: flex-start;"> <div style="text-align: center;">  <p>a) _____</p> </div> <div style="text-align: center;">  <p>b) _____</p> </div> </div> <div style="display: flex; justify-content: space-around; align-items: flex-start; margin-top: 20px;"> <div style="text-align: center;">  <p>c) _____</p> </div> <div style="text-align: center;">  <p>d) _____</p> </div> </div>	4x0.5=2	Observation
8.	<p>Why do houses in high mountain regions have sloping roofs ?</p> <hr/> <hr/> <hr/> <hr/>	1x2=2	HOTS Thinking and Writing Skills








**ARMY PUBLIC SCHOOL GWALIOR**  
**CLASS - II**  
**ACADEMIC SESSION 2024-25**  
**WORKSHEET (SELF -ASSESSMENT)**

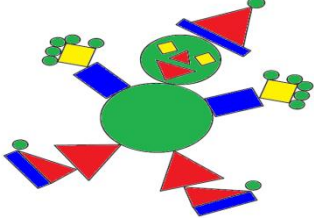


Subject: G.K

Assignment No. : 3

Allotment Date: 31 August 2024

S No.	QUESTIONS	MARKS 10	NATURE
1.	<p>Look at the pictures and name the famous stories.</p> <p>(i) </p> <p>_____</p> <p>(ii) </p> <p>_____</p>	2x1=2	Identification
2.	<p>Tick the correct answer.</p> <p>(i). How many minutes are there in 120 seconds? (a) 2 minutes ( ) (b) 3 minutes ( ) (c) 4 minutes ( )</p> <p>(ii). In which shape, there are no corners? (a) Triangle ( ) (b) Circle ( ) (c) Square ( )</p> <p>(iii). Which of the following is the heaviest?</p> <p>(a)  ( ) (b)  ( ) (c)  ( )</p> <p>(iv). How many triangles are there in this figure?</p>	4x1=4	Critical thinking

	 <p>(a) 8 ( )    (b) 6 ( )    (c) 7 ( )</p>												
3	<p>Match the following-</p> <table border="0" style="width: 100%;"> <tr> <td style="text-align: center;">Column 'A'</td> <td style="text-align: center;">Column 'B'</td> </tr> <tr> <td>(i). Tick</td> <td>(a). Patter</td> </tr> <tr> <td>(ii). Boo</td> <td>(b). Tock</td> </tr> <tr> <td>(iii). See</td> <td>(c). Hoo</td> </tr> <tr> <td>(iv). Pitter</td> <td>(d). Saw</td> </tr> </table>	Column 'A'	Column 'B'	(i). Tick	(a). Patter	(ii). Boo	(b). Tock	(iii). See	(c). Hoo	(iv). Pitter	(d). Saw	4x1=4	Understanding
Column 'A'	Column 'B'												
(i). Tick	(a). Patter												
(ii). Boo	(b). Tock												
(iii). See	(c). Hoo												
(iv). Pitter	(d). Saw												



**ARMY PUBLIC SCHOOL GWALIOR**  
**CLASS - II**  
**ACADEMIC SESSION 2024-25**  
**WORKSHEET (SELF –ASSESSMENT)**



Subject: Computer

Assignment No. : 3

Allotment Date: 31 August 2024

S.NO.	QUESTIONS	MARKS	NATURE
1.	<p><b>Tick the correct answer.</b></p> <p>1. _____ tool is found in the magic tool.</p> <p>a) Paint b) Fill c) Lines</p> <p>2. _____ tool is used to make freehand drawings.</p> <p>a) Eraser b) Paint c) Lines</p> <p>3. _____ tool is used to add text and number.</p> <p>a) Lines b) Text c) Paint</p> <p>4. _____ tool is used to make freehand drawings.</p> <p>a) Eraser b) Paint c) Lines</p>	4x0.5=2	Information
2.	<p><b>Fill in the blanks.</b></p> <p>1 _____ is a free drawing program used to draw different shapes and drawings.</p> <p>2. _____ tool is used to paste pre-drawn images.</p> <p>3. _____ effect can be disabled and enabled by pressing ALT+ S keys from the keyboard.</p> <p>4. _____ help to run all the scenes one after another.</p>	4x0.5=2	Understanding

3.	<p><b>Write 'T' for True or 'F' for False against the statements.</b></p> <p>1. Tux Paint is a paid drawing program</p> <p>2. We can fill color in a closed shape.</p> <p>3. We can apply only one stamp on the canvas</p> <p>4. Magic tool is used to add special effects in the drawing.</p>	4x0.5=2	Interdisciplinary
4.	<p>Answer in one word / sentence.</p> <p>a) What is the free drawing program used to draw different shapes and drawing?          Ans. _____          _____          _____</p> <p>b) Which tool is used to fill color in any closed shape?          Ans. _____          _____          _____</p> <p>c) Which tool is like a sticker?          Ans. _____          _____          _____</p> <p>d) Which tool is used to add special effects ?          Ans. _____          _____          _____</p>	4x1=4	Critical Thinking and Problem Solving



**ARMY PUBLIC SCHOOL GWALIOR**  
**CLASS - II**  
**ACADEMIC SESSION 2024-25**  
**WORKSHEET (SELF –ASSESSMENT)**



Subject: Art and Work Education

Assignment No. : 3

Allotment Date: 31 August 2024

S.NO	QUESTIONS	MARKS	SKILLS
1.	What is the shape of an art?	2	Creativity
2	What are the 3 basic types of shapes?	2	Creativity
3.	List some Geometric Shapes.	2	Creativity
4.	What are the basic solid shapes?	2	Creativity
5.	What are the 'Two Dimensional Shapes'?	2	Creativity



**ARMY PUBLIC SCHOOL GWALIOR**  
**CLASS - II**  
**ACADEMIC SESSION 2024-25**  
**WORKSHEET (SELF –ASSESSMENT)**

Subject: Health and Physical Education

Assignment No. : 3


Allotment Date: 31 August 2024

S.NO.	QUESTIONS	MARKS	NATURE
		<b>10</b>	
TRUE OR FALSE			
1.	Jumping helps to strengthens your lower body. (True/False)	1	Information
2	Running and jumping are outdoor activities. (True/False)	1	Information
3	Running on roads and on floor can be dangerous. (True/False)	1	Information
4	You should always land on your toes while jumping (True/False)	1	Information

MCQ'S

5	<p>Running and jumping focuses on _____.</p> <p>A) Head B) Hands C) Lower Body D) None of the above</p>	1	Understanding
6	<p>Running regularly helps to make you _____.</p> <p>A) Healthy B) Lazy C) Fatty D) None of these</p>	1	Understanding
Answer the following questions.			
7	<p>What do you mean by Jumping?</p> <p>Ans-</p>	2	Information
8	<p>Name the two types of jumps.</p> <p>Ans-</p>	2	Information





**ARMY PUBLIC SCHOOL GWALIOR**  
**CLASS - II**  
**ACADEMIC SESSION 2024-25**  
**WORKSHEET (SELF –ASSESSMENT)**




**Subject: Music**

**Assignment No. : 3**

**Allotment Date: 31 August 2024**

S. NO.	QUESTIONS	MARKS	NATURE
1	How many vibhag are there in Teentaal ? a. 3 b. 4	1	Knowledge
2	Complete the phrase- Sa re ga ma _ _ _ _ _ a. Pa dha ni sa b. Sa ni dha pa	1	Informative
3	What are bolas of Teentaal ? a. dha dhin dhin dha b. dhin dhin na na	1	Knowledge
4	Sasa rere gaga mama _____ a. papa dhadha nini sasa b. sa re ga ma	1	Creativity
5	Tu pyar ka sagar , _____ daya ka tu hai . a. sagar b. Pyar	1	Learning
6	How many matras are there in Teentaal ? a. 18 b. 16	1	Knowledge
7.	Complete the line- Jana gana mana ..... a. Adhinaayak jaya hey b. Gaya hey	1	Learning
8.	Complete the line- Vindhya Himachal ..... a. Yamuna Godavari b. Yamuna Ganga	1	Learning

9	Sa sa sa , re re re ,ga ga ga _____ a. ma ma ma , pa pa pa b. sa sa , re re, ga ga	1	Creativity
10.	Which one is the Aroh ? a. sa re ga ma pa dha ni saa b. saa ni dha pa ma ga re sa	1	Creativity



**ARMY PUBLIC SCHOOL GWALIOR**  
**CLASS - II**  
**ACADEMIC SESSION 2024-25**  
**WORKSHEET (SELF –ASSESSMENT)**



**Subject: Dance**

**Assignment No. : 3**

**Allotment Date: 31 August 2024**

<b>S. NO.</b>	<b>QUESTIONS</b>	<b>MARKS</b>	<b>NATURE</b>
1	How many matras are there in Teentaal? a) 16 b) 20	1	Information
2	How many Taali are there in Teentaal? a) 6 b) 3	1	Critical Thinking
3	Hand work in Kathak is known as _____. a) Tatkaar b) Hastak	1	Understanding
4	How many Gharanas are there in Kathak? a) 4 b) 7	1	Information

5	<p>What is the another name of Teentaal?</p> <p>a) Tritaal</p> <p>b) Chautaal</p>	1	Critical thinking
6	<p>Who is the father of kathak?</p> <p>a) Pt Birju Maharaj</p> <p>b) Pt Jayshankar Maharaj</p>	1	Information
7	<p>Can both girls and boys do Kathak?</p> <p>a) Yes</p> <p>b) No</p>	1	Information
8	<p>Tabla belongs from _____ classical dance.</p> <p>a) Kathak</p> <p>b) Mohiniattam</p>	1	Critical thinking
9	<p>Which is the basic Taal of Kathak?</p> <p>a) Teentaal</p> <p>b) Jhaptaal</p>	1	Understanding

<b>10</b>	How many classical dance forms are there in India ?  a) 8  b) 9	<b>1</b>	Understanding
-----------	---	----------	---------------