



ARMY PUBLIC SCHOOL GWALIOR
CLASS - VII
ACADEMIC SESSION 2024-25
REVISION WORKSHEET (SELF –ASSESSMENT)

Subject: English

Assignment No. : 4

Allotment Date: 12 September 2024

S. No.	QUESTIONS	MARKS	NATURE
1	<p>1. Read the passage carefully.</p> <p>The solar system is a collection of eight planets and other celestial bodies that orbit the Sun. The Sun is the centre of the solar system and provides light and heat, making life possible on Earth. The eight planets, in order from the Sun, are Mercury, Venus, Earth, Mars, Jupiter, Saturn, Uranus, and Neptune. Each planet has unique characteristics. Mercury, the closest planet to the Sun, is the smallest and has no atmosphere. Venus, often called Earth's twin, is similar in size to Earth but has a very thick atmosphere that traps heat. Earth, the third planet, is the only known planet to support life, thanks to its perfect conditions for living organisms. Mars, known as the Red Planet, has the largest volcano in the solar system called Olympus Mons.</p> <p>Jupiter, the largest planet, is a gas giant and has a huge storm called the Great Red Spot, which has been raging for centuries. Saturn is famous for its beautiful rings made of ice and rock particles. Uranus and Neptune are also gas giants, with Uranus being unique because it rotates on its side, and Neptune being known for its strong winds.</p> <p>Apart from the planets, the solar system contains dwarf planets like Pluto, moons that orbit planets, and other smaller objects like comets and asteroids</p> <p>Q-Choose the most appropriate option for answer the following questions: -</p> <p>1. Which planet is closest to the Sun? a) Earth b) Mars c) Mercury d) Venus</p> <p>2. What is the main reason Earth can support life? a) It is the closest planet to the Sun b) It has the largest volcano c) It has perfect conditions for living organisms</p>	5 Marks	Informative and understanding

	<p>d) It is similar to Venus</p> <p>3. What is the Great Red Spot on Jupiter?</p> <p>a) A mountain b) A volcano c) A storm d) A moon</p> <p>4. Which planet is famous for its rings?</p> <p>a) Uranus b) Saturn c) Neptune d) Mars</p> <p>5. What is unique about Uranus compared to other planets</p> <p>a) It has the largest volcano b) It rotates on its side c) It has a thick atmosphere d) It is closest to the Sun</p>		
2	<p>. Read the given passage carefully and answer the questions that follow</p> <p>The Lost Puppy*</p> <p>One rainy afternoon, Emma was walking home from school when she heard a faint whimper coming from the bushes. Curious, she stepped closer and found a small, shivering puppy huddled under the leaves. The puppy looked lost and scared; its fur soaked from the rain. Emma quickly scooped the puppy up in her arms, wrapping it in her jacket to keep it warm.</p> <p>She looked around, hoping to see a sign or a person looking for the puppy, but the street was empty. Not knowing what else to do, she decided to take the puppy home and ask her parents for help. As she walked, the puppy snuggled into her jacket, finally feeling safe.</p> <p>1. What did Emma hear coming from the bushes?</p> <p>a) A bark b) A whimper c) A shout d) A meow</p> <p>2. What was the weather like when Emma found the puppy?</p> <p>a) Sunny b) Snowy c) Rainy d) Windy</p> <p>3. How did Emma help the puppy stay warm?</p> <p>4. What did Emma plan to do after finding the puppy?</p>	4 Marks	Understanding
3	<p>Decide whether the underlined verbs are helping verb or linking verbs.</p> <p>i)Anu and Aman are the students who got price</p>	3 Marks	HOT

	<p>in competition.</p> <p>ii)They are listening music.</p> <p>lii)He can go for a walk.</p>		
4	<p>Do as directed.</p> <p>1. She is girl who has topped the class. (Use a/an/the)</p> <p>2. Tony isto me. (Use correct degree of adjective)</p> <p>3.The boys tells a lie. (Change into interrogative)</p>	3 Marks	Interdisciplinary
5	<p>Read the given extract and answer the following questions.</p> <p>My brother tells lies to keep the shed for his den. There isn't anyone staring or making strange noises. And the spider has been gone from his web Since I don't know when. I'll go into that shed one day soon, But not just yet."</p> <p>i)Why does the speakers brother lie to him? (a) He wishes to mislead the speaker (b) He wishes to solely use the shed (c) He wishes to sell away the shed (d) He is afraid of the ghost</p> <p>ii) The poem 'The Shed has been written by _____. (a) D.J. Enright (b) Michael Rosen (c) Mildred Bowers Armstrong (d) Frank Flynn</p> <p>iii). The poet's brother tell him that if he ever enters the shed, the ghost would _____. (a) runaway (b) chop off his head (c) eat him alive (d) dance with him</p>	3 Marks	Analytical Skill
6	Write a letter to your friend inviting him during vacation.	5marks	Communication Skill
7	<p>Answer the following questions in about 20-30 words.</p> <p>a) What strange things did Gopal do?</p> <p>b) Why did the bearded man plan to kill the king and how?.</p> <p>c) What are the functions of feelers or antennae for an ant?</p>	2×2 = 4Marks	Evaluation
8	<p>If a person takes challenges, he puts his effort to win it.</p> <p>How?</p>	3 Marks	Critical Thinking



ARMY PUBLIC SCHOOL GWALIOR
CLASS - VII
ACADEMIC SESSION 2024-25
REVISION WORKSHEET (SELF –ASSESSMENT)


Subject: Hindi

Assignment No. : 4

Allotment Date: 12 September 2024

क्रम संख्या	प्रश्न	अंक	प्रकृति
1	नदियों को माँ मानने की परंपरा हमारे यहाँ काफी पुरानी है। लेकिन लेखक नागार्जुन उन्हें और किन रूपों में देखते हैं?	5	INFORMATIVE
2	पहली कठपुतली की बात दूसरी कठपुतलियों को क्यों अच्छी लगी?	4	UNDERSTANDING
3	निम्न वाक्यांशों के लिए एक शब्द लिखिए? 1. जो करने योग्य न हो 2. कम जानने वाला 3. जिसकी सीमा न हो 4. दोपहर के बाद का समय 5. जो बात पहले कही न गई हो	5	HOT
4-	निम्नलिखित शब्दों के दो-दो पर्यायवाची शब्द लिखिए। 1. अंधकार 2. गणेश 3. चतुर 4. तलवार 5. किरण	5	INTERDISCIPLINARY
5	पोस्ट ऑफिस में दिव्यांश और बाबू के बीच की बातचीत को संवाद के रूप में लिखो।	5	CRITICAL THINKING AND PROBLEM SOLVING

6	<p>निम्नलिखित प्रश्नों के उत्तर दीजिये?</p> <ol style="list-style-type: none">1. क्या वजह थी कि सभी पात्र मिलकर भी लडकी को उसके घर नहीं पहुँचा पा रहे थे?2. दुर्योधन भीम से वैर भाव क्यों रखता था?3. द्रौपदी स्वयंवर में कौन- कौन मुख्य प्रतिभागी थे? लिखो।4. किसने विदुर को राजा धृतराष्ट्र का प्रधानमंत्री नियुक्त किया था और क्यों?	4x4=16	EVALUATION
---	---	--------	-------------------

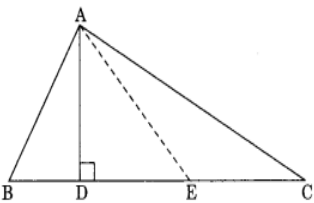


ARMY PUBLIC SCHOOL GWALIOR
CLASS - VII
ACADEMIC SESSION 2024-25
REVISION WORKSHEET (SELF -ASSESSMENT)

Subject: Mathematics

Assignment No. : 4

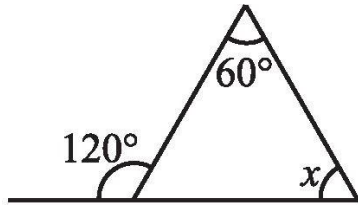
Allotment Date: 12 September 2024

S. No.	QUESTIONS
1	<p>Choose the correct alternatives in each of the following:</p> <p>(i) Sum of -30 and -12 is (a) 42 (b) -42 (c) 18 (d) -18</p> <p>(ii) The number 3 less than -2 is (a) 1 (b) -1 (c) 5 (d) -5</p> <p>(iii) Additive inverse of $-\frac{7}{9}$ is _____. (a) $-\frac{7}{9}$ (b) $-\frac{9}{7}$ (c) $\frac{7}{9}$ (d) $\frac{9}{7}$</p> <p>(iv) The median of the first 11 prime number is _____ (a) 7 (b) 9 (c) 11 (d) 13</p> <p>(v) The mean of the first five odd natural number is _____ (a) 2 (b) 3 (c) 5 (d) 4</p> <p>(vi) Which is a solution of the equation $7x + 5 = 19$ (a) $x = 2$ (b) $x = 3$ (c) $x = 5$ (d) $x = 4$</p> <p>(vii) Two angles forming a linear pair are _____ (a) equal (b) supplementary (c) unequal (d) com (a) equal (b) unequal (c) supplementary (d) complementary</p> <p>(viii) Find the angle which is equal to its supplement. (a) 60° (b) 90° (c) 180° (d) 4</p> <p>(ix) How many altitudes a triangle can have? (a) 1 (b) 2 (c) 3 (d) 4</p> <p>(x) The sum of the lengths of any two sides of a _____ triangle is _____ the third side of the triangle. (a) less than (b) greater than (c) equals to (d) none of these</p>
2	<p>II Constructive response type - I questions:</p> <p>(i) In the given figure, name the median of triangle where E is the midpoint of BC.</p> 

(ii) Solve $12p - 5 = 25$
 (iii) Find the measure of an angle which is 24° more than its complement.

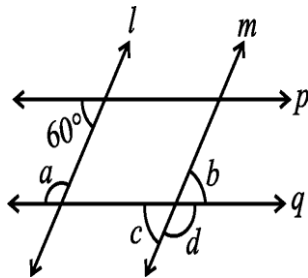
3

(i) The value of x in the given figure is



(ii) What will be the measure of the supplement of 54° and 125°

(iii) Lines $l \parallel m, p \parallel q$; Find a, b, c, d



(iv) The two interior opposite angles of an exterior angle of a triangle are 60° and 80° . Find the measure of the exterior angle.

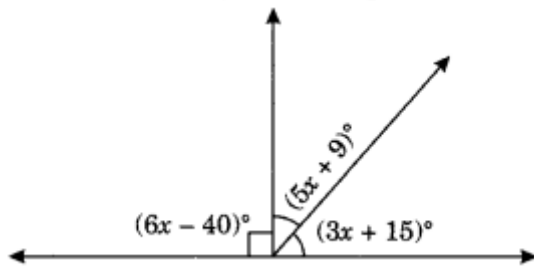
4

IV Long Answer type questions:

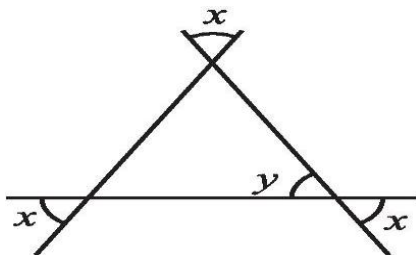
(i) A tree is broken at a height of 5 m from the ground and its top touches the ground at a distance of

12 m from the base of the tree . Find the original height of the tree.

(ii) Find the value of x



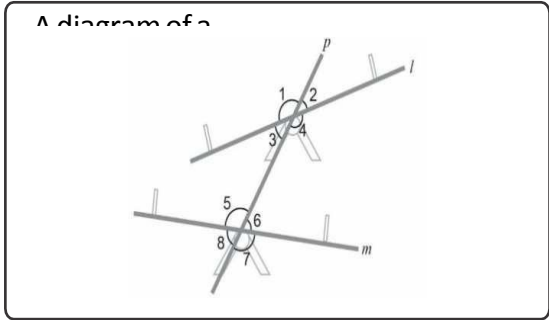
(ii) Find the value of x and Y



(iii) The lengths of two sides of a triangle are 12 cm and 15 cm. Between what two measures should the length of the third side fall?

5

Case Study Based Questions:



- (i) A diagram of see saw is given below
- (i) State all the pairs of vertically opposite angles in the given figure
- (ii) Which of the following is a pair of alternate exterior angles?
- (iii) If measure of $\angle 5$ is 70° then what will be the measure of $\angle 3$

(2) Multiple gaming tournaments can be played online. In these games, players can compete with players from any part of the world.

In a tournament, 200 points are awarded for a win and 20 points are deducted for a loss.

(i) Chetan participated in the tournament. He won two more matches than the number of matches he lost. He scored 1120 points.

How many matches did he play?

(ii) Does the solution of an equation depend on the method used to solve it? Justify your answer

(iii) Diksha played 10 matches in the tournament. The number of matches won was equal to the number of matches lost by her. How many points did she score?



ARMY PUBLIC SCHOOL GWALIOR
CLASS - VII
ACADEMIC SESSION 2024-25
REVISION WORKSHEET (SELF –ASSESSMENT)



Subject: Science

Assignment No. : 4

Allotment Date: 12 September 2024

S. NO.	QUESTIONS	MARKS	NATURE
Q1	<p>Multiple choice questions:</p> <p>1- In vacuum, heat can be transferred through</p> <p>a) Conduction and convection</p> <p>b) Conduction only</p> <p>(c) Radiation only</p> <p>(d) Convection only</p> <p>2- The base present in the milk of magnesia is</p> <p>(a) Calcium hydroxide</p> <p>(b) Magnesium hydroxide</p> <p>(c) Sodium hydroxide</p> <p>(d) Potassium hydroxide</p> <p>3- Amarbel is an example of</p> <p>(a) Autotrophs</p> <p>(b) Saprotrophs</p> <p>(c) Host</p> <p>(d) Parasite</p> <p>4- The SI unit of temperature is</p> <p>(a) Kelvin</p> <p>(b) Celsius</p> <p>(c) Fahrenheit</p> <p>(d) Joule</p>	1x4=4	Information
Q2	<p>Fill in the blanks:</p> <p>1. Hydrochloric acid is secreted in _____.</p> <p>2. The chemical name of Vitamin C is _____.</p> <p>3. Heat is transferred in liquids by _____.</p> <p>4. In cockroaches, air enters the body through _____.</p> <p>5. Large crystals of pure substance are obtained by _____.</p>	1x5=5	Observation

Q3	<p>Match the following:</p> <table style="width: 100%; border: none;"> <tr> <td style="width: 50%;">1. Antacid</td> <td style="width: 50%;">Pseudopodia</td> </tr> <tr> <td>2. Amoeba</td> <td>Mild base</td> </tr> <tr> <td>3. Melting of candle</td> <td>Physical change</td> </tr> <tr> <td>4. Baking Soda</td> <td>Chest Cavity</td> </tr> <tr> <td>5. Diaphragm</td> <td>NaHCO₃</td> </tr> </table>	1. Antacid	Pseudopodia	2. Amoeba	Mild base	3. Melting of candle	Physical change	4. Baking Soda	Chest Cavity	5. Diaphragm	NaHCO ₃	1X5=5	Knowledge based
1. Antacid	Pseudopodia												
2. Amoeba	Mild base												
3. Melting of candle	Physical change												
4. Baking Soda	Chest Cavity												
5. Diaphragm	NaHCO ₃												
Q4	<p>Answer the following questions in one or two sentences:</p> <p>i. Why do we get muscle cramps after heavy exercise?</p> <p>ii. Complete the reaction:</p> <p style="text-align: center;">CuSO₄ + Fe → _____ + _____</p> <p>iii. Explain with a diagram the feeding system in Amoeba.</p>	2x3=6	Interdisciplinary										
Q5	<p>Answer the following questions in 20-30 words:</p> <p>i. What happens when magnesium ribbon is burnt in the presence of air?</p> <p>ii. Name the breathing organs in the following organisms and mention their roles.</p> <p style="margin-left: 20px;">a. frog b. fish c. earthworm</p>	3x2=6	Evaluation										
Q6	<p>Answer the following questions in 30-40 words:</p> <p>i. State two similarities and three differences between the clinical thermometer and laboratory thermometer.</p> <p>ii. Explain the process of digestion in grass-eating animals.</p>	5X2=10	Analytical Skills										
Q7.	<p>Case-based question : Read the given passage carefully and answer the questions given below.</p> <p>The stomach is a thick-walled bag. Its shape is like a flattened J and it is the widest part of the alimentary canal. It receives food from the food pipe at one end and opens into the small intestine at the other. The inner lining of the stomach secretes mucous, hydrochloric acid, and digestive juices. The mucous protects the lining of the stomach.</p>	1X4=4	Critical Thinking and Problem Solving										

The acid kills many bacteria that enter along with the food makes the medium in the stomach acidic and helps the digestive juices to act. The digestive juices break down the proteins into simpler substances.

1. The stomach is _____ bag
 - (a) Thin-walled
 - (b) Thick-walled
 - (c) Round
 - (d) J shaped

2. The _____ protects the lining of the stomach.
 - (a) Fluid
 - (b) Membrane
 - (c) Mucous
 - (d) None of the above

3. What is the function of acid in the stomach?

4. What does the inner lining of the stomach secrete?



ARMY PUBLIC SCHOOL GWALIOR
CLASS - VII
ACADEMIC SESSION 2024-25
REVISION WORKSHEET (SELF –ASSESSMENT)

Subject: Social Science

Assignment No. : 4

Allotment Date: 12 September 2024

SECTION	QUESTIONS	MARKS	NATURE
A	<p>Fill in the blanks and rewrite the sentences.</p> <p>i.)Lava is the molten magma from of the earth's surface.</p> <p>ii.)..... is one of the healthiest country in North America.</p> <p>iii.) The resources needed to run public health services are obtained from</p> <p>iv.)..... is a sermon during Friday prayer in the Mosque.</p> <p>v.) Leader of the Namaz is</p>	5x1=5	Objective Type Question
B	<p>i. In whose reign did the sultanate reach its farthest extent?</p> <p>ii. Write two Task related to housework.</p> <p>iii. What is Primary Health centre?</p>	3x2=6	Very Short Question
C	<p>i. Why do society devalue the woman's work at home ?</p> <p>ii. What was the role of the Zamindar in mughal administration?</p> <p>iii. How are flood plains formed?</p>	3x3=9	Short Question
D	<p>i. What is Ozone layer ? How Ozone is an important layer of atmosphere Or</p> <p>ii.) What measures that can be adopted for minimising the damage from an earthquake? Who were samanta's ? What was their duties? Or</p> <p>Why was it important for the Mughals to recruit Mansabdar from diverse background and not just Turanis and Iranis?</p> <p>iii.) Explain with the diagram the interior of the earth.</p>	3x5=15	Long Question
E	<p>Read the extract carefully and answer the questions</p> <p>Prashastis contain details that may not be literally true. But they tell us how rulers wanted to depict themselves – as valiant, victorious warriors, for example. These</p>	1x3=3	Case Based Question

	<p>were composed by learned Brahmanas, who occasionally helped in the administration. Many rulers described their achievements in prashastis.</p> <ol style="list-style-type: none"> 1.) Are the details in the Prashastis literally true? 2.) How did rulers want to depict themselves? 3.) Who occasionally helped rulers in administration? 		
F	<p>On the political map of India, mark and locate the following:</p> <ol style="list-style-type: none"> i. Goa ii. Area associated to Rashtrakutas dynasty iii. Area associated to Pala dynasty iv. Gujarat 	4x.5=2	Map Based Question



ARMY PUBLIC SCHOOL GWALIOR
CLASS - VII
ACADEMIC SESSION 2024-25
REVISION WORKSHEET (SELF –ASSESSMENT)

Subject: Sanskrit

Assignment No. : 4

Allotment Date: 12 September 2024

S. NO.	QUESTIONS	Marks	NATURE
1	शब्दानाम् अर्थान् लिखत- अवसीदति _____ अनृतम् _____ पृष्ठतः _____ तूष्णीम् _____ अराः _____	1x5=5	Information
2	विभाक्तिम् वचनं च लिखत- सभायाम् - _____ सात्विकतायाः _____ शिवाय _____ मित्रेण _____ शिक्षायै _____	1x5=5	Analytical Skill
3	सर्वनाम- शब्दानाम् अर्थान् लिखत- वयम् _____ अहम् _____ आवाम् _____ युवाम् _____ यूयम् _____	1x5=5	Memory skill
4	संख्याविशेषणपदानि प्रयुज्य सार्थकरचयत वाक्यानि- चत्वारिंशत्- पञ्च- त्रीणि - दश- द्वे -	1x5=5	Thinking skill

5	<p>समुचितमेलनं कृत्वा लिखत-</p> <table border="0"> <tr> <td style="text-align: center;">क</td> <td style="text-align: center;">ख</td> </tr> <tr> <td>केशरवर्णः</td> <td>प्रगतेः न्यायस्य च प्रवर्तकम्।</td> </tr> <tr> <td>हरितवर्णः</td> <td>22 जुलाई 1947 तमे वर्षे जातम्।</td> </tr> <tr> <td>अशोकचक्रम्</td> <td>शौर्यस्य त्यागस्य च सूचकः।</td> </tr> <tr> <td>त्रिवर्णः ध्वजः</td> <td>सुषमायाः उर्वरतायाः च सूचकः।</td> </tr> <tr> <td>त्रिवर्णध्वजस्य स्वीकरणं</td> <td>स्वाधीनतायाः राष्ट्रगौरवस्य च प्रतीकः।</td> </tr> </table>	क	ख	केशरवर्णः	प्रगतेः न्यायस्य च प्रवर्तकम्।	हरितवर्णः	22 जुलाई 1947 तमे वर्षे जातम्।	अशोकचक्रम्	शौर्यस्य त्यागस्य च सूचकः।	त्रिवर्णः ध्वजः	सुषमायाः उर्वरतायाः च सूचकः।	त्रिवर्णध्वजस्य स्वीकरणं	स्वाधीनतायाः राष्ट्रगौरवस्य च प्रतीकः।	1x5=5	Analytical Skill
क	ख														
केशरवर्णः	प्रगतेः न्यायस्य च प्रवर्तकम्।														
हरितवर्णः	22 जुलाई 1947 तमे वर्षे जातम्।														
अशोकचक्रम्	शौर्यस्य त्यागस्य च सूचकः।														
त्रिवर्णः ध्वजः	सुषमायाः उर्वरतायाः च सूचकः।														
त्रिवर्णध्वजस्य स्वीकरणं	स्वाधीनतायाः राष्ट्रगौरवस्य च प्रतीकः।														
6	<p>मञ्जूषातः समानार्थकं पदं चित्वा लिखत-</p> <p>शोचनीया, अशिक्षयत्, धनसंग्रहः-, पश्चात्, निःसहायाः</p> <p>)i) निराश्रयाः=)ii) चिन्तनीया=)iii) अर्थसञ्चयः=)iv) अध्यापयत्=)v) अनन्तरम्=</p>	1x5	Critical Thinking												



ARMY PUBLIC SCHOOL GWALIOR
CLASS - VII
ACADEMIC SESSION 2024-25
REVISION WORKSHEET (SELF –ASSESSMENT)

Subject: Art and Work Education

Assignment No. : 4

Allotment Date: 12 September 2024

S. No.	QUESTIONS	MARKS	NATURE
1	What is Animal study drawing?	2	Informative
2	How do you draw Animal form?	2	Informative
3	What is Mandala art for?	2	Understanding
4	What is Sanganer famous for?	2	Informative
5	What is the history of Sanganer?	2	Understanding




ARMY PUBLIC SCHOOL GWALIOR
CLASS - VII
ACADEMIC SESSION 2024-25
REVISION WORKSHEET (SELF –ASSESSMENT)

Subject: Music (Vocal, Dance and Instrumental)
Allotment Date: 12 September 2024

Assignment No:- 4

S. NO.	QUESTIONS	MARKS	NATURE
1	Bharat humko jaan se ? a)pyara hai b)nyara hai	1	Informative
2	How many strings are there in guitar ? a) 6 b) 5	1	Informative
3	What do you mean by patriotism? a) Devotion towards Religion b) Devotion towards Country	1	Informative
4	Shri krishan govind murari a) Hare b)Hey Nath	1	Informative
5	Pitu swami sakha humare a) Nath b) Math	1	Informative
6.	How many types of guitar are there? a) 5 b) 3	1	Informative
7.	Ek dantaya , gauri tanya yadimahi a) Vakratundaya b) gajeshanaya	1	Informative
8.	What do you mean by chord? a) A single note	1	Informative

	b) Group of 3 notes		
9,	How many notes are there in an octave? a) 8 b) 7	1	Informative
10.	O palan hare ,..... aur nyare a) Nirgun b) Guni	1	Informative



ARMY PUBLIC SCHOOL GWALIOR
CLASS - VII
ACADEMIC SESSION 2024-25
REVISION WORKSHEET (SELF –ASSESSMENT)



Subject: Health and Physical Education
Allotment Date: 12 September 2024

Assignment No. : 4

S.N.	QUESTIONS	MARKS	SKILLS/COMPETENCIES
1	Shorts answer question 1.Where did football started? a) China b) Spain c) Argentina d) France	1	INFORMATION
2	2. Cricket is called as a? a)Wonderful game b) Beautiful game c) Gentlemen’s game d) World game	1	INFORMATION
3	3.Who is the father of Basketball ? a)James bond b) Carl lewis	1	INFORMATION

	<p>c) Cooper hoops</p> <p>d) James naismith</p>		
4	<p>4. Which team won the Euro cup 2024 of football?</p> <p>a) Germany</p> <p>b) England</p> <p>c) Spain</p> <p>d) Portugal</p>	1	INFORMATION
5	<p>FILL IN THE BLANKS: -</p> <p>1. Sergio Ramos is national player of _____?-(France,Spain)</p>	1	INFORMATION
6	<p>2. Basketball originated in _____? (USA, Serbia)</p>	1	INTERDISCIPLINARY

7	3. The Cricket pitch is _____ yards in length? (24,22)	1	INTERDISCIPLINARY
8	8.Rodrigo won the Player of the tournament award for Euro cup 2024? (True/False)	1	INTERDISCIPLINARY
9	9.Virat kohli won the Player of the tournament award for T20 world cup 2024? (True/ False)	1	UNDERSTANDING
10	10.Serbia won the gold medal in basketball olympics? (True/False)	1	UNDERSTANDING



ARMY PUBLIC SCHOOL GWALIOR
CLASS - VII
ACADEMIC SESSION 2024-25
REVISION WORKSHEET (SELF –ASSESSMENT)

Subject: Computer

Assignment No. : 4

Allotment Date: 12 September 2024

S.NO.	QUESTIONS	MARKS	NATURE
1	Choose and write the correct option (MCQ):-	0.5x5=2.5	Information
i)	Virus adds virus code to the regular programming Code within the program files. a) File Infector b) Boot Sector c) Worm		
ii)	_____program detects the changes caused by a virus in The computer. a) Virus detector b) Antivirus c) E-mail		
iii)	A frame rate of is the default setting for new Animate document. a) 12 fps b) 30 fps c) 24 fps		
iv)	In Animate, Shape tween can only be applied to _____. a) Shapes b) Images c) Text		
v)	Photoshop is developed by _____. a) Microsoft b) Google c) Adobe		

2	<p>Fill in the blanks-</p> <p>a) A virus enter a computer through an attachment with an_____.</p> <p>b) A bitmap graphic is composed of many tiny parts called _____.</p> <p>c) A_____ is a known specific pattern of virus code.</p> <p>d) We can use the _____ tween to animate between two key frames.</p> <p>e) _____tool is used to select the group of similarly coloured pixels.</p>	0.5x 5=2.5	Understanding
3.	<p>Write 'T' for True and 'F' for False statements.</p> <p>a) We can create many instances of the same symbol.</p> <p>b) The sleeper virus is known to steal your personal and financial information.</p> <p>c) Boot sector virus is a harmless virus program.</p>	0.5x3=1.5	Understanding
4.	<p>Answer the following questions:-</p> <p>a) What is ransom ware?</p> <p>b) Why do we antivirus program?</p> <p>c) What is tween? Write its type.</p> <p>d) What is a computer virus?</p> <p>e) What is boot sector virus?</p> <p>f) What do you understand by symbols and instances?</p> <p>g) What is the function of Photoshop toolbox?</p>	0.5 x 7=3.5	Evaluation



ARMY PUBLIC SCHOOL GWALIOR
CLASS - VII
ACADEMIC SESSION 2024-25
REVISION WORKSHEET (SELF –ASSESSMENT)

Subject: Karate

Assignment No. : 4

Allotment Date: 12 September 2024

S. NO	QUESTIONS	Marks 10
1	What is the meaning of Kumite? a) Fight b) Leg Fight c) Pre – decided techniques of offense and defense d) None of these	1
2	Which Japanese word is used at the time of wish in Kata? a) Os b) Ous c) Osu d) Oos	1
3	What is the Japanese name of middle block? a) Jodan age uke b) Chudan sota uke c) Gaidan barai uke d) None of these	1
4	Which stance is used for attention position? a) Zenkotsudachi b) Heikodachi c) Soto heikodachi d) Sanchin dachi	1
5	Which position is used at kicking time? a) Hidari heikodachi b) Migi heikodachi c) Hidari and migi heikodachi d) None of these	1
6	How many basic punches? a) 10 b) 20 c) 3 d) 4	1
7	In heikodachi dachi legs should be a) Parallel to your shoulder b) Inside the shoulder c) Outside the shoulder d) None of these	1
8	How many basic blocks? a) 1 b) 2 c) 3 d) 4	1
9	Which punch is used for face attack? a) Jodan tsuki	1

	<ul style="list-style-type: none">b) Chudan tsukic) Gaidan tsukid) Nidan tsuki	
10	What is the starting position of kicking ? <ul style="list-style-type: none">a) Heikondachib) heikadachic) Zenkotsudachid) None of these	1