



ARMY PUBLIC SCHOOL GWALIOR
CLASS - VI
ACADEMIC SESSION 2024-25
REVISION WORKSHEET (SELF –ASSESSMENT)

Subject: English

Assignment No. : 4

Allotment Date: 12 September 2024

S. No.	QUESTIONS	MARKS	NATURE
1	Change the tense of the following sentences as directed: 1. He went to the theatre. (present continuous) 2. He bakes a cake. (Past continuous) 3. Manu brought a laptop. (Present perfect) 4. They have done well. (Past perfect)	4 Marks	Informative and understanding
2	Do as directed: 1. No news_____ (is/are)good news.(fill a verb in agreement with its subject) 2. Give me a new pen. (circle the adjective) 3. A pentagon has_____ sides. (fill adjective of number)	3 Marks	Understanding
3	How did different company affect the character and behaviour of the two birds	4 Marks	HOT
4	Fill the errors and replace the wrong word: 1. Lead is a heaviest metal. 2. Nitin is the good player in our team. 3. She is a very sweetest girl.	3 Marks	Interdisciplinary
5	Fill in the blank and rewrite the sentences with the correct form of verb given in the brackets. a) Has she ever_____ (drive) a car before. b) You have_____(hurt) my feelings. c) By the time the teacher____(arrive), the students had left the class.	3 Marks	Analytical Skill
6	What was the result at the end of the poem(The Quarrel)?	4 Marks	Critical Thinking
7	Answer the following questions in about 20-30 words. a) How did the weather change when Saraswati and Rupvati sang Raga Megh? b) Why did the king visit the shepherd one day? c) Why did waterfall give Taro sake and others water?	3×2 = 6 Marks	Evaluation
8	What does Kalpana Chawla say about pursuing a dream? Do you agree with her that success is possible?	3 Marks	Communication Skills



ARMY PUBLIC SCHOOL GWALIOR
CLASS - VI
ACADEMIC SESSION 2024-25
REVISION WORKSHEET (SELF –ASSESSMENT)

Subject: Hindi


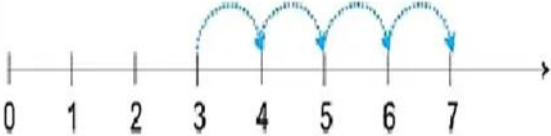
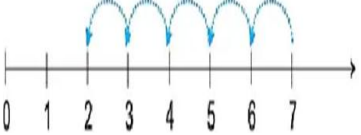
Assignment No. : 4

Allotment Date: 12 September 2024

क्रम संख्या	प्रश्न	अंक	प्रकृति
1.	चौद से थोड़ी- सी गप्पें कविता में कवि ने चौद से गप्पें किस दिन लगाई होंगी विस्तार से बताइए।	5	INFORMATIVE
2.	साथी हाथ बढाना इस गीत को तुम किस माहौल में गुनगुना सकते हो	4	UNDERSTANDING
3.	निम्न वाक्यांशों के लिए एक शब्द लिखिए 1. कम भोजन करने वाला 2. जो पढा-लिखा न हो 3. ईश्वर में विश्वास करने वाला 4. वर्ष में एक बार होने वाला 5. परिश्रम करने वाला	5	HOT

<p>4.</p>	<p>निम्नलिखित शब्दों के दो-दो पर्यायवाची शब्द लिखिए।</p> <p>1^प बादल</p> <p>.....</p> <p>2^प चन्द्रमा</p> <p>3^प संसार</p> <p>4^प पुष्प</p> <p>5^प महादेव</p>	<p>5</p>	<p>INTERDISCIPLINARY</p>
<p>5.</p>	<p>मान लो कि तुम मोहन की तबियत पूछने जाते होए तुम अपने और मोहन के बीच की बातचीत को संवाद के रूप में लिखो।</p>	<p>3</p>	<p>CRITICAL THINKING AND PROBLEM SOLVING</p>
<p>6</p>	<p>निम्नलिखित प्रश्नों के उत्तर दीजिये</p> <p>1^प केशव और श्यामा ने चिडिया के अंडों की रक्षा की या नादानी</p> <p>2^प शूर्पणखा कौन थी</p> <p>3^प षागर ने रास्ता छोडाए पर्वत ने सीस झुकाया साहिर ने ऐसा क्यों कहा है लिखो।</p> <p>4^प नागराजन के अलबम के हिट हो जाने के बाद राजप्पा के मन की क्या दशा हुई</p>	<p>4x2=8</p>	<p>EVALUATION</p>

13	What part of a revolution have you turned through if you stand facing (a) east and turn clockwise to face north? (b) south and turn clockwise to face east? (c) west and turn clockwise to face east?	3	Problem Solving
14	Draw a polygon ABCD and label suitably in each of the following cases: (a) Point P lies on AB (b) Point Q lies interior to the polygon. (c) Point Q lies exterior to the polygon.	3	Critical Thinking

15	<p>In an activity period teacher said to students Draw a line. Mark a point on it. Label it 0. On this line, mark a point to the right of 1 and at unit distance from 1 and label it 2. In this way go on labelling points at unit distances as 3, 4, 5... on the line. You can go to any whole number on the right in this manner. This is a number line for the whole numbers.</p>  <p>Answer the following questions</p> <p>(i) What does the below picture indicate? Show the calculation part.</p>  <p>(ii) What does the below picture indicate? Show the calculation part.</p>  <p>(iii) Find 2×6 using the number line.</p>	4	Case Study
16	Draw and name the type of Triangle (a) $\triangle PQR$ such that $PQ = QR = PR = 5$ cm. (b) $\triangle DEF$ with $m \angle D = 90^\circ$ (c) $\triangle XYZ$ with $m \angle Y = 90^\circ$ and $XY = YZ$	5	Problem Solving



ARMY PUBLIC SCHOOL GWALIOR
CLASS - VI
ACADEMIC SESSION 2024-25
REVISION WORKSHEET (SELF –ASSESSMENT)

Subject: Science

Assignment No. : 4

Allotment Date: 12 September 2024

S. No.	QUESTION S	MARKS	NATURE										
1.	Multiple choice questions:- (i) Fixed joints are found in - (a) Lower jaw (b) Skull (c) Hands (ii) The male parts of a flower is called (a) Pistil (b) Carpel (c) Stamen	1x2=2	Informative										
2.	Fill in the blanks:- (i) Small stones can be removed from rice by ----- . (ii) Plants with fibrous roots have _____ venation. (iii) _____ is the disease caused by Iron. (iv) Sand is a material which is ----- in water.	1x4=4	Understanding										
3.	Match the following :- <table style="width: 100%; border: none;"><tr><td style="text-align: center;">A</td><td style="text-align: center;">B</td></tr><tr><td>(i) Cotton</td><td>(a) Opaque</td></tr><tr><td>(ii) Iodine solution</td><td>(b) Protective food</td></tr><tr><td>(iii) Mirror</td><td>(c) Soft to compress</td></tr><tr><td>(iv) Vitamins and minerals</td><td>(d) Starch</td></tr></table>	A	B	(i) Cotton	(a) Opaque	(ii) Iodine solution	(b) Protective food	(iii) Mirror	(c) Soft to compress	(iv) Vitamins and minerals	(d) Starch	0.5x4=2	Analytical skill
A	B												
(i) Cotton	(a) Opaque												
(ii) Iodine solution	(b) Protective food												
(iii) Mirror	(c) Soft to compress												
(iv) Vitamins and minerals	(d) Starch												
4.	(i) What do you mean by condensation? (ii) How do muscles work in pair? (iii) Why water is a universal solvent? (iv) What are unsaturated solutions? Give one example.	2x4=8	HOT										
5.	(i) Define nutrients. (ii) How does a stem function as a two way street?	3x2=6	Interdisciplinary										
6.	(i) Draw a well labelled diagram of a flower. (ii) What are shoulder bones? (iii) Explain movement	2x3=6	Analytical skill Critical thinking & Problem Solving Evaluation										

7.	<p>Read the following passage and answer the following:-</p> <p>All the bones in our body form a frame work to give a shape our body. This framework is called the skeleton. We can have some idea about the shape and number of bones in some parts of our body by feeling them. One way we could know this shape better would be to look at X-Ray images of the human body. Sometimes when we are hurt, or have an accident, doctors use these X-ray images to find out about any possible injuries that might have happened to the bones. The X-Rays show the shapes of the bones in our bodies. Our wrist is flexible because it is made up of several small bones called carples.</p>	1x2=2	Communication skills
	<p>(i) We can have idea about the shape and number of bones in our body by the help of</p> <p>(a) X-Rays (b) Y-Rays (c) UV-rays (d) None of the above</p> <p>(ii) The frame work formed by the bones to give a shape to our body is called</p> <p>(a) skeleton (b) carples (c) wrist</p>		



ARMY PUBLIC SCHOOL GWALIOR
CLASS - VI
ACADEMIC SESSION 2024-25
REVISION WORKSHEET (SELF –ASSESSMENT)

Subject: Social Science

Assignment No. : 4

Allotment Date: 12 September 2024

SECTION	QUESTIONS	MARKS	NATURE								
A	<p>Multiple Choice Questions-</p> <p>(i) Which is the first animal to be tamed? (a) Dog (b) Horse (c) Cow (d) Elephant</p> <p>(ii) Who is known as the ‘Father of the Indian Constitution?’ (a) Dr.B.R.Ambedkar (b) Sukhdev (c) Bhagat Singh (d) Rajguru</p> <p>(iii) The movement of the earth around the sun is known as- (a) Rotation (b) Revolution (c) Inclination (d) Solstice</p> <p>(iv) The Great Bath was found at the site of - (a) Harappa (b) Mohenjodaro (c) Lothal (d) Kalibangan</p> <p>(v) The total number of latitudes are- (a) 360 (b) 180 (c) 90 (d) 45</p>	5×1=5	Objective Type Questions								
	<p>Match the following-</p> <table><tbody><tr><td>1. Copper</td><td>(a) The first big kingdom</td></tr><tr><td>2.Narmada Valley</td><td>(b) Rajasthan</td></tr><tr><td>3. 0°</td><td>(c) Prime meridian</td></tr><tr><td>4. Magadha</td><td>(d) Hunting and Gathering</td></tr></tbody></table>	1. Copper	(a) The first big kingdom	2.Narmada Valley	(b) Rajasthan	3. 0°	(c) Prime meridian	4. Magadha	(d) Hunting and Gathering	4×1=4	Objective Type Questions
1. Copper	(a) The first big kingdom										
2.Narmada Valley	(b) Rajasthan										
3. 0°	(c) Prime meridian										
4. Magadha	(d) Hunting and Gathering										
B	<p>(i) Name the four groups into which later Vedic society was divided.</p> <p>(ii) Where are asteroids found?</p> <p>(iii) What do you mean by Universal adult franchise?</p>	4×2=8	Very Short Questions								

	(iv) At which three levels does the government work?		
C	(i) What are parallels of latitude and meridians of longitude? (ii) How do archaeologists know that cloth was used in the Harappan civilisation?	2×3=6	Short Questions
D	(i) Write a short note on the 'Great Bath'. (ii) What were the features of the taxation system in Mahajanapadas?	2×5=10	Long Questions
E	Read the extract carefully and answer the questions that follow: The local time of places which are on different meridians are bound to differ. For example, it will be difficult to prepare a time table for trains which cross several longitudes. In India for instance, there will be a difference of about 1 hour and 45 minutes in the local times of Gujarat and Arunachal Pradesh. It is therefore necessary to adopt the local time of some central meridian of a country as the standard time for the country. In India, the longitude of 82°30'E is treated as the standard meridian. The local time at this meridian is taken as the standard time for the whole country. It is known as the Indian Standard Time (IST). Q.1 What is the full form of IST? Q.2 What is the longitude of the standard meridian of India? Q.3 How many time difference in the local times of Gujarat and Arunachal Pradesh?	3×1=3	Case based Questions
F	On the political map of India, mark and locate the following: (i) Inamgaon (ii) Andaman and Nicobar Islands (iii) Brahmagiri (iv) Lakshadweep Islands	4×1=4	Map Based Questions




ARMY PUBLIC SCHOOL GWALIOR
CLASS - VI
ACADEMIC SESSION 2024-25
REVISION WORKSHEET (SELF –ASSESSMENT)

Subject: Sanskrit

Assignment No. : 4

Allotment Date: 12 September 2024

S. NO.	QUESTIONS	MARKS	NATURE
1.	<p>प्रश्न 1. अपठित गंद्याशं पठित्वा अधोदत्तान् प्रश्नान् उत्तरत</p> <p>सम्राट् अशोकः मौर्यवंशस्य प्रसिद्धः शासकः आसीत् । सः महाराजस्य चन्द्रगुप्तस्य पौत्रः</p> <p>बिन्दुसारस्य पुत्रः च आसीत् । पितुः शासनकाले सः उज्जैन – तक्षशिला – प्रान्तयोः राज्यपालः आसीत् । पितुः मरणानन्तरं सः भारतस्य सम्राट् अभवत् ।</p> <p>I. एकपदेन उत्तरत - (2x1=2) (क) कः मौर्यवंशस्य प्रसिद्धः शासकः आसीत् ? (ख) सम्राट् अशोकस्य पितुः नाम किम् आसीत् ?</p> <p>II. पूर्णवाक्येन उत्तरत - (1x2=2) (क) अशोकः कयोः प्रान्तयोः राज्यपालः आसीत् ?</p> <p>III. प्रदत्तविकल्पेभ्यः उचितम् उत्तरं चिनुत - (1/2x2=1) (क) "अप्रसिद्धः" अस्य किं विलोमपदम् अत्र प्रयुक्तम् ? (अ) प्रसिद्धम् (ब) प्रसिद्धेन (स) प्रसिद्धाम् (द) प्रसिद्धः</p> <p>(ख) "बिन्दुसारस्य अशोकः च पुत्रः आसीत् " अस्मिन् वाक्ये किम् अव्ययपदम् प्रयुक्तम् ? (अ) अशोकः (ब) च (स) बिन्दुसारस्य (द) पुत्रः_</p>	1x5= 5	Informative Skills

2.	<p>उचित शब्देन संवादम् पूरयत-</p>  <p>मञ्जूषा-(आगच्छः, गमिष्यसि, अस्ति, अहं, स्वास्थ्याय(</p> <p>पिता- त्वं कदा खेलनाय(i)</p> <p>पुत्रः- अद्य न गमिष्यामि।</p> <p>पिता- किमर्थम् न।</p> <p>पुत्रः- लेखनस्य बहुकार्यम्.....।</p> <p>पिता- ह्यः अपि त्वं खेलनाय न</p> <p>पुत्रः- आम्।</p> <p>पिता- प्रतिदिनं ईदृशी दिनचर्या हानिकारका अस्ति।</p> <p>पुत्रः- आम्।</p>	1x5=5	Thinking skill
3.	<p>चित्रं दृष्ट्वा एकपदेन उत्तराणि लिखत-</p> <p>(क) कः उत्तिष्ठति?</p> <p>(ख) बालः कति वादने उत्तिष्ठति?</p> <p>(ग) कः भवति?</p> <p>(घ) प्रातः कः उदयति?</p> <p>(ङ) काः विशालाः सन्ति?</p>	1x5=5	Understanding
4.	<p>उचितपदानि चित्वा रिक्तस्थानानि पूरयत-</p> <p>(क) धनिकः धनं ददाति।) निर्धनम्, निर्धनाय (</p> <p>(ख) बालःविद्यालयं गच्छति।) पठनाय, पठनेन (</p> <p>(ग) ताः लिखन्ति।) कथाम्, कथानेन(</p> <p>(घ) अहं खादामि।) रोटिकया, रोटिकां(</p> <p>(ङ) वृक्षाः पिबन्ति।) पवनं, पवनेन(</p>	1x5=5	Analytical skill
5.	<p>निम्नलिखितेषु वाक्येषु कर्तृपदानि चिनुत</p> <p>(क) वृक्षाः नभः शिरस्सु वहन्ति।</p>	1x5=5	Critical thinking

	(ख) विहगाः वृक्षेषु कूजन्ति। (ग) पयोदर्पणे वृक्षाः स्वप्रतिबिम्बं पश्यन्ति। (घ) कृषकः अन्नानि उत्पादयति। (ङ) सरोवरे मत्स्याः सन्ति।		
6.	उचितं मेलनं कुरुत- एषः - पुरुषौ सा - जनः एतानि - छात्रा एतौ - चटके एते - फलानि	1x5=5	Memory skill



ARMY PUBLIC SCHOOL GWALIOR
CLASS - VI
ACADEMIC SESSION 2024-25
REVISION WORKSHEET (SELF –ASSESSMENT)

Subject: G.K

Assignment No. : 4

Allotment Date: 12 September 2024

S.NO	QUESTIONS	MARKS	Nature
1.	<p>Answer the following Questions</p> <p>a) What is a debit card? (_____)</p> <p>b) Explain the “Surya Namaskar” ? (_____)</p>	2x2=4	Information
2.	<p>Write nick-names of-</p> <p>1. Chakravarti Rajagopalachari (_____)</p> <p>2. Bhagat Singh (_____)</p> <p>3. Vallabhbhai Patel (_____)</p> <p>4. Subhash Chandra Bose (_____)</p>	4x1=4	Critical Thinking

3. Identify the given pictures of the following .

4x1=4

Evaluation



4.	<p>i) Write about the following words.</p> <p>a) Medical Tourism _____</p> <p>b) Dronacharya Award _____</p> <p>ii) :The word phobia refers to</p> <p>a) Hydrophobia-----</p> <p>b) Astraphobia -----</p>	4x2=8	Analytical Skills
-----------	--	--------------	--------------------------






ARMY PUBLIC SCHOOL GWALIOR
CLASS - VI
ACADEMIC SESSION 2024-25
REVISION WORKSHEET (SELF –ASSESSMENT)




Subject: Art and Work Education
Allotment Date: 12 September 2024

Assignment No. : 4

S.NO	QUESTIONS	MARKS	SKILLS
1.	How many types of shading in drawing are there? a) Two b) Four c) Five d) one	1	Creativity
2.	Shading is often used to create the illusion of _____. a) Width b) Hight c) Depth d) Length	1	Creativity
3.	What can make an object three-dimensional? a) Sketching b) Drawing c) Shading d) Painting	1	Creativity
4.	In hatching technique a series of _____ lines are used. a) Curved lines b) Parallel straight lines c) Zigzag lines d) Dotted lines	1	Creativity
5.	Cross hatching is a type of which technique? a) Drawing b) Shading c) Painting d) Sculpture	1	Creativity
6.	Artists draw parallel lines in Cross hatching technique. a) True b) False	1	Creativity

7.	<p>The scribbling is a drawing technique.</p> <p>a) True b) False</p>	1	Creativity
8.	<p>Stippling is the creation of a _____ simulating varying degrees of solidity or shading by using small dots.</p> <p>a) Sketch b) Pattern c) Texture d) Painting</p>	1	Creativity
9.	<p>Artists use layers of shading to achieve light, medium and _____ tones.</p> <p>a) Spiral b) Dark c) Zigzag d) Texture</p>	1	Creativity
10.	<p>Which among these is the picture of Scribbling?</p> <p>A</p>  <p>B</p>  <p>C</p> 	1	Creativity



ARMY PUBLIC SCHOOL GWALIOR
CLASS - VI
ACADEMIC SESSION 2024-25
REVISION WORKSHEET (SELF –ASSESSMENT)

Subject: Yoga

Assignment No. : 4

Allotment Date: 12 September 2024

QUESTIONS	MARKS	SKILLS
<p>Fill in the blanks</p> <p>1. _____ is the practice of non-violence.</p> <p>2. _____ is the observance of purity.</p> <p>3. _____ is the abstention from non-stealing.</p>	3X1=3	INFORMATIVE
<p><u>True and False:</u></p> <p>1. 1. Yama and Niyama are the two foundational limbs of yoga.</p> <p>2. Ahimsa means non-violence.</p> <p>3. Santosha is the practice of self-discipline.</p>	3X1=3	CRITICAL THINKING

Multiple Choice Questions:

4X1=4

ANALYTICAL

THINKING

1. Ahimsa is:
 - a) Non-violence
 - b) Truthfulness
 - c) Non-stealing
 - d) Chastity
2. Which of the following is not a part of Yama?
 - a) Saucha
 - b) Satya
 - c) Asteya
 - d) Aparigraha
3. The practice of non-stealing is known as:
 - a) Ahimsa
 - b) Satya
 - c) Asteya
 - d) Aparigraha
4. Surrendering to the Divine is called:
 - a) Saucha
 - b) Santosha
 - c) Tapas
 - d) Ishvara Pranidhana



ARMY PUBLIC SCHOOL GWALIOR
CLASS - VI
ACADEMIC SESSION 2024-25
REVISION WORKSHEET (SELF –ASSESSMENT)

Subject: Karate

Assignment No. : 4

Allotment Date: 12 September 2024

S. NO	QUESTIONS	Marks 10
1	What is the meaning of karate do ? a) The way of fight with empty hands b) Leg Fight c) Pre – decided techniques of offense and defense d) None of these	1
2	Which Japanese word is used at the time of wish in Kata? a) Os b) Ous c) Osu d) Oos	1
3	What is the Japanese name of middle block? a) Jodan age uke b) Chudan sota uke c) Gaidan barai uke d) None of these	1
4	Which stance is used for attention position? a) Zenkotsudachi b) Heikodachi c) Soto heikodachi d) Sanchin dachi	1
5	Which position is used at kicking time? a) Hidari heikodachi b) Migi heikodachi c) Hidari and migi heikodachi d) None of these	1
6	How many basic punches?	1

	<ul style="list-style-type: none"> a) 10 b) 20 c) 3 d) 4 	
7	<p>In heikodachi dachi legs should be</p> <ul style="list-style-type: none"> a) Parallel to your shoulder b) Inside the shoulder c) Outside the shoulder d) None of these 	1
8	<p>How many basic blocks?</p> <ul style="list-style-type: none"> a) 1 b) 2 c) 3 d) 4 	1
9	<p>Which punch is used for face attack?</p> <ul style="list-style-type: none"> a) Jodan tsuki b) Chudan tsuki c) Gaidan tsuki d) Nidan tsuki 	1
10	<p>What is the starting position of kicking ?</p> <ul style="list-style-type: none"> a) Heikondachi b) heikadachi c) Zenkotsudachi d) None of these 	1



ARMY PUBLIC SCHOOL GWALIOR
CLASS - VI
ACADEMIC SESSION 2024-25
REVISION WORKSHEET (SELF –ASSESSMENT)

Subject: Music (Vocal)

Assignment No. : 4

Allotment Date: 12 September 2024

S. NO.	QUESTIONS	MARKS	NATURE
1	Bharat humko jaan se ? a)pyara hai b)nyara hai	1	Informative
2	How many strings are there in guitar ? a) 6 b) 5	1	Informative
3	What do you mean by patriotism? a) Devotion towards Religion b) Devotion towards Country	1	Informative
4	Shri krishan govind murari a) Hare b)Hey Nath	1	Informative
5	Pitu swami sakha humare a) Nath b) Math	1	Informative
6.	Tu pyar ka sagar , _____ daya ka tu hai a) sagar b) pyar	1	Informative
7.	Ek dantaya , gauri tanya yadimahi a) Vakratundaya	1	Informative

	b) gajeshanaya		
8.	What do you mean by chord? a) A single note b) Group of 3 notes	1	Informative
9,	How many notes are there in an octave? a) 8 b) 7	1	Informative
10.	O palan hare ,..... aur nyare a) Nirgun b) Guni	1	Informative



ARMY PUBLIC SCHOOL GWALIOR
CLASS - VI
ACADEMIC SESSION 2024-25
REVISION WORKSHEET (SELF –ASSESSMENT)

Subject: Dance

Assignment No. : 4

Allotment Date: 12 September 2024

S. NO.	QUESTIONS	MARKS	NATURE
1.	How many Matras are there in Teentaal? a) 16 b) 10	1	Informative
2.	How many Vibhagas are there in Teentaal? a) 4 b) 3	1	Informative
3.	What is the sign of Khali? a) × b) 0	1	Informative
4.	Before a dance performance, _____ should be done. a) Pranam b) Ashirwad dena	1	Informative
5.	Is Bhumi Pranam done in classical dance? a) Yes b) No	1	Informative
6.	What are the bol of Sada Toda ? a) Tat tat tram tai b) Tat tat tigdha tat	1	Informative
7.	What is Teentaal ? Explain. a) One of the most popular rhythmic cycles. b) widely used in various genres of Indian classical music.	1	Informative

8.	How many beats are there in Teentaal? a) 3 b) 10	1	Informative
9	What is bole of Teentaal? a) Dha dhin dhin dha b) Dhee na dhee dhee na	1	Informative
10	How many talee are there in teentaal? a) 3 b) 6	1	Informative



ARMY PUBLIC SCHOOL GWALIOR
CLASS - VI
ACADEMIC SESSION 2024-25
REVISION WORKSHEET (SELF –ASSESSMENT)

Subject: Health and Physical Education
Allotment Date: 12 September 2024

Assignment No. : 4

S.N	QUESTIONS	MARKS	SKILLS/COMPETENCIES
1	Shorts answer question 1.What is the width of football field? a) 45-90 meter b) 100-120 meter c) 30-40 meter d) 95-120 meter	1	INFORMATION
2	2. The Length of volleyball court is? a)12 meter b) 16 meter c) 18 meter d) 20 meter	1	INFORMATION

3	<p>3. Joe Root belongs to which country ?</p> <p>a)England</p> <p>b) South Africa</p> <p>c) Australia</p> <p>d) Bangladesh</p>	1	INFORMATION
4	<p>4. Cricket world cup organized after how many years of gap ?</p> <p>a) 6 years</p> <p>b) 7 years</p> <p>c) 3 years</p> <p>d) 4 years</p>	1	INFORMATION
5	<p>FILL IN THE BLANKS: -</p> <p>1. _____ won the Olympic gold medal in volleyball 2024?.(France,USA)</p>	1	INFORMATION

6	2. Cristiano Ronaldo plays for the _____ club? (Real Madrid,AL Nassr)	1	INTERDISCIPLINARY
7	3. The term Googly use in _____ (Basketball,Cricket)	1	INTERDISCIPLINARY
8	8.Women's Italy volleyball team won the Olympic gold medal 2024?(True/False)	1	INTERDISCIPLINARY
9	9. Basketball Dimension's are 28mx15m?(True/False)	1	UNDERSTANDING

10	10. Football only played for 60 Minutes? (True/False)	1	UNDERSTANDIN G
-----------	--	---	-------------------



ARMY PUBLIC SCHOOL GWALIOR
CLASS - VI
ACADEMIC SESSION 2024-25
REVISION WORKSHEET (SELF –ASSESSMENT)

Subject: Computer

Assignment No. : 4

Allotment Date: 12 September 2024

S.NO.	QUESTIONS	MARKS	NATURE
1.	<p>Tick the correct answer:</p> <p>(i) Treating data according to the instructions and changing it into information is called: a) Output b) Processing c) Input</p> <p>(ii) Primary memory is also known as _____ memory. a) Backup b) Main c) Basic</p> <p>(iii) The collection of rows and columns is called _____. a) workbook b) worksheet c) Document</p> <p>(iv) A range name must start with a _____. a) Number b) Letter c) Symbol</p> <p>(v) ALU, CU, and MU are the parts of _____. a) Monitor b) Pen drive c) CPU</p>	0.5X5=2.5	Information
2.	<p>Write 'T' for True and 'F' for False statements.</p> <p>(i) Joystick is mainly used to play games on a computer.</p> <p>(ii) We cannot save worksheet data as a PDF and HTML file.</p> <p>(iii) Formula bar shows the formula we are using in active cell.</p> <p>(iv) RAM is used to store data permanently.</p> <p>(v) The output or result we get on a paper is called soft copy.</p>	0.5X5=2.5	Interdisciplinary
3.	<p>Fill in the blanks.</p> <p>(i) _____ is any data or instruction entered into the computer.</p> <p>(ii) Data that has been processed into a useful form is called _____.</p> <p>(iii) By using _____ feature, one can revert the last change.</p> <p>(iv) _____ are tiny, word-sized charts that can appear in a cell.</p>	0.5X4=2	Analytical Skill

4.	Answer the following :- (i) How does a computer work? (ii) Why do we need to select cells in excel? (iii) How will you classify memory?	1X3=3	Critical Thinking and Problem Solving
-----------	--	--------------	--