

**ARMY PUBLIC SCHOOL GWALIOR**  
**CLASS - V**  
**ACADEMIC SESSION 2024-25**  
**REVISION WORKSHEET (SELF –ASSESSMENT)**



Subject: English

Assignment No. : 4

Allotment Date: 12 September 2024

S. NO.	QUESTIONS	MARKS	NATURE
	<b>SECTION A (READING)</b>		
Q1.	<p><b>Read the following paragraph and answer the questions given below:</b></p> <p>There was a tiny squirrel. It was climbing a high mountain. A foolish tortoise was following her. There was a hard shell on his back. Suddenly a strong wind began to blow. The squirrel ran fast. The tortoise could not run fast so he was sad.</p> <p><b>Now on the basis of above paragraph, answer the following questions:</b></p> <p><b>1. Choose the correct option for the following questions:</b></p> <p><b>i) Who was climbing a high mountain?</b></p> <p>a) Tortoise b) Squirrel c) Both (i) and (ii)</p> <p><b>2. Fill in the blanks:</b></p> <p>i). A foolish tortoise was following the_____.</p> <p><b>3. Find the opposites word of “soft” from the above passage:</b></p> <p><b>4. Answer the following questions in one word:</b></p> <p>i) Tortoise has something hard on his back- _____</p>	4x1=4	Reading and understanding
Q.2.	<p><b>Read the following lines of the poem:</b></p> <p>“Deep in the night Like thief- When all is still A moon beam climbs the window-sill. Over your bed It softly flies To see if sleep has closed your eyes. A pinch of gold Some fairy sand It clasped within that moonbeam’s hand”</p>	4x1=4	

Now, the basis of the above lines of the poem, answer the following questions:

1. Choose the correct option for the following questions:

(i) The poet speaks of the moonlight as if it were \_\_\_\_\_

- a) a watchman
- b) thief
- c) shadow

(ii) "You" in the poem most probably is \_\_\_\_\_

- a) the poet himself
- b) a little child
- c) a mother

(iii) From the above line of the poem, find out the rhyming words of:

- (i) sand
- (ii) still


(iv) State the following statements as True or False:

- (i) A moon beam climbs the door- still. [ ]

**SECTION-B (WRITING)**

Q3

Look at the following pictures and frame a story based on it in 100 words.



3.5x1=3.5

Critical and creative thinking, Imagination and constructive Skills.

Q4

Write an application to the Principal requesting him for a two days leave in about 100 words.

3x1=3

**SECTION – C (GRAMMAR)**

<p><b>Q5</b></p>	<p>Choose the correct option for the following questions:</p> <p>(i) <b>Identify the verb in the following sentence –</b> “Avi hammered the nail into the wall.”</p> <p>(a) Avi (b) hammered (c) wall</p> <p>(ii) <b>She is a fair and beautiful girl. The word ‘fair’ and ‘beautiful’ is an example of-</b></p> <p>(a) Adverb (b) Adjective (c) Noun</p> <p>(iii) <b>“I was standing at the door”. Here, the Preposition “at” is used as Preposition of ____.</b></p> <p>(a) time (b) place (c) direction</p> <p>(iv) <b>The sentences that ask questions are ----- sentences.</b></p> <p>(a) Declarative (b) Interrogative (c) Exclamatory</p> <p>(v) <b>Article “a” is used for —</b></p> <p>(a) Vowels (b) consonants (c) specific or known things.</p> <p>(vi) <b>An example of Common Noun is-</b></p> <p>(a) Delhi (b) eraser (c) Vivek</p> <p>(vii) <b>Early, now, today, are examples of-</b></p> <p>(a) Adverbs of manner (b) Adverbs of place (c) Adverbs of time</p>	<p><b>7x.5=3.5</b></p>	<p><b>Understanding , Analytical Skill, Interdisciplinary</b></p>
<p><b>Q6</b></p>	<p>Fill in the blanks as directed:</p> <p>(i) <b>Fill the appropriate demonstrative pronoun from the words given in the bracket:</b></p> <p>..... are the shoes I want. (That / This / Those)</p> <p>(ii) <b>Fill the appropriate collective noun from the words given in the bracket.</b></p> <p>We saw a _____ of camels walking across the desert in Rajasthan. (herd, band, gallery)</p>	<p><b>3x.5=1.5</b></p>	

(iii) **Fill the appropriate Preposition from the words given in the bracket:**

Roy got.....the car. (into / through / above)

<p><b>Q7</b></p>	<p><b>State the following statements as True or False:</b></p> <p>(i) Sentences that ask questions are called exclamatory sentences. [ ]</p> <p>(ii) He hurt himself while playing. [ ]</p>	<p><b>2x.5=1</b></p>	
<p><b>Q8</b></p>	<p><b>Answer the following questions in one word:</b></p> <p>(i) Form a Compound word with “foot”.</p> <p>(ii) The comparative degree of the adjective “cunning” is _____</p> <p>(iii) Write any one example of Preposition of Place.</p>	<p><b>3x.5=1.5</b></p>	
<p><b>Q9</b></p>	<p><b>Rewrite the following sentences as directed:</b></p> <p>(i) Rewrite the following sentences by adding a suitable Adjective to the highlighted word:</p> <p>(a) Shan has a <b>car</b>.</p> <p>(b) I love <b>mangoes</b>.</p>	<p><b>1x1=1</b></p>	
<p><b>Q10</b></p>	<p><b>Make a sentence, transitive and intransitive, using the following verb.</b></p> <p>(i) fly</p>	<p><b>2x1=2</b></p>	
<b><u>SECTION – D (LITERATURE)</u></b>			
<p><b>Q11</b></p>	<p><b>Choose the correct option for the following questions:</b></p> <p>(i) Ramdas was-</p> <p>(a) the Sachiv (b) the Mantri (c) the poet</p> <p>(ii) The rhyming word for „never“ will be-</p> <p>(a) near (b) ever (c) cease</p>	<p><b>2x1=2</b></p>	<p><b>Evaluation, Understanding, Critical thinking</b></p>
<p><b>Q12</b></p>	<p><b>Frame sentences using the following words:</b></p> <p>(i) infectious</p> <p>(ii) silence</p>	<p><b>2x1=2</b></p>	
<p><b>Q13</b></p>	<p><b>Answer the following questions in one word:</b></p> <p>(i) Who stayed with Minal’s family for a few days?</p> <p>(ii) What was the name of Leo’s elder brother?</p>	<p><b>2x1=2</b></p>	

--	--	--	--

Q14	<p><b>Why did Jawaharlal Nehru choose to write this letter to Indira instead of sending her some gift on her 13<sup>th</sup> birthday?</b>  <b>Write a diary entry of about 30 words.</b></p>	2x1=2	
Q15	<p><b>Answer the following questions with reference to the context:</b></p> <p>(i) “Well, I have heard from the butterflies and birds that bring messages from different places that the situation is bad. Many trees have been cut down to make buildings and other structures”.</p> <p><b>Answer the following questions on the basis of above lines</b>  (a) Who brings messages from different places?  (b) Why many trees have been cut down?</p>	2x1=2	
Q16	<p><b>Answer the following questions in short:</b></p> <p>(i) How is the world peace at night, in the poem “Don’t be Afraid of the Dark”?  (ii) Why did the rain turn acidic?  (iii) What clever idea came to Tom’s mind?</p>	3x1=3	
Q17	<p><b>Answer the following questions in detail:</b></p> <p>(i) Who do you think is braver, Shivaji or Jijabai?</p> <p style="text-align: center;">Or</p> <p>(ii) What message did you get from the lesson “My Elder Brother?”</p>	2x1=2	



**ARMY PUBLIC SCHOOL GWALIOR**  
**CLASS - V**  
**ACADEMIC SESSION 2024-25**  
**REVISION WORKSHEET (SELF –ASSESSMENT)**




**Subject: Hindi**

**Assignment No. : 4**


**Allotment Date: 12 September 2024**

	प्रश्न	अंक
1.	<p>दिए गए गद्यांश के आधार पर पूछे गए प्रश्नों के उत्तर दीजिए-</p> <p>कुछ पुस्तकालय सार्वजनिक होते हैं जो सबके लिए होते हैं। इनके खुले और बंद होने का समय निश्चित होता है। इनमें हर तरह की पुस्तक होती हैं। इसके सदस्य बनकर पुस्तक घर पर भी लेजा सकते हैं। ये पुस्तकालय बहुत उपयोगी होते हैं। इनसे निर्धन विद्यार्थी भी लाभ उठाते हैं। वे महँगी पुस्तकें नहीं खरीद पाते। वे यहाँ बैठकर उन्हें पढ़ सकते हैं और कुछ समय के लिए पुस्तकों को घर भी ले जा सकते हैं।</p> <p>(क) खाली स्थान भरे।</p> <p>(i) ये पुस्तकालय बहुत ..... होते हैं।</p> <p>(ii) वे ..... बैठकर उन्हें पढ़ सकते हैं।</p> <p>(ख) निम्नलिखित प्रश्नों के उत्तर एक या दो वाक्यों में दीजिए-</p> <p>(i) पुस्तकालय का सदस्य बनने से क्या लाभ है?</p> <p>(ii) महँगी पुस्तकें कौन नहीं खरीद पाते हैं?</p> <p>(ग) निम्नलिखित प्रश्नों के उत्तर एक शब्द में दीजिए-</p> <p>(i) यह गद्यांश किसके बारे में है?</p>	<p>1x.5=1</p> <p>1x2=2</p> <p>1x1=1</p>
2.	<p>निम्नलिखित पद्यांश को ध्यानपूर्वक पढ़कर दिए गए प्रश्नों के उत्तर दें ।</p> <p>आसमान में उड़ी पतंग। खुली हवा में लहराती, उड़-उड़कर चली पतंग। इसको काटे,उसको काटे पेंच लड़ाती चली पतंग। मचल मचलकर इठलाती, पूँछ हिलाती चली पतंग।</p> <p>(i) सही गलत का निशान( ✓ ) लगाएं।</p> <p>(क) पतंग पैच लड़ाती है। [ ]</p> <p>(ii) निम्नलिखित प्रश्नों के उत्तर एक वाक्य में लिखें।</p> <p>(क) उपरोक्त पद्यांश का उचित शीर्षक लिखिए?</p> <p>(ख) पतंग कहाँ उड़ रही है?</p> <p>(iii) निम्नलिखित शब्दों के समानार्थी लिखें-</p> <p>(क) आसमान _____</p>	<p>1x1=1</p> <p>2x1=2</p> <p>1x.5=1</p>



	(ख) हवा _____	
3	<p><b>चित्र कथा लेखन</b> नीचे दिए गए चित्र के आधार पर एक छोटी-सी कहानी लिखिए।</p> 	3
4	<p><b>पत्र-लेखन</b> गृहकार्य अधूरा रह जाने पर विषय-अध्यापक/अध्यापिका से क्षमा माँगते हुए एक पत्र लिखिए।</p>	3
5	<p><b>कल्पना-लेखन</b> किसी महान व्यक्ति के बारे में वे सारी बातें लिखिए जो आपको प्रेरणा प्रदान करती हैं।</p>	2
6	<p>उचित शब्द लिखकर खाली स्थान भरें। (क) समाचार पत्र भाषा का ----- रूप है। (ख) संस्कृत भाषा की-----लिपि है।</p>	1x2=2
7	<p>सही विकल्प चुनकर लिखें । (क) निम्नलिखित में से संयुक्त व्यंजन शब्द का उदाहरण है - i) लस्सी            ii) कक्षा            iii) रद्दी (ख) रेखांकित विशेषण का सही भेद चुनें- 'मेरे पास चार किलो आलू है।' i) सार्वनामिक।    ii) परिमाण वाचक    iii) गुणवाचक</p>	1x2=2
8.	<p>निम्नलिखित रेखांकित शब्दों के वचन बदलकर वाक्य को दोबारा लिखिए- (i) मैंने बाजार से पुस्तक खरीदी। (ii) बंदर ने केला खाया।</p>	1x2=2
9.	<p>दिए गए सर्वनाम शब्दों का वाक्यों में प्रयोग कीजिए- (क) आप (ख) यह</p>	1x2=2
10.	<p>निम्नलिखित शब्दों के दो-दो पर्यायवाची शब्द लिखिए- (i) घर _____, _____ (ii) आँख _____, _____</p>	1x2=2
11.	<p>निम्नलिखित शब्दों में उपसर्ग लगाकर नए शब्द बनाइए। (i)----- +मान -----</p>	1x1=1

	(ii) ----- +भाव -----	
12.	निम्नलिखित समरूपी भिन्नार्थक शब्दों के अर्थ लिखिए । (i) आकार _____ (ii) आकर _____	1×2=2
13.	निम्नलिखित वाक्यांशों के लिए एक शब्द लिखिए । (i) जो अपने देश का हो _____	1×1=1
14.	नीचे दी गई पंक्तियाँ पूरी कीजिए- निज आन-बान, मर्यादा का प्रभु _____।	1×1=1
15.	निम्नलिखित शब्दों के अर्थ लिखिए- (i) आयोजन= _____ (ii) कौशल= _____	1×2=2
16.	निम्नलिखित पंक्तियों का भावार्थ स्पष्ट कीजिए- दैव! मेरे भाग्य में है क्या बदा में बचूँगी या मिलूँगी धूल में।	1
17.	निम्नलिखित प्रश्नों को पढ़कर सही या गलत का चिह्न लगाइए- (क) शहनाई को फूँक से बजाया जाता है। ( )	1×1=1
18.	निम्नलिखित वाक्यों की वर्तनी शुद्ध कर पुनःलिखें- (क) बादशाह ने युवक का वेटन पंद्रह रुपए तय किया।	1×1=1
19	नीचे दिए गए विलोम शब्दों का मिलान करें। (क) (ख) (i) उचित निंदा (ii) प्रशंसा विशाल (iii) लघु अनुचित (iv) दूर पास	4×.5=2
20.	निम्नलिखित प्रश्नों के उत्तर दीजिए- (i) बादशाह ने अपने मंत्री से क्या कहा? (ii) उद्योग मेलों से हमें क्या जानकारी मिलती है?	1×2=2



**ARMY PUBLIC SCHOOL GWALIOR**  
**CLASS - V**  
**ACADEMIC SESSION 2024-25**  
**REVISION WORKSHEET (SELF –ASSESSMENT)**



**Subject: Mathematics**

**Assignment No. : 4**

**Allotment Date: 12 September 2024**

S. NO.	QUESTIONS	MARKS	NATURE
1	Fill in the blanks. a) $98704 + \underline{\hspace{2cm}} = 9241 + 98704$ b) $1/2 \times 1/3 = \underline{\hspace{2cm}}$ . c) Sum of the smallest prime number and the smallest odd composite number is $\underline{\hspace{2cm}}$ . d) The difference between the largest factor and the smallest factor of 64 is $\underline{\hspace{2cm}}$ .	4X1=4	
2	State 'True' or 'False' for following statements. a) Dividend = Divisor x Quotient ( T/F) b) The greatest 5 digit number is 1000 c) The product of a number and 0 is always 0. ( T/F) d) When denominators are same , they are called unlike fractions ( T/F)	4X1=4	
3	<b>Tick the correct answer from the given options:</b>  (i) $455799 + 1 = \underline{\hspace{2cm}}$ . a) 456000                      b) 455800 b) 455900                      d) None of these  (ii) $5 \times 2 \times 3 \times 3$ is the prime factorization of $\underline{\hspace{2cm}}$ . a) 30                              b) 120 c) 90                              d) 150  (iii) $4972 \div 4 = \underline{\hspace{2cm}}$ . a) 1243                          b) 2243 c) 1234                          d) None of these  (iv) Which number is a composite?  (a) 91                      (b) 19 (c) 71                      (d) 41	4X1=4	
4	Match the following columns:  (a) $1313 \div 25$ (i) factor of 32 (b) $7 + 3/5$ (ii) 97 (c) 8                                      (iii) $5/6$	4X1=4	

	(d) XCVII (iv) 38/5		
5	<p><b>Solve the following questions: -</b></p> <p>(a) Anabi took <math>\frac{7}{8}</math> hour to paint a table and <math>\frac{2}{3}</math> hour to paint a chair. How much time did he take in painting both items?.</p> <p>(b) What are the 5th and 7th multiples of 15? OR</p> <p>Write the Roman numeral of 999.</p> <p>(c) Write down the smallest and greatest 2-digit prime number.</p> <p>(d) Multiply <math>18 \times 4\frac{1}{2}</math> OR</p> <p>Find the difference between the place value and the face value of 8 in 358692.</p>	5X1=5	
6	<p><b>Solve the following questions: -</b></p> <p>(a) Arrange the following fractions in descending order <math>\frac{3}{8}</math>, <math>\frac{5}{6}</math>, <math>\frac{2}{4}</math>, <math>\frac{1}{3}</math>.</p> <p>(b) 200 boxes each containing 250 books were packed. How many books were packed in all? OR</p> <p>Find the prime factorization of 70.</p> <p>(c) There are 400 workers in a factory. If <math>\frac{1}{4}</math> workers have Car, <math>\frac{2}{5}</math> of workers have motorbike and rest workers have bicycle. How many workers have bicycle?</p> <p>(d) Find two equivalent fractions of <math>\frac{3}{5}</math>.</p> <p>(e) Find the HCF of 12,18, and 24. OR</p> <p>The LCM of 20 and 32 is 160, find the HCF?</p>	5X2=10	
7	<p><b>Solve the following questions: -</b></p> <p>(a) There are 7000 students in a school. If <math>\frac{3}{5}</math> students like sports, then how many students do not like sports? OR</p> <p>Three bells ring at intervals of 5, 10, 15 minutes respectively. If they all ring at 8:00 AM, then at what time will they next ring together?</p> <p>(b) Find the smallest number which is exactly divisible by 24, 40 and 48</p> <p>(c) The sum of two numbers is 7895402. If the smallest number is the largest 5-digit number, find the other number. OR</p> <p>54296 students of school will have to go for a picnic. If 44 students can sit in a bus, how many buses will be needed?</p>	3X3=9	



**ARMY PUBLIC SCHOOL GWALIOR**  
**CLASS - V**  
**ACADEMIC SESSION 2024-25**  
**REVISION WORKSHEET (SELF –ASSESSMENT)**

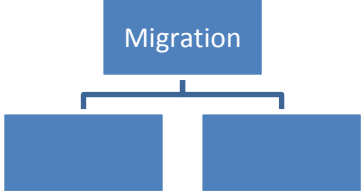
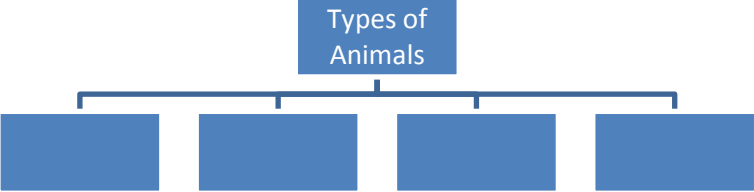






**Subject: EVS**

**Assignment No. : 4**

**Allotment Date: 12 September 2024**

S. NO.	QUESTIONS	MARKS	NATURE		
Q1	<p>Choose the correct option.</p> <p>(i) Which of the following is an example of man made calamity?            (a) Flood    b) Earthquake    c) war    d) All of these</p> <p>(ii) _____ is not an individual game.            a) Football    b) Swimming    c) Shooting    d) Cycling</p> <p>(iii) Sabarmati ashram is in _____.            a) Gujarat    b) Maharashtra    c) Kerala    d) Punjab</p> <p>(iv) Our heart beats _____ times in a minute.            a) 52    b) 62    c) 72    d) 92</p> <p>(v) _____ hibernates in the winter season.            a) Goat    b) Polar bear    c) Musk deer    d) Lion</p> <p>(vi) Chipko Movement started in _____.            a) Gujarat    b) Uttarakhand    c) Jharkhand    d) Punjab</p> <p>(vii) Elephants are poached for their _____.            a) horns    b) tusks    c) fur    d) skin</p> <p>(viii) _____ reproduces by spores.            a) Mango    b) Fern    c) Carrot    d) Apple</p>	8x0.5=4			
Q2.	<p>Match the following :</p> <table style="width: 100%; border: none;"> <tr> <td style="width: 50%; vertical-align: top;"> <p>COLOUMN A</p> <p>i) Mechanic</p> <p>ii) Herbivores</p> <p>iii) Bees</p> <p>iv) Rose</p> <p>v) Kerala</p> </td> <td style="width: 50%; vertical-align: top;"> <p>COLOUMN B</p> <p>a) eats plants</p> <p>b) mends machines</p> <p>c) Silent Valley Movement</p> <p>d) honey</p> <p>e) vegetative propagation</p> </td> </tr> </table>	<p>COLOUMN A</p> <p>i) Mechanic</p> <p>ii) Herbivores</p> <p>iii) Bees</p> <p>iv) Rose</p> <p>v) Kerala</p>	<p>COLOUMN B</p> <p>a) eats plants</p> <p>b) mends machines</p> <p>c) Silent Valley Movement</p> <p>d) honey</p> <p>e) vegetative propagation</p>	5x1=5	Analytical
<p>COLOUMN A</p> <p>i) Mechanic</p> <p>ii) Herbivores</p> <p>iii) Bees</p> <p>iv) Rose</p> <p>v) Kerala</p>	<p>COLOUMN B</p> <p>a) eats plants</p> <p>b) mends machines</p> <p>c) Silent Valley Movement</p> <p>d) honey</p> <p>e) vegetative propagation</p>				
Q3.	<p>Fill in the blanks:</p> <p>(i) Wrestling in India is also known as _____.</p> <p>(ii) _____ are said to be original settlers of India.</p> <p>(iii) A strong muscular organ called _____ lies below the</p>	5X1=5			

	<p>heart.</p> <p>(iv) The animals whose species are completely finished are also known as _____.</p> <p>(v) _____ is a kind of reproduction in which the plants grows from their body parts.</p>		
Q3	<p>True and False:</p> <p>(i) Stephan Hawking was blind, deaf and mute. ( )</p> <p>(ii) The species which are facing extinction are known as endangered animals. ( )</p>	2X0.5=1	
Q4	<p>Complete the flow chart:</p> <p>(i)</p>  <pre> graph TD     A[Migration] --&gt; B[ ]     A --&gt; C[ ]   </pre> <p>(ii)</p>  <pre> graph TD     A[Types of Animals] --&gt; B[ ]     A --&gt; C[ ]     A --&gt; D[ ]     A --&gt; E[ ]   </pre>	2x0.5=1	Interdisciplinary
Q5	<p>Circle the odd one out:</p> <p>(i) Tongue, eyes, ears, hand</p> <p>(ii) Joint family, nuclear family, single-parent family, teacher</p>	2x0.5=1	Analytical Skill

Q6.	<p>Identify the following:</p> <div style="display: flex; flex-wrap: wrap;"> <div style="width: 50%; text-align: center;">  <p>(i)</p> </div> <div style="width: 50%; text-align: center;">  <p>(ii)</p> </div> <div style="width: 50%; text-align: center;">  <p>(ii)</p> </div> <div style="width: 50%; text-align: center;">  <p>(iv)</p> </div> </div>	4x0.5=2	Evaluation
Q7.	<p>Define the following:</p> <p>(i) Dignity of Labour (ii) Sericulture</p>	2x0.5=1	
Q8.	<p>Answer in one word:</p> <p>(i) Name the animal which sleeps with open eyes. (ii) They are the people who make monkeys and bears dance.</p>	2x0.5=1	
Q9.	<p>Give examples for each of the following:</p> <p>(i) Individual Game (ii) Indian Tribe</p>	2x0.5=1	
Q10.	<p>Short Answer Questions:</p> <p>Q1. Why do animals need to sleep? Q2. How do plants make their own food? Q3. Draw neat, coloured and labelled diagram of Human Respiratory System.</p>	3x2=6	
Q11.	<p>Long Answer Questions:</p> <p>Q1. What is food chain? Draw any food chain. Q2. List and explain any three factors which influence our likes and dislikes.</p>	2x3=6	
Q12.	<p>Read the given passage and answer the questions that follows:</p> <p>Since few years, the tribals are losing control over their forest and territory and its various resources. The situation is worsening due to deforestation, which has reduced forest cover all over India. It causes tribals to lose their home and livelihood. They are forced to shift to cities. They face discrimination in urban areas.</p> <p>Question: (i) Who are tribals? (ii) How has deforestation affected the life of tribals?</p>	2x1=2	
Q13.	<p>Atlas :</p> <p>A) Choose the correct answer. i) Which planet is known as the "Red Planet"? a) Earth    b) Mars    c) Jupiter    d) Venus ii) Which is the largest planet in the Solar System?</p>	8x0.5=4	

<p>a) Earth    b) Saturn    c) Uranus    d) Jupiter</p> <p>iii) Which ocean is located between Africa, Australia and Asia?</p> <p>a) Pacific Ocean    b) Atlantic Ocean    c) Indian Ocean    d) Artic Ocean</p> <p>iv) How many continents are there?</p> <p>a) 5                  b) 6                  c) 7                  d) 8</p> <p>B) On the political map of India locate the following:</p> <p>i) River Ganga</p> <p>ii) State-Madhya Pradesh</p> <p>iii) Jim Corbett National Park</p> <p>iv) Sri Lanka</p>		
---	--	--





**ARMY PUBLIC SCHOOL GWALIOR  
CLASS - V**






**ACADEMIC SESSION 2024-25  
REVISION WORKSHEET (SELF –ASSESSMENT)**

**Subject: Art and Work Education  
Allotment Date: 12 September 2024**

**Assignment No. : 4**

S.NO	QUESTIONS	MARKS	SKILLS
1.	The color wheel is a square. True or False? a) True b) False	1	Creativity
2.	Black, Brown, Gray and White are ----- colors. a) Neon b) Neutral c) Light d) None of the above	1	Creativity
3.	Which of these is the Tertiary color? a) Red Orange, Red Violet, Blue Green, Blue Violet, Yellow Orange and Yellow Green b) Red, Orange, and Yellow c) Blue, Green, and Purple d) Red yellow blue	1	Creativity
4.	_____ is a Warm Color. a) Blue b) Green c) Orange d) Purple	1	Creativity
5.	_____ is a Cool Color. a) Light purple b) Yellow c) Orange d) Pink	1	Creativity
6.	Pink is a Tertiary Color. a) True b) False	1	Creativity
7.	The combination of primary and secondary colors is known as tertiary colours. a) True	1	Creativity

	b) False		
8.	<p>Colors that cannot be produced by mixing other colors are termed _____ colors.</p> <p>a) Secondary  <b>b) primary</b>  c) warm  d) Cool</p>	1	Creativity
9.	<p>Secondary colors are mixed from _____ colors.</p> <p>a) Two Secondary  <b>b) Two Primary</b>  c) Two Tertiary  d) Two Cool</p>	1	Creativity
10.	<p>Which among these is the picture of Tertiary Colors?</p> <p>A</p>  <p>The Tertiary Color Wheel is a circular diagram showing 12 colors arranged in a circle. Starting from the top and moving clockwise, the colors are: Red, Red-Orange, Orange, Yellow-Orange, Yellow, Yellow-Green, Green, Blue-Green, Blue, Blue-Violet, Violet, and Red-Violet.</p> <p>B</p>  <p>C</p> 	1	Creativity

--	--	--	--



**ARMY PUBLIC SCHOOL GWALIOR**  
**CLASS - V**  
**ACADEMIC SESSION 2024-25**  
**REVISION WORKSHEET (SELF –ASSESSMENT)**



**Subject: Health and Physical Education**  
**Allotment Date: 12 September 2024**

**Assignment No. : 4**

<b>S.N O</b>	<b>QUESTIONS</b>	<b>MARK S</b>	<b>NATURE</b>
1	MCQ  A) How many players from each team are allowed to be on the field of Handball?  i. 7  ii. 5  iii. 6  iv. 8	4×1=4	Understanding
	B) What size is Handball court?  i. 20 X 30 m  ii. 20 X 40 m  iii. 20 X 50 m  iv. 20 X 60 m		Informatory
	C) Penalties are thrown from what distance?  i) 11 m  ii) 9 m  iii) 7 m  iv) 4 m		Analytical

	<p>D) Who is Babacar Fall?</p> <p>i. American Handball Player</p> <p>ii. Former president of European Handball Federation</p> <p>iii. Italian Handball Coach</p> <p>iv. Architect of African Handball</p>		Information
2.	<p>B) Fill In The Blanks :-</p> <p>i) _____ is one of the best handballer in history( James naismith,Mikkel hansen).</p>	3×1=3	Informative
	<p>ii) The playing area is _____ m.( 40×20M, 30×50M)</p>		Informative
	<p>iii) After Three-minute suspensions, player get a _____ card(Green card, Yellow card).</p>		Understanding
3.	<p>True/False</p> <p>i. Germany is cradle of the Handball?</p> <p>True</p> <p>False</p>	3×1=3	Understanding
	<p>ii. Beach Handball does not exist?</p> <p>True</p> <p>False</p>		Understanding
	<p>iii. There is no shot clock?</p> <p>True</p> <p>False</p>		Understanding



**ARMY PUBLIC SCHOOL GWALIOR  
CLASS - V**



**ACADEMIC SESSION 2024-25  
REVISION WORKSHEET (SELF -ASSESSMENT)**

**Subject: Music Vocal)**

**Assignment No. : 4**

**Allotment Date: 12 September 2024**

<b>S. NO.</b>	<b>QUESTIONS</b>	<b>MARKS</b>	<b>NATURE</b>
1	Bharat humko jaan se ..... ? a)pyara hai b)nyara hai	1	Informative
2	How many komal swaras are there? a) 4 b) 3	1	Informative
3	What do you mean by patriotism? a) Devotion towards Religion b) Devotion towards Country	1	Informative
4	Shri krishan govind ..... murari a) Hare b)Hey Nath	1	Informative
5	Pitu ..... swami sakha humare a) Nath b) Math	1	Informative
6.	Tu pyar ka sagar , _____ daya ka tu hai a) sagar b) pyar	1	Informative
7.	Ek dantaya , ..... gauri tanya yadimahi a) Vakratundaya b) gajeshanaya	1	Informative
8.	What do you mean by prayer ? a) worship b) request	1	Informative

9,	So high , you can't get ____ it a) under b) over	1	Informative
10.	O palan hare ,..... aur nyare a) Nirgun b) Guni	1	Informative



**ARMY PUBLIC SCHOOL GWALIOR**  
**CLASS - V**  
**ACADEMIC SESSION 2024-25**  
**REVISION WORKSHEET (SELF –ASSESSMENT)**



**Subject: Dance**

**Assignment No. : 4**

**Allotment Date: 12 September 2024**

S. NO.	QUESTIONS	MARKS	NATURE
1.	How many types of Hasta Mudra in Kathak? a) 5 b) 2	1	Informative
2.	How many types of Asumyukta Hasta Mudra? a) 28 b) 26	1	Informative
3.	what is the use of Pataka Hasta in kathak dance ? a) To give blessing b) To give money	1	Informative
4.	What is the meaning of Bhoomi Pranam? a) Take permissions from earth before start dancing b) Give thanks to earth end of dancing	1	Informative
5.	Which one is the example of Asumyukta Hasta Mudra ? a) Pranam Hasta b) Tri-Pataka Hast	1	Informative
6.	What is the timing of the bhoomi pranam? a) 1 Minute b) 15 second	1	Informative
7.	What happens first at the beginning? The dance is it bowing to the ground or it a prayer a) Bhoomi Pranam b) Vandana	1	Informative



<b>8.</b>	What are the bole of ganesh vandana? a) Vakratunda Mahakarya b) Guru Brahma	<b>1</b>	<b>Informative</b>
<b>9</b>	What are the one mudras? a) Kapit Mudra b) Anjali Mudra	<b>1</b>	<b>Informative</b>
<b>10</b>	Which mudras has three fingers ? a) Gyan Mudra b) Shloka Mudras	<b>1</b>	<b>Informative</b>



**ARMY PUBLIC SCHOOL GWALIOR**  
**CLASS - V**  
**ACADEMIC SESSION 2024-25**  
**REVISION WORKSHEET (SELF –ASSESSMENT)**



**Subject: Computer**

**Assignment No. : 4**

**Allotment Date: 12 September 2024**

S.NO	QUESTIONS	MARKS	NATURE
1.	<p>Tick the correct answer:</p> <ol style="list-style-type: none"><li>The document we create is called a _____<ol style="list-style-type: none"><li>Folder</li><li>File</li><li>Text</li></ol></li><li>_____ refers to the intersection of a row and a column in the table.<ol style="list-style-type: none"><li>Record</li><li>Cell</li><li>Label</li></ol></li><li>The second generation computers used _____<ol style="list-style-type: none"><li>Transistors</li><li>Vacuum tube</li><li>IC</li></ol></li><li>The _____ generation computers are based on Artificial Intelligence.<ol style="list-style-type: none"><li>First</li><li>Third</li><li>Fifth</li></ol></li><li>Deleted file goes into _____<ol style="list-style-type: none"><li>Music folder</li><li>Recycle bin</li><li>Desktop</li></ol></li></ol>	0.5X5=2.5	Information
2.	<p>Write 'T' for True and 'F' for False statements.</p> <ol style="list-style-type: none"><li>We cannot apply transition in Normal view.</li><li>Word is a popular word processing program.</li><li>The third generation of computers used vacuum tubes.</li><li>A file is a collection of data and information.</li><li>A file can have any number of folders in it.</li></ol>	0.5X5=2.5	Interdisciplinary
3.	<p>Fill in the blanks.</p> <ol style="list-style-type: none"><li>_____ theme is a built-in design for creating a presentation.</li><li>To start Mail Merge, click on _____ tab.</li><li>Abacus was invented by the _____.</li><li>A computer represents files and folders with _____.</li></ol>	0.5X4=2	Analytical Skill

4.	Answer the following :- (i) What is the use of Slide Show? (ii) What is the use of Format Painter? (iii) Name the five key features that Charles Babbage used in Analytical Engine.	1X3=3	Analytical  Skill
----	--	-------	-------------------------