

ARMY PUBLIC SCHOOL GWALIOR
CLASS - IV
ACADEMIC SESSION 2024-25
REVISION WORKSHEET (SELF –ASSESSMENT)



Subject: English

Assignment No. : 4

Allotment Date: 12 September 2024

S.NO.	QUESTIONS	MARKS 40	NATURE
1.	<p>A. Read the following passage and answer the question that follow:</p> <p>A tortoise was resting under a tree. On this tree, a bird had built its nest. The tortoise mocked the bird for having a home built with broken twigs, which it had to build itself. He bragged about his own shell and said the bird must be jealous. The bird told the tortoise that its nest might be shabby, but it had space for its friends and family. At the same time, the tortoise's shell could <i>never</i> accommodate anyone else except the tortoise himself.</p> <p>Moral: A crowded hut is better than a lonely mansion.</p> <p>Now on the basis of above paragraph, answer the following questions:</p> <p>A. Choose the correct option and fill in the blanks:</p> <p>(i) A tortoise was resting under a _____. (a) tree (b) house (c) shade</p> <p>(ii) The tortoise _____ the bird (a) mocked (b) helped (c) slapped</p> <p>B. State 'True' or 'False':</p> <p>(i) He bragged about his own shell and said the bird must be jealous (.....)</p> <p>C. Find the opposite word of 'always' from the above paragraph:</p> <p>D. Answer the following questions in one word:</p> <p>(i) What did the bird tell the tortoise? (ii) Who must be jealous?</p> <p>E. Make sentences on the following words:</p> <p>(i) tree (ii) friends</p> <p>B. Read the following poem and answer the questions</p>	8x1=8	Understanding

given below:

Deep in the night
Like thief- When all is still
A moon beam climbs the window-sill.
Over your bed
It softly flies
To see if sleep has closed your eyes.
A pinch of gold
Some fairy sand
It clasped within that moonbeam's hand
And if by chance
You are not asleep
It comes tip-toe on gentle feet.
To touch your eyes
With golden beams
And take you to the land of dreams.

4X1=4

(1) Tick the correct answer of the following questions.

a) The poet speaks of the moonlight as if it were _____

- i). a watchman
- ii) a thief
- iii) a shadow

(b) moonlight comes on _____

- i) no one
- ii) tiptoe
- iii) aeroplane

(2) Find the opposites of the following words from the passage:

- a) Goes: _____
- b) Opened: _____

(3) From the above lines of the poem, find out the rhyming words of:

- (a) hold _____
- (b) dreams _____

(4) Answer the following questions:

- (a) Who climbs the window sill?
- (b) What does it touch?

<p>2.</p>	<p>GRAMMAR</p> <p>A. Fill in the blanks by choosing the correct options given from the brackets:</p> <p>i) I want _____ (tell) you a secret. (tell / telling /to tell)</p> <p>ii) He reads very _____ (carefully /sourly /thankfully)</p> <p>iii) A rose _____ nice. (smell / smelling / smells)</p> <p>iv) The dress is the _____ in the whole shop (prettier / prettiest / pretty)</p> <p>v) _____ boy is always late. (these /those /this)</p> <p>vi) _____ is an example of uncountable noun. (milk /table /balloons)</p> <p>B. Answer the following questions in one word:</p> <p>i) Nouns are also called _____ words.</p> <p>ii) One example of Adverb of manner is _____</p> <p>iii) Laughing, dancing, eating are examples of _____</p> <p>C. Answer the following questions in short:</p> <p>i) What are verbs?</p> <p>ii) Write down the feminine gender of “lord”</p> <p>D. State the following statements as True or False:</p> <p>i) Article” an” is used for consonant.</p> <p>ii) Words used in place of nouns are called pronouns.</p>	<p>6x1.5=3</p> <p>3x1=3</p> <p>2x1=2</p> <p>2x1=2</p>	<p>Analytical skills</p>
<p>3.</p>	<p>LITERATURE</p> <p>A. Choose the correct option for the following questions:</p> <p>(1) How Elias treat the visitors who came to meet him?</p> <p>a) Behaved rudely</p> <p>b) Welcomed them</p> <p>c) Neglected them</p> <p>(2) Whom did the visitor first meet after landing on the Earth? a) Philosopher</p> <p>b) Cows</p> <p>c) Trees</p> <p>(3) An oak tree lives for _____ years.</p> <p>a) five hundred</p> <p>b) four hundred</p> <p>c) three hundred</p>	<p>3x1=3</p>	<p>Interdisciplinary</p>

B. Answer the following questions with reference to the context:

“These are only vegetables”, said the philosopher. “They are alive, but not at all interesting.”

Answer the following question on the basis of above lines:

- a) Who said these words and to whom?
 - b) Who are “they”?
- Were “they” alive?

C. Answer the following questions in short:

- i) What did the little boy make with the branches of the tree?

Ans. _____

- ii) What theory did the philosopher promise to explain to the visitor?

Ans. _____
—

- (iii) Who would bring the poet’s boat ashore?

Ans. _____

- (iv) Do you think the philosopher should have explained in detail that the trees and cows were not ‘people’? Give reasons to support your answer.

Ans. _____

- (v) Do you think the giant was right when he told the children that it was their garden? Why?

Ans. _____

D. State whether the sentences are True or False:

- a) The King went to the Dragon Mountain all alone.
- b) The Queen asked the King to get the treasure.

2x1=2

5x1=5

2x1=2

4.	WRITING A.) Write an application to the principal of your school asking him for the leave of one week as you are not well B.) Write a paragraph on the topic "I love my Grandparents" (eight sentences) with the help of the given hints: [Old, nice, humble, miss, yoga, walk, parents, pray]	3x2=6	Creative Writing
-----------	--	--------------	-------------------------



ARMY PUBLIC SCHOOL GWALIOR
CLASS - IV



ACADEMIC SESSION 2024-25
REVISION WORKSHEET (SELF –ASSESSMENT)

Subject: Hindi

Assignment No. : 4

Allotment Date: 12 September 2024

संख्या	प्रश्न	अंक	प्रकृति
प्र 1.	<p>दिए गए गद्यांश को पढ़कर उसके नीचे लिखे प्रश्नों के उत्तर लिखो-</p> <p>पानी हर जीवित जीव की प्राथमिक और अनिवार्य आवश्यकता है। यह प्रकृति द्वारा दिया गया सबसे अनमोल उपहार है जो जीवित रहने में मदद करता है। हमारे शरीर का 70% हिस्सा पानी से भरा है, यही वजह है कि यह हमारे जीवन का एक अनिवार्य हिस्सा है। हमें पीने, कपड़े धोने, सफाई करने, खाना पकाने आदि के लिए पानी की आवश्यकता होती है। जैसे ऑक्सीजन के बिना जीवन नहीं है, वैसे ही पानी के बिना अस्तित्व नहीं है। यह समुद्र, महासागरों आदि के रूप में और बर्फ के रूप में भी मौजूद है। यह न केवल मनुष्यों के लिए एक आवश्यक तत्व है, बल्कि पौधों, जानवरों, पक्षियों आदि के अस्तित्व और अस्तित्व के लिए भी महत्वपूर्ण है।</p> <p>निम्नलिखित प्रश्नों के लिए सही विकल्प चुनें ।</p> <p>1. हमारे शरीर का..... हिस्सा पानी से भरा है। (अ) 70% (ब) 80% (स) 50%</p> <p>2. पानी प्रकृति द्वारा दिया गया सबसे अनमोल उपहार है। (अ) विशेष (ब) अनमोल (स) महंगा</p> <p>निम्नलिखित प्रश्न का एक शब्द में उत्तर दें ।</p> <p>1. किसके बिना जीवन संभव नहीं है?</p> <p>_____</p>	4x1=4	बोधात्मक

निम्नलिखित प्रश्न का उत्तर विस्तारपूर्वक दें ।

1. हमें किन-किन कामों में पानी की आवश्यकता होती है?

प्र2.

निम्नलिखित पद्यांश को ध्यानपूर्वक पढ़कर दिए गए प्रश्नों के उत्तर दें ।



1. कविता में दी गई पंक्तियाँ किस के बारे में हैं?
(अ) चिड़िया (ब) पुस्तक (स) प्रकृति
2. कविता में आया गया अनुनासिक शब्द है-
(अ) रंग (ब) दुनिया (स) हँसती
3. कविता में आये कोई दो तुकबंदी वाले शब्द लिखो।


3x1=3

प्र 3

अपने मामा की शादी में जाने हेतु कक्षाध्यापिका को तीन दिनों के अवकाश के लिए प्रार्थना पत्र लिखें ।

3x1=3

रचनात्मक

प्र 4	<p>दिए गए चित्र को देखकर पाँच वाक्य लिखें।</p>  <hr/> <hr/> <hr/> <hr/> <hr/>	2.5x1= 2.5	विश्लेषणात्मक
प्र 5	<p>विद्यालय के खेल के मैदान में आई.डी कार्ड खो जाने की सूचना लिखिए ।</p>	2x1=2	सूचनात्मक

<p>प्र 6</p>	<p>निम्नलिखित प्रश्नों के लिए सही विकल्प चुनें ।</p> <p>(क) संज्ञा के स्थान पर आने वाले शब्दों को..... कहते हैं। (अ) संज्ञा (ब) सर्वनाम (स) विशेषण</p> <p>(ख) “मीठे पेय नहीं पीने चाहिए। “ इस वाक्य में विशेषण शब्द है- (अ) पेय (ब) मीठे (स) चाहिए</p> <p>(ग) इनमें से संयुक्त व्यंजन का एक उदाहरण है- (अ) रक्षक (ब) क्लास (स) गुल्लक</p>	<p>3x1=3</p>	<p>उच्चस्तरीयचिंतन</p>
<p>प्र 7</p>	<p>रिक्तस्थानों की पूर्ति करें ।</p> <p>(क)भाषा के शुद्ध रूप का ज्ञान कराता है।</p> <p>(ख) एक अनुस्वार शब्द का उदाहरण है।</p> <p>(ग) शब्द संज्ञा या सर्वनाम की विशेषता बताते हैं।</p> <p>(घ) हिंदी भाषा की लिपि..... है।</p>	<p>4x1=4</p>	<p>विश्लेषणात्मक</p>
<p>प्र 8</p>	<p>निम्नलिखित प्रश्नों के उत्तर निर्देशानुसार दें।</p> <p>(i) निम्नलिखित संज्ञा शब्द का भेद बताएँ- “हमें रोज़ स्कूल जाना चाहिए।” ----- -----</p> <p>(ii) निम्नलिखित शब्द का वर्ण विच्छेद करें। मेहमान - ----- -----</p> <p>(iii) निम्नलिखित विशेषण शब्दों की सहायता से एक वाक्य बनाएँ। सुंदर - ----- -----</p> <p>(iv) निम्नलिखित शब्दों में दिए गए पाँच सर्वनाम शब्द छाँटकर लिखें दिए गए अनुच्छेद को पूरा करें ।</p>	<p>3x1=3</p> <p>3x1=3</p>	<p>ज्ञानात्मक</p>

	<p>आपका मंदिर मेरे बगीचा वह सड़क</p> <p>मेरा घर नेहरू नगर में है।..... घर कहाँ है? मेरे घर के पास एक बड़ा स्कूल है। राम भी वहीं पर रहता है।..... रोज़ स्कूल जाता है।</p>		
प्र 9	<p>निम्नलिखित शब्दों के अर्थ लिखें।</p> <p>(क) साहस -</p> <p>(ख) करुण -</p> <p>(ग) स्थिर -</p> <p>(घ) घोषणा -</p>	4x1=4	उच्चस्तरीय चिंतन
प्र 10	<p>निम्नलिखित प्रश्नों के उत्तर लिखें।</p> <p>(क) सरगमाथा के ताज पर पहुँच कर बचेंद्री ने क्या किया?</p> <p>(ख) तिरंगे का सफ़ेद रंग किस का प्रतीक है?</p> <p>(ग) स्वामी विवेकानंद का जन्म कब और कहाँ हुआ?</p> <p>(घ) कबूतर ने चींटी को कैसे बचाया?</p> <p>(ड) कबड्डी किन-किन देशों का राष्ट्रीय खेल है?</p>	5x1=5	उच्चस्तरीय चिंतन
प्र 11	<p>निम्नलिखित पंक्तियों के सन्दर्भ में दिए गए प्रश्नों के उत्तर लिखें।</p> <p>(ii) चारों ओर लताएं छायीं, वृक्ष झूमने वाले ऊंचे-ऊंचे पर्वत हैं, आकाश चूमने वाले चिड़ियों के सुमधुर कलरव से गूँज उठी है धरती छाई रहती ऐसी सुषमा प्रकृति सदा ही हँसती </p> <p>(क) “प्रकृति सदा ही हँसती है” - इस वाक्य से क्या तात्पर्य है?</p> <p>(ख) चारों ओर क्या छायीं हुई हैं?</p> <p>(ग) धरती किस के स्वर से गूँज उठी है?</p>	3x1=3	उच्चस्तरीय चिंतन

प्र 12	निम्नलिखित मूल्यपरक प्रश्न का उत्तर लिखें। (क) परोपकार और आत्मविश्वास जीवन में क्या परिवर्तन लाते हैं?	0.5x1=0 .5	जीवन के मूलभूत सिद्धांत



ARMY PUBLIC SCHOOL GWALIOR
CLASS - IV



ACADEMIC SESSION 2024-25
REVISION WORKSHEET (SELF –ASSESSMENT)

Subject: Mathematics

Assignment No. : 4

Allotment Date: 12 September 2024

S. NO.	QUESTIONS:	MARKS	NATURE										
1	Fill in the blanks: (a) The multiple of a number is either greater than or equal to _____. (b) When a number is divided by itself, the quotient is _____. (c) The product of a number with 1 is _____. (d) The number which is to be added to 69834 to get one lakh is _____.	4×1 = 4	Observation										
2	Write whether the following statements are 'True' or 'False': (a) $125489 - 61725 = 61725 + 125489$. (_____) (b) $614 \times 12 = 7084$. (_____) (c) Is 16 a factor of 256? (_____) (d) The sum of place values of 5 in 585635 is 505005. (_____)	4×1 = 4	Mental Ability										
3	Match column A with column B: <table><tr><td>Column A</td><td>Column B</td></tr><tr><td>(a) 7 is a factor of</td><td>(i) 10000</td></tr><tr><td>(b) The smallest odd number</td><td>(ii) divisor</td></tr><tr><td>(c) The number which divides</td><td>(iii) 1</td></tr><tr><td>(d) 1 more than 9999</td><td>(iv) 49</td></tr></table>	Column A	Column B	(a) 7 is a factor of	(i) 10000	(b) The smallest odd number	(ii) divisor	(c) The number which divides	(iii) 1	(d) 1 more than 9999	(iv) 49	4×1 = 4	Decision Making
Column A	Column B												
(a) 7 is a factor of	(i) 10000												
(b) The smallest odd number	(ii) divisor												
(c) The number which divides	(iii) 1												
(d) 1 more than 9999	(iv) 49												
4	Multiple Choice Questions: (a) 3546 can be divisible by (i) 5 (ii) 4 (iii) 8 (iv) 9 (b) How many 4s are there in 1000? (i) 100 (ii) 125 (iii) 250 (iv) 375 (c) The value of 65×11 is (i) 345 (ii) 675 (iii) 715 (iv) 925 (d) How many 4s are there in 1000? (i) 100 (ii) 125 (iii) 250 (iv) 375	4×1 = 4	Understanding										
5	Do as directed: (a) Find the LCM of 3, 9, 21. (b) Write the prime factorization 72 by making a factor tree. (c) Find the HCF of 36, 48, 64. (d) Solve $215 + 405 \times 48 \div 8 - 34$ (e) Estimate the quotient $575 \div 55$ to the nearest hundreds. (f) Divide 2389 by 14 and find the quotient and remainder.	6×2 =12	Problem-Solving										
6	Read the word problems and solve them: (a) The product of two numbers is 1820. If one number is 35, What is the other number?	4×3 =12	Critical Thinking										

- | | | |
|--|--|--|
| <p>(b) A bus carries 164 passengers in a day. How many passengers will it carry in a normal year?</p> <p>(c) By how much is 682135 greater than 419762?</p> <p>(d) Frame a word problem for $850 \div 10 = 85$.</p> | | |
|--|--|--|



**ARMY PUBLIC SCHOOL GWALIOR
CLASS - IV**



**ACADEMIC SESSION 2024-25
REVISION WORKSHEET (SELF –ASSESSMENT)**

Subject: EVS

Assignment No. : 4

Allotment Date: 12 September 2024

S. NO.	QUESTIONS	MARKS	NATURE
Q1	Choose the correct option. .i. It is not an outdoor game. a. Football b Hockey c. Ludo ii. _____ give birth to their young ones. a. Insects b. Reptiles c. Mammals	2x1=2	Information
Q2	Match the following. A a. Birds b. Monkeys c. Eliminates sweat d. Sports B i. Team spirit ii. Skin iii. Egg iv. Troop	4x1=4	
Q3	Give one word of the following. i. Group of birds ----- ii. Only one set of parents and siblings are there in this type of family. _____	2x1=2	
Q4	State, whether 'True' Or 'False'. i. Fried foods are nutritious. [] ii. Lame people use prosthetic limbs to move around. []	2x1=2	
Q5	Give example for the following. i. Dairy product. ----- ii. The master organ of our body. -----	2x1=2	
Q6	Choose the odd one out. .i. Lungs, Stomach, Windpipe, Nose ii Chess, Ludo, Carrom, Volleyball	2x1=2	

Q7	<p>Fill in the blanks.</p> <p>i. The largest internal organ is -----.</p> <p>ii. The _____ pumps blood and sends it to all parts of the body.</p>	2X1=2	Understanding
Q8	<p>Give reason for the following.</p> <p>i. Mid- day meal is very important.</p> <p>_____</p> <p>ii. Blind people cannot use sign language.</p> <p>_____</p>	2X1=2	HOT
Q9	<p>. Draw a neat diagram of parts of teeth.</p> <p>_____</p> <p>_____</p> <p>_____</p>	1x2=2	
Q10	<p>Answer the following question in short.</p> <p>i. What is an occupation?</p> <p>_____</p> <p>_____</p> <p>ii. Why do animals live in groups?</p>	2x2=4	

<p>Q11</p>	<hr/> <hr/> <p>Answer the following question in detail.</p> <p>i.What is langar? Who started this tradition?</p> <hr/> <hr/>	<p>4x3=12</p>	
	<p>ii. Write any two differences between aquatic and amphibians.</p> <hr/> <hr/> <p>iii. Write any two differences between wading and swimming birds.</p> <hr/> <hr/> <p>iv. Why should we eat a balanced diet daily?</p> <hr/> <hr/>		<p>Analytical Skill</p>
<p>Q.12</p>	<p>Arrange the following in Pie diagram.</p> <p>v. We have 4 incisors+2 canines+4 premolars+6 molars=16 teeth in our upper jaw. Arrange them in a pie diagram.</p> <hr/> <hr/> <hr/>	<p>1X2=2</p>	<p>Evaluation</p>
<p>Q 13.</p>	<p>Choose the correct option.</p>	<p>4x.5=2</p>	<p>Geographical Awareness</p>

i. The largest continent is-----

- a. Asia b Europe c. Australia

ii How many oceans are there in the world?

- a. Five b. Eight c. Six

iii. Which country is not a neighbour of India?

- a. Sri Lanka b. Nepal c. France d. Bhutan

iv. Locate Himachal Pradesh in political map of India.



**ARMY PUBLIC SCHOOL GWALIOR
CLASS - IV**






**ACADEMIC SESSION 2024-25
REVISION WORKSHEET (SELF –ASSESSMENT)**

Subject: G.K

Assignment No. : 4

Allotment Date: 12 September 2024

S.NO	QUESTIONS	MARKS	NATURE
1.	<p>Fill in the blanks.</p> <p>a) Durand cup is related to the game of _____.</p> <p>b) _____ is the leader of a honey bee colony.</p> <p>c) _____ is a spice grows underground. It is also added in tea to get relief from cold.</p> <p>d) Structure of bones that protects our heart and lungs is _____.</p> <p>e) The tenure of the President of India is for _____ years.</p>	5x1=5	Informative and general awareness
2.	<p>Identify the following pictures.</p> <p>a) _____</p>  <p>b) _____</p>  <p>c) _____</p> 	5x1=5	Identification and general awareness




d) _____



e) _____

3.	Match the following A 1. Hang in there 2. Miss the boat 3. Book with maps of cities, states, countries. 4. Book you carry to school for study. 5. As black as B a) coal b) atlas c) textbook d) it is too late e) do not give up	5 Marks	
4.	Write True or false. 1. Larynx is the voice box that helps us make sound. 2. Do not wash your hands and face before sitting to eat. 3. Mukesh Ambani is the Chairman and Managing Director of Reliance Industries limited. 4. Bhagat Singh was popularly known as Punjab Kesari. 5. The Prime Minister is the head of our country.	5 Marks	



**ARMY PUBLIC SCHOOL GWALIOR
CLASS - IV**



ACADEMIC SESSION 2024-25




REVISION WORKSHEET (SELF –ASSESSMENT)

Subject: Art and Work Education

Assignment No. : 4

Allotment Date: 12 September 2024

S.NO	QUESTIONS	MARKS	SKILLS
1.	Which of these is the primary color? a) Green b) Orange c) Red d) Purple	1	Creativity
2.	Which of these is the Secondary color? a) Red b) Yellow c) Blue d) Orange	1	Creativity
3.	Which of these is the Tertiary color? a) Red Orange, Red Violet, Blue Green, Blue Violet, Yellow Orange and Yellow Green b) Red, Orange, and Yellow c) Blue, Green, and Purple d) Red yellow blue	1	Creativity
4.	_____ is a Warm Color. a) Blue b) Green c) Orange d) Purple	1	Creativity
5.	_____ is a Cool Color. a) Light purple b) Yellow c) Orange d) Pink	1	Creativity
6.	Pink is a Tertiary Color. a) True b) False	1	Creativity
7.	The combination of primary and secondary colors is known as tertiary colours. a) True b) False	1	Creativity

8.	<p>Colors that cannot be produced by mixing other colors are termed _____ colors.</p> <p>a) Secondary b) primary c) warm d) Cool</p>	1	Creativity
9.	<p>Secondary colors are mixed from _____ colors.</p> <p>a) Two Secondary b) Two Primary c) Two Tertiary d) Two Cool</p>	1	Creativity
10.	<p>Which among these is the picture of Tertiary Colors?</p> <p>A</p>  <p>The Tertiary Color Wheel is a circular diagram showing the spectrum of colors. It is divided into 12 segments, each labeled with a color name. Starting from the top and moving clockwise, the segments are: Red, Red-Orange, Orange, Yellow-Orange, Yellow, Yellow-Green, Green, Blue-Green, Blue, Blue-Violet, Violet, and Red-Violet.</p> <p>B</p>  <p>C</p> 	1	Creativity



**ARMY PUBLIC SCHOOL GWALIOR
CLASS - IV**



ACADEMIC SESSION 2024-25

REVISION WORKSHEET (SELF –ASSESSMENT)

Subject: Health and Physical Education

Assignment No. : 4

Allotment Date: 12 September 2024

S.N	QUESTIONS	NATURE	MARKS
1	MCQ A) How many players from each team are allowed to be on the field of Handball? i) 7 ii) 5 iii) 6 iv) 8	Understanding)	4×1=4
	B) What size is Handball court? i) 20 X 30 m ii) 20 X 40 m iii) 20 X 50 m iv) 20 X 60 m	Informatory	
	C) Penalties are thrown from what distance? i) 11 m ii) 9 m iii) 7 m iv) 4 m	Analytical	
	D) Who is Babacar Fall? i) American Handball Player ii) Former president of European Handball Federation iii) Italian Handball Coach iv) Architect of African Handball	Information	
2.	B) Fill In The Blanks :- i) _____ is one of the best handballer in history.	Informatory	3×1=3
	ii) The playing area is _____ m.	Informatory	

	iii) After Three-minute suspensions, player get a _____ card.	Understanding	
3.	True/False i. Germany is cradle of the Handball? True False	Understanding	3×1=3
	ii. Beach Handball does not exist? True False	Understanding	
	iii. There is no shot clock? True False	Understanding	

S.N	QUESTIONS	MARKS	SKILLS/COMPETENCIES
1	<p>Shorts answer question</p> <p>1.what was chess originally called in india ?</p> <p>a) box game b) chaturanga c) 8x8 grid d) box chess</p>	1	INFORMATION

2	<p>2. name the most popular tag game in india.</p> <p>a) chain chain b) ice water c) pakadam pakdai d) kho kho</p>	1	INFORMATION
3	<p>3. played with seven stones is called?</p> <p>a) 7 wonder b) 7 square c) Sitholia d) 7 chance</p>	1	INFORMATION
4	<p>4. a game with seven members in each team is called?</p> <p>a) kho kho b) football c) cricket d) realy 100 m</p>	1	INFORMATION
5	<p>FILL IN THE BLANKS: -</p> <p>1. The _____ is a small oval shaped piece of wood.</p> <p>a) Lattoo b) Plastic ball c) Kancha d) Hand ball</p>	1	INFORMATION
6	<p>2. There are _____ player in each team of kho kho</p> <p>a) 7 b) 4 c) 8 d) 9</p>	1	INTERDISCIPLINARY

7	<p>3. Jumping games good for student_____.</p> <p>A) Health</p> <p>B) Ground</p> <p>C) Cone</p> <p>D) Dress</p>	1	INTERDISCIPLINARY
8	<p>1) We can play indigenous games indoor as well as outdoor. (True/False)</p>	1	INTERDISCIPLINARY
9	<p>9. we play games to be healthy and strong. (True/ False)</p>	1	UNDERSTANDING
10	<p>10.Junk food is good for health. (True/False)</p>	1	UNDERSTANDING



**ARMY PUBLIC SCHOOL GWALIOR
CLASS - IV**



**ACADEMIC SESSION 2024-25
REVISION WORKSHEET (SELF –ASSESSMENT)**


Subject: Music (Vocal)

Assignment No. : 4

Allotment Date: 12 September 2024

S. NO.	QUESTIONS	MARKS	NATURE
1	What type of song is "Ram Aayenge To Angana Sajaungi"? a) Patriotic b) Bhajan	1	Informative
2	Achyutam Keshavam _____ Damodaram ? a) Ram b) krishna	1	Informative
3	Payoji Maine _____ Ratan Dhan Payo ? a) Ram b) krishna	1	Informative
4	Payo ji maine Ram ratan dhan payo" who has sung this bhajan? a) Lata mangeshkar b) Anuradha podwal	1	Informative
5	How many parts of congo are there? a) Three b) Two	1	Informative
6.	How many counting are there in kahrwa Taal? a) 8 b) 15	1	Informative
7.	How many division are there in Kaharwa taal? a) 2 b)10	1	Informative
8.	How many tali are there in Kaharwa taal? a) 1 b) 4	1	Informative

9,	How many khali are there in Kaharwa taal? a) 1 b) 5	1	Informative
10.	Dadra taal is played with which type music ? a) classical b) Light music	1	Informative



**ARMY PUBLIC SCHOOL GWALIOR
CLASS - IV**




**ACADEMIC SESSION 2024-25
REVISION WORKSHEET (SELF –ASSESSMENT)**


Subject: Dance

Assignment No. : 4

Allotment Date: 12 September 2024

S. NO.	QUESTIONS	MARKS	NATURE
1	Which musical instrument is commonly used during a "Ganesh Vandana" performance in Kathak? A) Tabla B) Harmonium C) sitar D) Flute	1	Informative
2	What is "Ganesh Vandana" in Kathak nritya? A) Dhyaan ka ek roop B) Bhagavaan Ganesh ka aahvaan C) Ek pratispardhee nrty shailee D) Ek prakaar ka phutvark	1	Informative
3	Which god is praised in Ganesh Vandana ? A) Brahma B) Vishnu C) Mahesh D) Ganesh	1	Informative
4	In which classical dance Ganesh Vandana is not performed A) Kathak B) Bharatanatyam C) Odissi D) Kathakali	1	Informative
5	Which type of dance is Ganesh Vandana ? A) Tandav B) Lasya C) Nritya	1	Informative

	D) Sringar		
6.	<p>Which emotion is expressed in Ganesh Vandana?</p> <p>A) Veer Ras</p> <p>B) Shringar Ras</p> <p>C) Shant Ras</p> <p>D) Bhakti Ras</p>	1	Informative
7.	<p>In Kathak dance _____ is worshipped first</p> <p>A) Ganapati</p> <p>B) Devi</p> <p>C) Gandharv</p> <p>D) Natya</p>	1	Informative
8.	<p>In which rhythm is Ganesh Vandana performed?</p> <p>A) TeenTaal</p> <p>B) Dhamar</p> <p>C) sawari</p> <p>D) Rudra Taal</p>	1	Informative
9,	<p>What is the main purpose of Ganesh Vandana in Kathak dance?</p> <p>A) Ganesh ki stuti</p> <p>B) Ganesh ki aarti</p> <p>C) Ganesh ki Vandana</p> <p>D) Ganesh ka Abhishek</p>	1	Informative
1	<p>Which is the picture of Ganesh?</p> 	1	Informative



ARMY PUBLIC SCHOOL GWALIOR
CLASS - IV
ACADEMIC SESSION 2024-25
REVISION WORKSHEET (SELF –ASSESSMENT)

Subject: Computer

Assignment No. : 4

Allotment Date: 12 September 2024

S.NO.	QUESTIONS	MARKS	NATURE
1.	<p>Tick the correct answer:</p> <ol style="list-style-type: none"> 1. A presentation program developed by Microsoft is _____ a. Word b. Paint c. PowerPoint 2. There are _____ main views of the presentation. a. Five b. Four c. Six 3. _____ is a volatile memory. a) Hard Disk b) RAM c) ROM 4. _____ text means adjusting the text around the images accordingly. a) Inserting b) Wrapping c) Review 5. The final screen of Windows is known as _____. a) Taskbar 	0.5X5=2.5	Information
2.	<p>Write 'T' for True and 'F' for False statements.</p> <ol style="list-style-type: none"> (i) A group of slides on any one topic is called a presentation. (ii) Motherboard is also known as system board. (iii) Copying removes the text from its original location. (iv) Booting is the process of starting and restarting a computer. (v) We can adjust the volume of audio in the computer. 	0.5X5=2.5	Interdisciplinary
3.	<p>Fill in the blanks.</p> <ol style="list-style-type: none"> 1. The default extension of PowerPoint 2016 file is _____. 2. _____ port is used to connect the Internet and network cable. 3. _____ a text means the text disappears from its original location. 4. _____ or the Task View is used to switch between the running apps. 	0.5X4=2	Analytical Skill
4.	<p>Answer the following :-</p> <ol style="list-style-type: none"> (i) What is the use of PowerPoint? (ii) What are the different text alignment options in Word? 	1X3=3	Analytical

	(iii) Name the different ways to set positioning of wallpaper on desktop.		Skill
--	---	--	-------