

**ARMY PUBLIC SCHOOL GWALIOR**  
**CLASS - III**  
**ACADEMIC SESSION 2024-25**  
**REVISION WORKSHEET (SELF –ASSESSMENT)**



**Subject: English**

**Assignment No. : 4**

**Allotment Date: 12 September 2024**

S.NO	QUESTIONS	MARKS 30	NATURE
1.	<p><b>Tick the correct answer:</b></p> <p>Read the following passage carefully and answer the questions given below based on the passage:</p> <p>Dogs are one of the most popular pets in the world. They are known to be loyal and protective of their owners. Dogs come in different shapes, sizes and breeds. Some breeds, such as poodles and golden retrievers, are known to be smart and easy to train. Other breeds, such as bulldogs and pugs, are known for being cute and playful.</p> <p>Dogs are also used for various purposes. Some dogs help blind or disabled people. These dogs are called service dogs. Other dogs help catch criminals or find missing persons. These dogs are called police dogs or search and rescue dogs. Dogs are also used to herd sheep and cattle on farms.</p> <p>Q.1 Answer in one word: a) Which is one of the most popular pets in the world?</p> <p>Q.2 State whether True or False: a) Dogs are independent and aloof. _____ b) Dogs are loyal and protective of their owners. _____</p> <p>Q.3 Choose the correct option: Some common breeds of dogs known for being easy to train are _____.</p> <p>a) Poodles and Golden Retrievers b) Bulldogs and Pugs c) Rottweiler's and Dobermans d) German Shepherds and Boxers</p> <p>Q.4 Make sentence: a) police - _____</p> <p>Q.5 Find and write the opposite of given words from the passage: (a) hard- _____</p>	3X1=3	Understanding
2.	<p>Read the following poem carefully and answer by selecting the correct options given below:</p>	2X1=2	Information

<p>3.</p>	<p>The First Day of School  I've got a brand-new lunchbox.  My shoes are shiny clean.  I've got a cool, new book bag  And a pencil box that's green.  But I don't know my teacher,  Or where my desk will be.  I don't know if I'll like the kids,  Or if they'll play with me.  I peep inside my classroom.  I stand there for a while.  My teacher's tall and kind of loud,  But has a great big smile.  And, best of all, she's got my  Favorite book upon the shelf!  I kiss my mother at the door  And walk in by myself.</p> <p>Choose the correct option:  1) The child has got a pencil box which  is.....  a) red  b) green  c) yellow  d) pink  2) .....came to drop the child at the school.  a) Father  b) Grandmother  c) Teacher  d) mother  3) Find the opposite of the word 'short' from the poem.  Ans.....  4) What did the child like about the teacher?</p> <p>Ans.....  ...  .....  ...</p> <p>Fill in the blanks by choosing the correct options  Given below:  ( acute, white stars, water , traveller, Wilbur Wright, parents  and brother, flower)</p> <p>Strangely the seed did not .....</p> <p>The first motor-powered aeroplane was flown by  .....</p> <p>(c) The poet could see ..... in the sky.</p> <p>(d) Sadiq explained that the ..... level had gone  down.</p> <p>(e) In summer, we face ..... Shortage of water in  many places.</p>	<p>7x1=7</p>	<p>Thinking and  Writing Skills</p>
-----------	-----------------------------------------------------------------------------------------------------------------------------------------------------------------------------------------------------------------------------------------------------------------------------------------------------------------------------------------------------------------------------------------------------------------------------------------------------------------------------------------------------------------------------------------------------------------------------------------------------------------------------------------------------------------------------------------------------------------------------------------------------------------------------------------------------------------------------------------------------------------------------------------------------------------------------------------------------------------------------------------------------------------------------------------------------------------------------------------------------------------------------------------------------------------------------------------------------------------------------------------------------------------------------------------------------------------------------------------------------------------------------------------------------------------------------------------------------------------------------------------------------------------------------------------	--------------	-----------------------------------------

	<p>(f) The ..... wanted to go across the water.</p> <p>(g) When Bina cut the cake, she missed her ..... .....</p>		
4.	<p>State whether the following statements are 'True' or 'False':</p> <p>(a). Student is a collective noun. ....</p> <p>(b) Gender used to denote female/girls are known as feminine gender .....</p> <p>(c) The emperor admired Chang's flower. ....</p> <p>(d) The poet's family does not love him. ....</p> <p>(e) Possessive form of a noun is used to show ownership .....</p> <p>(f) a collection of flowers is called bouquet. ....</p> <p>(g) aeroplane can walk upside down. ....</p>	7x1=7	Analytical skill
5.	<p>Answer the following questions :( Think and Answer) Do you think that Isaac Newton was a great scientist? Give two reasons in support of your answer.</p> <p>..... ... ..... ... ..... ... ..... ... .....</p>	3x1=3	Observation
6.	<p>Write an invitation to your friend inviting him to the marriage anniversary of your parents:</p> <p>..... ... ..... ... ..... ... .....</p>	2.5x1=2.5	
7.	<p>..... ..... .....</p>	2.5x1=2.5	
8.	<p>Write a letter to your uncle thanking him for sending a pair of skates that you always wanted to buy: ( write it behind the worksheet or on A4 size paper and attach it with worksheet).</p> <p>Answer with reference to the context. Read the given sentence and answer the questions that follow.</p> <p>" Don't worry, we have a special New Year celebration here. Moreover, we have Mr alien as our companion".</p>	3x1=3	Problem solving

	a) Who said these words? b) Who were having New year celebration? c) Who was the companion?		



**ARMY PUBLIC SCHOOL GWALIOR**  
**CLASS - III**  
**ACADEMIC SESSION 2024-25**  
**REVISION WORKSHEET (SELF –ASSESSMENT)**




Subject: Hindi

Assignment No. : 4

Allotment Date: 12 September 2024


S. NO.	QUESTIONS	MARKS	NATURE
1.	<p>निम्नलिखित गद्यांश को ध्यानपूर्वक पढ़ें तथा दिए गए प्रश्नों के उत्तर दें -</p> <p>अमित की राशन की दुकान थी। उसकी दुकान पर दालें, चावल और आटे से लेकर नमकीन, बिस्कुट आदि सब कुछ मिलता था। ऐसी कोई चीज़ न होगी जो उसकी दुकान पर न मिलती हो। एक बार दुकान पर रखी शहद की बोतल उलट गई। चारों ओर से कई मक्खियाँ उस बिखरे शहद पर टूट पड़ीं। सब कुछ भूलकर वे शहर चाटने लगीं। वे शहद चाटने में इतनी मगन हो गईं कि उन्हें पता ही नहीं चला कि कब उनके पैर शहद में चिपक गए। अब उनके लिए उड़ना मुश्किल हो गया। उन्हें अपने लालच पर पछतावा होने लगा।</p> <p><b>अभ्यास के लिए नीचे लिखे प्रश्नों के उत्तर दीजिए :-</b></p> <p>(क) अमित की किस चीज़ की दुकान थी?</p> <p>-----</p> <p>(ख) अमित की दुकान पर मिलने वाली कोई दो चीजों के नाम लिखे?</p> <p>-----</p> <p>(ग) ऊपर दिए गद्यांश में से संज्ञा शब्द और सर्वनाम शब्द छाँटकर लिखिए।</p> <p>(i) संज्ञा – _____ (ii) सर्वनाम – _____</p>	1x2.5=2.5	
2.	<p>(घ) सही (✓) या गलत (×) का निशान लगाओ।</p> <p>(i) अमित की राशन की दुकान थी। _____</p> <p>(ii) मक्खियों के पैर शहद में चिपक गए। _____</p> <p><b>निम्नलिखित पद्यांश को पढ़कर दिये गए प्रश्नों के उत्तर दीजिए:</b></p> <p>जो फूलों से खिल जाते हैं, काँटों में भी मुस्कुराते, सारे जग को महकाते, प्यार सभी का वे पाते। करें बड़ों का जो आदर, दें छोटों को स्नेह मधुर, काम दूसरों के वे आते, सबके दिल में वे बस जाते। पढ़-लिखकर जो विद्वान बनें, पाकर ज्ञान महान बनें, दुनिया को वे कुछ दे जाते, सम्मान सभी का वे पाते।</p> <p>(क) कैसे लोग सभी का प्यार पाते हैं?</p> <p>(i) फूलों को खिलाने वाले</p>	1x2.5=2.5	

	<p>(ii) मुश्किलों में हँसने वाले          (iii) जग को महकाने वाले          (iv) पढ़-लिख जासब</p> <p>(ख) दूसरों के काम आने वाले लोगों के साथ क्या होता है?          (i) सब उन्हें भूल जाते हैं          (ii) सब उनकी बुराई करते हैं          (iii) सबके दिल में बस जाते हैं          (iv) इनमें से कोई नहीं</p> <p>(ग) कैसे लोग दुनिया को कुछ दे जाते हैं?          (घ) 'ज्ञान' का विलोम शब्द लिखिए।          (ङ) यह काव्यांश हमें क्या संदेश देता है? (मूल्यपरक)</p>		
<p>3.</p>	<p>(क) विद्यालय में प्रवेश प्राप्ति के लिए प्रधानाचार्य को प्रार्थना पत्र लिखें।          (ख) 'मेरा प्रिय मित्र' विषय पर अनुच्छेद लिखें। (100 शब्दों में)          (ग) दिए गए चित्र को देखकर पाँच (५) वाक्य लिखें।</p>  <p>.....          .....          .....          .....</p>	<p><math>1 \times 2.5 = 2.5</math>  <math>1 \times 3 = 3</math>  <math>1 \times 2.5 = 2.5</math></p>	
<p>4.</p>	<p>प्रश्नों के उत्तर निर्देशानुसार दें -          (क) निम्नलिखित शब्दों के 2-2 पर्यायवाची शब्द लिखो -          (i) पानी _____ , _____          (ii) बादल _____ , _____</p> <p>(ख) निम्नलिखित शब्दों के विलोम शब्द लिखो -          (i) आज _____ (ii) नेक _____</p> <p>(ग) निम्नलिखित शब्दों के वचन बदलिए -          (i) मुरगा _____ (ii) ताला _____</p>	<p><math>5 \times 1 = 5</math></p>	



	<hr/> <hr/>		
<b>8.</b>	<p>मूल्यपरक प्रश्न</p> <p>(i) पशु -पक्षियों के साथ कैसा व्यवहार करना चाहिए?</p> <hr/> <hr/> <hr/> <hr/> <hr/> <hr/>	1x1=1	





**ARMY PUBLIC SCHOOL GWALIOR**  
**CLASS - III**  
**ACADEMIC SESSION 2024-25**  
**REVISION WORKSHEET (SELF –ASSESSMENT)**

Subject: Mathematics

Assignment No. : 4

Allotment Date: 12 September 2024

S. NO.	QUESTIONS	MARKS	NATURE
1.	<b>Fill in the blanks:</b>  (i) $98 \times 100 = \dots\dots\dots$  (ii) $2000 - 0 = 2000 + \dots\dots\dots$  (iii) $908 + 560 = \dots\dots\dots 450 + 750 (>, <, =)$  (iv) $8 \times 8 \dots\dots\dots 8 \times 8 (>, <, =)$  (v) $II + VI = \dots\dots\dots$ (Write in Roman Numerals)	5x0.5=2.5	Problem Solving
2.	<b>Write whether the following statements are 'True' or 'False':</b>  (i) 5699 is one less than 5698. .....  (ii) $14 \times 16 \times 900 = 6 \times 900 \times 14$ .....  (iii) The place value of 4 in 4589 is 4000. .....  (iv) The successor of 4984 is 4985. .....  (v) Double of 100 is 150. .....	5x0.5=2.5	
3.	<b>Match the column A with column B:</b>  A  (i) The predecessor of 2576  (ii) $13 \times 9$  B  (a) 117  (b) the number itself	5x0.5=2.5	

	<p>(iii) The product of a number and 1 is always (c) III</p> <p>(iv) The expanded form of 3679 (d) 2575</p> <p>(v) Half of VI (e) <math>3000 + 600 + 70 + 9</math></p> <p><b>4. Multiple Choice Questions:</b></p> <p>(i) <math>8000 - 0 = ?</math></p> <p>(a) 9000 (b) <math>5000 + 3000</math> (c) 0</p> <p>(ii) The product of place value of 6 in 7637 and 6 is</p> <p>(a) 600 (b) 3600 (c) 60</p> <p>(iii) How many zeros are there in the product of <math>41 \times 400</math>?</p> <p>(a) 4 (b) 6 (c) 7</p> <p>(iv) If we subtract 100 from a 4 - digit number, which place digit will be changed?</p> <p>(a) thousand (b) hundred (c) tens</p> <p>(v) Which is not a part of the Roman numeral system?</p> <p>(a) I (b) U (c) X</p> <p><b>5. Solve the following:</b></p> <p>(i) Arrange the following numbers in ascending order: 700,966,249,411</p> <p>(ii) If <math>347 + 540 = 887</math>, Find: <math>3470 + 5400 = \dots\dots\dots</math></p>	<p><b>5x0.5=2.5</b></p> <p><b>5x1=5</b></p>	
--	-----------------------------------------------------------------------------------------------------------------------------------------------------------------------------------------------------------------------------------------------------------------------------------------------------------------------------------------------------------------------------------------------------------------------------------------------------------------------------------------------------------------------------------------------------------------------------------------------------------------------------------------------------------------------------------------------------------------------------------------------------------------------------------------------------------------------------------------------------------------------------------------------------------------------------------------------------------------------	---------------------------------------------	--

(iii)  $3000 - \dots\dots\dots = 2999$

(iv) Which one is greater-  $15 + 15 + 15 + 15$  or  $15 \times 7$

(v) Estimate the sum by rounding off each number to the nearest tens.

$$95 + 77$$

6.

**Solve the following:**

(i) Find the difference:

$$8395 - 5249$$

(ii) Find the value –

$$4000 - 3587 + 500$$

---

$$5 \times 1 = 5$$

(iii) Break up the following numbers and find the sum.

$$46 + 21$$

(iv) Write the following in figures and then add.

Nine thousand eight hundred fifty four and one thousand  
seven hundred four.

(v) Multiply the following:

$$365 \times 13$$

<b>7.</b>	<b>Frame a word problem for the following facts:</b>  (i) $50 - 40 = 10$  .....  .....  .....  .....  .....  .....  (ii) $6 \times 7 = 42$  .....  .....  .....	<b><math>2 \times 2 = 4</math></b>	<b>Understanding</b>

<b>8.</b>	<p>(i) Find the product by using the lattice multiplication method:</p> <p style="text-align: center;"><math>72 \times 45</math></p>	<b>2x1=2</b>	<b>Critical thinking</b>

	<p>(ii) Find the difference and check your answer by addition.</p> $4026 - 3215$		
<b>9.</b>	<p><b>Solve the following word problems.</b></p> <p>(i) Out of 4000 students in a school, 25476 are boys. How many girls are there?</p> <p>(ii) A page contains 1175 words. How many words are there in 7 such pages?</p>	<b>2 x 2 = 4</b>	<b>HOTS</b>

- |  |                                                                                                        |  |  |
|--|--------------------------------------------------------------------------------------------------------|--|--|
|  | <p>(i) Estimate the difference by rounding off each number to the nearest hundreds :<br/>487 - 269</p> |  |  |
|--|--------------------------------------------------------------------------------------------------------|--|--|





**ARMY PUBLIC SCHOOL GWALIOR**  
**CLASS - III**  
**ACADEMIC SESSION 2024-25**  
**REVISION WORKSHEET (SELF –ASSESSMENT)**



**Subject: EVS**

**Assignment No. : 4**

**Allotment Date: 12 September 2024**

S. NO.	QUESTIONS	MARKS	NATURE												
Q.1	<p><b>CHOOSE THE CORRECT OPTION-</b></p> <p>(i) _____ tree is also known as the tree with a thousand uses. (a) Apple (b) Coconut (c) Mango (d) Grapes</p> <p>(ii) _____ plants need less water to grow. (a) Desert (b) Herbal (c) Aquatic (d) Non-flowering</p> <p>(iii) _____ is not a shrub (a) Lemon (b) Rose (c) Hibiscus (d) Spinach</p> <p>(iv) _____ performs photosynthesis. (a) Stems (b) Flowers (c) Leaves (d) Roots</p>	4x1=4	THINKING SKILL												
Q.2	<p><b>Match the column A with column B:</b></p> <table style="width: 100%;"><thead><tr><th style="text-align: center;">A</th><th style="text-align: center;">B</th></tr></thead><tbody><tr><td>(i) Creeper</td><td>(a) mango</td></tr><tr><td>(ii) used in pooja</td><td>(b) pumpkin</td></tr><tr><td>(iii) Beehives</td><td>(c) green pigment</td></tr><tr><td>(iv) Chlorophyll</td><td>(d) medicinal values</td></tr><tr><td>(v) Neem leaves</td><td>(e) honeybees</td></tr></tbody></table>	A	B	(i) Creeper	(a) mango	(ii) used in pooja	(b) pumpkin	(iii) Beehives	(c) green pigment	(iv) Chlorophyll	(d) medicinal values	(v) Neem leaves	(e) honeybees	4x1=4	
A	B														
(i) Creeper	(a) mango														
(ii) used in pooja	(b) pumpkin														
(iii) Beehives	(c) green pigment														
(iv) Chlorophyll	(d) medicinal values														
(v) Neem leaves	(e) honeybees														
Q.3	<p><b>Fill in the blanks by choosing the correct options:</b> (birds, stems, guard, grandparents)</p> <p>(a) Shrubs have branched _____.</p>	4x1=4													

- (b) \_\_\_\_\_ are the only animals on Earth with feathers.
- (c) A family tree always starts from the \_\_\_\_\_.
- (d) A \_\_\_\_\_ keep us safe from thieves.

**Q.4**

**State whether the given statements are True/False:**

**2x1=2**

- 1) Our family is the smallest unit of society. ....
- 2) According to law, it is illegal to employ a child below 14 years of age. ....

**Q.5**

**Answer the following questions in one word:**

**1X2=2**

- (i) Write the name of any one type of a family. \_\_\_\_\_
- (ii) Write the name of one terrestrial animal. \_\_\_\_\_

**Q.6**

**Circle the odd one out.**

**1X2=2**

- (i) Penguin, Eagle, Ostrich, Emu
- (ii) Policeman, Guard, Firefighter, Baker
- (iii) Baseball, Cricket, Chess, Hockey

**Q.7**

**Identify the following pictures:**

**1x2=2**



\_\_\_\_\_




**1x1=1**

<b>Q.8</b>	<b>Draw the diagram of a herb and a shrub.</b>		
<b>Q.9</b>	<b>Give one example of each :</b>  (i) Carnivore animal _____  (ii) Omnivore animal _____	<b>1x2=2</b>	
<b>Q.10</b>	<b>Answer the following questions in short :</b>  (i) List some food items that we get from plants.  _____  _____  _____   (ii) Why is leaf an important part of a plant?	<b>3x1=3</b>	<b>THINKING SKILL</b>

	<hr/> <hr/> <hr/> <p>(iii) What are hereditary traits?</p> <hr/> <hr/> <hr/>		
<b>Q.11</b>	<p><b>Answer the following questions in detail:</b></p> <p>(i) What are mammals?</p> <hr/> <hr/> <p>(ii) Name the different types of beaks.</p> <hr/> <hr/>	<b>2x1=2</b>	<b>THINKING SKILL</b>

<p><b>Q.12</b></p>	<hr/> <p><b>Choose the correct option:</b></p> <p>(i) How many planets are there in our Solar System?</p> <p>Seven                  Eight                  Nine</p> <p>(ii) How many oceans are there in the world?</p> <p>Five                  Seven                  Eight</p>	<p><b>1x1=1</b></p>	<p><b>OBSERVATION</b></p>
--------------------	-----------------------------------------------------------------------------------------------------------------------------------------------------------------------------------------------------------------------------------------------------------------------------------	---------------------	---------------------------

<b>Q.13</b>	<b>Locate the following places on the World Political Map of India:</b> (i) Lakshadweep Island (ii) Arctic Ocean	<b>1X1=1</b>	<b>CRITICAL THINKING</b>
-------------	------------------------------------------------------------------------------------------------------------------------	--------------	--------------------------



**ARMY PUBLIC SCHOOL GWALIOR**  
**CLASS - III**  
**ACADEMIC SESSION 2024-25**  
**REVISION WORKSHEET (SELF –ASSESSMENT)**



**Subject: G.K**

**Assignment No. : 4**

**Allotment Date: 12 September 2024**

S. NO.	QUESTIONS	MARKS	NATURE														
1.	<p><b>Fill in the blanks by choosing the correct options given below:</b></p> <p>( Silver , Rajasthan , Heart, Urals )</p> <p>(i) _____ is the largest state of India.</p> <p>(ii) _____ Mountain range separates Europe from Aisa.</p> <p>(iii) _____ white metal is used to make coins and ornaments.</p> <p>(iv) _____ pumps blood to all parts of body.</p>	4x1=4	Information														
2.	<p><b>Match the column 'A' with column'B':</b></p> <table style="width: 100%; border: none;"> <tr> <td style="text-align: center;">A</td> <td style="text-align: center;">B</td> </tr> <tr> <td>(i) Daman and Diu</td> <td>(a) Buddhism</td> </tr> <tr> <td>(ii) Monastery</td> <td>(b) Derasar</td> </tr> <tr> <td>(iii) Kitchen waste</td> <td>(c) England</td> </tr> <tr> <td>(iv) Ladhak</td> <td>(d) Compost</td> </tr> <tr> <td>(v) Football</td> <td>(e) Leh</td> </tr> <tr> <td>(vi) Jainism</td> <td>(f) Daman</td> </tr> </table>	A	B	(i) Daman and Diu	(a) Buddhism	(ii) Monastery	(b) Derasar	(iii) Kitchen waste	(c) England	(iv) Ladhak	(d) Compost	(v) Football	(e) Leh	(vi) Jainism	(f) Daman	6x1=6	Thinking Skill
A	B																
(i) Daman and Diu	(a) Buddhism																
(ii) Monastery	(b) Derasar																
(iii) Kitchen waste	(c) England																
(iv) Ladhak	(d) Compost																
(v) Football	(e) Leh																
(vi) Jainism	(f) Daman																
3.	<p><b>State whether the following statements are 'True'or False':</b></p> <p>(i) Ostrich is the largest bird in the world. ( )</p> <p>(ii) Drive a car for going the nearby places. ( )</p> <p>(iii) Net weight shows the weight of the product. ( )</p> <p><b>(iv) Ball of Rugby game is oval in shape. ( )</b></p>	4x1=4	HOTS														
4.	<p><b>Answer the following questions in one word:</b></p> <p>(i) A story about a teddy bear and his adventures with his toy friends and other creature.</p> <p>.....</p>	2x1=2	Understanding														


(ii) Indigenous sport of Madhya Pradesh in which the player performs poses while hanging from wooden pole.

5.

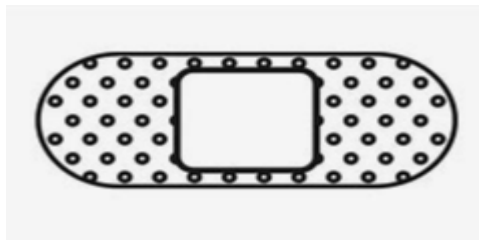
Identify the following:



(i)



(ii)



(iii)




(iii)

4x1=4

Critical Thinking





**ARMY PUBLIC SCHOOL GWALIOR**  
**CLASS - III**  
**ACADEMIC SESSION 2024-25**  
**REVISION WORKSHEET (SELF –ASSESSMENT)**


**Subject: Computer**

**Assignment No. : 4**

**Allotment Date: 12 September 2024**

S.NO.	QUESTIONS	MARKS	NATURE
1.	<p><b>Tick the correct answer.</b></p> <p>(i) The bar at the bottom of the desktop is known as _____.</p> <p>a) Scroll bar b) Title bar c) Taskbar d) none</p> <p>(ii) _____ is the example of word processor.</p> <p>a) MS paint b) MS word c) Windows 10 d) None</p> <p>(iii) _____ is the physical components attached to a computer.</p> <p>a) Software b) Hardware c) Malware d) Operating system</p> <p>iv) We can erase a shape with _____ tool.</p> <p>a) Eraser b) Remover c) Select d) Filter</p>	4x0.5=2	Information
2.	<p><b>Fill in the blanks-</b></p> <p>a) _____ screen appears after switching on the computer.</p> <p>b) Word file is saved with _____ extensions.</p> <p>c) _____ option is used to add 3D text in</p>	4x0.5=2	Understanding

	<p>paint 3D.</p> <p>d) A computer _____ the data as per requirement or instructions.</p>		
<b>3.</b>	<p>Write True or False against the statements:-</p> <p>a) The search box is present on the right corner of the desktop. ( )</p> <p>b) Formatting means making any changes to the document. ( )</p> <p>c) 3Dshapes are also known as flat shapes. ( )</p> <p>d) Hard disk is also known as the brain of a computer. ( )</p>	4x0.5=2	Interdisciplinary
<b>4.</b>	<p>Answer the following questions</p> <p>(i)What is the use of search box? Ans. _____ _____ _____ _____</p> <p>(ii) What is the use of paint 3D software? Ans. _____ _____ _____ _____</p> <p>(iii) Write any four characteristics of computer? Ans. _____ _____ _____ _____</p> <p>(iv)What is the use of saving a document? Ans. _____ _____ _____ _____</p>	4x1=4	Critical Thinking and Problem Solving



**ARMY PUBLIC SCHOOL GWALIOR**  
**CLASS - III**  
**ACADEMIC SESSION 2024-25**  
**REVISION WORKSHEET (SELF –ASSESSMENT)**


**Subject: Health and Physical Education**  
**Allotment Date: 12 September 2024**

**Assignment No. : 4**

S.N	QUESTIONS	MARKS	SKILLS/COMPETENCIES
1	<b>Shorts answer question</b> 1. Where did football started? a) China b) Spain c) Argentina d) France	1	INFORMATION
2	2. The game by which we get entertained and only for fun purpose?  a) Wonderful game  b) Beautiful game  c) Gentlemen's game  d) Recreational games	1	INFORMATION

3	<p>3. Kho-Kho originated at?</p> <p>a)1914</p> <p>b) 1915</p> <p>c) 1916</p> <p>d) 1617</p>	1	INFORMATION
4	<p>4. Which team won the Euro cup 2024 of football?</p> <p>a) Germany</p> <p>b) England</p> <p>c) Spain</p> <p>d) Portugal</p>	1	INFORMATION
5	<p>FILL IN THE BLANKS: -</p> <p>1. Sunil chettri is national player of _____?(India,Spain)</p>	1	INFORMATION

6	2. Kho-kho first started at_____? (Maharashtra,west bengal)	1	INTERDISCIPLIN ARY
7	3. Kabaddi is the popular game of_____? (Iran,India)	1	INTERDISCIPLIN ARY
8	8.Messi won the Player of the tournament award for Euro cup 2024? (True/False)	1	INTERDISCIPLIN ARY
9	9.Pardeep narwal belongs to kabaddi game?  (True/ False)	1	UNDERSTANDIN G
10	10.kho-kho is the national game of Bangladesh? (True/False)	1	UNDERSTANDIN G



**ARMY PUBLIC SCHOOL GWALIOR  
CLASS - III**



**ACADEMIC SESSION 2024-25  
REVISION WORKSHEET (SELF –ASSESSMENT)**

**Subject: Art and Work Education**

**Assignment No. : 4**

**Allotment Date: 12 September 2024**

<b>S. NO.</b>	<b>QUESTIONS</b>	<b>MARKS</b>	<b>NATURE</b>
	What are the primary colours?	2	Knowledge
	What are the secondary colours?	2	Knowledge
	What are the Tertiary colours?	2	Knowledge
	What are the warm colours?	2	Knowledge
	What are the cool colours?	2	Knowledge
		2	Knowledge



**ARMY PUBLIC SCHOOL GWALIOR**  
**CLASS - III**  
**ACADEMIC SESSION 2024-25**  
**REVISION WORKSHEET (SELF –ASSESSMENT)**

**Subject: Dance**

**Assignment No. : 4**

**Allotment Date: 12 September 2024**

S. NO.	QUESTIONS	MARKS	NATURE
1	How many matras are in Teentaal? a) 16 b) 20	1	Information
2	How many taali are in Teentaal? a) 6 b) 3	1	critical Thinking
3	Which one is folk dance of Punjab? a) Giddha b) Dandiya	1	Understanding
4	How many gharanas are in Kathak? a) 4 b) 7	1	Information

<b>5</b>	What is the another name of teentaal? a) Tritaal b) Chautaal	<b>1</b>	Critical thinking
<b>6</b>	Who is the father of kathak? a) Pt Birju Maharaj b) Pt Jayshankar Maharaj	<b>1</b>	Information
<b>7</b>	Can both girls and boys do kathak? a) Yes b) No	<b>1</b>	Information
<b>8</b>	Tabla belongs from _____classical dance. a) Kathak b) Mohiniattam	<b>1</b>	Critical thinking
<b>9</b>	Which is the basic taal of kathak? a) Teentaal b) Jhaptaal	<b>1</b>	Understanding



<b>10</b>	How many classical dance forms are in India ?  a) 8  b) 9	<b>1</b>	Understanding
-----------	-----------------------------------------------------------------------	----------	---------------



**ARMY PUBLIC SCHOOL GWALIOR**  
**CLASS - III**  
**ACADEMIC SESSION 2024-25**  
**REVISION WORKSHEET (SELF –ASSESSMENT)**



**Subject: Music**

**Assignment No. : 4**

**Allotment Date: 12 September 2024**

<b>S. NO.</b>	<b>QUESTIONS</b>	<b>MARKS</b>	<b>NATURE</b>
1	Jwala si jalti hai..... Mai jis ke v dil me tera name ho. a)aankho b)parwa	1	Informative
2	How many claps(taali) are there in teen taal? a) 4 b) 3	1	Informative
3	What do you mean by patriotism? a) Devotion towards Religion b) Devotion towards Country	1	Informative
4	How many vibhags in teen taal ? a) 4 b)3	1	Informative
5	Teri bhakti toh ..... hai a) kamaye b) vardaam	1	Informative
6.	Itni shakti hume dena.....man ka Vishwas a) kamjor b) daya ka	1	Informative
7.	god's love it's so ..... a) soo high b) wonderfull	1	Informative
8.	What do you mean by prayer ? a) worship b) request	1	Informative

<b>9,</b>	So high , you can't get ____ it a) under b) over	1	Informative
<b>10.</b>	Teri marzi se aay malik.....is duniya a) Hum b) Tum	1	Informative

