

Q.4	<p>Write the meanings of the given words :</p> <ol style="list-style-type: none"> 1. together - 2. neighbour- 3. later- 	3 x 1 = 3	Language and communication
Q.5	<p>Answer the following questions.</p> <p>Q.1 Where did Viwan and his friends play?</p> <p>A.1.....</p> <p>Q.2 Who was Viwan's new friend and his neighbour?</p> <p>A.2.....</p>	2 x 1 = 2	Understanding



ARMY PUBLIC SCHOOL GWALIOR
CLASS - I
ACADEMIC SESSION 2024-25
WORKSHEET (SELF -ASSESSMENT)

Subject: Hindi

Assignment No. : 4

Allotment Date: 12 September 2024

संख्या	प्रश्न/उत्तर	अंक	प्रकृति
प्र.1	एकीमात्राकेचारशब्दलिखो! 1. 2 3. 4	4x 0.5=2	भाषाईकौशल
प्र.2	उलटे अर्थवाले शब्द से मिलाओ सफ़ेद पतला ऊपर काला आगे नीचे मोटा पीछे	4x1=4	विश्लेषणात्मक
प्र-3	'शेर'परपाँचवाक्यलिखो 1. 2. 3.	5	रचनात्मकगहनचिंतन

	<p>4.</p> <p>5.</p>		
प्र-4	<p>दिए गए शब्दों का अनेक बचन लिखो!</p> <p>चाबी</p> <p>पैड</p> <p>लड़का</p> <p>मछली</p> <p>पत्ता</p>	5x1=5	<p>सूचनापरक</p> <p>उच्चस्तरीय चिंतन</p>
प्र-5	<p>निम्नलिखित प्रश्नों के उत्तर दीजिए -</p> <p>प्रश्न1. रमेश ने किसकी नकल की थी ? उत्तर.</p> <p>प्रश्न2. दहाड़ सुनकर क्या हुआ था ? उत्तर.</p> <p>प्रश्न3. गुटू भीतर कैसे आया ? उत्तर.....</p> <p>प्रश्न4. गुटू क्या खा रहा था? उत्तर.....</p>	4x1=4	भाषाई कौशल





ARMY PUBLIC SCHOOL GWALIOR
CLASS - I
ACADEMIC SESSION 2024-25
WORKSHEET (SELF -ASSESSMENT)

Subject: Mathematics

Assignment No. : 4

Allotment Date: 12 September 2024

S.NO	QUESTIONS	MARKS	SKILLS
1.	<p>Write the T for true or F for the false in the boxes.</p> <p>(i) $19 + 11 = 8$ <input type="checkbox"/></p> <p>(ii) $30 + 37 = 67$ <input type="checkbox"/></p> <p>(iii) $42 - 23 = 8$ <input type="checkbox"/></p> <p>(iv) $50 + 45 = 95$ <input type="checkbox"/></p> <p>(v) $85 - 0 = 75$ <input type="checkbox"/></p>	5×1=5	Cognitive, Problem Solving
2.	<p>i) Add 54 and 17</p> <p>T O <math>54 = \text{ <input type="checkbox"/> Tens + <input type="checkbox"/> Ones}</math> <math>+ 17 = \text{ <input type="checkbox"/> Tens + <input type="checkbox"/> Ones}</math> ----- <math>\text{ <input type="checkbox"/> Tens + <input type="checkbox"/> Ones}</math></p> <p>ii) Subtract 17 from 67</p> <p>T O <math>67 = \text{ <input type="checkbox"/> Tens + <input type="checkbox"/> Ones}</math> <math>- 17 = \text{ <input type="checkbox"/> Tens + <input type="checkbox"/> Ones}</math> ----- <math>\text{ <input type="checkbox"/> Tens + <input type="checkbox"/> Ones}</math></p>	2.5×2=5	Analytical Skills






ARMY PUBLIC SCHOOL GWALIOR
CLASS - I
ACADEMIC SESSION 2024-25
WORKSHEET (SELF -ASSESSMENT)

Subject: EVS

Assignment No. : 4

Allotment Date: 12 September 2024

S.NO	QUESTION	MARKS	SKILLS												
1.	<p>Tick(✓) the correct options:</p> <p>(i) Red light says a. Wait b. Go c. Stop</p> <p>(ii) A house does not protect us from this a. Animals b. Sickness c. Dust</p> <p>(iii) Every house must have _____ a.Windows b. Mud c. Bamboo</p> <p>(iv) We should play with a.Sharped objects b. Toys c. Matchboxes</p> <p>(v) We use this room to cook food. a.Kitchen b.Bedroom c.Drawing room</p>	5×1=5	Analytical Skills												
2.	<p>Match the following columns:</p> <table><tr><td>Column I</td><td>Column II</td></tr><tr><td>1. Yellow light</td><td>Go</td></tr><tr><td>2. Kutcha house</td><td>Bathroom</td></tr><tr><td>3. Green light</td><td>Wait</td></tr><tr><td>4. Taking bath</td><td>Dining room</td></tr><tr><td>5. Eating meals</td><td>Hut</td></tr></table>	Column I	Column II	1. Yellow light	Go	2. Kutcha house	Bathroom	3. Green light	Wait	4. Taking bath	Dining room	5. Eating meals	Hut	5×1=5	Cognitive Skills
Column I	Column II														
1. Yellow light	Go														
2. Kutcha house	Bathroom														
3. Green light	Wait														
4. Taking bath	Dining room														
5. Eating meals	Hut														
3.	<p>Identify and name the following pictures:</p> <p style="text-align: center;">_____</p>	4×1=4	Observation skills												

	  	<hr/> <hr/> <hr/>	
<p>4.</p>	<p>Answer the following questions</p> <p>Q.1 Differentiate between a kutchha house and pucca house</p> <p>A.1.....</p> <p>.....</p> <p>.....</p> <p>.....</p> <p>.....</p> <p>.....</p> <p>Q.2: Name two activities that can be harmful to you.</p> <p>A.2.....</p> <p>.....</p> <p>.....</p>	<p>2×2=4</p>	<p>Analytical Skills</p>
<p>5.</p>	<p>HOTS (Higher Order Thinking Skills)</p> <p>Q.1:Why should we have greenery in and around our house?</p> <p>A.1.....</p> <p>.....</p> <p>.....</p>	<p>2×1=2</p>	<p>Critical thinking& HOTS</p>




ARMY PUBLIC SCHOOL GWALIOR
CLASS - I
ACADEMIC SESSION 2024-25
WORKSHEET (SELF –ASSESSMENT)




Subject: G.K

Assignment No. : 4

Allotment Date: 12 September 2024

S.NO.	QUESTIONS	MARKS	NATURE
1.	Draw and colour the rainbow	2	Creativity
2.	How many colours are there in a rainbow. Write the names of colours of the rainbow. Ans	2	Analytical Skills
3.	Recognize the pictures and write the correct name (Mary Kom, Neeraj Chopra, Railway Station)  _____	3x1=3	Interdisciplinary



4	<p>Match the cartoon characters with their partners</p> <p>Patlu </p> <p>Tom </p> <p>Chutki </p>	3x1=3	Cognitive Skills
---	---	-------	------------------



ARMY PUBLIC SCHOOL GWALIOR
CLASS - I
ACADEMIC SESSION 2024-25
WORKSHEET (SELF -ASSESSMENT)



Subject: Computer

Assignment No. : 4

Allotment Date: 12 September 2024

S.NO.	QUESTIONS	MARKS	NATURE
1.	<p>Tick the correct answer.</p> <p>(i) _____ tool is used to draw circle and oval shapes.</p> <p>a) Rectangle b) Oval c) Fill d) Line</p> <p>(ii) _____ tool is you to erase your drawings.</p> <p>a) Eraser b) Paint c) Line d) Colors</p> <p>(iii) _____ Tool is used to draw straight and slant lines.</p> <p>a) Oval b) Rectangle c) Triangle d) Line</p> <p>(iv) You can fill color in your drawing using Fill with _____ tool.</p> <p>a)Color b)Oval c)Rectangle d)Line</p>	4x1=4	Information

2.	Fill in the blanks- a) _____ tool is used to type in paint. b) _____ tool is used to make a shape with any number of sides. c) _____ contains different groups.	3x1=3	Understanding
3.	Write 'T' for True or 'F' for False against the statements:- a) Curve tool is used to delete a drawing. b) In paint, we can make a curve from oval tool. c) Colors group is at the right side of the ribbon.	3x1=3	Interdisciplinary



ARMY PUBLIC SCHOOL GWALIOR
CLASS - I
ACADEMIC SESSION 2024-25
WORKSHEET (SELF -ASSESSMENT)

Subject: Art and Work Education
Allotment Date: 12 September 2024

Assignment No. : 4

S.N O	QUESTIONS	MARKS	SKILLS
1.	What is the shape of an art?	1	Creativity
2	What are the 3 basic types of shapes?	1	Creativity
3.	List some Geometric Shapes.	1	Creativity
4.	The basic solid shapes?	1	Creativity
5.	What Are Two Dimensional Shapes?	1	Creativity



ARMY PUBLIC SCHOOL GWALIOR
CLASS - I
ACADEMIC SESSION 2024-25
WORKSHEET (SELF -ASSESSMENT)


Subject: Health and Physical Education

Assignment No. : 4

Allotment Date: 12 September 2024

S.NO.	QUESTIONS	MARKS	NATURE
1.	<p>Tick the correct answer.</p> <p>(i) Throwing is a action which involves your</p> <p>a) hands b) head c) feet d) legs</p> <p>(ii) _____ is used to grab or catch the ball</p> <p>a) shoulder b) legs c) foot d) hands</p> <p>(iii) catching is a action which is used to</p> <p>a) Hit the ball b) throw the ball c) watch the ball d) grab the ball</p> <p>(iv) physical activities helps you become</p> <p>a) lazy b) active c) fatty d) lean</p>	4x1=4	Information

2.	Fill in the blanks- a) when you throw a ball it is known as_____ . b) when you hold a moving ball is known as_____ . c) _____ both are used in basketball.	3x1=3	Understanding
3.	Write 'T' for True or 'F' for False against the statements:- a)we throw a ball in a sitting position. b) throwing the ball strengthen your arms. c) physical activities should always be perform on a ground.	3x1=3	Interdisciplinary



ARMY PUBLIC SCHOOL GWALIOR
CLASS - I
ACADEMIC SESSION 2024-25
WORKSHEET (SELF -ASSESSMENT)

Subject: Dance


Assignment No. : 4

Allotment Date: 12 September 2024

S. NO.	QUESTIONS	MARKS	NATURE
1	Punjab is famous for _____! a) Dandiya b) Bhangra	1	Information
2	How many taali are in Teentaal? a) 6 b) 3	1	critical Thinking
3	Which one is folk dance of Gujarat ? a) Giddha b) Dandiya	1	Understanding

4	How many mainly folk dances of Gujarat? a) 4 b) 2	1	Information
5	What is the another name of teentaal? a) Tritaal b) Chautaal	1	Critical thinking
6	Who is the father of kathak? a) Pt Birju Maharaj b) Pt Jayshankar Maharaj	1	Information
7	which one is folk dance of Maharashtra? a) Lavni b) Ghoomer	1	Information

8	Tabla belongs from _____ classical dance. a) Kathak b) Mohiniattam	1	Critical thinking
9	Which dance is performed with sticks? a) Garwa b) Dandiya	1	Understanding
10	How many classical dance forms are in India ? a) 8 b) 9	1	Understanding



ARMY PUBLIC SCHOOL GWALIOR
CLASS - I
ACADEMIC SESSION 2024-25
WORKSHEET (SELF -ASSESSMENT)

Subject: Music (Vocal)

Assignment No. : 4

Allotment Date: 12 September 2024

S. NO.	QUESTIONS	MARKS	NATURE
1	Tu ka sagar, sagar daya ka tu hai a) aankho b) pyaar	1	Informative
2	How many claps(taali) are there in teen taal? a) 4 b) 3	1	Informative
3	God's love it's so.....? a) wonderful b) Devotion	1	Informative
4	Complete the line Vindhya Himachal..... a) Yamuna ganga b) Yamuna Godavari	1	Informative
5	So high you can't get.... a) over b) under	1	Informative
6.	Itni shakti hume dena.....man ka Vishwas a) kamjor b) daya ka	1	Informative

7.	god's love it's so a) soo high b) wonderfull	1	Informative
8.	What do you mean by prayer ? a) worship b) request	1	Informative
9,	Dil ka khula hua a) Darwaza b) hamara	1	Informative
10.	Bharat..... Vidhata a)man b)Bhagya	1	Informative