

ARMY PUBLIC SCHOOL GWALIOR
CLASS - VII



ACADEMIC SESSION 2024-25
REVISION WORKSHEET (SELF –ASSESSMENT)

Subject: English

Assignment No. : 6

Allotment Date: 30 November 2024

S. No.	QUESTIONS	MARKS	NATURE
1	Circle whether or not the auxiliary verbs used is correct. 1. Joe is been drawing all day. Correct incorrect 2. The trash can will getting full. Correct incorrect 3. Karan can get it right if he tries. Correct incorrect 4. His little dog is sleeping beside him. Correct incorrect	4 Marks	Informative and understanding
2	Fill the blank using correct modals. i)It is very cold today. Do you think it...snow later? ii)They.....leave your door unlocked when you go out. iii)This is impossible, it...Be mistake!	3 Marks	Understanding
3	Why was the wicked man killed by the daimio?	4 Marks	HOT
4	Fill in the blanks using appropriate adverbs from the bracket. (enough, too, quite ,) i)He was short to be selected for the basketball team. ii)It was..... decent of him to help us at this time. iii) you do not eatto be healthy and strong.	3 Marks	Interdisciplinary
5	Find the meaning of the following proverbs. i)Blood is thicker than water. ii)you can't make bricks without strows. iii)Two blanks don't make a white.	3 Marks	Analytical Skill
6	How are the trees useful for mankind?	4 Marks	Critical Thinking
7	Answer the following questions in about 20-30 words. a) The trees are useful for children. How? b) How did the narrator express his gratitude for the shoe maker? c)Why do you think adult keep on instructing always?	3×2 = 6 Marks	Evaluation
8	When was the bear tied up with a chain? Why	3 Marks	Communication Skills



ARMY PUBLIC SCHOOL GWALIOR
CLASS - VII




ACADEMIC SESSION 2024-25
REVISION WORKSHEET (SELF –ASSESSMENT)

Subject: Hindi

Assignment No. : 6

Allotment Date: 30 November 2024

क्रम संख्या	प्रश्न	अंक	प्रकृति
1.	एक तिनका कविता में किस घटना की चर्चा की गई है जिससे घमंड नहीं करने का संदेश मिलता है	5	INFORMATIVE
2.	खानपान की मिश्रित संस्कृति से लेखक का क्या मतलब है अपने घर के उदाहरण देकर इसकी व्याख्या करें	4	UNDERSTANDING
3.	निम्न वाक्यों को शुद्ध करके लिखिए 1. मैंने घर जाना है। 2. मैंने किताब लाना भूल गई। 3. हम लोग बस पर आए। 4. साइकिल कमरे पर रखी है। 5. माली एक फूल की माला लाया।	5	HOT
4.	निम्नलिखित शब्दों के अर्थ लिखिए। 1 ^ए नीर 2 ^ए मुंडेर 3 ^ए व्यंजन 4 ^ए मिश्रित 5 ^ए नवागंतुक	5	ENTERDISCIPLINARY
5.	अनुशासन का महत्व इस विषय पर अनुच्छेद लिखिए।	5	CRITICAL THINKING AND PROBLEM SOLVING
6	1. पत्र लेखन: विद्यालय छोड़ने का प्रमाण-पत्र लेने के लिए प्रधानाचार्य को पत्र लिखिए। 2. खानपान के मामले में स्थानीयता का क्या अर्थ है 3. युधिष्ठिर चौसर के खेल में क्या-क्या हार गए 4. महर्षि मैत्रेय की युधिष्ठिर से भेंट कहाँ हुई थी	4x4=16	EVAUATION



ARMY PUBLIC SCHOOL GWALIOR
CLASS - VII



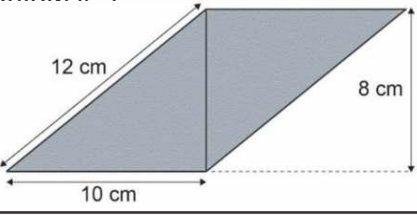
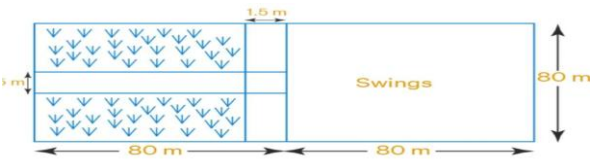
ACADEMIC SESSION 2024-25
REVISION WORKSHEET (SELF –ASSESSMENT)

Subject: Mathematics

Assignment No. : 6

Allotment Date: 30 November 2024

S. No.	QUESTIONS	MARKS	NATURE
1	Which of the following is a negative rational number (a) $-\frac{5}{7}$ (b) $\frac{5}{7}$ (c) 1 (d) 0	1	Informative Understanding
2	The standard form of $-\frac{18}{45}$ is (a) $-\frac{6}{5}$ (b) $-\frac{8}{5}$ (c) $-\frac{9}{5}$ (d) $-\frac{2}{5}$	1	Understanding
3	Which one of the following is greatest (a) $\frac{6}{21}$ (b) $\frac{9}{21}$ (c) $\frac{12}{28}$ (d) $\frac{6}{14}$	1	Analytical
4	Write a rational number equivalent to $\frac{3}{8}$. (a) $\frac{1}{4}$ (b) $\frac{8}{3}$ (c) $\frac{6}{16}$ (d) $\frac{6}{9}$	1	Informative
5	The area of parallelogram whose base 6 cm & altitude 3 cm is (a) 18 cm^2 (b) 10 cm^2 (c) 9 cm^2 (d) 9 cm	1	Understanding
6	Two rational numbers are equal if they have the same _____ form. (a) Denominator (b) numerator (c) standard form (d) None	1	Analytical
7	Additive inverse of $-\frac{7}{9}$ is _____. (a) $-\frac{7}{9}$ (b) $-\frac{9}{7}$ (c) $\frac{7}{9}$ (d) $\frac{9}{7}$	1	Analytical
8	Area of triangle whose base is 15 cm and corresponding altitude is 6 cm will be (a) 45 cm^2 (b) 90 cm^2 (c) 45 cm^2 (d) 15 m^2	1	Problem solving
9	The rational number $\frac{-11}{-12}$ lies in between _____ two integers on the number line. (a) 1 and 2 (b) 0 and 1 (c) -1 and -2 (d) 0 and -1	1	Informative
10	Find the area of a circle whose circumference is 52.8 cm	2	Analytical

11	Find $2\frac{1}{5} - \frac{(-1)}{3}$	2	Construction
12	What is the circumference of a circle of diameter 10 cm (Take $\pi = 3.14$)?	2	Analytical
13	Find BC, if the area of the triangle ABC is 36 cm ² and the height AD is 3 cm	3	Understanding
14	A circular flower bed is surrounded by a path 4 m wide. The diameter of the flower bed is 66 m. What is the area of this path? ($\pi = 3.14$)	3	Problem Solving
15	<p>Amit takes a card board of the given length in the following figure for making a canvas .</p> <p>(i) Find the Area of the card board</p> <p>(ii) What will be its perimeter</p> <p>(iii) Jatin placed another cardboard of same size along the 12 cm long edge. . What is the perimeter of the combined shape?</p> <div data-bbox="264 869 932 1106" style="border: 1px solid black; padding: 5px;"> <p>Given below is</p>  </div>	1+1+2=4	Case Study
16	<p>A nursery school playground is 160 m long and 80 m wide. In it 80 m × 80 m is kept for swings and in the remaining portion, there are 1.5 m wide path parallel to its width and parallel to its remaining length as shown in Figure. The remaining area is covered by grass. Find the area covered by grass</p> <div data-bbox="328 1406 922 1568" style="border: 1px solid black; padding: 5px;">  </div>	5	Critical thinking



ARMY PUBLIC SCHOOL GWALIOR
CLASS - VII



ACADEMIC SESSION 2024-25
REVISION WORKSHEET (SELF –ASSESSMENT)

Subject: Science

Assignment No. : 6

Allotment Date: 30 November 2024

S. NO.	QUESTIONS	MARKS	NATURE
Q1	Multiple choice questions: 1- What is the relation between distance and speed? a) Distance= Speed X Time b) Distance= Speed / Time c) Distance= Time / Speed d) None of these 2- Circuit breaker device which can be used in place of fuse in domestic electric wiring is called (a) FUSE (b) LED (c) MCB (d) CFL	1x2=2	Information
Q2	Fill in the blanks: 1. To and fro motion of pendulum is an example of _____ motion. 2. _____ is the device used to measure the distance travelled by an object. 3. A combination of two or more cells is called a _____. 4. Our body is a _____ of electricity.	1x4=4	Observation
Q3	Answer the following questions in one or two sentences: i. Differentiate between uniform and non-uniform motion. ii. Explain why are CFL's preferred over electric bulbs?	2x2=4	Interdisciplinary
Q4 Q5	Answer the following questions in 20-30 words: Explain why copper and aluminium wires are usually employed for electricity transmission. Rohit made an electromagnet by winding 50 turns of wire over an iron screw. Ravi also made an electromagnet by winding 100 turns over a similar iron screw. Which electromagnet will attract more pins? Give reason.	3x2=6	Knowledge based Competency-Based

Q6	<p>Answer the following questions in 30-40 words: Plot a distance-time graph of the tip of the second hand of a clock by selecting 4 points on the X-axis and Y-axis, respectively. The circumference of the circle traced by the second hand is 64 cm.</p>	5X1=5	Analytical Skills																		
Q7.	<p>The distance between Bholu's and Golu's houses is 9 Km. Bholu has to attend Golu's birthday party at 7 O'clock. He started his journey from his home at 6 O'clock on his bicycle and covered a distance of 6 km in 40 min. At that point, he met Chintu and spoke to him for 5 min and reached Golu's birthday party at 7 O'clock. With what speed, did he cover the second part of the journey? Calculate his average speed for the entire journey.</p>	5X1=5	Evaluation																		
Q8.	<p>Case-based question : Read the given passage carefully and answer the questions given below. Mayur travels from Surat to Bandra. Below is the timetable for the express train which he boards. Throughout the journey, the average speed of the train is approximately 54 km/h. Based on the given information answer the following questions:</p> <table border="1" data-bbox="264 831 1035 1077"> <thead> <tr> <th>Station</th> <th>Departure</th> <th>Arrival</th> </tr> </thead> <tbody> <tr> <td>Surat</td> <td></td> <td>7:00 AM</td> </tr> <tr> <td>Vapi</td> <td>8:00 AM</td> <td></td> </tr> <tr> <td>Virar</td> <td>9:07AM</td> <td>9:10 AM</td> </tr> <tr> <td>Thane</td> <td>10:00 AM</td> <td>10:04 AM</td> </tr> <tr> <td>Bandra</td> <td>11:30 AM</td> <td></td> </tr> </tbody> </table> <p>(a) What is the total time taken (in seconds) by Mayur to complete his journey? (b) Calculate the total time taken by train to travel from Surat to Thane station. (c) Convert the average speed from km/h to m/s. (d) Calculate the total distance between Surat and Bandra in kilometres.</p>	Station	Departure	Arrival	Surat		7:00 AM	Vapi	8:00 AM		Virar	9:07AM	9:10 AM	Thane	10:00 AM	10:04 AM	Bandra	11:30 AM		1X4=4	Critical Thinking and Problem Solving
Station	Departure	Arrival																			
Surat		7:00 AM																			
Vapi	8:00 AM																				
Virar	9:07AM	9:10 AM																			
Thane	10:00 AM	10:04 AM																			
Bandra	11:30 AM																				



ARMY PUBLIC SCHOOL GWALIOR
CLASS - VII



ACADEMIC SESSION 2024-25

REVISION WORKSHEET (SELF –ASSESSMENT)

Subject: Social Science

Assignment No. : 6

Allotment Date: 30 November 2024

S. No.	Questions	MARKS	NATURE
1.	Independent media plays a role in a democratic country. and are a recent phenomena in the media.	1x2=2	CRITICAL THINKING ANALYTICAL THINKING
2	Fill in the blanks: a)Mass media earns money through b)With typewriters, journalism underwent a change in the c)At times media is prevented from publishing a story, this is called d) Lilatilakam was composed in	1x4= 4	INFORMATIVE
3.	How are technologies costly these days?	4x1=4	HOTS
4.	How does changing technology help media to reach more people?	3x1= 3	HOTS
5.	How have regional cultures evolved? When was the Chera kingdom established and where?	3x2=6	ANALYTICAL SKILL
6.	Briefly write about ideals of Rajput rulers.	3x1=3	CRITICAL THINKING
7.	What is the main activity of the people of the Ganga-Brahmaputra Basin? Give an account of it.	4x1=4	PROBLEM SOLVING
8.	How is tourism an important activity in the Ganga-Brahmaputra basin?	4x1= 4	COMMUNICATION SKILLS



ARMY PUBLIC SCHOOL GWALIOR
CLASS - VII



ACADEMIC SESSION 2024-25
REVISION WORKSHEET (SELF –ASSESSMENT)

Subject: Sanskrit

Assignment No. : 6

Allotment Date: 30 November 2024

S. NO.	QUESTIONS	Marks	NATURE
1	शब्दानाम् अर्थान् लिखत- निमील्य _____ गर्तः _____ मण्डूकस्य _____ समवायः _____ क्षीयन्ते _____	1x5=5	Information
2	विभक्तिम् वचनं च लिखत- नरस्य _____ केयूराः _____ कीर्तिम् _____ मक्षिकायाः _____ राजसु _____	1x5=5	Memory Skill
3	कोष्ठकात् उचितं पदं चित्वा रिक्तस्थानानि पूरयत- (क) बालिका मधुरं गायति। (एकम्, एका, एकः) (ख) कृषकाः कृषिकर्माणि कुर्वन्ति। (चत्वारः, चतस्रः, चत्वारि) (ग) पत्राणि सुन्दराणि सन्ति। (ते, ताः, तानि)	1x5=5	Understanding

	<p>(घ) धेनवः दुग्धं । (ददाति, ददति, ददन्ति)</p> <p>(ङ) वयं संस्कृतम् । (अपठम्, अपठन्, अपठाम)</p>		
4	<p>उपयुक्तकथनानां समक्षम् 'आम्', अनुपयुक्तकथनानां समक्षं 'न' इति लिखत-</p> <p>(क) विद्या राजसु पूज्यते।</p> <p>(ख) वाग्भूषणं भूषणं न।</p> <p>(ग) विद्याधनं सर्वधनेषु प्रधानम्।</p> <p>(घ) विदेशगमने विद्या बन्धुजनः न भवति।।</p> <p>(ङ) विद्या सर्वत्र कीर्तिम् तनोति ।</p>	1x5=5	Thinking skill
5	<p>एकपदेन प्रश्नानाम् उत्तराणि लिखत-</p> <p>(क) कः पशुः?</p> <p>(ख) का भोगकरी?</p> <p>(ग) के पुरुषं न विभूषयन्ति?</p> <p>(घ) का एका पुरुषं समलङ्करोति?</p> <p>(ङ) कानि क्षीयन्ते?</p>	1x5=5	Memory skill
6	<p>अधोलिखितेषु पदेषु कानिचित् सुबन्त-पदानि कानिचित् तिङन्त-पदानि च सन्ति। तानि चित्वा उचित-स्थाने लिखत-</p> <p>(पठति, लता, खादति, फलम्, रामः)</p> <p>सुबन्त-पदानि तिङन्त-पदानि</p> <p>_____</p> <p>_____</p> <p>_____</p>	1x5=5	Analytical Skill



ARMY PUBLIC SCHOOL GWALIOR
CLASS - VII



ACADEMIC SESSION 2024-25

REVISION WORKSHEET (SELF –ASSESSMENT)

Subject: Computer

Assignment No. : 6

Allotment Date: 30 November 2024

S.NO.	QUESTIONS	MARKS-10	NATURE
1	<p>Choose and write the correct option (MCQ):-</p> <p>1) A software that installs on our computer without our consent is _____</p> <p>a. cookie b. spyware c. key logger</p> <p>2) _____ is a small text message that a browser saves to keep track of websites.</p> <p>a. Virus b. Junk c. Cookie</p> <p>3) _____ is a harassment that takes place using technology.</p> <p>a. Cyberbullying b. Vulnerability c. Pop-up Ad</p> <p>4) _____ is the art of convincing people to reveal confidential information.</p> <p>a. Phishing b. Spam c. Social engineering</p>	1/2x4=2	Information
2	<p>Write 'T' for True and 'F' for false statements.</p> <p>1. Internet is one of the largest networks that links millions or trillions of computers.</p> <p>2. We should never click on links in email messages, even if we know the sender.</p> <p>3. Vulnerabilities are flaws in computer software that weaken the security of computer. T</p> <p>4. Spam involves sending important messages to a large number of recipients.</p>	1/2x4=2	Understanding
3.	<p>Fill in the blanks-</p> <p>1. _____ are programs which are created deliberately to damage data.</p> <p>2. Every time we surf the Internet, we leave a trail behind, known as _____.</p> <p>3. _____ refers to someone who accesses a computer or network illegally.</p> <p>4. Parents should advise children to create _____ password for every account.</p>	1/2x4=2	Understanding

4.	Answer the following questions:- a. What is social engineering? b. How can we protect our computer from hacking? c. Write any two roles of parents and teachers in protecting the children in the virtual world. d. What is social engineering?	1x4=4	Evaluation



**ARMY PUBLIC SCHOOL GWALIOR
CLASS - VII**



ACADEMIC SESSION 2024-25

REVISION WORKSHEET (SELF –ASSESSMENT)

Subject: Work Education

Assignment No. : 6

Allotment Date: 30 November 2024

S. No.	QUESTIONS	MARKS	NATURE
1	What is the pointillism in art?	2	Informative
2	Is dot art pointillism?	2	Informative
3	Who are the two most famous pointillism artists?	2	Understanding
4	What is the definition of landscape?	2	Informative
5	What is the purpose of landscape art?	2	Understanding



ARMY PUBLIC SCHOOL GWALIOR
CLASS - VII




ACADEMIC SESSION 2024-25
REVISION WORKSHEET (SELF –ASSESSMENT)

Subject: Music (Vocal)

Assignment No. : 6

Allotment Date: 30 November 2024

S. NO.	QUESTIONS	MARKS	NATURE
1	The orderly playing of beat is called a) Rhythm b) Beat	1	Informative
2	How many matras are there in Teen Taala ? a) 16 b) 3	1	Informative
3	Complete the line : Our Desire to lead the Nation ahead, _____. a) Makes us believe in every step we take. b) Strengthening our vision in every way.	1	Informative
4	How many Matras are there in Taala Dadra ? a) 6 b) 8	1	Informative
5	Fill the correct word: The journey began with a single _____, marching to strive with piece and _____ . a) Step, Zest b) Zest, Step	1	Informative
6.	Maintaining a regular speed (tempo) while playing instrument is called ? a) Laya b) Taal	1	Informative
7.	Complete the line : _____, carrying a smile and hope in our hearts. a) A dream in our eyes and love for all. b) We stand together to face the future.	1	Informative
8.	How many matras are there in Taala Keherwa ? a) 8 b) 16	1	Informative
9,	How many notes are there in an octave? a) 8 b) 7	1	Informative
10.	Complete the line : The beat in our heart sings Army Public School, _____ a) The spring in our feet leads us to our school. b) The beat in our heart leads us to our school.	1	Informative



ARMY PUBLIC SCHOOL GWALIOR
CLASS - VII



ACADEMIC SESSION 2024-25
REVISION WORKSHEET (SELF –ASSESSMENT)

Subject: Health and Physical Education

Assignment No. : 6

Allotment Date: 30 November 2024

S.NO	QUESTIONS	MARKS	SKILLS/ COMPETENCIES
1.	<p>Tick The Correct Answer</p> <p>Q-1- How many lanes are there in Track?</p> <p>a.12 b.10 c.08 d.14</p> <p>Q-2 A running event in which athlete have to jump over the barrier while running?</p> <p>a.Hurdle b.Long jump c.High jump d.Pole vault</p> <p>Q-3- A relay team consist of?</p> <p>a.3 players b.4 players c.5 players d.6 players</p> <p>Q-4- Athletics divided into two categories?</p> <p>a.Running and throwing b.Catching and throwing c.Track and field d.Catching and running</p>	4	Informative
2	<p>Fill in the blanks</p> <p>Q-5- Track and field called as _____ of</p>		

	<p>sports(Mother,Sister)</p> <p>Q-6 100M Sprint are_____ Distance race (Medium,Short)</p> <p>Q-7 Modern Olympic first played in_____.(1896,1900)</p>	3	Interdisciplinary
3	<p>True False</p> <p>Q-8- Triple jump is a field event?</p> <p style="padding-left: 40px;">A. True</p> <p style="padding-left: 40px;">B. False</p> <p>Q-9 Marathon consider as long distance race?</p> <p style="padding-left: 40px;">A. True</p> <p style="padding-left: 40px;">B. False</p> <p>Q-10-Neeraj chopra won Gold in 2024 paris Olympics?</p> <p style="padding-left: 40px;">A. True</p> <p style="padding-left: 40px;">B. False</p>	3	Understanding



ARMY PUBLIC SCHOOL GWALIOR
CLASS - VII



ACADEMIC SESSION 2024-25
REVISION WORKSHEET (SELF –ASSESSMENT)

Subject: Karate

Assignment No. : 6

Allotment Date: 30 November 2024

S.N	QUESTIONS	Point
1.	What is the meaning of sanbon tsuki ? A. Punch B. Tripple Punch C. Double Punch D. Round Punch	1X10=10
2.	What is the meaning of chudan Tsuki? A. Middle Punch B. Upper Punch C. Lower Punch D. Punch	
3.	Gadan barai Uke is called..... A. Uke B. Block C. Lower Block D. None of these	
4.	Gyaku tsuki is called? A. Reverse hand punch B. Chudan gari C. Upper punch D. Kentekigari	
FILL IN THE BLANKS		
5.	Japanese name of lower block is (Gadan barai Uke,uke)	
6.	Running is use basic is usefull for(kumite,kata)	
7.	Waza-ari is the japaneese name ofpoint.(two,three)	
TRUE AND FALSE		
8.	Sanbon tsuki is called triple kick.	
9.	Gari is called for kick	
10.	Running basic is useful in kumite	



**ARMY PUBLIC SCHOOL GWALIOR
CLASS - VII**



**ACADEMIC SESSION 2024-25
REVISION WORKSHEET (SELF –ASSESSMENT)**

Subject: Dance

Assignment No. : 6

Allotment Date: 30 November 2024

S. NO.	QUESTIONS	MARKS	NATURE
1.	By which name was Kathak dance known in ancient times. a) Khushilove b) Kavyatmak	1	Informative
2.	In which lay is Kathak dance performed. a) Vilambit lay, madhyam lay, Druta lay b) Adhik Seema mein rupantaran prastuti mein	1	Informative
3.	Dance in India is divided into_____ parts. a) Four b) Two	1	Informative
4.	How many classical dances are there in India. a) Five b) Eight	1	Informative
5.	Are there facial expressions in the poem. a) Yes b) No	1	Informative
6.	There are three distinct gharana of Kathak dance. a) Banaras, Lucknow,Jaipur b) Gwalior,Delhi,Mathura	1	Informative
7.	what is kathak dance. a) Katha kahe so kathak Kahlave b) Bhakti kahe so bhakt kahlave	1	Informative
8.	What is poetry. C. Kavita D. Natak	1	Informative
9.	Dance usually performed with which vidha or art. a) Sangeet. b) Katha	1	Informative
10.	Which of these is a poem. a) dim dim dim damru baje tandav Shankar nache Dhol mridang shankh baje maa Bhagwati Lasya nache . b) tak tak ta drug Dun Dun jhijhi kat thothvng tak thun thun thigadha dig di thi.	1	Informative

