



ARMY PUBLIC SCHOOL GWALIOR
CLASS - VI



ACADEMIC SESSION 2024-25
REVISION WORKSHEET (SELF –ASSESSMENT)

Subject: English

Assignment No. : 6

Allotment Date: 30 November 2024

S. No.	QUESTIONS	MARKS	NATURE
1	Underline the adverbs in the given sentences : a) The cat jumps extremely high. b) The rain falls heavily c) I was quite busy. d) We barely know him.	4 Marks	Informative and understanding
2	Change the following sentences as directed : a) Birds fly in the sky. (negative) b) Rohit loves his teacher. (interrogative) c) Boys are doing their homework. (negative)	3 Marks	Understanding
3	Why has sleep been called a wonder?	4 Marks	HOT
4	Fill in the blanks in the following with the correct form of the verb given in brackets : (Present Tense) 1 in Model Town. (live) 2. The mother food for us. (cook) 3. She to temple every morning. (go)	3 Marks	Interdisciplinary
5	Fill in the following blanks with correct tense of the verbs given in brackets : 1. Look ! the sun (rise) 2. Why you so fast ? (run) 3. The children in the park. (play)	3 Marks	Analytical Skill
6	Write an application to the principal of your school for setting up a canteen in your school.	4 Marks	Critical Thinking
7	Answer the following questions in about 20-30 words. a) Write any 4 synonyms of the word "Wonderful" b) Why did the crocodile cheat on monkey? c) What wishes does the child in the poem make? Why does the child want to be a hawker, a gardener, or a watchman?	3×2 = 6 Marks	Evaluation
8	Write some qualities of a true friend?	3 Marks	Communication Skills



ARMY PUBLIC SCHOOL GWALIOR

CLASS - VI

ACADEMIC SESSION 2024-25

REVISION WORKSHEET (SELF –ASSESSMENT)

Subject: Hindi

Assignment No. : 6

Allotment Date: 30 November 2024



क्रम सं.	प्रश्न	अंक	प्रकृति
1.	निम्नलिखित शब्दों के अर्थ लिखिए— (क) दृष्टि (ख) टापू (ग) आबाद (घ) आदी (ङ) बालू (च) मुग्ध	0.5x6=3	सूचनात्मक संचार कौशल (Informative Communication Skills)
2.	निम्नलिखित प्रश्नों के उत्तर लिखिए— (क) लाखों-करोड़ों वर्ष पहले हमारी धरती कैसी थी? (ख) जिन लोगों के पास आँखें हैं, वे सचमुच बहुत कम देखते हैं— हेलेन केलर को ऐसा क्यों लगता था? (ग) गोल, चमकीला रोड़ा अपनी क्या कहानी बताता है? (घ) कान से न सुन पाने पर आस-पास की दुनिया कैसी लगती होगी?	4	गंभीर सोच और समस्या समाधान (Critical Thinking and Problem Solving)
3.	(क) हनुमान के रास्ते में कौन-कौन सी राक्षसियाँ आईं? (ख) हनुमान ने अशोक वाटिका में क्या देखा? (ग) सुग्रीव कहाँ रहते थे? (घ) शबरी ने राम को क्या सलाह दी?	4	अंतःविषयी (Interdisciplinary)
4.	निम्नलिखित विषयों में से किसी एक पर लगभग 60-80 शब्दों में अनुच्छेद लिखिए— (i) दीपावली का त्योहार (ii) शीतकालीन ऋतु	5	मूल्यांकन (Evaluation)
5.	निम्नलिखित विषयों में से किसी एक विषय पर पत्र लिखिए— (i) आपके आसपास की दुकानों में मिलावटी सामान बेचा जा रहा है। इसकी सूचना देते हुए जिला स्वास्थ्य अधिकारी को शिकायती पत्र लिखिए। (ii) अपने नए विद्यालय का वर्णन करते हुए अपने चाचा जी को पत्र लिखिए।	5	मूल्यांकन (Evaluation)
6.	निम्नलिखित वाक्यों में से विशेषण छाँटकर लिखिए— (i) ज्यादा चीनी नहीं खानी चाहिए। (ii) गरीब लोग मज़दूरी करते हैं। (iii) माता जी ने आज स्वादिष्ट चटनी बनाई है।	1x3=3	विश्लेषणात्मक (Analytical)

7.	निम्नलिखित वाक्य के काल लिखिए— (i) मैं रोज प्रातः घूमने जाता हूँ। (ii) वह बाजार से कुछ सामान लाया था। (iii) रमेश आज पढ़ने नहीं जाएगा।	1x3=3	विश्लेषणात्मक (Analytical)
8.	निम्नलिखित पद्यांश के आधार पर दिए गए प्रश्नों के उत्तर दीजिए— <p style="text-align: center;"> मौसम आज पतंगों का है, नभ में राज पतंगों का है। इंद्रधनुष के रंगों का है, मौसम नई उमंगों का है। निकले सब ले डोर-पतंगें, उड़ा रहे कर शोर पतंगें। देखो चारों ओर पतंगें। </p> प्रश्न (क) कौन-सा मौसम आया है? (i) वसंत (ii) पतंगों का (iii) पंद्रह अगस्त (iv) वर्षा (ख) आकाश में किन रंगों की पतंगें हैं? (i) लाल व पीली (ii) सात रंगों की (iii) सभी रंगों की (iv) हरी व नीली (ग) सबके हृदय में कैसा भाव है? (i) प्रसन्नता का (ii) उत्सव मनाने का (iii) जीत का (iv) पतंग उड़ाने की चाह	1x3=3	समझ (Understanding)



ARMY PUBLIC SCHOOL GWALIOR
CLASS - VI
ACADEMIC SESSION 2024-25
REVISION WORKSHEET (SELF –ASSESSMENT)



Subject: Mathematics






















Assignment No. : 6

Allotment Date: 30 November 2024

S.NO.	QUESTIONS	MARKS	NATURE
1	Decimal notation of $\frac{3}{5}$ is _____. (a) 0.1 (b) 0.6 (c) 0.5 (d) 0.2	1	Understanding
2	Which of the following is the place value of 3 in 4.375? (a) $\frac{3}{10}$ (b) 30 (c) 3 (d) $\frac{3}{1000}$	1	Critical Thinking
3	If * represents 5 balloons, number of symbols to be drawn to represent 60 balloons is (a) 5 (b) 60 (c) 10 (d) 12	1	Analytical
4	Every decimal can be written as a _____. (a) fraction (b) ratio (c) decimal	1	Informative

	(d) None of these		
5	Write as a decimal: $200 + 30 + 5 + \frac{2}{10} + \frac{9}{100}$ (a) 23.29 (b) 25.29 (c) 235.29 (d) 235.59	1	Understanding
6	A _____ represents data through pictures of objects. (a) histogram (b) pictograph (c) bar graph (d) None of these	1	Informative

7	Write 2 rupees and 80 paise as decimal. (a) Rs 2.008 (b) Rs 2 (c) Rs 2.08 (d) Rs 2.80	1	Understanding
8	.01 _____ 0.3 (a) = (b) < (c) > (d) None of these	1	Critical Thinking
9	A _____ is a collection of numbers gathered to give some information. (a) frequency (b) data (c) tally mark (d) None of these	1	Informative

10	Find the sum in each of the following : (a) $0.007 + 8.5 + 30.08$ (b) $15 + 0.632 + 13.8$	2	Understanding																					
11	Nasreen bought 3 m 20 cm cloth for her shirt and 2 m 5 cm cloth for her trouser. Find the total length of cloth bought by her	2	Analytical Thinking																					
12	How will you write 2kg 9g in 'kg' using decimals?	2	Understanding																					
13	Rahul bought 4 kg 90 g of apples, 2 kg 60 g of grapes and 5 kg 300 g of mangoes. Find the total weight of all the fruits he bought.	3	Problem Solving																					
14	Following is the choice of sweets of 30 students of Class VI. Ladoo, Barfi, Ladoo, Jalebi, Ladoo, Rasgulla, Jalebi, Ladoo, Barfi, Rasgulla, Ladoo, Jalebi, Jalebi, Rasgulla, Ladoo, Rasgulla, Jalebi, Ladoo, Rasgulla, Ladoo, Ladoo, Barfi, Rasgulla, Rasgulla, Jalebi, Rasgulla, Ladoo, Rasgulla, Jalebi, Ladoo. (a) Arrange the names of sweets in a table using tally marks. (b) Which sweet is preferred by most of the students?	3	Critical Thinking																					
15	The following pictograph shows the number of Maruti vans manufactured during a week. <table border="1" style="margin-left: 20px;"> <thead> <tr> <th>Days</th> <th>Number of Maruti Van manufactured</th> <th> = 100 Maruti Vans</th> </tr> </thead> <tbody> <tr> <td>Monday</td> <td></td> <td></td> </tr> <tr> <td>Tuesday</td> <td></td> <td></td> </tr> <tr> <td>Wednesday</td> <td></td> <td></td> </tr> <tr> <td>Thursday</td> <td></td> <td></td> </tr> <tr> <td>Friday</td> <td></td> <td></td> </tr> <tr> <td>Saturday</td> <td></td> <td></td> </tr> </tbody> </table> Read the above figure and answer the following questions: (i) On which day were the least number of Maruti vans manufactured? (ii) Find the number of Maruti vans manufactured on Wednesday. (iii) Find out the approximate number of Maruti vans manufactured in the particular week.	Days	Number of Maruti Van manufactured	 = 100 Maruti Vans	Monday			Tuesday			Wednesday			Thursday			Friday			Saturday			4	Case study
Days	Number of Maruti Van manufactured	 = 100 Maruti Vans																						
Monday																								
Tuesday																								
Wednesday																								
Thursday																								
Friday																								
Saturday																								

16	Aakash bought vegetables weighing 10 kg. Out of this, 3 kg 500 g is onions, 2 kg 75 g is tomatoes and the rest is potatoes. What is the weight of the potatoes?	5	Problem solving
----	---	---	-----------------



ARMY PUBLIC SCHOOL GWALIOR
CLASS - VI



ACADEMIC SESSION 2024-25
REVISION WORKSHEET (SELF –ASSESSMENT)


Subject: Science

Assignment No. : 6

Allotment Date: 30 November 2024

S. No.	Questions	MARKS	NATURE
1.	15 cm are equal to (a) 150 mm (b) 15 mm (c) 1.5 mm (d) 0.15 mm	1x2=2	CRITICAL THINKING
2.	Light travels in a (a) straight line (b) curved line (c) zig-zag line (d) randomly		ANALYTICAL THINKING
3.	Fill in the blanks: (a) Moving ceiling fan is an example of ----- motion. (b) Each meter is divided into 100 equal divisions, called -----. (c) Striker in the game of carrom moves in a ----- --. (d) A ball rolling on ground executes a rectilinear motion as well as ----- motion.	1x4= 4	INFORMATIVE
4.	How will you measure the length of a curved line?	4x1=4	HOTS
5.	How would you measure the thickness of a sheet?	3x1= 3	HOTS
6.	(i) State the difference between a luminous and non-	3x2=6	ANALYTICAL

	luminous body. (ii) What do you mean by rectilinear motion? Give two examples.		SKILL
7.	Why can't a pace or a footstep be used as a standard unit of length?	3x1=3	CRITICAL THINKING
8.	Three students determined the length of a corridor and reported their measurements. The value of their measurements was different. What could be the reasons for the difference in their measurements?	4x1=4	PROBLEM SOLVING
9.	Why is the standard unit for measurement necessary?	4x1= 4	COMMUNICATIO N SKILLS



**ARMY PUBLIC SCHOOL GWALIOR
CLASS - VI**



**ACADEMIC SESSION 2024-25
REVISION WORKSHEET (SELF –ASSESSMENT)**

Subject: Social Science

Assignment No. : 6

Allotment Date: 30 November 2024

S. NO.	QUESTIONS	MARKS	NATURE
1	What was the purpose of following the policy of Dhamma?	3m	Informative
2	How does the atmosphere act as a blanket?	2m	Understanding
3	What is the “Minimum Needs Programmes”?	3m	Interdisciplinary
4	Multiple Choice Questions- 1. Nitrogen gas in the atmosphere is used for: (a) breathing (b) the growth of living organisms (c) absorbing heat radiated by the earth (d) photosynthesis 2. A famous poetry book Abhijnana Shakuntalam was written by: (a) Banabhatta (b) Kalidasa (c) Harishena (d) Ravikirti 3. Who appoints the Secretary of the Gram Sabha? (a) The President (b) The Prime Minister (c) People of the Village (d) Government	3m	Informative
5	Match the following- 1. Samudragupta’s Prashasti (i) Gupta Dynasty 2. SHO (ii) Everest 3. The highest mountain peak (iii) Superintendent of Police 4. Samudragupta (iv) Harisena	4×1=4m	Analytical skill

6	<p>Answer the following questions in about 20-30 words.</p> <ol style="list-style-type: none"> Briefly describe the administration of the Mauryan Empire. What is the “Khasra Record”? In spite of being called the Blue Planet, the earth experiences shortage of water. Why? 	3×2=6m	Evaluation
7	<p>Write True or False-</p> <ol style="list-style-type: none"> Harshavardhana was the king of Mathura. () Density of the air decreases with the increase in_____.. The Third-Tier level of Democratic government is Janpad Panchayat. () A narrow passage of water connecting two large water bodies is called _____. 	4×1=4m	Communication skills
8	<p>On a political map of India, mark and locate the following: -</p> <ol style="list-style-type: none"> Lumbini Bodhgaya Pacific Ocean Isthmus of Panama Africa 	5×1=5m	Critical thinking and Problem solving



ARMY PUBLIC SCHOOL GWALIOR
CLASS - VI



ACADEMIC SESSION 2024-25
REVISION WORKSHEET (SELF –ASSESSMENT)

Subject: Sanskrit

Assignment No. : 6

Allotment Date: 30 November 2024

S. NO.	QUESTIONS	MARKS	NATURE
1.	शब्दानाम् अर्थान् लिखत- स्पर्धा: = चलचित्रम् = नियुद्धम् = विपुलम् = क्षमम् =	1*5= 5	Information
2.	उचितकथनानां समक्षम् 'आम्' अनुचितकथनाना -अनुचितकथनानां समक्षं - 'न' इति लिखत (क) कृषकाः सर्वेभ्यः अन्नं यच्छन्ति। (ख) कृषकाणां जीवनं कष्टप्रदं न भवति। (ग) कृषकः क्षेत्राणि सस्यपूर्णानि करोति। (घ) शीते शरीरे कम्पनं न भवति। (ङ) श्रमेण धरित्री सरसा भवति।	1*5=5	Analytical skill
3.	एकवचनपदस्य बहुवचनपदं, बहुवचनपदस्य एकवचनपदम् च लिखत- यथा- एषः - एते सः - ताः - त्वम् -		Understanding

	<p>तव -</p> <p>तानि -</p>		
4.	<p>विशेषणं विशेष्येण सह मेलयत। --</p> <p>i) मधुराणि बालकः ii) हरितानि फलानि iii) सुन्दरम् पत्राणि iv) मधुरा दृश्यम् v) चपलः वाणी</p>	1*5=5	Thinking skill
5.	<p>विकल्पेभ्यः उचितपदं चित्वा रिक्तस्थानानि पूरयत-</p> <p>(क)पठामि। (वयम्, अहम्) (ख) गच्छथः। (युवाम्, यूयं) (ग) पुस्तकम्। (माम्, मम) (घ) क्रीडनकानि। (युष्मान्, युष्माकम्) (ङ) छात्रे स्वः। (वयम्, आवाम्)</p>	1*5=5	Critical thinking
6.	<p>विलोमपदानि लिखत-</p> <p>सूर्यः - तृषा - वसनानि - जीर्णम् - धरित्री -</p>	5.	Memory skill



**ARMY PUBLIC SCHOOL GWALIOR
CLASS - VI**



ACADEMIC SESSION 2024-25

REVISION WORKSHEET (SELF –ASSESSMENT)

Subject: Computer

Assignment No. : 6

Allotment Date: 30 November 2024

S. NO.	QUESTIONS	MARKS	NATURE
1	<p>Tick the correct answer:</p> <p>1. Google Chrome is full featured software designed by Google.</p> <p>a. web server b. web browser c. web page</p> <p>2. is a free online language translation service which instantly translates text into other languages.</p> <p>a. Google Writer b. Google Reader c. Google Translate</p> <p>3. is an interactive mapping program that covers the vast area of the Earth .</p> <p>a. Google Pixel b. Google Glass c. Google Earth</p> <p>4. offers tens of millions of videos as well as movies, movie trailers, commercials, clips from TV shows and much more .</p> <p>a. YouTube b. Google Drive c. Google Assistant</p> <p>5. is a blog-publishing service by Google by which we can publish our ideas, opinions and stories online.</p> <p>a. Writer b. Blogger c. Docs</p>	1x5=5	Critical Thinking

2	Write 'T' for True and 'F' for False statements. 1. Google glass is a high quality video calling app. 2. Google Drive is used to determine the current location of a user. 3. We can upload our digital movie or animation to Youtube.	1x3=3	Understanding
3	Fill in the blanks. 1. Google was founded by and 2. is a web-based e-mail application offered by Google.	1x2=2	Informative



ARMY PUBLIC SCHOOL GWALIOR
CLASS - VI



ACADEMIC SESSION 2024-25
REVISION WORKSHEET (SELF –ASSESSMENT)

Subject: Art and Work Education

Assignment No. : 6

Allotment Date: 30 November 2024

S. NO.	QUESTIONS	MARKS	NATURE
1	What kind of math is used in mandalas? A. Rhombus geometry B. Square geometry C. Triangle geometry D. Circle geometry	1 mark	Creative Skills
2	A mandala, which is Sanskrit for _____. A. Discoid object B. Domicile C. Barbarian D. Locale	1 mark	Creative Skills
3	What paint do you use for mandalas? A. Anti-corrosive paint. B. Acrylic paint C. Emulsion paint D. Enamel paint	1 mark	Creative Skills
4	Which one is not a component of a Mandala art? A. Symmetry B. Geometry C. Balance D. Colour	1 mark	Creative Skills

5	<p>Strength, high energy and passion represent by which colour in mandala art?</p> <p>A. ORANGE B. YELLOW C. GREEN D. RED</p>	1 mark	Creative Skills
6.	<p>Which Colour material is best for Mandala?</p> <p>A. Gel pens B. Sketch pens C. Fountain pens D. Pencil colour</p>	1 mark	Creative Skills
7	<p>Which pen is used for mandala art?</p> <p>A. Pitt Artist Pens B. Ball pens C. Sketch pens D. Fountain pens</p>	1 mark	Creative Skills
8	<p>Which one is not a type of Mandalas?</p> <p>A. Teaching Mandala B. Learning Mandala C. Healing Mandala D. Sand Mandala</p>	1 mark	Creative Skills
9	<p>_____tend to represent the universe, often carrying meanings related to life and energy.</p> <p>A. Bell B. Sun C. Triangle D. Lotus flower</p>	1 mark	Creative Skills
10	<p>_____ represent action and energy, and when facing downward, they represent creativity and the pursuit of knowledge.</p> <p>A. Bell</p>	1 mark	Creative Skills

	B. Sun C. Triangle D. Lotus flower		
--	--	--	--



ARMY PUBLIC SCHOOL GWALIOR
CLASS - VI
ACADEMIC SESSION 2024-25
REVISION WORKSHEET (SELF –ASSESSMENT)



Subject: Dance

Assignment No. : 6

Allotment Date: 30 November 2024

S. NO.	QUESTIONS	MARKS	NATURE
1	What is the meaning of Bhaupradarshan? a) Bhaupradarshan refers to the display or expression of emotions or feelings in a visible manner, often used in b) literature, drama, or daily interactions.	1	Informative
2	What is the significance of emotional expression in human interactions? a) Emotional expression is crucial for effective communication, as it helps convey thoughts, feelings. b) and intentions, fostering understanding and connection between individuals.	1	Informative
3	How is Bhaupradarshan depicted in Indian literature? a) Indian literature often portrays Bhaupradarshan through characters' dialogues, actions. b) and descriptions, highlighting their inner emotions and cultural values.	1	Informative
4	Why is controlling Bhaupradarshan important in professional settings? a) Controlling Bhaupradarshan in professional environments ensures rational decision-making. b) maintains decorum, and prevents misunderstandings.	1	Informative
5	what role does Bhaupradarshan play in storytelling? a) In storytelling, Bhaupradarshan enhances character depth, builds empathy. b) makes the narrative relatable and engaging	1	Informative
6.	How can one balance Bhaupradarshan in rsonal relationships? a). Balancing emotional expression involves understanding the other person's feelings, practicing self-awareness.	1	Informative

	b) and choosing appropriate ways to express emotions.		
7.	<p>Can Bhaupradarshan be considered a cultural trait?</p> <p>a). Yes, the manner and extent of Bhaupradarshan can vary across cultures.</p> <p>b) influenced by societal norms, traditions, and values.</p>	1	Informative
8.	<p>What are the negative effects of excessive Bhaupradarshan?</p> <p>a). excessive emotional display can lead to misunderstandings, strain relationships.</p> <p>b) and reduce credibility in certain situations.</p>	1	Informative
9,	<p>What is bhav in kathak?</p> <p>a). the first thought that arises in the heart.</p> <p>b) aur it's a dance in kathak.</p>	1	Informative
10.	<p>Complete the line : The beat in our heart sings Army Public School, _____</p> <p>a) The spring in our feet leads us to our school.</p> <p>b) The beat in our heart leads us to our school.</p>	1	Informative



ARMY PUBLIC SCHOOL GWALIOR
CLASS - VI
ACADEMIC SESSION 2024-25
REVISION WORKSHEET (SELF –ASSESSMENT)




Subject: Music

Assignment No. : 6

Allotment Date: 30 November 2024

S. NO.	QUESTIONS	MARKS	NATURE
1	Complete the line : _____, carrying a smile and hope in our hearts. a) A dream in our eyes and love for all. b) We stand together to face the future.	1	Informative
2	How many matras are there in Teen Taala ? a) 16 b) 3	1	Informative
3	How many notes are there in an octave? a) 8 b) 7	1	Informative
4	How many Matras are there in Taala Dadra ? a) 6 b) 8	1	Informative
5	Fill the correct word: The journey began with a single ____, marching to strive with piece and ____ . a) Step, Zest b) Zest, Step	1	Informative
6.	Maintaining a regular speed (tempo) while playing instrument is called ? a) Laya b) Taal	1	Informative

7.	The orderly playing of beat is called a) Rhythm b) Beat	1	Informative
8.	How many matras are there in Taala Keherwa ? a) 8 b)16	1	Informative
9,	Complete the line : Our Desire to lead the Nation ahead, _____. a) Makes us believe in every step we take. b) Strenghtening our vision in every way.	1	Informative
10.	Complete the line : The beat in our heart sings Army Public School, _____ a) The spring in our feat leads us to our school. b) The beat in our heart leads us to our school.	1	Informative



**ARMY PUBLIC SCHOOL GWALIOR
CLASS - VI**



**ACADEMIC SESSION 2024-25
REVISION WORKSHEET (SELF –ASSESSMENT)**

Subject: Karate

Assignment No. : 6

Allotment Date: 30 November 2024

S.N	QUESTIONS	Point
S no	<p>What is the Japanese name of counter punch ?</p> <p>A. Punch B. Gyaku Tsuki C. Oei Tsuki D. Uke</p> <p>What is the meaning of Tsuki?</p> <p>A. Punch B. Upper Punch C. Lower Punch D. Block</p> <p>Gadan barai Uke is called.....</p> <p>A. Uke B. Block C. Lower Block D. None of these</p> <p>Step gyaku is called?</p> <p>A. Reverse hand punch B. Chudan gari C. Upper punch D. Kentekigari</p> <p>FILL IN THE BLANKS</p> <p>Japanese name of counter punch is (Gadan barai Uke,gyaku tsuki)</p> <p>Partners training i is usefull for(kumite,kata)</p>	1X10=10

Gari is the japeese name of(kick,punch)

TRUE AND FALSE

Step gyaku tsuki is called triple punch.

Training in pai is useful for kata

Running basic is useful in kata



ARMY PUBLIC SCHOOL GWALIOR
CLASS - VI



ACADEMIC SESSION 2024-25
REVISION WORKSHEET (SELF -ASSESSMENT)

Subject: Health and Physical Education
Allotment Date: 30 November 2024

Assignment No. : 6

S.NO	QUESTIONS	MARKS	SKILLS/ COMPETENCIES
1.	<p>Tick The Correct Answer</p> <p>Q-1- How many lanes are there in Track?</p> <p>a.12</p> <p>b.10</p> <p>c.08</p> <p>d.14</p> <p>Q-2 A running event in which athlete have to jump over the barrier while running?</p> <p>a.Hurdle</p> <p>b.Long jump</p> <p>c.High jump</p> <p>d.Pole vault</p> <p>Q-3- A relay team consist of?</p> <p>a.3 players</p> <p>b.4 players</p> <p>c.5 players</p> <p>d.6 players</p> <p>Q-4- Athletics divided into two categories?</p> <p>a.Running and throwing</p> <p>b.Catching and throwing</p> <p>c.Track and field</p> <p>d.Catching and running</p>	4	Informative

<p>2</p>	<p>Fill in the blanks</p> <p>Q-5- Track and field called as _____ of sports(Mother,Sister)</p> <p>Q-6 100M Sprint are_____ Distance race (Medium,Short)</p> <p>Q-7 Modern Olympic first played in_____.(1896,1900)</p>	<p>3</p>	<p>Interdisciplinary</p>
<p>3</p>	<p>True False</p> <p>Q-8- Triple jump is a field event?</p> <p>A. True B. False</p> <p>Q-9 Marathon consider as long distance race?</p> <p>A. True B. False</p> <p>Q-10-Neeraj chopra won Gold in 2024 paris Olympics?</p> <p>A. True B. False</p>	<p>3</p>	<p>Understanding</p>