



**ARMY PUBLIC SCHOOL GWALIOR**  
**CLASS - I**  
**ACADEMIC SESSION 2024-25**  
**REVISION WORKSHEET (SELF –ASSESSMENT)**

**Subject: English**

**Assignment No. : 6**

**Allotment Date: 30 November 2024**

S.NO	QUESTIONS	MARKS	SKILLS
1.	Fill in the blanks with the correct words .Take help from the help box. (parrot, kite, plants, friends,)  a. After school, Viwan flies _____.  b. Viwan plays with his _____ in the evening.  c. One day. Meena sees a _____ that is hurt.  d. The grains grow into _____.	4×1=4	Understanding
2.	Fill in the blanks with 'is', 'am', 'are'  a. You _____ my friend. b. She _____ a girl. c. I _____ sleepy. d. We _____ scared. e. She _____ a nurse. f. They _____ playing. g. I _____ a girl. h. Birds _____ flying in the sky.	8×1/2 =4	Decision making
3.	Fill in the blanks with the words given in clue box. [ It, She, He] 1. We saw tiger in the zoo. _____ was really big. 2. This is Titu. _____ is my best friend. 3. Ravi is a boy. _____ is tall. 4. Parrot eats green chilli. _____ is a bird.	4×1=4	Problem solving
4.	Answer the following questions  Q1:What did Little Red Hen find in the field?  Q2:What did moon fairy gave to Meena?  Q3:Who gave the shining star to Meena?  Q4:Who gave the kite to Viwan?	4×2=8	Critical thinking



**ARMY PUBLIC SCHOOL GWALIOR**  
**CLASS - I**  
**ACADEMIC SESSION 2024-25**  
**REVISION WORKSHEET (SELF –ASSESSMENT)**



Subject: Hindi

Assignment No. : 6


Allotment Date: 30 November 2024

संख्या	प्रश्न/उत्तर	अंक	प्रकृति
प्र.1	<p>आज रानी पिकनिक पर जा रही है। वह चिड़ियाघर घूमने जा रही है। वह सभी जानवरों को देखने के लिए उत्साहित है। रानी का पसंदीदा जानवर जिराफ़ है। वह उसकी लंबी गर्दन और धब्बों से प्यार करती है। रानी को उम्मीद है कि वह आज जिराफ़ों को खाना खिला पाएगी। वह तस्वीरें लेने के लिए अपना कैमरा साथ लेकर जा रही है। चिड़ियाघर में रंग - बिरंगी चिड़ियों को देखना बहुत अच्छा लगता है। वहाँ बहुत से चंचल हिरन भी हैं।</p> <p><b>उपरोक्त गद्यांश के आधार पर निम्नलिखित प्रश्नों के उत्तर दीजिए।</b></p> <p><b>अ) सही वाक्य के सामने (✓) तथा गलत वाक्य के सामने (x) का निशान लगाएं:</b></p> <p>क ) रानी आज मोल देखने जा रही है। <input type="checkbox"/></p> <p>ख ) रानीको हाथी देखना अच्छा लगता है। <input type="checkbox"/></p> <p><b>ब) खाली स्थान भरो:</b></p> <p>क ) चिड़ियाघर में ----- चिड़ियों को देखना अच्छा लगता है। (चंचल / रंग-बिरंगी )</p> <p>ख ) रानी तस्वीर लेने के लिए अपने साथ ----- लाई। (कैमरा / मोबाइल)</p> <p><b>स) मिलान करें।</b></p> <p>क) जीराफ़ चंचल</p>	8x.5=4	बोधार्थक

	<p>ख) हिरन लंबी गरदन</p> <p>द ) निम्नलिखित वाक्यों के लिए सही विकल्प चुनकर उत्तर दीजिए।</p> <p>क ) रानी को कौनसा जानवर पसंद है?</p> <p>-----</p> <p>ड) निम्नलिखित प्रश्नों का एक वाक्य में उत्तर दीजिए ।</p> <p>क )रानी को क्या उम्मीद है?</p> <p>-----</p>		
<p>प्र 2</p>	<p>दिए गए शब्दों की सहायता से 'मेरी माँ' विषय पर अनुच्छेद लिखो ।</p> <p>( परिवार , सुन्दर,प्यारी , भगवान,स्वादिष्ट, प्यार )</p> <p>1. -----</p> <p>-----</p> <p>2. -----</p> <p>-----</p> <p>3. -----</p> <p>-----</p> <p>4. -----</p> <p>-----</p>	<p>4x.5=2</p>	<p>गहन सोच</p>

<p>प्र-3</p>	<p>नीचे लिखे शब्दों के अर्थ लिखो</p> <p>1. कुतरना - _____</p> <p>2. तराजू - _____</p> <p>3. धरती - _____</p>	<p>3x 1=3</p>	<p>समस्या समाधान</p>
<p>प्र-4</p>	<p>एक के लिए अनेक लिखो :</p> <p>क) पत्ता .....</p> <p>ख) करेला .....</p> <p>ग) चिड़िया .....</p> <p>घ) मटका .....</p>	<p>4 x1=4</p>	<p>भाषाई कौशल</p>
<p>प्र-5</p>	<p>चित्रों के नाम लिखो</p> <p> _____</p> <p> _____</p>	<p>2x1=2</p>	<p>विश्लेषणात्मक</p>
<p>प्र-6</p>	<p>निम्नलिखित प्रश्नों के उत्तर दीजिए-</p> <p>प्रश्न .मोर कहाँ सोता था?</p> <p>उत्तर . _____</p> <p>प्रश्न . माली काका क्या - क्या लाए?</p> <p>उत्तर . _____</p> <p>प्रश्न . मैना किससे डर गई ?</p> <p>उत्तर . _____</p>	<p>4x1=5</p>	

	<p>प्रश्न . गुड़िया की चुनरी किसने कुतरी ?</p> <p>उत्तर . -----</p>		
--	---	--	--




**ARMY PUBLIC SCHOOL GWALIOR**  
**CLASS - I**  
**ACADEMIC SESSION 2024-25**  
**REVISION WORKSHEET (SELF –ASSESSMENT)**

Subject: Mathematics

Assignment No. : 6

Allotment Date: 30 November 2024

S.NO	QUESTIONS	MARKS	SKILLS																																
1.	<p><b>Add the following</b></p> <table style="margin-left: auto; margin-right: auto;"><tr><td style="text-align: center;">T</td><td style="text-align: center;">O</td><td style="text-align: center;">T</td><td style="text-align: center;">O</td></tr><tr><td style="border: 1px solid black; padding: 5px;">3</td><td style="border: 1px solid black; padding: 5px;">6</td><td style="border: 1px solid black; padding: 5px;">5</td><td style="border: 1px solid black; padding: 5px;">0</td></tr><tr><td style="border: 1px solid black; padding: 5px;">+</td><td style="border: 1px solid black; padding: 5px;">3</td><td style="border: 1px solid black; padding: 5px;">+</td><td style="border: 1px solid black; padding: 5px;">0</td></tr><tr><td style="border: 1px solid black; padding: 5px;"> </td><td style="border: 1px solid black; padding: 5px;"> </td><td style="border: 1px solid black; padding: 5px;"> </td><td style="border: 1px solid black; padding: 5px;"> </td></tr></table> <p><b>Subtract the following</b></p> <table style="margin-left: auto; margin-right: auto;"><tr><td style="text-align: center;">T</td><td style="text-align: center;">O</td><td style="text-align: center;">T</td><td style="text-align: center;">O</td></tr><tr><td style="border: 1px solid black; padding: 5px;">9</td><td style="border: 1px solid black; padding: 5px;">8</td><td style="border: 1px solid black; padding: 5px;">8</td><td style="border: 1px solid black; padding: 5px;">5</td></tr><tr><td style="border: 1px solid black; padding: 5px;">- 5</td><td style="border: 1px solid black; padding: 5px;">5</td><td style="border: 1px solid black; padding: 5px;">- 3</td><td style="border: 1px solid black; padding: 5px;">9</td></tr><tr><td style="border: 1px solid black; padding: 5px;"> </td><td style="border: 1px solid black; padding: 5px;"> </td><td style="border: 1px solid black; padding: 5px;"> </td><td style="border: 1px solid black; padding: 5px;"> </td></tr></table>	T	O	T	O	3	6	5	0	+	3	+	0					T	O	T	O	9	8	8	5	- 5	5	- 3	9					4×1=4	Computational skills
T	O	T	O																																
3	6	5	0																																
+	3	+	0																																
T	O	T	O																																
9	8	8	5																																
- 5	5	- 3	9																																
2.	<p><b>Arrange the numbers in descending order.</b></p> <p>(i) 63, 19, 62, 97, 48 -----</p> <p><b>Arrange the numbers in ascending order.</b></p> <p>(i) 79, 88, 35, 66, 99 -----</p>	2×1=2	Computational skills																																

<p>3.</p>	<p><b>(a) Compare the numbers and put &gt;, &lt; or = sign</b></p> <p>47 ___ 98</p> <p>74 ___ 37</p> <p><b>(b) Tick the biggest number and Cross (x) the smallest number</b></p> <p>67    73</p> <p>  99</p> <p>42    94</p> <p><b>(c) Write the number and its name.</b></p> <p>7 tens + 5 ones = <input type="text"/> _____</p> <p><b>(d) Cross (x) the correct option.</b></p>  <p><b>An apple is on / under the table.</b></p>	<p>5×1=5</p>	<p>Problem solving</p>
<p>4</p>	<p><b>Do as directed:</b></p> <p>(a) Write what comes before?     ___ 20</p> <p>(b) Write what comes after?     17 ___</p> <p>(c) In the word 'ELEPHANT' which is the fifth alphabet?</p> <p>(d) 10 – 0 = ?</p> <p>(e) When we subtract ___ from a number, we get the number just before it.</p>	<p>5×1=5</p>	<p>Critical thinking</p>

5.

Solve the following word problems.

2x2=4

Problem solving

- (i) Rama has 42 pencils her friend has 25 pencils. How many pencils do they have altogether?

T	O

- (ii) There were 95 boys playing in the park 36 of them went home. How many boys are left now ?

T	O





**ARMY PUBLIC SCHOOL GWALIOR**  
**CLASS - I**  
**ACADEMIC SESSION 2024-25**  
**REVISION WORKSHEET (SELF –ASSESSMENT)**

**Subject: EVS**

**Assignment No. : 6**

**Allotment Date: 30 November 2024**

S.NO	QUESTION	MARKS	SKILLS										
1.	<p><b>Fill in the blanks using the help box given below:</b> <b>(Computer room, seatbelt, bank, farmer,pilot)</b></p> <p>a. A ..... grows crop for us. b. We should wear a ..... in the car. c. We deposit money in ..... d. We learn to operate computer in ..... e. A .....flies an aeroplane.</p>	5×1=5	Thinking Skills										
2.	<p><b>Match the following:</b></p> <table><tbody><tr><td>a. Story books</td><td>a. Festival of lights</td></tr><tr><td>b. Republic day</td><td>b. Deliver Letters</td></tr><tr><td>c. Furniture</td><td>c. Library</td></tr><tr><td>d. Diwali</td><td>d. National festival</td></tr><tr><td>e. Postman</td><td>e. Carpenter</td></tr></tbody></table>	a. Story books	a. Festival of lights	b. Republic day	b. Deliver Letters	c. Furniture	c. Library	d. Diwali	d. National festival	e. Postman	e. Carpenter	5×1=5	Cognitive skills
a. Story books	a. Festival of lights												
b. Republic day	b. Deliver Letters												
c. Furniture	c. Library												
d. Diwali	d. National festival												
e. Postman	e. Carpenter												
3.	<p><b>Write 'T' for true and 'F' for false in the given blanks below.</b></p> <p>a. We should open door for the strangers. (.....) b. Holi is a religious festival. (.....) c. A washerman washes our clothes. (.....) d. We should fight with our neighbours. (.....) e. We should not play with sharp things. (.....)</p>	5×1=5	Critical thinking										
4.	<p><b>Answer the following questions:</b></p> <p>a. Who brings gift for children on Christmas? Ans. _____</p> <p>b. Who controls the traffic? Ans. _____</p> <p>c. What is the name of your school? Ans. _____</p> <p>d. Name any three places in your neighbourhood. Ans. _____</p>	5×1=5	Language, Problem Solving										

e. Why we should follow traffic rules?

Ans. \_\_\_\_\_



**ARMY PUBLIC SCHOOL GWALIOR**  
**CLASS - I**  
**ACADEMIC SESSION 2024-25**  
**REVISION WORKSHEET (SELF –ASSESSMENT)**

**Subject: Computer**

**Assignment No. : 6**

**Allotment Date: 30 November 2024**

S.NO	QUESTION	MARKS	NATURE
1.	<p><b>Write true and False</b></p> <p>1. We cannot drag pictures using a mouse. <input type="checkbox"/></p> <p>2. Curve shape is used to draw straight lines. <input type="checkbox"/></p> <p>3. Oval shape is used to delete a drawing. <input type="checkbox"/></p> <p>4. We can type text in Paint program. <input type="checkbox"/></p>	4x0.5=2	Understanding
2.	<p><b>Choose the correct answer.</b></p> <p>1. ....contains different groups. a. Canvas b. Tab c. Ribbon</p> <p>2. ....tool is used to draw straight and slant lines. a. Line b. Circle c. Brush</p> <p>3. There are _____ Alphabet keys on the keyboard. a. 12 b. 20 c. 26</p> <p>4. _____ is a collection of unorganized words. a. Data b. Memory c. Information</p>	4x1=4	Understanding

<b>3.</b>	<b>Answer the following question.</b> a. What is the use of Paint program?  _____  _____  b. Which tool is used to make a shape with any number of sides?  _____  _____  c. Which is the longest key on the keyboard?  _____  _____  d. How many Function keys are there on a keyboard?  _____  _____	<b>4x1=4</b>	<b>Problem Solving</b>
-----------	--	--------------	------------------------



**ARMY PUBLIC SCHOOL GWALIOR**  
**CLASS - I**  
**ACADEMIC SESSION 2024-25**  
**REVISION WORKSHEET (SELF –ASSESSMENT)**

**Subject: Art Education**

**Assignment No. : 6**

**Allotment Date: 30 November 2024**

<b>S. NO.</b>	<b>QUESTIONS</b>	<b>MARKS</b>	<b>NATURE</b>
	What are the primary colours?	2	Knowledge
	What are the secondary colours?	2	Knowledge
	What are the Tertiary colours?	2	Knowledge
	What are the warm colours?	2	Knowledge
	What are the cool colours?	2	Knowledge
		2	Knowledge



**ARMY PUBLIC SCHOOL GWALIOR**  
**CLASS - I**  
**ACADEMIC SESSION 2024-25**  
**REVISION WORKSHEET (SELF –ASSESSMENT)**

**Subject: Music (Vocal)**

**Assignment No. : 6**

**Allotment Date: 30 November 2024**

S. NO.	QUESTIONS	MARKS	NATURE
1	Baar baar din ye ..... a)jaaye b)aaaye	1	Informative
2	Bekarar hoke..... tham lu me kis ka a) aanchal b) Daman	1	Informative
3	Teri .....na karu a)Aaradhna karu b) Daya karu	1	Informative
4	How many vibhags in teen taal ? a) 4 b)3	1	Informative
5	Kya misaal du me ..... a) Teri b) Naam	1	Informative
6.	Paap chhama kar .... de de daya ki yachna karu a) Jeevan b) Teri	1	Informative
7.	Hamari ..... hai hamari jaan hai a) maan b) shaan	1	Informative

<b>8.</b>	What do you mean by prayer ? a) worship b) request	1	Informative
<b>9,</b>	So high , you can't get _____ it a) under b) over	1	Informative
<b>10.</b>	Dha ... .... Din dhaa Complete the Bol of teen taal a)Dhin b) Tin	1	Informative



**ARMY PUBLIC SCHOOL GWALIOR**  
**CLASS - I**  
**ACADEMIC SESSION 2024-25**  
**REVISION WORKSHEET (SELF –ASSESSMENT)**

**Subject: Dance**

**Assignment No. : 6**

**Allotment Date: 30 November 2024**

S. NO.	QUESTIONS	MARKS	NATURE
1	Which one is the western dance form? a) Hip- Hop b) Bhangra	1	Information
2	Who can enjoy Zumba ? a) any age b) only youth	1	critical Thinking
3	Which one is folk dance of Gujarat ? a) Giddha b) Dandiya	1	Understanding



<b>4</b>	who is the king of dance ? a) shiva Natraja b) Vishnu	<b>1</b>	Information
<b>5</b>	Which instrument is used in westerns? a) guitar b) Tabla	<b>1</b>	Critical thinking
<b>6</b>	Who is the father of kathak? a) Pt Birju Maharaj b) Pt Jayshankar Maharaj	<b>1</b>	Information
<b>7</b>	which one is folk dance of Maharashtra? a) Lavni b) Ghoomer	<b>1</b>	Information
<b>8</b>	Is salsa a western dance ? a) yes b) No	<b>1</b>	Critical thinking

<b>9</b>	Which dance is performed with sticks?  a) Garwa b) Dandiya	<b>1</b>	Understanding
<b>10</b>	How many classical dance forms are in India ?  a) 8 b) 9	<b>1</b>	Understanding



**ARMY PUBLIC SCHOOL GWALIOR  
CLASS - I**

**ACADEMIC SESSION 2024-25  
REVISION WORKSHEET (SELF –ASSESSMENT)**

**Subject: Health and Physical Education  
Allotment Date: 30 November 2024**

**Assignment No. : 6**

<b>S.NO</b>	<b>QUESTIONS</b>	<b>MARKS</b>	<b>SKILLS/ COMPETENCIES</b>
1.	<p>1. What do you need to do before catching a ball?</p> <p>a) Close your eyes b) Keep your hands ready c) Turn around</p> <p>Answer:</p> <p>2. What part of your hand should touch the ball when you catch it?</p> <p>a) Fingers and palms b) Elbows c) Shoulders</p> <p>Answer:</p> <p>3. What should you do to throw a ball far?</p> <p>a) Stand still b) Swing your arm back c) Hold the ball tightly</p> <p>Answer:</p> <p>4. What helps you aim when throwing a ball?</p> <p>a) Looking at your feet b) Looking at the target c) Spinning around</p>	4	<b>INFORMATION</b>

	Answer:		
<b>2</b>	<p>1. To catch a ball, always keep your ____ open and ready. Answer:</p> <p>2. When throwing a ball, swing your ____ back to give it more power. Answer:</p> <p>3. Always look at the ____ to aim before throwing the ball. Answer:</p>	<b>3</b>	<b>Knowledge</b>
<b>3</b>	<p>1. You should always keep your eyes on the ball when catching it. Answer:</p> <p>2. Using only one hand is the best way to catch a ball. Answer:</p> <p>3. A strong throw starts by swinging your arm back. Answer:</p>	<b>3</b>	<b>Understanding</b>