

ARMY PUBLIC SCHOOL GWALIOR
CLASS - III
ACADEMIC SESSION 2024-25
REVISION WORKSHEET (SELF –ASSESSMENT)

Subject: English

Assignment No. : 6

Allotment Date: 30 November 2024

S. No.	Questions	Marks	Nature
1.	<p style="text-align: center;"><u>Section-A</u></p> <p>UNSEEN PASSAGE</p> <p>Q.1 Read the following passage carefully and answer the following questions that follow:</p> <p>It was Sunday yesterday. Salma helped her mother at home. First, they dusted the drawing room. Then they cleaned the cupboard in the kitchen. They did not watch television. They watered the plants in the lawn. Salma picked some flowers. She put the flowers in the flower vase. She put the flower vase on the dining table. It looked so beautiful there.</p> <p>(i) Choose the correct option:</p> <p>First they dusted the _____ room?</p> <p>(a) guest (b) drawing (c) study</p> <p>(ii) Find the opposite of 'beautiful' from the above passage.</p> <p>(iii) Answer in one word: (a) Where did Salma put in the flowers?</p> <p>(iv) Answer in short: (a) What did they do in the lawn?</p>	4x1=4	Information
2.	<p style="text-align: center;"><u>Section-B (Writing Skills)</u></p> <p>Q.2 Write a paragraph on the topic- 'Discipline'. Or Write a story on the topic- 'Greedy Fox'.</p>	3x1=3	Problem solving

<p>3.</p>	<p style="text-align: center;"><u>Section-C (Grammar)</u></p> <p>Q.3 Fill in the blanks with suitable form of adjective with given words in the sentences: (i) Ishan is _____(tall) than her friend. (ii) Mt. Everest is the _____(high) mountain peak. (iii) Rahul is _____(strong) than Raman (iv) The _____(bright) star in the sky is Sirius.</p> <p>Q.4 Choose the correct option from the hint box to fill in the suitable adjective in the given sentences:</p> <table border="1" data-bbox="277 495 1209 528"><tr><td>Empty</td><td>Warm</td><td>loud</td></tr></table> <p>(i) This jar is _____. (ii) We should avoid listening to _____ music. (iii) I need to wear _____ clothes now because its winter time.</p> <p>Q.5 Answer the following in one word: (i) _____(a/an/the) is a Definite Article.</p> <p>Q6. Rewrite the following sentences by correcting the error in their 'verbs'. (i) We is smart children. (ii) I are a good human.</p>	Empty	Warm	loud	<p>0.5x10=5</p>	<p>Understanding</p>
Empty	Warm	loud				
<p>4.</p>	<p style="text-align: center;"><u>Section-D (Literature)</u></p> <p>Q.7Choose the Correct option: (i) Binny hit the bear with a _____ (a) stone (b) arrow (c) stick</p> <p>(ii) When do we celebrate World Animal Day every year? (a) 4 October (b) 14 October (c) 5 October</p> <p>Q.8 State whether True or False: (i) The poet wanted purple colour for the walls of his house. (T/F) (ii) Chitra Padmanabhan is the poet of the poem, 'How Many Greens'. (T/F)</p> <p>Q.9 Answer the following questions in one word: (i) Who brought Pizza for everyone? (ii) Who was the eleventh president of India</p> <p>Q.10 Answer the following questions in detail: (i) Write any two books written by the eleventh president of India? _____ _____ _____ _____</p> <p>(ii) Do you think Binny was right to apologize to the animals? Why? _____ _____ _____</p>	<p>8x1=8</p>	<p>HOT</p>			



ARMY PUBLIC SCHOOL GWALIOR
CLASS - III
ACADEMIC SESSION 2024-25
REVISION WORKSHEET (SELF –ASSESSMENT)

Subject: Hindi

Assignment No. : 6

Allotment Date: 30 November 2024

संख्या	प्रश्न	अंक
प्र 1.	<p>निम्नलिखित पद्यांश को ध्यानपूर्वक पढ़कर दिए गए प्रश्नों के उत्तर दें I</p> <p>कहती हैं सारी दुनिया जिसे किस्मत नाम है उसका हकीकत में मेहनत जो रचते हैं खुद अपनी किस्मत, वे कहे जाते हैं साहसी जो करते हैं ईश्वर से शिकायत , वे कहे जाते हैं आलसी जो रुक गया मिट गया उसका नामो- निशाँ जो चलता रहा, अपनी मंजिल वो पा गया खुशी के हकदार है वही जिन्होंने दुख को चुना छोड़ के दमन फूलों का, काँटों की राह को चुना , निराशा का अन्धकार मिटाकर, आशा के दीप जलाओ छोड़ भाग्य की दुहाई , अपनी किस्मत स्वयं बनाओI</p> <p>(i) निम्नलिखित प्रश्नों के सही उत्तर चुनकर (✓) का निशान लगाएँ-</p> <p>(क) _____ की राह को चुना I</p> <p>(i) खुशी (ii)निराशा (iii) काँटों</p> <p>(ख) हकीकत में उसका नाम _____ है।</p>	5x0.5=2

(i) मेहनत (ii) मंजिल (iii) किस्मत

(ii) सही (✓) या गलत (x) का निशान लगाएँ -

(क) खुशी के हकदार सुख चुनने वाले होते हैं। _____

(ख) आलसी व्यक्ति ईश्वर से शिकायत करते हैं। _____

(iii) निम्नलिखित प्रश्नों के उत्तर एक शब्द में उत्तर दें -

(क) जो अपनी किस्मत रचते हैं, उन्हें क्या कहते हैं ?

-

(ख) पंक्तियाँ पूरी करें।

प्र 2.

जो रुक गया मिट गया उसका _____

जो _____, अपनी मंजिल वो पा गया

(iv) निम्नलिखित प्रश्नों के उत्तर एक वाक्य में उत्तर दें-

(क) सामान तुक वाले शब्द लिखें।

(i) साहसी _____

(ii) किस्मत _____

(ख) सच्चा खुशी का हकदार कौन है?



5x0.5=2

दिए गए चित्र को देखकर पाँच (5) वाक्य लिखें I

प्र 3

वार्षिकोत्सव में भाग लेने हेतु प्रधानाचार्य को पत्र लिखें।

1

प्र 4

निम्नलिखित प्रश्नों के उत्तर निर्देशानुसार लिखें।

16x1/2=8

वाक्यांश के लिए एक शब्द लिखें I

(क) जहाँ पढ़ने के लिए जाते हैं _____

(ख) जो मूर्ति बनाता है _____

(ग) जो मिट्टी के बर्तन बनाता है _____

(घ) जो कृषि करता है _____

निम्नलिखित शब्दों के अनेकार्थी शब्द लिखें I

(क) जग _____,

(ख) व्यंजन _____,

(ग) हार _____,

(घ) पद _____,

नीचे दिए गए रिक्त स्थान पर उचित विराम - चिन्ह का प्रयोग कीजिए I

(क) कल मुझे विद्यालय जाना है

(ख) बाजार में बहुत भीड़ है

(ग) आप मथुरा क्यों जा रहे हो

(घ) उफ़ कितनी गरमी है

(ङ) आपका घर कहाँ है

3x1/2=1.5

प्र 5

. निम्नलिखित शब्दों के वर्णों को अलग -अलग (वर्ण विच्छेद) करके लिखिए I

(क) फूल - _____

(ख) तितली - _____

3x1/2=1.5

प्र 6

(ग) बन्दूक - _____

निम्नलिखित शब्दों के अर्थ लिखिए I

(क) निश्चय _____

(ख) निवासी _____

प्र 7

(ग) सुझाव _____

निम्नलिखित प्रश्नों के सही उत्तर चुनकर (✓) का निशान लगाएँ।

(क) सौ में कितने शून्य होते हैं?

- (i) एक (ii) दो (iii) दस

(ख) कीवी खुद को बचाने के लिए कहाँ जाकर छिपती है?

(i) पेड़ों पर (ii) अपने घोंसले पर (iii) लम्बी-लम्बी झाड़ियों में

(ग) माली के बेटे ने अपने पिता से क्या लाने को कहा था?

(i) समोसे - कचौड़ी (ii) टॉफियाँ-चॉकलेट (iii) खिलौने

किसने, किससे कहा लिखिए।

(क) "देखो, इस कीवी की नाक चोंच के कितने पास लगी हुई है।"

(ख) "हे ईश्वर! तू सबके मन की इच्छा जाननेवाला है।"

(ग) "जैसे मोर हमारा राष्ट्रीय पक्षी है।"

(ग) कीवी की तसवीर देखकर मोहित ने पापा से क्या पूछा?

(घ) कोट की जेबें भरी देखकर माली को कैसा लगा?

(ङ) कवि किन्हें साथ बैठाने के लिए कह रहा है?

	<hr/> <hr/> <hr/> <hr/> <hr/> <hr/> <hr/> <hr/> <hr/> <hr/>	
--	---	--



ARMY PUBLIC SCHOOL GWALIOR
CLASS - III
ACADEMIC SESSION 2024-25
REVISION WORKSHEET (SELF –ASSESSMENT)

Subject: Mathematics

Assignment No. : 6

Allotment Date: 30 November 2024

S. NO.	QUESTIONS	MARKS
1	<p>Fill in the blanks:</p> <p>(I) $\frac{3}{9}$ _____ $\frac{7}{9}$ (insert <, >, =)</p> <p>(II) 6 m 30 cm x 5 = _____</p> <p>(III) 180mL + 200 mL + 800 mL = L+ mL</p> <p>(IV) _____ have no sides and no corners.</p>	4*0.5=2
2	<p>Write whether the following statement is 'True' or 'False' :</p> <p>I)The sides of a triangle may or may not be equal.</p> <p style="text-align: center;">_____</p> <p>(ii) A hand span, a foot span and a pace are an example of standard units of length.</p> <p style="text-align: center;">_____</p> <p>(iii) Fractions that have same denominators are called Unlike fractions.</p> <p style="text-align: center;">_____</p> <p>(iv) 2kg = 5 x 200 g</p> <p style="text-align: center;">_____</p>	4*0.5=2

3	<p align="center">Match the column A with column B:</p> <table border="0"> <thead> <tr> <th align="center">A</th> <th align="center">B</th> </tr> </thead> <tbody> <tr> <td>(i) Tangram</td> <td>(a) standard unit of weight</td> </tr> <tr> <td>(II) Kilograms</td> <td>(b) 5 km</td> </tr> <tr> <td>(iii) 5000 m</td> <td>(c) two – ninths</td> </tr> <tr> <td>(iv) 2/9</td> <td>(d) a chinese puzzle</td> </tr> </tbody> </table>	A	B	(i) Tangram	(a) standard unit of weight	(II) Kilograms	(b) 5 km	(iii) 5000 m	(c) two – ninths	(iv) 2/9	(d) a chinese puzzle	4*0.5=2
A	B											
(i) Tangram	(a) standard unit of weight											
(II) Kilograms	(b) 5 km											
(iii) 5000 m	(c) two – ninths											
(iv) 2/9	(d) a chinese puzzle											
4.	<p>Multiple Choice Questions:</p> <p>(i) The number of equal edges of a square is</p> <p>a) 4 b) 0 c) 3</p> <p>(ii) A cook uses 5 L 670 mL of cooking oil in a week. The quantity of oil used in a day is</p> <p>a) 8 L 125 mL b) 8 L 15 mL c) 8L10mL</p> <p>(iii) The denominator of the fraction 14/21 is</p> <p>a) 21 b) 4 c) 10</p> <p>(iii) 5km 500 m + = 8 km</p> <p>a) 5 kg 500 g b) 4 kg 400 g c) 2 kg 500 g</p>	4*0.5=2										
5.	<p>Do as directed:</p>	16*0.5=8										

[A] Add the following :

(i) 8 L 560 mL , 6 L 400 mL and 4 L 350 mL

(ii) 56 m 46 cm and 33 m 32 cm

[B] Multiply the following :

(i) 15 km 378 m by 5

(ii) 2 L 23 mL by 4

[C] Define any two plane figures or 2 – D shapes.

(i)

(ii)

[D] Convert the following:

(a) 8540 metres into kilometres

(b) 17 kg into grams

[E] Write the following fractions in numbers.

(a) Eight – tenths

(b) Three - sevenths

[F] Subtract the following:

(i) 25 kg 489 g – 17 kg 607 g

(ii) 95 L 150 mL from 85 L 850 mL

[G] Find how many are there in:

(a) $\frac{1}{5}$ of 35

(b) $\frac{2}{5}$ of 20

[G]

Fill in the missing numerator in each of the equivalent fractions:

(a) $\frac{1}{7} = \dots\dots/49$

(b) $\frac{4}{5} = \dots\dots/45$

4.

Solve the following questions :

4

(i) A big bottle of water bottle with the capacity of 890 mL was divided among 5 friends .How much did each get?

(ii) Solve the following riddles and name the shapes.

(a) I have six faces, all of equal size and eight vertices..

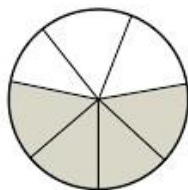
.....

(b) The planet you live on looks like me! I am a

(c) Two surfaces, one edge and one vertex make me! I am unique. I am a

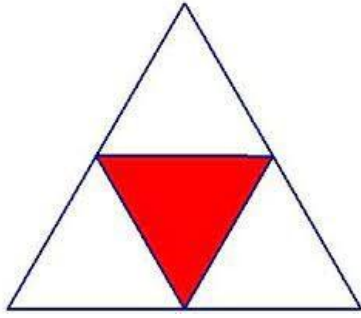
OR

(ii) Write the fractions represented by the following shaded portions:



(a)

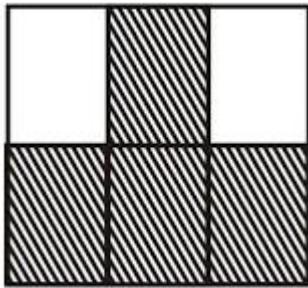
.....



(b)

.....

.



(c)

.....

(iii) Draw any two solid shapes or 3-D shapes and plane figures or 2- D shapes.

(a)


(b)

(c)

(d)

$$4 \times 1 = 4$$

(iv) Out of 40 birds flying in the sky, $\frac{3}{4}$ are moving in a flock and the rest in other flock. How many birds are there in each flock?



ARMY PUBLIC SCHOOL GWALIOR
CLASS - III
ACADEMIC SESSION 2024-25
REVISION WORKSHEET (SELF –ASSESSMENT)


Subject: EVS

Assignment No. : 6

Allotment Date: 30 November 2024

S. NO.	QUESTIONS	MARKS	NATURE										
Q.1	<p>CHOOSE THE CORRECT OPTION-</p> <p>(i) _____ is not found in villages. (a) Hut (b) Flat (c) Skyscraper</p> <p>(ii) Tents are used by (a) Explorers (b) Hunters (c) Both of These</p> <p>(iii) _____ is a means of water transport.. (a) Train (b) Steamer (c) Car</p> <p>(iv) We can take out ground water by _____. (a) Handpump (b) Wells (c) All of These</p>	4x1=4	UNDERSTANDING										
Q.2	<p>Match the column A with column B:</p> <table style="width: 100%; border: none;"> <tr> <td style="text-align: center;">A</td> <td style="text-align: center;">B</td> </tr> <tr> <td>(i) Rain houses</td> <td>(a) Similar type of</td> </tr> <tr> <td>(ii) Flat</td> <td>(b) Main source of water</td> </tr> <tr> <td>(iii) Green dustbin transport</td> <td>(c) Special means of</td> </tr> <tr> <td>(iv) Police Jeep wastes</td> <td>(d) Decomposable</td> </tr> </table>	A	B	(i) Rain houses	(a) Similar type of	(ii) Flat	(b) Main source of water	(iii) Green dustbin transport	(c) Special means of	(iv) Police Jeep wastes	(d) Decomposable	4x1=4	CRITICAL THINKING
A	B												
(i) Rain houses	(a) Similar type of												
(ii) Flat	(b) Main source of water												
(iii) Green dustbin transport	(c) Special means of												
(iv) Police Jeep wastes	(d) Decomposable												
Q.3		4x1=4	THINKING SKILL										

	<p>Fill in the blanks by choosing the correct options:</p> <p>(atlas,clean,sketch,goods)</p> <p>(a) trains are used to carry people from one place to another.</p> <p>(b) A book of maps is called an</p> <p>(c) A is the rough drawing of a place.</p> <p>(d) Store water in and covered containers.</p>		OBSERVATION
<p>Q.4</p>	<p>State whether the given statements are True/False:</p> <p>1) Our houses may be kutcha or pucca house.</p> <p>2) We should not burn garbage.</p> <p>3) We should always keep the dustbin and drains covered.</p> <p>4) A mail van carries letters and parcels from post office to other parts of a city.</p>	4x1=4	
<p>Q.5</p>	<p>Answer the following questions:</p> <p>(a) Why do we need a house?</p> <hr/> <hr/>	2x2=4	
	<p>(b) How did early men travel ?</p> <hr/> <hr/>		



ARMY PUBLIC SCHOOL GWALIOR
CLASS - III
ACADEMIC SESSION 2024-25
REVISION WORKSHEET (SELF –ASSESSMENT)

Subject: Computer

Assignment No. : 6

Allotment Date: 30 November 2024

Allotment Date:

S. NO.	QUESTIONS	MARKS	NATURE
1	<p>Tick the correct answer:</p> <p>1. Computers connected to _____ exchange information with one another.</p> <p style="padding-left: 40px;">a. Television b. Internet c. Telephone d.</p> <p>2. We can communicate with others on Internet through _____.</p> <p style="padding-left: 40px;">a. Chatting b. Browsing c. Advertising</p> <p>3. A collection of web pages is called _____.</p> <p style="padding-left: 40px;">a. Website b. Link c. URL</p>	3x0.5=1.5	Critical Thinking
2	<p>Write 'T' for True and 'F' for False statements.</p> <p>1. We cannot purchase or sell products on the Internet. 2. A web browser is the popular social networking site. 3. Abstraction means filtering out the required data from the whole.</p>	3x0.5=1.5	Understanding
3	<p>Fill in the blanks.</p> <p>1. The _____ is a branching conditional statement. 2. _____ is a software used to open web page or website. 3. _____ is a collection of web pages related to the same topic. 4. _____ is a set of step-by-step instructions to solve</p>	4x0.5=2	Informative

	a problem.		
4.	Answer the following questions:- a. What do you mean by Internet? b. What is Sequencing? c. Define Abstraction. d. What is the use of Search engine? e. Define Debugging.	5X1=5	



**ARMY PUBLIC SCHOOL GWALIOR
CLASS - III**



**ACADEMIC SESSION 2024-25
REVISION WORKSHEET (SELF –ASSESSMENT)**

Subject: Art and Work Education

Assignment No. : 6

Allotment Date: 30 November 2024

S. NO.	QUESTIONS	MARKS	NATURE
1	What is the main purpose of pencil shading in art?	2	Knowledge
2	Which type of pencil is best for darker shading ?	2	Knowledge
3	What does "hatching"refer to in pencil shading?	2	Knowledge
4	Which tool is commonly used to blend pencil shading?	2	Knowledge
5	Which pencil hardness is typically used for. fine details in shading?	2	Knowledge



ARMY PUBLIC SCHOOL GWALIOR
CLASS - III
ACADEMIC SESSION 2024-25
REVISION WORKSHEET (SELF –ASSESSMENT)

Subject: Health and Physical Education

Assignment No. : 6

Allotment Date: 30 November 2024

S.NO	QUESTIONS	MARKS	SKILLS/ COMPETENCIES
1.	Tick The Correct Answer Q-1- How many lanes are there in Track? a.12 b.10 c.08 d.14 Q-2 A running event in which athlete have to jump over the barrier while running? a.Hurdle b.Long jump c.High jump d.Pole vault Q-3- A relay team consist of? a.3 players b.4 players c.5 players d.6 players Q-4- Athletics divided into two categories? a.Running and throwing b.Catching and throwing c.Track and field d.Catching and running	4	Informative
2	Fill in the blanks Q-5- Track and field called as _____ of sports(Mother,Sister) Q-6 100M Sprint are _____ Distance race (Medium,Short) Q-7 Modern Olympic first played in _____.(1896,1900)	3	Interdisciplinary
3	True False Q-8- Triple jump is a field event? 2) True 3) False Q-9 Marathon consider as long distance race? A. True	3	Understanding

B. False

Q-10-Neeraj chopra won Gold in 2024 paris Olympics?

A. True

B. False



ARMY PUBLIC SCHOOL GWALIOR
CLASS - III
ACADEMIC SESSION 2024-25
REVISION WORKSHEET (SELF –ASSESSMENT)

Subject: Dance

Assignment No. : 6

Allotment Date: 30 November 2024

S. NO.	QUESTIONS	MARKS	NATURE
1	How many classical dance forms in India ? a) 9 b) 8	1	Information
2	How many types of Bhoomi Pranam in kathak ? a) 4 b) 2	1	critical Thinking
3	Bhoomi Pranam is dedicate for _____? a)Moon b)Mother Earth	1	Understanding

4	How many matras in teentaal? a)6 b)16	1	Information
5	How many sections in teentaal ? a)4 b)2	1	Critical thinking
6	What is the meaning of Daugunye? a) double in speed b) Triple in speed	1	Information
7	How many matras we count in Daugunye? a) 4 b) 2	1	Information
8	How many Lay in Kathak ? a) 2 b) 4	1	Critical thinking

9	Which is the slowest Lay in Kathak ? a) Chaugunye b) Ekgunye	1	Understanding
10	Which is the fastest Lay in Kathak ? a) tigungye b) Chaugunye	1	Understanding



ARMY PUBLIC SCHOOL GWALIOR
CLASS - III
ACADEMIC SESSION 2024-25
REVISION WORKSHEET (SELF –ASSESSMENT)

Subject: Music

Assignment No. : 6

Allotment Date: 30 November 2024

S. NO.	QUESTIONS	MARKS	NATURE
1	What is the singing time of raag yaman? a)Ratri ka pratham prehar b)din ka pratham prehar	1	Informative
2	How many claps(taali) are there in teen taal? a) 4 b) 3	1	Informative
3	Raga Yaman is a raga of which that? a) khamaaj that b) kaalyaan that	1	Informative
4	Which swar are played in Raga Yaman? a) All swar sudh & Ma tevra b)Komal swar	1	Informative
5	Sakhi eri aali..... Bin b) piya c) Kal na	1	Informative
6.	Itni shakti hume dena.....man ka Vishwas a) kamjoor b) daya ka	1	Informative
7.	Teri karu a) aaradhna b) kripa	1	Informative

8.	What do you mean by prayer ? a) worship b) request	1	Informative
9,	Dil ka khula hua a) Darwaza b) hamara	1	Informative
10.	Hamari.....hai a)Shaan b)Maan	1	Informative