

ARMY PUBLIC SCHOOL GWALIOR
CLASS - II
ACADEMIC SESSION 2024-25
REVISION WORKSHEET (SELF -ASSESSMENT)



Subject: English

Assignment No. : 6

Allotment Date: 30 November 2024

S. NO.	QUESTIONS	MARKS 20	NATURE												
1.	<p>Read the passage carefully and answer the following questions.</p> <p>Zebras belong to the horse family. They have stripes all over their body. Zebras eat grass and leaves. A baby zebra is called a foal. Its mother is called a mare and father is called a stallion. Zebras have strong bodies and legs. They have big ears. They can run very fast. A big herd of zebras is made of many zebra families.</p> <p><u>A.1. Choose the correct option for the following.</u></p> <p>(i). Zebras eat _____.</p> <p>a. grass and leaves. b. other animals c. fruits</p> <p>(ii) A baby zebra is called a _____.</p> <p>a. mare b. foal c. cub</p> <p><u>A.2. Fill in the blanks.</u></p> <p>(iii) Zebras have big _____.</p> <p>(iv) Zebras belong to the _____ family.</p> <p><u>A.3. Answer the following question in one word.</u></p> <p>(v). What do Zebras have all over their body?</p> <p>_____</p> <p>_____</p>	5x1=5	Information												
2.	<p>Match the words with their opposites.</p> <table style="width: 100%;"><tr><td style="text-align: center;"><u>Words</u></td><td style="text-align: center;"><u>Opposites</u></td></tr><tr><td>(i) sad</td><td>always</td></tr><tr><td>(ii) polite</td><td>evening</td></tr><tr><td>(iii) never</td><td>happy</td></tr><tr><td>(iv) morning</td><td>goes</td></tr><tr><td>(v) comes</td><td>impolite</td></tr></table>	<u>Words</u>	<u>Opposites</u>	(i) sad	always	(ii) polite	evening	(iii) never	happy	(iv) morning	goes	(v) comes	impolite	5x0.5=2.5	Literacy skills
<u>Words</u>	<u>Opposites</u>														
(i) sad	always														
(ii) polite	evening														
(iii) never	happy														
(iv) morning	goes														
(v) comes	impolite														

3.	<p>Fill in the blanks with is/ am/ are.</p> <p>(i) I _____ tired.</p> <p>(ii) They _____ not fighting.</p> <p>(iii) The bell _____ ringing.</p> <p>(iv) There _____ a child on the swing.</p> <p>(v) Twinkle and Sia _____ cousins.</p>	5x0.5=2.5	Problem Solving
4.	<p>Answer the following questions.</p> <p>Q1. Who loved to eat mangoes from the mango tree?</p> <p>Ans _____</p> <p>_____</p> <p>_____</p> <p>Q2. What did the bird tell Shaheen?</p> <p>_____</p> <p>_____</p> <p>_____</p> <p>Q3. How does Tarun clean the tables?</p> <p>_____</p> <p>_____</p> <p>_____</p>	3x2=6	Understanding
5.	<p>Complete the lines of the given poems.</p> <p>1. The Moon comes every night _____</p> <p>Through the _____ where I lie; (Poem-3)</p> <p>2. If you should meet a _____</p> <p>Don't take a stick and _____;</p> <p>(Poem-4)</p>	4x1=4	Inquiry



ARMY PUBLIC SCHOOL GWALIOR
CLASS - II
ACADEMIC SESSION 2024-25
REVISION WORKSHEET (SELF -ASSESSMENT)




Subject: Hindi
Allotment Date: 30 November 2024

Assignment No. : 6

क्रम सं	प्रश्न	अंक	प्रश्न के प्रकार
प्र 1 -	<p>निम्नलिखित गद्यांश को ध्यान पूर्वक पढ़िए।</p> <p>काफी सालों पहले की बात है, गरीब राकेश अपनी बीवी और पाँच साल की बेटी टीना के साथ एक झोंपड़ी में रहा करता था। राकेश पेशे से मोची था, और दिन भर में उसकी बस इतनी ही कमाई होती थी जिससे उस दिन उसके खाने पीने की व्यवस्था हो सके।</p> <p>उपर्युक्त गद्यांश के आधार पर निम्न प्रश्नों के उत्तर दीजिए।</p> <p>१. खाली स्थान भरिए।</p> <p>क. राकेश एक ----- में रहता था।</p> <p>ख. उसकी ----- साल की बेटी थी।</p> <p>२. निम्न प्रश्नों के उत्तर दीजिए।</p> <p>क. राकेश का पेशा क्या था ?</p> <p>_____</p> <p>_____</p> <p>ख. राकेश की बेटी का क्या नाम था ?</p> <p>_____</p> <p>_____</p>	4x1=4	बोधोत्प्रेरक
प्र -2	<p>एक के अनेक लिखिए।</p> <p>१. पेंसिल -</p> <p>३. बगीचा -</p>	2x1=2	सूचनापरक
प्र-3	<p>उलटे अर्थ वाले शब्द लिखिए।</p> <p>१. बैठना x -----</p> <p>२. पीछे x -----</p>	2x1=2	गहन सोच और समस्या समाधान

<p>प्र-4</p>	<p>निम्न शब्दों के अर्थ लिखो ।</p> <p>१. फुदकना - -----</p> <p>२. हरषाती - -----</p> <p>४. बुलावा - -----</p>	<p>3x1=3</p>	<p>भाषाई कौशल</p>
<p>प्र-5</p>	<p>ज और ज़ से एक-एक शब्द लिखिए ।</p> <p>१. ज - -----</p> <p>२. ज़ - -----</p>	<p>2x1=2</p>	<p>गहन सोच</p>
<p>प्र-6</p>	<p>विशेषता बताने वाले शब्दों पर गोला लगाइए ।</p> <p>१. मेरे घर में सुन्दर बगीचा है ।</p> <p>२. गिलास में साफ़ पानी भरा है ।</p> <p>३. घर में पाँच कमरे हैं ।</p>	<p>3x1=3</p>	<p>भाषाई/ व्याकरणिक कौशल</p>
<p>प्र-7</p>	<p>नीचे दिए गए प्रश्नों के उत्तर लिखिए ।</p> <p>१. बुलबुल बच्चों को क्या खिला रही थी?</p> <p>.....</p> <p>.....</p> <p>.....</p> <p>२. पायल के माता-पिता क्यों उदास हो गए ?</p> <p>.....</p> <p>.....</p> <p>.....</p> <p>३. बच्चा तितली से क्या चाहता है ?</p> <p>.....</p> <p>.....</p> <p>.....</p> <p>४. ताई जी ने खाने के लिए क्या बनाया था?</p> <p>.....</p> <p>.....</p>	<p>4x1=4</p>	<p>विश्लेषणात्मक</p>

	<p>.....</p> <p>.....</p>		
--	---------------------------	--	--




ARMY PUBLIC SCHOOL GWALIOR
CLASS - II
ACADEMIC SESSION 2024-25
REVISION WORKSHEET (SELF -ASSESSMENT)



Subject: Mathematics
Allotment Date: 30 November 2024

Assignment No. : 6

S. NO.	QUESTIONS	MARKS	NATURE
1	Fill in the blanks: (i). The sign of division is _____. (ii). When a number is multiplied by 0, the answer is _____. (iii). 1 metre is equal to _____ cm. (iv). An ice cream cone is an example of _____. (v). When a figure is divided into three equal parts, then each part is called _____.	5X1=5	Understanding
2	Write 'True' or 'False': (i). A square has all four sides equal. () (ii). Subtraction is also called repeated addition. ()	2X1=2	Analytical thinking
3	Tick the correct answer from the given options: (a) The standard unit of measuring length is _____. (i) millimetre (ii) meter (iii) Centimetre (iv) Kilometre (b) Divisor \times Quotient= _____. (i) Dividend (ii) Remainder (iii) Product (iv) Sum (c) A cuboid has _____. (i) 7 faces (ii) 8 faces (iii) 6 faces (iv) 5 faces	3X1=3	Critical thinking

<p>4</p>	<p>Solve the following questions: -</p> <p>(i) Colour the part(s) to show half.</p>  <p>(ii) Find the product of-</p> $\begin{array}{r} 1 \quad 0 \\ \times \quad 7 \\ \hline \\ \hline \end{array}$ <p>(iii) Write the multiplication fact for the following-</p> <p>$6+6+6+6=$_____</p> <p>(iv) Write one example of cylinder-_____</p>	<p>4X1=4</p>	<p>Interdisciplinary</p>
<p>5</p>	<p>Solve the following questions.</p> <p>(i). There are 13 flowers. Each has 3 petals. How many petals are there?</p> <p>(ii). Divide 16 flowers among 4 boys by repeated subtraction.</p>	<p>2X3=6</p>	<p>Problem Solving</p>

	<p>(iii). Make a cube and mention its faces, edges and vertices.</p>		
--	--	--	--



ARMY PUBLIC SCHOOL GWALIOR
CLASS - II
ACADEMIC SESSION 2024-25
REVISION WORKSHEET (SELF –ASSESSMENT)



Subject: EVS

Assignment No. : 6

Allotment Date: 30 November 2024

S.NO.	QUESTIONS	MARKS 20	NATURE										
1.	<p>Tick the correct answer:</p> <p>1. People who live in igloos are called _____.</p> <p>a. Gypsies b. Villages c. Eskimos</p> <p>2. Cross the road when light is _____.</p> <p>a. Green b. Red c. Yellow</p> <p>3. They look after our health.</p> <p>a. Nurse b. Doctor c. Both a and b</p> <p>4. It is the festival of lights.</p> <p>a. Holi b. Diwali c. Eid</p>	4X1=4	Understanding										
2.	<p>Fill in the blanks:</p> <p>a) We should not touch electrical appliances with _____ hands.</p> <p>b) Birthday of Mahatma Gandhi is on _____.</p>	2X1=2	Analytical skill										
3.	<p>State whether the following statements are 'True/False'.</p> <p>a) E-mail is used to send an official message to your office. _____.</p> <p>b) The area around our house is called bank. _____</p>	2x1=2	Analytical skill										
4.	<p>Match the following questions.</p> <table style="width: 100%; border: none;"> <tr> <td style="width: 50%;">A</td> <td style="width: 50%;">B</td> </tr> <tr> <td>a) Spices</td> <td>Punjab</td> </tr> <tr> <td>b) Mint</td> <td>Cumin</td> </tr> <tr> <td>c) Baisakhi</td> <td>Zebra crossing</td> </tr> <tr> <td>d) Safety rule</td> <td>Herbs</td> </tr> </table>	A	B	a) Spices	Punjab	b) Mint	Cumin	c) Baisakhi	Zebra crossing	d) Safety rule	Herbs	4x0.5=2	Analytical skill
A	B												
a) Spices	Punjab												
b) Mint	Cumin												
c) Baisakhi	Zebra crossing												
d) Safety rule	Herbs												
5.	<p>Give two examples of each of the following:</p> <p>a) Temporary house: _____ _____</p> <p>b) Road transport: _____</p>	4X1=4	Information										

6.	<p>Define the following terms:</p> <p>a) Kutcha house</p> <hr/> <hr/> <hr/> <p>b) Spices</p> <hr/> <hr/> <hr/>	2x1=2	Observation
7.	<p>Complete the flowchart.</p> <pre> graph LR A[Types of Plants] --- B[] B --- C[] B --- D[] B --- E[] B --- F[] B --- G[] </pre>	2x1=2	Understanding
8.	<p>How do the plants keep the air fresh and clean?</p> <hr/> <hr/> <hr/> <hr/>	1x1=1	HOTS
9.	<p>Why are leaves important for plants?</p> <hr/> <hr/> <hr/> <hr/>	1x1=1	Thinking and Writing Skills



(ii)

b) Pumpkin

5.

Q5. Answer the following questions in one word.

(i). In which place we use to deposit money?

(ii). Which is the largest of all waterbodies?

1. In which place we always come to read different types of books?

2. This small sea animal has a shell that protects it from attack by other animals. It is a-

2X1=2

Informative and
General
Awareness



ARMY PUBLIC SCHOOL GWALIOR
CLASS - II
ACADEMIC SESSION 2024-25
REVISION WORKSHEET (SELF –ASSESSMENT)



Subject: Computer
Allotment Date: 30 November 2024

Assignment No. : 6

S.NO	QUESTION	MARKS	NATURE
1.	<p>Write 'T' for True and 'F' for False statements.</p> <p>1. We can fill color in a closed shape. <input type="checkbox"/></p> <p>2. To select a word, triple click on it. <input type="checkbox"/></p> <p>3. Skew commands is used to stretch an image. <input type="checkbox"/></p> <p>4. Paint file can only be saved in PNG format. <input type="checkbox"/></p>	4x0.5=2	Understanding
2.	<p>Choose the correct answer.</p> <p>1. _____ is a program used to draw and color objects.</p> <p>a. Paint</p> <p>b. WordPad</p> <p>c. Windows</p> <p>2. Shortcut key for saving a document is _____.</p> <p>a. Ctrl+Z</p> <p>b. Ctrl+R</p> <p>c. Ctrl+S</p> <p>3. _____ tool is found in the Magic tool.</p> <p>a. Paint</p> <p>b. Fill</p> <p>c. Lines</p>	4x1=4	Understanding

	<p>4. _____ bar displays the name of the current document.</p> <ul style="list-style-type: none">a. Titleb. Menuc. Status		
3.	<p>Answer the following question.</p> <p>a. What is the use of Magic tool?</p> <p>_____</p> <p>_____</p> <p>b. Why do we use slide show in Tux Paint?</p> <p>_____</p> <p>_____</p> <p>c. What do you mean by Word?</p> <p>_____</p> <p>_____</p> <p>d. What is the use of Paint Program?</p> <p>_____</p> <p>_____</p>	4x1=4	Problem Solving



ARMY PUBLIC SCHOOL GWALIOR
CLASS - II
ACADEMIC SESSION 2024-25
REVISION WORKSHEET (SELF –ASSESSMENT)



Subject: Art and Work Education
Allotment Date: 30 November 2024

Assignment No. : 6

S. NO.	QUESTIONS	MARKS	NATURE
1.	What are the primary colours? _____ _____	2	Observation
2.	What are the secondary colours? _____ _____	2	Understanding
3.	What are the tertiary colours? _____ _____	2	Knowledge
4.	What are the warm colours? _____ _____	2	Knowledge
5.	What are the cool colours? _____ _____	2	Knowledge



ARMY PUBLIC SCHOOL GWALIOR
CLASS - II
ACADEMIC SESSION 2024-25
REVISION WORKSHEET (SELF –ASSESSMENT)



Subject: Health and Physical Education
Allotment Date: 30 November 2024

Assignment No. : 6

S.NO	QUESTIONS	MARKS	SKILLS/COMPETENCIES INFORMATION
1.	<p>1. What do you need to do before catching a ball?</p> <p>a) Close your eyes b) Keep your hands ready c) Turn around</p> <p>Answer:</p> <p>2. What part of your hand should touch the ball when you catch it?</p> <p>a) Fingers and palms b) Elbows c) Shoulders</p> <p>Answer:</p> <p>3. What should you do to throw a ball far?</p> <p>a) Stand still b) Swing your arm back c) Hold the ball tightly</p> <p>Answer:</p> <p>4. What helps you aim when throwing a ball?</p> <p>a) Looking at your feet b) Looking at the target c) Spinning around</p> <p>Answer:</p>	4	
2	<p>1. To catch a ball, always keep your ____ open and ready. Answer:</p> <p>2. When throwing a ball, swing your ____ back to give it more power. Answer:</p> <p>3. Always look at the ____ to aim before throwing</p>	3	Knowledge

	the ball. Answer:		
3	1. You should always keep your eyes on the ball when catching it. Answer: 2. Using only one hand is the best way to catch a ball. Answer: 3. A strong throw starts by swinging your arm back. Answer:	3	Understanding



ARMY PUBLIC SCHOOL GWALIOR
CLASS - II
ACADEMIC SESSION 2024-25
REVISION WORKSHEET (SELF –ASSESSMENT)




Subject: Music
Allotment Date: 30 November 2024

Assignment No. : 6

S. NO.	QUESTIONS	MARKS	NATURE
1	What is the singing time of raag yaman? a) Ratri ka pratham prehar b) din ka pratham prehar	1	Informative
2	How many claps(taali) are there in teen taal? a) 4 b) 3	1	Informative
3	Raga Yaman is a raga of which thaat? a) khamaaj thaat b) kaalyaan thaat	1	Informative
4	Which swar is played in Raga Yaman? a) All swar sudh & Ma tevra b) Komal swar	1	Informative
5	Sakhi eri aali..... Bin b) piya c) Kal na	1	Informative
6.	Itni shakti hume dena.....man ka Vishwas a) kamjoor b) daya ka	1	Informative
7.	Teri karu a) aaradhna b) kripa	1	Informative
8.	What do you mean by prayer ? a) worship b) request	1	Informative

9,	Dil ka khula hua a) Darwaza b) hamara	1	Informative
10.	Hamari.....hai a)Shaan b)Maan	1	Informative



ARMY PUBLIC SCHOOL GWALIOR
CLASS - II
ACADEMIC SESSION 2024-25
REVISION WORKSHEET (SELF –ASSESSMENT)



Subject: Dance
Allotment Date: 30 November 2024

Assignment No. : 6

S. NO.	QUESTIONS	MARKS	NATURE
1	How many matras are there in Teentaal? a) 16 b) 20	1	Information
2	How many taali are there in Teentaal? a) 6 b) 3	1	Critical Thinking
3	Hand work in Kathak is known as _____! a) Tatkaar b) Hastak	1	Understanding
4	How many gharanas are in Kathak? a) 4 b) 7	1	Information

5	What is the another name of teentaal? a) Tritaal b) Chautaal	1	Critical thinking
6	Who is the father of kathak? a) Pt Birju Maharaj b) Pt Jayshankar Maharaj	1	Information
7	Can both girls and boys do kathak? a) Yes b) No	1	Information
8	Tabla belongs from _____classical dance. a) Kathak b) Mohiniattam	1	Critical thinking
9	Which is the basic taal of kathak? a) Teentaal b) Jhaptaal	1	Understanding

10	How many classical dance forms are there in India ? a) 8 b) 9	1	Understanding
-----------	---	----------	---------------