

ARMY PUBLIC SCHOOL GWALIOR
CLASS - VI
ACADEMIC SESSION 2024-25
WORKSHEET (SELF –ASSESSMENT)



Subject: English

Assignment No. : 7

Allotment Date: 31 December 2024

S. No.	QUESTIONS	MARKS	NATURE
1	Fill in the blanks in the following sentences with an appropriate conjunction. (i) I want to eat pizza _____ I am too full from dinner. (ii) He can either accept the offer _____ decline it, he can't do both. (iii) Please turn off the lights _____ you're done with your work. (iv) _____ it was hot outside, I decided to stay inside with the air conditioner running.	4 Marks	Informative and understanding
2	Fill in the blanks with suitable conjunction . (i) I visit the Grand Canyon _____ I go to Arizona. (once, whenever, wherever). (ii) _____ you win first place, you will receive a prize. (wherever, if, unless) (iii) We are leaving Wednesday _____ or not it rains. (if, whether, though)	3 Marks	Understanding
3	Why are dreams important? Mention two reasons.	4 Marks	HOT
4	Who is the speaker in the poem? Who are the people the speaker meets? What are they doing?	3 Marks	Interdisciplinary
5	Write the format of the formal letter.	3 Marks	Analytical Skill
6	Write a letter to the Editor about a road that needs repair.	4 Marks	Critical Thinking
7	Answer the following questions in about 20-30 words. a) Why did the child think that the life of others is interesting? b) What happens to our body when we sleep? c) Define a dream in your own words.	3x2 = 6 Marks	Evaluation
8	Explain the following lines in your own words: (a) Nobody takes him to task, if he gets baked in the sun or gets wet. (b) Chasing the shadows with my lantern.	3 Marks	Communication Skills



ARMY PUBLIC SCHOOL GWALIOR
CLASS - VI
ACADEMIC SESSION 2024-25
WORKSHEET (SELF –ASSESSMENT)




Subject: Hindi
Allotment Date: 31 December 2024

Assignment No. : 7

क्रम सं.	प्रश्न	अंक	प्रकृति
1.	निम्नलिखित शब्दों का अर्थ लिखिए- निर्भय निष्प्रभ आबाद आदी	5	सूचनात्मक संचार कौशल (Informative Comm. Skills)
2.	निम्नलिखित प्रश्नों के उत्तर दीजिए- (क) कविता में बच्ची हमेशा छोटी बनी रहने की इच्छा क्यों जाहिर करती है? (ख) तुम्हारी मां तुम्हारे लिए क्या-क्या काम करती है (ग) तुम अपनी माता या पिता को प्रसन्न करने के लिए कौन से विशेष कार्य करते हो?	4	गंभीर सोच और समस्या समाधान (Critical Thinking and Problem Solving)
3.	नीचे दिए गए वाक्यों में उचित विराम चिन्ह लगाकर उन्हें पूर्ण करो क) विभीषण ने राम की किस प्रकार सहायता की? ख) नंदीग्राम पहुंचने से पूर्व श्री राम ने क्या किया? ग) कुबेर के विमान का नाम क्या था?	6	अंतःविषयी (Interdisciplinary)
4.	निम्नलिखित विराम चिन्हों को पहचान कर उनके नाम लिखो ।	4	समझ (Understanding)

	(i) ! (ii) ? (iii) () (iv)		
5.	(क) निम्नलिखित शब्दों के दो-दो पर्यायवाची शब्द लिखिए। (i) आँख (ii) बादल (iii) ईश्वर (iv) कमल (v) चंद्रमा (ख) निम्नलिखित शब्दों के विलोम शब्द लिखिए। (i) गंदा (ii) धनी (iii) भारी (iv) अपना (v) भलाई	5	मूल्यांकन (Evaluation)
6.	(क) समुद्र ने राम को क्या सलाह दी? (ख) मेघनाद कौन था उसे इंद्रजित क्यों कहा जाता है? (ग) गंगा यमुना के संगम पर किसका आश्रम था? (घ) राम का राज्याभिषेक किसने किया?	4	विश्लेषणात्मक (Analytical)
7.	विराम चिन्ह के सभी भेदों के नाम उदाहरण सहित लिखिए।	2	समझ (Understanding)



ARMY PUBLIC SCHOOL GWALIOR
CLASS - VI
ACADEMIC SESSION 2024-25
WORKSHEET (SELF –ASSESSMENT)



Subject: Mathematics

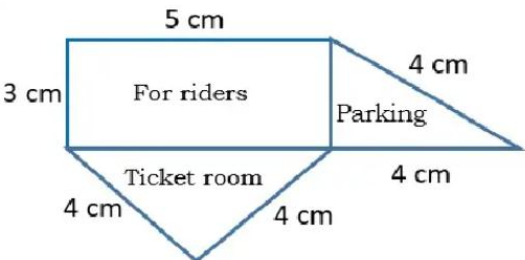
Assignment No. : 7

Allotment Date: 31 December 2024

S.NO.	QUESTIONS	MARKS	NATURE
1	The side of a square is 6 cm. If its side is doubled, then its new perimeter is (a) 48 cm (b) 60cm (c) 24cm (d) 36 cm	1	Understanding
2	The area of square is 100 cm^2 . Its side is (a) 20 cm (b) 5 cm (c) 10 cm (d) 10.5 cm	1	Critical Thinking
3	What is the perimeter of a rectangle of length l and breadth b ? (a) $2l+b$ units (b) $l \times b$ units (c) $2(l+b)$ units (d) $2(l-b)$ units	1	Analytical
4	The length of a rectangle is 150 cm. If its breadth is 1 m, then its perimeter is (a) 300 cm (b) 250 cm (c) 5 m (d) 2.5 m	1	Informative

5	<p>What is the amount of surface enclosed by a closed figure called?</p> <p>(a) Volume</p> <p>(b) Area</p> <p>(c) Space</p> <p>(d) Perimeter</p>	1	Understanding
6	<p>Perimeter of a square = _____ × length of a side</p> <p>(a) 4</p> <p>(b) 3</p> <p>(c) 2</p> <p>(d) None of these</p>	1	Informative

7	<p>The length and breadth of a rectangle are 10 cm and 8 cm respectively. If its length is doubled, then its new area is</p> <p>(a) 160 cm</p> <p>(b) 80 cm²</p> <p>(c) 160 cm²</p> <p>(d) None of these</p>	1	Understanding
8	<p>Meera went to a park 150 m long and 80 m wide. She took one complete round on its boundary. What is the distance covered by her?</p> <p>(a) 230 m</p> <p>(b) 460 m</p> <p>(c) 300 m</p>	1	Critical Thinking

	(d) None of these		
9	Area of floor of your class will be _____as the area of roof. (a) Equal (b) Greater (c) Less equal (d) None of these	1	Informative
10	A table top is covered with 25 squares of equal size. The side of the square is 3 cm. What is the area of the table top?	2	Understanding
11	Find the perimeter of a regular pentagon with each side measuring 3 cm.	2	Analytical Thinking
12	Sweety runs around a square park of side 75 m. Bulbul runs around a rectangular park with length 60 m and breadth 45 m. Who covers less distance?	2	Understanding
13	Bob wants to cover the floor of a room 3 m wide and 4 m long by squared tiles. If each square tile is of side 0.5 m, then find the number of tiles required to cover the floor of the room.	3	Problem Solving
14	What is the cost of tiling a rectangular plot of land 500 m long and 200 m wide at the rate of ₹ 8 per hundred sq m.?	3	Critical Thinking
15	An excursion trip of students of class 6 of K V Khargone visited the amusement park. The map of the park is given below:-  Based on the above information, answer the following questions: (i)What is the shape of the ticket room? (ii)What is the perimeter of the park? (iii)What is the area for riders?	4	Case study

16	Find the perimeter of each of the following shapes : (a) A triangle of sides 3 cm, 4 cm and 5 cm. (b) An equilateral triangle of side 9 cm. (c) An isosceles triangle with equal sides 8 cm each and third side 6 cm.	5	Problem solving
----	--	---	-----------------



ARMY PUBLIC SCHOOL GWALIOR
CLASS - VI
ACADEMIC SESSION 2024-25
WORKSHEET (SELF –ASSESSMENT)




Subject: Science

Assignment No. : 7

Allotment Date: 31 December 2024

S.NO.	QUESTIONS	MARKS	NATURE
1.	(i) A battery is (a) a single cell (b) a combination of cells in which cells are joined (+) to (-) (c) a combination of cells in which cells are joined (+) to (+) (d) None of these (ii) To prevent electric shocks, the metallic electrical wires are covered with (a) paper (b) cotton (c) aluminium (d) plastic	1x2=2	Informative and Understanding
2.	Fill in the blanks: (i) Our body is a conductor of electricity. (ii) When a switch is off, the circuit becomes ----- (iii) We use to test the conductivity of a material. (iv) A switch either breaks or a circuit.	1x4=4	Analytical Skill
3.	Out of aluminum foil, paper, dry cloth and rubber sheet, which is the good conductor? Tell by using a torch.	3	Critical Thinking
4.	(i) Why do you have to clean the ends of wires used for making a circuit with sand paper to make the bulbs shine? (ii) If in a circuit you have arranged cells in series. Will the bulb continue to shine even if the connection of one of the cells is reversed? Give reason	3x2=6	HOT
5.	(i) Is air a good or a bad conductor of electricity? Explain (ii) How can you explain that the human body is a good conductor of electricity?	2x2=4	Interdisciplinary
6.	(i) What are the essential components of an electric circuit?? (ii) Distinguish between: Conductors and insulators. (iii) What do you mean by a battery? (iv) In which devices do we use an electric cell.	2x4=8	Evaluation

7.	<p>Read the following passage and answer the following:</p> <p>An electric bulb has a filament that is connected to the terminals. The two terminals of filament are fixed with two thick wires provides support to it. These terminals are fixed in such a manner that they do not touch each other.</p> <p>1. Where is the filament fixed in the electric bulb?</p> <p>(a) Near the positive terminal (b) Near the negative terminal (b) In the middle (d) None of the above is correct</p> <p>2. Filament is</p> <p>(a) a thin wire that gives off light when bulb is switched on (b) fixed to two thick wires which provides support to it (c) Both the above are correct (d) None of these is correct</p> <p>3. Which of the following statement(s) is/are correct?</p> <p>(a) The two terminals of a bulb are fixed in such a way that they do not touch each other. (b) The two terminals of a bulb are fixed in such a way that they touch each other. (c) The two terminals of a bulb are connected to the same terminal of the electric cell. (d) None of the above is correct</p>	1x3=3	Communication Skills
----	--	-------	----------------------



ARMY PUBLIC SCHOOL GWALIOR
CLASS - VI
ACADEMIC SESSION 2024-25
WORKSHEET (SELF -ASSESSMENT)

Subject: Social Science

Assignment No. : 7

Allotment Date: 31 December 2024

S. NO.	QUESTIONS	MARKS	NATURE
1	How did the pottery design get its name?	3m	Informative
2	What is the significance of the great longitudinal extent of India?	2m	Understanding
3	Briefly explain the term seasonal unemployment.	3m	Interdisciplinary
4	Multiple Choice Questions- 1. Which state is part of the 'Seven Sisters' of India? (a) Orissa (b) West Bengal (c) Bihar (d) Tripura 2. People who had no land of their own and worked for others were: (a) Independent farmers (b) Dasa Saramakaras (c) Herders (d) Grihapatis 3. Approximately what fraction of all rural families are agricultural laborers? (a) 3/4th (b) 2/5th (c) 2/3th (d) 1/5th	3m	Informative
5	Match the following- 1. Sangam Literature (i) Village headman 2. Highest poverty rate (ii) Everest 3. The highest mountain peak (iii) Bihar 4. Grama bhojaka (iv) Tamil	4x1=4m	Analytical skill

6	<p>Answer the following questions in about 20-30 words.</p> <ol style="list-style-type: none"> 1. Write short note on the Northern Black Polished Ware. 2. Define the term bank. 3. Mention the important features of the three main Himalayan ranges. 	3×2=6m	Evaluation
7	<p>Write True or False-</p> <ol style="list-style-type: none"> 1. Mathura became the second capital of Kushanas. () 2. A 'peninsula' is a piece of land surrounded by water on five sides.() 3. Industrial Workers are the workers who are able to work throughout the year.() 4. Sahyadris is the other name for Western Ghats. () 	4×1=4m	Communication skills
8	<p>On a political map of India, mark and locate the following: -</p> <ol style="list-style-type: none"> 1. Thar desert 2. Coastal Plains 3. Talengana 4. Mathura 5. Arikamedu 	5×1=5m	Critical thinking and Problem solving



ARMY PUBLIC SCHOOL GWALIOR
CLASS - VI
ACADEMIC SESSION 2024-25
WORKSHEET (SELF -ASSESSMENT)



Subject: Sanskrit

Assignment No. : 7

Allotment Date: 31 December 2024

S. NO.	QUESTIONS	MARKS	NATURE
1.	शब्दानाम् अर्थान् लिखत- चिरम् - मग्नः - तूष्णीम् - पथिकः - श्रुत्वा -	1*5= 5	Information
2.	उचितकथनानां समक्षम् 'आम्' अनुचितकथनाना - अनुचितकथनानां समक्षं - 'न' इति लिखत (क) दश बालकाः स्नानाय अगच्छन्। (ख) सर्वे वाटिकायाम् अभ्रमन्। (ग) ते वस्तुतः नव बालकाः एव आसन्। (घ) (घ)एकः बालकः नद्यां मग्नः। (ङ) (ङ) ते सुखिताः तूष्णीम् अतिष्ठन्।	1*5=5	Analytical skill
3.	एकपदेन उत्तरत- (क) कति बालकाः नदीम् अगच्छन्? (ख) नदीजले बालकाः किम् अकुर्वन्? (ग) बालकाः कं न अगणयत्? (घ) तत्र के आगच्छत्? (ङ) नायकम् कः आदिशत्?	1*5=5	Understanding
4.	रिक्तस्थानानि पूरयत- पुँल्लिगडे स्त्रीलिगडे नपुंसकलिगडे एकः द्वे त्रीणि चत्वारः	1*5=5	Thinking skill

 पञ्च		
5.	<p>विकल्पेभ्यः उचितपदं चित्वा रिक्तस्थानानि पूरयत-</p> <p>(क) नीचैः, उच्चैः, मन्दम् - सिंहं गर्जति।</p> <p>(ख) शनैः, शीघ्रम्, तीव्रम् - कच्छपः चलति।</p> <p>(ग) नीचैः, उच्चैः, न - जलम् वहति।</p> <p>(घ) सदा, एकदा, तत्र - ते सत्यं वदन्ति।</p> <p>(ङ) उपरि, बहिः, कोणे - काष्ठफलकस्य पुस्तकम् अस्ति।</p>	1*5=5	Critical thinking
6.	<p>निम्नांकित अव्यय पदानि शब्दार्थाः लिखतः।</p> <p>यथा -</p> <p>सर्वत्र - सब जगह</p> <p>कदा -</p> <p>अधः -</p> <p>सहसा -</p> <p>उपरि -</p> <p>बहिः -</p>	5.	Memory skill



ARMY PUBLIC SCHOOL GWALIOR
CLASS - VI
ACADEMIC SESSION 2024-25
WORKSHEET (SELF –ASSESSMENT)



Subject: Computer

Assignment No. : 7

Allotment Date: 31 December 2024

S. NO.	QUESTIONS	MARKS	NATURE
1	<p>Tick the correct answer:</p> <p>1. is a technology that provides resources and services over the internet.</p> <p>a. Cloud computing b. Antivirus c. Soft computing</p> <p>2. include accessing software and storing files online.</p> <p>a. Resources b. Services c. Servers</p> <p>3. A single person who maintains many blogs is known as a</p> <p>a. blogger b. user c. prorammer</p> <p>4. A popular search engine that used to be MSN until it was updated in 2009 is.....</p> <p>a. Bing b. Yahoo c. Dogpile</p> <p>5. The largest network that links millions of computers all over the world is.....</p> <p>a. ARPANET b. LAN c. Internet</p>	1x5=5	Critical Thinking
2	<p>Write 'T' for True and 'F' for False statements.</p> <p>1. A wireless modem is also known as dongle.</p> <p>2. We should apply two factor authentication to all online</p>	1x3=3	Understanding

	accounts. 3. AWS is not a service provider of cloud computing.		
3	Fill in the blanks. 1. Cloud computing services are based on amodel. 2. is the example of video conferencing apps.	1x2=2	Informative



ARMY PUBLIC SCHOOL GWALIOR
CLASS - VI
ACADEMIC SESSION 2024-25
WORKSHEET (SELF –ASSESSMENT)




Subject: Art and Work Education
Allotment Date: 31 December 2024

Assignment No. : 7

S.NO	QUESTIONS	MARKS	SKILLS/ COMPETENCIES
1.	Goddess Saraswati is a wife of which god? a) Brahma b) Vishnu c) Shiva d) Indra	1	Creativity
2.	As per hindu calendar, the celebration of Vasant panchami takes place in which of the following month? a) Magha b) Phalgun c) Chaita d) Kartik	1	Creativity
3.	What does the goddess Saraswati symbolize? a) Darkness b) Illiteracy c) light, knowledge and truth d) Focus	1	Creativity
4.	In which color goddess Saraswati is dressed up in Vasant panchami? a) Yellow b) Red c) Green d) Orange	1	Creativity
5.	Celebration of Vasant Panchami is to honor which goddess? a) Durga b) Parvati c) Saraswati d) Kali	1	Creativity
6.	Complementary colours are used to create_____. a) Contrast b) Value c) Density d) None of the above	1	Creativity

7.	Material is not required in paper mache? a) Plastic putty b) Glue c) Chalk powder d) Coconut oil	1	Creativity
8.	Sultan Zain-ul-Abadin brought paper mache to Kashmir? a) True b) False	1	Creativity
9.	Which answer is an example of complementary colors? a) red–green b) Black -white c) White-red d) Black-blue	1	Creativity
10.	What is the complementary colour to orange? a) Blue b) Black c) White d) Pink	1	Creativity



ARMY PUBLIC SCHOOL GWALIOR
CLASS - VI
ACADEMIC SESSION 2024-25
WORKSHEET (SELF –ASSESSMENT)



Subject: Dance

Assignment No. : 7

Allotment Date: 31 December 2024

S. NO.	QUESTIONS	MARKS	NATURE
1	What is Narvas explained? a) Bhaupradarshan refers to the display or expression of emotions or feelings in a visible manner, often used in b) Navarasa means nine emotion; rasa means emotional state of mind.	1	Informative
2	What are the 9 rasas ? a) Joy(hasya),fear(bhayanaka),anger(Raudra),love(shringar),cou rage(vira), disgust(vibhatsya) and calmness(shanti). b) and intentions, fostering understanding and connection between individuals.	1	Informative
3	What are navras in indian drama? a) Indian literature often portrays Bhaupradarshan through characters' dialogues, actions. b) These are shringara(love/attraction),hasya(laughter/comedy).	1	Informative
4	What are the types of narvas? a) Navarasa means nava means nine,Rasa means emotional state or emotions. b) maintains decorum, and prevents misunderstandings.	1	Informative
5	Who wrote Narvas? . a) In storytelling, Bhaupradarshan enhances character depth, builds empathy. b) Sultan Ibrahim Adil shah II of Bijapur.	1	Informative
6.	How can one balance Bhaupradarshan in rsonal relationships? a). Balancing emotional expression involves understanding the other person's feelings, practicing self-awareness. b) and choosing appropriate ways to express emotions.	1	Informative
7.	Can Bhaupradarshan be considered a cultural trait? a). Yes, the manner and extent of Bhaupradarshan can	1	Informative

	<p>vary across cultures.</p> <p>b) influenced by societal norms, traditions, and values.</p>		
8.	<p>What are the negative effects of excessive Bhaupradarshan?</p> <p>a). excessive emotional display can lead to misunderstandings, strain relationships.</p> <p>b) and reduce credibility in certain situations.</p>	1	Informative
9,	<p>What is bhav in kathak?</p> <p>a). the first thought that aries in the heart.</p> <p>b) aur it's a dance in kathak.</p>	1	Informative
10.	<p>Complete the line :</p> <p>The beat in our heart sings Army Public School, _____</p> <p>a) The spring in our feat leads us to our school.</p> <p>b) The beat in our heart leads us to our school.</p>	1	Informative



ARMY PUBLIC SCHOOL GWALIOR
CLASS - VI
ACADEMIC SESSION 2024-25
WORKSHEET (SELF –ASSESSMENT)



Subject: Music

Assignment No. : 7

Allotment Date: 31 December 2024

S. NO.	QUESTIONS	MARKS	NATURE
1	How many strings are there in the instrument guitar? a) 6 b) 5	1	Informative
2	The instrument which has keys? a) Guitar b) Harmonium	1	Informative
3	How many notes are there in an octave? a) 8 b) 7	1	Informative
4	The instruments which have frets? a) Guitar b) Keyboard	1	Informative
5	Black key in the keyboard is called? a) Sharp Note b) Normal Note	1	Informative
6.	Maintaining a regular speed (tempo) while playing instrument is called? a) Laya b) Taal	1	Informative
7.	The orderly playing of beat is called a) Rhythm b) Beat	1	Informative
8.	How many parts are there in instrument Congo? a) 3	1	Informative

	b) 4		
9,	Drums, Congo instrument belong to which category? a) Brass Instruments b) Percussion Instruments	1	Informative
10.	Tabla is which type of Instrument? a) Indian b) Western	1	Informative



ARMY PUBLIC SCHOOL GWALIOR
CLASS - VI
ACADEMIC SESSION 2024-25
WORKSHEET (SELF –ASSESSMENT)



Subject: Health and Physical Education
Allotment Date: 31 December 2024

Assignment No. : 7

S.NO	QUESTIONS	MARKS	SKILLS/ COMPETENCIES
1.	<p>Tick The Correct Answer</p> <p>Q-1- How many players play in Basketball match?</p> <p>a.12 b.10 c.05 d.14</p> <p>Q-2 Basketball is a famous game of?</p> <p>a.India b.USA c.France d.Argentina</p> <p>Q-3- Who is the father of Basketball?</p> <p>a.James naismith b.Ajmer singh c.Michael phelps d.Walter camp</p> <p>Q-4- Basketball invented in?</p> <p>a.1851 b.1871 c.1881 d.1891</p>	4	Informative
2	Fill in the blanks		

	<p>Q-5- Basketball originated in _____ (USA,france)</p> <p>Q-6 There are_____ Rings in Basketball(1,2)</p> <p>Q-7KobeBryant played for_____.(Canada,USA)</p>	3	Interdisciplinary
3	<p>True False</p> <p>Q-8- Only boys can play Basketball.?</p> <p style="padding-left: 40px;">A. True</p> <p style="padding-left: 40px;">B. False</p> <p>Q-9 Basketball is a indoor game?</p> <p style="padding-left: 40px;">A. True</p> <p style="padding-left: 40px;">B. False</p> <p>Q-10-Basketball first played in Canada?</p> <p style="padding-left: 40px;">A. True</p> <p style="padding-left: 40px;">B. False</p>	3	Understanding