



**ARMY PUBLIC SCHOOL GWALIOR**  
**CLASS - II**  
**ACADEMIC SESSION 2024-25**  
**WORKSHEET (SELF -ASSESSMENT)**



**Subject: English**

**Assignment No. : 7**

**Allotment Date: 31 December 2024**

S. NO.	QUESTIONS	MARKS 20	NATURE
1.	<p><b>Tick the correct option.</b></p> <p>1. The trees are tall because</p> <p>a) their heads touch the sky. b) a person cannot see their heads. c) the clouds rest on them. d) no one can climb them.</p> <p>2. Opposite of quickly is _____.</p> <p>a) slowly    b) sky        c) rest        d) feet</p> <p>3. Rhyming word of rest is _____.</p> <p>a) by        b) nest        c) sky        d) earth</p>	3x1=3	Information
2.	<p><b>Complete the lines of the poem.</b></p> <p>With their feet in the _____ And their _____ in the sky The tall _____ watch The clouds go by.</p>	3x1=3	Information
3.	<p><b>Answer the following questions.</b></p> <p><b>Q1. Who is the poet of the poem 'Tall Trees'?</b></p> <p>Ans. _____</p> <p>_____</p> <p>_____</p> <p><b>Q2. Why the trees are so kind?</b></p> <p>Ans. _____</p> <p>_____</p> <p>_____</p>	2x2=4	Understanding

4.	<p><b>Arrange the words to form meaningful sentences.</b></p> <p>(i) the is blue sky _____.</p> <p>(ii) Rohit smart boy is a _____.</p> <p>(iii) red Tarun has cap is _____.</p> <p>(iv) very big school is the _____.</p> <p>(v) seven old Tanya is years _____.</p>	5×1=5	Problem solving
5.	<p><b>Fill in the missing letters.</b></p> <p>(i) e _ r t _                      (ii) t r _ _ s</p> <p>(iii) d _ s k                        (iv) s h _ l t e _</p>	4×0.5= 2	Literary skills
6.	<p><b>Rewrite the sentences using capital letters, full stops or question marks.</b></p> <p>(i) how are you _____</p> <p>(ii) is dhruv absent _____</p> <p>(iii) have you been to delhi</p>	3×1=3	Understanding



ARMY PUBLIC SCHOOL GWALIOR  
CLASS - II  
ACADEMIC SESSION 2024-25  
WORKSHEET (SELF -ASSESSMENT)




Subject: Hindi

Assignment No. : 7

Allotment Date: 31 December 2024

संख्या	प्रश्न	अंक	प्रश्न के प्रकार
1.	कविता की पंक्तियाँ पूरी कीजिए- (i) सूरज के _____ मीठा _____ (ii) चूँ- चूँ ची- ची _____ सबको खुश _____	4x1=4	भाषा बोध
2.	निम्नलिखित शब्दों के अर्थ लिखिए- (i) नीड़ - _____ (ii) उगते - _____	2x1=2	ज्ञानात्मक
3.	एक जैसी आवाज़वाले शब्द लिखिए- (i) डाली - _____ (ii) चुगना - _____ (iii) गिनती - _____ (iv) सर्दी - _____	4x1=4	रचनात्मक
4.	निम्नलिखित वाक्यों में (,) लगाइए - (i) मुझे चॉकलेट फल और मिठाई पसंद है । (ii) सुमन राधा रेखा और रीनू खेल रहे हैं । (iii) कल हम बाज़ार से बहुत-सी किताबें पैसीले कपड़े और खिलौने लाए थे । (iv) रवि वरुण मयंक और विवेक बात कर रहे हैं ।	4x1=4	सूचनात्मक

5	<p>निम्नलिखित प्रश्नों के उत्तर लिखिए -</p> <p>(i) चिड़िया सबको क्या सिखलाती है?</p> <p>-----</p> <p>-----</p> <p>(ii) चिड़िया दूर-दूर तक क्यों जाती है?</p> <p>-----</p> <p>-----</p>	2x2=4	विश्लेषणात्मक
6.	<p>कुछ चिड़ियाँ एक जगह से दूसरी जगह बसने क्यों जाती हैं?</p> <p>-----</p> <p>-----</p> <p>-----</p> <p>-----</p>	2x1=2	उच्चस्तरीय चिंतन



**ARMY PUBLIC SCHOOL GWALIOR**  
**CLASS - II**  
**ACADEMIC SESSION 2024-25**  
**WORKSHEET (SELF –ASSESSMENT)**



Subject: Mathematics

Assignment No. : 7


Allotment Date: 31 December 2024

S.NO.	QUESTIONS	MARKS 20	NATURE
1.	<p><b>Choose the correct answer:</b></p> <p>1. _____ is standard unit for measuring capacity.            a) Litre                  b) Millilitres          c) Metre</p> <p>2. To convert L into mL, multiply by _____.            a) 100      b) 1000                  c) 10</p> <p>3. The amount of liquid that a container can hold is called _____.            a) weight          b) capacity      c) length</p>	3x1=3	Information
2.	<p><b>Write the capacity of the following in L or mL.</b></p> <p>a) A water tank                  _____</p> <p>b) A cup of soup                  _____</p> <p>c) A packet of oil                  _____</p> <p>d) A glass of milk                  _____</p> <p>e) A small juice bottle                  _____</p>	5x1=5	Understanding
3.	<p><b>Do as directed.</b></p> <p>(i) Convert into millilitres:</p> <p>a) 4 L                                  b) 15 L</p> <p>_____                                  _____</p> <p>(ii) Convert into litres:</p> <p>a) 8000 mL                          b) 24000 mL</p> <p>_____                                  _____</p>	4x1=4	Problem solving

4.	<p><b>Solve the following as directed.</b></p> <p>A) Add the following.</p> <p>a) 1 0 8 mL + 2 7 5 mL _____ _____</p> <p>b)        L        mL       6 8 5     2 4 8       + 1 0 0     3 7 2       _____       _____</p> <p>B) Subtract the following.</p> <p>a) 9 5 4 L - 3 2 8 L _____ _____</p> <p>b)        L        mL       7 2 8     9 2 5       - 5 2 8     8 1 0       _____       _____</p>	4x1=4	Critical Thinking
5.	<p>Solve the following word problems.</p> <p>A) A water tanker had 350 L of water.170 L more water was filled in it. How much water does the tanker have now.</p> <div data-bbox="248 1111 1023 1507" style="border: 2px solid orange; height: 177px; width: 485px; margin: 10px 0;"></div>	2X2=4	HOTS

B) An oil drum had 56 L of oil. Out of this, 23 L was used.  
How much oil is left in the drum?







**ARMY PUBLIC SCHOOL GWALIOR**  
**CLASS - II**  
**ACADEMIC SESSION 2024-25**  
**WORKSHEET (SELF –ASSESSMENT)**



Subject: EVS

Assignment No. : 7

Allotment Date: 31 December 2024

S.NO.	QUESTIONS	MARKS 20	NATURE
1.	<b>Tick the correct answer:</b>  1. When the wind blows softly, it is called _____. a) wind                      b) breeze              c) storm  2. _____ is needed by human beings to breathe. a) Carbon-dioxide      b) Nitrogen      c) Oxygen  3. A windmill needs _____ to work. a) air                      b) water              c) fuel	1X3=3	Understanding
2.	<b>Fill in the blanks:</b>  f) Moving air is called _____. g) A storm is always _____. h) _____ air is good for our health.	1x3=3	Analytical skill
3.	<b>Encircle the correct option.</b> a) Wind blows in one / many directions.  b) Wind blows very fast it is called breeze / storm.	1x2=2	Analytical skill
5.	<b>Identify the name of the following:</b> a)  _____ b)  _____ c) _____	1x3=3	Observation





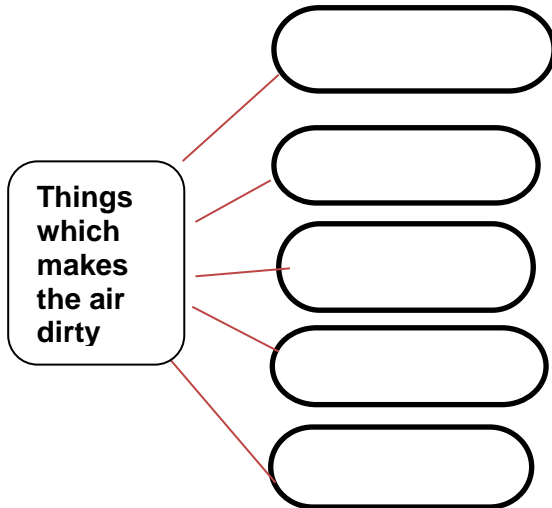
\_\_\_\_\_

6.

**Complete the flowchart.**

1x5= 5

Understanding



7.

Write any three properties of air.

2x2=4

HOTS

---

---

---

---

8.

What are the harmful effects of dirty and impure air?

---

---

---

---



**ARMY PUBLIC SCHOOL GWALIOR**  
**CLASS - II**  
**ACADEMIC SESSION 2024-25**  
**WORKSHEET (SELF –ASSESSMENT)**



Subject: G.K

Assignment No. : 7

Allotment Date: 31 December 2024

S.NO	QUESTIONS	MARKS 10	NATURE												
1.	<p><b>Tick the correct option from the following.</b></p> <p>1) In this game, there is a string which helps to spin the top and also to lift it up while it spins.</p> <p>a. Kho- Kho    b. Spinning top    c. Skipping rope</p> <p>2) This game is played with a long wooden stick and a small oval- shaped piece of wood.</p> <p>a. Marbles            b. Hopscotch            c. Gilli- danda</p> <p>3) It is game of a ball and a pile of flat stones. It is generally played between two teams in a large outdoor area.</p> <p>a. Seven stones    b. Kite flying            c. Hide and Seek</p>	<b>3X1=3</b>	Identification and General Awareness												
2.	<p><b>Match the following columns.</b></p> <table style="width: 100%;"><thead><tr><th style="text-align: left;">Column 'A'</th><th style="text-align: left;">Column 'B'</th></tr></thead><tbody><tr><td>(i) UK</td><td>a) Ruble</td></tr><tr><td>(ii) France</td><td>b) Pound Sterling</td></tr><tr><td>(iii) Bangladesh</td><td>c) Euro</td></tr><tr><td>(iv) Russia</td><td>d) Yuan</td></tr><tr><td>(v) China</td><td>e) Taka</td></tr></tbody></table>	Column 'A'	Column 'B'	(i) UK	a) Ruble	(ii) France	b) Pound Sterling	(iii) Bangladesh	c) Euro	(iv) Russia	d) Yuan	(v) China	e) Taka	<b>5X1=5</b>	Identification and General Awareness
Column 'A'	Column 'B'														
(i) UK	a) Ruble														
(ii) France	b) Pound Sterling														
(iii) Bangladesh	c) Euro														
(iv) Russia	d) Yuan														
(v) China	e) Taka														
3.	<p><b>Identify and name the following Gaming Consoles.</b></p> <p>a)</p>	<b>2X1=2</b>	Observation and Identification												



shutterstock.com - 1291609477

---

b)



---



**ARMY PUBLIC SCHOOL GWALIOR**  
**CLASS - II**  
**ACADEMIC SESSION 2024-25**  
**WORKSHEET (SELF –ASSESSMENT)**



Subject: Computer

Assignment No. : 7

Allotment Date: 31 December 2024

S.NO.	QUESTIONS	MARKS	NATURE
1.	<p><b>Tick the correct answer.</b></p> <p>(i) To make the sprite move, use the _____ blocks.</p> <p>a) Motion b) Looks c) control</p> <p>(ii)Scratch Jr app runs on the _____.</p> <p>a) Server b) Smartphone c) tablet</p> <p>(iii) Script is also known as _____.</p> <p>a)page b)program c)character</p>	3x1=3	Information
2.	<p><b>Fill in the blanks-</b></p> <p>a) _____ is the place where sprite moves.</p> <p>b) _____ is the place where we can make our program by assembling blocks.</p> <p>c) Using BlueStacks software, we can use ScratchJr on _____.</p>	3x1=3	Understanding
3.	<p><b>Write 'T' for True or 'F' for False against the statements:-</b></p> <p>a) In ScratchJr, sequence of actions is called a script. b) When the script runs, each block is highlighted. c) ScratchJr can only run on Tablets. d) We cannot add more characters in the projects.</p>	4x1=4	Interdisciplinary



**ARMY PUBLIC SCHOOL GWALIOR**  
**CLASS - II**  
**ACADEMIC SESSION 2024-25**  
**WORKSHEET (SELF –ASSESSMENT)**



**Subject: Art and Work Education**  
**Allotment Date: 31 December 2024**

**Assignment No. : 7**

S. NO.	QUESTIONS	MARKS	NATURE
1.	What are the primary colours? _____ _____	2	Observation
2.	What are the secondary colours? _____ _____	2	Understanding
3.	What are the tertiary colours? _____ _____	2	Knowledge
4.	What are the warm colours? _____ _____	2	Knowledge
5.	What are the cool colours? _____ _____	2	Knowledge



**ARMY PUBLIC SCHOOL GWALIOR**  
**CLASS - II**  
**ACADEMIC SESSION 2024-25**  
**WORKSHEET (SELF –ASSESSMENT)**



**Subject: Health and Physical Education**  
**Allotment Date: 31 December 2024**

**Assignment No. : 7**

S.NO.	QUESTIONS	MARKS	NATURE
1.	<p><b>Tick the correct answer.</b></p> <p>1. When dribbling a football, which part of your foot should you use? a) Inside or outside of your foot b) Your heel c) The top of your toes d) Your ankle</p> <p>2. What should you use to dribble a basketball? a) Your palm b) Your fingers c) Your fist d) Your whole arm</p> <p>3. Why should you look up while dribbling the ball? a) To see where you are going b) To watch the ball closely c) To look at your shoes d) To count the clouds</p> <p>4. What helps you keep control while dribbling? a) Kicking or bouncing the ball very hard b) Small, gentle taps or bounces c) Holding the ball tightly d) Running without dribbling</p>	4x1=4	Information
2.	<p><b>Fill in the blanks-</b></p> <p>1. While dribbling a basketball, you should use your _____ to bounce the ball. A. legs B. finger C. elbow</p> <p>2. In football, dribbling is done by gently tapping the ball with the _____ of your foot. A. Up and down B. inside or outside C. Touch</p> <p>3. When dribbling, it is important to keep your _____ up to see where you are going. A. eyes B. Hands C. Legs</p>	3x1=3	Understanding

3.	<p><b>Write 'T' for True or 'F' for False against the statements.</b></p> <p>1. You should keep your eyes on the ball the entire time while dribbling. Answer:</p> <p>2. Using gentle touches or bounces helps you control the ball better while dribbling. Answer:</p> <p>3. Dribbling helps you move with the ball while keeping it under control. Answer:</p>	3x1=3	Interdisciplinary



**ARMY PUBLIC SCHOOL GWALIOR**  
**CLASS - II**  
**ACADEMIC SESSION 2024-25**  
**WORKSHEET (SELF –ASSESSMENT)**



**Subject: Music**

**Assignment No. : 7**

**Allotment Date: 31 December 2024**

S. NO.	QUESTIONS	MARKS	NATURE
1	AAO tumhe .....pe le jaye a)aasman b)chand	1	Informative
3	Pyaar ki hai .....door aasmaan pe a) Duniyaa b) aankhe	1	Informative
4	How many Vibhags are there in Teentaal ? a) 4 b)3	1	Informative
5	Jingle bell jingle bell jingle..... a) all the way b) hey	1	Informative
6.	Mil ke na ..... koi Waha pe a) Bichhde b) door	1	Informative
7.	Chhota sa ..... Banaye a) Bangla b) Shaan	1	Informative
8.	What do you mean by prayer ? a) Worship b) Request	1	Informative
9,	So high , you can't get ____ it a) under b) over	1	Informative
10.	Teri marzi se aay malik.....is duniya a) Hum	1	Informative



	b) Tum		
--	--------	--	--



**ARMY PUBLIC SCHOOL GWALIOR**  
**CLASS - II**  
**ACADEMIC SESSION 2024-25**  
**WORKSHEET (SELF –ASSESSMENT)**



**Subject: Dance**

**Assignment No. : 7**

**Allotment Date: 31 December 2024**

S. NO.	QUESTIONS	MARKS	NATURE
1	Which one is the western dance form? a) Hip- Hop b) Bhangra	1	Information
2	Who can enjoy Zumba ? a) any age group b) only youth	1	Critical Thinking
3	Which one is the folk dance of Gujarat ? a) Giddha b) Dandiya	1	Understanding
4	Who is the king of dance ? a) Shiva Natraja b) Vishnu	1	Information
5	Which instrument is used in Westerns? a) Guitar b) Tabla	1	Critical thinking
6	Who is known as the father of Kathak? a) Pt Birju Maharaj b) Pt Jayshankar Maharaj	1	Information
7	Which one is the folk dance of Maharashtra? a) Lavni b) Ghoomer	1	Information
8	Is salsa a western dance ? a) Yes	1	Critical thinking

	b) No		
9	Which of the dance is performed with sticks? a) Garwa b) Dandiya	1	Understanding
10	How many classical dance forms are there in India ? a) 8 b) 9	1	Understanding