



**ARMY PUBLIC SCHOOL GWALIOR**  
**CLASS - I**  
**ACADEMIC SESSION 2024-25**  
**WORKSHEET (SELF –ASSESSMENT)**



**Subject: English**

**Assignment No. : 7**

**Allotment Date: 31 December 2024**

S.NO	QUESTIONS	MARKS	SKILLS
1.	Fill in the blanks with A/An/The:  ..... aeroplane ..... dog  ..... Taj Mahal ..... Apron  ..... onion ..... car  ..... Sun ..... pencil  ..... elephant ..... Earth	5×1=5	Analytical
2.	Write the meanings of the given words:  a. hungry –  b. dead –  c. danger -	4 x 1 =4	Language and Communication, Cognitive
3.	Match the animals and birds with their sounds :  a) A dog    hums  b) A horse   mews  c) A bee   barks  d) A bird    neighs  e) A cat   chirps	5×1=5	Analytical
4.	Answer the following questions:  Q1. Did the bear eat Mohit?  Ans. _____  _____	3×2=6	Critical thinking

Q2. Who could not climb trees?

Ans. \_\_\_\_\_

\_\_\_\_\_

Q3. How did Mohit act to save himself?

Ans. \_\_\_\_\_

\_\_\_\_\_




ARMY PUBLIC SCHOOL GWALIOR  
CLASS - I  
ACADEMIC SESSION 2024-25  
WORKSHEET (SELF -ASSESSMENT)







Subject: Hindi

Assignment No. : 7

Allotment Date: 31 December 2024

संख्या	प्रश्न/उत्तर	अंक	प्रकृति
प्र.1	<p>दिए गए चित्रों का उनके सही नाम से मिलन करो:</p>  <p>श्रमिक                      यज्ञ                      त्रिकोण                      कक्ष</p>	1x4=4	बोधोत्प्रेमक
प्र 2	<p>ऐसे शब्द लिखो जिनमें नीचे दिए गए वर्णोंका प्रयोग किया हो</p> <p>ट्र                      -----</p> <p>क्र                      -----</p> <p>क्ष                      -----</p>	1 x3 =3	गहन सोच
प्र-3	<p>नीचे लिखे शब्दों के अर्थ लिखो:</p> <p>1.इशारा                      -                      -----</p> <p>2.तुरंत                      -                      -----</p> <p>3.कचहरी                      -                      -----</p> <p>4.आँखें तरेरना                      -                      -----</p>	4x 1=4	समस्या समाधान

<p>प्र-4</p>	<p>निम्नलिखित प्रश्नों के उत्तर दीजिए</p> <p>प्रश्न 1. विभु कहाँ रहते थे?</p> <p>उत्तर 1. _____</p> <p>प्रश्न 2. शिकारी क्यों आया?</p> <p>उत्तर 2. _____</p> <p>प्रश्न 3. शिकारी ने मृग को क्यों नहीं मारा?</p> <p>उत्तर 3. _____</p>	<p>3 x1=3</p>	<p>भाषाई कौशल</p>
<p>प्र-5</p>	<p>चित्रों के नाम लिखो:</p> <p> _____</p> <p> _____</p> <p> _____</p>	<p>3x1=3</p>	<p>विश्लेषणात्मक</p>
<p>प्र-6</p>	<p>नाम लिखो -</p> <p>मेरा नाम -----</p> <p>माँ का नाम -----</p> <p>पिताजी का नाम -----</p> <p>बहन/भाई का नाम -----</p>	<p>4x1=4</p>	<p>बोधात्मक</p>


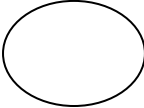
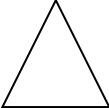

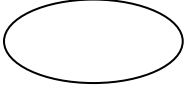


**ARMY PUBLIC SCHOOL GWALIOR**  
**CLASS - I**  
**ACADEMIC SESSION 2024-25**  
**WORKSHEET (SELF -ASSESSMENT)**



**Subject: Mathematics**  
**Allotment Date: 31 December 2024**

**Assignment No. : 7**

S.NO	QUESTIONS	MARKS	SKILLS
1.	<p>Fill in the boxes.</p> <p>Name : _____ Number of corner : _____ Number of sides : _____</p>  <p>Name : _____ Number of corner : _____ Number of sides : _____</p>  <p>Name : _____ Number of corner : _____ Number of sides : _____</p>  <p>Name : _____ Number of corner : _____ Number of sides : _____</p>  <p>Name : _____ Number of corner : _____ Number of sides : _____</p> 	5×2=10	Computational skills

2.

### Match the Shapes

Match the shape to the everyday object

Green square, Yellow circle, Red triangle, Blue rectangle, Slice of pizza, Framed picture, Brown door, Quarter coin.

$4 \times 1 = 4$

Computational skills


3.

Count and colour the shapes.

8 Square, 4 Circle, 5 Triangle, 9 Rectangle

$6 \times 1 = 6$

Problem solving



**ARMY PUBLIC SCHOOL GWALIOR**  
**CLASS - I**  
**ACADEMIC SESSION 2024-25**  
**WORKSHEET (SELF –ASSESSMENT)**



Subject: EVS


Assignment No. : 7

Allotment Date: 31 December 2024

S.NO	QUESTIONS	MARKS	SKILLS
1.	<p>Fill in the blanks using the help box given below:</p> <p>(Sea, six, Roots, water, Banyan)</p> <p>a) _____ are present below the soil.</p> <p>b) The insects are tiny animals with _____ legs.</p> <p>c) Aquatic animals live in _____.</p> <p>d) _____ is our national tree.</p> <p>e) _____ water is salty in taste.</p>	5×1=5	Application and analytical skills
2.	<p>Match the following animals to their homes:</p>	5×1=5	Art Integration and identification skills
3.	<p>Write 'T' for true and 'F' for false in the given blanks below.</p> <p>a. Rain is the main source of water on Earth . (.....)</p> <p>b. Cheetah is called the King of Jungle (.....)</p> <p>c. A plant has two main parts- the shoot and the root. (.....)</p> <p>d. Cows give us milk. (.....)</p>	5×1=5	Analytical skills

	e. We need water for drinking only. (.....)		
4.	<p>Answer the following questions:</p> <p>a. Name any two uses of water? Ans ._____.</p> <p>b. Where do wild animals live? Ans ._____.</p> <p>c. What are trees? Ans _____ _____.</p> <p>d. Name any two aquatic animals. Ans _____.</p> <p>e. Write two ways to control wastage of water? Ans ._____. _____.</p>	5×1=5	Language, critical thinking





**ARMY PUBLIC SCHOOL GWALIOR**  
**CLASS - I**  
**ACADEMIC SESSION 2024-25**  
**WORKSHEET (SELF –ASSESSMENT)**




Subject: Computer

Assignment No. : 7

Allotment Date: 31 December 2024

S.NO.	QUESTIONS	MARKS	NATURE
1.	<p><b>Tick the correct answer.</b></p> <p>(i) Arranging things makes them look _____.</p> <p>a) heavy b) tidy c) untidy</p> <p>(ii) _____ means breaking up of a problem into smaller parts.</p> <p>a) Decomposition b) Arranging c) Pattern</p>	2x1=2	Information
2.	<p><b>Fill in the blanks-</b></p> <p>a) _____ is created when figures or shapes are arranged in a design.</p> <p>b) Decomposition of a problem makes it easy to _____.</p>	2x2=4	Understanding
3.	<p><b>Write 'T' for True or 'F' for False against the statements:-</b></p> <p>a) Patterns do not repeat over and over again. b) We use decomposition in our daily lives too. c) Decomposition of a problem makes it difficult to solve. d) Arranging things makes them look tidy.</p>	4x1=4	Interdisciplinary



**ARMY PUBLIC SCHOOL GWALIOR**  
**CLASS - I**  
**ACADEMIC SESSION 2024-25**  
**WORKSHEET (SELF -ASSESSMENT)**



**Subject: Art and Work Education**  
**Allotment Date: 31 December 2024**

**Assignment No. : 7**

<b>S. NO.</b>	<b>QUESTIONS</b>	<b>MARKS</b>	<b>NATURE</b>
Q.1	What are the primary colours?	2	Knowledge
Ans			
Q.2	What are the secondary colours?	2	Knowledge
Ans			
Q.3	What are the Tertiary colours?	2	Knowledge
Ans			
Q.4	What are the warm colours?	2	Knowledge
Ans			
Q.5	What are the cool colours?	2	Knowledge
Ans			



**ARMY PUBLIC SCHOOL GWALIOR**  
**CLASS - I**  
**ACADEMIC SESSION 2024-25**  
**WORKSHEET (SELF –ASSESSMENT)**



**Subject: Health and Physical Education**

**Assignment No. : 7**

**Allotment Date: 31 December 2024**

S.NO.	QUESTIONS	MARKS	NATURE
1.	<p><b>Tick the correct answer.</b></p> <p>1. When dribbling a football, which part of your foot should you use? a) Inside or outside of your foot b) Your heel c) The top of your toes d) Your ankle</p> <p>2. What should you use to dribble a basketball? a) Your palm b) Your fingers c) Your fist d) Your whole arm</p> <p>3. Why should you look up while dribbling the ball? a) To see where you are going b) To watch the ball closely c) To look at your shoes d) To count the clouds</p> <p>4. What helps you keep control while dribbling? a) Kicking or bouncing the ball very hard b) Small, gentle taps or bounces c) Holding the ball tightly d) Running without dribbling</p>	4x1=4	Information
2.	<p><b>Fill in the blanks-</b></p> <p>1. While dribbling a basketball, you should use your _____ to bounce the ball. A. legs B. finger C. elbow</p> <p>2. In football, dribbling is done by gently tapping the ball with the _____ of your foot. A. Up and down B. inside or outside C. Touch</p> <p>3. When dribbling, it is important to keep your _____ up to see where you are going.</p>	3x1=3	Understanding

	<p>A. eyes B. Hands C. Legs</p>		
<p>3.</p>	<p><b>Write 'T' for True or 'F' for False against the statements.</b></p> <p>1.You should keep your eyes on the ball the entire time while dribbling. Answer:</p> <p>2.Using gentle touches or bounces helps you control the ball better while dribbling. Answer:</p> <p>3.Dribbling helps you move with the ball while keeping it under control. Answer:</p>	<p>3x1=3</p>	<p>Interdisciplinary</p>



**ARMY PUBLIC SCHOOL GWALIOR**  
**CLASS - I**  
**ACADEMIC SESSION 2024-25**  
**WORKSHEET (SELF –ASSESSMENT)**



**Subject: Music (Dance)**

**Assignment No. : 7**

**Allotment Date: 31 December 2024**

S. NO.	QUESTIONS	MARKS	NATURE
1	Which one is the western dance form? a) Hip- Hop b) Bhangra	1	Information
2	who can enjoy Zumba ? a) any age b) only youth	1	critical Thinking
3	What are the salsa dancers called ? a) Salsero b) Salsiriya	1	Understanding

<p><b>4</b></p>	<p>who is the king of dance ?</p> <p>a) shiva Natraja</p> <p>b) Vishnu</p>	<p><b>1</b></p>	<p>Information</p>
<p><b>5</b></p>	<p>Which instrument is used in westerns?</p> <p>a) guitar</p> <p>b) Tabla</p>	<p><b>1</b></p>	<p>Critical thinking</p>
<p><b>6</b></p>	<p>Is salsa a folk dance ?</p> <p>a) yes</p> <p>b) No</p>	<p><b>1</b></p>	<p>Information</p>
<p><b>7</b></p>	<p>which one is folk dance of Maharashtra?</p> <p>a) Lavni</p> <p>b) Ghoomer</p>	<p><b>1</b></p>	<p>Information</p>
<p><b>8</b></p>	<p>Is salsa a western dance ?</p> <p>a) yes</p> <p>b) No</p>	<p><b>1</b></p>	<p>Critical thinking</p>

<b>9</b>	Which dance is performed with sticks? a) Garwa b) Dandiya	<b>1</b>	Understanding
<b>10</b>	who started hip- hop in India ? a) Baba Sehgal b) Kumar Shanu	<b>1</b>	Understanding