




ARMY PUBLIC SCHOOL GWALIOR
CLASS - VI
ACADEMIC SESSION 2024-25
WORKSHEET (SELF –ASSESSMENT)

Subject: English
Allotment Date: 31 January 2025

Assignment No.: 08

S. NO.	QUESTIONS	MARKS	NATURE
1	Complete the following sentences: a) The banyan tree served the boy as a..... b) The small gray squirrel became friendly when..... 	2x2=4Marks	Informative and understanding
2	Answer the following questions: a) Who were the other two spectators? What did they do? b) What happened to the crow in the end? c) What did the cobra and mongoose do to show their readiness in the fight?	2x3=6 Marks	Understanding
5	Change the following sentences into indirect speech: a) She said to him, "I shall play with you." b) I said to my father, "I will score good in exams." c) The teacher said to us, "Tomorrow will be your science test." d) My brother said, "I want to eat fruits." e) He said, "Mohan writes a letter."	5Marks	Analytical Skills
6	Outline of a story is given below. Frame a story of your own in about 100 words: An elephant.....always passed by a tailor's shoptailor angry. One day, priced with a needle elephant filled his trunk with dirty water threw it all around the shop spoiled the clothes.	5Marks	Critical Thinking and Problem Solving

7	Answer the following questions: a) What did Saeeda tell sunrays to do? b) What did the specialist prescribe in addition to the medicine? c) Why were the sunrays keen to go down to the earth the next day?	3×2= 6Marks	Evaluation
8	What is your own formula for keeping good health?	4Marks	Communication Skills



ARMY PUBLIC SCHOOL GWALIOR
CLASS - VI
ACADEMIC SESSION 2024-25
WORKSHEET (SELF –ASSESSMENT)




Subject: Hindi
Allotment Date: 31 January 2025

Assignment No.: 08

क्रम सं.	प्रश्न	अंक	प्रकृति
1.	निम्नलिखित शब्दों का अर्थ लिखिए- आगंतुक, अनुकरण, लाचारी, चारु, नेह, विलोचन, केतिक	5	सूचनात्मक संचार कौशल (Informative Comm. Skills)
2.	निम्नलिखित प्रश्नों के उत्तर दीजिए- (क) आश्रम में काम करने या करवाने का कौन सा तरीका गांधी जी अपनाते थे इसे पाठ से पढ़कर लिखो। (ख) गांधी जी इतना पैदल क्यों चलाते थे पैदल चलने के क्या लाभ है लिखो। (ग) नगर से बाहर निकलकर दो पैग चलने के बाद सीता की क्या दशा हुई ? (घ) कविता में दिए गए दोनों सवाईयों के प्रसंग के बीच का अंतर स्पष्ट करो। (ङ) पाठ के आधार पर वन के मार्ग का वर्णन अपने शब्दों में करो।	4	गंभीर सोच और समस्या समाधान (Critical Thinking and Problem Solving)
3.	नीचे दिए गए वाक्यों में उचित विराम चिन्ह लगाकर उन्हें पूर्ण करो क) भारतीय संस्कृति का इतिहास बहुत प्राचीन है ख) इस युग में साहित्य मूर्ति कला वास्तु कला तथा चित्रकला के क्षेत्र में अद्भुत उन्नति हुई है ग) तुम्हारे पिताजी का नाम क्या है घ) सुभाष चंद्र बोस ने कहा था तुम मुझे खून दो मैं तुम्हें आजादी दूंगा ङ) ओह यह तुम क्या कर बैठे च) जीवन मरण दिन रात अच्छा बुरा सब ईश्वर के हाथ में है	6	अंतःविषयी (Interdisciplinary)
4.	निम्नलिखित शब्दों से भाववाचक संज्ञाएँ बनाइए। (i) चोर (ii) बीमार (iii) मीठा (iv) बूढ़ा	4	समझ (Understanding)

5.	(क) निम्नलिखित शब्दों के दो-दो पर्यायवाची शब्द लिखिए। (i) आँख (ii) बादल (iii) ईश्वर (iv) कमल (v) चंद्रमा (ख) निम्नलिखित शब्दों के विलोम शब्द लिखिए। (i) गंदा (ii) धनी (iii) भारी (iv) अपना (v) भलाई	5	मूल्यांकन (Evaluation)
6.	(क) समुद्र ने राम को क्या सलाह दी ? (ख) मेघनाद कौन था उसे इंद्रजित क्यों कहा जाता है ? (ग) गंगा यमुना के संगम पर किसका आश्रम था ? (घ) राम का राज्याभिषेक किसने किया ?	4	विश्लेषणात्मक (Analytical)
7.	विराम चिन्ह के सभी भेदों के नाम उदाहरण सहित लिखिए।	2	समझ (Understanding)



ARMY PUBLIC SCHOOL GWALIOR
CLASS - VI
ACADEMIC SESSION 2024-25
WORKSHEET (SELF –ASSESSMENT)



Subject: Sanskrit
Allotment Date: 31 January 2025

Assignment No.: 08

S. NO.	QUESTIONS	MARKS	NATURE
1.	शब्दानाम् अर्थान् लिखत- अनाय = अनेतुम् = धराम् = चित्वा = प्रतियाम् =	1*5= 5	Information
2.	अधोलिखितानां पदानां समुचितान् अर्थान् मेलयत- क ख हस्ते अकस्मात् सहसा पृथ्वीम् धनम् करे आकाशम् द्रविणम् धराम् गगनम्	1*5=5	Analytical skill
3.	भिन्नवर्गस्य पदं चिनुत-- (क) पत्राणि, पुष्पाणि, फलानि, मित्राणि। (ख) जलचर, खेचर, भूचर, निशाचर। (ग) मयूराः, चटकाः, शुकाः, मण्डूकाः। (घ) लेखनी, पुस्तिका, अध्यापिका, अजा। (ङ) गावः, सिंहाः, कच्छपाः, गजाः।	1*5=5	Understanding
4.	अधोलिखित शब्दानाम् सन्धि-विच्छेद कुरुत - (क) विद्यालयः (ख) गिरीशः	1*5=5	Thinking skill

	(ग) सदैव (घ) भानूदयः (ङ) हितोपदेशः		
5.	रेखांकितपदानि शुद्धानि कृत्वा वाक्यानि पुनः लिखत - (क) सः तत्र गच्छन्ति। _____ (ख) ते धावति। _____ (ग) वयं नृत्यामि। _____ (घ) रामः पठन्ति। _____ (ङ) तौ खेलन्ति। _____	1*5=5	Critical thinking
6.	अधोलिखितानि विलोम पदानि मेलयत - (क) चतुरः - (क) पृथिव्याम् (ख) उन्नतः - (ख) सेवकः (ग) गगने - (ग) मूर्खः (घ) स्वामी - (घ) दुःखी (ङ) सुखी - (ङ) अवनतः	1*5=5	Memory skill



ARMY PUBLIC SCHOOL GWALIOR
CLASS - VI
ACADEMIC SESSION 2024-25
WORKSHEET (SELF -ASSESSMENT)



Subject: Mathematics
Allotment Date: 31 January 2025

Assignment No.: 08

S.NO.	QUESTIONS	MARKS	NATURE
1	What is the simplest form of the ratio 144:28? (a) 28:4 (b) 36: 7 (c) 7:36 (d) 1:2	1	Understanding
2	Which of the following is a proportion? (a) 3,27,9,9 (b) 5,11,15,44 (c) 3,5,15,25 (d) 4,3,36,18	1	Critical Thinking
3	6 : 4 is equivalent ratio of _____. (a) it is 3:2 (b) it is 2:3 (c) it is 1:2 (d) None of these?	1	Understanding
4	Perimeter of an equilateral triangle, whose each side is 'x' unit is (a) 4x (b) 2x (c) 3+x (d) 3x	1	Informative

5	<p>If the cost of 6 cans of juice is Rs 210, then what will be the cost of 4 cans of juice?</p> <p>(a) Rs 140 (b) Rs 280 (c) Rs 70 (d) None of these</p>	1	Understanding
6	<p>What are the extremes of the proportion 9:3::36:12?</p> <p>(a) 9, 3 (b) 36, 12 (c) 3, 36 (d) 9, 12</p>	1	Analytical

7	<p>Divide 20 pens between Sheela and Sangeeta in the ratio of 3:2.</p> <p>(a) Sheela = 15 pens, Sangita = 5 pens (b) Sheela = 8 pens, Sangita = 12 pens (c) Sheela = 12 pens, Sangita = 8 pens (d) None of these</p>	1	Understanding
8	<p>Number of matchsticks required to make a pattern of "A"</p> <p>(a) 4 (b) 3 (c) 6 (d) 5</p>	1	Critical Thinking
9	<p>Take Meena's present age to be y years, what will be her age 5 years from now?</p> <p>(a) $y+5$ (b) $5/y$ (c) $y-5$ (d) $5y$</p>	1	Informative
10	<p>In a cricket coaching camp, 1200 children are trained out of which 900 are selected for various matches. What is the ratio of non-selected children to the total number of children?</p>	2	Understanding
11	<p>There are 45 persons working in an office. If the number of females is 25 and the remaining are males, find the ratio of the number of females to number of males.</p>	2	Analytical Thinking

12	Leela is Radha's younger sister. Leela is 4 years younger than Radha. Can you write Leela's age in terms of Radha's age? Take Radha's age to be x years.	2	Understanding
13	In a college, out of 4320 students, 2300 are girls. Find the ratio of (a) Number of girls to the total number of students. (b) Number of boys to the number of girls. (c) Number of boys to the total number of students	3	Problem Solving
14	A truck requires 108 litres of diesel for covering a distance of 594 km. How much diesel will be required by the truck to cover a distance of 1650 km?	3	Critical Thinking
15	Present age of Ramu's father is 42 years and the age of Ramu is 14 years. Based on the above information, answer the following questions: (i) Find the ratio of present age of father to the present age of Ramu. (ii) Find the ratio of Age of the father to the age of son, when son was 12 years old. (iii) Find the Age of father after 10 years to the age of son after 10 years.	4	Case study

16	Present age of father is 42 years and that of his son is 14 years. Find the ratio of (a) Present age of father to the present age of son. (b) Age of the father to the age of son, when son was 12 years old. (c) Age of father after 10 years to the age of son after 10 years. (d) Age of father to the age of son when father was 30 years old. (e) Age of son to the age of father when son was 15 years old.	5	Problem solving
----	--	---	-----------------



ARMY PUBLIC SCHOOL GWALIOR
CLASS - VI
ACADEMIC SESSION 2024-25
WORKSHEET (SELF –ASSESSMENT)



Subject: Science
Allotment Date: 31 January 2025

Assignment No.: 08

S. No.	Questions	MARKS	NATURE
1.	When a bar magnet is brought near iron dust, most of the dust sticks (a) near the middle (b) equally everywhere (c) near two ends (d) none of these	1x2=2	CRITICAL THINKING
2.	Which of the following gases supports burning? (a) nitrogen (b) carbondioxide (c) oxygen (d) all of the above		ANALYTIC AL THINKING
3.	Fill in the blanks: (a) Paper is not a -----material. (b) Artificial magnets are made in different shapes such as ----- and -----. (c) The layer of air around the earth is known as----- --. (d) The component of air used by green plants to make their food, is ----- .	1x4= 4	INFORMAT IVE
4.	Why carbon dioxide gas is used to extinguish fire?	4x1=4	HOTS
5.	If a bar magnet is cut (i) length wise, (ii) breadthwise, how many poles will be formed?	4x1= 4	HOTS
6.	(a) What are the different uses of magnets? (b) Write any three properties of a magnet.	3x2=6	ANALYTIC AL SKILL
7.	It is advised to keep magnets away from television, mobiles CD, and computers. Explain why?	2x1=2	CRITICAL THINKING
8.	It is said that repulsion is a sure test of magnetism. Why is it so?	4x1=4	PROBLEM SOLVING
9.	How air is important for life on the earth?	4x1= 4	COMMUNI CATION SKILLS



ARMY PUBLIC SCHOOL GWALIOR
CLASS - VI
ACADEMIC SESSION 2024-25
WORKSHEET (SELF –ASSESSMENT)



Subject: Social Science
Allotment Date: 31 January 2025

Assignment No.: 08

S. NO.	QUESTIONS	MARKS	NATURE
1	Name the three authors who wrote about the king Harshavardhana?	3m	Informative
2	Write the name of the two important prashastis.	2m	Understanding
3	How do you think wars affect the lives of ordinary people today?	3m	Interdisciplinary
4	Multiple Choice Questions- 1. Which city was known as the capital of Pallava dynasty? (a) Puhar (b) Raichur (c) Ujjain (d) Kanchipuram 2. Iron pillar is located in which of the following cities? (a) Sarnath (b) Ajmer (c) Delhi (d) Ahmedabad 3. Which of the following is the non- farming activity? (a) Seeding (b) Irrigation (c) Harvesting (d) Pottery making	3m	Informative
5	Match the following- 1. Sabha (i) Astronomer 2. Aryabhatta (ii) Chinese traveller 3. Hawker (iii) Assembly 4. Fa Xien (iv) Street vendor	4×1=4m	Analytical skill
6	Answer the following questions in about 20-30 words. 1. Define the term Aryavarta. 2. Write two differences between the permanent job and casual job.	3×2=6m	Evaluation

	3. How many rulers were there in the Aryavarta and Dakshinapatha in the reign of king Samudragupta?		
7	<p>Write True or False-</p> <p>1. Local assemblies functioned for several centuries in south India ()</p> <p>2. Harishena was the court poet of King Samudragupta ().</p> <p>3. Call centres are usually seen in small towns ().</p> <p>4. An organization of merchants was called nagaram ().</p>	4×1=4m	Communication skills
8	<p>Read the extract carefully and answer the questions that follows:</p> <p>The two Sanskrit epics, the Mahabharata and the Ramayana had been popular for a very long time. The Mahabharata is about a war fought between the Kauravas and the Pandavas, who were cousins. This was a war to gain control of the throne of the Kuru kingdom and their capital Hastinapur. Both the puranas and the Mahabharata are supposed to have been compiled by sage Ved Vyas. The Ramayana is about Lord Rama, a prince of Kosala, who was sent into exile. His wife Sita was abducted by the king of Lanka named Ravana and Rama had to fight a battle to get her back. He won and returned to Ayodhya, the capital of Kosala kingdom after his victory. Valmiki is recognised as the author of the Sanskrit Ramayana.</p> <p>Q.1 Name the two Sanskrit epics.</p> <p>Q.2 Between whom did the Mahabharata war take place?</p> <p>Q.3 What was the capital of the Kuru kingdom in Mahabharata?</p> <p>Q.4 Who is recognised as the author of the Sanskrit Ramayana?</p> <p>Q.5 What was the capital of Kosala kingdom in Ramayana?</p>	5×1=5m	Critical thinking and Problem solving



ARMY PUBLIC SCHOOL GWALIOR
CLASS - VI
ACADEMIC SESSION 2024-25
WORKSHEET (SELF –ASSESSMENT)



Subject: Dance
Allotment Date: 31 January 2025

Assignment No.: 08

S. NO.	QUESTIONS	MARKS	NATURE
1	What is Samyukta hasta? a) Pushpanjali b) Sufi	1	Informative
2	How many types of Samyukta hasta? a) the motions of the elementary particles of chemistry b) 29	1	Informative
3	What are the 28 samyukta hasta? a) pataka, tripataka b) aur its folk dance and modern elements.	1	Informative
4	What are the 10 mudras in dance? a) Anjali, dola hastam b) kathak	1	Informative
5	How many types of Samyukta hastal dance? a) 28 b) 3	1	Informative
6.	Can we learn semi classical dance dance at home? a) yes b) No	1	Informative
7.	Are kathak and semi classical the same? a) yes b) No	1	Informative

8.	<p>What is the meaning of semi classical dance?</p> <p>a) relating to or being a musical composition</p> <p>b) style between classical and popular music</p>	1	Informative
9,	<p>Complete the line :</p> <p>Our Desire to lead the Nation ahead, _____.</p> <p>a) Makes us believe in every step we take.</p> <p>b) Strenghtening our vision in every way.</p>	1	Informative
10.	<p>Complete the line :</p> <p>The beat in our heart sings Army Public School, _____</p> <p>a) The spring in our feat leads us to our school.</p> <p>b) The beat in our heart leads us to our school.</p>	1	Informative



ARMY PUBLIC SCHOOL GWALIOR
CLASS - VI
ACADEMIC SESSION 2024-25
WORKSHEET (SELF –ASSESSMENT)




Subject: Music (Vocal)

Assignment No.: 08

Allotment Date: 31 January 2025

S. NO.	QUESTIONS	MARKS	NATURE
1	How many parts does a congo instrument have ? a) 5 b) 3	1	Informative
2	The instrument which is similar to keyboard ? a) Guitar b) Harmonium	1	Informative
3	What do you mean by patriotism ? a) Devotion towards religion b) Devotion towards nation	1	Informative
4	The instruments which is similar to keyboard but played with sticks ? a) Xylophone b) Piano	1	Informative
5	Song "Ae meri jaan " (Patriotic song) is from which movie ? a) Emergency b) Border	1	Informative
6.	Name thre Singers of "Sandese aate hai" song from movie border? a) Roop Kumar Rathore & Sonu Nigam b) Kishore Kumar & Mohammad Rafi	1	Informative
7.	Which rasa is seen more in the bhajans of shri Krishna? a) Shringar rasa b) Veer rasa	1	Informative
8.	Guitar has ___strings? a) 6 b) 3	1	Informative

9,	Drums, Congo instrument belong to which category? a) Brass Instruments b) Percussion Instruments	1	Informative
10.	“Tu hi mahan sarv shaktimaan tu hihai mere jeevan ka sangeet “ lines are taken from which prayer ? a) Itni shakti humein dena data b) Teri aradhana karun	1	Informative



ARMY PUBLIC SCHOOL GWALIOR
CLASS - VI
ACADEMIC SESSION 2024-25
WORKSHEET (SELF –ASSESSMENT)



Subject: Yoga
Allotment Date: 31 January 2025

Assignment No.: 08

QUESTIONS	MARKS	SKILLS
<p>Fill in the blanks</p> <p>1. Sauch is a Sanskrit term that translates to _____ or purity.</p> <p>2. Physical Sauch involves maintaining cleanliness of the _____ through _____.</p> <p>3. Mental purity in Sauch is about avoiding _____ thoughts and cultivating mental clarity.</p>	3X1=3	INFORMATIVE
<p><u>True and False:</u></p> <p>1. Sauch is only about physical cleanliness.</p> <p>2. Santosh promotes constant pursuit of desires.</p> <p>3. Sauch and Santosh are not connected in Yoga philosophy.</p>	3X1=3	CRITICAL THINKING

<p>Multiple Choice Questions:</p> <p>1. What does Sauch NOT include?</p> <ul style="list-style-type: none">a) Physical cleanlinessb) Mental purityc) Excessive desiresd) Spiritual cleanliness <p>2. Santosh encourages:</p> <ul style="list-style-type: none">a) Constant pursuit of external possessionsb) Finding joy in the present momentc) Ignoring gratitude for one's blessingsd) Discontent with the current situation <p>3. Which of the following is NOT a component of Sauch?</p> <ul style="list-style-type: none">a) Physical cleanlinessb) Mental purityc) Excessive desiresd) Spiritual well-being <p>4. What is the primary emphasis of Santosh?</p> <ul style="list-style-type: none">a) Constant pursuit of external possessionsb) Finding joy and peace in the present momentc) Ignoring personal hygiened) Pursuing excessive desires for material wealth	4X1=4	ANALYTICAL THINKING
---	-------	----------------------------



ARMY PUBLIC SCHOOL GWALIOR
CLASS - VI
ACADEMIC SESSION 2024-25
WORKSHEET (SELF –ASSESSMENT)



Subject: Health and Physical Education
Allotment Date: 31 January 2025

Assignment No.: 08

S.NO	QUESTIONS	MARKS	SKILLS/ COMPETENCIES
1.	<p style="text-align: center;">Tick The Correct Answer</p> <p>Q-1- How many substitute players are in Basketball team?</p> <p style="text-align: center;">a.07 b.06 c.05 d.08</p> <p>Q-2 Basketball formed in ?</p> <p style="text-align: center;">a.India b.USA c.Finland d.Italy</p> <p>Q-3- Association where James invented basketball?</p> <p style="text-align: center;">a.LNIPE b.BHU c.YMCA d.Auburn University</p> <p>Q-4- Basketball is a national game of?</p> <p style="text-align: center;">a.USA b.England</p>	4	Informative

	<p>c.Finland</p> <p>d.Brazil</p>		
2	<p>Fill in the blanks</p> <p>Q-5- Length of basketball court is_____ (28m,28ft)</p> <p>Q-6 There are_____playing players in Basketball(5,7)</p> <p>Q-7 Satnam singh played for_____.(Canada,India)</p>	3	Interdisciplinary
3	<p>True False</p> <p>Q-8- Basketball can be played only in NBA?</p> <p>A. True</p> <p>B. False</p> <p>Q-9 Micheal Jordan belongs to basketball?</p> <p>A. True</p> <p>B. False</p>	3	Understanding

	<p>Q-10-William.G.Morgan is said to be the father of basketball?</p>		
--	--	--	--

A. True

B. False



ARMY PUBLIC SCHOOL GWALIOR
CLASS -VI
ACADEMIC SESSION 2024-25
WORKSHEET (SELF –ASSESSMENT)



Subject: Art & Work Education
Allotment Date: 31 January 25

Assignment No: 08

S.NO	QUESTIONS	MARKS	SKILLS/COMPETENCIES
1.	Goddess Saraswati is a wife of which god? a) Brahma b) Vishnu c) Shiva d) Indra	1	Creativity
2.	As per hindu calendar, the celebration of Vasant panchami takes place in which of the following month? a) Magha b) Phalgun c) Chaita d) Kartik	1	Creativity
3.	What does the goddess Saraswati symbolize? a) Darkness b) Illiteracy c) light, knowledge and truth d) Focus	1	Creativity
4.	In which color goddess Saraswati is dressed up in Vasant panchami? a) Yellow b) Red c) Green d) Orange	1	Creativity
5.	Celebration of Vasant Panchami is to honor which goddess? a) Durga b) Parvati c) Saraswati d) Kali	1	Creativity
6.	Complementary colours are used to create_____. a) Contrast b) Value c) Density d) None of the above	1	Creativity
7.	_____ Material is not required in paper mache? a) Plastic putty b) Glue	1	Creativity

	c) Chalk powder d) Coconut oil		
8.	Sultan Zain-ul-Abadin brought paper mache to Kashmir? a) True b) False	1	Creativity
9.	Which answer is an example of complementary colors? a) red–green b) Black -white c) White-red d) Black-blue	1	Creativity
10.	What is the complementary colour to orange? a) Blue b) Black c) White d) Pink	1	Creativity




ARMY PUBLIC SCHOOL GWALIOR
CLASS – VI
ACADEMIC SESSION 2024-25
WORKSHEET (SELF –ASSESSMENT)

Subject: Computer

Assignment No.: 8

Allotment Date: 31 January 2025

S. NO.	QUESTIONS	MARKS	NATURE
1	<p>Tick the correct answer:</p> <p>1. All python keywords contain letters except True , False and None. a. Lowercase b. Uppercase c. sentence case</p> <p>2. are the special symbols that carry out arithmetic and logical computations. a. Literals b. Operators c. Identifiers</p> <p>3. The values operated by the operator are called a. constants b. Operands c. Literals</p> <p>4. Which of the following is not an E-Commerce company? a. Amazon b. Flipkart c. Google</p> <p>5. Auto complete suggestion feature in search engine is an example of..... learning. a. machine b. intelligent c. deep</p>	1x5=5	Critical Thinking
2	<p>Write 'T' for True and 'F' for False statements.</p> <p>1. Machine learning is the subset of deep learning.</p> <p>2. Chatbots are not used by bank for customer support.</p> <p>3. Python is not a case sensitive language.</p>	1x3=3	Understanding
3	<p>Fill in the blanks.</p> <p>1. We can also press key to run a program.</p> <p>2. The field where I can be applied and utilized are.....</p>	1x2=2	Informative



ARMY PUBLIC SCHOOL GWALIOR
CLASS – VI
ACADEMIC SESSION 2024-25
WORKSHEET (SELF –ASSESSMENT)



Subject: General Knowledge
Allotment Date: 31 January 2025

Assignment No.: 0 8

S. No.	Questions	MAR KS	NATURE
1	Name the device which is used to measure the humidity.	1	INFORMATIVE
2	Who won the Nobel prize in physics for his pioneering work on the scattering of light?	1	INFORMATIVE
5	Who was the first women prime minister of India?	1	INFORMATIVE
6	Which is the largest delta in India?	1	INFORMATIVE
7	Name the person who discovered America in 1492.	1	INFORMATIVE
8	Who said “Strive not to be successful, but rather to be of value”?	1	INFORMATIVE
9	Who said “ You must be the change you wish to see in the world”?	1	INFORMATIVE
10	Name the highest airport in India.	1	INFORMATIVE
11	Which is the highest dam in India?	1	INFORMATIVE
12	Name the highest gallantry award of India?	1	INFORMATIVE
13	The indigenous people of Europe are called as _____.	1	INFORMATIVE
14	Name the insect scattering glowing light at night.	1	INFORMATIVE
15	State true or false. The author of time machine is “H.G. Wells”.	1	INFORMATIVE
16	State true or false. Nirmala Sitharaman was the first women chief minister of India?	1	INFORMATIVE
17	State true or false. Sri Lanka is the permanent member country of G-20.	1	INFORMATIVE
18	In a line, Razia is 8 th from the left and she is 12 th from right. How many people are standing in the line?	1	LOGICAL
19.	If the 20 th of a month is Wednesday, Which day of the week will be the 10 th of the same month be?	1	LOGICAL
20.	Hard work is the _____.	1	LOGICAL

