

ARMY PUBLIC SCHOOL GWALIOR
CLASS - V
ACADEMIC SESSION 2024-25
WORKSHEET (SELF –ASSESSMENT)



Subject: English

Assignment No. : 8

Allotment Date: 31 January 2025

| S. NO. | QUESTIONS | MARKS | NATURE |
|--------|--|-------|------------------------------|
| 1. | <p style="text-align: center;">UNSEEN PASSAGE</p> <p>Plants need sunlight and water to make their own food. You can do an experiment to test if this is true. Place a bucket over a patch of green grass. After a few days, lift the bucket. You will see that the grass is not as green anymore. If you leave the bucket in place for a week, the grass will become very dull. This happens because the grass cannot make food in the dark. Remove the bucket. In a few days, the grass will start turning green again.</p> <p>i) What is the main point of this passage? ii) What is an experiment? iii) What happens after a few days?</p> | 3 | Reading & Understanding |
| 2. | <p style="text-align: center;">CREATIVE SKILL</p> <p>Write a letter to your father requesting him to increase your pocket money.</p> | 4 | Communication Skill |
| 3. | <p style="text-align: center;">GRAMMAR</p> <p>Change the following sentences from passive to active voice.</p> <p>i) Cartoon films are loved by Ratan. ii) The ice cream was eaten by him.</p> | 2 | Understanding and analytical |
| 4. | <p>Inset the apostrophe at the correct position.</p> <p>i) shouldnt _____. ii) dont _____.</p> | 2 | Interdisciplinary |

| | | | |
|-----------|--|----------|----------------------|
| 5. | Rewrite the given sentences by writing the antonyms of the underlined. i) Shreya is an <u>optimistic</u> person. ii) The knife is <u>blunt</u> . | 2 | Evaluation |
| 6. | Answer the following questions. a) Why did the boat sink? b) What did the emperor build in the memory of his queen? c) At what ways was India's success at the Games "extra special" | 3 | Understanding |
| 7. | Answer the following questions. [20-30 words] i) Are studies more important than sports? Give reasons. ii) What is the message of the poem "The Paper Boat"? | 4 | HOTS |



ARMY PUBLIC SCHOOL GWALIOR
CLASS - V
ACADEMIC SESSION 2024-25
WORKSHEET (SELF -ASSESSMENT)




Subject: Hindi

Assignment No. : 8

Allotment Date: 31 January 2025

| संख्या | प्रश्न | अंक | प्रकृति |
|--------|---|-------|---------------------|
| प्र1. | इन मुहावरों के अर्थ समझकर वाक्य बनाओ- क) नौ दो ग्यारह होना ख) सर पर पैर रखकर भागना ग) आंखों से ओझल होना घ) घड़ी समीप होना | 4x1=4 | बोधात्मक |
| प्र2. | निम्न शब्दों के अर्थ लिखो। क) कलनाद ख) जीविका ग) गंभीर | 3x1=3 | तर्कशक्ति |
| प्र 3 | वर्ण विच्छेद करो - (क) रस्सी (ख) मैदान (ग) क्योंकि (घ) जादूगर | 4x1=4 | रचनात्मक |
| प्र 4 | इन शब्दों के बहुवचन शब्द लिखो - (क) कुरता ----- (ख) झोपड़ी ----- (ग) रुपया ----- (घ) फव्वारा ----- (इ) चूड़ी ----- | 5x1=5 | विश्लेषणात्मक |
| प्र 5 | निम्नलिखित प्रश्नों के उत्तर दो। (क) छोटे जादूगर में कौन से गुण थे? | 2x2=4 | उच्चस्तरीय चिंतन |

| | | | |
|--|--|--|--|
| | <p>.....</p> <p>.....</p> <p>(ख) छोटे जादूगर अपनी जीविका किस प्रकार चलाता था ?</p> <p>.....</p> <p>.....</p> <p>.....</p> <p>.....</p> | | |
|--|--|--|--|



ARMY PUBLIC SCHOOL GWALIOR
CLASS - V
ACADEMIC SESSION 2024-25
WORKSHEET (SELF –ASSESSMENT)



Subject: Mathematics

Assignment No. : 8


Allotment Date: 31 January 2025

| S. NO. | QUESTIONS | MARKS | NATURE |
|--------|---|----------------|-----------------|
| 1 | Fill in the blanks: (i) If the Cost Price of an article is greater than the Selling Price, we have a _____. (ii) Selling Price = Cost Price - _____. (iii) Cost Price = Selling Price + _____. (iv) Cost Price + _____ = Selling Price (v) Selling Price + _____ = Cost Price | 4×1 = 4 | Observation |
| 2 | State 'T' for True and 'F' for False: (i) 1 rupee is equal to 200 paise. <input type="checkbox"/> (ii) 1, 2 and 5 rupees are not available in notes. <input type="checkbox"/> (iii) 100 rupees are also available in coins. <input type="checkbox"/> (iv) Rupees are denoted as ₹ . <input type="checkbox"/> | 4×1 = 4 | Mental Ability |
| 3 | Solve the following word problems: (i) James purchased a notebook for ₹ 25.75 and a eraser for ₹ 7.50. (ii) How much money does he need to pay? (iii) Jessica has ₹ 110 with her. She wants to buy a pack of multicolour gel pen for ₹ 75 and a note pad for ₹ 34. Does she have enough money to buy these things? (iv) A cycle was bought for ₹ 1225 and sold at a gain of ₹ 100. Find the Selling Price of the cycle. (v) A refrigerator is sold at ₹ 10525 at a profit of ₹ 925. What was the Cost Price of the refrigerator? | 4×1 = 4 | Decision Making |
| 4 | Solve the following word problems: (i) Ron bought a cycle for ₹ 800 and sold it at a loss of ₹ 160. What is his selling price? (ii) Jack bought a car for ₹ 50,000. He spent ₹ 5000 on repairs. He sold the car at a profit of ₹ 5000. At what price did he sell the car? (iii) Derek bought cloth for ₹ 800. He spent ₹ 200 for stitching a shirt. He sold the shirt for ₹ 1175. Find the profit. (iv) The cost of a cycle is ₹ 950 and that of a scooter is ₹ 23,500. He sold them together for ₹ 25,000. Find his profit. (v) Shelly bought 8 packets of coconut cookies and Jack bought 8 packets of chocolate cookies. They decided to share the amount equally. How much does each one pay? | 5×1 = 5 | Understanding |
| 5 | Case Study Based Question: Rohan sold a watch for Rs. 990 and made a profit of 10%. He sold a radio set on same -ice and suffered a loss of 10%. Based on this situation answer | 3×1 = 3 | Problem-Solving |

the following questions

- i) What is the total selling price of both items.
- ii) What is the cost price of both items.
- iii) What is Rohan's profit or loss.

| | | | |
|--|--|--|--|
| | | | |
|--|--|--|--|



ARMY PUBLIC SCHOOL GWALIOR
CLASS - V
ACADEMIC SESSION 2024-25
WORKSHEET (SELF –ASSESSMENT)




Subject: EVS

Assignment No. : 8

Allotment Date: 31 January 2025

| S. NO. | QUESTIONS | MARKS | NATURE |
|--------|---|---------|---------------------------------------|
| Q1 | Fill in the blanks: (i) There are _____ Jharokas in Hawa Mahal . (ii) The head of an axe is a _____. | 2x0.5=1 | Information |
| Q2 | Choose the correct option. (i) Sanchi Stupa is situated in _____. a) Hyderabad b) Amritsar c) Agra d) Bhopal (ii) Hammer is an example of _____. a) lever b) wedge c) pulley d) screw | 2X1=2 | Understanding |
| Q3 | What will happen if there were no simple machines in our life? Will our lives become easy or difficult? | 1X2=2 | HOT |
| Q4 | i) How is an inclined plane useful to us? ii) What are historical monuments? | 2x2=4 | Analytical Skill Interdisciplinary |
| Q5 | i) What is the importance of ASI and UNESCO? ii) How can we as visitors take care of our monuments? iii) What is a screw? Mention its uses. | 3x2=6 | Evaluation |

| | | | |
|------|--|-------|---------------|
| Q 6. | <p>Read the given paragraph and answer the questions given below:</p> <p>Qutub Minar is situated in Delhi. It is a very tall and famous minaret. Its construction was started by the slave king Qutub-ud - din Aibak in the 12th century and was completed by his successor, Iltumiash. It is 72.5 meters high and has five distinct storeys with 379 stairs from top to bottom. The Iron Pillar located at Qutub Minar was built during the time of Emperor Chandragupta II of Gupta dynasty. It was dated back to 4th century A.D. The pillar highlights the ancient India's achievements in architecture. It is made of iron and has stood 1600 years without rusting. It is 7.3m tall and weighs approximately 6.5 tons.</p> <ol style="list-style-type: none">1. Who built Qutub Minar?2. Name the successor of Qutub-ud-din Aibak?3. Write two lines about Qutub Minar?4. Who made Iron Pillar and why it is famous?5. What is the height and weight of Iron Pillar? | 5x1=5 | Comprehension |
|------|--|-------|---------------|



ARMY PUBLIC SCHOOL GWALIOR
CLASS - V
ACADEMIC SESSION 2024-25
WORKSHEET (SELF –ASSESSMENT)




Subject: Art and Work Education
Allotment Date: 31 January 2025

Assignment No. : 8

| S. NO. | QUESTIONS | MARKS | NATURE |
|--------|---|-------|-------------|
| 1 | Which of the following tribes is known for its intricate mask-making traditions? A) Warli B) Gond C) Santhal D) All of the above | 1 | Informative |
| 2 | What is the primary material used to create tribal masks in many Indian tribes? A) Wood B) Clay C) Metal D) Fabric | 1 | Informative |
| 3 | What is the primary material used to make colourful butterfly crafts? A) Paper B) Fabric C) Recycled plastic D) Metal | 1 | Informative |
| 4 | Which technique is often used to decorate butterfly crafts? A) Painting B) Drawing C) Collage D) All of the above | 1 | Informative |
| 5 | What shape is typically used as the base for butterfly crafts? A) Circle B) Square C) Triangle D) Wing shape | 1 | Informative |
| 6. | Which of the following can be used to add colour and texture to butterfly crafts? A) Glitter B) Stickers C) Ribbons D) All of the above | 1 | Informative |
| 7. | What is the primary tool used in block printing? A) Brush B) Roller C) Block | 1 | Informative |

| | | | |
|-----|--|---|-------------|
| | D) Press | | |
| 8. | Which material is commonly used to create blocks for printing? A) Wood B) Metal C) Plastic D) All of the above | 1 | Informative |
| 9, | Which of the following is a characteristic of block printing? A) Intricate details B) Smooth gradients C) Bold, flat colors D) Photorealistic images | 1 | Informative |
| 10. | What is the process of carving a design onto a block called? A) Engraving B) Etching C) Relief carving D) Intaglio | 1 | Informative |



ARMY PUBLIC SCHOOL GWALIOR
CLASS - V
ACADEMIC SESSION 2024-25
WORKSHEET (SELF –ASSESSMENT)




Subject: Music (Vocal)
Allotment Date: 31 January 2025

Assignment No. : 8

| S. NO. | QUESTIONS | MARKS | NATURE |
|--------|---|-------|-------------|
| 1 | How many parts does a congo instrument have ? a) 5 b) 3 | 1 | Informative |
| 2 | The instrument which is similar to keyboard ? a) Guitar b) Harmonium | 1 | Informative |
| 3 | What do you mean by patriotism ? a) Devotion towards religion b) Devotion towards nation | 1 | Informative |
| 4 | The instruments which is similar to keyboard but played with sticks ? a) Xylophone b) Piano | 1 | Informative |
| 5 | Song "Ae meri jaan " (Patriotic song) is from which movie ? a) Emergency b) Border | 1 | Informative |
| 6. | Name thre Singers of "Sandese aate hai" song from movie border? a) Roop Kumar Rathore & Sonu Nigam b) Kishore Kumar & Mohammad Rafi | 1 | Informative |
| 7. | Which rasa is seen more in the bhajans of shri Krishna? a) Shringar rasa b) Veer rasa | 1 | Informative |
| 8. | Guitar has ___ strings? a) 6 b) 3 | 1 | Informative |
| 9, | Drums, Congo instrument belong to which category? a) Brass Instruments b) Percussion Instruments | 1 | Informative |

| | | | |
|------------|--|---|-------------|
| | | | |
| 10. | <p>“Tu hi mahan sarv shaktimaan tu hihai mere jeevan ka sangeet “ lines are taken from which prayer ?</p> <p>a) Itni shakti humein dena data</p> <p>b) Teri aradhana karun</p> | 1 | Informative |



ARMY PUBLIC SCHOOL GWALIOR
CLASS - V
ACADEMIC SESSION 2024-25
WORKSHEET (SELF –ASSESSMENT)



Subject: Dance

Assignment No. : 8

Allotment Date: 31 January 2025

| S. NO. | QUESTIONS | MARKS | NATURE |
|--------|--|-------|-------------|
| 1 | What is semi classical singing? a) ghazals b) sufi | 1 | Informative |
| 2 | What is semi classical model? a) the motions of the elementary particles of chemistry b) the electron response to external electric and magnetic | 1 | Informative |
| 3 | What is semi classical dance? a) a half- rotation turns 180 degrees. b) aur its folk dance and modern elements. | 1 | Informative |
| 4 | Which is the hardest classical dance? a) kuchipudi b) kathak | 1 | Informative |
| 5 | How many types of semi classical dance? a) 1 b) 3 | 1 | Informative |
| 6. | Can we learn semi classical dance dance at home? a) yes b) No | 1 | Informative |
| 7. | Are kathak and semi classical the same? a) yes b) No | 1 | Informative |
| 8. | What is the meaning of semi classical dance? a) relating to or being a musical composition b) style between classical and popular music | 1 | Informative |
| 9, | Complete the line : Our Desire to lead the Nation ahead, _____. a) Makes us believe in every step we take. | 1 | Informative |

| | | | |
|------------|---|---|-------------|
| | b) Strenghtening our vision in every way. | | |
| 10. | Complete the line : The beat in our heart sings Army Public School, _____ a) The spring in our feat leads us to our school. b) The beat in our heart leads us to our school. | 1 | Informative |



ARMY PUBLIC SCHOOL GWALIOR
CLASS - V
ACADEMIC SESSION 2024-25
WORKSHEET (SELF –ASSESSMENT)



Subject: Health and Physical Education
Allotment Date: 31 January 2025

Assignment No. : 8

| S.NO | QUESTIONS | MARKS | SKILLS/ COMPETENCIES |
|------|--|-------|-------------------------|
| 1. | <p>Tick The Correct Answer</p> <p>Q-1- What is the weight of football?</p> <p>a.410gm to 450gm b.310gm to 350gm c.510gm to 550gm d.350gm to 400gm</p> <p>Q-2 How many law in the game of Football ?</p> <p>a.11 b.12 c.17 d.18</p> <p>Q-3- What colour cards do referee carry in a football match?</p> <p>a.Red and orange b.Yellow and blue c.Red and yellow d.Green and blue</p> <p>Q-4- What is the first law in the game of football ?</p> <p>a.The Ball b.The field of Play c.Offside d.Freekick</p> | 4x1=4 | Informative |
| 2 | <p><u>Fill in the blanks</u></p> <p>Q-5- Football world cup 2026organising by _____ (Qatar,Canada, Mexico, and the United States:)</p> | 3x1=3 | Understanding |

| | | | |
|----------|---|--------------|------------------|
| | <p>Q-6 Goal area is _____ far away from the touch line.(18yard,20 yard)</p> <p>Q-7 _____ won the most football world cup title.(Argentina,Brazil)</p> | | |
| 3 | <p><u>True False</u></p> <p>Q-8- 11 players from each team allowed to play at a time?</p> <p>A. True</p> <p>B. False</p> <p>Q-9 There are 15 law in Football ?</p> <p>A. True</p> <p>B. False</p> <p>Q-10- Cramps, Strain, Sprain are common injuries in Football ?</p> <p>A. True</p> <p>B. False</p> | 3x1=3 | Knowledge |
| | | | |



ARMY PUBLIC SCHOOL GWALIOR
CLASS - V
ACADEMIC SESSION 2024-25
WORKSHEET (SELF –ASSESSMENT)



Subject: Computer
Allotment Date: 31 January 2025

Assignment No. : 8

| S. NO. | QUESTIONS | MARKS | NATURE |
|--------|---|-------|-------------------|
| 1 | Tick the correct answer: 1. Represent data that has an assigned value of Either true or False. a. Boolean b. Integer c. String 2. is an numeric value that does not include a decimal point. a. String b. Integer c. Boolean 3. A statement shows one or more actions following each other. a. conditional b. Sequential c. Repeat 4. is the application of NLP. a. Alexa b. Face lock c. Driverless car 5. AI technology promotes integrated a. learning b. electricity c. effort | 1x5=5 | Critical Thinking |
| 2 | Write 'T' for True and 'F' for False statements. 1. AI cannot be creative in its approach. 2. AI robots can work endless without taking a break. 3. Operator blocks are red in color. | 1x3=3 | Understanding |
| 3 | Fill in the blanks. 1. In mathematical operators, rounded ends represent..... 2. Facebook uses AI technology to recognize faces..... | 1x2=2 | Informative |



ARMY PUBLIC SCHOOL GWALIOR
CLASS - V
ACADEMIC SESSION 2024-25
WORKSHEET (SELF –ASSESSMENT)



Subject: Karate

Assignment No. : 8

Allotment Date: 31 January 2025

| S. NO | QUESTIONS | Marks 10 |
|-------|---|----------|
| 1 | <input type="checkbox"/> What does Kata mean in Karate? <ul style="list-style-type: none">• a) A type of kick• b) A series of movements• c) A sparring match• d) A stance | 1 |
| 2 | <input type="checkbox"/> Why is Kata important? <ul style="list-style-type: none">• a) To memorize attacks• b) To improve focus and technique• c) To win tournaments• d) To relax muscles | 1 |
| 3 | <input type="checkbox"/> What is the first step to start a Kata? <ul style="list-style-type: none">• a) Perform a kick• b) Stand in ready position• c) Block an attack• d) Yell loudly | 1 |
| 4 | <input type="checkbox"/> What should you focus on while performing Kata? <ul style="list-style-type: none">• a) Speed and balance• b) Only speed• c) Random movements• d) Standing still | 1 |
| 5 | <input type="checkbox"/> What is Migari? <ul style="list-style-type: none">• a) Left Kick• b) Right Kick• c) Jumping Kick• d) Roundhouse Kick | 1 |
| 6 | <input type="checkbox"/> Which leg is used in Migari? <ul style="list-style-type: none">• a) Left leg• b) Both legs• c) Right leg• d) None | 1 |
| 7 | <input type="checkbox"/> What should you do after performing a Migari? <ul style="list-style-type: none">• a) Keep your leg extended• b) Pull your leg back to stance• c) Jump back• d) Sit down | 1 |
| 8 | <input type="checkbox"/> What part of the foot is used to strike in Migari? | 1 |

| | | |
|-----------|--|----------|
| | <ul style="list-style-type: none">• a) Heel• b) Ball of the foot• c) Toes• d) Sole | |
| 9 | <input type="checkbox"/> How many motions are included in performing Migari on a single count? <ul style="list-style-type: none">• a) Two motions• b) Three motions• c) One smooth motion• d) No motion | 1 |
| 10 | <input type="checkbox"/> Why should you use "Kiai" during Migari? <ul style="list-style-type: none">• a) To scare the opponent• b) To add power and focus• c) To distract others• d) To breathe in deeply | 1 |