

ARMY PUBLIC SCHOOL GWALIOR
CLASS - II
ACADEMIC SESSION 2024-25
WORKSHEET (SELF -ASSESSMENT)



Subject: English

Assignment No. : 8

Allotment Date: 31 January 2025

S.NO.	QUESTIONS	MARKS 20	NATURE
1.	<p>Tick the correct answer:</p> <p>1. Who brought mangoes for Murali? a) Sangeeta b) Ramaya c) Anita d) Mita</p> <p>2. Bholaram used to repair a) telephones b) bicycles c) toys d) television toys</p> <p>3. When the children got back their toys from Bholaram, they felt very happy and said:</p> <p>a) 'You are really great.' b) 'You are our best friend.' c) 'You have made us happy.' d) 'You are great'</p>	3x1=3	Information
2.	<p>Fill in the blanks:</p> <p>a) Bholaram ran a small _____ repair shop. b) Murali broke all the _____ pots of Ramaya. c) Within a day, Murali had _____ and learnt a lot.</p>	3x1=3	Information
3.	<p>Answer the following questions.</p> <p>1. What happened when Murali climbed the mango tree? Ans. _____ _____ _____</p> <p>2. What did the toy engine lose when Raghu kept it carelessly? Ans. _____ _____ _____</p>	2x2=4	Understanding
4.	<p>Match the following subjects to correct predicates.</p> <p>Column- A Column- B</p> <p>a) Sharks played football. b) The flag are very dangerous. c) The doorbell blew in the wind. d) Ishan and Kiaan rang loudly.</p>	4x0.5=2	Analytical skill

5.	<p>Fill in the blanks with correct adjectives from the given options:</p> <div style="border: 1px solid orange; padding: 5px; width: fit-content; margin: 10px auto;">Clean, much, tasty, many</div> <p>a) We must wear _____ clothes. b) How _____ cousins do you have? c) There is not _____ food on the plate. d) The cake was _____.</p>	4x0.5=2	Problem solving
6.	<p>Change the given words into adverbs:</p> <p>1. Soft - _____ 3. Proud - _____ 2. Neat - _____ 4. Quiet - _____</p>	4x0.5=2	Analytical skills
7.	<p>Read the short passage and answer the following questions:</p> <p>Once upon a time, there was a little girl named Mia who loved to paint. One day, she found a magic paintbrush in her attic. Whatever she painted with it came to life! Excitedly, Mia painted a big tree with delicious fruits. To her surprise, the tree appeared right in her backyard! Mia shared the fruits with her friends, and they all enjoyed a wonderful picnic under the tree. Mia realised that sharing her magic made everyone happy.</p> <p>Questions:</p> <p>1. What is the name of the little girl? Ans. _____</p> <p>2. What did Mia find in her attic? Ans. _____</p> <p>3. What happened when Mia painted with the magic paintbrush? Ans. _____</p> <p>4. What did Mia paint that appeared in her backyard? Ans. _____ _____.</p>	4x1=4	Reading skills



ARMY PUBLIC SCHOOL GWALIOR
CLASS - II
ACADEMIC SESSION 2024-25
WORKSHEET (SELF -ASSESSMENT)





Subject: Hindi

Assignment No. : 8

Allotment Date: 31 January 2025

संख्या	प्रश्न	अंक	प्रश्न के प्रकार
1.	<p>निम्नलिखित गद्यांश को ध्यानपूर्वक पढ़ें-</p> <p>सूरज रोज़ सुबह पूरब से उगता है और शाम को पश्चिम में डूबता है। सूरज की रोशनी से दिन में उजाला होता है। लोग सूरज की रोशनी में अपने काम करते हैं। सूरज से हमें गर्मी और ऊर्जा मिलती है। किसान सूरज की रोशनी में खेतों में काम करते हैं।</p> <p>प्रश्न 1 उपर्युक्त गद्यांश के आधार पर निम्नलिखित प्रश्नों के उत्तर दीजिए-</p> <p>(i) सूरज कहाँ से उगता है?</p> <hr/> <p>(ii) दिन में उजाला किससे होता है?</p> <hr/> <p>(iii) सूरज से हमें क्या मिलता है?</p> <hr/>	3x1=3	भाषा बोध
2.	<p>अनेक शब्दों के लिए एक शब्द लिखो -</p> <p>(i) जो जूते ठीक करता है - _____</p> <p>(ii) जो शिक्षा देती है - _____</p> <p>(iii) जो कपड़े सिलता है - _____</p>	3x1=3	ज्ञानात्मक
3.	<p>समान अर्थवाले शब्द लिखो-</p> <p>(i) सूर्य- _____</p> <p>(ii) पुस्तक- _____</p> <p>(iii) ऋतु- _____</p>	3x1=3	रचनात्मक

4	<p>किस महीने में कितने दिन होते हैं लिखिए -</p> 	10x0.5=5	रचनात्मक
5	<p>निम्नलिखित प्रश्नों के उत्तर लिखो -</p> <p>(i) बसंत ऋतु में धरती पर क्या-क्या दिखाई देता है ?</p> <p>_____</p> <p>_____</p> <p>_____</p> <p>(ii) शेरुदा के लिए कौन-कौन भोजन लाया ?</p> <p>_____</p> <p>_____</p> <p>_____</p>	2x1 =2	
6	<p>निम्नलिखित शब्दों का वाक्य में प्रयोग कीजिये -</p> <p>(i) आकाश -</p> <p>_____</p> <p>_____</p> <p>(ii) स्वयं -</p> <p>_____</p> <p>_____</p>	2x1=2	रचनात्मक
7	<p>'जब' और 'तब' सही जगह पर लिखकर वाक्य पूरे करो -</p> <p>(i) _____ बसंत ऋतु आती है _____ फूल खिलते हैं ।</p> <p>(ii) _____ गर्मी पड़ती है _____ तेज़ धूप होती है ।</p>	2x1=2	भाषा बोध





ARMY PUBLIC SCHOOL GWALIOR
CLASS - II
ACADEMIC SESSION 2024-25
WORKSHEET (SELF –ASSESSMENT)



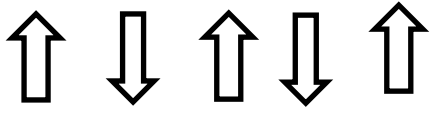


Subject: Mathematics

Assignment No. : 8

Allotment Date: 31 January 2025

S. NO.	QUESTIONS	MARKS	NATURE
1	<p>Fill in the blanks:</p> <p>(i) _____ is the last month of the year.</p> <p>(ii) The season of _____ comes after Sharad.</p> <p>(iii) Notes and coins we use are called _____.</p> <p>(iv) The long hand of the clock tells us the _____.</p>	4x1= 4	Understanding
2	<p>Choose the correct option:</p> <p>(i) 1 year = _____ months</p> <p>(a) 24 (b) 12 (c) 30</p> <p>(ii) A leap year has _____ days.</p> <p>(a) 300 (b) 365 (c) 366</p> <p>(iii) Rupee is written as _____.</p> <p>(a) ₹ (b) p (c) r</p>	3x1=3	Information
3	<p>Read the time in the clocks and write it in both words and figures.</p> <div style="display: flex; flex-direction: column; align-items: center;"><div style="display: flex; align-items: center; margin-bottom: 20px;">__________</div><div style="display: flex; align-items: center;">__________</div></div>	2x2=4	Accuracy

4	<p>Write the following in figures.</p> <p>a. Ten rupees and fifty paise _____</p> <p>b. Fourteen rupees and eighty-five paise _____</p> <p>c. Hundred rupees and twenty-five paise _____</p>	3x1=3	Critical thinking
5	<p>Understand the pattern and draw more.</p> <p>a.  _____</p> <p>b.  _____</p> <p>c.  _____</p>	3x1=3	Classification
6.	<p>Write the following in words.</p> <p>a. ₹ 26.55 _____</p> <p>b. ₹ 215.40 _____</p> <p>c. ₹ 75.00 _____</p>	3x1=3	Information



ARMY PUBLIC SCHOOL GWALIOR
CLASS - II
ACADEMIC SESSION 2024-25
WORKSHEET (SELF –ASSESSMENT)



Subject: EVS

Assignment No. : 8

Allotment Date: 31 January 2025


S.NO.	QUESTIONS	MARKS 20	NATURE
1.	Tick the correct answer: 1. Which is the main source of water on Earth? a) Ocean b. Rain c. River 2. Which of the following is not a recreational activity? a. Doing homework b. Singing c. Dancing 3. Which is not a planet? a. Earth b. Venus c. Sun 4. Which is a national river of India? a. Yamuna b. Ganga c. Jhelum	4X1=4	Understanding
2.	Fill in the blanks: d) We add _____ tablets to make water clean and pure. e) Watching too much TV can harm our _____. f) Earth moves around the sun in _____ days. g) National emblem of India has _____ lions.	4X1 = 4	Analytical skill
3.	Give two examples of each of the following: a) Things which will die without water _____ _____ b) I use water for _____ _____	4X1=4	Information
4.	Identify and name the following pictures:	4x1=4	Observation



a)



b)



c)



d)

5. Why is India known as the land of 'Unity in Diversity'?

2x1=2

HOTS

6. Answer the following questions-

1x2=2


Thinking and Writing Skills

1. Why can't we see stars during day time?

Ans - _____

2. Why do we need to play games?

Ans - _____



ARMY PUBLIC SCHOOL GWALIOR
CLASS - II
ACADEMIC SESSION 2024-25
WORKSHEET (SELF –ASSESSMENT)




Subject: G.K

Assignment No. : 8

Allotment Date: 31 January 2025

S.NO.	QUESTIONS	MARKS	NATURE
1.	<p>Tick the correct answer:</p> <p>1.This fruit is named after its colour.</p> <p>a) Pear b) Orange c) Mango</p> <p>2. This is a foot- over _____ used for crossing the road.</p> <p>a) Footpath b) Zebra crossing c) Bridge</p> <p>3. If K is related to 11 then V is related to-</p> <p>a) 19 b) 22 c) 24</p>	3X1=3	Understanding
2.	<p>Match the following words to their feminine gender</p> <p>a. Lion i) Mother</p> <p>b. Bull ii) Queen</p> <p>c. King iii) Lioness</p> <p>d. Father iv) Cow</p>	4X0.5 =2	Analytical skill
3.	<p>Join the following words and make compound words:</p> <p>a. Butter+ fly _____</p> <p>b. Sun + light _____</p> <p>c. Tea + cup _____</p>	3X1=3	Information

5.	<p>Answer the following questions in short.</p> <p>a) What is the moral of the story 'Sarah's Obedience'?</p> <p>Ans. _____</p> <p>_____</p> <p>b) Who is considered intelligent?</p> <p>Ans. _____</p> <p>_____</p>	2x1=2	Problem solving
----	--	-------	-----------------



ARMY PUBLIC SCHOOL GWALIOR
CLASS - II
ACADEMIC SESSION 2024-25
WORKSHEET (SELF –ASSESSMENT)




Subject: Computer

Assignment No. : 8

Allotment Date: 31 January 2025

S.NO.	QUESTIONS	MARKS	NATURE
1.	<p>Tick the correct answer.</p> <p>(i) Artificial Intelligence is a machine's ability to human intelligence. a) destroy b) copy c) increase</p> <p>(ii) An AI – programmed machine develops human understanding and _____. a) Emotion b) Behavior c) Voice</p> <p>(iii) An AI-powered games maintain the _____ of the players. a) interest b) relations c) balance</p> <p>(iv) _____ is a famous AI personal assistant. a) Alexa b) Sophia c) Bella</p>	4 x 1=4	Information
2.	<p>Fill in the blanks-</p> <p>a) _____ suggests us similar kind of videos. b) The skill or ability to deal with changing situations is called _____. c) A normal electronic machine is fed with_____. d) A smart music system with AI plays music through human voice _____.</p>	4x1=4	Understanding

3.	<p>Answer in one word .</p> <p>a) Give two examples of AI in our daily life.</p> <p>Ans. _____</p> <p>_____</p> <p>b) What is the goal of Artificial Intelligence?</p> <p>Ans. _____</p> <p>_____</p>	4x1=4	Critical Thinking and Problem Solving
----	---	-------	---




ARMY PUBLIC SCHOOL GWALIOR
CLASS - II
ACADEMIC SESSION 2024-25
WORKSHEET (SELF -ASSESSMENT)



Subject: Art and Work Education
Allotment Date: 31 January 2025

Assignment No. : 8

S. NO.	QUESTIONS	MARKS	NATURE
1.	What is the main purpose of pencil shading in art?	2	Understanding
2.	Which type of pencil is best for darker shading?	2	Observation
3.	What does "Hatching" refer to in pencil shading?	2	Understanding
4.	Which tool is commonly used to blend pencil shading?	2	Problem solving
5.	Which pencil is typically used for fine details in shading?	2	Understanding



ARMY PUBLIC SCHOOL GWALIOR
CLASS - II
ACADEMIC SESSION 2024-25
WORKSHEET (SELF –ASSESSMENT)




Subject: Health and Physical Education
Allotment Date: 31 January 2025

Assignment No. : 8

S.NO	QUESTIONS	MARKS	NATURE
1.	<p>1. What is the main part of your body used for dribbling a basketball?</p> <p>a) Hands b) Feet c) Head</p> <p>Answer:</p> <p>2. How should you keep your eyes while dribbling?</p> <p>a) On the ball b) Looking forward c) Closed</p> <p>Answer:</p> <p>3. What helps you control the ball better while dribbling?</p> <p>a) Hard hits on the ball b) Gentle taps on the ball c) Kicking the ball</p> <p>Answer:</p> <p>4. What happens if you stop dribbling and pick up the ball?</p> <p>a) You can keep dribbling again b) You must pass or shoot c) The game stops</p> <p>Answer:</p>	4	INFORMATION
2	<p>Fill in the Blanks:</p> <p>1. Dribbling means bouncing the ball using your ____.</p> <p>a) Hands b) Legs c) knee</p> <p>Answer:</p> <p>2. Always keep your ____ up to see the game while dribbling.</p> <p>a) Hair b) hands c) eyes</p>	3	Knowledge

	<p>Answer: 3.You should dribble the ball at ____ height to control it better. a) Waist b) head c) knee</p> <p>Answer:</p>		
3	<p>True or False: 1.You should use your fingertips, not your palms, while dribbling. Answer:</p> <p>2.Dribbling high above your head is the best way to keep control. Answer:</p> <p>3.It is okay to walk or run while dribbling the ball. Answer:</p>	3	Understanding



ARMY PUBLIC SCHOOL GWALIOR
CLASS - II
ACADEMIC SESSION 2024-25
WORKSHEET (SELF –ASSESSMENT)



Subject: Music

Assignment No. : 8

Allotment Date: 31 January 2025

S. NO.	QUESTIONS	MARKS	NATURE
1	Sare jahan se accha.....hamara hamara a)Hindustaan b)Desh	1	Informative
3	Parwat wo.....ucha a) hum se b) Sab se	1	Informative
4	Hum.....hai is ke yeh gulsita hamara hanara a) Bulbule b)chulbule	1	Informative
5	Nanha munna.....hu a) Rahi b) sipahi	1	Informative
6.	Raste pe chaluga nachahe a) Dar Dar ke b) Mar mar ke	1	Informative
7.	Manjil se.....lunga kahi dum a) Pehle na b) shaan	1	Informative
8.	What do you mean by prayer ? a) worship b) request	1	Informative
9,	Open the eyes of my a) Heart Lord b) over	1	Informative

10.	Teri marzi se aay malik.....is duniya a) Hum b) Tum	1	Informative
------------	---	---	-------------



ARMY PUBLIC SCHOOL GWALIOR
CLASS - II
ACADEMIC SESSION 2024-25
WORKSHEET (SELF -ASSESSMENT)



Subject: Dance

Assignment No. : 8

Allotment Date: 31 January 2025

S. NO.	QUESTIONS	MARKS	NATURE
1	Which one is the folk dance of Punjab? a) Bhangra b) Ghoomer	1	Information
2	How many Taali are there in Teentaal? a) 6 b) 3	1	Critical Thinking
3	Hand work in Kathak is known as _____. a) Tatkaar b) Hastak	1	Understanding
4	How many gharanas are there in Kathak? a) 4 b) 7	1	Information

5	<p>What is the other name of Teentaal?</p> <p>a) Tritaal</p> <p>b) Chautaal</p>	1	Critical thinking
6	<p>Who is the father of kathak?</p> <p>a) Pt Birju Maharaj</p> <p>b) Pt Jayshankar Maharaj</p>	1	Information
7	<p>Can both girls and boys do kathak?</p> <p>a) Yes</p> <p>b) No</p>	1	Information
8	<p>Tabla belongs from _____ classical dance.</p> <p>a) Kathak</p> <p>b) Mohiniattam</p>	1	Critical thinking
9	<p>Which is the basic taal of kathak?</p> <p>a) Teentaal</p> <p>b) Jhaptaal</p>	1	Understanding

10	How many classical dance forms are there in India ? a) 8 b) 9	1	Understanding
-----------	---	----------	---------------