

ARMY PUBLIC SCHOOL GWALIOR
CLASS - I
ACADEMIC SESSION 2024-25
WORKSHEET (SELF –ASSESSMENT)



Subject: English

Assignment No. : 8

Allotment Date: 31 January 2025

S.NO	QUESTIONS	MARKS	SKILLS
1.	Underline the joining words: a. Rabbit is fast but tortoise is slow. b. Siya and Palak are playing with a doll. c. I missed my bus because I got up late. d. Do you want a sandwich or a cake? e. I got wet in the rain so I got fever.	5×1=5	Analytical and Cognitive
2.h	Write the meanings of the given words: a. wail - ----- b. hungry - ----- c. together - ----- d. sighed - -----	4 x 1 =4	Language and Communication, Cognitive
3.	Fill in the blanks with A/An/The: aeroplane..... dogTaj MahalAprononion.....car Sun.....pencilelephant.....Earth	10×0.5=5	Analytical

4.	Answer the following questions: Q1. Where did Sona live? Ans. _____ _____ Q2. How did Mohit act to save himself? Ans. _____ _____ Q3. Who were Sona's friends? Ans. _____ _____	3×2=6	Critical thinking
-----------	--	--------------	--------------------------



ARMY PUBLIC SCHOOL GWALIOR
CLASS - I
ACADEMIC SESSION 2024-25
WORKSHEET (SELF -ASSESSMENT)





Subject: Hindi

Assignment No. : 8

Allotment Date: 31 January 2025

संख्या	प्रश्न/उत्तर	अंक	प्रकृति
प्र.1	बिना पट्रोल,इंजन के चलने वाले वाहनों के नाम लिखो - ----- ----- -----	1x3=3	बोधात्मक
प्र 2	दी गई कविता की पंक्तियों को पूरा करो: बरखा रानी आओ तुम अपना ----- बरसाओ तुम । बरखा ----- , बरखा रानी कहाँ से लाई इतना ----- ?	1 x3 =3	गहनसोच
प्र-3	नीचेलिखेशब्दोंकेअर्थलिखो: अचानक- तबियत - मेट्रो-ट्रेन- ई-रिक्शा-	4x 1=4	समस्यासमाधान

<p>प्र-4</p>	<p>शब्द सही जगह में लिखो :</p> <div style="border: 1px solid black; padding: 5px; margin: 10px 0;"> <p>पर्व ड्रम क्रम ड्राइवर दर्पण ग्रह</p> </div>  <p>-----</p> <p>-----</p>	<p>3x1=3</p>	<p>भाषाईकौशल</p>
<p>प्र-5</p>	<p>एक-एक वाहनों के नाम लिखो</p> <p>सड़क पर चलने वाले</p> <p>-----</p> <p>आसमान में उड़ने वाले</p> <p>-----</p> <p>पानी में चलने वाले</p> <p>-----</p>	<p>3x1=3</p>	<p>विश्लेषणात्मक</p>
<p>प्र-6</p>	<p>निम्नलिखित प्रश्नों के उत्तर दीजिए:</p> <p>प्रश्न 1. घर से मेट्रो स्टेशन तक कैसे गए?</p> <p>-----</p> <p>प्रश्न 2. सब जानवर हिरन को ढूंढने किस दिन गए?</p> <p>-----</p> <p>प्रश्न 3. क्या खाने से हिरन स्वस्थ हो गया?</p> <p>-----</p> <p>प्रश्न 4. रत्ना ने ई-रिक्शा वाले से क्या कहा?</p> <p>-----</p>	<p>4x1=4</p>	



ARMY PUBLIC SCHOOL GWALIOR
CLASS - I
ACADEMIC SESSION 2024-25
WORKSHEET (SELF –ASSESSMENT)

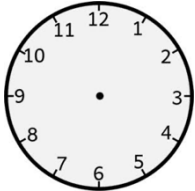
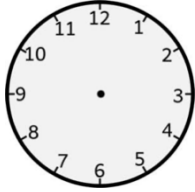
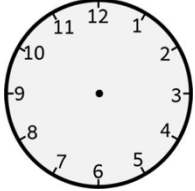



Subject: Mathematics

Assignment No. : 8

Allotment Date: 31 January 2025

S. No	Questions	Marks													
Q1.	Fill in the blanks using the given help box: (28, Eighth, July, October, 26 January) a. _____ comes between September and November. b. August is the _____ month of the year. c. _____ is the seventh month of the year. d. _____ days are there in four weeks. e. _____ is our Republic day.	1X5=5	Understanding												
Q2.	Match the columns. <table style="width: 100%; border: none;"><thead><tr><th style="text-align: center;">Column I</th><th style="text-align: center;">Column II</th></tr></thead><tbody><tr><td>(i) Square</td><td>Gram</td></tr><tr><td>(ii) Weight</td><td>12 months</td></tr><tr><td>(iii) A year</td><td>4 sides are equal</td></tr><tr><td>(iv) A Clock</td><td>3 sides</td></tr><tr><td>(v) Triangle</td><td>Long and short hands</td></tr></tbody></table>	Column I	Column II	(i) Square	Gram	(ii) Weight	12 months	(iii) A year	4 sides are equal	(iv) A Clock	3 sides	(v) Triangle	Long and short hands	1X5=5	Intellectual
Column I	Column II														
(i) Square	Gram														
(ii) Weight	12 months														
(iii) A year	4 sides are equal														
(iv) A Clock	3 sides														
(v) Triangle	Long and short hands														
Q3.	Q1. Which shape can be used to draw a ball ? Ans. _____. Q2. Which shape can slide ? Ans. _____.	1x2=2	Critical thinking												

<p>Q4.</p>	<p>Multiple choice questions.</p> <p>(i) A triangle has _____ corners. a) 4 b) 5 c) 6</p> <p>(ii) Spring season comes in the month of _____. a) February b) March c) April</p> <p>(iii) A square has _____ sides. a) 4 b) 6 c) 10</p> <p>(iv) In India, we use money in the form of _____. a) dollars b) coins. c) notes and coins</p> <p>(v) _____ is the second day of week. a) Tuesday b) Sunday c) Friday</p>	<p>1x5=5</p>	<p>Problem solving</p>
<p>Q5.</p>	<p>Draw hands on the clocks to show the time :</p> <p>(i) 9:00</p>  <p>(ii) 7:00</p>  <p>(iii) 12:00</p> 	<p>3X1=3</p>	<p>Cognitive</p>



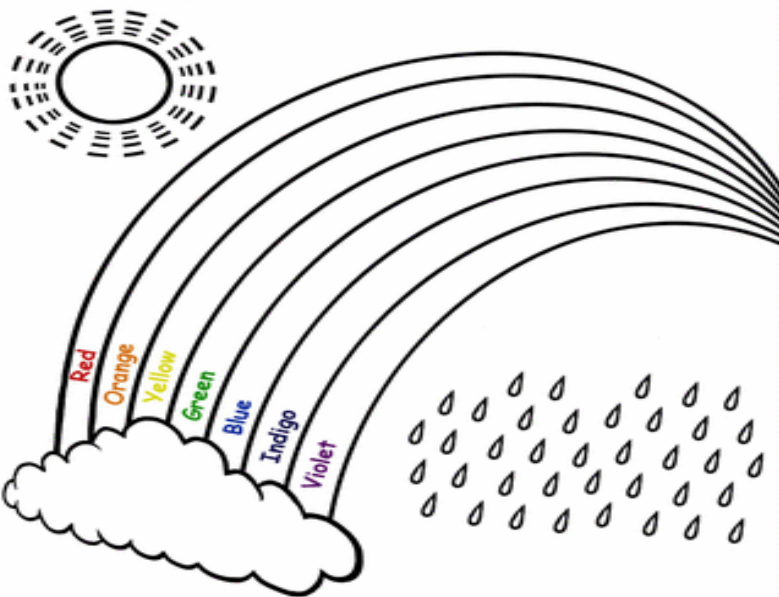
ARMY PUBLIC SCHOOL GWALIOR
CLASS - I
ACADEMIC SESSION 2024-25
WORKSHEET (SELF –ASSESSMENT)




Subject: EVS

Assignment No. : 8

Allotment Date: 31 January 2025

S.NO	QUESTIONS	MAR KS	SKILLS
1.	<p>Fill in the blanks using the help box given below: (Rain, Sun, Sea, Astronauts)</p> <p>a) People who go to space are _____.</p> <p>b) _____ is the main source of water.</p> <p>c) _____ is the big ball of fire.</p> <p>d) _____ water is salty in taste.</p>	4×1=4	Application and analytical skills
2.	<p>Write True or False for the following statements based on the qualities of <u>water</u>.</p> <p>a. It is colourless. ()</p> <p>b. It has a nice smell. ()</p> <p>c. It can be made in factories. ()</p> <p>d. It has no taste. ()</p>	4×1=4	Identification of facts and Cognitive skills
3.	<p>Colour the diagram of the given rainbow .</p> 	4	Analytical skills

4.	<p>Answer the following questions:</p> <p>a. When do we see whole round Moon? Ans _____ _____.</p> <p>b. Why do the stars look very small? Ans. _____ _____.</p> <p>c. Why do we use water for? Write any two uses of water. Ans . _____ _____.</p> <p>d. Write any two ways to control wastage of water.. Ans. _____ _____.</p>	4×2=8	Conceptual understanding and recapitulation
----	---	-------	---



ARMY PUBLIC SCHOOL GWALIOR
CLASS - I
ACADEMIC SESSION 2024-25
WORKSHEET (SELF –ASSESSMENT)




Subject: Computer

Assignment No. : 8

Allotment Date: 31 January 2025

S. No.	Questions	Marks	Skills
Q1.	<p>Tick the correct answer.</p> <p>(i) Artificial things are made by _____.</p> <p>a) nature b) humans c) robots</p> <p>(ii) We become _____ when we start doing correct things on our own.</p> <p>a) young b) old c) intelligent</p> <p>(iii) Through _____ intelligence, a computer can play, talk and do many other things.</p> <p>a) Natural b) Simple c) Artificial</p> <p>(iv) AutoDraw program transforms our rough drawing or sketch into meaningful _____.</p> <p>a) numbers b) images c) data</p>	1x4=4	Information
Q2.	<p>Fill in the blanks-</p> <p>a) _____ things are made or produced by human beings.</p> <p>b) _____ is the ability to</p>	1x4=4	Understanding

	<p>think, learn from experience and act accordingly.</p> <p>c) AI makes a _____ think intelligently like humans.</p> <p>d) For starting AutoDraw , we need a computer with _____ connection.</p>		
Q3.	<p>Answer the following questions in one word.</p> <p>a) Name two artificial things.</p> <p>Ans. _____</p> <p>b) What is the name of AI-based drawing program?</p> <p>Ans. _____</p>	1x2=2	Cognitive



ARMY PUBLIC SCHOOL GWALIOR
CLASS - I
ACADEMIC SESSION 2024-25
WORKSHEET (SELF –ASSESSMENT)




Subject: Art and Work Education

Assignment No. : 8

Allotment Date: 31 January 2025

S. NO.	QUESTIONS	MARKS	NATURE
Q.1	What are the primary colours?	2	Knowledge
Ans			
Q.2	What are the secondary colours?	2	Knowledge
Ans			
Q.3	What are the Tertiary colours?	2	Knowledge
Ans			
Q.4	What are the warm colours?	2	Knowledge
Ans			
Q.5	What are the cool colours?	2	Knowledge
Ans			



ARMY PUBLIC SCHOOL GWALIOR
CLASS - I
ACADEMIC SESSION 2024-25
WORKSHEET (SELF –ASSESSMENT)




Subject: Health and Physical Education

Assignment No. : 8

Allotment Date: 31 January 2025

S.NO.	QUESTIONS	MARKS	NATURE
1.	<p>Tick the correct answer.</p> <p>(i) Throwing is a action which involves the movement of your_</p> <p>a) hands b) head c) feet d) legs</p> <p>(ii) _____is used to grab/hold or catch the ball.</p> <p>a) shoulder b) legs c) foot d) hands</p> <p>(iii)Gross motor develops skills like</p> <p>a) catching b)rolling c)trapping d) all of these</p> <p>(iv)March Past is conducted for _</p> <p>a)small group b)2-4 participants c)large group d)none of these</p>	4x1=4	Information
2.	<p>Fill in the blanks-</p> <p>a)March Past involves the movement of _____&_____.</p> <p>b) _____ is an outdoor game.</p> <p>c) _____ makes you fit and healthy.</p>	3x1=3	Understanding

3.	Write 'T' for True or 'F' for False against the statements:- a) March Past can be conducted for small group. b) Badminton is an outdoor game. c) Hockey is an outdoor game.	3x1=3	Interdisciplinary
----	---	-------	-------------------



ARMY PUBLIC SCHOOL GWALIOR
CLASS - I
ACADEMIC SESSION 2024-25
WORKSHEET (SELF –ASSESSMENT)



Subject: Music and Dance
Allotment Date: 31 January 2025

Assignment No. : 8

S. NO.	QUESTIONS	MARKS	NATURE
1	Christmas Day celebrates on which Date? a) 20 December b) 25 December	1	Information
2	Which is the western dance form? a) Hip-Hop b) Kathak	1	Critical Thinking
3	Western dance forms are dedicated to _____ culture. a) Indian b) western	1	Understanding
4	Which is the basic taal of Kathak? a) Teentaal b) Dadra taal	1	Information
5	Christmas is thefestival? a) Muslim's b) Christian's	1	Critical thinking
6	Lakdikikaathi, kaathi pe? a) Ghoda b) Haathi	1	Information

7	Naani Teri morniko legae ? a) Mor b) Chor	1	Information
8	Baaki jo bacha tha kale legae ? a) Chor b) Mor	1	Critical thinking
9	Nanna Munna Rahi hu kasipahihu ? a) Desh b) Ghar	1	Understanding
10	Identify the Voice of cat ? a) Meow b)Roar	1	Understanding