




ARMY PUBLIC SCHOOL GWALIOR
CLASS- I
ACADEMIC SESSION 2024-25
REVISION WORKSHEET (SELF ASSESSMENT)




Subject: English
Allotment Date: 15/02/2025

Assignment No:- 9

S.N	QUESTIONS		
Q.I	<p>Read the following passage carefully and answer the question given below.</p> <p style="text-align: center;">A trip to a beach</p>  <p>Ravi and his friends went for the trip on a beach. It was a bright and beautiful day. Ravi and his friends were playing on a beach. Pihu was making a sand castle. Aarav and Ravi were playing with a ball. Tia was sitting under an umbrella. Simi was taking sun bath. There were many fishes in the sea. Rohan was having an ice-cream. Pratik was reading a book. They all were having fun.</p> <p>A.1 Tick (✓) the correct option from the passage:</p> <p>(i) Where did Ravi and his friends go for trip?</p> <p>a. zoo <input type="checkbox"/> b. beach <input type="checkbox"/></p> <p>c. water park <input type="checkbox"/> d. amusement park <input type="checkbox"/></p> <p>(ii) There were many..... in the sea.</p> <p>a. fishes <input type="checkbox"/> b. snakes <input type="checkbox"/></p> <p>c. crocodiles <input type="checkbox"/> d. turtles <input type="checkbox"/></p>	1X5=5	Language and Communication, Cognitive

	<p>(iii) Arav and Ravi were playing with a.....</p> <p>a. badminton <input type="checkbox"/> b. volleyball <input type="checkbox"/></p> <p>c. frisbee <input type="checkbox"/> d. ball <input type="checkbox"/></p> <p>(iv) Who was taking sun bath?</p> <p>a. Tia <input type="checkbox"/> b. Ravi <input type="checkbox"/></p> <p>c. Simi <input type="checkbox"/> d. Arav <input type="checkbox"/></p> <p>(v) Who was reading a book?</p> <p>a. Simi <input type="checkbox"/> b. Pratik <input type="checkbox"/></p> <p>c. Arav <input type="checkbox"/> d. Tia <input type="checkbox"/></p>		
<p>Q.II</p>	<p>Answer in one word from the given passage:</p> <p>Q.1 Who was having an ice-cream?</p> <p>Ans</p> <p>Q.2 Who was sitting under an umbrella?</p> <p>Ans</p> <p>Q.3 From the given passage write the opposite of 'dull'.</p> <p>Ans</p> <p>Q.4 Was everyone having fun on a beach?</p> <p>Ans</p>	<p>1 X 5 = 5</p>	<p>Interdisciplinary</p>

	<p>Q.5 Which is your favourite place, you would like to go for a trip?</p> <p>Ans</p>		
Q.III	<p>Fill in the blanks with 'has or 'have'</p> <p>1. Siya and Riya many toys.</p> <p>2. My father a black car.</p>	1X 2=2	Application
Q.IV	<p>Underline the words that should start with a capital letter and write them in the given space:</p> <p>1. desk table india chair </p> <p>2. rohan girl teacher boy </p> <p>3. city house toy gwalior </p>	1X 3=3	Cognitive
Q.V	<p>Observe the picture given below and answer the questions followed:</p> <p style="text-align: center;">Sam's Birthday Party</p>  <p>B.1 From the given help box fill in the blanks given below: [friends, enjoying, Sam's, birthday, gifts]</p> <p>(i) Today is birthday.</p> <p>(ii) Mom and dad have organizedparty for Sam.</p> <p>(iii) Sam has invited hison his birthday party.</p> <p>(iv) Sam's friends have brought for Sam.</p> <p>(v) Everyone isthe birthday party.</p>	1X5=5	Analytical







ARMY PUBLIC SCHOOL GWALIOR
CLASS- I
ACADEMIC SESSION 2024-25
REVISION WORKSHEET (SELF ASSESSMENT)



Subject: Hindi
Allotment Date: 15/02/2025

Assignment No:- 9

संख्या	प्रश्न	अंक	प्रकृति
प्र 1.	<p style="text-align: center;">बिल्ली बच गई</p> <p>एक दिन ढोलू-मोलू दोनों अपने घर के पीछे खेल रहे थे। वहाँ एक कमरे में बिल्ली के दो छोटे-छोटे बच्चे थे। उन्हें भूख लगी हुई थी। ढोलू-मोलू ने दोनों बिल्ली के बच्चों की आवाज सुनी और अपने दादाजी को बुला कर लाए। दादा जी ने उन दोनों को एक एक कटोरी दूध पिलाया। वह दोनों आपस में खेलने लगे। इसे देखकर ढोलू-मोलू बोले बिल्ली बच गई दादाजी ने ढोलू-मोलू को शाबाशी दी।</p> <p>नैतिक शिक्षा - दूसरों की भलाई करने से खुशी मिलती है।</p> <p>प्र1.ढोलू- मोलू को कैसे पता चला कि बिल्ली के बच्चे भूखे हैं?</p> <p>-----</p> <p>प्र 2 ढोलू मोलू ने मदद के लिए किसको बुलाया ?</p> <p>-----</p> <p>प्र 3 दूध पीने के बाद बिल्ली के बच्चे क्या करने लगे?</p> <p>-----</p> <p>प्र 4 खाली स्थान भरो।</p> <p>1. एक कमरे में बिल्ली के _____ छोटे छोटे बच्चे थे।</p>	5x1=5	बोधार्थक

	2. बिल्ली के बच्चों को _____ लगी थी।		
प्र2	<p>दिए गए शब्दों के अर्थ लिखें-</p> <p>ताँगा _____</p> <p>कुटिया _____</p> <p>वृक्ष _____</p> <p>बरखा _____</p> <p>ढूँढने _____</p>	5x1=5	अन्तः विषयात्मक
प्र 3	<p>चित्र देखो और बताओ कौन क्या लाया।</p> <div style="display: flex; justify-content: space-around; align-items: center;"> <div style="text-align: center;">  <p>भालू</p> </div> <div style="text-align: center;">  <p>खरगोश</p> </div> <div style="text-align: center;">  <p>गिलहरी</p> </div> <div style="text-align: center;">  <p>बंदर</p> </div> </div>	4x.5 =2	

<p>प्र 4</p>	<p>(अ) निम्नलिखित प्रश्नों के उत्तर दो -</p> <p>(i)दोबिना पेट्रोल इंजन के चलने वाले वाहनों के नाम लिखो ।</p> <p>.....</p> <p>(ii)शिकारी वहाँ क्यों आया?</p> <p>.....</p> <p>(iii) आँचल और सांवरी ने मेले में किसकी सवारी की।</p> <p>.....</p> <p>(iv) रत्ना ने ई-रिक्षा वाले को क्या कहा?</p> <p>.....</p>	<p>5x1=5</p>	<p>विश्लेषणात्मक</p>
<p>प्र .5</p>	<p>नीचे दिए अनुच्छेद को पूरा करो</p> <p style="text-align: center;">पिकनिक</p> <p>पिछले शनिवार को हम विद्यालय के तरफ से पिकनिक पर गए थे। हम सभी ----- में हंसते-गाते जा रहे थे। हम लगभग दस बजे ----- पहुंचे। हमने वहाँ पर बहुत प्रकार के ----- देखे। हमारे अध्यापको ने वहाँ पर रहने वाले ----- के बारे में बताया।</p>	<p>5x1=5</p>	<p>भाषाई कौशल</p>
<p>प्र 7</p>	<p>नीचे दिए गए अंकों को शब्द रूप में लिखो </p> <p>क) ६ - _____</p> <p>ख) ५ - _____</p> <p>ग) ७ - _____</p>	<p>4x.5=2</p>	



ARMY PUBLIC SCHOOL GWALIOR
CLASS- I
ACADEMIC SESSION 2024-25
REVISION WORKSHEET (SELF ASSESSMENT)



Subject: Mathematics
Allotment Date: 15/02/2025

Assignment No:- 9

S. No	Questions	Marks	Skills												
Q1.	Fill in the blanks using the given help box: (30, L or ml, Wednesday, no side, □) a. _____ is the symbol of rupee. b. We measure liquid in _____. c. A circle has _____. d. _____ comes after Tuesday. e. □ 20 + □ 10 = _____.	1X5=5	Understanding												
Q2.	Match the columns. <table style="width: 100%; border: none;"><thead><tr><th style="text-align: center;">Column I</th><th style="text-align: center;">Column II</th></tr></thead><tbody><tr><td>(i) Clock</td><td>metre (m)</td></tr><tr><td>(ii) Room's length</td><td>8th month of the year</td></tr><tr><td>(iii) August</td><td>28</td></tr><tr><td>(iv) 4 x 7</td><td>4 equal sides</td></tr><tr><td>(v) Square</td><td>Long and short hands</td></tr></tbody></table>	Column I	Column II	(i) Clock	metre (m)	(ii) Room's length	8 th month of the year	(iii) August	28	(iv) 4 x 7	4 equal sides	(v) Square	Long and short hands	1X5=5	Intellectual
Column I	Column II														
(i) Clock	metre (m)														
(ii) Room's length	8 th month of the year														
(iii) August	28														
(iv) 4 x 7	4 equal sides														
(v) Square	Long and short hands														
Q3.	The pictograph below shows the number of students present in class I on each working day of the week.	1x2=2	Critical thinking												

Monday	☺☺☺☺☺☺☺☺
Tuesday	☺☺☺☺
Wednesday	☺☺☺☺
Thursday	☺☺☺☺☺☺
Friday	☺☺☺

Now answer the following questions:

(i) How many children were present on Thursday?

Ans

(ii) On which day of the week maximum children were present?

Ans

Q4.

Multiple choice questions.

(i) Spring seasons comes in the month of _____.

(a) February (b) March (c) April

(ii) December is the _____ month of the year.

(a) 12th (b) 6th (c) 7th

(ii) A rectangle has _____ sides.

(a) 4 (b) 6 (c) 10

(iv) Orange is an example of _____.

(a) triangle (b) circle (c) square

(v) □ ○ △ □ _____

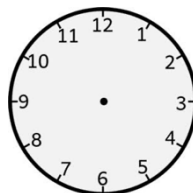
(a) ○ △ (b) □ △ (c) □ ○

1x5=5

Problem solving

Q5.

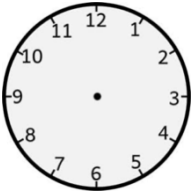
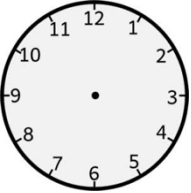
Draw hands on the clocks to show the time.



(i) 6:00

3X1=3

Cognitive

	<p>(ii) 8:00</p>  <p>(iii) 12:00</p> 		
--	---	--	--



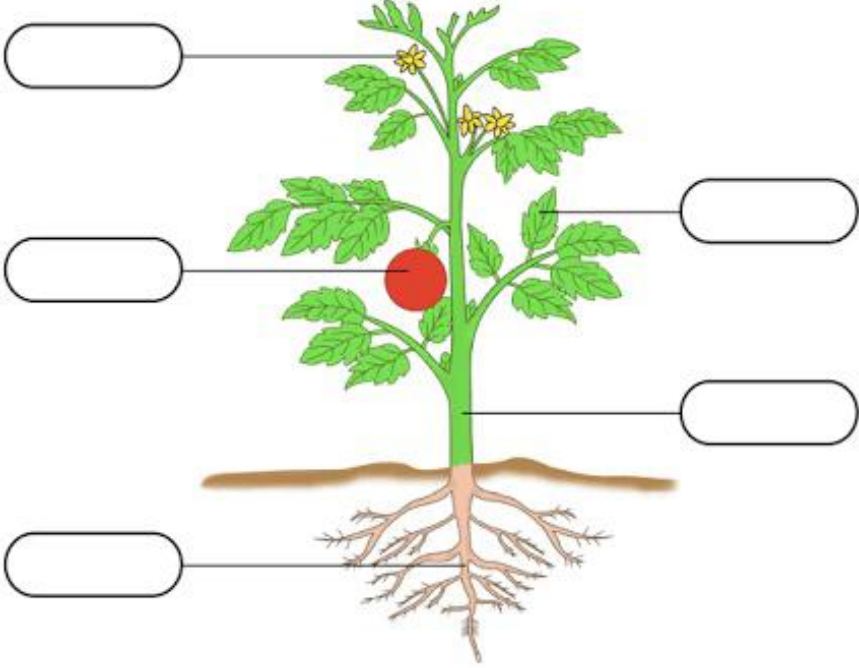
ARMY PUBLIC SCHOOL GWALIOR
CLASS- I
ACADEMIC SESSION 2024-25
REVISION WORKSHEET (SELF ASSESSMENT)



Subject: EVS
Allotment Date: 15/02/2025

Assignment No:- 9

Sr. No.	Questions	Marks	Skills
Q1.	Tick the correct option: (i) Aquatic animals live here. a. Sand b. Water c. Air (ii) Water is needed by _____. a. Plants b. Animals c. (a) and (b) both (iii) It is a big hot ball of fire. a. Sun b. Clouds c. Moon (iv) Mango is a _____ fruit.. a. winter b. spring c. summer (v) We use quilts in _____ season. a. winter b. spring c. summer	1X5=5	Cognitive
Q2.	Fill in the blanks using help box : (summer, jute, plant, six or eight, Astronauts) a. We sweat a lot in _____ season. b. We get fibre from _____. c. People who go to space are _____. d. Insects have _____ legs. e. A _____ has a root, leaves, and a stem.	1x5=5	Under- -standing

<p>Q3.</p>	<p>Match the following :</p> <table style="width: 100%; border: none;"> <tr> <td style="width: 50%;">i)Independence day</td> <td style="width: 50%;">Gulal</td> </tr> <tr> <td>ii)Holi</td> <td>15th August</td> </tr> <tr> <td>iii)Hot days</td> <td>Dog</td> </tr> <tr> <td>iv)Pet animal</td> <td>Tea, Coffee</td> </tr> <tr> <td>v)Cold days.</td> <td>Ice cream</td> </tr> </table>	i)Independence day	Gulal	ii)Holi	15 th August	iii)Hot days	Dog	iv)Pet animal	Tea, Coffee	v)Cold days.	Ice cream	<p>1x5=5</p>	<p>Critical thinking</p>
i)Independence day	Gulal												
ii)Holi	15 th August												
iii)Hot days	Dog												
iv)Pet animal	Tea, Coffee												
v)Cold days.	Ice cream												
<p>Q4.</p>	<p>Label the parts of given plant:</p>  <p>The diagram shows a tomato plant with a green stem, green leaves, yellow flowers, a red fruit, and a brown root system. Five empty rounded rectangular boxes are connected to the plant by lines: one to a flower, one to a leaf, one to the stem, one to the root, and one to the fruit.</p>	<p>1X5=5</p>	<p>Intellectual</p>										



ARMY PUBLIC SCHOOL GWALIOR
CLASS- I
ACADEMIC SESSION 2024-25
REVISION WORKSHEET (SELF ASSESSMENT)



Subject: GK
Allotment Date: 15/02/2025

Assignment No:- 9

S. No.	Questions	Marks	Skills										
Q1.	<p>Fill in the blanks using given help box:</p> <p>(i) In Manipuri we greet some one by saying _____.</p> <p>(ii) Tamil and _____ are the oldest languages of India.</p> <p>(iii) We feel happy when our _____ lovingly touches our cheeks.</p> <p>(iv) We do not feel good when some _____ touches us.</p>	4x1=4	Information										
Q2.	<p>Match the columns.</p> <table style="width: 100%;"><thead><tr><th style="text-align: center;">Column A</th><th style="text-align: center;">Column B</th></tr></thead><tbody><tr><td>Panjabi</td><td>(a) Bagheera</td></tr><tr><td>Mowgli</td><td>(b) Sat Sri Akal</td></tr><tr><td>Tricolour</td><td>(c) Aadaab</td></tr><tr><td>Kashmiri</td><td>(d) National Flag of India</td></tr></tbody></table>	Column A	Column B	Panjabi	(a) Bagheera	Mowgli	(b) Sat Sri Akal	Tricolour	(c) Aadaab	Kashmiri	(d) National Flag of India	4x1=4	Cognitive
Column A	Column B												
Panjabi	(a) Bagheera												
Mowgli	(b) Sat Sri Akal												
Tricolour	(c) Aadaab												
Kashmiri	(d) National Flag of India												
Q3.	<p>Answer the questions in one word</p> <p>(i) Which is the national tree of India?</p> <p>Ans: _____</p> <p>(ii) How do we greet someone in Bengali?</p> <p>Ans: _____</p> <p>(iii) How do you feel when your grandpa pats your back ?</p>	4x2=8	HOTS										

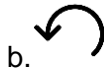
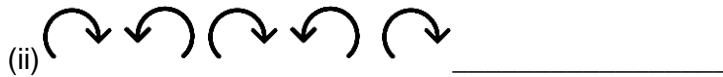
Ans: _____

(iv) what will you do if stranger ask you to go along with him or her?

Ans: _____

Q4.

What should be the next figure



4x1=4

Inter-disciplinary



ARMY PUBLIC SCHOOL GWALIOR
CLASS- I
ACADEMIC SESSION 2024-25
REVISION WORKSHEET (SELF ASSESSMENT)



Subject: Computer
Allotment Date: 15/02/2025

Assignment No:- 9

Sr. No.	Questions	Marks	Skills
Q1.	<p>Tick the correct answer.</p> <p>(i) Fill button is present in the _____ tool.</p> <p>a) Paint b) Text c) Magic</p> <p>(ii) Arranging things makes them look_____.</p> <p>a) heavy b) tidy c) untidy</p> <p>(iii) _____ is an AI- based drawing program.</p> <p>a) Tux Paint b) AutoDraw c) MS Paint</p> <p>(iv) _____ is a free drawing and coloring program.</p> <p>a)Tux Paint b) MS-Word c) Word pad</p>	0.5x1=2	Information
Q2.	Fill in the blanks-	0.5x1=2	Understanding

	<p>a) _____ tool is used to add special effects.</p> <p>b) _____ is created when figures or shapes are arranged in a design.</p> <p>c) _____ canvas is the largest part of the screen where we draw.</p> <p>d) For starting AutoDraw , we need a computer with _____ connection.</p>		
Q3.	<p>Write 'T' for True or 'F' for False against the statements:-</p> <p>a) Quit tool is used to close the program.</p> <p>b) Decomposition of a problem makes it difficult to solve.</p> <p>c) Paint tool is used to draw shapes.</p> <p>d) AI helps us in doing things faster and accurately.</p>	0.5x1=2	Inter disciplinary
Q4.	<p>Answer the following questions in one word.</p> <p>a) Which tool is used to paste pre-drawn images on canvas?</p> <p>Ans. _____</p> <p>b) What is the name of AI-based drawing program?</p> <p>Ans. _____</p> <p>c) Which tool is used to erase any part of the drawing.</p> <p>Ans. _____</p> <p>d) Breaking up of a problem into smaller parts is known as?</p> <p>Ans. _____</p>	1x4=4	Cognitive