



**ARMY PUBLIC SCHOOL GWALIOR**  
**CLASS- II**  
**ACADEMIC SESSION 2024-25**  
**REVISION WORKSHEET (SELF ASSESSMENT)**



**Subject: English**  
**Allotment Date: 15/02/2025**

**Assignment No:- 9**

| <b>S. NO.</b> | <b>QUESTIONS</b>  | <b>MARKS 20</b> | <b>NATURE</b>   |
|---------------|---|-----------------|-----------------|
| 1.            | <p>Read the passage carefully and answer the following questions.</p> <p>This is the story of a little girl named Mini. She goes to her grandmother's orchard one day. There are many fruit trees in the orchard. She sees five mango trees in the orchard. There are six litchi trees also. There are ten jamun trees too. Three guava trees also grow there.</p> <p>Mini is very happy. Grandmother plucks a big mango and gives her. She loves it.</p> <p><b>Q1. Write the correct answer for the following questions.</b></p> <p>a) What is the name of the girl in the story?<br/>Ans _____</p> <p>b) How many litchi trees are there in the orchard?<br/>Ans _____</p> <p>c) Which of the fruit does the grandmother pluck for Mini ?<br/>Ans _____</p> | 1x3=3           | Reading skill   |
| 2.            | <p><b>Q2. Make sentences with the words given below.</b></p> <p>a) Polite- _____</p> <p>b) Shelter- _____</p>   | 1x2=2           | Writing skill   |
| 3.            | <p><b>Q3. Fill in the blanks with the correct adjectives given in the brackets:</b></p> <p>a) The cake was _____. (delicious / fast)</p> <p>b) The garden has _____ flowers. (much / many)</p>  | 1x2=2           | Problem Solving |

|    |  |       |                 |
|----|--|-------|-----------------|
| 4. | <p><b>Q4. Complete the following lines of poem 'Tall Trees':</b></p> <p>With their feet _____</p> <p>And _____ in the sky.</p>   | 1x2=2 | Language skill  |
|    | <p><b>Q5. Arrange the words to form a meaningful sentence using capital letters, full stop or question mark.</b></p> <p>(i) the barking is dog</p> <p>_____</p> <p>(ii) beautiful looking very pink the lotus is</p> <p>_____</p>                    | 1x2=2 | Problem solving |
|    | <p><b>Q6. Add suitable subject to the following :</b></p> <p>(i) _____ has strong branches.</p> <p>(ii) _____ purchased a new car.</p>   | 1x2=2 | Knowledge       |
|    | <p><b>Q7. Answer the following questions:</b></p> <p>Q1. What happened when Murali climbed the mango tree?</p> <p>Ans _____</p> <p>_____</p> <p>Q2. Why did people call Bholaram's shop the magic repair toy shop?</p> <p>Ans _____</p> <p>_____</p> | 1x2=2 | Literacy skill  |
|    | <p><b>Q8. Write the meanings of the given words.</b></p> <p>a). repair - _____</p> <p>b). ripe - _____</p>   | 1x2=2 | Understanding   |

|  |   |              |                  |
|--|---|--------------|------------------|
|  | <p><b>Q9. Underline the adverbs in the following sentences.</b></p> <p>a) The old lady speaks softly.</p> <p>b) The soldiers fought bravely.</p> <p>c) The sun is shining brightly.</p> | <b>1x3=3</b> | <b>Knowledge</b> |
|--|---|--------------|------------------|




**ARMY PUBLIC SCHOOL GWALIOR**  
**CLASS- II**  
**ACADEMIC SESSION 2024-25**  
**REVISION WORKSHEET (SELF ASSESSMENT)**



**Subject: Hindi**  
**Allotment Date: 15/02/2025**

**Assignment No:- 9**


















| संख्या | प्रश्न  | अंक   | प्रश्न के प्रकार |
|--------|---|-------|------------------|
| 1.     | <p>निम्नलिखित गद्यांश को ध्यानपूर्वक पढ़े।<br/>एक दिन जब मैं स्कूल पहुँचा तो अध्यापिका ने बताया कि कल हम पिकनिक पर चलेंगे। यह सुनकर सब बहुत खुश हुए। अगले दिन सब अच्छी-अच्छी और मनपसंद खाने की चीज़ें लेकर स्कूल पहुँचें। जब बस में बैठने लगे तो सब में नया जोश था। पार्क में पहुँचकर सब हरी-हरी घास पर लोटपोट हो गए। वहाँ सुंदर-सुंदर फूल, तितलियाँ थीं। सबने नाच गाना किया, खेले, खाना-पीना खाया और स्कूल वापस आ गए।</p> <p>क) पढ़े गए गद्यांश के आधार पर नीचे दिए गए प्रश्नों के उत्तर दीजिये-</p> <p>i) अध्यापिका ने कहा जाने की बात कही?<br/>ii) पार्क में पहुँच कर बच्चों ने क्या किया?</p> <p>ख) निम्नलिखित वाक्यों में खाली स्थान भरिए-</p> <p>i) जब बस में बैठने लगे तो सब में नया _____ था।<br/>ii) अगले दिन सब अच्छी-अच्छी और _____ खाने की चीज़ें लेकर स्कूल पहुँचें।</p> | 2x1=2 | बोधार्थक         |
| 2.     | <p>नीचे दिए गए चित्र को ध्यान से देखिए तथा निम्नलिखित प्रश्नों के उत्तर दीजिए_</p>  <p>उपर्युक्त चित्र के आधार पर निम्नलिखित वाक्यों में खाली स्थान भरिए-</p> <p>क) यह एक _____ का चित्र है।<br/>ख) बगीचे में कुछ _____ झुला झूल रहे हैं।<br/>ग) सीमा के हाथ में _____ रंग का गुब्बारा है।</p>  | 2x1=2 | ज्ञानार्थक       |

|    |   |                                 |               |
|----|---|---------------------------------|---------------|
|    | घ) एक बच्ची _____ उड़ा रही है।  |                                 |               |
| 3. | अनुच्छेद लेखन- 'मेरा प्रिय मित्र'<br>_____<br>_____<br>_____<br>_____<br>_____<br>_____<br>_____<br>_____<br>_____<br>_____<br>_____<br>_____<br>_____<br>_____<br>_____<br>_____<br>_____<br>_____<br>_____<br>_____   | 3x1=3                           | रचनात्मक      |
| 4. | <b>व्याकरण</b><br>प्र. क) अनेक शब्दों के लिए एक शब्द-<br>i) जो साथ में पढ़ता है<br>_____<br>ii) जो जूते ठीक करता है<br>_____<br>प्र. ख) निम्नलिखित शब्दों के समान अर्थ वाले शब्द लिखिए-<br>i) हाथ - _____<br>ii) पुस्तक - _____   | 2x1=2<br><br>2x1=2              | सूचनात्मक     |
| 5  | <b>पाठमाला</b><br>प्र. क) कविता की पंक्तियाँ पूरी करिए-<br>सर्दी, गर्मी, वर्षा को भी<br>हँसकर _____<br>आप खुशी से जीती है<br>_____<br>प्र. ख) निम्नलिखित शब्दों के अर्थ लिखिए-<br>i) इस्तेमाल-<br>ii) नीड-<br>प्र. ग) निम्नलिखित शब्दों से वाक्य बनाइए-<br>i) दाना-<br>ii) मौसम-<br>प्र. घ) निम्नलिखित प्रश्नों के उत्तर दीजिए- | 2x1=2<br><br>2x1=2<br><br>3x1=3 | विश्लेषणात्मक |





|    |  |       |               |
|----|--|-------|---------------|
| 4. | Fill in the blanks-<br>a) The amount of liquid that a container can hold is called its _____.<br><br>b) Quarter means _____ minutes.<br><br>c) The short hand of the clock tells us the _____. | 3x1=3 | Understanding |
|----|--|-------|---------------|

| 5.      | <p>Observe the given figure and answer the following-</p> <table border="1" data-bbox="239 526 925 716"> <thead> <tr> <th>Names</th> <th>Number of Cakes</th> </tr> </thead> <tbody> <tr> <td>Tina</td> <td></td> </tr> <tr> <td>Meena</td> <td></td> </tr> <tr> <td>Leena</td> <td></td> </tr> <tr> <td>Saleena</td> <td></td> </tr> <tr> <td>Bareera</td> <td></td> </tr> </tbody> </table> <p><b>Key- 1 cake stands for 2 cakes</b></p> <p>(a) Who has maximum number of cakes.<br/>Ans- _____.</p> <p>(b) Who has least number of cakes.<br/>Ans- _____.</p> <p>Read the time in the clocks and write it in words (using quarter past / half past / quarter to / o' clock).</p> <p>(a)  _____</p> <p>(b)  _____</p> | Names | Number of Cakes | Tina |  | Meena |  | Leena |  | Saleena |  | Bareera |  | 2x1=2 | HOTS |
|---------|--|-------|-----------------|------|---|-------|---|-------|---|---------|---|---------|---|-------|------|
| Names   | Number of Cakes  |       |                 |      |   |       |   |       |   |         |   |         |   |       |      |
| Tina    |   |       |                 |      |   |       |   |       |   |         |   |         |   |       |      |
| Meena   |   |       |                 |      |   |       |   |       |   |         |   |         |   |       |      |
| Leena   |   |       |                 |      |   |       |   |       |   |         |   |         |   |       |      |
| Saleena |   |       |                 |      |   |       |   |       |   |         |   |         |   |       |      |
| Bareera |   |       |                 |      |   |       |   |       |   |         |   |         |   |       |      |

|    |                                   |       |             |
|----|-----------------------------------|-------|-------------|
| 6. | <p>(a) _____</p> <p>(b) _____</p> | 2x1=2 | Observation |
|----|-----------------------------------|-------|-------------|

|    |  |       |                 |
|----|--|-------|-----------------|
| 7. | <p>Word Problems-</p> <p>a) A man mixed 25 mL of white paint and 38 mL of red paint. How much paint did he get in all?<br/>Solution:</p> <p>b) Pradeep sir had ₹ 515.50. He spent ₹ 245.40 to buy a bus ticket. How much money is left with him?<br/>Solution:</p> | 2x2=4 | Problem Solving |
|----|--|-------|-----------------|



|  |  |  |  |
|--|--|--|--|
|  |  |  |  |
|--|--|--|--|




**ARMY PUBLIC SCHOOL GWALIOR**  
**CLASS- II**  
**ACADEMIC SESSION 2024-25**  
**REVISION WORKSHEET (SELF ASSESSMENT)**





**Subject: EVS**

**Assignment No:- 9**

**Allotment Date: 15/02/2025**

| S.NO. | QUESTIONS   | MARKS<br>20 | NATURE           |
|-------|---|-------------|------------------|
| 1.    | <b>Tick the correct answer:</b><br><br>1. Earth is also called _____ planet.<br>a) Green                      b) Red                      c) Blue<br><br>2. We carry raincoat in this season.<br>a) Summer                      b) Monsoon                      c) Autumn<br><br>3. We do not get _____ from animals.<br>a) Honey                      b) Pulses                      c) Cheese<br><br>4. National emblem of India has _____ lions.<br>a) 4                      b) 2                      c) 3 | 1X4=4       | Understanding    |
| 2.    | <b>Fill in the blanks:</b><br>a) Playing games keeps us _____ and _____.<br><br>b) _____ part of the Earth is covered with water.   | 1X2=2       | Analytical skill |
| 3.    | <b>State whether the following statements are 'True/False'.</b><br>a) Hot winds called loo blow during Autumn season. ( )<br>b) The name of our Present Prime Minister is Shri Narendra Modi. ( )   | 1x2=2       | Problem solving  |
| 4.    | <b>Match the following questions.</b><br>Column- A                      Column- B<br>a) mornings are foggy                      wind<br>b) football                      heavenly body<br>c) moving air                      outdoor game<br>d) stars                      winter season  | 0.5x4=2     | Analytical skill |
| 5.    | <b>Recognize and name the picture:</b><br><br><br>a) _____   | 1X3=3       | Information      |

|    |   |         |               |
|----|---|---------|---------------|
|    | <p>b) </p> <p>c) </p>   |         |               |
| 6. | <p><b>Define the following terms:</b></p> <p>a) Orbit</p> <p>_____</p> <p>_____</p> <p>_____</p> <p>b) Habitat</p> <p>_____</p> <p>_____</p> <p>_____</p>   | 1x2=2   | Observation   |
| 7. | <p><b>Complete the flowchart.</b></p> <div style="display: flex; align-items: center; margin-left: 20px;"> <div style="border: 1px solid black; border-radius: 15px; padding: 10px; margin-right: 20px;">       Things which will die without water     </div> <div style="display: flex; flex-direction: column; align-items: center;"> <div style="width: 10px; height: 100px; border-left: 1px solid black; border-right: 1px solid black; margin-bottom: 5px;"></div> <div style="width: 100%; display: flex; justify-content: space-around;"> <div style="width: 30%; height: 30px; border: 1px solid black; border-radius: 10px;"></div> <div style="width: 30%; height: 30px; border: 1px solid black; border-radius: 10px;"></div> <div style="width: 30%; height: 30px; border: 1px solid black; border-radius: 10px;"></div> </div> <div style="width: 10px; height: 100px; border-left: 1px solid black; border-right: 1px solid black; margin-top: 5px;"></div> </div> </div> | 0.5x4=2 | Understanding |
| 8. | <p>Why is India known as the land of 'Unity in Diversity'?</p> <p>_____</p> <p>_____</p> <p>_____</p>   | 1x1=1   | HOTS          |

|     |  |        |                             |
|-----|--|--------|-----------------------------|
|     |  |        |                             |
| 9.  | <p>Why is there a ban on hunting animals in the jungles. What is the punishments given to people who are caught hunting animals.</p> <hr/> <hr/> <hr/> <hr/> <hr/> <hr/> | 1x1=1  | Thinking and Writing Skills |
| 10. | <p>Name the all planets of Solar System.</p> <hr/> <hr/> <hr/> <hr/> <hr/> <hr/> <hr/>   | 1x1 =1 | Thinking and Writing Skills |



|  |  |  |  |
|--|--|--|--|
|  |  |  |  |
|--|--|--|--|



**ARMY PUBLIC SCHOOL GWALIOR**  
**CLASS- II**  
**ACADEMIC SESSION 2024-25**  
**REVISION WORKSHEET (SELF ASSESSMENT)**



**Subject: Computer**

**Assignment No:- 9**

**Allotment Date: 15/02/2025**

| S.NO. | QUESTIONS   | MARKS   | NATURE        |
|-------|---|---------|---------------|
| 1.    | <p><b>Tick the correct answer.</b></p> <p>(i) Script is also known as a _____.</p> <p>a) Page<br/>b) Program<br/>c) Character</p> <p>(ii) An AI-powered games maintain the _____ of the players.</p> <p>a) interest<br/>b) relations<br/>c) balance</p> <p>(iii) _____ Patterns do not add anything to itself.</p> <p>a) Design<br/>b) Repeating<br/>c) Non repeating</p> <p>(iv) _____ is a famous AI personal assistant.</p> <p>a) Alexa<br/>b) Sophia<br/>c) Bella</p> | 4x0.5=2 | Information   |
| 2.    | <p><b>Fill in the blanks-</b></p> <p>a) _____ suggests us similar kind of videos.</p> <p>b) Artificial Intelligence is a machine's ability to _____ human intelligence.</p> <p>c) When we represent information using symbols or pictures, it is called _____.</p> <p>d) The sequence of actions is called _____.</p>   | 4x0.5=2 | Understanding |

|    |   |         |                                       |
|----|---|---------|---------------------------------------|
| 3. | <p><b>Write 'T' for True or 'F' for False against the statements:-</b></p> <p>a) A music system gives output in the form of text.<br/> b) Blocks category lists the six categories of color-coded blocks.<br/> c) ScratchJr can only run on Tablets.<br/> d) We use decomposition in our daily lives too.</p>   | 4x0.5=2 | Interdisciplinary                     |
| 4. | <p>Answer in one word .</p> <p>a) Give two examples of AI in our daily life.<br/> Ans. _____<br/> _____</p> <p>b) What is Sprite?<br/> Ans. _____<br/> _____<br/> _____</p> <p>c) Name any two color-coded blocks available in Block category. Ans. _____<br/> _____</p> <p>d) Name any two famous AI personal assistants.<br/> Ans. _____<br/> _____</p> | 4x1=4   | Critical Thinking and Problem Solving |