



**ARMY PUBLIC SCHOOL GWALIOR**  
**CLASS- III**  
**ACADEMIC SESSION 2024-25**  
**REVISION WORKSHEET (SELF ASSESSMENT)**



**Subject: English**  
**Allotment Date: 15/02/2025**

**Assignment No:- 9**

S. NO.	QUESTIONS	MARKS	NATURE
1.	<p><b>Fill in the blanks by following the instructions given below:</b></p> <p>(a) Atharav _____ to the school by bus. (use present continuous tense of <b>go</b>)</p> <p>(b) I am eating bananas. (underline the <b>verb</b>)</p> <p>(c) Rahul is _____ because he got hurt. (use present continuous tense of <b>cry</b>)</p> <p>(d) She _____ the monitor of our class for one week. (use simple past tense of <b>be</b>)</p> <p>(e) It _____ yesterday. (use past continuous tense of <b>rain</b>)</p> <p>(f) The teacher _____ English Grammar tomorrow. (simple future tense of <b>teach</b>)</p>	6x1=6	Understanding
2.	<p><b>State whether the following statements are 'True' or False':</b></p> <p>(a) We use use 'will' in the future tense. _____</p> <p>(b) Continuous tense is also known as progressive tense. _____</p> <p>(c) Humpty Dumpty spoke very politely. _____</p> <p>(d) Definite and indefinite are two types of adjectives. _____</p> <p>(e) We use shall to give an order to someone and <b>not</b> to offer a</p>	6x1=6	Observation

	<p>suggestion_____;</p> <p>(f) Humpty Dumpty was triangular in shape._____</p>				
3.	<p><b>Match the words of column 'A' with their meanings in column 'B':</b></p> <table border="0" style="width: 100%;"> <tr> <td style="width: 50%; vertical-align: top;"> <p><b>A</b></p> <p>(a) he/she/they</p> <p>(b) quiet</p> <p>(c) SLV</p> </td> <td style="width: 50%; vertical-align: top;"> <p><b>B</b></p> <p>(i) Satellite Launch Vehicle</p> <p>(ii) pronoun</p> <p>(iii) to stay without talking</p> </td> </tr> </table>	<p><b>A</b></p> <p>(a) he/she/they</p> <p>(b) quiet</p> <p>(c) SLV</p>	<p><b>B</b></p> <p>(i) Satellite Launch Vehicle</p> <p>(ii) pronoun</p> <p>(iii) to stay without talking</p>	3x1=3	HOTS
<p><b>A</b></p> <p>(a) he/she/they</p> <p>(b) quiet</p> <p>(c) SLV</p>	<p><b>B</b></p> <p>(i) Satellite Launch Vehicle</p> <p>(ii) pronoun</p> <p>(iii) to stay without talking</p>				
4.	<p><b>A. Read the given <u>unseen poem</u> carefully and answer the questions that follow:</b></p> <p>I put on a clean shirt  And go to work  Which of us  Which of us will come back?  Four and twenty moons  Not seeing women  Not seeing my hand  Which of us  Which of us will die?  I put on a clean shirt  And go to work my contract  To work far away</p> <p>I go beyond the mountain  Into the bush  Where the roads end  And the rivers run dry  Which of us  Which of us will come back?  Which of us  Which of us will die?</p> <p><b>Answer the following questions:</b></p> <p>1. What will the poet do as he put on a clean shirt?</p> <hr style="border: 0.5px solid black; margin-bottom: 10px;"/> <hr style="border: 0.5px solid black; margin-bottom: 10px;"/> <p>2. Make sentence on these words:</p> <p>(a) river</p> <p>(b) clean</p>	10x1=10	Problem Solving		

3. Make a list of any two places where the port would go.

4. Give a suitable title to the poem.

**B. Read the following unseen passage for class 2 carefully and answer the questions given below the unseen passage:**

Emily found a lost kitten. It was small and scared. She took it home and gave it food and a soft bed. The kitten purred happily. Now, they are best friends. Now Emily plays with her kitten. They enjoy fully each other's company. Emily calls her cat "Binny."

**Please read the questions carefully asked from the unseen passage and answer them":**

1. What did Emily find?  
(a) A lost kitten  
(b) A lost puppy
2. What does Emily call her cat?  
(a) Bolly  
(b) Binny

**Fill in the blanks with a suitable answer:-**

3. Emily found a lost \_\_\_\_\_.
4. Emily and her kitten enjoy each other's \_\_\_\_\_.


**Tick the correct True/False answer:**

5. Emily and her kitten are not best friends. **(True or False)**
6. Emily calls her cat "Binny." **(True or False)**

5. 1. Write a Paragraph about the visit of Humpty Dumpty in your class.  
(Write Well)
2. Write a letter to the principal of your school requesting him for two days leave because you fell ill.
3. Write a paragraph on New Year Resolution or Agra Fort.

5x3=15

**Critical Thinking**



**ARMY PUBLIC SCHOOL GWALIOR**  
**CLASS- III**  
**ACADEMIC SESSION 2024-25**  
**REVISION WORKSHEET (SELF ASSESSMENT)**



**Subject: Hindi**

**Assignment No:- 9**

**Allotment Date: 15/02/2025**

<p>प्र 1.</p> <p>प्र 2.</p> <p>प्र 3.</p>	<p>दिए गए गद्यांश को पढ़कर उसके नीचे लिखे प्रश्नों के उत्तर लिखो -</p> <p>अमित की राशन की दुकान थी। उसकी दुकान पर दालें, चावल और आटे से लेकर नमकीन, बिस्कुट आदि सब कुछ मिलता था। ऐसी कोई चीज़ न होगी जो उसकी दुकान पर न मिलती हो। एक बार दुकान पर रखी शहद की बोतल उलट गई। चारों ओर से कई मक्खियाँ उस बिखरे शहद पर टूट पड़ीं। सब कुछ भूलकर वे शहर चाटने लगीं। वे शहद चाटने में इतनी मगन हो गईं कि उन्हें पता ही नहीं चला कि कब उनके पैर शहद में चिपक गए। अब उनके लिए उड़ना मुश्किल हो गया। उन्हें अपने लालच पर पछतावा होने लगा।</p> <p>अभ्यास के लिए नीचे लिखे प्रश्नों के उत्तर दीजिए :-</p> <p>1. अमित की किस चीज़ की दुकान थी?</p> <hr/> <p>2. अमित की दूकान पर मिलने वाली कोई दो चीजों के नाम लिखें?</p> <hr/> <p>3. अमित की दूकान में किस चीज की बोतल उलट गई थी?</p> <hr/> <p>ऊपर दिए गद्यांश में से दो संज्ञा शब्द और दो सर्वनाम शब्द छाँटकर लिखिए  </p> <p>संज्ञा - _____ सर्वनाम - _____</p> <p>सही (✓) या गलत (×) का निशान लगाओ  </p> <p>क) अमित की राशन की दुकान थी   _____</p> <p>ख) मक्खियों के पैर शहद में चिपक गए   _____</p>	<p>(5X1=5)</p> <p>(5X1=5)</p>
---	--	-------------------------------


पत्र लेखन

वार्षिकोत्सव में भाग लेने हेतु प्रधानाचार्य को प्रार्थना पत्र अपनी उत्तरपुस्तिका में लिखें I

अथवा

विद्यालय छोड़ने का प्रमाण पत्र प्राप्त करने के लिए प्रधानाचार्य को प्रार्थना पत्र अपनी उत्तरपुस्तिका में लिखें I

नीचे दिए गए चित्र के आधार पर चार वाक्य अपनी उत्तरपुस्तिका में लिखें।



निम्नलिखित वाक्यों में विराम चिन्ह लगाकर अपनी उत्तरपुस्तिका में लिखें।

क. मुझे सेब केले और आम पसंद हैं

ख. वह स्कूल गया

ग. हाय वह मारा गया

शब्दों के वर्णों को अलग-अलग (वर्ण विच्छेद) करके अपनी उत्तरपुस्तिका में लिखें।

क. चिपक = \_\_\_\_\_ + \_\_\_\_\_ + \_\_\_\_\_ + \_\_\_\_\_ + \_\_\_\_\_ + \_\_\_\_\_

ख. दुकान = \_\_\_\_\_ + \_\_\_\_\_ + \_\_\_\_\_ + \_\_\_\_\_ + \_\_\_\_\_ + \_\_\_\_\_

निम्नलिखित शब्दों के अर्थ अपनी उत्तरपुस्तिका में लिखें।

क. लख

ख. पत्र

निम्नलिखित शब्दों के अनेकार्थी शब्द अपनी उत्तरपुस्तिका में लिखें।

क. जग

ख. बाल

(2X1=2)

निम्नलिखित प्रश्नों के सही उत्तर चुने एवं अपनी उत्तरपुस्तिका में लिखें।

क. राजन चाचा की चिट्ठियों पर किसका चित्र था?

अ. कीवी का      ब. मोर का      स. शत्रुमुर्ग का      द. शेर का

(2X1=2)

ख. माली की मदद का सुझाव किसने दिया?

अ. ईशान ने      ब. नीलेश ने      स. चैताली ने      द. वंशिका ने

(3×1=3)

‘शून्य’ कविता की पंक्ति को पूरा कर अपनी उत्तरपुस्तिका में लिखें।

क. सौ के संग भी \_\_\_\_\_ शून्य हो,

तो\_\_\_\_\_ बन जाते हैं।

निम्नलिखित प्रश्नों के उत्तर अपनी उत्तरपुस्तिका में लिखें।

क. कोट की जेबें भारी देखकर माली को कैसा लगा?

ख. कीवी कहाँ रहती है और क्या - क्या खाती है?

ग. ‘शून्य’ कविता में कवि किसकी ताकत को जान गया है?



## ARMY PUBLIC SCHOOL GWALIOR CLASS- III ACADEMIC SESSION 2024-25 REVISION WORKSHEET (SELF ASSESSMENT)



Subject: Mathematics

Assignment No:- 9

Allotment Date: 15/02/2025

S. NO.	QUESTIONS	MARKS	NATURE										
1.	<p><b>Fill in the blanks:</b></p> <p>(i) Distance between Gwalior and Mumbai is measured in .....</p> <p>(ii) □ <math>155 \times 3 = \dots\dots\dots</math></p> <p>(iii) <math>7009 \text{ g} = \dots\dots \text{ kg} \dots\dots \text{ g}</math></p> <p>(iv) .....</p>	<b>4x0.5=2</b>	<b>Problem Solving</b>										
2.	<p><b>Write whether the following statements are 'True' or 'False':</b></p> <p>(i) There are 7 days in a week. .....</p> <p>(ii) <math>500 \text{ mL} = 5 \times 100 \text{ mL}</math> .....</p> <p>(iii) Data can be represented in the form of Pictographs. .....</p> <p>(iv) <math>\text{Dividend} = \text{Divisor} \times \text{Quotient} + \text{Remainder}</math></p>	<b>4x0.5=2</b>											
3.	<p><b>Match the column A with column B:</b></p> <table style="width: 100%; border: none;"> <tr> <td style="width: 50%; text-align: center;">A</td> <td style="width: 50%; text-align: center;">B</td> </tr> <tr> <td>(i) Denominator</td> <td>(a) a chinese puzzle</td> </tr> <tr> <td>(ii) 2 kg</td> <td>(b) 12<sup>th</sup> month</td> </tr> <tr> <td>(iii) December</td> <td>(c) 2000 g</td> </tr> <tr> <td>(iv) Tangram</td> <td>(d) number on the lower side</td> </tr> </table>	A	B	(i) Denominator	(a) a chinese puzzle	(ii) 2 kg	(b) 12 <sup>th</sup> month	(iii) December	(c) 2000 g	(iv) Tangram	(d) number on the lower side	<b>4x0.5=2</b>	
A	B												
(i) Denominator	(a) a chinese puzzle												
(ii) 2 kg	(b) 12 <sup>th</sup> month												
(iii) December	(c) 2000 g												
(iv) Tangram	(d) number on the lower side												
4.	<p><b>Multiple Choice Questions:</b></p> <p>(i) <math>8000 - 0 = ?</math></p> <p style="text-align: center;">(a) 9000                      (b) <math>5000 + 3000</math>                      (c) 0</p> <p>(ii) The product of place value of 6 in 7637 and 6 is</p> <p style="text-align: center;">(a) 600                      (b) 3600                      (c) 60</p> <p>(iii) How many zeros are there in the product of <math>41 \times 400</math>?</p>	<b>4x0.5=2</b>											

(a) 4                      (b) 6                      (c) 7

5. (iv) If we subtract 100 from a 4 - digit number, which place digit will be changed?

(a) thousand              (b) hundred              (c) tens

2

(v) Which is not a part of the Roman numeral system?

6. (a) I                      (b) U                      (c) X

2

**Solve the following:**

(i) Write the fraction number for each of the following:

I. four- eleventh              \_\_\_\_\_

II. five- sixth                      \_\_\_\_\_

7.

5

**Answer the following questions -**

\*Which is the last month of the year? \_\_\_\_\_

\*The numerator of a fraction is 9 and the denominator is 11. What is the fraction ?

\_\_\_\_\_

**Convert the following-**

(i) 6987 g into kg and g

.....

.....

.....

.....



(ii) 5 years into months

.....

.....

.....

.....

(iii) 15 m 35 cm into centimeters

.....

.....

.....

.....

(iv) 6 m 48 cm into centimeters

.....

.....

.....

.....

**2x2=4**

**8.**

(v) 1615 paise into rupees

.....

**Solve the following:**

- (i) Find remainder when 817 is divided by 9.

9.

2

10.

4

**(ii) Write in column and add:**

5 kg 435 g , 8 kg 250 g and 3 kg 8 g

11.

1


Rahul got ₹ 49.85 from his father. He bought a pen for ₹ 9.90. How much money was left with him?


12.

2

Read the given pictograph and answer the following questions:

Jake recorded the number of pizzas sold over five days.  
Read the chart and answer the questions.



 = 5 pizzas

- How many pizzas did he sell on Thursday? \_\_\_\_\_
- Which day did he sell the least pizzas? \_\_\_\_\_
- Which day did he sell the most pizzas? \_\_\_\_\_
- Which day did he sell 25 pizzas? \_\_\_\_\_
- How many pizzas did he sell on Monday and Wednesday? \_\_\_\_\_
- Were more pizzas sold on Monday or Friday? \_\_\_\_\_
- How many less pizzas were sold on Friday than Thursday? \_\_\_\_\_
- How many pizzas did he sell in five days? \_\_\_\_\_

**Frame a word problem for the following facts:**

$$50 \div 5 = 10$$

.....

.....

.....

.....

Sam went to the stationery shop. He bought one pen for ₹ 15, one pencil for ₹ 2, one eraser for ₹ 5, one scale for ₹ 5 and one pencil box for ₹ 18. Make the bill for Sam.

.....

.....

.....

.....

.....

.....

--	--	--	--



**ARMY PUBLIC SCHOOL GWALIOR**  
**CLASS- III**  
**ACADEMIC SESSION 2024-25**  
**REVISION WORKSHEET (SELF ASSESSMENT)**




**Subject: EVS**

**Assignment No:- 9**

**Allotment Date: 15/02/2025**

S. NO.	QUESTIONS	MARKS	NATURE										
.1.	<b>Choose the correct option:</b> (i) _____ is an unstitched cloth (a) Frock (b) Flowers (c) Dhoti (ii) An ideal house must get _____. (a) Air (b) Sunlight (c) Both a. and b. (iii) The top view of a place is called _____. (a) Sketch (b) Plan (c) Map (iv) We can take out ground water by _____. (a) Wells (b) Hand pump (c) All Of These (v) There are _____ main directions. (a) 5 (b) 4 (c) 3 (vi) Plants get water through their _____. (a) Roots (b) Flowers (c) Leaves	6x1=6	<b>Understanding</b>										
Q.2.	<b>Match the column A with column B:</b> <table style="width: 100%;"><tr><td style="text-align: center;"><b>A</b></td><td style="text-align: center;"><b>B</b></td></tr><tr><td>(i) silkworm</td><td>(a) atlas</td></tr><tr><td>(ii) a book of maps</td><td>(b) is used to make pots</td></tr><tr><td>(vii) copper</td><td>(g) Diwali</td></tr><tr><td>(viii) diyas</td><td>(h) silk</td></tr></table>	<b>A</b>	<b>B</b>	(i) silkworm	(a) atlas	(ii) a book of maps	(b) is used to make pots	(vii) copper	(g) Diwali	(viii) diyas	(h) silk	4x1=4	<b>Reasoning</b>
<b>A</b>	<b>B</b>												
(i) silkworm	(a) atlas												
(ii) a book of maps	(b) is used to make pots												
(vii) copper	(g) Diwali												
(viii) diyas	(h) silk												
Q.3.	<b>Fill in the blanks by choosing the correct options:</b> <b>( stilt, cactus, air)</b> (a) _____ houses are made in states like Assam. (b) _____ transport is the fastest and costliest means of transport. (c) _____ does not require much water for growth.	3x1=3	<b>Problem Solving</b>										
Q.4.	<b>State whether the given statements are True/False:</b> 1) Aeroplanes land on helipads. .... 2) All birds have feathers, wings, beaks and claws. ....	2x1=2											
Q.5.	<b>Answer the following questions in one word:</b> 1) It is a rough drawing of a place. .... 2) The prepared pots are baked in an oven at high temperature. .....	2x1=2											

Q.6.	<b>Circle the odd one out.</b> (i) Discovery, Star Plus, Colors, Reynolds	1x1=1	
Q.7.	<b>Identify the following pots and name them.</b> 	1x1=1	<b>Observation</b>
Q.8.	<b>Draw the diagram of any (1) land transport</b>	1x1=1	
Q.9.	<b>Write the full form of STD</b>	1x1=1	
Q.10.	<b>Give one example of each:</b> Use of water _____	1x1=1	
Q.11.	<b>Answer the following questions in short:</b> (i) Define weaving. (ii) What is communication?	1x2=2	<b>HOTS</b>
Q.12.	<b>Answer the following questions in detail: (any 2)</b> (i) List any three uses of pots. (ii) Why do different animals need a different amount of water? (iii) Why do we need a house?	2x3=6	



**ARMY PUBLIC SCHOOL GWALIOR**  
**CLASS- III**  
**ACADEMIC SESSION 2024-25**  
**REVISION WORKSHEET (SELF ASSESSMENT)**



**Subject: GK**  
**Allotment Date: 15/02/2025**

**Assignment No:- 9**

S. NO.	QUESTIONS	MARKS 20	NATURE
1.	<p><b>CHOOSE THE CORRECT OPTION-</b></p> <p>(i) He was the first Indian to get the Noble Prize in Literature in 1913.</p> <p>(a) Rabindra Nath Tagore    (b) Amartya Sen (c) Kailash Satyarthi</p> <p>(ii) _____ is the deepest part of the Earth which is located in the Pacific Ocean.</p> <p>(a) Indian Ocean    (b) Paific Ocean    (c) Mariana Trench</p> <p>(iii) ..... Is an American talk show host, author and philanthropist.</p> <p>(a) Oprah Winfrey    (b) Sundar Pichai    (c) Staya Nadella</p> <p>(iv) India won ..... medals in all in Tokyo Olympic 2020.</p> <p>(a) seven    (b) five    (c) four</p>	4x1/2=2	Understanding



2.	<p><b>Match the column A with column B:</b></p> <table style="width: 100%; border: none;"> <thead> <tr> <th style="text-align: center; width: 50%;">A</th> <th style="text-align: center; width: 50%;">B</th> </tr> </thead> <tbody> <tr> <td>(i) Neeraj Chopra</td> <td>(a) is a set of letters used for writing a particular language.</td> </tr> <tr> <td>(ii) Television</td> <td>(b) Sun</td> </tr> <tr> <td>(iii) Script</td> <td>(c) most common means of transport</td> </tr> <tr> <td>(iv) Solar Energy</td> <td>(d) Javelin throw</td> </tr> </tbody> </table>	A	B	(i) Neeraj Chopra	(a) is a set of letters used for writing a particular language.	(ii) Television	(b) Sun	(iii) Script	(c) most common means of transport	(iv) Solar Energy	(d) Javelin throw	<b>4x1/2=2</b>	<b>Observation</b>
A	B												
(i) Neeraj Chopra	(a) is a set of letters used for writing a particular language.												
(ii) Television	(b) Sun												
(iii) Script	(c) most common means of transport												
(iv) Solar Energy	(d) Javelin throw												
3.	<p><b>State whether the following statements are True or False :</b></p> <p><b>( Shisham,Touch-me-Not,Jupiter,Atlanic,Gorge )</b></p> <p>(i) ..... plant has small soft leaves .It is a very sensitive plant</p> <p>(ii) ..... is a tall and strong tree which gives us timber which is used to make furniture.</p> <p>(iii) ..... is the largest planet.</p> <p>(iv) ..... is a narrow valley beten ills or mountains, typically with steep rocky wall and a stream running through it.</p>	<b>4x1/2=2</b>	<b>Critical Thinking</b>										
4.	<p><b>Answer he following questions in one word:</b></p> <p><b>(i) Which language is spoken in Tamil Nadu?</b></p> <hr/> <p><b>(ii) Name any family drama channel.</b></p> <hr/>	<b>4x1/2=2</b>	<b>Problem Solving</b>										

(iii) Which is the smallest ocean on the Earth?

(iv) Name the Indian scientist who was born in Tamil Nadu and was awarded the Nobel Prize in Physics in 1930.

5.

4x1/2=2

Understanding

Identify the following pictures :





**ARMY PUBLIC SCHOOL GWALIOR**  
**CLASS- III**  
**ACADEMIC SESSION 2024-25**  
**REVISION WORKSHEET (SELF ASSESSMENT)**



**Subject: Computer**  
**Allotment Date: 15/02/2025**

**Assignment No:- 9**

S.NO.	QUESTIONS	MARKS	NATURE
1.	<p><b>Tick the correct answer.</b></p> <p>(i) The default sprite present in the Scratch is_____</p> <p style="padding-left: 40px;">a) Dog b) Cat c) Mouse</p> <p>(ii) _____ are different pictures a sprite has.</p> <p style="padding-left: 40px;">a) Motions b) Extensions c) Costumes</p> <p>(iii) Machines with strong AI can accomplish _____ tasks on their own.</p> <p style="padding-left: 40px;">a) easy b) complex c) human</p> <p>(iv) Sophia, the social humanoid robot, has a delicate _____ like appearance.</p> <p style="padding-left: 40px;">d) doll e) woman f) man</p>	4x1=4	Information

<b>2.</b>	<b>Fill in the blanks-</b> a) Google assistant is an example of _____ AI. b) Script is also known as _____ c) Artificial Intelligence always _____ human behavior. d) _____ is used to draw shapes using different colors and sizes.	4x1=4	Understanding
<b>4.</b>	<b>Answer the following questions :-</b>  1. Differentiate between the Weak AI and Strong AI. _____ _____  2. Write down any two advantages of Scratch. _____ _____	2x1=2	Understanding