



ARMY PUBLIC SCHOOL GWALIOR
CLASS- V
ACADEMIC SESSION 2024-25
REVISION WORKSHEET (SELF ASSESSMENT)



Subject: English

Assignment No:- 9

Allotment Date: 15/02/2025

S. NO.	QUESTIONS	MARKS 40	NATURE
1.	<p style="text-align: center;">SECTION -A [READING]</p> <p>Twenty-five years ago, children in schools had not even heard of the word- Internet. Now I am sure you can't find a single person in your school who hasn't at least heard of it. In fact, many of us use it on a regular basis and have access to it in our homes. The 'net' in the word Internet stands for network. A network is two or more computers connected together so that information can be shared or sent from one computer to another. The Internet is a vast resource for all kinds of information.</p> <p>You may access it to search for information for projects, to download your favourite songs or to communicate with friends and family. Information is accessed through web pages that companies, organizations and individuals create and post. It's a kind of a giant bulletin board that the whole world uses. Since anyone can put anything on the Internet, you also have to be careful and apply your mind along with a little common sense before you download or upload anything.</p> <p>1. Give a suitable title to the passage.</p> <p>2. Give the full forms of:</p> <p>(a) I'm _____</p> <p>(b) can't _____</p> <p>3. Select from the passage the words similar in meaning:</p> <p>(a) joined (b) interacting</p> <p>4. What does 'net' stand for?</p> <p>5. What are the uses of the internet?</p>	7	Reading & Understanding
2.	<p style="text-align: center;">SECTION B [CREATIVE SKILL]</p> <p>Write a letter to your friend telling him about a magic show you went to with your parents.</p> <p style="text-align: center;">Or</p> <p>Write a dialogue between two friends discussing their weekend plans.</p>	8	Communication Skill

3.	<p style="text-align: center;">SECTION -C [GRAMMAR]</p> <p>Fill in the blanks with suitable pronouns from the brackets.</p> <p>1. Madhuri said to Puneet, "I will give you the new encyclopaedia." Madhuri told Puneet that ____ would give ____ the new encyclopaedia.</p> <p>2. Aman said to the policeman, "I will give you a description of the thief now." Aman told the policeman that ____ would give ____ a description of the thief.</p>	4	Understanding and analytical
4.	<p>Fill in the blanks in the following sentences with correct prepositions from the box.</p> <div style="border: 1px solid black; padding: 5px; text-align: center; margin: 10px auto; width: fit-content;"> of before to from across </div> <p>1. The thief ran away _____ the prison. 2. We need to wash our hands _____ meals. 3. We walked _____ the road to the park on the other side of the road. 4. Most _____ the children of my class use computers at their homes.</p>	4	Interdisciplinary
5.	<p>Change the following sentences from active to passive voice.</p> <p>1. The teacher praised the students for their hard work. 2. The scientist conducted the experiment in the lab.</p>	2	Evaluation
6.	<p style="text-align: center;">SECTION- D [LITERATURE]</p> <p>Extract Based Questions</p> <p>Read the given extract and answer the following questions. " Now, look, the moon isn't there! It has vanished!"</p> <p>1. Who is the speaker of the given above lines? 2. Where did the moon go? 3. Write the title of the story from where this extract has been taken. 4. Write the antonym of 'vanish'.</p>	4	Understanding
7.	<p>Answer the following questions in short.</p> <p>1. Why was Florence Nightingale called 'the Lady with the Lamp'? 2. What is special about the Eden Gardens? 3. What does Bessie ask Matilda Jane? 4. Was Andrew's mother amazed to see his basket? Why? 5 How did the priest make the puppet? 6. What makes Manika Batra's achievement unique?</p>	6	HOTS
8.	<p>Value Based Question [Answer in 100-120 words]</p> <p>1. How important is winning in sports? Is it more important than sportsmanship? 2. Joys and sorrows are the two sides of the same coin, called life. Explain.</p>	5	VBQs



ARMY PUBLIC SCHOOL GWALIOR
CLASS- V
ACADEMIC SESSION 2024-25
REVISION WORKSHEET (SELF ASSESSMENT)




Subject: Hindi

Assignment No:- 9

Allotment Date: 15/02/2025

क्रमसं.	प्रश्न	अंक 40	प्रकृति
प्र 1	<p>निम्नलिखित गद्यांश को ध्यानपूर्वक पढ़ें तथा दिए गए प्रश्नों के उत्तर दें –</p> <p>किसी तालाब में एक बातूनी कछुआ रहता था। उसी तालाब के किनारे दो हंस भी रहते थे। वे तीनों आपस में मित्र थे। एक बार गरमी के मौसम में तालाब का पानी सूखने के कारण हंस दूसरे तालाब पर उड़कर जाने के लिए तैयार हो गए। कछुआ भी तैयार था, लेकिन उसे ले जाने की समस्या थी। कछुए ने उपाय बताया कि दोनों हंस अपनी चोंच में एक लकड़ी के सिरो को पकड़ लेंगे और वह उस लकड़ी को अपने मुँह से पकड़ लेगा, जिससे तीनों मित्र एक साथ एक ही तालाब पर रहेंगे। हंसों ने कहा कि उपाय तो अच्छा है, लेकिन बातूनी होने के कारण तुम रास्ते में बात न करने लगना नहीं तो तुम नीचे गिरकर मर जाओगे। कछुए ने कहा कि वह मूर्ख नहीं है वह अपने पैर पर स्वयं कुल्हाड़ी क्यों मारेगा? योजनानुसार वे उड़ गए। रास्ते में कुछ लोगों की बात सुनकर कछुआ बोल पड़ा और नीचे गिरकर अपनी जान खो बैठा। हमें कभी भी फालतू बातों में न पड़कर अपने लक्ष्य की तरफ ही ध्यान देना चाहिए।</p>	(3.5)	
प्र.2	<p>I) अपने पैर पर कुल्हाड़ी मारने का क्या अर्थ है?(1)</p> <p>ii) हंसों ने क्या उपाय सुझाया?(1)</p> <p>iii) तालाब क्यों सुख गया था?(1)</p> <p>iv)____ तीन मित्र थे।(½)</p> <p>निम्नलिखित पद्यांश को ध्यानपूर्वक पढ़ें तथा दिए गए प्रश्नों के उत्तर दें–</p> <p>तूफानों की ओर घुमा दो नाविक निज पतवार आज सिंधु ने विष उगला है लहरों का यौवन मचला है आज हृदय में और सिंधु में साथ उठा है ज्वार तूफानों की ओर घुमा दो नाविक निज पतवार लहरों के स्वर में कुछ बोलो</p> <p>निम्नलिखित प्रश्नों के उत्तर पद्यांश से चुनो -</p> <p>i)विष किसने उगला?(½)</p>	(3.5)	

	<p>ii) विष का विलोम शब्द क्या है ?(1)</p> <p>iii) जीवन में कभी कभी क्या मिलता है? (1)</p> <p>iv) 'नाविक' शब्द में से मूल शब्द और प्रत्यय अलग कीजिए। (1)</p>		
3	<p>मित्र को छुट्टियों में अपने घर रहने के लिए निमंत्रण पत्र लिखिए।</p> <p>अथवा</p> <p>अपने मित्र को अपने बड़े भाई की शादी के लिए निमंत्रण भेजो।</p>	(2.5)	
4	<p>चित्र कथा- नीचे दिए गए चित्र के आधार पर एक छोटी-सी कहानी लिखिए-</p> 	(2.5)	
5	<p>संवाद लेखन-</p> <p>जंगल के बंदर और शेर के बीच संवाद लिखिए ।</p>	(2.5)	
6	<p>निम्नलिखित वाक्यों में रिक्त स्थान को भरकर वाक्य को पूरा कीजिए</p> <p>i). इतिहास से संबंध रखने वाले को हम ____ कहते हैं ।</p> <p>ii). जिसकी चार भुजाएं हो _____ ।</p> <p>iii). जहां छात्र रहते हैं _____ ।</p>	(1.5)	
7	<p>सही उत्तर चुनकर (✓) लगायें –</p> <p>i). जो शब्द संज्ञा के स्थान पर प्रयोग किए जाते हैं –</p> <p>(क) विशेषण (ख) क्रिया (ग) सर्वनाम</p> <p>ii) सर्वनाम के कितने भेद होते हैं –</p> <p>(क) एक (ख) दो (ग) छे</p> <p>iii). जो शब्द अपना रूप नहीं बदलते, उन्हें क्या कहते हैं –</p> <p>क. क्रिया विशेषण ख. क्रिया ग. अव्यय</p>	(1.5)	
8	<p>निम्नलिखित शब्दों में प्रत्यय लगाकर नए शब्द बनाइए-</p> <p>i) _____ + इक = _____</p> <p>ii) _____ + पन = _____</p> <p>iii) _____ + कर = _____</p>	(1.5)	
9	<p>इन वाक्यों में आई क्रिया को शुद्ध करके अपनी उत्तर पुस्तिका में लिखें -</p> <p>i). माताजी आए हैं।</p> <p>ii) सब ने नव वर्ष हर्ष उल्लास से बनाया।</p> <p>iii). डेविड ने सुंदर चित्रकारी किया।</p>	(1.5)	

10	नीचे दिए गए विराम चिन्हों को पहचान कर उनका वाक्य में प्रयोग कर लिखें- i) ? ii) !	(1)	
11	निम्नलिखित शब्दों के 2-2 पर्यायवाची शब्द लिखिए- i) फूल = _____, _____ ii) पहाड़ = _____, _____	(1)	
12	निम्नलिखित शब्दों के 2-2 अनेकार्थी शब्द लिखिए- i). पत्र = _____, _____ ii). मगर = _____, _____	(1)	
13	निम्नलिखित मुहावरे का अर्थ लिखकर, उसका वाक्य में प्रयोग करके लिखिए - i) आग बबूला होना ii) अंधे की लकड़ी- iii) आसमान सिर पर उठाना	(1.5)	
14	शब्दों को सही क्रम में लिखकर वाक्य बनाएं- i) हाथी की सवारी हमने की ii) परिश्रमी है आभा तो iii) थी बारिश बहुत तेज़	(1.5)	
15	नीचे दी गई पंक्तियाँ पूरी कीजिए- एक हमारी धरती सबकी जिसकी _____।	(1)	
16	नीचे दिए गए शब्दों का वर्ण- विच्छेद कीजिए- i) मैदान = _ + _ + _ + _ + _ + _ ii) क्योंकि = _ + _ + _ + _ + _	(1)	
17	निम्नलिखित शब्दों के अर्थ लिखें - i) आजीविका ii) निर्मल iii) गोविंद	(1.5)	
18	निम्नलिखित शब्दों का प्रयोग कर वाक्य बनाएं - i) होशियार ii) तमाशा iii) प्रशंसा	(1.5)	

19	मिलान करें- i). निर्मल (क) टहनियां ii). शाखाएं (ख) भगवान iii). गोविंद (ग) साफ़	(1.5)	
20	नीचे दिए गए अक्षरों को मिलाकर संयुक्त व्यंजन वाले दो शब्द लिखिए i)स्+त= _____, _____ ii).त्+र= _____, _____	(1)	
21	निम्नलिखित पंक्तियों का भावार्थ स्पष्ट करें - रहिमन धागा प्रेम का, मत तोड़ो चटकाए। टूटे से फिर ना जुड़े, जुड़े गांठ पड़ जाए।।	(1)	
22	निम्नलिखित वाक्य पढ़कर सही या गलत का चिह्न लगाए- i)महाभारत का युद्ध दिल्ली के मैदान में हुआ था। [] ii) रक्त की कमी को अनीमिया कहते हैं। []	(1)	
23	निम्नलिखित वाक्यों की वर्तनी शुद्ध कर पुनः लिखें - i). कर्ण बहत बाड़ा दांवीर था।	(1)	
24	निम्नलिखित प्रश्नों के उत्तर दें - i) कर्ण ने सूर्य से क्या प्रार्थना की और क्यों ? ii)(क)रक्त के कितने भाग हैं? (ख) रक्त का रंग लाल क्यों होता है? iii) पेड़ ने वृद्ध से क्षमा क्यों मांगी ?	(3)	



ARMY PUBLIC SCHOOL GWALIOR
CLASS- V
ACADEMIC SESSION 2024-25
REVISION WORKSHEET (SELF ASSESSMENT)



Subject: Mathematics

Assignment No:- 9

Allotment Date: 15/02/2025

S. NO.	QUESTIONS:	MARKS	NATURE										
1	Fill in the blanks: (a) The standard unit of capacity is _____. (b) The average of 12, 20, 30, 42, 16 is _____. (c) An 150° angle is an _____ angle. (d) The polygon having the most number of sides is _____.	4×1 = 4	Observation										
2	Write whether the following statements are 'True' or 'False': (a) A right angle always measures 90. (_____) (b) A trapezium is a parallelogram. (_____) (c) All chords in the circle are of equal length. (_____) (d) 7420 m is equal to 7.420 km. (_____)	4×1 = 4	Mental Ability										
3	Match column A with column B: <table style="width: 100%;"><tr><td style="text-align: center;">Column A</td><td style="text-align: center;">Column B</td></tr><tr><td>(a) $3941.75 \div 1000$</td><td>(i) 1000000</td></tr><tr><td>(b) $48 + 3 \times 12 \div 6 - 11$</td><td>(ii) 2 times the radius</td></tr><tr><td>(c) Diameter</td><td>(iii) 3.94175</td></tr><tr><td>(d) 1 cubic metre</td><td>(iv) 43</td></tr></table>	Column A	Column B	(a) $3941.75 \div 1000$	(i) 1000000	(b) $48 + 3 \times 12 \div 6 - 11$	(ii) 2 times the radius	(c) Diameter	(iii) 3.94175	(d) 1 cubic metre	(iv) 43	4×1 = 4	Decision Making
Column A	Column B												
(a) $3941.75 \div 1000$	(i) 1000000												
(b) $48 + 3 \times 12 \div 6 - 11$	(ii) 2 times the radius												
(c) Diameter	(iii) 3.94175												
(d) 1 cubic metre	(iv) 43												
4	Multiple Choice Questions: (a) 2 m 50 cm is what percentage of 10 m? (i) 0.25% (ii) 2.5% (iii) 25% (iv) 250% (b) The average temperature of a healthy person is (i) 74.6°F (ii) 84.5°F (iii) 98.0°F (iv) 104°F (c) The price at which an article is sold is its _____ (i) S.P. (ii) C.P. (iii) Profit (iv) Loss (d) Line of symmetry divides an object into _____ identical mirror images (i) two (ii) three (iii) four (iv) five	4×1 = 4	Understanding										
5	Solve the following questions: (a) Express 8.25 as a fraction. (b) Find : 35 % of 100. (c) Use a compass to draw a circle of radius 3 cm. (d) Find the perimeter of a triangle whose lengths are 10 cm, 12 cm and 25 cm. (e) Subtract the following: 4 h 18 min 68 sec – 2 h 32 min 34 sec	5×1 = 05	Problem-Solving										
6.	Solve the following questions: (a) Find the product : 65.189×30 (b) Draw a right angle and a straight angle using protractor. (c) If CP = Rs 720 and Loss = Rs 80, then find the SP. (d) Convert 648 minutes into hours and minutes.	5×2 = 10	Critical Thinking										

(e) Convert 10 L 250 mL into litres and write as decimals.

6 Read the word problems and solve them:

- (a) Raman's school was closed for closed for the summer vacation from May 15th to July 6th. For how many days the school remain closed?
- (b) Ali purchased a mobile phone for Rs 2500. He sold it at a profit of Rs 200. Find the selling price of the mobile phone.
- (c) Study the population of various cities at a certain period of time.

City	Delhi	Mumbai	Kolkata	Chennai	Agra	Patna
Population (in lakhs)	80	120	110	70	60	50

Draw a bar graph for the above data using a suitable scale.

3×3 =09

Analytical Thinking

Q4	<p>State True or False</p> <p>i) High cost houses in villages are called chawls. ()</p> <p>ii) Rainwater is the purest water. ()</p>	2x1=2						
Q5	<p>Choose the odd one out.</p> <p>a)Bachendri Pal(b) Sunita Williams(c)Kalpana Chawla (d)Rakesh Sharma</p> <p>a)LPG (b) Biogas (c)Kerosene (d) Petrol</p> <p>a)Schools (b) Roads (c)Post Office (d) Home</p>	3x1=3						
Q 6.	<p>Read the given paragraph and answer the questions given below:</p> <p>Qutub Minar is situated in Delhi. It is a very tall and famous minaret. Its construction was started by the slave king Qutub-ud -din Aibak in the 12th century and was completed by his successor, Iltumiash. It is 72.5 meters high and has five distinct storeys with 379 stairs from top to bottom. The Iron Pillar located at Qutub Minar was built during the time of Emperor Chandragupta II of Gupta dynasty. It was dated back to 4th century A.D. The pillar highlights the ancient India's achievements in architecture. It is made of iron and has stood 1600 years without rusting. It is 7.3m tall and weighs approximately 6.5 tons.</p> <p>1. Who built Qutub Minar?</p> <p>2. Name the successor of Qutub-ud-din Aibak?</p> <p>3. Write two lines about Qutub Minar?</p>	3x1=3						
Q7.	<p>Answer the following questions:</p> <p>i) What is the importance of ASI and UNESCO?</p> <p>ii) How can we as visitors take care of our monuments?</p> <p>iii) Differentiate between vertebrates and invertebrates.</p> <p>iv) Write the full form of CNG and NCC?</p> <p>v)Draw neat and labelled diagram of - a) Lever OR b) Human Digestive system</p>	5x2=10						
Q8.	<p>Complete the given flow chart.</p> <div style="text-align: center;"> <p>Tools Used By Farmers</p> <pre> graph TD A[Tools Used By Farmers] --> B[] B --- C[] B --- D[] B --- E[] B --- F[] </pre> </div>	4x0.5=2						
Q9.	<p>Case Study based question</p> <p>The following data shows the average fuel consumption per 100km for different types of vehicles.</p> <table border="1" data-bbox="284 2018 1150 2152"> <thead> <tr> <th>Vehicles type</th> <th>Fuel consumption(Litres per 100km)</th> </tr> </thead> <tbody> <tr> <td>Bicycle</td> <td>0</td> </tr> <tr> <td>Motorbike</td> <td>2</td> </tr> </tbody> </table>	Vehicles type	Fuel consumption(Litres per 100km)	Bicycle	0	Motorbike	2	3x1=3
Vehicles type	Fuel consumption(Litres per 100km)							
Bicycle	0							
Motorbike	2							

Car(Petrol)	8
Car(Diesel)	6
Bus(Diesel)	20
Electric Car	0 (uses electricity)

On the basis of above data answer the following questions.

- (i) Which vehicle consumes the most fuel?
- (ii) Why does an electric car have 0 fuel consumption in the above data?
- (iii) If fuel price increases, which vehicle would be the most economical for daily use?

Q10.

I) Answer the following questions based on ATLAS.

- i) Kaziranga National Park is famous for which animals?
- ii) Where the Konark Temple Situated?
- iii) What is the capital of Bihar?

II) Locate the following on the political map of India.

- i) River Brahmaputra
- ii) Assam

5x1=5



ARMY PUBLIC SCHOOL GWALIOR
CLASS- V
ACADEMIC SESSION 2024-25
REVISION WORKSHEET (SELF ASSESSMENT)






Subject: GK

Assignment No:- 9

Allotment Date: 15/02/2025

S. NO.	QUESTIONS	MARKS	NATURE
1.	<p>Choose the correct option.</p> <p>1. The largest flightless bird in the world is_____</p> <p>a) falcon b) barred owl c) ostrich d) sparrow</p> <p>2. A set of rules that a machine can follow to learn how to do a task</p> <p>a) chatbot b) data mining c) algorithm d) big data</p> <p>3. He was born on 8 February 1941 in Sri Ganganagar, British India. He is popularly called the Godfather of Ghazals.</p> <p>a) Lata Mangeshkar b) Mukesh c) Manna Dey d) Jagjit Singh</p> <p>4. It is used to measure the body heat of a person.</p> <p>a) Microscope b) Oxygen Concentrator c) Clinical thermometer d) Telescope</p> <p>5. A horrifying terrorist attack occurred in United States. The terrorists blew the World Trade Centre building in which more than 3000 people died.</p> <p>a) 1997 b) 2001 c)1984 d) 1989</p>	5	Critical Thinking
2.	<p>Answer the following questions in one word.</p> <p>i) Which tissue connects muscles to bones?</p> <p>ii) Name the second most abundant element found on earth's crust?</p> <p>iii) Where is the National Science centre located?</p> <p>iv) When is the National Science Day observed?</p> <p>v) Name the disease in which a person prematurely ages?</p>	5	Evaluation Skill
3.	<p>Write 'T' for True and 'F' for False statements.</p> <p>1. Sleeping sickness is caused by tsetse fly.</p> <p>2. Big data is a very large and complex data that is difficult to be stored and processed by traditional data processing applications.</p> <p>3. Pogo is a channel for the entertainment.</p> <p>4. The famous singer Kishore Kumar's real name was Akash Kumar Ganguly.</p> <p>5. A novel coronavirus SARS- COV- 2 that causes the disease called COVID-19 was first detected in Wuhan China in 2000.</p>	2.5	Understanding and Analytical Skill

<p>4.</p>	<p>Match the column</p> <p>Column A</p> <ol style="list-style-type: none"> 1. He was a freedom fighter of South Africa. He was awarded Nobel Peace Prize in 1993. 2. The 2022 FIFA World Cup was held in 3. A machine model of the human brain that can perform many tasks involving speech, vision and board game strategy. 4. The Man of the Golden Voice. 5. It is used to check for the purity of milk by measuring its density. <p>Column B</p> <p>Mukesh</p> <p>Lactometer</p> <p>Nelson Mandela</p> <p>Qatar</p> <p>Neural Network</p>	<p>2.5</p>	<p>Logical Thinking</p>
<p>5.</p>	<p>Identify the pictures</p>   	<p>5</p>	<p>Observation skill</p>





ARMY PUBLIC SCHOOL GWALIOR
CLASS- V
ACADEMIC SESSION 2024-25
REVISION WORKSHEET (SELF ASSESSMENT)



Subject: Computer

Assignment No:- 9

Allotment Date: 15/02/2025

S. NO.	QUESTIONS	MARKS	NATURE
1	Tick the correct answer: 1. language is machine-independent language. a. Low level b. Assembly c. High level 2. language is directly understood by computer. a. Machine b. High level c. Assembly 3. represents data that has been assigned value of either true or false. a. Boolean b. Integer c. String 4. is a numeric value that does not include a decimal point. a. String b. Integer c. Boolean 5. is the application of NLP. a. Alexa b. Facelock c. Driverless car	1x5=5	Critical Thinking
2	Write 'T' for True and 'F' for False statements. 1. AI cannot be creative in its approach. 2. AI robots can work easily without taking a break. 3. AI machines are driven by emotions and can be biased.	1x3=3	Understanding
3	Fill in the blanks. 1. is a good way to have sprites and scripts communicate. 2. In mathematical operators, rounded end represent.....	1x2=2	Informative